



UNIVERSITY OF CAMBRIDGE INTERNATIONAL EXAMINATIONS  
International General Certificate of Secondary Education

CANDIDATE  
NAME

CENTRE  
NUMBER

--	--	--	--	--

CANDIDATE  
NUMBER

--	--	--	--



**MATHEMATICS**

**0581/22**

Paper 2 (Extended)

**October/November 2010**

**1 hour 30 minutes**

Candidates answer on the Question Paper.

Additional Materials:

Electronic calculator  
Mathematical tables (optional)

Geometrical instruments  
Tracing paper (optional)

**READ THESE INSTRUCTIONS FIRST**

Write your Centre number, candidate number and name on all the work you hand in.

Write in dark blue or black pen.

You may use a pencil for any diagrams or graphs.

Do not use staples, paper clips, highlighters, glue or correction fluid.

**DO NOT WRITE IN ANY BARCODES.**

Answer **all** questions.

If working is needed for any question it must be shown below that question.

Electronic calculators should be used.

If the degree of accuracy is not specified in the question, and if the answer is not exact, give the answer to three significant figures. Give answers in degrees to one decimal place.

For  $\pi$ , use either your calculator value or 3.142.

At the end of the examination, fasten all your work securely together.


The number of marks is given in brackets [ ] at the end of each question or part question.

The total of the marks for this paper is 70.

This document consists of **12** printed pages.



1



For the diagram, write down

(a) the order of rotational symmetry,

Answer(a) ..... [1]

(b) the number of lines of symmetry.

Answer(b) ..... [1]

- 2 In a group of 30 students, 18 have visited Australia, 15 have visited Botswana and 5 have not visited either country.

Work out the number of students who have visited Australia but not Botswana.

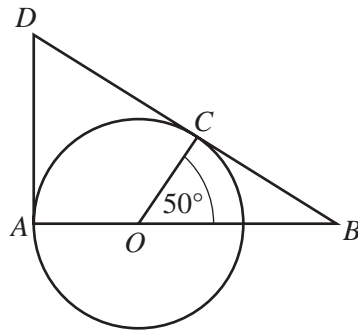
Answer ..... [2]

- 3 Rearrange the formula  $J = mv - mu$  to make  $m$  the subject.

Answer  $m =$  ..... [2]

For  
Examiner's  
Use

4



NOT TO SCALE

For  
Examiner's  
Use

$O$  is the centre of the circle.  
 $DA$  is the tangent to the circle at  $A$  and  $DB$  is the tangent to the circle at  $C$ .  
 $AOB$  is a straight line. Angle  $COB = 50^\circ$ .  
 Calculate

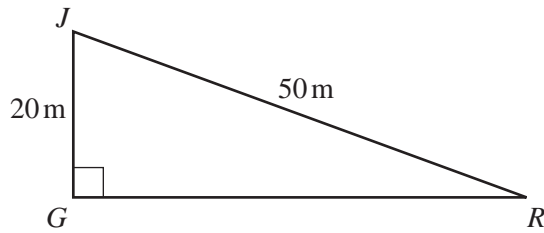
(a) angle  $CBO$ ,

Answer(a) Angle  $CBO = \dots\dots\dots$  [1]

(b) angle  $DOC$ .

Answer(b) Angle  $DOC = \dots\dots\dots$  [1]

5



NOT TO SCALE

$JGR$  is a right-angled triangle.  $JR = 50\text{m}$  and  $JG = 20\text{m}$ .  
 Calculate angle  $JRG$ .

Answer Angle  $JRG = \dots\dots\dots$  [2]

6 Write 0.00658

(a) in standard form,

Answer(a)  $\dots\dots\dots$  [1]

(b) correct to 2 significant figures.

Answer(b)  $\dots\dots\dots$  [1]

7  $\vec{AB} = \mathbf{a} + t\mathbf{b}$  and  $\vec{CD} = \mathbf{a} + (3t - 5)\mathbf{b}$  where  $t$  is a number.

Find the value of  $t$  when  $\vec{AB} = \vec{CD}$ .

Answer  $t =$  ..... [2]

---

8 Show that  $\frac{7}{27} + 1\frac{7}{9} = 2\frac{1}{27}$ .

Write down all the steps in your working.

Answer

[2]

---

9 When a car wheel turns once, the car travels 120 cm, correct to the nearest centimetre.

Calculate the lower and upper bounds for the distance travelled by the car when the wheel turns 20 times.

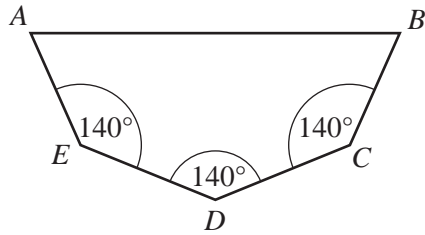
Answer lower bound ..... cm

upper bound ..... cm [2]

---

For  
Examiner's  
Use

10

NOT TO  
SCALEFor  
Examiner's  
Use

The pentagon has three angles which are each  $140^\circ$ .  
The other two interior angles are equal.  
Calculate the size of one of these angles.

Answer ..... [3]

- 11 The resistance,  $R$ , of an object being towed through the water varies directly as the **square** of the speed,  $v$ .

$$R = 50 \text{ when } v = 10.$$

Find  $R$  when  $v = 16$ .

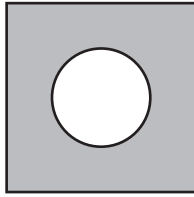
Answer  $R =$  ..... [3]

- 12 Write as a single fraction, in its simplest form.

$$\frac{3}{x+2} - \frac{2}{x-1}$$

Answer ..... [3]

13

NOT TO  
SCALE

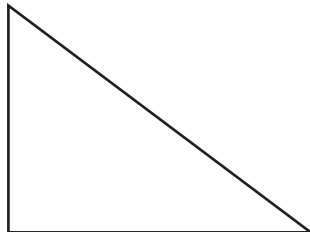
The diagram shows a circle of radius 5cm in a square of side 18cm.

Calculate the shaded area.

Answer ..... cm<sup>2</sup> [3]

---

14



Draw, accurately, the locus of all the points **outside** the triangle which are 3 centimetres away from the triangle. [3]

---

For  
Examiner's  
Use

- 15 The air fare from Singapore to Stockholm can be paid for in Singapore dollars (S\$) or Malaysian Ringitts (RM).

One day the fare was S\$740 or RM1900 and the exchange rate was S\$1= RM2.448 .

How much less would it cost to pay in Singapore dollars?

Give your answer in Singapore dollars correct to the nearest Singapore dollar.

Answer S\$ ..... [3]

- 16 Simplify

(a)  $\left(\frac{16}{81}x^{16}\right)^{\frac{1}{2}}$ ,

Answer(a) ..... [2]

(b)  $\frac{16y^{10} \times 4y^{-4}}{32y^7}$ .

Answer(b) ..... [2]

- 17

	Boys	Girls	Total
Asia	62	28	
Europe	35	45	
Africa		17	
Total			255

For a small international school, the holiday destinations of the 255 students are shown in the table.

- (a) Complete the table. [3]

- (b) What is the probability that a student chosen at random is a girl going on holiday to Europe?

Answer(b) ..... [1]

18

$$\mathbf{A} = \begin{pmatrix} 2 & 4 \\ 5 & 3 \end{pmatrix}$$

$$\mathbf{B} = \begin{pmatrix} 3 & -4 \\ -5 & 2 \end{pmatrix}$$

For  
Examiner's  
Use

(a) Work out  $\mathbf{AB}$ .

Answer(a) [2]

(b) Find  $|\mathbf{B}|$ , the determinant of  $\mathbf{B}$ .

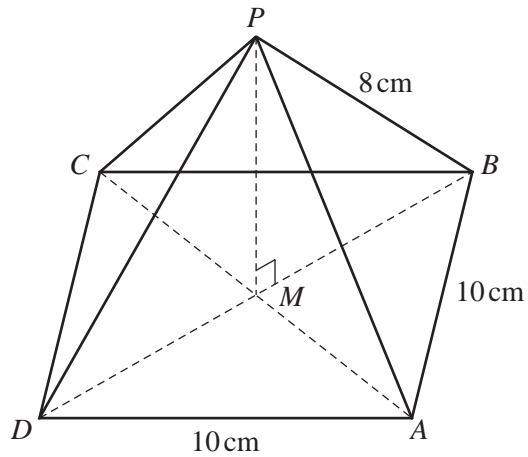
Answer(b) ..... [1]

(c)  $\mathbf{I}$  is the  $(2 \times 2)$  identity matrix.  
Find the matrix  $\mathbf{C}$ , where  $\mathbf{C} = \mathbf{A} - 7\mathbf{I}$ .

Answer(c) [2]



19

NOT TO  
SCALEFor  
Examiner's  
Use

The diagram represents a pyramid with a square base of side 10 cm.

The diagonals  $AC$  and  $BD$  meet at  $M$ .  $P$  is vertically above  $M$  and  $PB = 8$  cm.

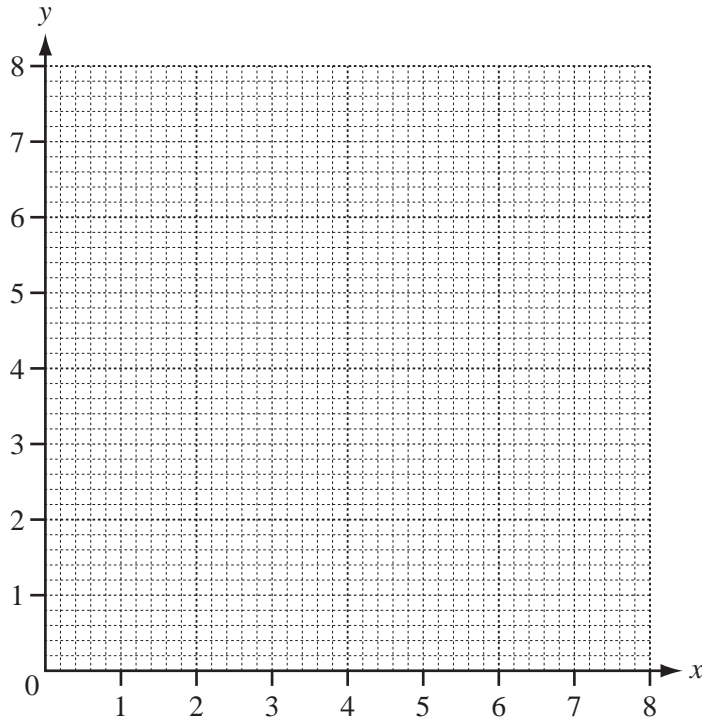
(a) Calculate the length of  $BD$ .

Answer(a)  $BD =$  ..... cm [2]

(b) Calculate  $MP$ , the height of the pyramid.

Answer(b)  $MP =$  ..... cm [3]

20



For  
Examiner's  
Use

(a) Draw the lines  $y = 2$ ,  $x + y = 6$  and  $y = 2x$  on the grid above.

[4]

(b) Label the region  $R$  which satisfies the three inequalities

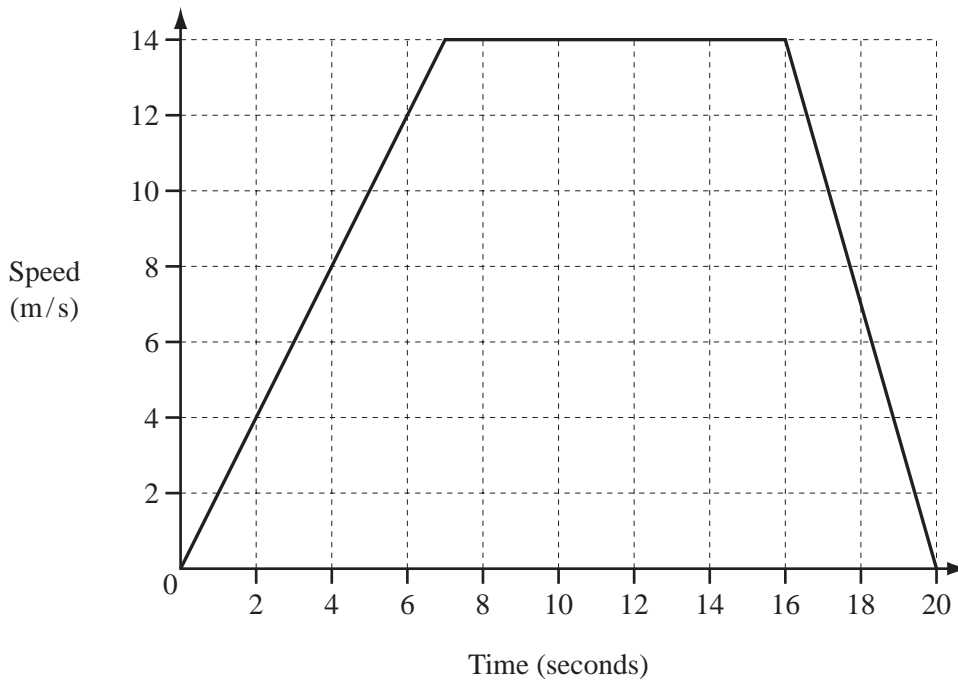
$$x + y \geq 6, \quad y \geq 2 \quad \text{and} \quad y \leq 2x.$$

[1]

- 21 An animal starts from rest and accelerates to its top speed in 7 seconds. It continues at this speed for 9 seconds and then slows to a stop in a further 4 seconds.

For  
Examiner's  
Use

The graph shows this information.



- (a) Calculate its acceleration during the first seven seconds.

Answer(a) ..... m/s<sup>2</sup> [1]

- (b) Write down its speed 18 seconds after the start.

Answer(b) ..... m/s [1]

- (c) Calculate the total distance that the animal travelled.

Answer(c) ..... m [3]

Question 22 is printed on the next page.

- 22 (a) The line  $y = 2x + 7$  meets the  $y$ -axis at  $A$ .

Write down the co-ordinates of  $A$ .

Answer(a)  $A = ( \dots\dots\dots , \dots\dots )$  [1]

- (b) A line parallel to  $y = 2x + 7$  passes through  $B(0, 3)$ .

(i) Find the equation of this line.

Answer(b)(i) ..... [2]

- (ii)  $C$  is the point on the line  $y = 2x + 1$  where  $x = 2$ .

Find the co-ordinates of the midpoint of  $BC$ .

Answer(b)(ii) ( ..... , ..... ) [3]

For  
Examiner's  
Use

Permission to reproduce items where third-party owned material protected by copyright is included has been sought and cleared where possible. Every reasonable effort has been made by the publisher (UCLES) to trace copyright holders, but if any items requiring clearance have unwittingly been included, the publisher will be pleased to make amends at the earliest possible opportunity.

University of Cambridge International Examinations is part of the Cambridge Assessment Group. Cambridge Assessment is the brand name of University of Cambridge Local Examinations Syndicate (UCLES), which is itself a department of the University of Cambridge.