

Examiners' Report  
June 2019

IGCSE Geography 4GE1 01

## Edexcel and BTEC Qualifications

Edexcel and BTEC qualifications come from Pearson, the UK's largest awarding body. We provide a wide range of qualifications including academic, vocational, occupational and specific programmes for employers. For further information visit our qualifications websites at [www.edexcel.com](http://www.edexcel.com) or [www.btec.co.uk](http://www.btec.co.uk).

Alternatively, you can get in touch with us using the details on our contact us page at [www.edexcel.com/contactus](http://www.edexcel.com/contactus).



### Giving you insight to inform next steps

ResultsPlus is Pearson's free online service giving instant and detailed analysis of your students' exam results.

- See students' scores for every exam question.
- Understand how your students' performance compares with class and national averages.
- Identify potential topics, skills and types of question where students may need to develop their learning further.

For more information on ResultsPlus, or to log in, visit [www.edexcel.com/resultsplus](http://www.edexcel.com/resultsplus). Your exams officer will be able to set up your ResultsPlus account in minutes via Edexcel Online.

### Pearson: helping people progress, everywhere

Pearson aspires to be the world's leading learning company. Our aim is to help everyone progress in their lives through education. We believe in every kind of learning, for all kinds of people, wherever they are in the world. We've been involved in education for over 150 years, and by working across 70 countries, in 100 languages, we have built an international reputation for our commitment to high standards and raising achievement through innovation in education. Find out more about how we can help you and your students at: [www.pearson.com/uk](http://www.pearson.com/uk).

June 2019

Publications Code 4GE1\_01\_1906\_ER

All the material in this publication is copyright  
© Pearson Education Ltd 2019

# Introduction

This was the first assessment of the new specification for International GCSE (9-1) Geography, Paper 1 – Physical Geography component and it was pleasing to see a good standard of responses from candidates.

This paper consists of two 25 mark questions and one 20 mark question. The paper has a total of 70 marks. The exam includes multiple-choice questions, short open, open response, calculations and 8-mark extended writing questions. The exam command words which are used in this paper are defined on page 47 of the specification. Each of the questions is mapped to one or more of the Assessment Objectives (AOs).

The approach to individual items is considered in this report, including examples of good practice related to the 4-mark open response and 8-mark extended writing questions. These questions provided the greatest range of responses from candidates, with the best answers addressing the command word directly, whilst providing the necessary level of description, explanation and/or exemplification.

In section A River environments, Coastal environments and Hazardous environments are covered. Candidates are required to select two out of three questions.

In section B candidates choose one out of three fieldwork related questions relating to river environments, coastal environments and hazardous environments.

The new International GCSE (9-1) Geography specification has been designed for all levels of ability, rather than being differentiated into higher and foundation tiers. In this new qualification, there is greater emphasis on application and interpretation (AO3), as well as the introduction of new command words (e.g. 'assess' and 'evaluate') which appears to have proven challenging for some candidates. There also appears to have been some time management issues with some candidates not managing to complete all the questions.

## Question 1 (b) (ii)

This item required candidates to state one method of river transportation; overall this item was answered very well.

In this question the candidate is required to identify one process in which material is transported by a river.

(ii) State **one** process of river transportation.

*Saltation*

(1)



In this response the candidate has correctly answered the question for 1 mark.



For these low tariff questions candidates need to ensure that they have a clear understanding of key words and what they relate too.

## Question 1 (b) (iii)

This item required candidates to explain one way water is stored in the hydrological cycle. Generally candidates were able to obtain a mark for identifying a store, but often didn't get the second mark as the development either wasn't present or wasn't detailed enough. Many candidates referred to clouds or atmosphere with fewer candidates identifying groundwater as a store. The most frequent incorrect responses referred to the water cycle being a closed system so water is stored globally, or they discussed transfers instead of stores.

(iii) Explain **one** way water is stored in the hydrological cycle.

(2)

One water store is the sea. As 95%  
of the world's water is stored in the sea  
and most flows end up in the sea.



Here the candidate has successfully obtained 2 marks as they have identified a way in which water is stored (AO1) and further developed the answer for the additional mark (AO2).



For these type of questions candidates need to develop skills where they fully develop their answers, in some cases candidates stated just one word or a simple idea, resulting in them only gaining one mark.

This is a common example of where the candidate has mixed the idea of stores and transfers leading to limited success on this question.

(iii) Explain **one** way water is stored in the hydrological cycle.

(2)

Water is stored in ~~clouds~~ clouds which later turns to precipitation.



In this example the candidate has identified the water store (AO1) but didn't gain the second mark as they went on to identify how water is transferred which isn't what the question was asking for.



Candidates need to be clear about the different types of processes taking place in the hydrological cycle.

(iii) Explain **one** way water is stored in the hydrological cycle.

(2)

condensation  
Evaporation - water is evaporated into air.  
the air then condenses back into water



This is a common example of where the candidate has identified the wrong process resulting in them being awarded no marks on this item.

## Question 1 (c)

This item required candidates to use the fig 1a resource which identified a number of ways that people manage water supply. Usually answered well by candidates recognising water management methods, and although basic would often provide the development needed to affect water supply – usually related to be able to store it for later use when supplies were lower. As expected, some candidates struggled with the A03 element of this question. In some cases candidates didn't make use of the resource at all but chose instead to come up with their own ideas, which whilst credit worthy in some cases prevented candidates from accessing the full mark range.

This is an example of a good response where the candidate has accessed all 4 marks available.

(c) Study Figure 1a in the Resource Booklet.

Suggest **two** ways people manage water supply.

(4).

- 1 The use of dams means that people are able to regulate and manage water supply. Dams separate water into a reservoir and people are then able to regulate how much water goes through the dam.
- 2 Another way people manage water supply is by storing it in water tanks. The water is then able to be used when needed and not run risk of flowing away or evaporating.



In this example the candidate has recognised the importance of identifying a factor from the resource and developing a simple idea, i.e. a statement of how the feature identified can be used to manage water (AO2) but then goes on to talk about the idea of regulation (AO3) of water for when it is needed.



Candidates must always attempt to develop ideas fully to gain access to all 4 marks.

(c) Study Figure 1a in the Resource Booklet.

Suggest **two** ways people manage water supply.

(4)

1. They manage water supply through evaporation and Precitation. As they get water from the rivers.
2. The water isn't as clean but is still able to drink.



In this example we can see clearly that the candidate has failed to make use of the resource and as a result has failed to access any marks.



Candidates should ensure that they read and understand the question.



## Question 1 (d)

For this item candidates were asked to explain one way in which vegetation affects river discharge. Often candidates recognised the link between vegetation and discharge with interception being acknowledged as a key influence. There were some good answers here that used geographical terminology such as interception and lag time with a significant number of students gaining 3 marks.

In this question candidates are required to focus on one idea and develop it in detail to access the 3 marks available.

(d) Explain **one** way vegetation can affect river discharge.

(3)

Vegetation stops water from reaching the river channel so fast because it intercepts it with its leaves and this means it takes longer to reach the ground. Therefore it keeps river discharge steady. Steadies will lower peak flows.



This candidate has reached the maximum available marks as they have identified the fact that the vegetation has an impact on river discharge and they go on to develop a thorough explanation about how the vegetation affects the time for water to reach the river and the subsequent impact on peak flow.



Candidates should be aware that points should be developed to gain access to all marks available.

(d) Explain **one** way vegetation can affect river discharge.

(3)

Vegetation can decrease river discharge because the vegetation uses some of the water.



In this example the candidate scored 1 mark for stating a simple idea. Had the candidate developed the response further they would have gained 2 marks as they don't really explain anything.

## Question 1 (e)

The majority of candidates were able to identify the waterfall as the river landform successfully.

(e) Study Figure 1b in the Resource Booklet.

Identify the river landform.

(1)

waterfall



The candidate has correctly identified the landform for 1 mark.



Candidates should look at the feature identified inside the box in this type of question and concentrate on the appropriate identification.

## Question 1 (f)

This item required candidates to explain the formation of a river meander. Generally, the majority of candidates were able to score some marks on this item. Candidates who scored 3 or 4 marks tended to use more specific geographical terminology and were able to identify a sequence of events. In some cases candidates didn't access as many marks because they became confused over erosion and deposition on the inner and outer bends of the meander. Some candidates supported their responses with diagrams. In a few instances, candidates scored no marks as they described the formation of a different landform.

(f) Explain the formation of a river meander.

(4)

The meander is formed on lower land. The high speed of water flow erode one side of the river bank which make the side is deeper called river cliff. <sup>Bend the river</sup> The other side of river bank get less erosion the low speed flow ~~do~~ doesn't have enough energy, so the deposits on the other side of river bank called ~~slow~~ silt off. The river become bender ~~under~~ and bender then Meander form.



In this example the candidate has provided a good response to this question. They have identified several key features of river meander formation and although the process isn't complete they are able to achieve 3 out of the four marks.



Candidates should be reminded that it helps to learn the process of river feature formation as stages in a sequence. In this way as long as candidates can recall some of the steps they are likely to gain some marks.

(f) Explain the formation of a river meander.

(4)

A meander is when the water in a river takes a different route to the one that is expected.



In this example the candidate has failed to make any relevant points and the response is too vague.



It is important for candidates to gain a basic understanding of simple points - for example in this question an idea of erosion on the outside bend and deposition on the inside bend would result in the candidate gaining some credit.

## Question 1 (g)

In this 8-mark extended writing question, the majority of candidates attempted some form of response. Often quite general statements were made which meant that a number of candidates were not able to access level 2. Where candidates accessed level 2 they worked in a more systematic way but tended to focus on just one rather than both of the resources. Where candidates did access level 3 they managed to link both resources together but in addition used case study material to support their ideas.

In this response the candidate has accessed all of the available marks. The response whilst not perfect does demonstrate the candidate's ability and understanding of the key elements of this response.

(g) Study Figure 1c and Figure 1d in the Resource Booklet.

Analyse the reasons for variations in water quality.

(8)

- One reason for variations in water quality is due to education. Poorly educated people will pollute water sources more throwing rubbish and faeces in the water. This 'domestic sewage' is a driving factor for low water quality which can have serious impacts on health and well being. This lack of education and increase in pollution usually occurs in LIC's hence why figure 1d shows that over 20% of people use untreated water in countries in Africa. ~~eg Egypt~~ On the other hand people that are educated, usually in HIC's, do not use untreated water. In the UK there is less than 1% of people using untreated drinking water due to a good education system. Furthermore, Governmental influence

also plays a huge part in water quality. Countries with a lot of governmental influence on water quality e.g. Canada have less than 1% of people using untreated water as the government can fund water treatment programmes. This water treatment e.g. 'chlorination' is a driving factor towards high water quality and good impacts on health and well being. A lack of governmental influence as seen in countries in Africa leads to a high number of people using untreated water (>20%).

- Additionally the amount of industrial action taking place in a country leads to a difference in water quality. A large amount of industrial action can lead to 'industrial waste' which decreases the water quality leading to harmful health impacts. Moreover, pesticides from agriculture go into the water due to surface run off in fields decreasing water quality putting more strain on the government and leading to an increase in health impacts. Largely LIC's have the most people using untreated water due to lack of government funding + education. (Total for Question 1 = 25 marks)



The candidate has made good use of both resources available meaning they were able to gain the full compliment of AO4 marks. AO3 was well developed as a result of this with the candidate using the information on the resource to help them fully analyse the reasons for variation in water quality.



A key tip for this type of question is that candidates should always make use of all the resources available rather than focussing on one element. In this way they are able to produce more balanced answers.



(g) Study Figure 1c and Figure 1d in the Resource Booklet.

Analyse the reasons for variations in water quality.

(8)

Pollution lowers water quality. This is because it pollutes the water and can persist in the environment for a long time.

Over exploitation, for example in North China, lowers water quality because it makes the water ~~have more salty~~ have more salts because its more concentrated.

Agricultural runoff for example in the form of fertilisers lowers water quality because it ~~is~~ causes eutrophication.

Industrial effluent lowers water quality because it releases toxic substances such as mercury, cadmium and lead into the water and this builds up over time.

~~because~~ Water treatments on the other hand help to make water safe for drinking. These include: ~~are~~ aeration, filtration and disinfection as shown in figure 1c.

Variations in water quality exist in different countries because of the water treatment available. In HIC's there is lots of treatment available and in LIC's there isn't a lot in general.

~~The~~ Amount of pollution also impacts water quality and in LIC's such as Bangladesh for many water treatment is unavailable and they therefore dump sewage directly onto water bodies.

In this example the candidate scores 4 marks. The candidate has developed some relevant ideas but unfortunately has made insufficient use of either of the resources to enable them to develop their ideas fully. There is some basic understanding which is why this response was lifted out of level 1.

Analyse the reasons for variations in water quality.

(8)

High  
Water quality is vital for being able to sustain life, be it human or other. Water is also incredibly important for economic reasons such as the cooling down of machinery or use as hydraulics. Because of this water quality is very important, however, the quality of water varies dramatically for different reasons. As shown in figure 1c, one reason for variations in water quality is the huge affect pollution sources have. Pollution sources (especially in LIC's where it is harder

for clean up to be payed for) effect water quality hugely. Domestic sewage leads to pathogens and deadly bacteria being accumulated in the water and making creatures (people included) sick. Industrial waste such as oil spills and ~~car~~ factory fumes leads to areas of stagnant tar and oil, this creates biohazards and kills many animals which will then further decrease water quality as they decompose. Agriculture, pesticides and fertilizers again all lead to water quality being diminished. The use of water treatment (chlorination, aeration, sedimentation, filtration and disinfection) all help improve water quality and make it safe. In figure 1d we can see how lower income countries such as areas in Africa have ~~the~~ <sup>much</sup> lower water quality than a high income country such as England, this is **(Total for Question 1 = 25 marks)** because water treatment is very expensive and LICs cannot afford to treat water nor clean up after pollution sources.



In this example, the candidate makes some relevant points and demonstrates good understanding. The mark was given at the top of level 2 as the candidate had failed to use both resources in sufficient detail and therefore the response was a little unbalanced.

## Question 2 (b) (ii)

This item required candidates to state one method of mass movement at the coast. This was not answered as the mirror question 1bii. Candidates who did score on this item tended to identify slumping and landslides.

In this question the candidate is required to identify one type of mass movement affecting coastal landscapes.

(ii) State **one** type of mass movement that affects coastal landscapes.

(1)

*landslides*



The candidate gains full credit in this example as per the suggested responses on the mark scheme.

## Question 2 (b) (iii)

This item required candidates to explain one type of mechanical weathering that occurs at the coast. This item was relatively well answered with most candidates opting to explain freeze-thaw action. Where candidates didn't score any marks it was because they had confused weathering with erosion or had written about biological or chemical weathering.

Here the candidate has successfully obtained 2 marks as they have identified a method of mechanical weathering (AO1) and further developed the answer for the additional mark (AO2).


(iii) Explain **one** type of mechanical weathering that occurs at the coast.

(2)

freeze-thaw weathering is when water enters the cracks in rocks. When the water freezes, it expands causing the crack to widen. This can cause rocks to break away.



This is a good response demonstrating the candidate's high level of understanding.



For these types of question candidates need to develop skills where they fully develop their answers, in some cases candidates stated just one word or a simple idea, resulting in them only gaining one mark.

(iii) Explain **one** type of mechanical weathering that occurs at the coast.

(2)

a type of chemical weathering is acid rain. This erodes the coast at a faster rate and causes destruction. It results in the breaking down of rocks on the earth's surface.



In this example, unfortunately, the candidate has identified the wrong type of weathering and as a result, score 0 marks.



## Question 2 (c)

This item required candidates to use the fig 2a which had identified ways in which changes in sea level had created coastal landforms. This item was answered either very well with candidates accessing full marks or very badly. Where candidates did score full marks they were able to identify the landform caused by the change in sea level and then develop the response further to suggest how it had been formed.

(c) Study Figure 2a in the Resource Booklet.

Suggest **two** ways changes in sea level have created coastal landforms.


(4)

1 When there is a <sup>relative</sup> change in sea level where the sea level decreases, this can cause emergent coastlines such as relic cliff and raised beaches e.g. Isle of Arran, Scotland.

2 When there is a relative decrease in the sea level, it can reveal a wave-cut notch which was caused by marine erosion and is the broken pieces of when the ~~sea~~ waves from the higher sea level were strong.



In this example the candidate has recognised the importance of identifying a factor from the resource and developing a simple idea, i.e. a statement of how sea level changes can create a landform (AO2) but the continues to give further detail on the landform and how it develops further (AO3).



Candidates must always attempt to develop ideas fully to gain access to all 4 marks.

Suggest **two** ways changes in sea level have created coastal landforms.

(4)

- 1 flooding - by the increase in sea level coastal landforms are gone <sup>raised</sup> because the coast has been flooded. The sea structure would be raised.
- 2 fault joints being eroded by sea. The water erodes away the beach



In this example the candidate failed to score any marks as they were not able to use the resource in an appropriate manner. This was common where candidates had a limited understanding of landforms being created as a result of sea level change.



## Question 2 (d)

For this item candidates were asked to explain one physical factor that influences the distribution of mangrove ecosystems. Many candidates were able to identify a simple factor such as light, temperature or water depth but failed to develop their responses in enough depth. This resulted in few candidates gaining access to all 3 marks. Some candidates talked about human factors influencing distribution. Where candidates did score 3 marks responses were well developed and showed a good understanding.

In this question candidates are required to focus on one idea and develop it in detail to access the 3 marks available.

(d) Explain **one** physical factor that influences the distribution of mangrove ecosystems.

(3)

Mangrove ecosystems need a temperature of approximately 26°C to grow properly. They need lots of warmth, also from sunlight to photosynthesise and grow. If the waters are too cold, they will not be able to grow. An example of a mangrove ecosystem is in Sunderbans in Bangladesh ~~where~~ where it is hot.



In this example the candidate scores full marks as they explain how one factor affects the distribution of mangrove swamps. The candidate develops this response successfully by explaining how extremes of temperature affect the growth of mangroves.



Candidates should be aware that one point should be developed to gain access to all marks available.

(d) Explain **one** physical factor that influences the distribution of mangrove ecosystems.

(3)

One physical factor is the temperature ; mangroves can cope with great heat and choking mud and so are able to grow in hot areas , eg around the equator where they are found.



In this example the candidate scores 2 marks, whilst they identify a factor affecting the distribution of mangroves the response is only partially developed.

## Question 2 (e)

The majority of candidates were able to identify the arch as the coastal landform successfully.

(e) Study Figure 2b in the Resource Booklet.

Identify the coastal landform at X.

(1)

arch



The candidate scores 1 mark here for correct identification of the landform.



Candidates should look at the feature identified inside the box in this type of question and concentrate on the appropriate identification.

## Question 2 (f)

This item required candidates to explain the formation of headland. Generally, the majority of candidates were able to score some marks on this item. Candidates who scored 3 or 4 marks tended to use more specific geographical terminology and were able to identify a sequence of events. In some cases candidates didn't access as many marks because they became confused between headland development with that of caves, arches and stacks. Some candidates supported their responses with diagrams.

In this question, candidates are asked to explain the formation of a headland this can be approached in several ways, either by specifically following a formation process which is linked or by identifying a number of individual points which contribute to the formation of the headland.

(f) Explain the formation of a headland.

(4)

Sometimes a coastline can be discordant such as the Purbeck coast in Dorset. This is when the different layers of rock run parallel perpendicular to the direction of the coastline. Headlands are made from competent rock such as granite or limestone as they are not easily eroded. The softer, incompetent layers of rock on either side such as boulder clay are eroded faster, leaving the headland jutting out to sea.



The candidate has produced a strong response here which demonstrates a good understanding of the formation of a headland. Whilst the response is not as logical as some other submissions it is made up of a series of interlinked points.



Candidates should be reminded that it helps to learn the process of coastal feature formation as stages in a sequence. In this way as long as candidates can recall some of the steps they are likely to gain some marks.

(f) Explain the formation of a headland.

(4)

When longshore drift ~~pick~~ picks up sediment from the sea and drops it along the coastline / headland.



In this example, the candidate has identified the wrong process and as a result scores no marks.

## Question 2 (g)

In this 8-mark extended writing question, the majority of candidates attempted some form of response. Often quite general statements were made which meant that a number of candidates were not able to access level 2. Where candidates access to level 2 they worked in a more systematic way but tended to focus on just one rather than both of the resources. Where candidates did access level three they managed to link both resources together but in addition used case study material to support their ideas. Candidates seemed to particularly struggle with the analysis element of the question.

In this response the candidate has accessed all of the available marks. The response whilst not perfect does demonstrate the candidate's ability and understanding of the key elements of this response.

(g) Study Figure 2c and Figure 2d in the Resource Booklet.

Analyse the reasons for the choice of different soft engineering strategies shown.

(8)

In photo 1, cliff regrading is used because although it is high maintenance and high cost, it slows down the rate of erosion since the cliff is continually being reinforced when more material is added, this is a very good choice of soft engineering since although it slows down the rate of erosion, the settlement behind has a reduced risk of erosion and more time to plan what to do when inevitably the cliff collapses and the settlement <sup>fall</sup> goes into the sea. In photo 2, Beach replenishment is used, this is a very good choice of soft

engineering since although it is also expensive and high maintenance, due to long shore drift, ~~the beach~~ <sup>a spit forms</sup> and as a marsh was behind the spit, this increases biodiversity along the coast and this is good since not only does it reduce the rate of erosion but beach replenishment allows ~~for more land~~ <sup>provides a habitat</sup> for more animals maybe even boosting tourism. Photo 3, the development and extension of natural sand bars is used to reduce the rate of erosion. This is good since it firstly reduces the wave energy thus the waves have less strength for erosion and it does not look ugly. The only problem is that it is high maintenance since the deposition moves the land in the wave current. Finally, in photo 4, managed retreat is used, it is good since there is just farmland in the area which is relatively not ~~as~~ valuable land (it is not as valuable as a whole settlement). <sup>managed</sup> retreat also allows new habitats to form and develop for animals thus increasing biodiversity and it looks natural. (Total for Question 2 = 25 marks)



**ResultsPlus**  
 Examiner Comments

The candidate has made good use of both resources available meaning they were able to gain the full compliment of AO4 marks. AO3 was well developed as a result of this with the candidate using the information on the resource to help them fully analyse the reasons for the choice of different soft engineering techniques.





A key tip for these type of questions is that candidates should always make use of all the resources available rather than focussing on one element. In this way they are able to produce more balanced answers.

(g) Study Figure 2c and Figure 2d in the Resource Booklet.

Analyse the reasons for the choice of different soft engineering strategies shown.

(8)

- Cost is a main reason as you have to evaluate whether it is effective enough to spend a lot of money on. Some soft engineering strategies are more expensive than others e.g. cliff regrading is much more expensive than managed retreat.
- maintenance is another reason as you need to evaluate how much time and work you have to put in to build it and ensure it stays in good condition and quality. some soft engineering



strategies ~~are~~ ~~take~~ are higher maintenance than others e.g. Beach replenishment has much higher maintenance needed than managed retreat does.

- another reason is the location of the soft engineering strategy, as ~~it~~ the location will be an important factor of what strategy will be used.
  - how the strategies effectiveness will also be a main reason for the choice of different soft engineering strategies as you want to ensure that you are choosing the most effective one for the job e.g. if you needed to protect the cliffs from erosion cliff regarding would be the most effective strategy.
  - its appearance will also be a factor e.g. managed retreat offers a good strategy without involving any unattractive equipment as it
- (Total for Question 2 = 25 marks)

lets the environment be natural and do what it wants.



In this example, the candidate scores 3 marks and gets to the top of level 1. The candidate has made some simple statements which demonstrate a limited understanding. At the same time the candidate has made some implicit comments but nothing that directly relates to the resource.



This response would have lifted into level 2 had the candidate made specific reference to one of the resources.

### Question 3 (b) (i)

Most candidates were able to score a mark on this item Richter and Mercalli scales were the most popular options.

In this question the candidate is required to state one measure of earthquake intensity.

(b) (i) State **one** measure of earthquake intensity.

(1)

Richter Scale



In this response the candidate has correctly answered the question for 1 mark.



Some candidates struggled with the idea of intensity measurement.

### Question 3 (b) (ii)

Most candidates were able to score a mark on this item as per the mark scheme.

In this question the candidate is required to identify one characteristic of a volcanic eruption.

(ii) State **one** characteristic of a volcanic eruption.

(1)

*hot ash cloud*



In this response the candidate has correctly answered the question for 1 mark.



For this type of low tariff questions candidates need to ensure that they have a clear understanding of key characteristics of hazardous environments.

### Question 3 (b) (iii)

In this item candidates were asked to identify one cause of an earthquake event. Typically tectonic plate movement was identified with candidates gaining a second mark with development around the release of pressure that has built up. Where candidates didn't score two marks it was because they identified plate movement but then didn't go on to develop the answer fully.

Here the candidate has successfully obtained 2 marks as they have identified a cause of an earthquake event (AO1) and further developed the answer for the additional mark (AO2).

(iii) Explain **one** cause of an earthquake event.

(2)

A conservative plate boundary is when two plates move against each other horizontally causing the Earth to judder. A conservative plate boundary can form faults such as the San Andreas Fault in LA, USA.



This is a good response demonstrating the candidates high level of understanding.



For these type of questions, candidates need to develop skills where they fully develop their answers, in some cases candidates stated just one word or a simple idea, resulting in them only gaining one mark.

(iii) Explain **one** cause of an earthquake event.

(2)

When two plates collide when passing each other  
which disrupts the activity in the mantle below.



In this example the candidate scores 1 mark for identifying a simple cause of the earthquake, however the response is underdeveloped so no other mark is awarded.

### Question 3 (c)

This item required candidates to use fig 3a to identify the cause and direction of tropical cyclones. The first part of the question was answered better than the second. Usually candidates were able to get a developed point around warm sea temperatures but found the part around direction difficult. Where marks were awarded for this part it was usually around the prevailing wind. Candidates also struggled to explain the significance of the Coriolis force.

(c) Study Figure 3a in the Resource Booklet.

Suggest a factor that influences the cause and another factor that influences the direction of tropical cyclones.

(4)

Cause:

sea temperatures of  $>27^{\circ}\text{C}$  which can warm the surrounding air, forming heavy cumulonimbus clouds.

Direction: Coriolis

The Coriolis effect and position compared to the equator as the equator has no Coriolis affect resulting in no cyclones, but areas around it have Coriolis affect which means cyclones can form.



In this example the candidate has recognised the importance of identifying a factor from the resource and developing a simple idea, eg the candidate has identified temperature as a cause (AO2) but the continues to give further detail on the level of temperature required and how it helps form tropical cyclones. (AO3). This response was enough to access all 4 marks with 2 developed points.

(c) Study Figure 3a in the Resource Booklet.

Suggest a factor that influences the cause and another factor that influences the direction of tropical cyclones.

(4)

Cause: ~~High~~

High sea temperatures above 27°C

Direction:

Generally heads north-west.



**ResultsPlus**  
Examiner Comments

In this example the candidate only scores 1 mark as as they have only identified one factor from the resource. The point around cause is not developed enough to access both marks.

The comment around direction is not credit worthy.



### Question 3 (d)

For this item candidates were asked to explain how earthquakes can form tsunamis. Many of the candidate responses focused on the idea that earthquakes act as a trigger for a tsunami but often didn't develop the answer in enough depth to access full marks. In some of the better responses, candidates did identify the idea of shock waves and waves getting larger over distance.

(d) Explain **one** way earthquakes can form tsunamis.

v  
(3)

The earthquakes under the water, caused by movement of tectonic plates under sea, can cause massive tidal waves called tsunamis as the energy <sup>and shock waves</sup> generated from the earthquake, passes through the ocean creating large waves.



This is a good response from the candidate, they have identified the link between plate movement under the sea and have gone on to further develop the answer and explain how this results in tsunami development.



Where candidates communicated tsunami development as a series of stages they were able to access more marks.

(d) Explain **one** way earthquakes can form tsunamis.

(3)

When the tsunami ~~into the sea~~ is affecting an area, it can affect the plates in the earth so the plates become unaligned, meaning an earthquake can be caused.



In this example the response from the candidate is confused and as a result the candidate doesn't score any marks.

### Question 3 (e)

Generally, this item was answered very well with candidates being able to draw ideas successfully from the resource.

### Question 3 (f)

For this item candidates were asked to explain why some areas are more vulnerable to than others to the impact of natural hazards. Candidates showed a good understanding of the reasons why vulnerability varied. Usually there was enough material for more than four marks. Most candidates provided a series of developed points around education and preparedness and economic development affecting the ability to provide protection and effective response. Often examples were given although they weren't requested.

(f) Explain why some countries are more vulnerable than others to the impacts of natural hazards.

(4)

developing countries such as Haiti are more vulnerable than developed countries such as New Zealand as they have better defense mechanisms, as well as stronger and more resistant buildings. This is because they can afford to spend money on protecting their country. As well as this, they may have better quality and MORE hospitals and other aiding services in order to recover better from hazards.



In this example the candidate has produced a good response through the development of 2 separate points. The first point makes reference to the idea that in developing countries there isn't enough money to develop mechanisms to reduce the impact of hazards. The second point goes on to explore the idea that emergency services may not be of such high quality in developing countries and as a result the ability to cope with natural hazards is reduced.



Candidates can also access all the marks available on this type of question by 4 individual points.

(f) Explain why some countries are more vulnerable than others to the impacts of natural hazards.

(4)

Some might have ~~be~~ have  
a sea for example near their  
home or some is <sup>bigger</sup> ~~bigger~~ than  
others. Also ~~the~~ the way  
the land is made or formed  
out.



Here the candidate doesn't access any marks as they have failed to answer the question.

### Question 3 (g)

In this 8-mark extended writing question, the majority of candidates attempted some form of response. Often quite general statements were made which meant that a number of candidates were not able to access level 2. Where candidates accessed level 2 they worked in a more systematic way but tended to focus on just one rather than both of the resources. Where candidates did access level 3 they managed to link both resources together but in addition used case study material to support their ideas. This item was not answered as well as the equivalent items in questions 1 and 2.

In this response the candidate has accessed all of the available marks. The response whilst not perfect does demonstrate the candidate's ability and understanding of the key elements of this response.

(g) Study Figure 3c and Figure 3d in the Resource Booklet.

Analyse the use of hazard, vulnerability and risk mapping in reducing the impact of earthquakes.

(8)

Earthquake impact occur on a local, national and international scale and can be categorised as social, economic and physical, as well as long and short term. Mapping can mitigate these impacts to a large extent, however technology is more widely available in MEDCs than LEDCs.

Figure 3c shows the stages in hazard mapping, which can be used in the risk assessment and appraisal stage of earthquake management. Stages 2 and 3 enable the identification of areas at the highest risk, thus adequate preparation can be undertaken in terms of construction of related seismic structures and education of local residents, which mitigates the short term physical impact of the earthquake by reducing infrastructure collapse and the social impact and subsequently also the long-term economic impact.

by reducing deaths. Japan uses Probabilistic Seismic Hazard Maps (PSHM) and Scenario Earthquake Shaking Maps (SESM) to identify those areas and land use zoning is carried out to prevent further development in those areas, as described in Figure 3c in terms of Long term management. However, this technology is expensive and historic records can only predict earthquakes to a certain extent, the hazard mapping is generally inaccessible to LDCs making them more vulnerable.

Figure 3d shows the 3 different maps used in <sup>a</sup> South American country to identify high hazard, vulnerability and risk areas. This identification can be used after a tectonic event to prioritise the locations most threatened and therefore provide sufficient short term emergency relief to reduce social impacts.

For Japan used such maps in the 2010 earthquake, which enabled the Health Ministry and Japanese Red Crescent Society to dispatch aid to the most impacted areas; this was successful to a large extent as <sup>areas of higher</sup> these areas have a high population density or at highest risk of aftershocks (as described in stage 3 hazard mapping) received largest amount of aid and relief.

In conclusion, hazard, vulnerability and risk mapping is important in earthquake management to a large extent, however they are more widely available in MEDCs which have higher funding.



The candidate has made good use of both resources available meaning they were able to gain the full compliment of AO4 marks. AO3 was well developed as a result of this with the candidate using the information on the resource to help them fully analyse the use of hazard, vulnerability and risk mapping in reducing the impact of earthquakes. One particularly good element of this response is that it relates the maps to both short and long term impacts.





A key tip for this type of question is that candidates should always make use of all the resources available rather than focussing on one element. In this way, they are able to produce more balanced answers.

(g) Study Figure 3c and Figure 3d in the Resource Booklet.

Analyse the use of hazard, vulnerability and risk mapping in reducing the impact of earthquakes.

(8)

Identifying where there is the most hazards, vulnerability and risk mapping helps to reduce the impact of earthquakes because you are able to target areas that need the most help. In South America, in the vulnerability map had the most concerning factors because there was the most areas of vulnerability. This is bad because it shows that this area has no way of defending itself ~~because~~ as it is vulnerable. Marking these maps then means you are able to target the area that needs the most help. In the risk map there was some areas of high risk this means that there <sup>are</sup> areas of risk in which you are able to go to the area and put strategies in place to reduce the impact.



This response scores 3 marks and is at the top of level 1. The candidate has made some general points around the use of risk mapping but unfortunately not linked their ideas to the resource.



Candidates should always reference the resources available as this will help to develop their answers more fully.



## Question 4 (a) (ii)

Q 4a(ii), 5a(ii) and 6a(ii) were the same across each option. Generally candidates had a good understanding of the limitations of different sampling methods. Most candidates were able to access the mark.

(a) (i) Identify the type of sampling method used.

(1)

<input checked="" type="checkbox"/>	<b>A</b> systematic	
<input checked="" type="checkbox"/>	<b>B</b> random	x
<input checked="" type="checkbox"/>	<b>C</b> stratified	
<input checked="" type="checkbox"/>	<b>D</b> opportunistic	x

(ii) State **one** disadvantage of using one of the sampling methods in the question above, a(i).

(1)

Sampling method ~~is~~ random  
 your results wouldnt be accurate because it  
 wouldnt be a fair test.



In this example, the candidate scores 1 mark as they have identified a simple disadvantage of random sampling.



Candidates should be aware that low tariff questions sometimes only require a simple response.

## Question 4 (a) (iii)

Q 4a(iii), 5a(iii) and 6a(iii) were the same across each option.

This item was answered quite well with many candidates gaining 2 marks. Where candidates scored only 1 mark it was due to them not writing the final answer to one decimal place or because they had not shown the relevant working out as detailed in the question.

Study Figure 4a in the Resource Booklet. It shows sample data on velocity from one site on a river. A cork float was used to measure the time taken to travel between two points, A and B.

(iii) Calculate the mean time taken for the cork float to travel between points A and B.

Give your answer to **one** decimal place.

You must show all your workings in the space below.

$$\begin{array}{r} 21.1 + 16 + 14.1 + 15 + 35 = 101.2 \\ \hline 5 \qquad \qquad \qquad 5 \end{array} = 20.24 \text{ s} \quad (2)$$
$$= 20.2 \text{ s}$$

20.2 seconds



In this example, the candidate has gained credit for both marks available as they have demonstrated their working out and given the answer to one decimal place. This is exactly what was required for this question.

(iii) Calculate the mean time taken for the cork float to travel between points A and B.

Give your answer to **one** decimal place.

You must show all your workings in the space below.

$$\begin{array}{r} 21.1 \\ 16.0 \\ 14.1 \\ 15.0 \\ + 35.0 \\ \hline 101.2 \end{array}$$

$$\frac{101.2}{5} = 20.24$$

20.24 seconds



**ResultsPlus**  
Examiner Comments

In this example, although the candidate has carried out the correct calculation they have only scored 1 mark because the final answer wasn't rounded to one decimal place.



**ResultsPlus**  
Examiner Tip

For calculate questions read the instructions carefully to ensure you meet the requirements of the question.

## Question 4 (a) (iv)

Q 4aiv, 5aiv and 6aiv were the same across each option.

This item required candidates to complete the bar chart. In the majority of cases candidates were able to plot both bars successfully.

(iv) Using the data in Figure 4a (in the Resource Booklet), complete Figure 4b below for measurements 1 and 4.

(2)

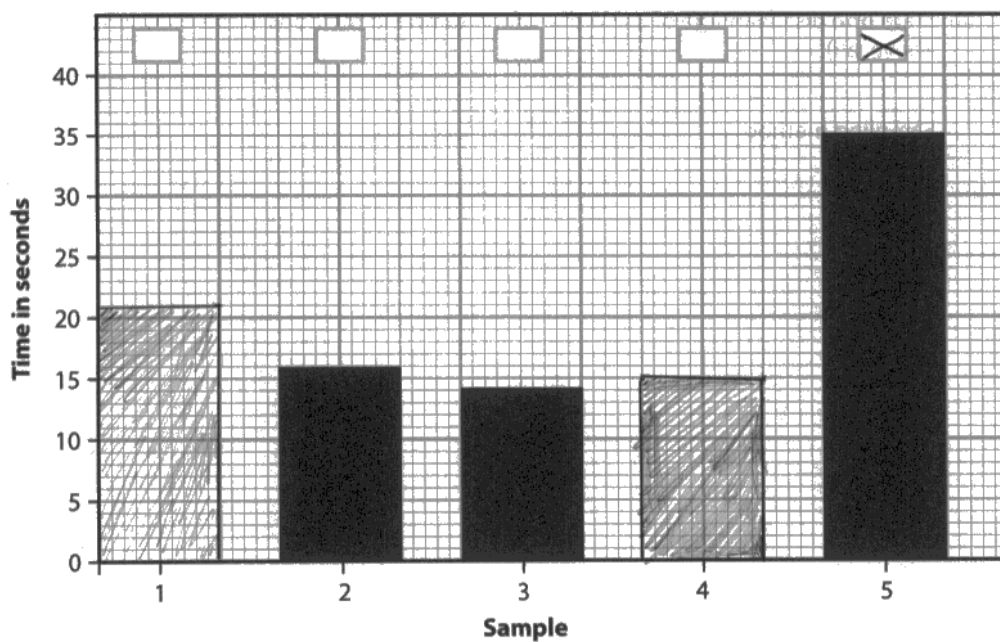


Figure 4b

Measurement times taken for float to travel between points A and B at one site



This a good example of a candidate who has scored both available marks through taking care to draw the bars correctly.



Always use a ruler as it will help with accuracy.

## Question 4 (a) (v)

The majority of candidates were able to identify the anomaly and gain credit.

## Question 4 (a) (vi)

Q 4avi, 5avi and 6avi were the same across each option.

Q4avi. For this question candidates were asked to suggest a reason for the anomalous result i.e. the fact that the cork float took far longer to travel between A and B for sample 5. Most candidates scored 1 mark here through identifying that something could have stopped the cork flowing down the river, however in some cases they did not gain access to the second mark because the candidate did not outline what effect the cork getting caught would have on the time taken to get to point B. Other ideas included human error in timing or the distance measured between point A and B.

Q5avi. Candidates in some cases tended to describe the anomaly rather than give a reason for it. Many candidates accessed 1 mark for a simple idea such as rock fall.

Q6avi. Few candidates attempted this question but those that did followed the same pattern either just describing the anomaly gaining no credit or by stating a simple idea such as human error.

(vi) Suggest **one** explanation for this anomaly.

(2)

The student might have miss timed the cork. eg they might have ~~through~~ forgotten where the second hand started on their watch.



A typical response is demonstrated here where the candidate has identified the reason for the anomaly but hasn't developed the answer in enough depth to gain credit for the second mark.

## Question 4 (b)

Q4b, 5b and 6b assessed the same skill.

A relatively well answered question with the majority of students being able to describe another primary method of data collection. Many candidates wrote about the use of questionnaires. Those that did identify another primary method were normally able to develop the answer fully to gain either 2 or 3 marks. In Q4b many candidates described collecting width and depth data for the river, whilst in Q5b beach gradient was common. Q6b had the least well developed response from candidates with elements of weather data collection being the most common but under developed answer.

In this example, the candidate is looking at the rivers fieldwork question.

(b) To extend the river study, students were asked to use **one** other primary data method.

Explain **one** other primary data method they might have used.

(3)

*They could have measured how deep the river was.  
They would have to. They could measure how wide  
the river was. They would have to use a tape measure  
to measure the width of the streamer*



This is a typical example where the candidate scores 2 marks. In this instance, they have identified a primary data collection method they could use and started to explain what they would need to do. However, the answer is not developed in enough detail to gain access to the final mark.



For questions of this type, candidates should be encouraged to think of data collection methods as a process in this way they should be able to recall the stages they would go through more easily and access more of the marks available.

## Question 4 (c)

For this item candidates were asked to evaluate the success of their data analysis methods in answering their geographical enquiry question. Candidates experienced some difficulty with this question. The majority of candidates failed to get out of level 1 due to a poor understanding of what was meant by the term data analysis. In the level 1 responses candidates were awarded marks for some basic ideas around using graphs to support analysis. Many candidates failed to score as they were focussed on describing data collection methods. Very few responses reached level 3 which was disappointing but those that did showed a good understanding with a high level of development.

You have studied river environments for your geographical enquiry.

(c) Evaluate how successful your chosen data analysis methods were in answering your geographical enquiry question.

(8)

Enquiry question

<sup>downstream</sup>  
Assessing the changes in characteristics of the River Medway

One of our data analysis methods was the use of a graph of the cross-sectional area of the river at each location where <sup>we recorded</sup> ~~we~~ width, depth and velocity. As we recorded 5 measurements of the depth across the width of the river, using systematic sampling as they had equal intervals, this allowed us to draw accurate graphs. This method of data presentation and analysis was particularly effective as it allowed us to easily compare the changes in width and depth of the river at each point, as well as to see the shape of the river bed, which was helpful in spotting anomalies as <sup>we</sup> ~~they~~ were able to identify them very clearly.

On the other hand, this data analysis method was not very successful in answering our question as it was very time consuming and we used too small a scale on our graphs to grasp the full <sup>extent</sup> ~~extent~~ of our data.



Another way that we analysed our data was through comparative bar graphs. These were particularly successful as they were not too time consuming and allowed us to easily compare our data from each site. We used this method to compare the average velocity of the river at each site and I believe it was very successful as it allowed us to see the clear progression of the data we collected and it allowed us to easily question our hypothesis and spot anomalies.

Another way that we analysed our data was through line graphs <sup>of the river width</sup> †. This was very successful as it was easy to analyse the changes in the width of the river and also to predict possible values for the width of the river in the areas we were unable to measure. Overall, I think our analysis methods were very successful, as we were able to clearly compare the data from each site and follow the progression of the width, depth, discharge and velocity of the river as we progressed downstream.



This is an example of a strong candidate response to this question. Here the candidate has identified a number of ways in which their own data analysis helped them answer their geographical enquiry question. Although this response takes an approach which looks at one method after another the candidate is able to logically evaluate each method in enough detail to access level 3. There is evidence of both AO3 and AO4 in this response.





Candidates should understand that responses to "evaluate" questions can include evaluation at any point in the response rather than just at the end.

(c) Evaluate how successful your chosen data analysis methods were in answering your geographical enquiry question.

(8)

Enquiry question

That river shape will change with distance down stream?

I collected data to show how wide and deep the river was. I then plotted my findings on a graph as a cross-section. This was an effective method to use as it clearly showed the shape of each part of the river that I took a cross-section for. However I only had figures for the depth every 10cm meaning that the profiles that I had to view were not shaped very like the river. I also calculated the average depth and width for each part of the rivers course on the cross-section that I took so this gave me a good idea of how the shape changed overall but I took my measurements in a time of drought meaning that this method may not have been very valid as the drought may have affected different parts of the river course differently.



In this example, the candidate scores 4 marks a low level 2 response. The candidate is quite descriptive in their response with a very subtle evaluative comment with regard to effectiveness.

### **Question 5 (a) (ii)**

Usually scored a mark related to points around bias.

### **Question 5 (a) (iii)**

Often correct, although quite a few did not follow the instruction to give answers to 1 decimal point.

### **Question 5 (a) (iv)**

Usually the graphs were correct. Occasionally not attempted.

### **Question 5 (b)**

Where candidates were able to successfully identify a method of data collection, there would usually be clear development for full marks. Sometimes data collection methods were not appropriate for coasts. Beach profiles were the most common responses that got full marks.

### **Question 5 (c)**

As with other part c questions candidates often didn't score well here as they focused their answer around data collection methods, rather than analysis. Candidates often scored marks through inferred analysis via data presentation methods. It's a shame as often very good geographical fieldwork knowledge was present, but it didn't relate to analysis which meant that many of these answers scored very low marks. Few noted the evaluate command word, and were often descriptive of what they had done.

### ***Question 6 (b)***

A relatively well answered question with the majority of students being able to describe another primary method of data collection.

Many candidates scored 1 mark but their ability to expand on their response was weak.

### ***Question 6 (c)***

A poorly answered question with the vast majority of pupils not understanding the analysis part and focussing on data collection only.

## Paper Summary

Based on their performance on this paper, candidates are offered the following advice:

- Ensure that candidates are familiar with the new command words used in this specification, for example, the difference in demands of 'analyse' and 'evaluate'.
- Candidates should also spend time reviewing the process of geographical enquiry to ensure that the stages are understood, this will help candidates prepare for the level response question in section B.
- Alternatively, 'evaluate' requires candidates to measure the value or success of something and ultimately, provide a substantiated judgement/conclusion.
- In questions where there is reference to a resource, it is important to ensure that evidence from the resource is used to answer the question.
- In questions where candidates are asked to develop a single reason, it is important to ensure that the appropriate number of links in the explanatory chain are developed. The number of marks should be used as a guide. These questions usually have the command word, 'suggest' or 'explain', but may differ in depth depending on the expectation of the question. For example, a 4-mark, 'explain one reason why...' question requires greater depth than a 4-mark, 'explain two reasons for...' question.
- There will always be a few questions that require candidates to perform a calculation. Therefore, it is essential that candidates have a calculator with them. It is also important to read the question carefully. For example, if the question states, 'answer to one decimal place', this must be done to access full marks.
- In the new specification, there is a greater emphasis on AO3 (application of knowledge and understanding), rather than merely recalling facts and figures. Therefore, it is important that candidates can apply place-specific information from their case studies to unfamiliar contexts, or when asked to refer to a named country. The absence of this is likely to limit attainment of higher marks.
- Use the Sample Assessment Materials (SAMs) and specimen papers to help familiarise candidates with the structure of the paper; this will hopefully avoid situations where the rubric has not been followed.

## Grade Boundaries

Grade boundaries for this, and all other papers, can be found on the website on this link:

<http://www.edexcel.com/iwantto/Pages/grade-boundaries.aspx>



