

Figure 1



Leave blank

Answer all the questions

1. Some students investigated land use in three different areas of Singapore: Orchard Road, Dunlop Street and East Coast Parkway. Figure 1 shows a page from one student's coursework.

(a) The table shows the annotations for Dunlop Street. Write the letters **A** to **F** in the correct box on Figure 1. **B** has been done for you.

A	stalls and boxes block the pavement	D	double lines preventing parking
B	shops selling fruit and vegetables	E	no traffic on the road
C	old buildings	F	buildings two storeys high

(5)

(b) The students carried out an environmental survey in each area. Figure 2 shows their results for Dunlop Street.

	+2	+1	0	-1	-2		Total score
quiet	✓✓✓✓	✓				noisy	+9
not busy	✓✓✓✓✓					busy	+10
modern buildings				✓✓	✓✓✓	old buildings	-8
wide pavement				✓✓✓✓✓		no pavement	-5
trees/plants					✓✓✓✓✓	no trees/plants	-10

Figure 2

Plot the **total scores** on Figure 3. The score for pavements has been plotted for you.

(4)

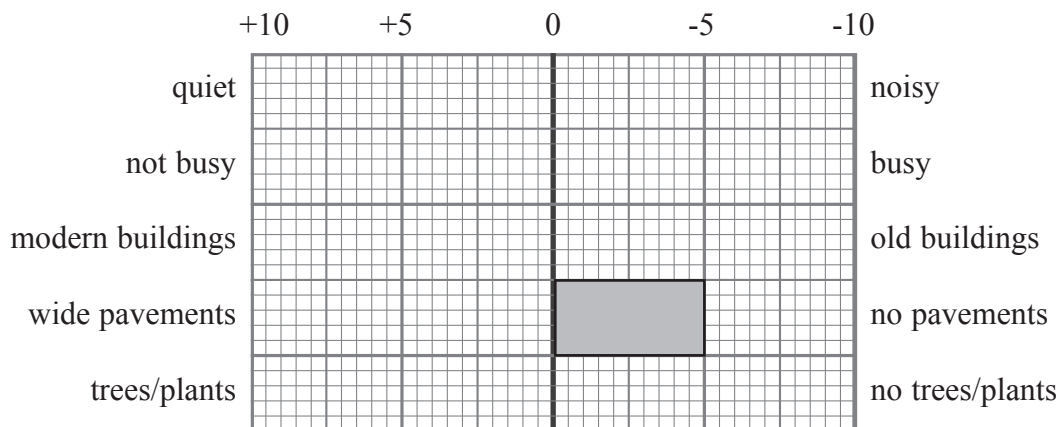


Figure 3: Total scores



Leave blank

(c) Figure 4 shows the completed graphs for Orchard Road and East Coast Parkway.

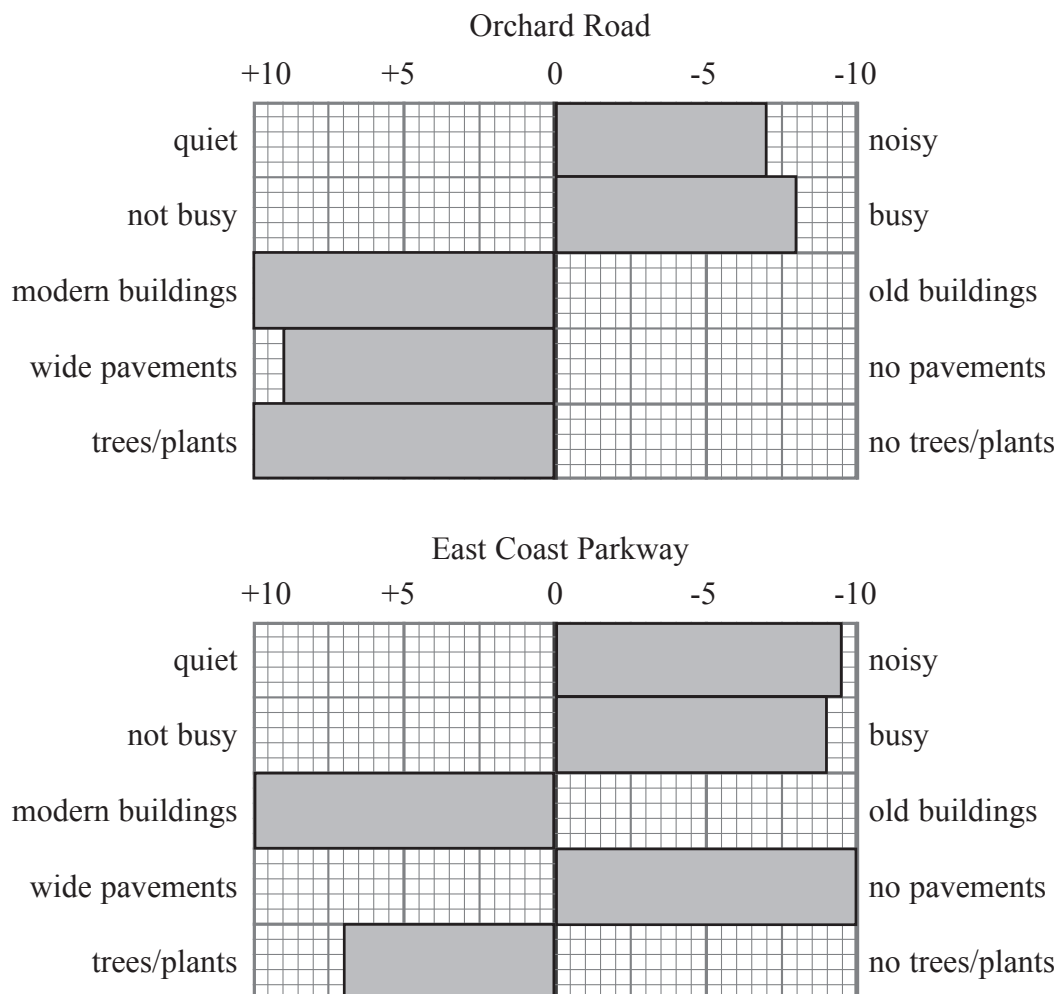


Figure 4

Describe the similarities and the differences shown by the two graphs.

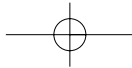
Similarities.....

 (2)

Differences.....

 (2)





Leave
blank

(d) The student's conclusion was that 'the quality of different areas within Singapore improves with distance from the CBD (Central Business District)'.

(i) Do you agree with the student's conclusion? YES / NO

(ii) Give reasons for your answer. Use Figures 1 to 4 to help you.

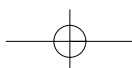
.....
.....
.....
.....
.....
.....
.....
.....
.....
.....
.....
.....
.....
.....
.....
.....
.....
.....
.....
.....
.....
.....
.....

(7)

Q1

(Total 20 marks)

--	--



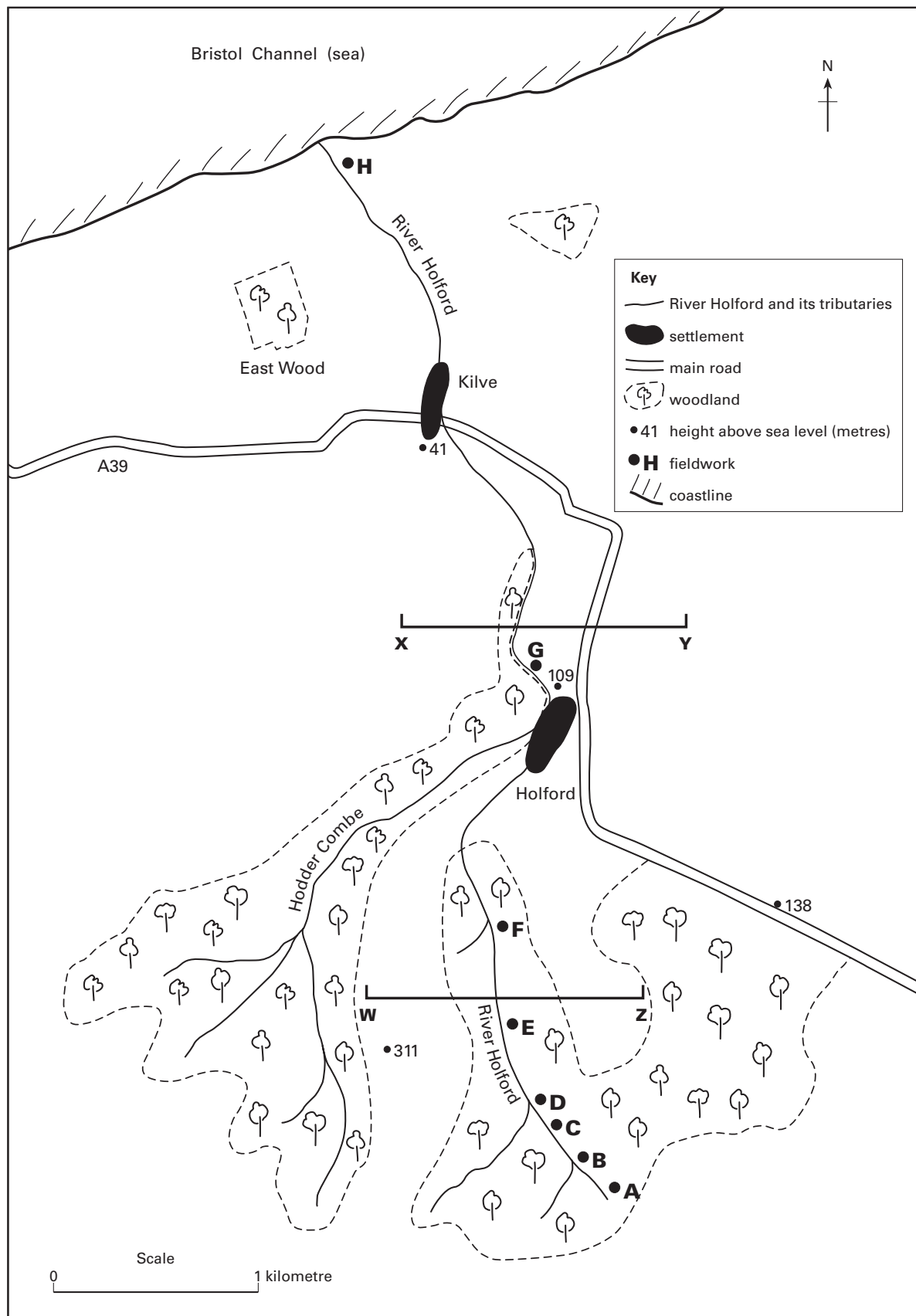


Figure 5



Leave blank

2. Study Figure 5. It shows the area around the River Holford in Somerset (United Kingdom). This area was studied as part of a fieldwork investigation.

(a) (i) In which direction is the River Holford flowing?

.....

(ii) Name the woodland to the north west of Kilve.

.....

(iii) Name the settlement nearest to the mouth of the River Holford.

.....

(iv) What is the straight line distance between fieldwork sites C and F?

.....

(v) Give the height of the highest point.

.....

(5)

(b) Figures 6a and 6b show sketch cross sections along the lines **WZ** and **XY** across the River Holford valley.

Cross section **WZ** has been labelled.

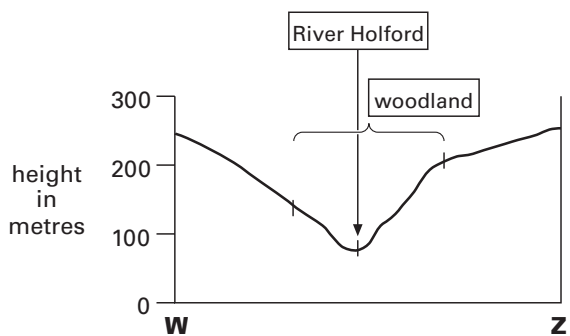


Figure 6a

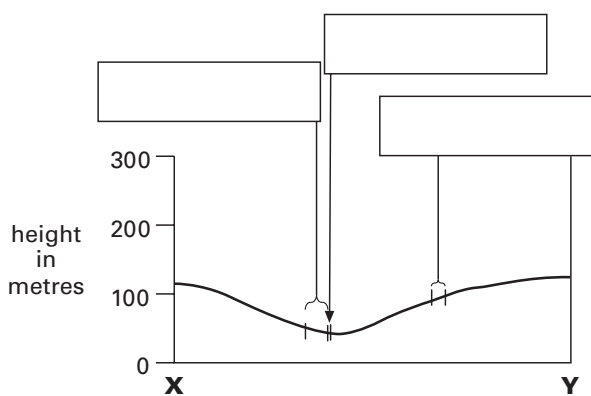


Figure 6b

Add labels to cross section **XY**. Choose from this list.

- River Holford
- A39
- settlement
- woodland

(3)



Leave blank

(c) The students collected data at sites **A** to **H** on the River Holford. Figure 7 shows their results.

Site	A	B	C	D	E	F	G	H
river width (metres)	1.2	1.5	2.2	2.4	3.2	3.6	3.4	3.5
river depth (metres)	0.1	0.1	0.1	0.1	0.1	0.1	0.1	0.4
velocity (metres per second)	0.04	0.06	0.09	0.24	0.19	0.25	0.35	0.28

Figure 7

(i) At which site

1. was the river flowing at the highest velocity?

2. did the river have the greatest depth?

(2)

(ii) Figure 8 is a scatter graph. Complete it to show the relationship between the river width and velocity (speed). The numbers shown **in bold** in Figure 7 have been plotted for you.

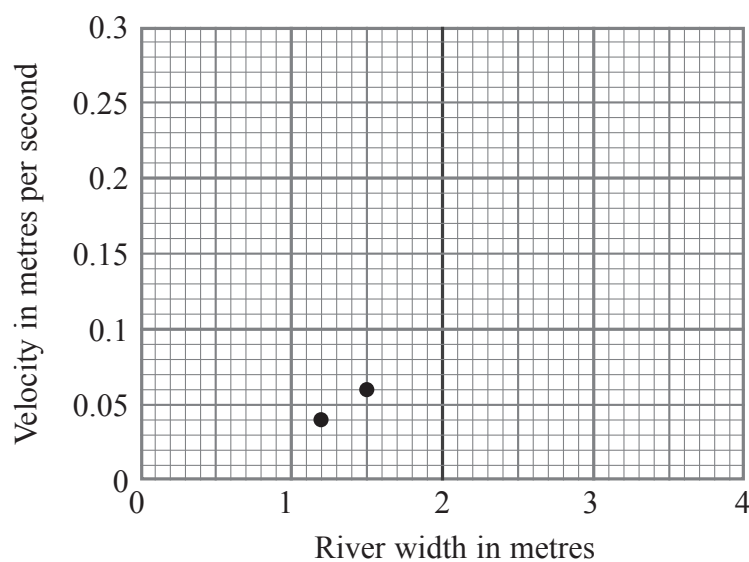
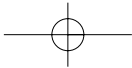


Figure 8

(4)





Leave blank

(iii) What relationship is shown by the completed scatter graph?

.....
.....
.....
.....

(2)

(iv) What geographical conclusions can you draw from this relationship?

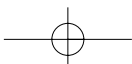
.....
.....
.....
.....
.....
.....
.....
.....
.....
.....

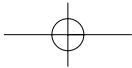
(4)

(Total 20 marks)

Q2

--	--





Leave blank

3. Use your own experience of fieldwork to answer this question.

(a) (i) What question or issue did you investigate?

.....
.....

(1)

(ii) What was the main aim of your investigation?

.....
.....
.....
.....

(2)

(iii) Describe the location of your fieldwork.

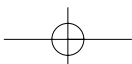
.....
.....
.....
.....
.....
.....
.....
.....
.....

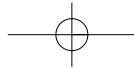
(4)

(b) (i) State **one** problem that occurred during your data collection.

.....
.....

(1)





Leave blank

(ii) How did you solve this problem?

.....
.....
.....
.....

(2)

(c) (i) Complete the table to show

- two types of data you collected
- the method you used to present each one.

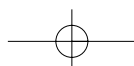
	Method of presentation
Type of data 1	
Type of data 2	

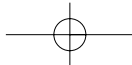
(4)

Question 3 continues on the next page



M 2 3 0 5 4 A 0 1 1 1 2





Leave blank

(ii) Select **one** of your methods of presenting data shown in (c)(i). Why did you choose this method? You may include a diagram as part of your answer.

.....
.....
.....
.....
.....
.....
.....
.....

(4)

(iii) What other method could you use to present this same data?

.....
.....
.....
.....

(2)

Q3

(Total 20 marks)

TOTAL FOR PAPER: 60 MARKS

END

