



UNIVERSITY OF CAMBRIDGE INTERNATIONAL EXAMINATIONS
International General Certificate of Secondary Education

GEOGRAPHY

0460/42

Paper 4 Alternative to Coursework

May/June 2010

INSERT

1 hour 30 minutes

READ THESE INSTRUCTIONS FIRST

This Insert contains Fig. 1 for Question 1 and Figs 5, 6 and 7 for Question 2.

This insert is **not** required by the Examiner.

This document consists of 4 printed pages.



Fig. 1 for Question 1
Resident Questionnaire

Questionnaire

Resident Number 6

Age group	Under 15	<input type="checkbox"/>	15 - 30	<input type="checkbox"/>
	31 - 60	<input checked="" type="checkbox"/>	Over 60	<input type="checkbox"/>
Gender	Male	<input checked="" type="checkbox"/>	Female	<input type="checkbox"/>

Question 1

Why did you move to the city?

To get a job with a good wage

Question 2

What is your job or occupation?

Shop owner

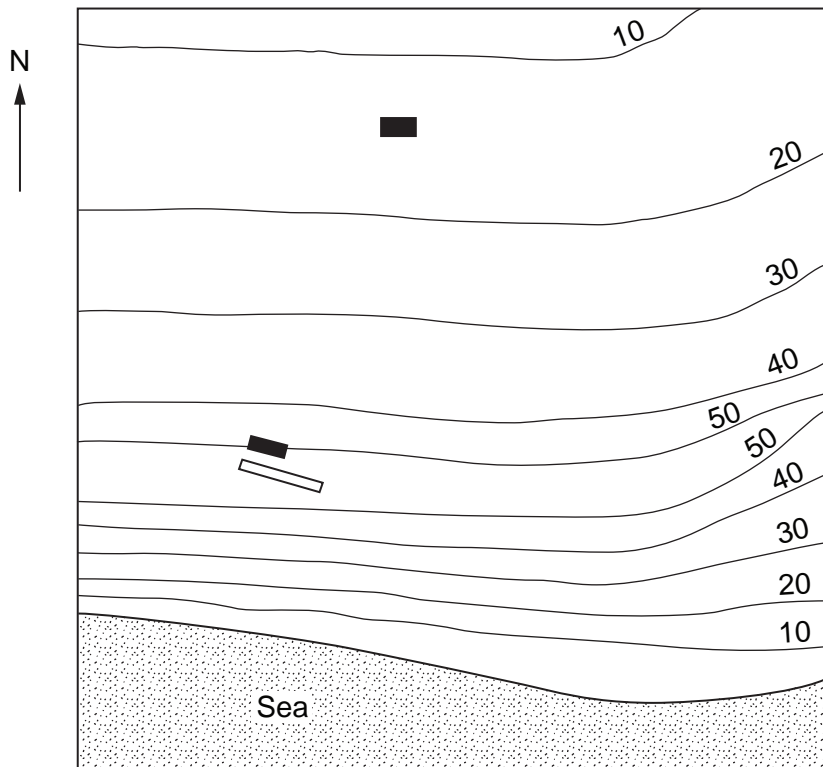
Question 3

How much do you earn in one year?

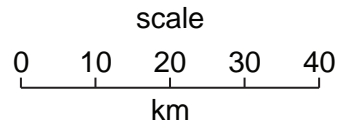
Less than 20 000 rupees	<input type="checkbox"/>
20 000 - 50 000 rupees	<input checked="" type="checkbox"/>
More than 50 000 rupees	<input type="checkbox"/>

Fig. 5 for Question 2

Sketch map to show location of school and airport



Key



20 Contour lines (metres)

■ School

▬ Airport

Fig. 6 for Question 2

Rain gauge

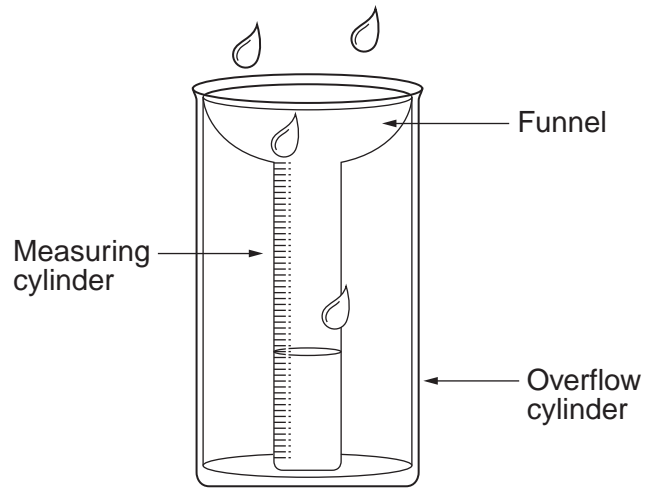


Fig. 7 for Question 2

Wind vane

