

|               |                  |      |
|---------------|------------------|------|
| Centre Number | Candidate Number | Name |
|---------------|------------------|------|

UNIVERSITY OF CAMBRIDGE INTERNATIONAL EXAMINATIONS  
International General Certificate of Secondary Education

**GEOGRAPHY**

**0460/02**

Paper 2

October/November 2005

INSERT 1

**1 hour 30 minutes**

**READ THESE INSTRUCTIONS FIRST**

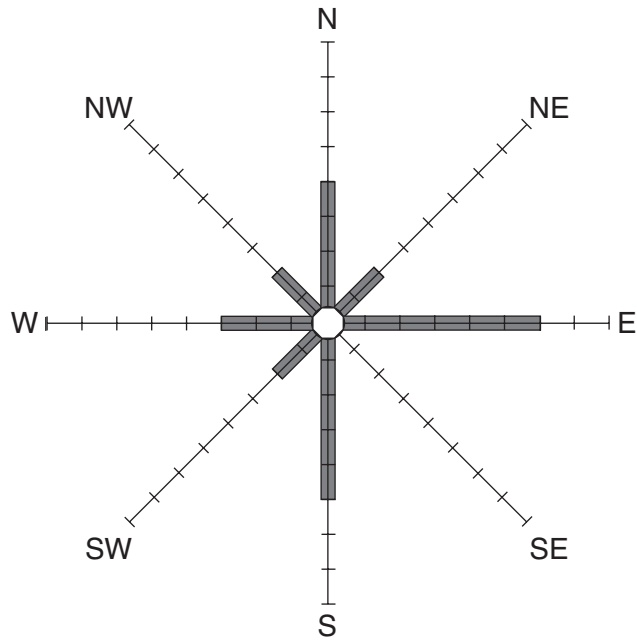
This insert contains Fig. 2 for Question 2, Fig. 3 and Table 1 for Question 3 and Fig. 6 for Question 5.

Write your Centre number, candidate number and name in the spaces provided and attach it to your answer paper/answer booklet.

This document consists of **4** printed pages.



2



Name of diagram .....

Prevailing wind .....

| Direction of wind | N | NE | E | SE | S | SW | W | NW | Calm |
|-------------------|---|----|---|----|---|----|---|----|------|
| Number of days    | 4 | 2  | 6 | 4  | 5 | 2  | 3 | 2  | 3    |

**Fig. 2 for Question 2**

Employment structure of selected countries

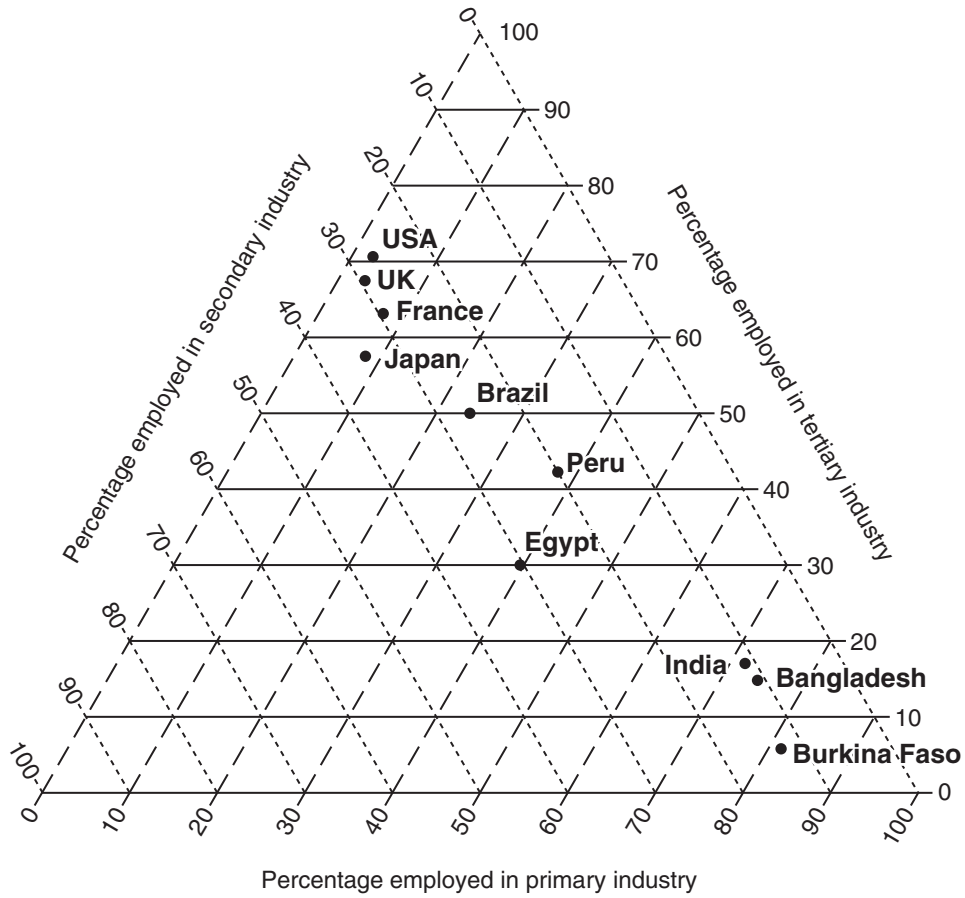
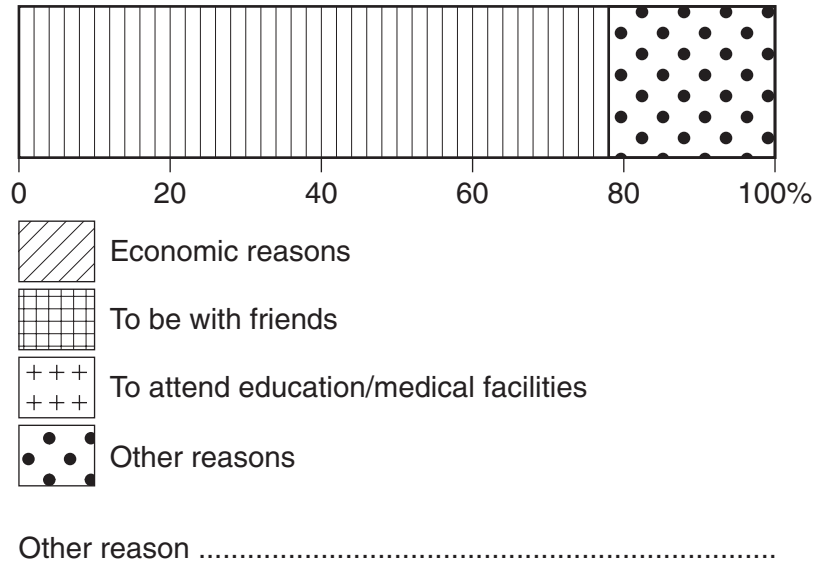


Fig. 3 for Question 3

| Country    | Percentage employment |           |          |
|------------|-----------------------|-----------|----------|
|            | Primary               | Secondary | Tertiary |
| Egypt      | 40                    | 30        | 30       |
|            | 8                     | 29        | 63       |
| Bangladesh | 74                    | 11        | 15       |

Table 1 for Question 3



**Fig. 6 for Question 5**