

Candidate Name _____

Centre Number	Candidate Number

CAMBRIDGE INTERNATIONAL EXAMINATIONS
International General Certificate of Secondary Education

GEOGRAPHY

0460/5

PAPER 5 Alternative to Coursework

INSERT

MAY/JUNE SESSION 2002

1 hour 45 minutes

INSTRUCTIONS TO CANDIDATES

This insert contains the diagrams referred to in the question paper.

Write your name, Centre number and candidate number in the spaces provided at the top of this page.

At the end of the examination, attach this insert to your answer papers.

This insert consists of 3 printed pages and 1 blank page.

Beach profile and total percentage of beach material at each sample site

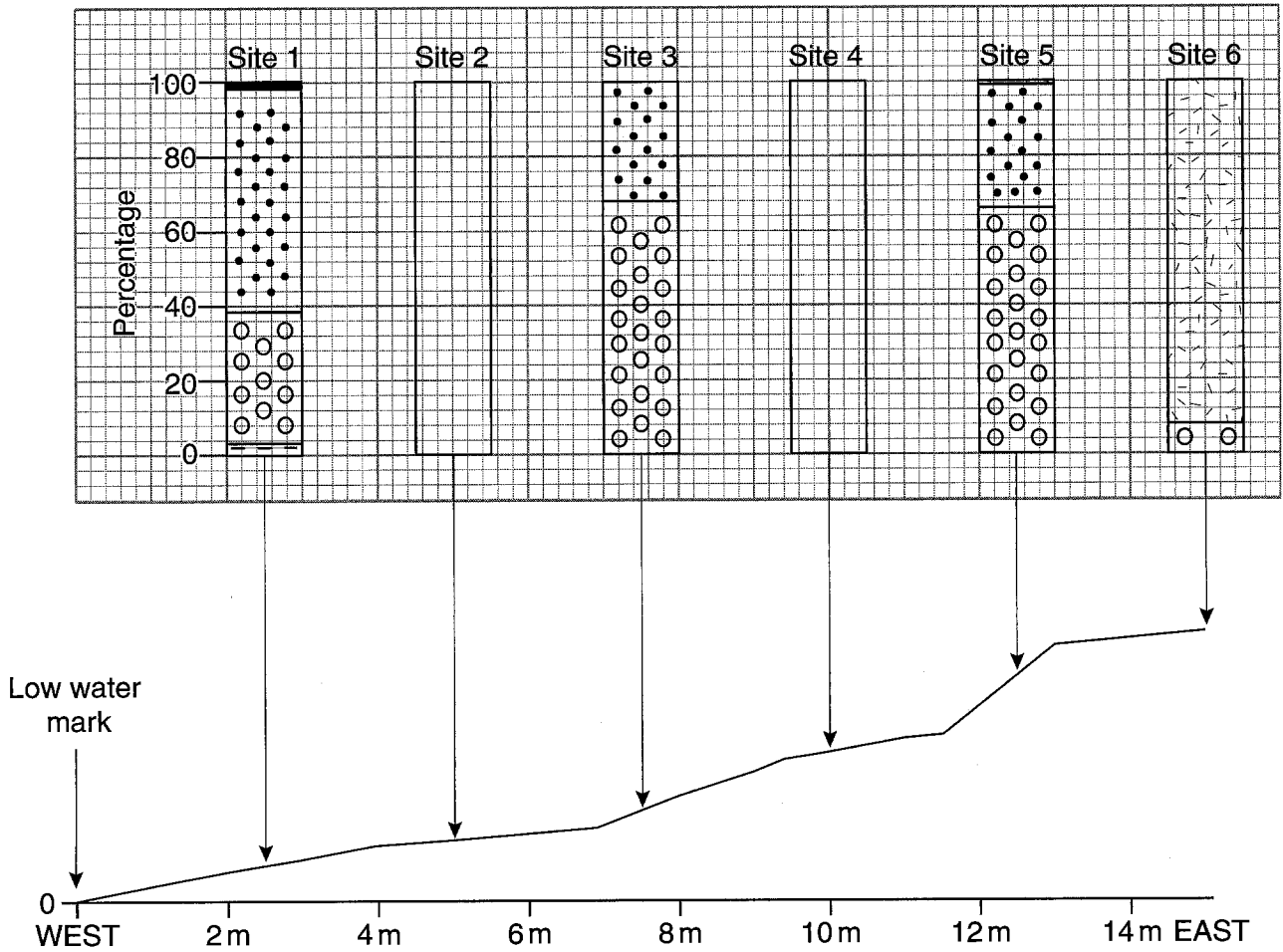







Fig. 1 for Question 1

Table 1 for Question 1

WEST		Beach Measurements					EAST
	site 1	site 2	site 3	site 4	site 5	site 6	
Distance from low water mark	2.5	5	7.5	10	12.5	15	
Slope angle (°)	10	5.5	20	10	35	8	
Beach material (%)							
 Wet sand	2	–	–	–	–	–	
 Dry sand	–	28	–	42	1	92	
 Shingle	60	26	32	10	33	–	
 Pebbles	35	46	68	48	66	8	
 Organic	3	–	–	–	–	–	

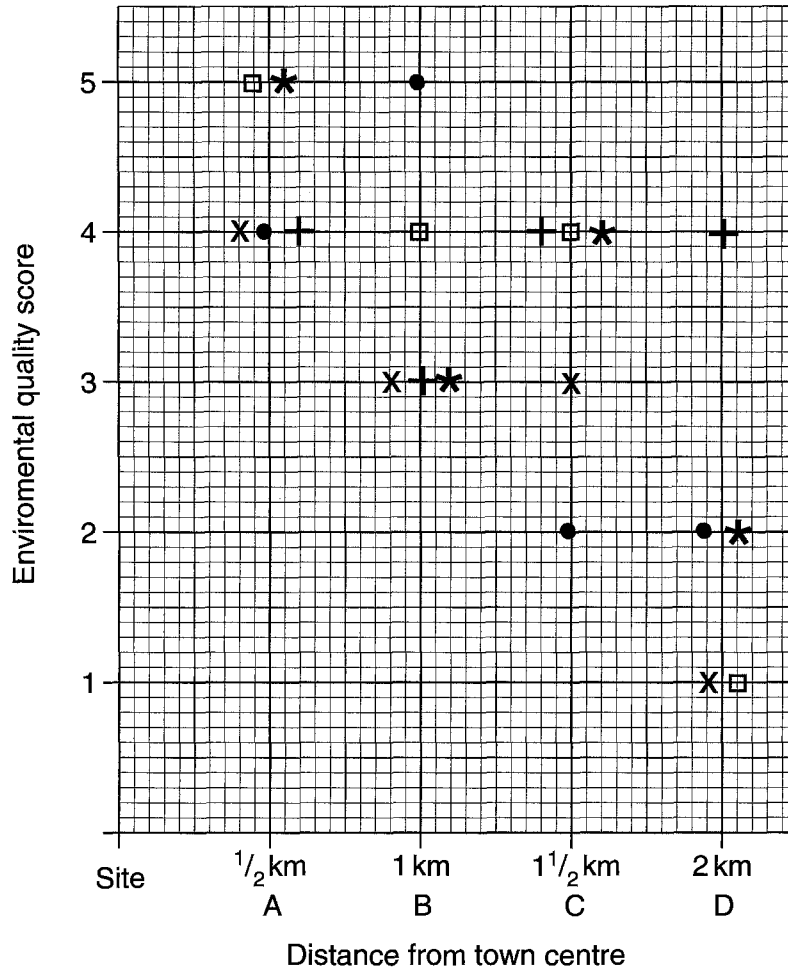


Fig. 2 for Question 2

Table 2

Scoring system for environmental quality

Clean	1 2 3 4 5	Dirty
Good condition of building	1 2 3 4 5	Poor condition of building
Quiet	1 2 3 4 5	Noisy
No litter	1 2 3 4 5	Lots of litter
No congestion	1 2 3 4 5	Congestion

Table 3

Results of scoring system

Site	A	B	C	D	Key	
	4	3	3	1	Cleanliness	X
	4	5	2	2	Building condition	•
	4	3	4	4	Noise	+
	5	4	4	1	Litter	□
	5	3	4	2	Congestion	*
Total	22	18	17	10		
Average	4.4	3.6	3.4	2.0		

BLANK PAGE