



**Cambridge International Examinations**  
Cambridge International General Certificate of Secondary Education

CANDIDATE NAME

CENTRE NUMBER

CANDIDATE NUMBER



**COMBINED SCIENCE**

**0653/31**

Paper 3 (Extended)

**October/November 2014**

**1 hour 15 minutes**

Candidates answer on the Question Paper.

No Additional Materials are required.

**READ THESE INSTRUCTIONS FIRST**

Write your Centre number, candidate number and name on all the work you hand in.

Write in dark blue or black pen.

You may use a soft pencil for any diagrams, graphs, tables or rough working.

Do not use staples, paper clips, glue or correction fluid.

**DO NOT WRITE IN ANY BARCODES.**

Answer **all** questions.

Electronic calculators may be used.

You may lose marks if you do not show your working or if you do not use appropriate units.


A copy of the Periodic Table is printed on page 24.

At the end of the examination, fasten all your work securely together.

The number of marks is given in brackets [ ] at the end of each question or part question.

This document consists of **21** printed pages and **3** blank pages.

- 1 Party lights add light and colour to festive occasions.



A set of party lights has a switch and a battery connected to five lamps in parallel.

The battery consists of four cells in series.

- (a) Draw the circuit diagram using standard circuit symbols for this set of party lights.

[2]

(b) The p.d. across the battery of four cells is 6V.

(i) Each lamp in the set is labelled 6V, 0.5A.

Find the current from the source required to light this set of lamps.

current from source = ..... A [1]

(ii) Use your answer to (i) to calculate the total resistance of the set of lights.

State the formula that you use and show your working.

formula

working

total resistance = .....  $\Omega$  [2]

(c) Most sets of party lights have lamps that are connected in parallel but some sets are connected in series.

State what happens to the set of lights if one lamp breaks when the lamps are connected in series,

.....

parallel.

.....[1]

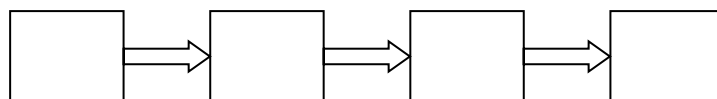
2 Gasoline and petroleum jelly are products obtained from petroleum (crude oil) following fractional distillation at an oil refinery.

(a) Statements **A** to **D** below describe the processes which occur during fractional distillation to produce gasoline.

The processes have been written in the wrong order.

<b>A</b>	gasoline vapour condenses into a liquid at its boiling point
<b>B</b>	petroleum mixture is heated in a furnace
<b>C</b>	vapour mixture enters the fractionating column
<b>D</b>	vapour mixture rises and cools

In the boxes in Fig. 2.1 write the letters **A** to **D** to show the correct order of the processes.

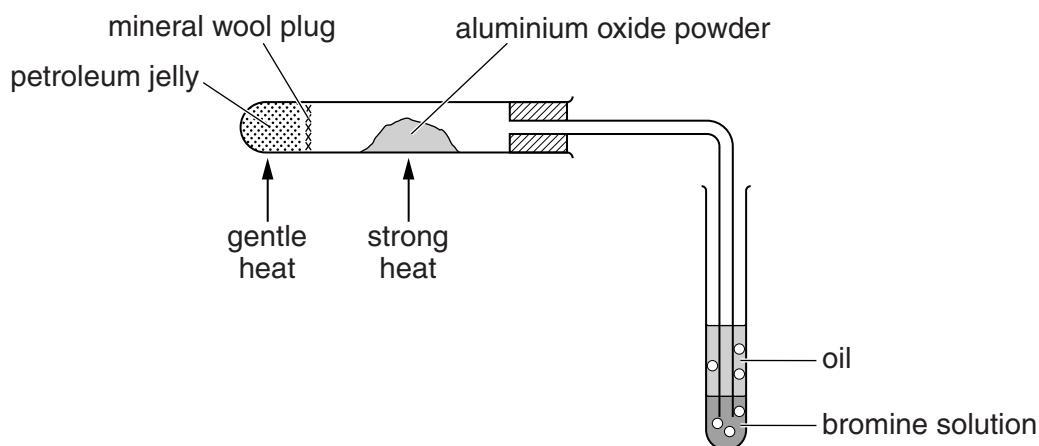


**Fig. 2.1**

(b) A process called *cracking* is also carried out at an oil refinery.

[2]

Fig. 2.2 shows the apparatus used to demonstrate the cracking of petroleum jelly.



**Fig. 2.2**

Petroleum jelly is gently heated until it melts and then boils.

The vapour passes over aluminium oxide powder, which is strongly heated.

The gas formed reacts with bromine solution.

An oil forms on top of the bromine solution.

(i) State the function of the aluminium oxide.

.....[1]

(ii) Explain, in terms of collisions of reacting particles, why the aluminium oxide is powdered.

.....  
.....  
.....[2]

(iii) List petroleum jelly, diesel oil and refinery gas in order of their boiling points.

highest boiling point .....

lowest boiling point .....

[1]

(iv) List petroleum jelly, diesel oil and refinery gas in order of the average length of their molecules.

longest molecules .....

shortest molecules .....

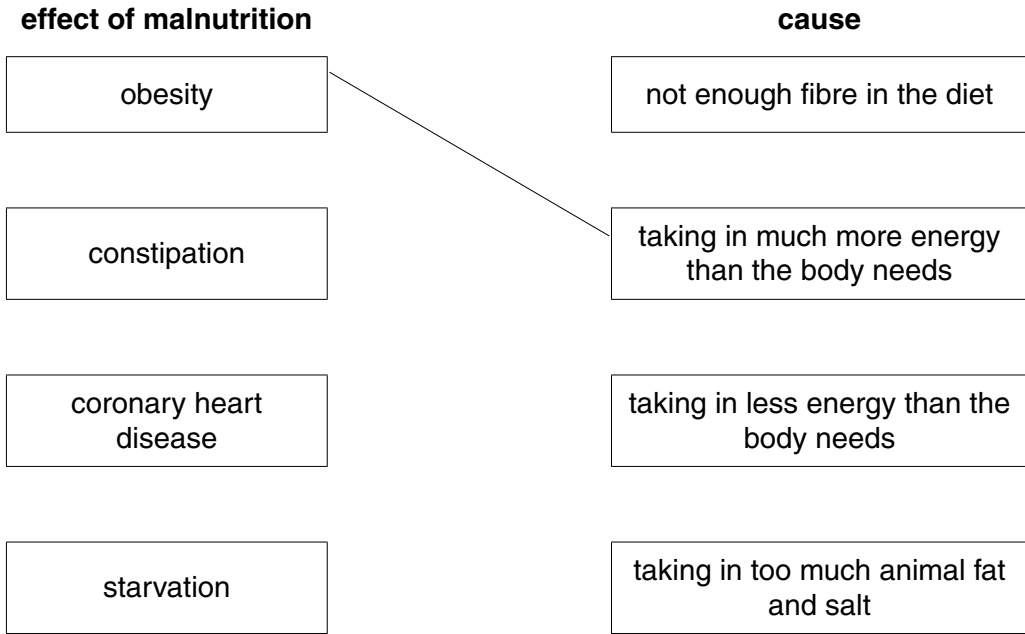
[1]

(v) State the relationship between boiling point and length of molecules.  
Explain your answer.

.....  
.....  
.....[2]

3 (a) If a person does not eat a balanced diet, they can suffer from malnutrition.

(i) Use straight lines to match the effects of malnutrition to their causes. One line is drawn for you.



[2]

(ii) A person has constipation.

Suggest **one** food that may be missing from their diet and explain how this food prevents constipation.

food .....

explanation .....

.....[2]

(iii) Obese people are extremely overweight because they are taking in more energy than they need.

Suggest **one** food an obese person should avoid eating regularly and explain your answer.

food .....

explanation .....

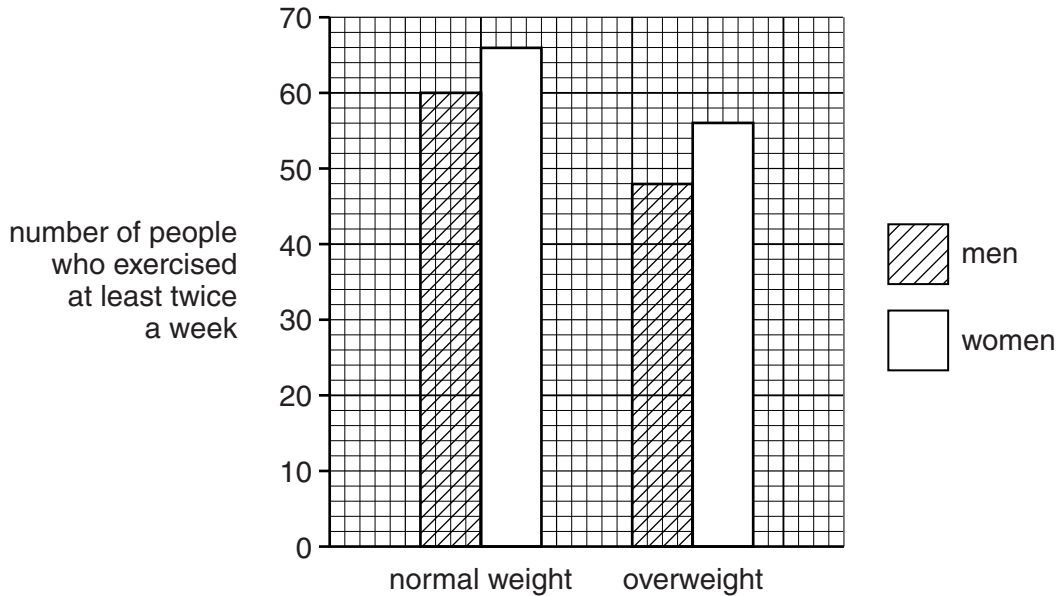
.....[1]

(b) Taking exercise is recommended for people who are overweight.

A survey was carried out to compare the amounts of exercise taken by two groups of people. The first group was made up from people of normal weight and the second group was made up from overweight people. Each group contained 100 men and women.

The survey determined how many people took exercise at least twice a week. To count as exercise, an activity had to raise a person's heart rate for at least 20 minutes.

The results are shown in Fig. 3.1.



**Fig. 3.1**

(i) Use the information in Fig. 3.1 to compare the level of exercise people did in terms of their sex,

.....  
 .....

their weight.

.....  
 ..... [2]

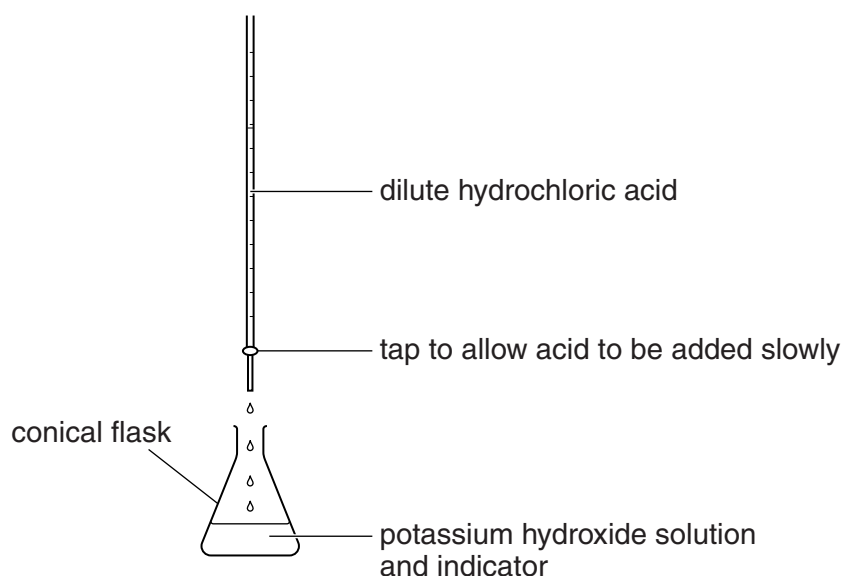
(ii) Suggest why there is not enough evidence in the survey to conclude that exercise prevents people from being overweight.

.....  
 .....

..... [2]

- 4 (a) A student investigates the neutralisation reaction between hydrochloric acid and potassium hydroxide.

Fig. 4.1 shows the apparatus she uses.



**Fig. 4.1**

She adds full range indicator (Universal Indicator) solution to the potassium hydroxide solution. Potassium hydroxide solution is alkaline.

She slowly adds some dilute hydrochloric acid to the potassium hydroxide solution until the solution in the flask is neutral.

The colour of the indicator changes as she adds the acid.

Fig. 4.2 shows how the colour of the indicator changes with pH.

pH	0	1	2	3	4	5	6	7	8	9	10	11	12	13	14
colour	RED		ORANGE			GREEN			BLUE			PURPLE			

**Fig. 4.2**

- (i) State the initial and final values of the pH of the solution in the flask.

initial .....

final .....

[1]

- (ii) State the initial and final colour of the indicator in the solution in the flask.

initial .....

final .....

[1]



(b) The reaction between hydrochloric acid and potassium hydroxide forms potassium chloride.

(i) Complete the balanced chemical equation for the reaction.



(ii) The student repeats part (a) in order to prepare a colourless sample of crystals of potassium chloride.

She changes the method described in part (a) slightly, using information obtained from the first time she carried out the experiment.

Describe the change in method and explain how she uses the results of her first experiment.

.....  
.....  
.....  
.....[3]

(c) The melting point of crystals of potassium chloride is  $770^{\circ}\text{C}$ .

Explain, in terms of the forces between particles, why potassium chloride forms crystals with a high melting point.

.....  
.....  
.....  
.....[2]

5 (a) Fig. 5.1 shows cells X and Y which were taken from different areas of the same leaf.

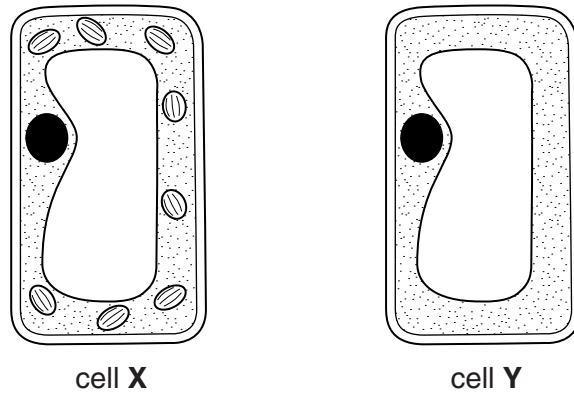


Fig. 5.1

Fig. 5.2 shows a leaf similar to the one from which these cells were taken.



Fig. 5.2

On Fig. 5.2, use label lines and the letters X and Y to show where these leaf cells came from.

Explain your answer below.

.....

.....

.....[2]

(b) The leaf in Fig. 5.2 was then tested with iodine solution for the presence of starch.

(i) On Fig. 5.3 draw the result of the starch test on this leaf.

Label the leaf with the colours that are observed in different areas.

[1]

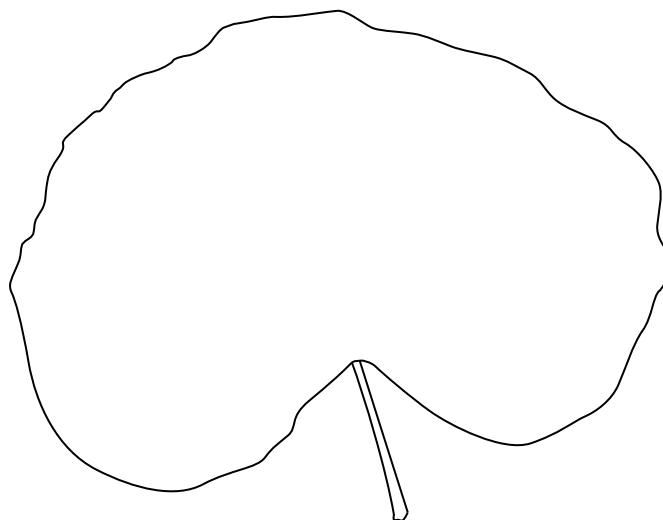


Fig. 5.3

(ii) Explain why only parts of the leaf show the presence of starch.

.....  
.....  
.....  
.....[3]

(c) In humans, starch is digested by the enzyme amylase which starts its action while food is in the mouth cavity.

Explain in detail why amylase stops working after the food is swallowed and reaches the acidic conditions in the stomach.

.....  
.....  
.....  
.....[3]

6 (a) Fig. 6.1 shows an aircraft accelerating along the airport runway.

The aircraft, fully loaded, has a total mass of 205 000 kg.

The diagram shows four forces, labelled **P**, **Q**, **R** and **S**, acting on the aircraft as it moves along the runway before taking off.

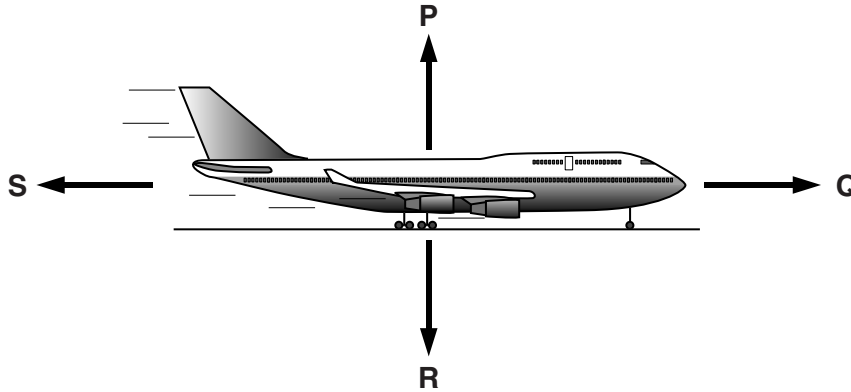


Fig. 6.1

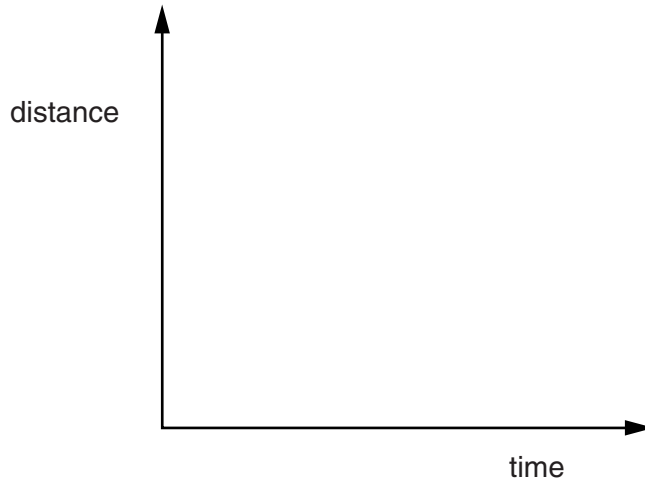
(i) State **two** forces from **P**, **Q**, **R** and **S** that are equal and opposite while the aircraft accelerates along the airport runway.

..... and ..... [1]

(ii) State which force from **P**, **Q**, **R** and **S** is the result of a gravitational field acting on the mass of the aircraft and give the name of this force.

.....  
 .....[2]

- (iii) On the axes below, sketch a distance/time graph for the aircraft as it moves along the runway from rest to take-off.



[1]

- (b) The aircraft takes off and climbs to a height of 5000 m.

The chemical energy in the aircraft's fuel is transferred to the aircraft as it takes off and climbs.

- (i) State **two** useful forms of energy gained by the aircraft as a result of this transfer.

..... and ..... [1]

- (ii) The forms of energy in (b)(i) add up to less energy than the energy transferred from the fuel.

The principle of energy conservation applies to the energy transferred from the fuel.

State what happens to the remainder of the energy from the fuel.

.....[1]

- (c) When the aircraft levels out at a height of 5000m, it has burned some fuel and now has a reduced total mass of 200 000 kg.

The aircraft flies at constant speed of 720 km/hr.

- (i) Calculate the speed of the aircraft in metres per second.

speed = ..... m/s [1]

- (ii) Use your answer from (c)(i) to calculate the kinetic energy of the aircraft.

State the formula you use and show your working.

formula

working

kinetic energy = ..... J [2]

7 (a) Fig. 7.1 shows the carbon cycle.

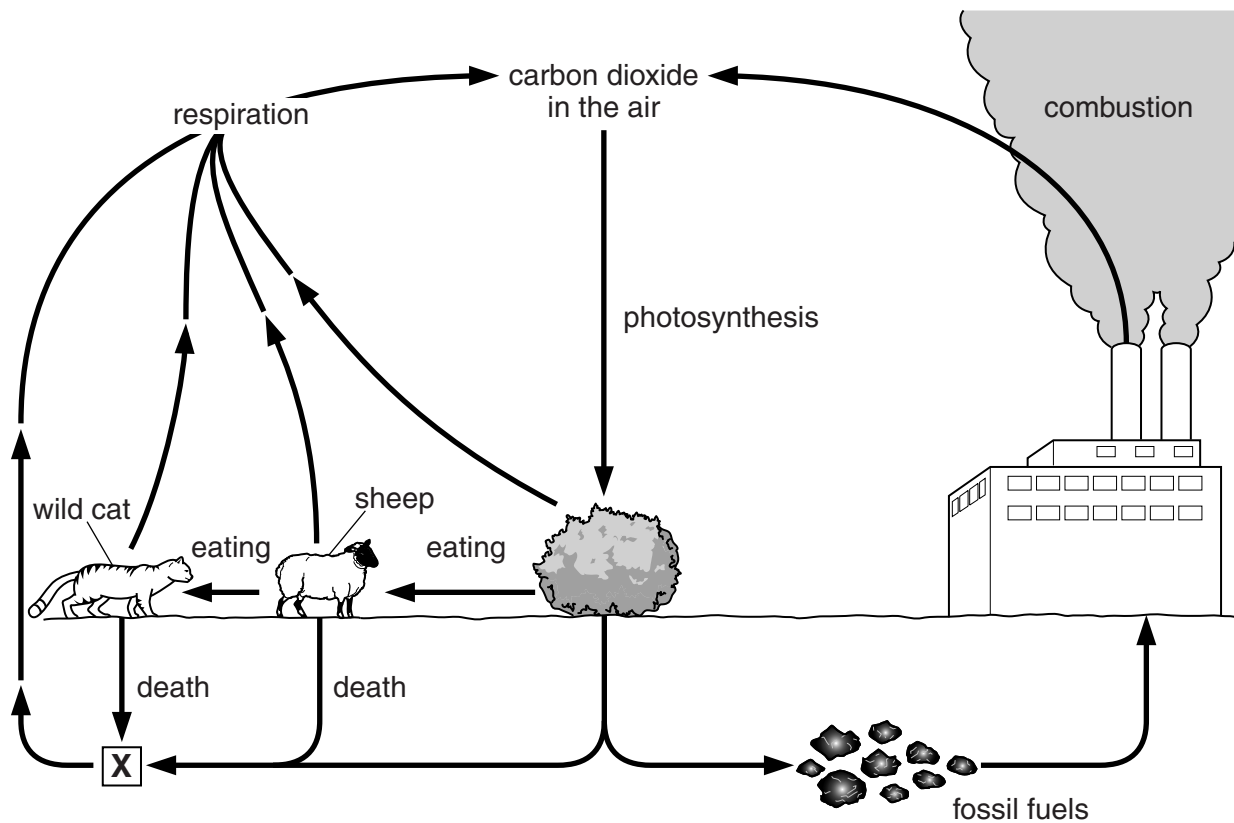


Fig. 7.1

(i) The sheep eats a plant leaf. A carbon atom from the starch in this leaf enters the air shortly after the leaf is eaten.

Describe a possible pathway taken by the carbon atom. Explain your answer fully.

.....  
 .....  
 .....  
 .....  
 .....  
 .....[3]

(ii) The organisms labelled X are found in the soil.

Describe in detail the role these organisms play in the carbon cycle.

.....  
 .....  
 .....  
 .....  
 .....[3]

(b) (i) With reference to Fig. 7.1 and your own knowledge, state **two** ways in which the burning of fossil fuels can change the composition of the gases in the atmosphere.

1 .....

2 .....[2]

(ii) Suggest **one** way in which the environment can be harmed by one of the changes you have stated in part (b)(i).

.....

.....[1]



8 The Sun emits many different frequencies of electromagnetic radiation including visible light, infra-red, ultra-violet and X-rays.

(a) (i) State the meaning of the term *frequency*.

.....  
 .....[1]


(ii) Complete Table 8.1 to show the types of electromagnetic radiation emitted by the Sun.

**Table 8.1**

highest frequency			lowest frequency			
gamma radiation			visible light		microwaves	radio waves

[2]

(b) After rain has fallen, puddles of water are left on the ground. When the Sun shines, it warms the air and the water in the puddles and dries the ground.



(i) Complete the following sentences about the forces and distances between molecules, using words or phrases.

When the Sun warms the water in a puddle on the ground, the water expands because the water molecules .....

When the water expands, the forces between the molecules .....

As the air above the puddle gets warmer, the molecules in the air move .....

[3]

(ii) Use your answers to (b)(i) to explain why the Sun dries the ground.

.....  
.....  
.....[2]

(c) The Sun produces sound waves as well as electromagnetic radiation.

(i) Explain why we cannot hear any sound from the Sun.

.....  
.....[2]

(ii) It takes eight minutes for the visible light emitted from the Sun to travel to the Earth.

Suggest how long it would take for a burst of X-rays emitted by the Sun to travel to the Earth. Give a reason for your answer.

.....  
.....[1]

9 (a) The Thermite reaction occurs between aluminium and iron oxide powders.

It is an example of a redox reaction.

Fig. 9.1 shows how a furnace in which the Thermite reaction is occurring can be used to repair a broken steel rail.

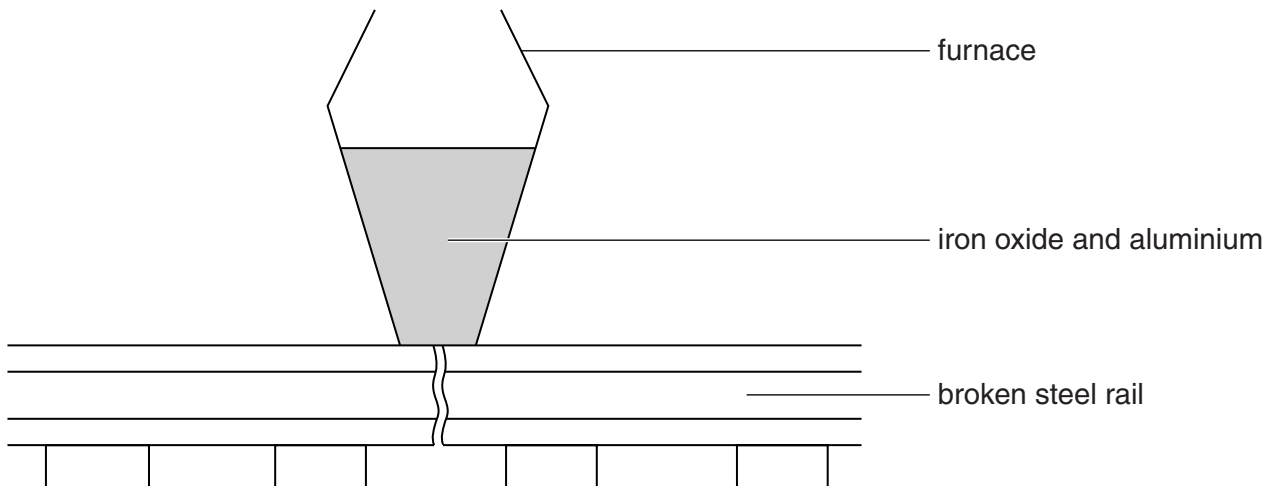



Fig. 9.1

The Thermite reaction produces molten iron that runs down into the broken rail and welds (joins) the ends together.

(i) State the type of chemical reaction that causes the temperature to increase.  
 .....[1]

(ii) State the energy transfer occurring during the reaction.  
 ..... → ..... [1]

(iii) The word equation for the Thermite reaction is shown below.



Explain why the Thermite reaction is an example of a redox reaction.

.....  
 .....  
 .....[2]

(iv) Aluminium ore contains aluminium oxide.

A student suggests that metallic iron could be used to extract aluminium from its ore.

State whether or not this would work.

Explain your answer by referring to the information contained in part (a)(iii).

.....

.....

.....[2]

(b) In industry, aluminium is extracted from aluminium oxide by electrolysis.

Fig. 9.2 shows the apparatus used.

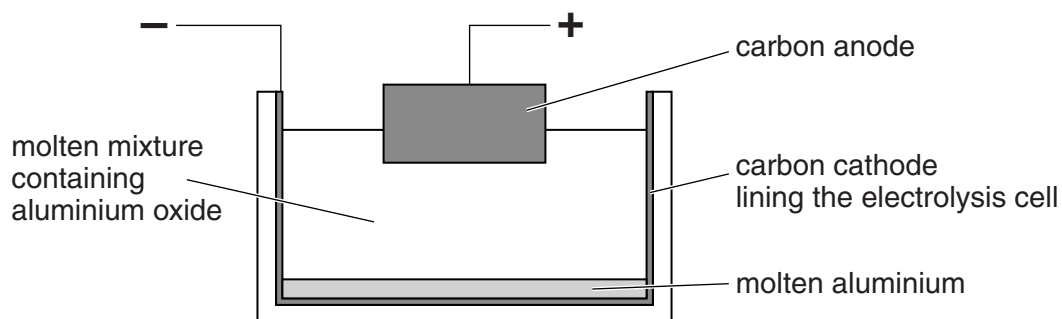


Fig. 9.2

(i) Aluminium is deposited on the cathode.

Describe, by referring to the movement of ions and electrons, how these aluminium atoms are formed.

.....

.....

.....[2]

(ii) Name the other substance formed by this electrolysis process.

.....[1]







**DATA SHEET**  
**The Periodic Table of the Elements**

Group		I	II	III	IV	V	VI	VII	0
		1 <b>H</b> Hydrogen 1							4 <b>He</b> Helium 2
7 <b>Li</b> Lithium 3	9 <b>Be</b> Beryllium 4			11 <b>B</b> Boron 5	12 <b>C</b> Carbon 6	14 <b>N</b> Nitrogen 7	16 <b>O</b> Oxygen 8	19 <b>F</b> Fluorine 9	20 <b>Ne</b> Neon 10
23 <b>Na</b> Sodium 11	24 <b>Mg</b> Magnesium 12			27 <b>Al</b> Aluminium 13	28 <b>Si</b> Silicon 14	31 <b>P</b> Phosphorus 15	32 <b>S</b> Sulfur 16	35.5 <b>Cl</b> Chlorine 17	40 <b>Ar</b> Argon 18
39 <b>K</b> Potassium 19	40 <b>Ca</b> Calcium 20			59 <b>Co</b> Cobalt 27	56 <b>Fe</b> Iron 26	59 <b>Ni</b> Nickel 28	64 <b>Cu</b> Copper 29	79 <b>Se</b> Selenium 34	84 <b>Kr</b> Krypton 36
85 <b>Rb</b> Rubidium 37	88 <b>Sr</b> Strontium 38			91 <b>Zr</b> Zirconium 40	101 <b>Ru</b> Ruthenium 44	106 <b>Pd</b> Palladium 46	108 <b>Ag</b> Silver 47	127 <b>I</b> Iodine 53	131 <b>Xe</b> Xenon 54
133 <b>Cs</b> Caesium 55	137 <b>Ba</b> Barium 56			181 <b>Ta</b> Tantalum 73	190 <b>Os</b> Osmium 76	195 <b>Pt</b> Platinum 78	197 <b>Au</b> Gold 79	210 <b>At</b> Astatine 85	222 <b>Rn</b> Radon 86
223 <b>Fr</b> Francium 87	226 <b>Ra</b> Radium 88			204 <b>Tl</b> Thallium 81	201 <b>Hg</b> Mercury 80	209 <b>Pb</b> Lead 82	209 <b>Bi</b> Bismuth 83		
				140 <b>Ce</b> Cerium 58	147 <b>Pm</b> Promethium 61	152 <b>Eu</b> Europium 63	157 <b>Gd</b> Gadolinium 64	162 <b>Dy</b> Dysprosium 66	165 <b>Ho</b> Holmium 67
				232 <b>Th</b> Thorium 90	237 <b>Np</b> Neptunium 93	243 <b>Am</b> Americium 95	247 <b>Cm</b> Curium 96	251 <b>Cf</b> Californium 98	252 <b>Es</b> Einsteinium 99
				141 <b>Pr</b> Praseodymium 59	144 <b>Nd</b> Neodymium 60	150 <b>Sm</b> Samarium 62	157 <b>Gd</b> Gadolinium 64	162 <b>Dy</b> Dysprosium 66	167 <b>Er</b> Erbium 68
				231 <b>Pa</b> Protactinium 91	238 <b>U</b> Uranium 92	244 <b>Pu</b> Plutonium 94	247 <b>Cm</b> Curium 96	251 <b>Cf</b> Californium 98	257 <b>Fm</b> Fermium 100
				142 <b>Sm</b> Samarium 62	147 <b>Pm</b> Promethium 61	152 <b>Eu</b> Europium 63	157 <b>Gd</b> Gadolinium 64	162 <b>Dy</b> Dysprosium 66	167 <b>Er</b> Erbium 68
				143 <b>Eu</b> Europium 63	148 <b>Gd</b> Gadolinium 64	154 <b>Tb</b> Terbium 65	159 <b>Dy</b> Dysprosium 66	164 <b>Ho</b> Holmium 67	169 <b>Er</b> Erbium 68
				144 <b>Sm</b> Samarium 62	149 <b>Gd</b> Gadolinium 64	155 <b>Tb</b> Terbium 65	160 <b>Dy</b> Dysprosium 66	165 <b>Ho</b> Holmium 67	170 <b>Er</b> Erbium 68
				145 <b>Eu</b> Europium 63	150 <b>Gd</b> Gadolinium 64	156 <b>Tb</b> Terbium 65	161 <b>Dy</b> Dysprosium 66	166 <b>Ho</b> Holmium 67	171 <b>Er</b> Erbium 68
				146 <b>Eu</b> Europium 63	151 <b>Gd</b> Gadolinium 64	157 <b>Tb</b> Terbium 65	162 <b>Dy</b> Dysprosium 66	167 <b>Ho</b> Holmium 67	172 <b>Er</b> Erbium 68
				147 <b>Eu</b> Europium 63	152 <b>Gd</b> Gadolinium 64	158 <b>Tb</b> Terbium 65	163 <b>Dy</b> Dysprosium 66	168 <b>Ho</b> Holmium 67	173 <b>Er</b> Erbium 68
				148 <b>Eu</b> Europium 63	153 <b>Gd</b> Gadolinium 64	159 <b>Tb</b> Terbium 65	164 <b>Dy</b> Dysprosium 66	169 <b>Ho</b> Holmium 67	174 <b>Er</b> Erbium 68
				149 <b>Eu</b> Europium 63	154 <b>Gd</b> Gadolinium 64	160 <b>Tb</b> Terbium 65	165 <b>Dy</b> Dysprosium 66	170 <b>Er</b> Erbium 68	175 <b>Lu</b> Lutetium 71
				150 <b>Eu</b> Europium 63	155 <b>Gd</b> Gadolinium 64	161 <b>Tb</b> Terbium 65	166 <b>Dy</b> Dysprosium 66	171 <b>Er</b> Erbium 68	176 <b>Lu</b> Lutetium 71
				151 <b>Eu</b> Europium 63	156 <b>Gd</b> Gadolinium 64	162 <b>Tb</b> Terbium 65	167 <b>Dy</b> Dysprosium 66	172 <b>Er</b> Erbium 68	177 <b>Lu</b> Lutetium 71
				152 <b>Eu</b> Europium 63	157 <b>Gd</b> Gadolinium 64	163 <b>Tb</b> Terbium 65	168 <b>Dy</b> Dysprosium 66	173 <b>Er</b> Erbium 68	178 <b>Lu</b> Lutetium 71
				153 <b>Eu</b> Europium 63	158 <b>Gd</b> Gadolinium 64	164 <b>Tb</b> Terbium 65	169 <b>Dy</b> Dysprosium 66	174 <b>Er</b> Erbium 68	179 <b>Lu</b> Lutetium 71
				154 <b>Eu</b> Europium 63	159 <b>Gd</b> Gadolinium 64	165 <b>Tb</b> Terbium 65	170 <b>Dy</b> Dysprosium 66	175 <b>Er</b> Erbium 68	180 <b>Lu</b> Lutetium 71
				155 <b>Eu</b> Europium 63	160 <b>Gd</b> Gadolinium 64	166 <b>Tb</b> Terbium 65	171 <b>Dy</b> Dysprosium 66	176 <b>Er</b> Erbium 68	181 <b>Lu</b> Lutetium 71
				156 <b>Eu</b> Europium 63	161 <b>Gd</b> Gadolinium 64	167 <b>Tb</b> Terbium 65	172 <b>Dy</b> Dysprosium 66	177 <b>Er</b> Erbium 68	182 <b>Lu</b> Lutetium 71
				157 <b>Eu</b> Europium 63	162 <b>Gd</b> Gadolinium 64	168 <b>Tb</b> Terbium 65	173 <b>Dy</b> Dysprosium 66	178 <b>Er</b> Erbium 68	183 <b>Lu</b> Lutetium 71
				158 <b>Eu</b> Europium 63	163 <b>Gd</b> Gadolinium 64	169 <b>Tb</b> Terbium 65	174 <b>Dy</b> Dysprosium 66	179 <b>Er</b> Erbium 68	184 <b>Lu</b> Lutetium 71
				159 <b>Eu</b> Europium 63	164 <b>Gd</b> Gadolinium 64	170 <b>Tb</b> Terbium 65	175 <b>Dy</b> Dysprosium 66	180 <b>Er</b> Erbium 68	185 <b>Lu</b> Lutetium 71
				160 <b>Eu</b> Europium 63	165 <b>Gd</b> Gadolinium 64	171 <b>Tb</b> Terbium 65	176 <b>Dy</b> Dysprosium 66	181 <b>Er</b> Erbium 68	186 <b>Lu</b> Lutetium 71
				161 <b>Eu</b> Europium 63	166 <b>Gd</b> Gadolinium 64	172 <b>Tb</b> Terbium 65	177 <b>Dy</b> Dysprosium 66	182 <b>Er</b> Erbium 68	187 <b>Lu</b> Lutetium 71
				162 <b>Eu</b> Europium 63	167 <b>Gd</b> Gadolinium 64	173 <b>Tb</b> Terbium 65	178 <b>Dy</b> Dysprosium 66	183 <b>Er</b> Erbium 68	188 <b>Lu</b> Lutetium 71
				163 <b>Eu</b> Europium 63	168 <b>Gd</b> Gadolinium 64	174 <b>Tb</b> Terbium 65	179 <b>Dy</b> Dysprosium 66	184 <b>Er</b> Erbium 68	189 <b>Lu</b> Lutetium 71
				164 <b>Eu</b> Europium 63	169 <b>Gd</b> Gadolinium 64	175 <b>Tb</b> Terbium 65	180 <b>Dy</b> Dysprosium 66	185 <b>Er</b> Erbium 68	190 <b>Lu</b> Lutetium 71
				165 <b>Eu</b> Europium 63	170 <b>Gd</b> Gadolinium 64	176 <b>Tb</b> Terbium 65	181 <b>Dy</b> Dysprosium 66	186 <b>Er</b> Erbium 68	191 <b>Lu</b> Lutetium 71
				166 <b>Eu</b> Europium 63	171 <b>Gd</b> Gadolinium 64	177 <b>Tb</b> Terbium 65	182 <b>Dy</b> Dysprosium 66	187 <b>Er</b> Erbium 68	192 <b>Lu</b> Lutetium 71
				167 <b>Eu</b> Europium 63	172 <b>Gd</b> Gadolinium 64	178 <b>Tb</b> Terbium 65	183 <b>Dy</b> Dysprosium 66	188 <b>Er</b> Erbium 68	193 <b>Lu</b> Lutetium 71
				168 <b>Eu</b> Europium 63	173 <b>Gd</b> Gadolinium 64	179 <b>Tb</b> Terbium 65	184 <b>Dy</b> Dysprosium 66	189 <b>Er</b> Erbium 68	194 <b>Lu</b> Lutetium 71
				169 <b>Eu</b> Europium 63	174 <b>Gd</b> Gadolinium 64	180 <b>Tb</b> Terbium 65	185 <b>Dy</b> Dysprosium 66	190 <b>Er</b> Erbium 68	195 <b>Lu</b> Lutetium 71
				170 <b>Eu</b> Europium 63	175 <b>Gd</b> Gadolinium 64	181 <b>Tb</b> Terbium 65	186 <b>Dy</b> Dysprosium 66	191 <b>Er</b> Erbium 68	196 <b>Lu</b> Lutetium 71
				171 <b>Eu</b> Europium 63	176 <b>Gd</b> Gadolinium 64	182 <b>Tb</b> Terbium 65	187 <b>Dy</b> Dysprosium 66	192 <b>Er</b> Erbium 68	197 <b>Lu</b> Lutetium 71
				172 <b>Eu</b> Europium 63	177 <b>Gd</b> Gadolinium 64	183 <b>Tb</b> Terbium 65	188 <b>Dy</b> Dysprosium 66	193 <b>Er</b> Erbium 68	198 <b>Lu</b> Lutetium 71
				173 <b>Eu</b> Europium 63	178 <b>Gd</b> Gadolinium 64	184 <b>Tb</b> Terbium 65	189 <b>Dy</b> Dysprosium 66	194 <b>Er</b> Erbium 68	199 <b>Lu</b> Lutetium 71
				174 <b>Eu</b> Europium 63	179 <b>Gd</b> Gadolinium 64	185 <b>Tb</b> Terbium 65	190 <b>Dy</b> Dysprosium 66	195 <b>Er</b> Erbium 68	200 <b>Lu</b> Lutetium 71
				175 <b>Eu</b> Europium 63	180 <b>Gd</b> Gadolinium 64	186 <b>Tb</b> Terbium 65	191 <b>Dy</b> Dysprosium 66	196 <b>Er</b> Erbium 68	201 <b>Lu</b> Lutetium 71
				176 <b>Eu</b> Europium 63	181 <b>Gd</b> Gadolinium 64	187 <b>Tb</b> Terbium 65	192 <b>Dy</b> Dysprosium 66	197 <b>Er</b> Erbium 68	202 <b>Lu</b> Lutetium 71
				177 <b>Eu</b> Europium 63	182 <b>Gd</b> Gadolinium 64	188 <b>Tb</b> Terbium 65	193 <b>Dy</b> Dysprosium 66	198 <b>Er</b> Erbium 68	203 <b>Lu</b> Lutetium 71
				178 <b>Eu</b> Europium 63	183 <b>Gd</b> Gadolinium 64	189 <b>Tb</b> Terbium 65	194 <b>Dy</b> Dysprosium 66	199 <b>Er</b> Erbium 68	204 <b>Lu</b> Lutetium 71
				179 <b>Eu</b> Europium 63	184 <b>Gd</b> Gadolinium 64	190 <b>Tb</b> Terbium 65	195 <b>Dy</b> Dysprosium 66	200 <b>Er</b> Erbium 68	205 <b>Lu</b> Lutetium 71
				180 <b>Eu</b> Europium 63	185 <b>Gd</b> Gadolinium 64	191 <b>Tb</b> Terbium 65	196 <b>Dy</b> Dysprosium 66	201 <b>Er</b> Erbium 68	206 <b>Lu</b> Lutetium 71
				181 <b>Eu</b> Europium 63	186 <b>Gd</b> Gadolinium 64	192 <b>Tb</b> Terbium 65	197 <b>Dy</b> Dysprosium 66	202 <b>Er</b> Erbium 68	207 <b>Lu</b> Lutetium 71
				182 <b>Eu</b> Europium 63	187 <b>Gd</b> Gadolinium 64	193 <b>Tb</b> Terbium 65	198 <b>Dy</b> Dysprosium 66	203 <b>Er</b> Erbium 68	208 <b>Lu</b> Lutetium 71
				183 <b>Eu</b> Europium 63	188 <b>Gd</b> Gadolinium 64	194 <b>Tb</b> Terbium 65	199 <b>Dy</b> Dysprosium 66	204 <b>Er</b> Erbium 68	209 <b>Lu</b> Lutetium 71
				184 <b>Eu</b> Europium 63	189 <b>Gd</b> Gadolinium 64	195 <b>Tb</b> Terbium 65	200 <b>Dy</b> Dysprosium 66	205 <b>Er</b> Erbium 68	210 <b>Lu</b> Lutetium 71
				185 <b>Eu</b> Europium 63	190 <b>Gd</b> Gadolinium 64	196 <b>Tb</b> Terbium 			