



UNIVERSITY OF CAMBRIDGE INTERNATIONAL EXAMINATIONS
International General Certificate of Secondary Education

CANDIDATE
NAME

CENTRE
NUMBER

--	--	--	--	--

CANDIDATE
NUMBER

--	--	--	--

COMBINED SCIENCE

0653/52

Paper 5 Practical Test

October/November 2010

1 hour 30 minutes

Candidates answer on the Question Paper.

Additional Materials: As listed in Instructions to Supervisors

READ THESE INSTRUCTIONS FIRST

Write your Centre number, candidate number and name on all the work you hand in.

Write in dark blue or black pen.

You may use a pencil for any diagrams, graphs or rough working.

Do not use staples, paper clips, highlighters, glue or correction fluid.

DO **NOT** WRITE IN ANY BARCODES.

Answer **all** questions.

Chemistry practical notes for this paper are printed on page 12.

At the end of the examination, fasten all your work securely together.

The number of marks is given in brackets [] at the end of each question or part question.

For Examiner's Use	
1	
2	
3	
Total	

This document consists of **10** printed pages and **2** blank pages.

1 (a) (i) Some fruit juices contain protease enzymes.

You will be investigating fruit juices to find if they digest proteins. You will find out if a sample of protein loses mass after immersion in the juice.

- Label four pieces of paper towel **1**, **2**, **3** and **4**.
- Put four large test-tubes into a test-tube rack or beaker. Label them **1**, **2**, **3** and **4**.
- Divide the solid protein into four pieces, each about the same size.
- Weigh the first piece of protein and record the mass in Table 1.1.
- Cut this piece of protein into approximately 10 pieces. Put the pieces into the tube **1**.
- Treat the remaining three pieces of protein in the same way for tubes **2**, **3** and **4**.

Table 1.1

test-tube number	1	2	3	4
mass of protein /g				
type of juice				

- Measure 20cm³ of **juice 1** and add this to tube **1**. Record the type of fruit juice in Table 1.1.
- Add 20cm³ of **juice 2** to tube **2**, recording the type of fruit juice in Table 1.1.
- Repeat this with the remaining two fruit juices, **juice 3** and **juice 4**. [2]

- (ii) Using the hot water provided make a water bath with a temperature of 50 °C in a large beaker. Stand all four tubes in this for 10 minutes. Monitor the temperature during this time. If the temperature falls below 40 °C add more hot water to keep the temperature between 40 °C and 50 °C.

During this time create a table for the results of the four tubes. This should include the **type of juice**, the **mass of protein at the start**, the **mass of protein at the end**, and the **change in mass**.

[2]

(b) After 10 minutes do the following.

- Carefully pour off and discard the fruit juice from tube **1** into a beaker. Place all the pieces of protein on towel no. **1** and blot the protein dry.
- Weigh all the pieces of protein together and record the mass in the table you have made.
- Repeat this with the protein in tubes **2, 3** and **4**.

Calculate the change in mass for the protein from each tube and enter in your table. [4]

(c) Which fruit juice showed the greatest protease activity?

Explain your answer.

fruit juice

explanation

..... [2]

2 You are going to measure the refractive index of a semi-circular block by two different methods.

- (a) (i) Place the semi-circular block on the grid, Fig. 2.3, with its curved edge downwards as shown in Fig. 2.1.

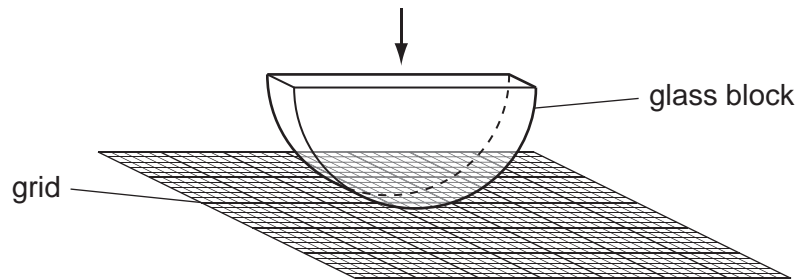


Fig. 2.1

Look through the flat side of the block at the grid (see Fig. 2.2). Place a ruler alongside the top edge of the grid and measure the length of the clear image of the grid, d_1 , that you can see in the block. Do **not** count the number of grid marks.

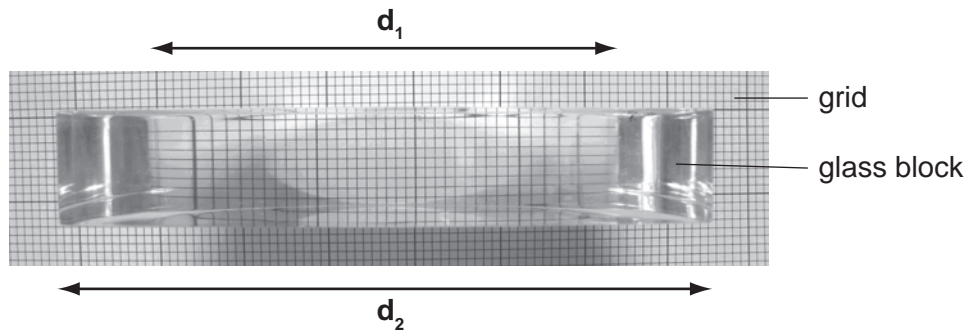


Fig. 2.2




Fig. 2.3

Record the length d_1 .

$d_1 =$ mm [1]

- (ii) Measure and record the length of the flat side of the block which you have looked through, d_2 , as shown in Fig. 2.2.

$$d_2 = \dots\dots\dots \text{mm} \quad [1]$$

- (iii) Calculate the value of $\frac{d_2}{d_1}$. This is the refractive index of the block.

$$\frac{d_2}{d_1} = \dots\dots\dots [1]$$

- (b) (i) Now place the semi-circular block flat on a piece of plain paper and draw round it.

Remove the block; mark the centre point of the flat side.

Draw a normal at this point and construct incident rays with incident angles, i , of 0° , 20° , 30° and 40° as shown in Fig. 2.4.

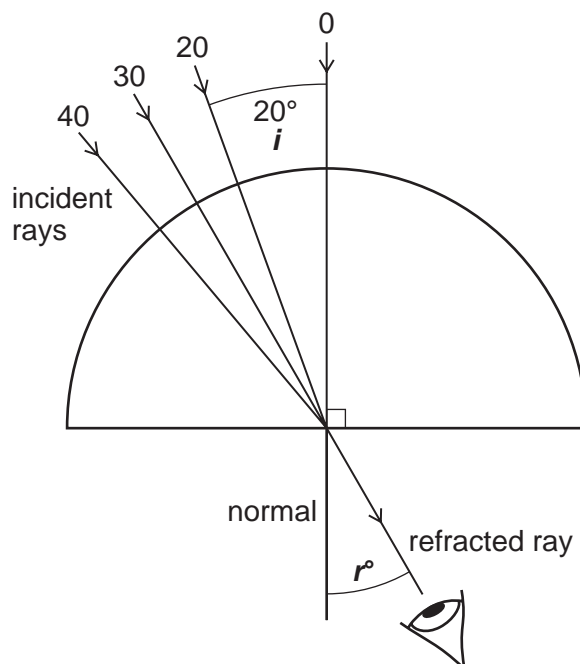


Fig. 2.4

- Replace the block on the paper.
- Place 2 pins about 4 cm apart on the incident ray you have drawn with an angle, $i = 20^\circ$.
- Look through the block from the other side and place 2 more pins (on the refracted ray) in line with the pins on the incident ray.
- Remove the block, draw the refracted ray and measure the angle of refraction, r° . Record the value of r° in Table 2.1.
- Repeat the procedure with the incident rays with $i = 30^\circ$ and 40° to find the other angles of refraction.

Table 2.1

i°	sine i	r°	sine r
0	0.00	0	0.00
20	0.34		
30	0.50		
40	0.64		

[3]

- (ii) Using the Table 2.2 below, or using a calculator, find the sine value for each angle of refraction, r° , and record each sine r value next to its angle in Table 2.1. The sine values for the angles of incidence, i , have been entered in the table for you already.

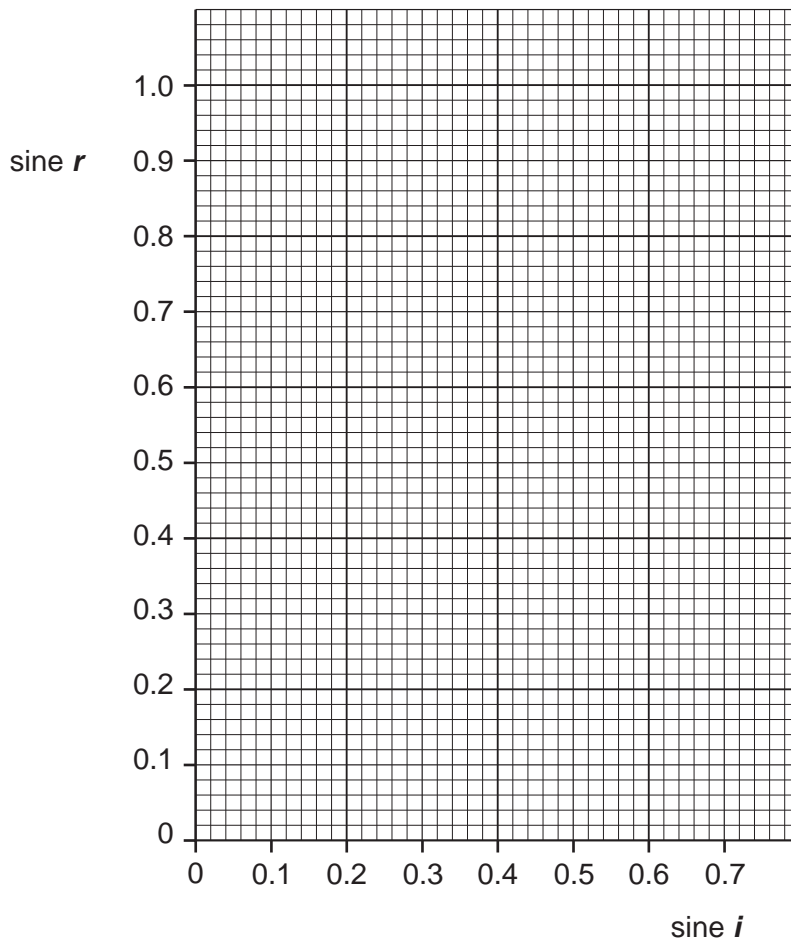
Table 2.2

angle/ $^\circ$	sine	angle/ $^\circ$	sine	angle/ $^\circ$	sine
0	0.00	30	0.50	49	0.75
10	0.17	31	0.52	50	0.77
11	0.19	32	0.53	51	0.78
12	0.21	33	0.54	52	0.79
13	0.22	34	0.56		
14	0.24	35	0.57	70	0.94
15	0.26	36	0.59	71	0.95
16	0.28	40	0.64	72	0.95
17	0.29	45	0.71	73	0.96
18	0.31	46	0.72	74	0.96
19	0.33	47	0.73	75	0.97
20	0.34	48	0.74	76	0.97

[1]

- (c) (i) Plot a graph on the grid below of sine r (vertical axis) against sine i (horizontal axis) using the values in Table 2.1. Draw the best straight line through the points.

For
Examiner's
Use



[2]

- (ii) Suggest why the value of the refractive index found using the gradient of the graph will be more accurate than your result from (a)(iii).

.....

 [1]

3 You are provided with three solutions labelled **A**, **B**, and **C**. The three solutions are:

hydrochloric acid, HCl

nitric acid, HNO_3

potassium nitrate, KNO_3

You will carry out two tests on each solution to find out which is which.

(a) Test 1

- To about 1 cm^3 of solution **A** in a test-tube add a spatula full of sodium carbonate solid, Na_2CO_3 . Record your observations in Table 3.1.
- Repeat the test using solutions **B**, and **C**, using a fresh test-tube for each solution.
- Complete Table 3.1 to show your conclusion for each test and the possible identities for each solution.

Table 3.1

solution	observations on adding sodium carbonate	conclusion of test	possible identities of the solution
A		 or
B		
C		 or

[5]

For
Examiner's
Use

CHEMISTRY PRACTICAL NOTES

Test for anions

<i>anion</i>	<i>test</i>	<i>test result</i>
carbonate (CO_3^{2-})	add dilute acid	effervescence, carbon dioxide produced
chloride (Cl^-) [in solution]	acidify with dilute nitric acid, then add aqueous silver nitrate	white ppt.
nitrate (NO_3^-) [in solution]	add aqueous sodium hydroxide then aluminium foil; warm carefully	ammonia produced
sulfate (SO_4^{2-}) [in solution]	acidify then add aqueous barium chloride <i>or</i> aqueous barium nitrate	white ppt.

Test for aqueous cations

<i>cation</i>	<i>effect of aqueous sodium hydroxide</i>	<i>effect of aqueous ammonia</i>
ammonium (NH_4^+)	ammonia produced on warming	-
copper(II) (Cu^{2+})	light blue ppt., insoluble in excess	light blue ppt., soluble in excess giving a dark blue solution
iron(II) (Fe^{2+})	green ppt., insoluble in excess	green ppt., insoluble in excess
iron(III) (Fe^{3+})	red-brown ppt., insoluble in excess	red-brown ppt., insoluble in excess
zinc (Zn^{2+})	white ppt., soluble in excess giving a colourless solution	white ppt., soluble in excess giving a colourless solution

Test for gases

<i>gas</i>	<i>test and test results</i>
ammonia (NH_3)	turns damp red litmus paper blue
carbon dioxide (CO_2)	turns limewater milky
chlorine (Cl_2)	bleaches damp litmus paper
hydrogen (H_2)	"pops" with a lighted splint
oxygen (O_2)	relights a glowing splint

Permission to reproduce items where third-party owned material protected by copyright is included has been sought and cleared where possible. Every reasonable effort has been made by the publisher (UCLES) to trace copyright holders, but if any items requiring clearance have unwittingly been included, the publisher will be pleased to make amends at the earliest possible opportunity.

University of Cambridge International Examinations is part of the Cambridge Assessment Group. Cambridge Assessment is the brand name of University of Cambridge Local Examinations Syndicate (UCLES), which is itself a department of the University of Cambridge.