



UNIVERSITY OF CAMBRIDGE INTERNATIONAL EXAMINATIONS
International General Certificate of Secondary Education

CANDIDATE
NAME

CENTRE
NUMBER

--	--	--	--	--

CANDIDATE
NUMBER

--	--	--	--

* 6 3 8 9 0 5 0 4 9 0 *

COMBINED SCIENCE

0653/02

Paper 2 (Core)

October/November 2007

1 hour 15 minutes

Candidates answer on the Question Paper.

No Additional Materials are required.

READ THESE INSTRUCTIONS FIRST

Write your Centre number, candidate number and name on all the work you hand in.

Write in dark blue or black pen.

You may use a soft pencil for any diagrams, graphs, tables or rough working.

Do not use staples, paper clips, highlighters, glue or correction fluid.

DO NOT WRITE IN ANY BARCODES.

Answer **all** questions.

A copy of the Periodic Table is printed on page 20.

At the end of the examination, fasten all your work securely together.

The number of marks is given in brackets [] at the end of each question or part question.

For Examiner's Use	
1	
2	
3	
4	
5	
6	
7	
8	
9	
Total	

This document consists of **19** printed pages and **1** blank page.



1 Fig. 1.1 shows a plant, and also a cell from part of the plant.

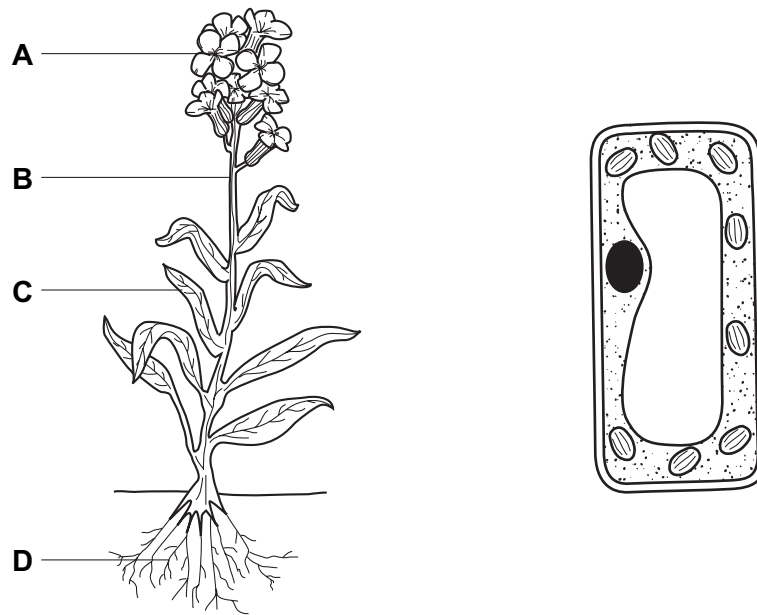


Fig. 1.1

(a) From which part of the plant, **A**, **B**, **C** or **D**, does the cell come?

.....

[1]

(b) On the diagram of **the cell** in Fig. 1.1, label the following structures.

Use label lines and the appropriate letters.

P a partially permeable membrane

Q the part of the cell that contains DNA

R a structure where energy from sunlight is absorbed

[3]

(c) Describe how you would test a leaf from the plant for starch.

.....
.....
.....
.....
..... [3]

For
Examiner's
Use

(d) Complete these sentences about part **A** of the plant shown in Fig. 1.1. Use some of these words.

anthers asexual ovules petals sepals sexual stigma

Flowers are responsible forreproduction.

Themake pollen, which contains the male gametes.

The female gametes are found inside the [3]

2 Fig. 2.1 shows the inside of a refrigerator.

For
Examiner's
Use




Fig. 2.1

(a) (i) Draw arrows on Fig. 2.1 to show what happens to the air cooled by the freezing compartment. [1]

(ii) Name this method of heat transfer.

..... [1]

(iii) Use the idea of density to explain why this happens.

.....

 [2]

(b) The refrigerator has a lamp inside. The supply voltage is 240 V and the current passing through the lamp when lit is 0.04 A.

Calculate the resistance of the lamp.

State the formula that you use and show your working.

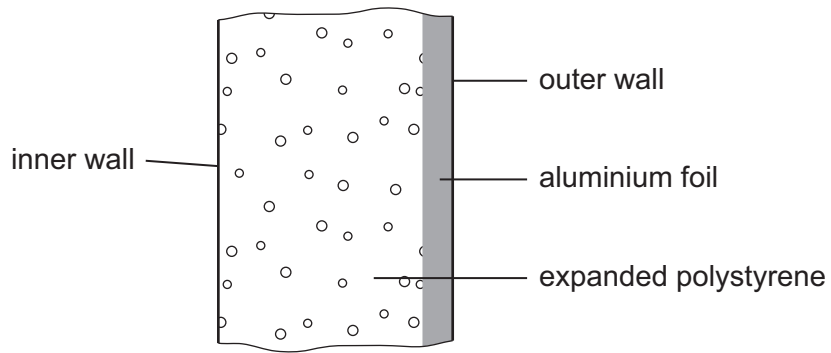
formula used

working

..... Ω [2]

(c) The refrigerator walls are insulated using both expanded polystyrene and aluminium foil.

For
Examiner's
Use



Explain how the structure of the refrigerator wall will help to maintain a lower temperature inside the refrigerator.

.....

.....

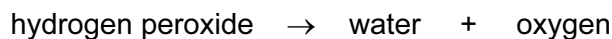
.....

.....

..... [3]

- 3 Hydrogen peroxide, H_2O_2 , is a colourless liquid.

Hydrogen peroxide slowly decomposes into simpler substances. The equation for the decomposition reaction is shown below.



- (a) How many atoms are there in one molecule of hydrogen peroxide?

..... [1]

- (b) (i) The decomposition of hydrogen peroxide is usually carried out in the presence of a catalyst.

State the purpose of adding a catalyst to a reaction mixture.

..... [1]

- (ii) The solid compound manganese dioxide, MnO_2 , is used as a catalyst in the reaction above. Manganese is a metal in the fourth period of the Periodic Table.

What name is given to the family of metals which contains manganese?

..... [1]

- (c) (i) Hydrogen peroxide contains two non-metallic elements bonded together.

Name the type of chemical bonding in hydrogen peroxide molecules.

..... [1]

- (ii) Oxygen molecules, O_2 , are made of two oxygen atoms joined by a **double** bond.

Suggest the displayed formula of an oxygen molecule.

[1]

- (iii) The symbolic equation for the decomposition of hydrogen peroxide is shown below. The equation is not balanced.

Balance the equation.



[1]

For
Examiner's
Use

4 Fig. 4.1 shows part of the carbon cycle.

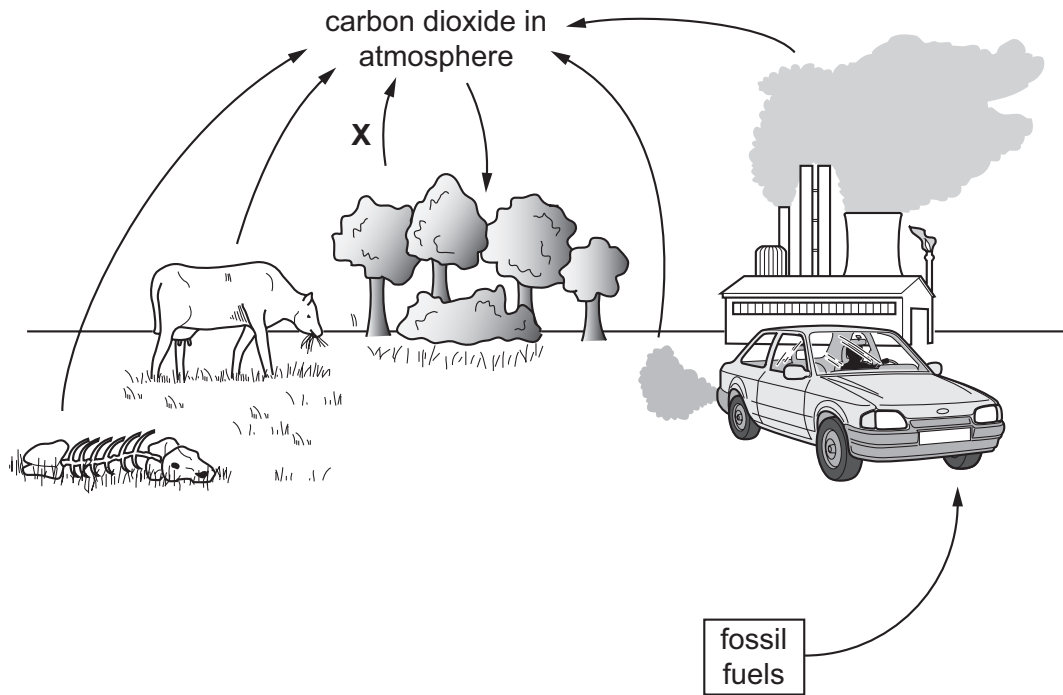


Fig. 4.1

(a) Name the process labelled X on Fig. 4.1.

..... [1]

(b) Explain how carbon dioxide is returned to the air from the bodies of dead organisms.

.....

 [2]

(c) Describe how fossil fuels are formed.

.....

 [2]

(d) Fig. 4.2 shows changes in the concentration of carbon dioxide in the atmosphere in the last 160 000 years.

For
Examiner's
Use

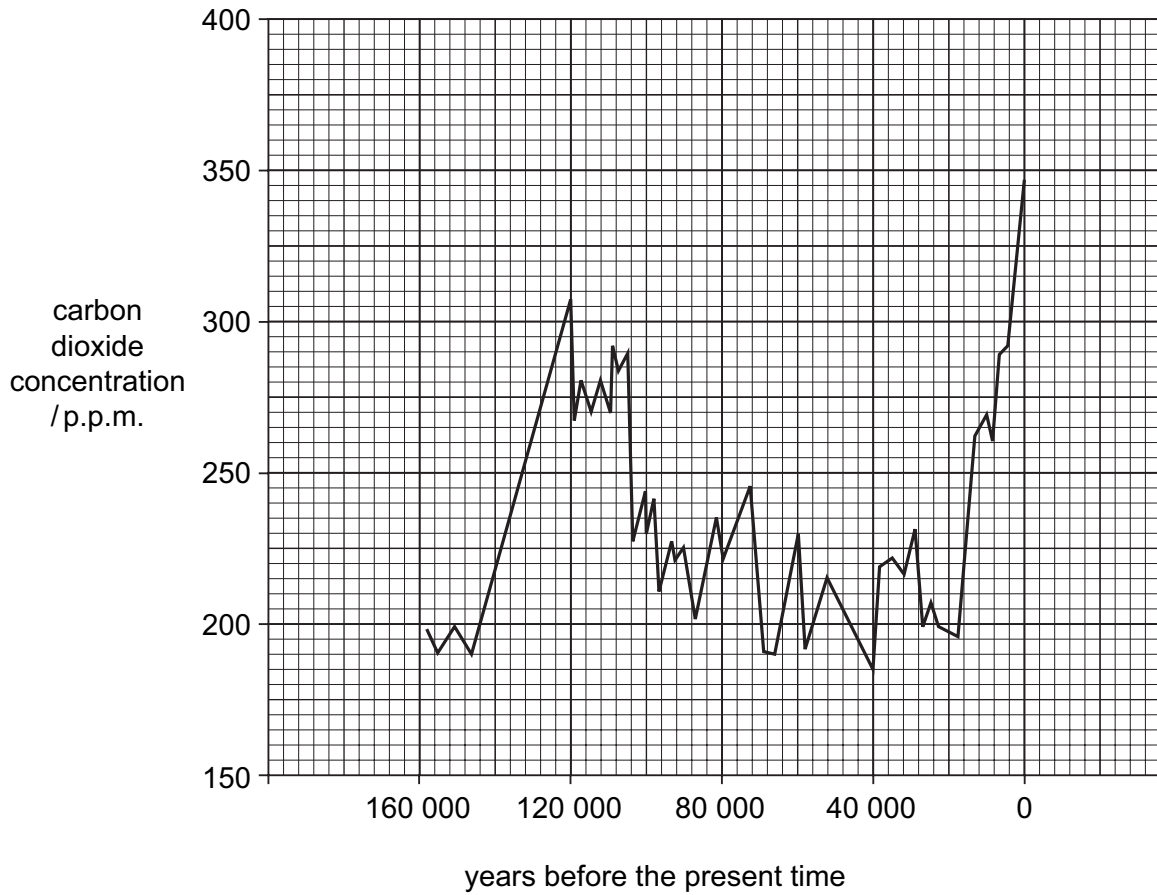


Fig. 4.2

(i) Suggest **one** human activity that is causing the current increase in carbon dioxide concentration in the atmosphere.

.....
..... [1]

(ii) Explain how the information in Fig. 4.2 suggests that human activities are not entirely to blame for increases in the concentration of carbon dioxide in the atmosphere.

.....
..... [1]

(iii) Explain why many people are worried about this increase in carbon dioxide concentration.

.....
.....
..... [2]

5 A space rocket is launched to the Moon.

(a) After launch, the empty fuel tanks are released and fall back to Earth. As a tank falls, two forces act on it as shown in Fig. 5.1.

For
Examiner's
Use

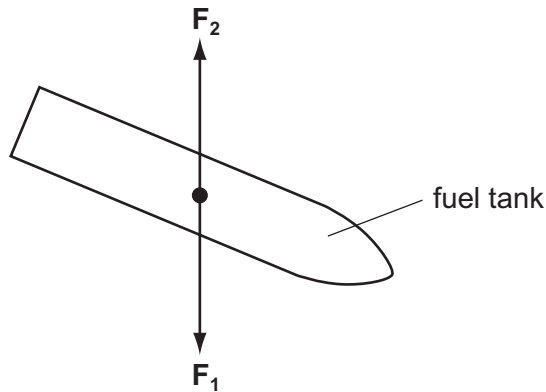


Fig. 5.1

(i) Name forces F_1 and F_2 .

F_1

F_2

[2]

(ii) As it falls, the tank accelerates. What does this tell you about the two forces?

.....

[1]

(b) The rocket travels 400 000 km to the Moon in 80 hours.

Calculate the average speed of the rocket.

State the formula that you use and show your working.

formula used

working

..... km/h [2]

- (c) One of the astronauts on the rocket has a mass of 90 kg. The gravitational field strength of the Moon is about one-sixth that of the Earth.

State the differences, if any, between

- (i) the mass of the astronaut on the Earth and on the Moon,

..... [1]

- (ii) the weight of the astronaut on the Earth and on the Moon.

..... [1]

- (d) There is no atmosphere and there are no fossil fuel deposits on the Moon. To provide the energy needed to use his equipment on the Moon, the astronaut needs to use renewable energy resources.

Suggest **one** renewable energy resource which is naturally available on the Moon.

..... [1]

For
Examiner's
Use

- 6 The apparatus in Fig. 6.1 can be used to study the reaction between potassium and oxygen.

For
Examiner's
Use

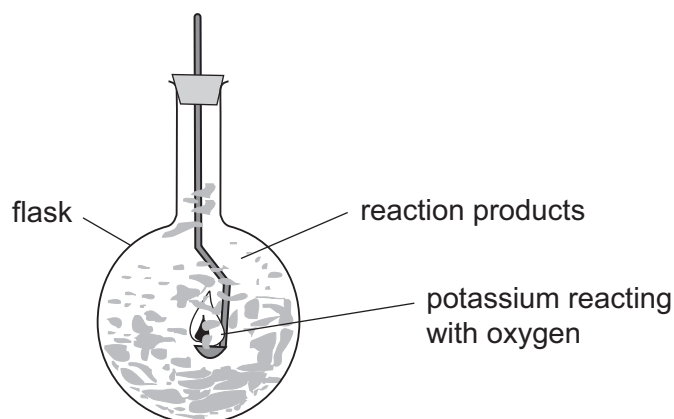


Fig. 6.1

- (a) Suggest why the flask becomes warm during the reaction.

.....
 [1]

- (b) One of the compounds formed in this reaction is potassium oxide.

The chemical formula of potassium oxide is K_2O .

- (i) Explain the meaning of this formula.

.....
 [1]

- (ii) Potassium oxide is made of positive and negative ions.

Explain, in terms of protons and electrons, the difference between a **positive** ion and a **neutral** atom.

.....

 [2]

- (c) When the reaction in Fig. 6.1 had finished, a student added water containing Universal Indicator to the flask.

Predict the colour change of the Universal Indicator.

Explain your prediction.

.....
.....
..... [2]

- (d) Potassium metal reacts with water to form a solution of potassium hydroxide. During the reaction a gas is given off.

- (i) Write the chemical formula of potassium hydroxide.

..... [1]

- (ii) Name the gas which is given off and describe a test for this gas.

name of gas

test

..... [3]

For
Examiner's
Use

7 Tuberculosis (TB) is an infectious disease caused by a bacterium. HIV/AIDS is caused by a virus.

(a) Table 7.1 shows the percentage of people with TB and HIV/AIDS in four parts of the world in 2005.

Table 7.1

part of the world	percentage of people with TB	percentage of people with HIV/AIDS
sub-Saharan Africa	0.51	7.2
Southeast Asia	0.35	1.1
Americas	0.07	0.7
Europe	0.06	0.5

(i) In which of these four parts of the world was there the largest percentage of people with TB?

..... [1]

(ii) Describe any pattern that seems to link the percentages of people with TB and with HIV/AIDS.

..... [1]

(iii) The virus that causes AIDS infects white blood cells. Explain how this could be responsible for the pattern that you have described in (ii).

..... [2]

(b) The TB bacterium usually infects cells in the lungs. Many of the cells in the alveoli are destroyed.

Explain how this can lead to a person feeling very tired and unable to carry out energetic exercise.

..... [2]

(c) (i) HIV/AIDS can be transmitted through sexual intercourse. Name two other diseases that can be transmitted in this way.

*For
Examiner's
Use*

1.

2.

[2]

(ii) How can the spread of these diseases be reduced?

.....

[1]

8 A student is having a medical examination.

(a) A dentist checks the student's teeth using a dental mirror. This is shown in Fig. 8.1.

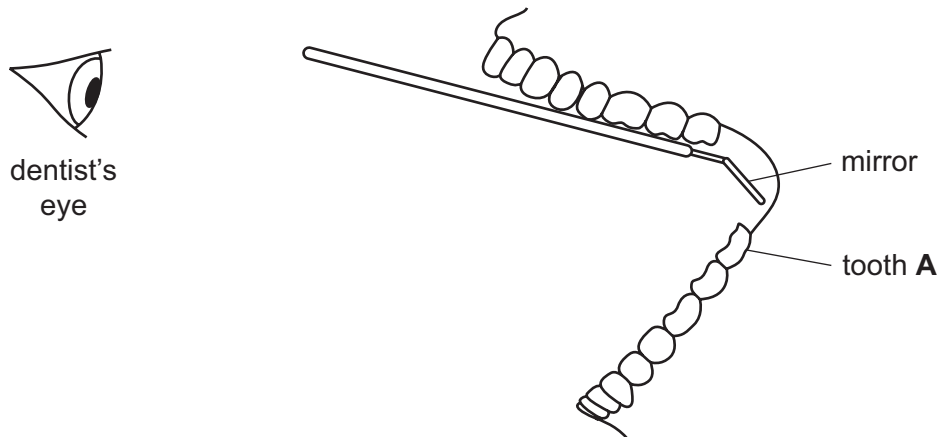


Fig. 8.1

Draw a ray of light from the back of tooth **A** to the dentist's eye to show how the dentist is able to see the back of the tooth.

On the ray, draw arrows showing the direction in which the light travels. [3]

(b) A doctor tests the student's hearing and confirms that the lowest and highest frequencies the student can hear are normal for a young person.

(i) Suggest a value for each of these.

lowest frequency Hz

highest frequency Hz

[2]

(ii) What is meant by the *frequency* of a wave?

.....
..... [1]

(iii) Sound is one form of energy.

Name two other forms of energy.

1.

2. [1]

- (c) The doctor wants to use a small torch to look down the student's throat. When he switches the torch on, it does not work.

For
Examiner's
Use

Fig. 8.2 shows the circuit diagram for the torch.

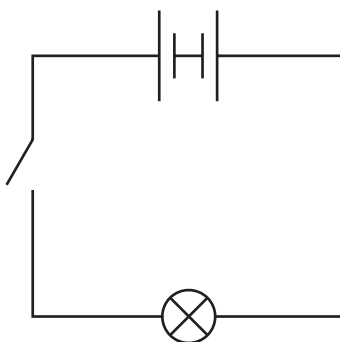


Fig. 8.2

- (i) Explain what is wrong with the torch.

.....
..... [1]

- (ii) Draw the correct circuit diagram.

[1]

9 Aluminium, iron, sodium and chlorine are important elements produced by the chemical industry.

(a) Use the copy of the Periodic Table on page 20 to help you to answer this question.

State which of the elements above

(i) is **not** in the same period of the Periodic Table as the other three,

..... [1]

(ii) has atoms which contain 11 electrons.

..... [1]

(b) Aluminium is a metal which resists corrosion and has a relatively low density. The strength of aluminium can be improved by making it into an alloy.

Explain why aluminium alloys are important materials for use in aircraft construction.

.....
.....
.....
..... [3]

(c) Iron is produced when iron oxide reacts with carbon monoxide in a blast furnace. Most iron is converted into steel.

(i) The equation for the reaction between iron oxide and carbon monoxide is shown below.



Explain which substance has been **reduced** in this reaction.

.....
.....
..... [2]

(ii) State two advantages of steel compared to iron from a blast furnace.

- 1.
- 2. [2]

(d) The chemical symbol for chlorine is Cl.

Write the chemical formula of a chlorine molecule. [1]

BLANK PAGE

DATA SHEET
The Periodic Table of the Elements

		Group													
I	II	III	IV	V	VI	VII	0							0	
		1 H Hydrogen 1											2 He Helium 2		
7 Li Lithium 3	9 Be Beryllium 4											20 Ne Neon 10			
23 Na Sodium 11	24 Mg Magnesium 12	27 Al Aluminium 13	28 Si Silicon 14	31 P Phosphorus 15	32 S Sulphur 16	35.5 Cl Chlorine 17	40 Ar Argon 18							84 Kr Krypton 36	
39 K Potassium 19	40 Ca Calcium 20	70 Ga Gallium 31	73 Ge Germanium 32	75 As Arsenic 33	79 Se Selenium 34	80 Br Bromine 35	84 Kr Krypton 36							131 Xe Xenon 54	
85 Rb Rubidium 37	88 Sr Strontium 38	65 Zn Zinc 30	64 Cu Copper 29	59 Ni Nickel 28	106 Pd Palladium 46	108 Ag Silver 47	112 Cd Cadmium 48	115 In Indium 49	119 Sn Tin 50	122 Sb Antimony 51	127 I Iodine 53	131 Xe Xenon 54			209 Po Polonium 84
133 Cs Caesium 55	137 Ba Barium 56	204 Tl Thallium 81	201 Hg Mercury 80	197 Au Gold 79	195 Pt Platinum 78	197 Au Gold 79	201 Hg Mercury 80	204 Tl Thallium 81	207 Pb Lead 82	209 Bi Bismuth 83	210 Po Polonium 84	210 Po Polonium 84			210 Rn Radon 86
226 Ra Radium 88	227 Ac Actinium 89											210 Rn Radon 86			
		*58-71 Lanthanoid series †90-103 Actinoid series													
140 Ce Cerium 58	141 Pr Praseodymium 59	144 Nd Neodymium 60	145 Pm Promethium 61	150 Sm Samarium 62	152 Eu Europium 63	157 Gd Gadolinium 64	159 Tb Terbium 65	162 Dy Dysprosium 66	165 Ho Holmium 67	167 Er Erbium 68	169 Tm Thulium 69	173 Yb Ytterbium 70	175 Lu Lutetium 71		
232 Th Thorium 90	238 U Uranium 92	238 U Uranium 92	238 U Uranium 92	238 U Uranium 92	238 U Uranium 92	238 U Uranium 92	238 U Uranium 92	238 U Uranium 92	238 U Uranium 92	238 U Uranium 92	238 U Uranium 92	238 U Uranium 92	238 U Uranium 92		

	a	X	b
Key	a = relative atomic mass	X = atomic symbol	b = proton (atomic) number

The volume of one mole of any gas is 24 dm³ at room temperature and pressure (r.t.p.).

Permission to reproduce items where third-party owned material protected by copyright is included has been sought and cleared where possible. Every reasonable effort has been made by the publisher (UCLES) to trace copyright holders, but if any items requiring clearance have unwittingly been included, the publisher will be pleased to make amends at the earliest possible opportunity.

University of Cambridge International Examinations is part of the Cambridge Assessment Group. Cambridge Assessment is the brand name of University of Cambridge Local Examinations Syndicate (UCLES), which is itself a department of the University of Cambridge.