



Cambridge International Examinations
Cambridge International General Certificate of Secondary Education


CANDIDATE
NAME

CENTRE
NUMBER

--	--	--	--	--	--

CANDIDATE
NUMBER

--	--	--	--



BIOLOGY

0610/51

Paper 5 Practical Test

October/November 2018

1 hour 15 minutes

Candidates answer on the Question Paper.

Additional Materials: As listed in the Confidential Instructions.

READ THESE INSTRUCTIONS FIRST

Write your Centre number, candidate number and name on all the work you hand in.
Write in dark blue or black pen.
You may use an HB pencil for any diagrams or graphs.
Do not use staples, paper clips, glue or correction fluid.
DO NOT WRITE IN ANY BARCODES.

Answer **all** questions.

Electronic calculators may be used.
You may lose marks if you do not show your working or if you do not use appropriate units.

At the end of the examination, fasten all your work securely together.
The number of marks is given in brackets [] at the end of each question or part question.

For Examiner's Use	
1	
2	
Total	

This syllabus is approved for use in England, Wales and Northern Ireland as a Cambridge International Level 1/Level 2 Certificate.

This document consists of **11** printed pages and **1** blank page.

- 1 Grapes are soft fruits that contain sugars.

You are going to investigate the concentration of reducing sugars in grapes.

Read all the instructions but DO NOT CARRY THEM OUT until you have drawn a table for your results in the space provided in 1(a)(iii).

You should use the safety equipment provided while you are carrying out the practical work.

- Step 1 Put 50 cm³ of distilled water into a measuring cylinder.
- Step 2 Place four of the grapes into the measuring cylinder and record the total volume of distilled water and grapes in the measuring cylinder in Table 1.1.
- (a) (i) Calculate the total volume of the four grapes and record it in Table 1.1.

Table 1.1

total volume of distilled water and grapes in the measuring cylinder / cm ³	total volume of the grapes / cm ³

[1]

- (ii) Calculate the average volume of one grape using your answer to 1(a)(i).

Space for working.

..... cm³ [1]

- Step 3 Label a test-tube **G**.
- Step 4 Pour the contents of the measuring cylinder into the container labelled **waste**.
Remove the four grapes and dry them with a paper towel. Return the four grapes to the Petri dish base.
- Step 5 Use a spatula to crush all of the grapes in the Petri dish base and try to extract as much juice as possible. Pour the grape juice into the small beaker labelled **grape juice**.
- Step 6 Use a clean syringe to put 5.0 cm³ of the grape juice into test-tube **G**.
- Step 7 Label three test-tubes, **S1**, **S2** and **S3**.
- Step 8 Add 5.0 cm³ of the solution labelled **S** to the test-tube labelled **S1**.
- Step 9 Add 1.0 cm³ of the solution labelled **S** to the test-tube labelled **S2** and then add 4.0 cm³ of distilled water. Mix the contents of **S2**.
- Step 10 Add 0.2 cm³ of the solution labelled **S** to the test-tube labelled **S3** and then add 4.8 cm³ of distilled water. Mix the contents of **S3**.

Step 11 Use a clean syringe to add 5.0 cm^3 of Benedict's solution to each of test-tubes **S1**, **S2**, **S3** and **G**.

Raise your hand when you are ready for hot water to be added to the beaker labelled **water-bath**.

Step 12 Place the test-tubes **S1**, **S2**, **S3** and **G** into the water-bath at the same time.

Start timing and record the time at which a colour change **first** appears in each test-tube.

Record your results in your table in **1(a)(iii)**.

(iii) Prepare a table to record your results.

Your table should include:

- the solutions tested
- the time, in seconds, of the **first** appearance of a colour change in each solution.

Record your results in your table as you carry out the practical work.

[4]

(b) (i) The concentration of reducing sugar in solution **S** and **S1** is 200 g per dm^3 .
The concentration of reducing sugar in solution **S3** is 8 g per dm^3 .

Calculate the concentration of reducing sugar in solution **S2**, using the information in step **9**.

concentration of reducing sugar in **S2** g per dm^3 .
[2]

(ii) State a conclusion for your reducing sugar investigation.

.....
.....
.....
..... [1]

(c) (i) State **one** variable that you kept constant in your investigation.

..... [1]

(ii) The method used in step **12** contains two potential sources of error.

State **one** source of error and suggest an improvement to minimise the error.

error

.....

improvement

.....

..... [2]

(iii) Identify **one** safety precaution you used when carrying out this investigation and give a reason for this precaution.

safety precaution

.....

reason for the safety precaution

..... [2]

- (d) Grapes develop in large groups attached to their parent plant. As they develop, grapes increase in size and ripen.

Fig. 1.1 shows one group of grapes.



Fig. 1.1

A student suggested that the concentration of reducing sugars in grapes changed as the grapes developed and ripened.

Describe how the method you used in steps 3 to 12 could be modified to determine if there is a change in the concentration of reducing sugars in grapes during development.

.....

.....

.....

.....

.....

.....

.....

.....

..... [2]

- (e) Some students placed eight grapes, that had been picked at different ages, into water. They measured the change in the volume of the grapes after 24 hours.

Table 1.2 shows the results of this investigation.

Table 1.2

age of grapes when picked/days	starting volume of grapes/cm ³	final volume of grapes after 24 hours/cm ³	percentage change in volume
12	5.0	5.5	10
24	7.6	8.5	12
36	12.0	13.7	14
48	17.0	19.7	16
60	22.0	26.0	18
72	25.0	30.0	20
84	30.0	36.6	
96	36.0	45.0	25
108	42.0	54.6	30
120	55.0	74.3	35


- (i) Calculate the percentage change in volume of grapes aged 84 days.

Write your answer in Table 1.2.

Show your working.

[2]

- (ii) Plot a line graph on the grid of the age of the grapes against the percentage change in volume.



[4]

- (iii) Describe the trends shown by the results in Table 1.2 and your graph.

.....
.....
.....
..... [2]

- (iv) State the variable that was changed (independent variable) in this investigation.

..... [1]

[Total: 25]

2 Fig. 2.1 shows a photomicrograph of part of the lung of a mammal.

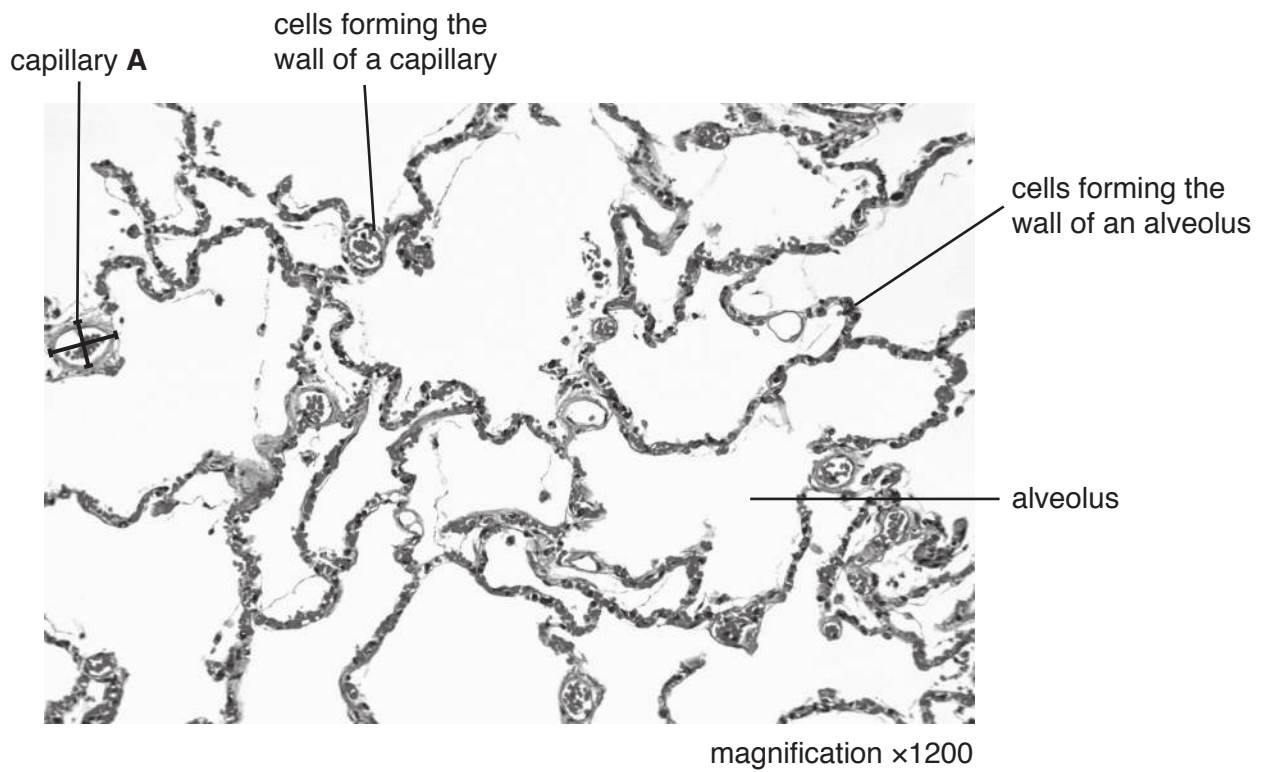


Fig. 2.1

- (a) (i) Measure the diameter of the capillary labelled **A** using the two lines drawn on the capillary in Fig. 2.1. Include the unit.

diameter 1

diameter 2

Calculate the average diameter of capillary **A**.

..... [2]

- (ii) Calculate the actual average diameter of capillary **A** using your answer to **2(a)(i)** and the formula:

$$\text{magnification} = \frac{\text{average diameter of capillary A on Fig. 2.1}}{\text{actual average diameter of capillary A}}$$

$$1 \text{ mm} = 1000 \mu\text{m}$$

Give your answer to the nearest whole μm .

..... μm
[3]

- (iii) Make a large drawing of three alveoli and one capillary, that are next to each other in Fig. 2.1. Do not draw individual cells.

- (b) Some students measured the average increase in chest circumference, during breathing, when at rest. Each student wrapped a tape measure around their chest just below the armpits, as shown in Fig. 2.2.

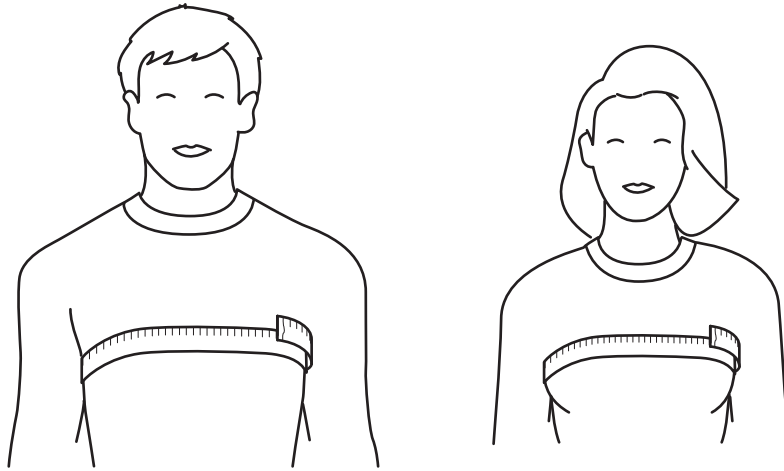


Fig. 2.2

Each student then breathed out and took a measurement of their chest circumference. They then breathed in and took a second measurement. The difference between the two measurements is the increase in chest circumference.

Table 2.1 shows the results of their measurements.

Table 2.1

increase in chest circumference/mm	
male	female
40	32
31	37
48	25
28	38
46	27
33	30
39	22
41	38
25	27
39	34
average	37

- (i) Calculate the average increase in chest circumference for females.

Write your answer in Table 2.1.

[1]

BLANK PAGE

Permission to reproduce items where third-party owned material protected by copyright is included has been sought and cleared where possible. Every reasonable effort has been made by the publisher (UCLES) to trace copyright holders, but if any items requiring clearance have unwittingly been included, the publisher will be pleased to make amends at the earliest possible opportunity.

To avoid the issue of disclosure of answer-related information to candidates, all copyright acknowledgements are reproduced online in the Cambridge International Examinations Copyright Acknowledgements Booklet. This is produced for each series of examinations and is freely available to download at www.cie.org.uk after the live examination series.

Cambridge International Examinations is part of the Cambridge Assessment Group. Cambridge Assessment is the brand name of University of Cambridge Local Examinations Syndicate (UCLES), which is itself a department of the University of Cambridge.