



MATHEMATICS

Higher Level

Tuesday 3 November 1998 (afternoon)

Paper 1

2 hours

A

Candidate name:	Candidate category & number:										
	<table border="1" style="width: 100%; border-collapse: collapse;"> <tr> <td style="width: 10%; height: 20px;"></td> <td style="width: 10%;"></td> <td style="width: 10%;"></td> <td style="width: 10%;"></td> <td style="width: 10%;"></td> <td style="width: 10%;"></td> <td style="width: 10%;"></td> <td style="width: 10%;"></td> <td style="width: 10%;"></td> <td style="width: 10%;"></td> </tr> </table>										
<p>This examination paper consists of 20 questions. The maximum mark for each question is 4. The maximum mark for this paper is 80.</p> <p style="text-align: center;">INSTRUCTIONS TO CANDIDATES</p> <p>Write your candidate name and number in the boxes above.</p> <p>Do NOT open this examination paper until instructed to do so.</p> <p>Answer ALL questions in the spaces provided.</p> <p>Unless otherwise stated in the question, all numerical answers must be given exactly or to three significant figures as appropriate.</p>											

B

QUESTIONS ANSWERED
ALL

C

EXAMINER	MODERATOR
TOTAL /80	TOTAL /80

D

IBCA
TOTAL /80

EXAMINATION MATERIALS

- Required:
 IB Statistical Tables
 Calculator
 Ruler and compasses

- Allowed:
 A simple translating dictionary for candidates not working in their own language
 Millimetre square graph paper

FORMULAE

Trigonometrical identities:

$$\sin(\alpha + \beta) = \sin \alpha \cos \beta + \cos \alpha \sin \beta$$

$$\cos(\alpha + \beta) = \cos \alpha \cos \beta - \sin \alpha \sin \beta$$

$$\tan(\alpha + \beta) = \frac{\tan \alpha + \tan \beta}{1 - \tan \alpha \tan \beta}$$

$$\sin \alpha + \sin \beta = 2 \sin \frac{\alpha + \beta}{2} \cos \frac{\alpha - \beta}{2}$$

$$\sin \alpha - \sin \beta = 2 \cos \frac{\alpha + \beta}{2} \sin \frac{\alpha - \beta}{2}$$

$$\cos \alpha + \cos \beta = 2 \cos \frac{\alpha + \beta}{2} \cos \frac{\alpha - \beta}{2}$$

$$\cos \alpha - \cos \beta = 2 \sin \frac{\alpha + \beta}{2} \sin \frac{\beta - \alpha}{2}$$

$$\cos 2\theta = 2 \cos^2 \theta - 1 = 1 - 2 \sin^2 \theta = \cos^2 \theta - \sin^2 \theta$$

$$\text{If } \tan \frac{\theta}{2} = t \text{ then } \sin \theta = \frac{2t}{1+t^2} \text{ and } \cos \theta = \frac{1-t^2}{1+t^2}$$

Integration by parts:

$$\int u \frac{dv}{dx} dx = uv - \int v \frac{du}{dx} dx$$

Standard integrals:

$$\int \frac{dx}{x^2 + a^2} = \frac{1}{a} \arctan \frac{x}{a} + c$$

$$\int \frac{dx}{\sqrt{a^2 - x^2}} = \arcsin \frac{x}{a} + c \quad (|x| < a)$$

Statistics: If (x_1, x_2, \dots, x_n) occur with frequencies (f_1, f_2, \dots, f_n) then the mean m and standard deviation s are given by

$$m = \frac{\sum f_i x_i}{\sum f_i}, \quad s = \sqrt{\frac{\sum f_i (x_i - m)^2}{\sum f_i}}, \quad i = 1, 2, \dots, n$$

Binomial distribution:

$$p_x = \binom{n}{x} p^x (1-p)^{n-x}, \quad x = 0, 1, 2, \dots, n$$

Maximum marks will be given for correct answers. Where an answer is wrong some marks may be given for a correct method provided this is shown by written working. Working may be continued below the box, if necessary, or on extra sheets of paper provided. These are securely fastened to this examination paper.

1. Let $f(x) = \frac{1}{x+1}$ and $g(x) = \sqrt{x^2 - 1}$. Find

(a) $f^{-1}(x)$;

(b) $(f \circ g)(x)$.

Working:

Answers:

(a) _____

(b) _____

2. Solve the system of simultaneous equations:

$$\begin{aligned}x + 2y &= 5 \\ 4^x &= 8^y\end{aligned}$$

Working:

Answer:

3. Let $P(x) = x^3 - 3x^2 + 4x + c$.

(a) Calculate $P(-2)$.

(b) If the remainder when $P(x)$ is divided by $(x + 2)$ is -23 , find the value of c .

Working:

Answers:

(a) _____

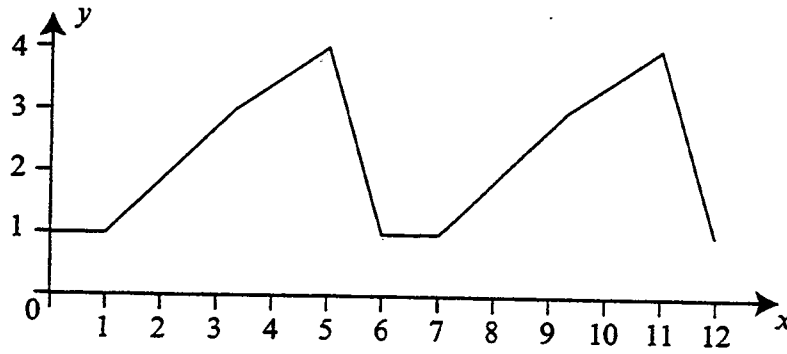
(b) _____

4. Find the non-zero value of k if the coefficients of x^3 and x^4 in the expansion of $(1 + kx)^5$ are equal.

Working:

Answer:

5. A part of the graph of the periodic function $f(x)$ is given below.



(a) Find its period.

(b) Find $f(41)$.

Working:

Answers:

(a) _____

(b) _____

6. The discrete random variable X has the probability distribution given in the table below.

x	$p(X = x)$
0	k
1	$\frac{1}{4}$
2	$\frac{1}{4}$
3	$3k$

(a) Find the value of k .

(b) Calculate $E(X)$.

Working:

Answers:

(a) _____

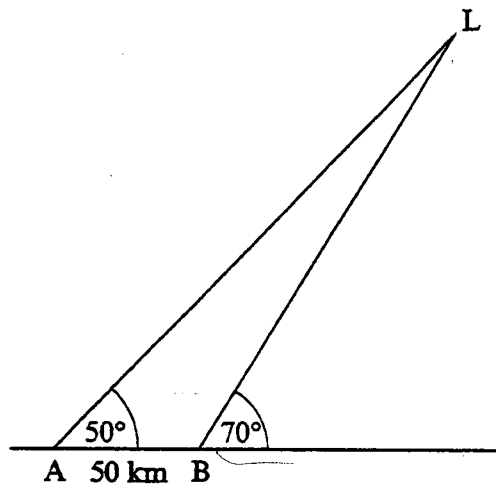
(b) _____

7. Given the vectors $\vec{a} = -2\vec{i} + p\vec{j} - \vec{k}$ and $\vec{b} = \vec{i} + 3(p+4)\vec{j} + (2p-5)\vec{k}$, find all values of p for which \vec{a} is perpendicular to \vec{b} .

Working:

Answers:

8. A ship travels from A to B and observes a lighthouse at L.



Using the distance and angles given in the diagram, find the distance of the ship at point B from the lighthouse at L.

Working:

Answer:

9. If $f(x) = \ln(6x^2 - 5x - 6)$, find
- (a) the exact domain of $f(x)$;
 - (b) the range of $f(x)$.

Working:

Answers:

(a) _____

(b) _____

10. If $z = a + bi$, with $a, b \in \mathbb{R}$, find all ordered pairs (a, b) such that $z^2 = -5 + 12i$.

Working:

Answers:

11. Find all values of m such that the equation $mx^2 - 2(m + 2)x + m + 2 = 0$ has

- (a) two real roots;
- (b) two real roots, one positive and one negative.

Working:

Answers:

- (a) _____
- (b) _____

12. Events A and B are given such that $p(A \cap B) = \frac{1}{5}$, $p(B | A) = \frac{1}{2}$, and $p(A | B) = \frac{3}{10}$. Find

- (a) $p(B)$;
- (b) $p(A)$;
- (c) $p(A \cup B)$.

Working:

Answers:

- (a) _____
- (b) _____
- (c) _____

13. Given the equation $3 \cos x - 4 \sin x = -5$, solve for $\tan x$ expressing your answer exactly in the form $\tan x = \frac{p}{q}$, where $p, q \in \mathbb{Z}$.

Working:

Answer:

14. Given the following two matrices,

$$M = \begin{pmatrix} 1 & -1 & -2 \\ 1 & 1 & -2 \\ 1 & 2 & a \end{pmatrix} \text{ and } M^{-1} = \frac{1}{2} \begin{pmatrix} b & -5 & 4 \\ -1 & 1 & 0 \\ 1 & -3 & 2 \end{pmatrix},$$

find the values of a and b .

Working:

Answers:

15. Consider the two planes P and Q , where

$$P: 6x - 2y + 3z + 8 = 0;$$

$$Q: x - 3y + 5 = 0.$$

Find the equation of a third plane R which is perpendicular to both P and Q and contains the point $(2, 2, 3)$.

Working:

Answer:

16. In the diagram below, each successive parallelogram is formed by joining the midpoints of the sides of the previous parallelogram. The largest parallelogram has sides of length 4.

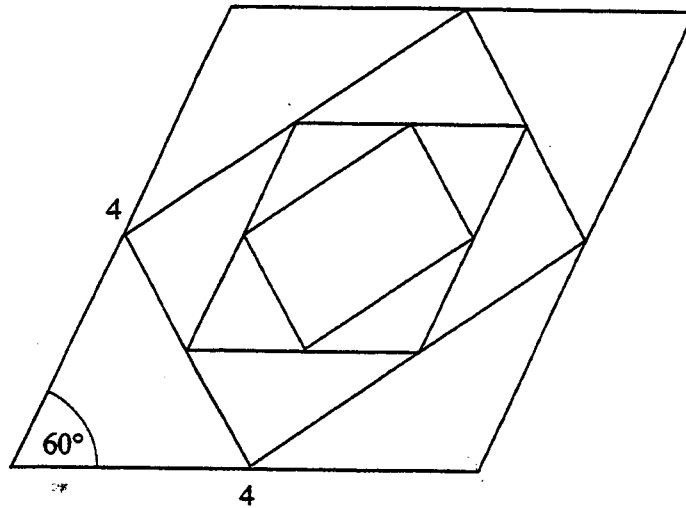


Diagram not drawn to scale

If the pattern shown is infinite, find the sum of the areas of the parallelograms.

Working:

Answer:

17. The probability density function of a random variable is given by

$$f(x) = \begin{cases} \frac{x}{\sqrt{3}} \sqrt{x^2 - 1}, & 1 \leq x \leq k; \\ 0, & \text{otherwise.} \end{cases}$$

Find the value of k .

Working:

Answer:

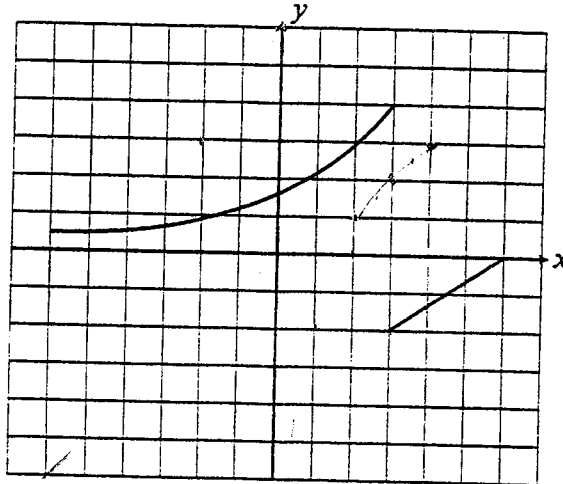
18. The vectors $\vec{v} = \vec{i} + 2\vec{j} - 3\vec{k}$, $\vec{u} = 2\vec{i} + 2\vec{j} + 3\vec{k}$, and $\vec{w} = \vec{i} + (2-t)\vec{j} + (t+1)\vec{k}$ are given.

Find the parameter t such that the three vectors \vec{u} , \vec{v} and \vec{w} are coplanar.

Working:

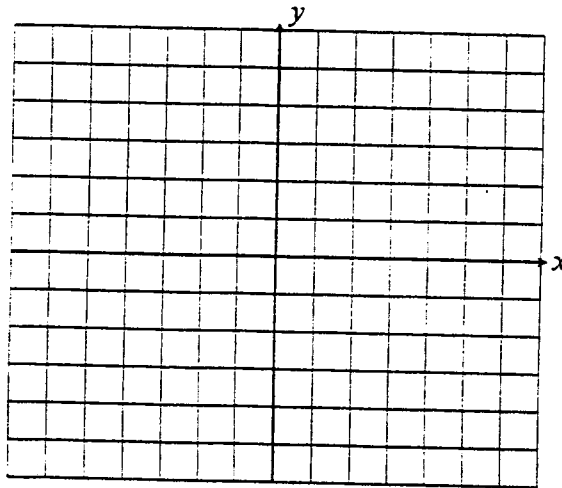
Answer:

19. The graph of a function $f(x)$ for $-6 \leq x \leq 6$ is given below.

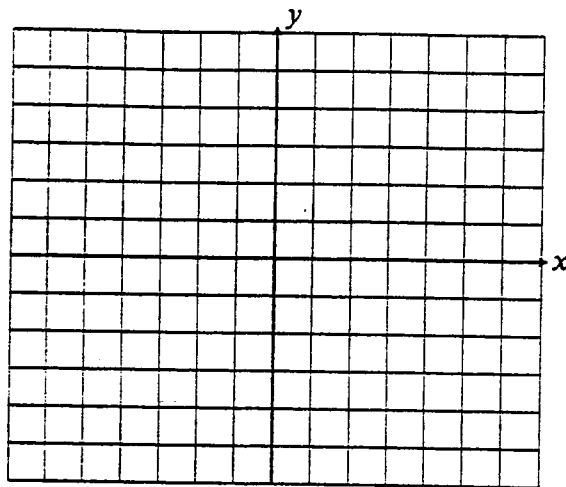


Sketch the graphs of the following functions.

- (a) $f^{-1}(x)$



(b) $f(|x|)$



Working:

20. Let

$$F(x) = \int_0^x \frac{dt}{1 + e^{t^2}}.$$

- (a) Find $f(x) = F'(x)$.
- (b) For what values of k does the equation $f(x) = k$ have a real solution?

Working:

Answers:

(a) _____

(b) _____



MATHEMATICS

Higher Level

Wednesday 4 November 1998 (morning)

Paper 2

2 hours 30 minutes

This examination paper consists of 2 sections, Section A and Section B.
Section A consists of 4 questions.
Section B consists of 4 questions.
The maximum mark for Section A is 80.
The maximum mark for each question in Section B is 40.
The maximum mark for this paper is 120.

INSTRUCTIONS TO CANDIDATES

Do NOT open this examination paper until instructed to do so.

Answer all FOUR questions from Section A and ONE question from Section B.

Unless otherwise stated in the question, all numerical answers must be given exactly or to three significant figures as appropriate.

EXAMINATION MATERIALS

Required:

IB Statistical Tables
Millimetre square graph paper
Calculator
Ruler and compasses

Allowed:

simple translating dictionary for candidates not working in their own language

FORMULAE

Trigonometrical identities:

$$\sin(\alpha + \beta) = \sin \alpha \cos \beta + \cos \alpha \sin \beta$$

$$\cos(\alpha + \beta) = \cos \alpha \cos \beta - \sin \alpha \sin \beta$$

$$\tan(\alpha + \beta) = \frac{\tan \alpha + \tan \beta}{1 - \tan \alpha \tan \beta}$$

$$\sin \alpha + \sin \beta = 2 \sin \frac{\alpha + \beta}{2} \cos \frac{\alpha - \beta}{2}$$

$$\sin \alpha - \sin \beta = 2 \cos \frac{\alpha + \beta}{2} \sin \frac{\alpha - \beta}{2}$$

$$\cos \alpha + \cos \beta = 2 \cos \frac{\alpha + \beta}{2} \cos \frac{\alpha - \beta}{2}$$

$$\cos \alpha - \cos \beta = 2 \sin \frac{\alpha + \beta}{2} \sin \frac{\beta - \alpha}{2}$$

$$\cos 2\theta = 2 \cos^2 \theta - 1 = 1 - 2 \sin^2 \theta = \cos^2 \theta - \sin^2 \theta$$

$$\text{If } \tan \frac{\theta}{2} = t \text{ then } \sin \theta = \frac{2t}{1+t^2} \text{ and } \cos \theta = \frac{1-t^2}{1+t^2}$$

Integration by parts:

$$\int u \frac{dv}{dx} dx = uv - \int v \frac{du}{dx} dx$$

Standard integrals:

$$\int \frac{dx}{x^2 + a^2} = \frac{1}{a} \arctan \frac{x}{a} + c$$

$$\int \frac{dx}{\sqrt{a^2 - x^2}} = \arcsin \frac{x}{a} + c \quad (|x| < a)$$

Statistics:

If (x_1, x_2, \dots, x_n) occur with frequencies (f_1, f_2, \dots, f_n) then the mean m and standard deviation s are given by

$$m = \frac{\sum f_i x_i}{\sum f_i}, \quad s = \sqrt{\frac{\sum f_i (x_i - m)^2}{\sum f_i}}, \quad i = 1, 2, \dots, n$$

Binomial distribution:

$$P_x = \binom{n}{x} p^x (1-p)^{n-x}, \quad x = 0, 1, 2, \dots, n$$

A correct answer with no indication of the method used will normally receive no marks. You are therefore advised to show your working.

SECTION A

Answer all FOUR questions from this section.

1. [Maximum mark: 16]

The equations of two lines L_1 and L_2 are

$$L_1: \quad \vec{r} = \vec{i} - 20\vec{j} - 13\vec{k} + t(7\vec{i} + \vec{k}), \text{ where } t \text{ is a scalar;}$$

$$L_2: \quad \frac{x+30}{2} = \frac{y+39}{1} = \frac{z-3}{2}.$$

The equations of two planes P_1 and P_2 are

$$P_1: \quad 6x + 3y - 2z = 12;$$

$$P_2: \quad \vec{r} = 22\vec{i} + \lambda(\vec{i} + \vec{j}) + \mu(\vec{i} - 2\vec{k}), \text{ where } \lambda \text{ and } \mu \text{ are scalars.}$$

- (a) Find the vector cross product $(\vec{i} + \vec{j}) \times (\vec{i} - 2\vec{k})$. [3 marks]
- (b) (i) Write down vectors \vec{n}_1, \vec{n}_2 which are normal to the planes P_1, P_2 respectively.
- (ii) Hence, or otherwise, find the acute angle between the planes correct to the nearest tenth of a degree. [5 marks]
- (c) Show that L_2 is normal to P_1 . [3 marks]
- (d) (i) Find the coordinates of the point of intersection of L_2 and P_1 .
- (ii) Hence, or otherwise, show that the two lines and the two planes all have a point in common. [5 marks]

2. [Maximum mark: 24]

Consider the polynomial $f(x) = x^3 - cx^2 - 4x + 4c$, where $-2 < c < 2$.

(a) Show that $f(c) = 0$ for all values of c . [2 marks]

(b) Express $f(x)$ as a product of three linear factors. [3 marks]

(c) Draw a neat sketch of the graph of $y = f(x)$, clearly indicating the x -intercepts. [5 marks]

(d) Show that the total area, A , enclosed by the curve $y = f(x)$ and the x -axis is given by

$$A = 8 + 4c^2 - \frac{1}{6}c^4 . \quad [5 \text{ marks}]$$

(e) Find the value of c , $-2 < c < 2$, for which A is a minimum. [5 marks]

(f) Calculate the volume generated when the region enclosed by the graph of $y = f(x)$ and the x -axis between $x = c$ and $x = 2$, for the value of c found in part (e), is rotated through 360° about the x -axis. [4 marks]

3. [Maximum mark: 24]

(i) A packet of twelve light bulbs contains three defective bulbs. Two bulbs are selected at random from the packet.

(a) Show that the probability that neither of these bulbs is defective is $\frac{6}{11}$. [3 marks]

(b) Calculate the probability that exactly one of the first two bulbs selected is defective. [4 marks]

The packet is either accepted or rejected according to the following process. If neither of the first two bulbs selected is defective, the packet is accepted. If both of the first two bulbs selected are defective, the packet is rejected. If exactly one of the first two bulbs selected is defective, a third bulb is selected from the packet. If this bulb is found to be defective, the packet is rejected; otherwise the packet is accepted.

(c) Given that exactly one of the first two bulbs selected is defective, find the probability that the third bulb selected is non-defective. [2 marks]

(d) Find the probability that the packet is finally accepted. [4 marks]

(e) If the packet is finally accepted, find the probability that one of the first two bulbs selected was in fact defective. [4 marks]

(ii) A discrete probability distribution is defined by

$$P(X = x) = kx$$

where $x = 1, 2, 3, \dots, n$, and k is a constant.

(a) Show that $k = \frac{2}{n(n+1)}$. [3 marks]

(b) Using the result $\sum_{r=1}^n r^2 = \frac{1}{6}n(n+1)(2n+1)$, find the mean of the distribution in terms of n . [4 marks]

4. [Maximum mark: 16]

- (a) Find all three solutions of the equation $z^3=1$, where z is a complex number.

[4 marks]

- (b) If $z = \omega$ is the solution of the equation $z^3 = 1$ which has the smallest positive argument, show that $1 + \omega + \omega^2 = 0$.

[3 marks]

- (c) Find the matrix product

$$\begin{pmatrix} 1 & 1 & 1 \\ 1 & \omega & \omega^2 \\ 1 & \omega^2 & \omega \end{pmatrix} \begin{pmatrix} 1 & 1 & 1 \\ 1 & \omega^2 & \omega \\ 1 & \omega & \omega^2 \end{pmatrix}$$

giving your answer in its simplest numerical form (that is, not in terms of ω).

[5 marks]

- (d) Solve the system of simultaneous equations

$$\begin{aligned} x + y + z &= 3 \\ x + \omega y + \omega^2 z &= -3 \\ x + \omega^2 y + \omega z &= -3 \end{aligned}$$

giving your answer in numerical form (that is, not in terms of ω).

[4 marks]

SECTION B

Answer ONE question from this section.

Abstract Algebra

5. [Maximum mark: 40]

- (i) (a) Consider the set $S = \{2, 4, 6, 8\}$. If m and n are elements of S , then $m * n$ is defined as the smallest non-negative remainder when the product mn is divided by 10.

Copy and complete the following operation table.

*	2	4	6	8
2				
4				
6				
8				

Explain why $(S, *)$ is a group.
(You may assume that S is associative under $*$.)

[6 marks]

- (b) Is $(S, *)$ cyclic? If so, name a generator.

[3 marks]

- (ii) Consider the set T of all real numbers excluding -1 . Let \circ be an operation on members of T defined by

$$a \circ b = a + ab + b.$$

- (a) Show that T is closed under the operation \circ .

That is, show that if $a \neq -1$ and $b \neq -1$, then $a + ab + b \neq -1$.

[5 marks]

- (b) Prove that (T, \circ) is a group, stating the identity element and giving the inverse of the element a .

[10 marks]

- (c) Solve the equation

$$2 \circ (x \circ (-3)) = 5$$

where $x \in T$.

[6 marks]

- (iii) (a) Define what is meant by saying that two groups $(G, \#)$ and (H, \bullet) are isomorphic.

[4 marks]

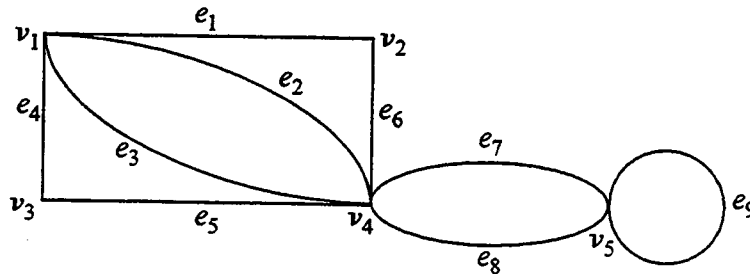
- (b) Let \mathbb{R}^+ denote the set of all positive real numbers. By considering the one-to-one correspondence $\phi: \mathbb{R} \rightarrow \mathbb{R}^+$ where $\phi(x) = e^x$, show that the group of real numbers under addition is isomorphic to the group of positive real numbers under multiplication.

[6 marks]

Graphs and Trees

6. [Maximum mark: 40]

(i) Consider the graph G given below, where v_1, v_2, v_3, v_4, v_5 are vertices connected by edges $e_1, e_2, e_3, e_4, e_5, e_6, e_7, e_8, e_9$.

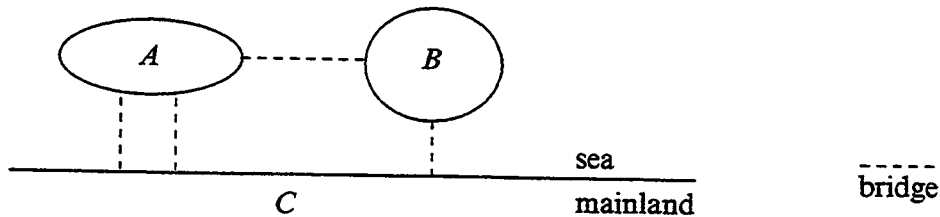


- (a) Write the adjacency matrix A of the graph G above with respect to the ordering of the vertices indicated. [4 marks]
- (b) Write the vertex-edge incidence matrix B of the graph G above with respect to the orderings of the vertices and edges indicated. [4 marks]
- (c) How many different walks of length 4 are there in G which start at v_4 and end at v_5 ?

[Note: $v_4, e_2, v_1, e_2, v_4, e_7, v_5, e_9, v_5$ is such a walk.]

[4 marks]

(ii) At a certain seaside resort, islands A and B are connected to each other and to the mainland C by a system of four bridges as illustrated below.



- (a) The resort manager wishes to add new bridges to the system, as few as necessary, so that people will be able to walk from the mainland across each bridge exactly once and end up back on the mainland. How many new bridges must be built and which pairs of the land masses A, B and C will be connected by these new bridges? [4 marks]
- (b) Before the resort manager carries out the plan in part (a), the owner of a restaurant on island B convinces him that it will be far better if people, starting from the mainland C , walk across each bridge exactly once and end up on island B , in need of refreshment. Which bridge, or bridges, as few as necessary, between which of the land masses, will make such a walk possible? [4 marks]

(This question continues on the following page)

(Question 6 continued)

(iii) (a) Explain what is meant by a complete bipartite graph, $K_{m,n}$. [3 marks]

(b) Draw the graph of $K_{4,4}$. [3 marks]

(iv) A simple graph is a graph with no loops or multiple edges. A sequence of non-negative integers is called graphic if there exists a simple graph whose vertices have precisely the terms of the sequence as the degrees of its vertices.

Decide, stating your reasons, whether or not each of the following sequences is graphic:

(a) 1, 2, 2, 3, 4, 5; [3 marks]

(b) 0, 4, 4, 5, 5. [3 marks]

(v) (a) In a certain group of eight people, each is acquainted with at least three of the others. Is it possible to seat these eight people around a large circular table so that no one is seated next to a stranger? Justify your answer with careful reasoning. [4 marks]

(b) Repeat part (a) if each person is acquainted with at least four of the others. [4 marks]

Statistics

7. [Maximum mark: 40]

- (i) The number of trucks arriving at a warehouse to be unloaded is known to have a Poisson distribution. If, on average, three trucks arrive per hour to be unloaded, find the probability that exactly seven trucks will arrive between the hours of 09:00 and 11:00 on a given Monday. [4 marks]
- (ii) Suppose that it is known that a large can of a certain paint will cover, on average, 513.3 square metres of wall with a standard deviation of 31.5 square metres. Find the probability that the mean area of the wall covered by a sample of 40 such cans of paint will be between 510.0 square metres and 520.0 square metres. [6 marks]
- (iii) The number of patients per hour arriving at the emergency room of a hospital was determined over a 100-hour period from hospital records. The information gathered is given in the following table.

Number of patients	12-14	15-17	18-20	21-23	24-26	27-29
Frequency	7	21	27	19	18	8

- (a) Find the mean and standard deviation of this sample. Give your answers correct to two decimal places. [6 marks]
- (b) Using the mean and standard deviation found in part (a), find a 95% confidence interval for the average number of patients arriving per hour at the emergency room. [4 marks]
- (c) Test at the 5% level of significance, whether the population mean μ , the average number of patients per hour arriving at the emergency room for treatment, is 20. [6 marks]
- (d) Copy and complete the following table.

x	≤ 11	12-14	15-17	18-20	21-23	24-26	27-29	≥ 30
Observed frequencies, f_o	0	7	21	27	19	18	8	0
Expected frequencies, f_e			19.2	26.2			5.6	2.2

Test, at the 5% level of significance, whether the distribution is Poisson with a mean of 20 patients per hour.

[14 marks]

Analysis and Approximation

8. [Maximum mark: 40]

(i) The discrete points $x_0, x_1, x_2, \dots, x_{2n}$, with $x_k = a + kh$ and $h = \frac{b-a}{2n}$, divide the interval $a \leq x \leq b$ into $2n$ equal sub-intervals.

(a) Using Simpson's rule, write down an estimate, S_{2n} , for the definite integral $\int_a^b f(x)dx$ based on these points, and an expression involving h for the error $\int_a^b f(x)dx - S_{2n}$, given that f is a function for which $f^{(4)}(x)$ exists on the interval $a \leq x \leq b$.

[4 marks]

(b) The following table lists some values of x and $f(x) = \frac{1}{x}$ for $2 \leq x \leq 7$.

x	2	2.625	3.25	3.875	4.5	5.125	5.75	6.375	7
$f(x)$	0.5	0.3810	0.3077	0.2581	0.2222	0.1951	0.1739	0.1569	0.1429

Using these values, find the Simpson's rule estimate, S_8 , of the definite integral $\int_2^7 \frac{1}{x} dx$, and show that this estimate is accurate to three decimal places.

[5 marks]

(c) Find an upper bound on the magnitude of the error when Simpson's rule with eight sub-intervals is used to approximate the integral $\int_2^7 \frac{1}{x} dx$.

[5 marks]

(d) How many sub-intervals would be required to ensure that the approximation of $\int_2^7 \frac{1}{x} dx$ by S_{2n} is correct to four decimal places?

[6 marks]

(ii) Show that the ratio test cannot be used to establish the convergence or divergence of the series

$$1 + \frac{1}{3} + \frac{1}{5} + \frac{1}{7} + \dots + \frac{1}{2k-1} + \dots$$

Use the integral test to determine whether the series converges or diverges.

[9 marks]

(This question continues on the following page)

(Question 8 continued)

- (iii) State the mean value theorem for the function $f(x)$ which is defined on the interval $a \leq x \leq b$. Apply the mean value theorem to the function $f(x) = \arcsin x$ on the interval $0.5 \leq x \leq 0.6$ to show, without the use of a calculator, that

$$\frac{\pi}{6} + \frac{\sqrt{3}}{15} < \arcsin 0.6 < \frac{\pi}{6} + \frac{1}{8}$$

[11 marks]
