



88145201

**GEOGRAPHY  
HIGHER LEVEL AND STANDARD LEVEL  
PAPER 1**

Candidate session number

--	--	--	--	--	--	--	--	--	--

Monday 17 November 2014 (afternoon)

Examination code

1 hour 30 minutes

8	8	1	4	-	5	2	0	1
---	---	---	---	---	---	---	---	---

**INSTRUCTIONS TO CANDIDATES**

- Do not open this examination paper until instructed to do so.
- Section A: answer all questions.
- Section B: answer one question.
- Write your answers on the lines in the boxes provided. If you need to continue your answer, use the blank space immediately below the lines provided in the box.
- Use examples, maps and/or diagrams where relevant.
- The maximum mark for this examination paper is *[60 marks]*.



20EP01

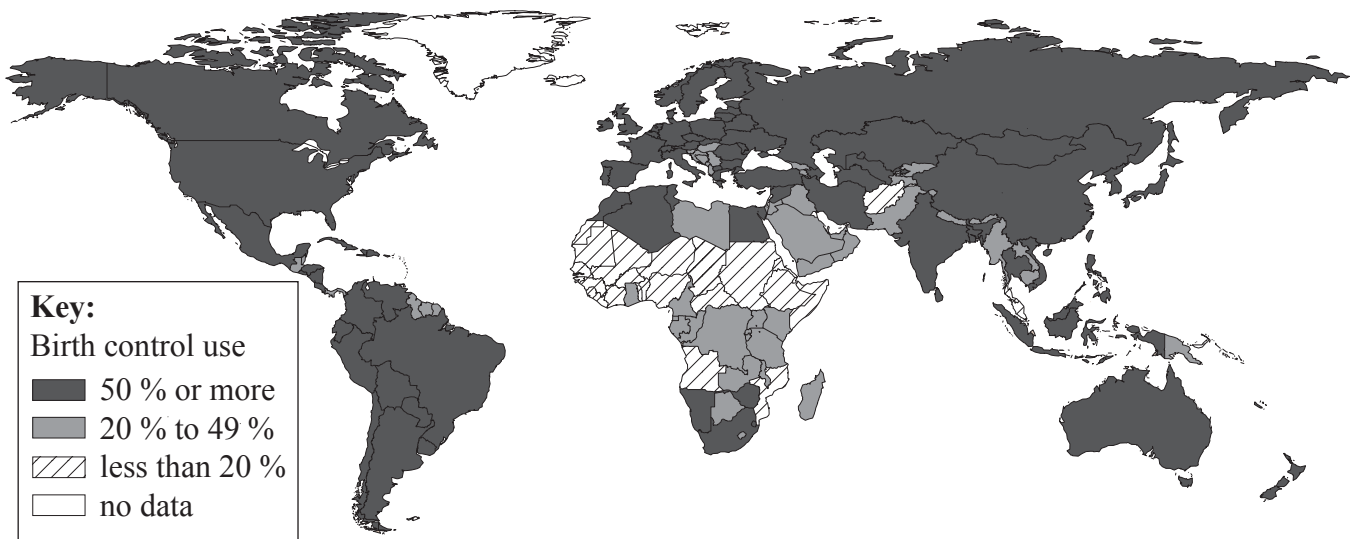
**Core Theme – Patterns and Change**

**SECTION A**

Answer **all** questions. Write your answers on the lines in the boxes provided. If you need to continue your answer, use the blank space immediately below the lines provided in the box.

**1. Populations in transition**

The map shows the percentage of women aged between 15 and 49 who are using some type of birth control.



[Source: Andrew Jack 2012, Bottlenecks that block the chain of supply, *Financial Times Health*, 9 July. Used under licence from the *Financial Times*. All rights reserved.]

*(This question continues on the following page)*



*(Question 1 continued)*

(a) Describe the global pattern of birth control use shown on the map.

[4]

.....

.....

.....

.....

.....

.....

.....

.....

*(This question continues on the following page)*



20EP03

**Turn over**

*(Question 1 continued)*

- (b) Suggest **two** reasons why the percentage of women using some type of birth control is low in some countries. [2+2]

1.	.....
	.....
	.....
	.....
2.	.....
	.....
	.....
	.....

- (c) Explain **two** reasons why the Crude Death Rate is falling in most low-income countries. [2+2]

1.	.....
	.....
	.....
	.....
2.	.....
	.....
	.....
	.....

Please **do not** write on this page.

Answers written on this page  
will not be marked.

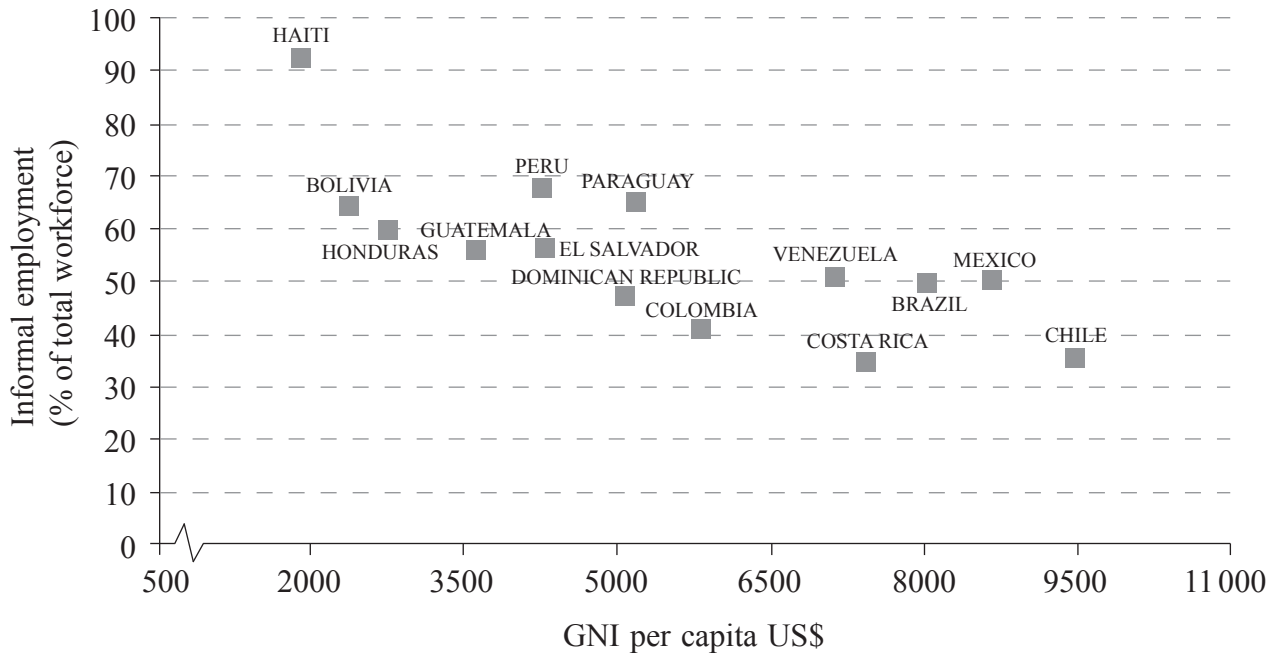


20EP05

Turn over

## 2. Disparities in wealth and development

The graph below shows the relationship between GNI per capita in US\$ and the percentage of the workforce who work in informal employment, for a selection of Latin American countries in 2012.



[Source: adapted from [www.latameconomy.org](http://www.latameconomy.org)]

(a) (i) Describe the relationship shown on the graph.

[3]

.....

.....

.....

.....

.....

.....

(This question continues on the following page)



*(Question 2 continued)*

(ii) Suggest **two** possible reasons for this relationship.

[2+2]

1.	.....
	.....
	.....
	.....
2.	.....
	.....
	.....
	.....

(b) Briefly explain how debt relief can reduce global disparities.

[4]

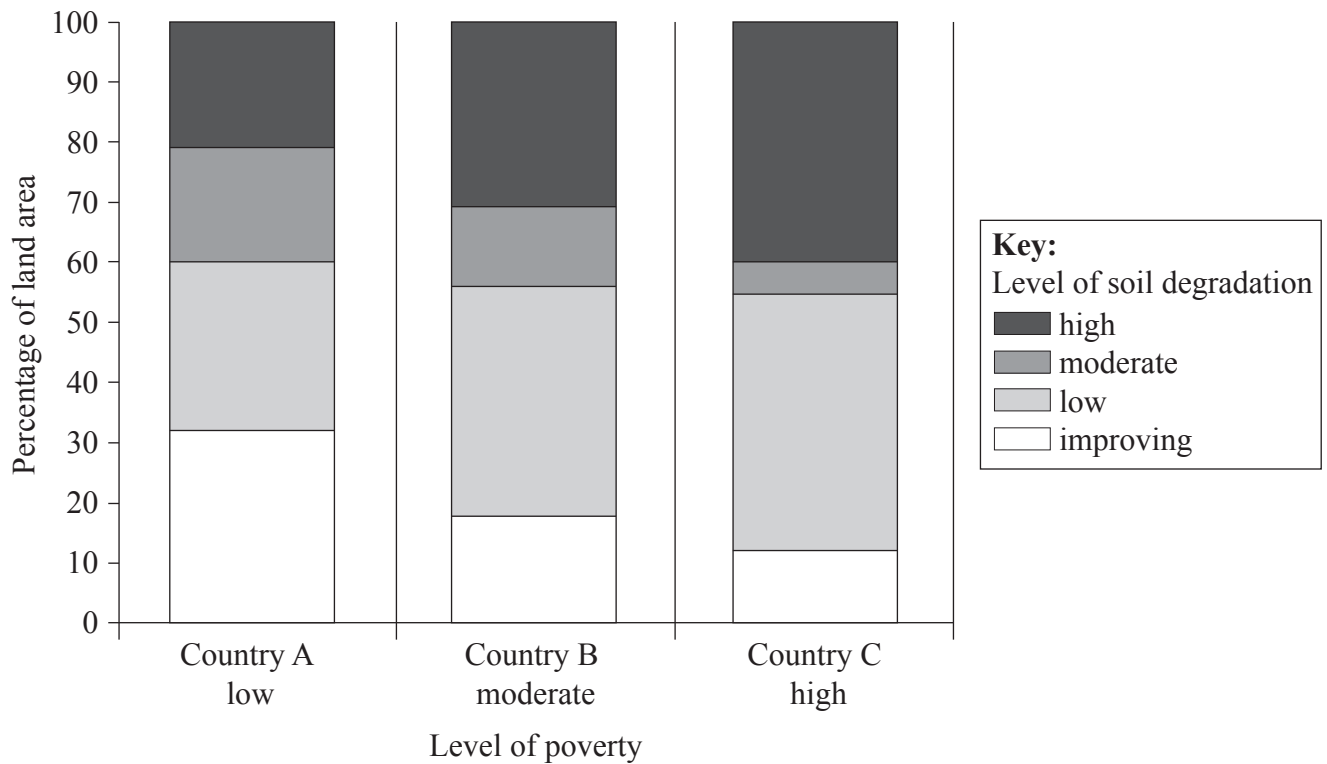
.....
.....
.....
.....
.....
.....
.....
.....
.....



Turn over

### 3. Patterns in environmental quality and sustainability

The diagram shows the level of poverty and the level of soil degradation in three countries.



[Source: adapted from FAO (2011), *The state of the world's land and water resources for food and agriculture (SOLAW) – Managing systems at risk*. Food and Agriculture Organization of the United Nations, Rome and Earthscan, London. Reproduced with permission.]

(This question continues on the following page)





*(Question 3 continued)*

- (a) Describe the relationship between the level of poverty and the level of soil degradation shown on the diagram. [3]

.....

.....

.....

.....

.....

.....

- (b) Explain **one** strategy that has been successful in reducing soil degradation. [3]

.....

.....

.....

.....

.....

.....

*(This question continues on the following page)*



20EP09

**Turn over**

*(Question 3 continued)*

(c) Explain the importance of maintaining biodiversity in tropical rainforests.

[5]

.....

.....

.....

.....

.....

.....

.....

.....

.....

.....



Please **do not** write on this page.

Answers written on this page  
will not be marked.

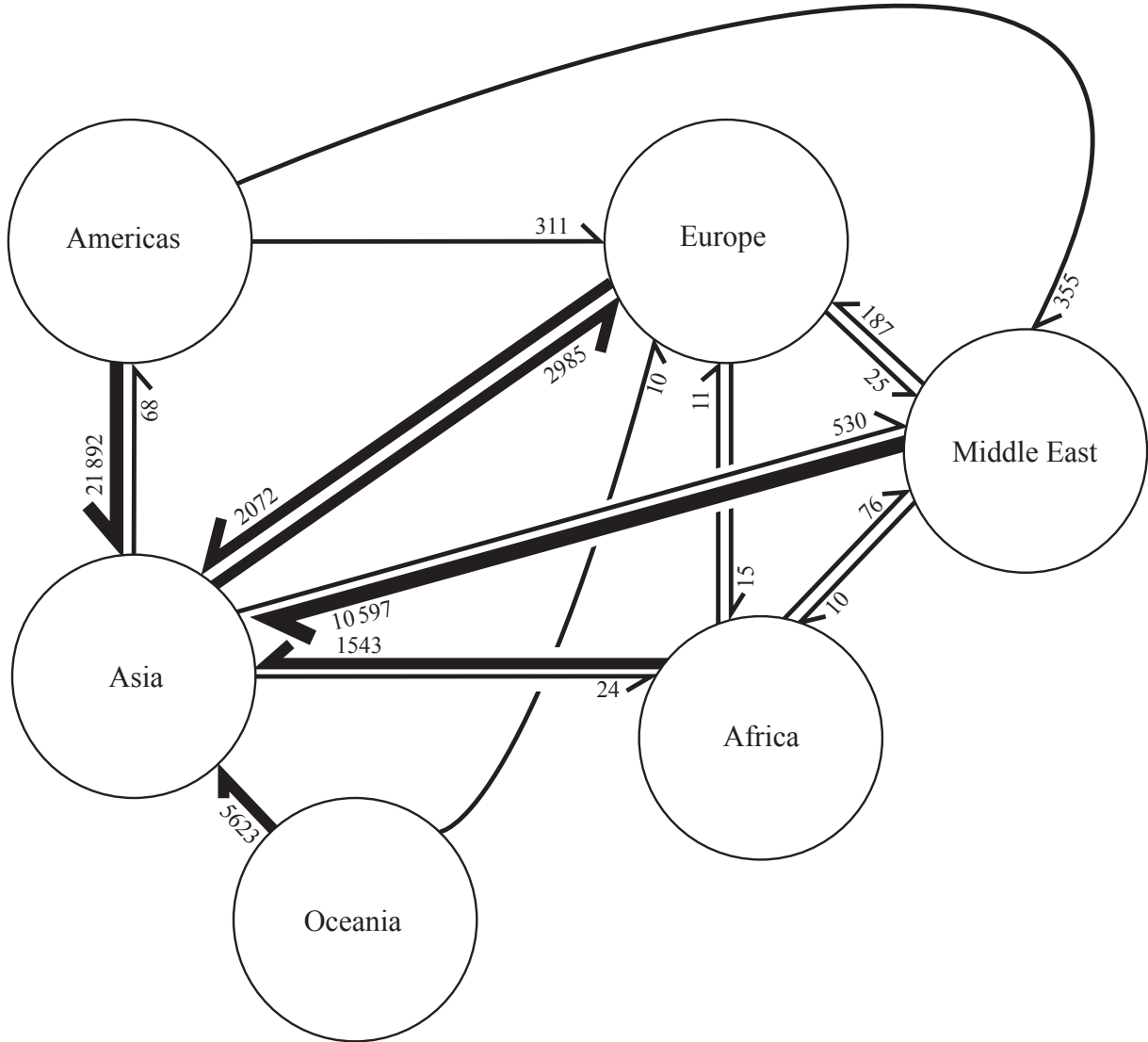


20EP11

Turn over

#### 4. Patterns in resource consumption

The diagram shows the international movement of e-waste\*. The numbers indicate the volume in metric tons. The arrows indicate the direction of movement and their width is proportional to the volume of movement.



[Source: adapted from J Lepawsky and C McNabb, (2010), Mapping international flows of electronic waste. *The Canadian Geographer / Le Géographe canadien* 54 (2), pages 177–195  
©/ Canadian Association of Geographers / L'Association canadienne des géographes]

\* e-waste: electronic waste including computers, printers, cell phones, etc

(This question continues on the following page)



*(Question 4 continued)*

- (a) With reference to the diagram, describe the movement of e-waste into **and** out of Asia. [4]

.....

.....

.....

.....

.....

.....

.....

.....

*(This question continues on the following page)*



*(Question 4 continued)*

- (b) Briefly explain the limitations of recycling as a strategy to reduce global resource consumption. [3]

.....

.....

.....

.....

.....

.....

*(This question continues on the following page)*



*(Question 4 continued)*

- (c) Explain the neo-Malthusian view of the relationship between population size and resource consumption. [4]

.....

.....

.....

.....

.....

.....

.....

.....



**SECTION B**

Answer **one** question. Write your answer on the lines in the box provided.

- 5. Referring to **one or more** countries, discuss the view that internal (national) migration can help to reduce economic and social disparities. [15]
- 6. "We still have the resources to live as wastefully as we want." Discuss this statement. [15]
- 7. "The Millennium Development Goals (MDGs) are unlikely to be achieved without a dramatic increase in global energy consumption." Discuss this statement. [15]

A large rectangular box containing horizontal dotted lines for writing answers.





A large rectangular area containing horizontal dotted lines for writing.



20EP17

**Turn over**

Dotted lines for writing.



Dotted lines for writing.



20EP19

Turn over

Dotted lines for writing.

