

HONG KONG EXAMINATIONS AND ASSESSMENT AUTHORITY
HONG KONG DIPLOMA OF SECONDARY EDUCATION EXAMINATION

CHEMISTRY PAPER 1 (Sample Paper)

Time allowed: 2 hours 30 minutes
This paper must be answered in English.

GENERAL INSTRUCTIONS

1. There are **TWO** sections, A and B, in this Paper. Section A carries 36 marks and Section B carries 84 marks. You are advised to finish Section A in about 45 minutes and Section B in about 105 minutes.
2. Section A consists of multiple-choice questions in this question book, while Section B contains conventional questions printed separately in Question-Answer Book B.
3. Answers to Section A should be marked on the Multiple-choice Answer Sheet while answers to Section B should be written in the spaces provided in Question-Answer Book B. **The Answer Sheet for Section A and the Question-Answer Book for Section B must be handed in separately at the end of the examination.**

SECTION A (MULTIPLE-CHOICE QUESTIONS)

INSTRUCTIONS FOR SECTION A

1. Read the instructions on the Answer Sheet carefully. Stick a barcode label and insert the information required in the spaces provided.
2. When told to open this book, you should check that all the questions are there. Look for the words '**END OF SECTION A**' after the last question.
3. All questions carry equal marks.
4. **ANSWER ALL QUESTIONS.** You are advised to use an HB pencil to mark all the answers on the Answer Sheet, so that wrong marks can be completely erased with a clean rubber.
5. You should mark only **ONE** answer for each question. If you mark more than one answer, you will receive **NO MARKS** for that question.
6. No marks will be deducted for wrong answers.

Not to be taken away before the
end of the examination session

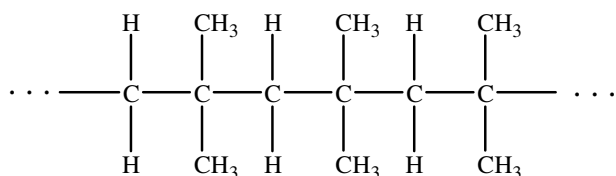
This section consists of two parts. There are 24 questions in PART I and 12 questions in PART II.

Choose the best answer for each question.

Candidates may refer to the Periodic Table printed on the back of this Question Book.

PART I

- Upon cracking, one molecule of decane ($C_{10}H_{22}$) gives two molecules of propene and one molecule of an alkane (X). What is X ?
 - C_4H_6
 - C_4H_{10}
 - C_7H_{14}
 - C_7H_{16}
- In which of the following compounds does sulphur exhibit the lowest oxidation number ?
 - $Na_2S_2O_3$
 - $MgSO_4$
 - $KHSO_3$
 - $H_2S_2O_7$
- Which of the following correctly describes the sequence of procedures to separate sand, salt and water from a mixture of sand and salt solution ?
 - filtration, evaporation
 - filtration, distillation
 - crystallisation, filtration
 - crystallisation, filtration, distillation
- The structure of polymer X is shown below.



What is the monomer of X ?

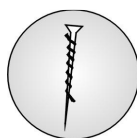
- 1,1-dimethylethene
- 1,2-dimethylethene
- methylpropene
- but-1-ene

Directions: Questions 5 to 6 refer to the following experiment.

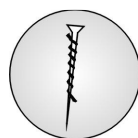
Rust indicator containing potassium hexacyanoferrate(III) solution was poured into the following glass dishes to cover the iron nails, which were wrapped with different metal strips. The dishes were allowed to stand in air for some time.



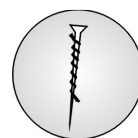
silver strip
dish 1



zinc strip
dish 2



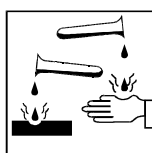
copper strip
dish 3



magnesium strip
dish 4

5. If the iron nail rusts, what would the colour of the rust indicator be around the nail ?
- yellow
 - brown
 - red
 - blue
6. In which of the dishes would the iron nail rust ?
- dish 1 only
 - dish 2 only
 - dish 1 and dish 3 only
 - dish 2 and dish 4 only
7. The atomic number of an element X is 18. An atom of X has a mass number of 40. The atom has
- 18 protons, 22 neutrons and 18 electrons.
 - 18 protons, 22 neutrons and 22 electrons.
 - 18 protons, 40 neutrons and 18 electrons.
 - 22 protons, 22 neutrons and 18 electrons.

8. The following hazard warning labels are displayed on the reagent bottle of an acid.



What information about this acid can be obtained from the labels ?

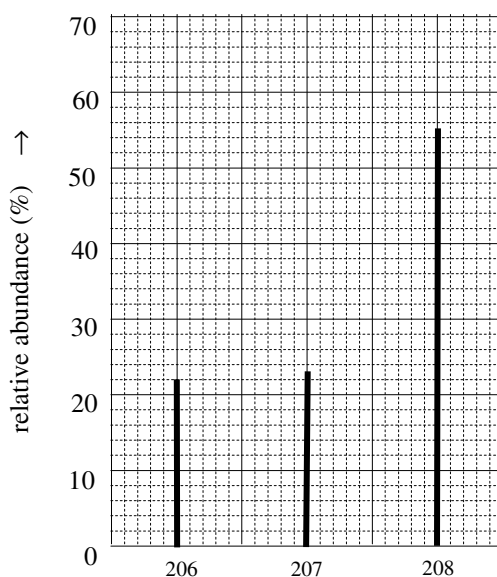
- It is very concentrated and flammable.
- It is very concentrated and oxidising.
- It is flammable and corrosive.
- It is corrosive and oxidising.

9. Which of the following statements concerning alkenes is INCORRECT ?
- A. They can decolourise a solution of bromine.
 - B. They can decolourise red litmus solution.
 - C. They can decolourise acidified potassium permanganate solution.
 - D. They can be polymerised to form addition polymers.

10. Which of the following reactions is endothermic ?

- A. $\text{Zn(s)} + \text{Cu}^{2+}(\text{aq}) \rightarrow \text{Zn}^{2+}(\text{aq}) + \text{Cu(s)}$
- B. $\text{CaCO}_3(\text{s}) + 2\text{H}^+(\text{aq}) \rightarrow \text{Ca}^{2+}(\text{aq}) + \text{H}_2\text{O(l)} + \text{CO}_2(\text{g})$
- C. $2\text{C}_4\text{H}_{10}(\text{g}) + 13\text{O}_2(\text{g}) \rightarrow 8\text{CO}_2(\text{g}) + 10\text{H}_2\text{O(l)}$
- D. $\text{C}_9\text{H}_{20}(\text{l}) \rightarrow \text{C}_2\text{H}_6(\text{g}) + \text{C}_3\text{H}_6(\text{g}) + \text{C}_4\text{H}_8(\text{g})$

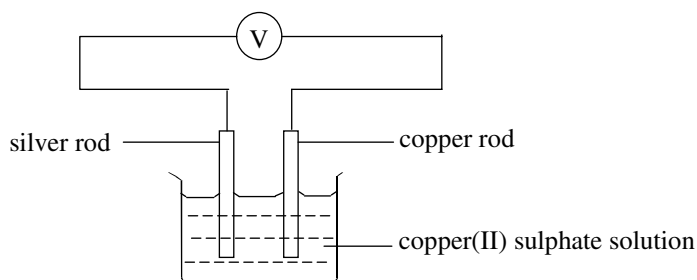
11. Element X has three isotopes, ^{206}X , ^{207}X and ^{208}X . The graph below shows the relative abundances of the isotopes.



What is the relative atomic mass of X ?

- A. 206.8
- B. 207.0
- C. 207.3
- D. 207.5

12. Which of the following combinations concerning the set-up shown below is correct after a current is passed through the external circuit for some time ?



Mass of anode Colour of copper(II) sulphate solution

- A. increases no change
 B. decreases no change
 C. increases becomes lighter
 D. decreases becomes lighter
13. Standard enthalpy changes of several reactions, as denoted by x, y and z respectively, are listed in the table below.

Reaction	Standard enthalpy change / kJ mol^{-1}
$\text{C(s)} + \text{O}_2(\text{g}) \rightarrow \text{CO}_2(\text{g})$	x
$\text{H}_2(\text{g}) + \frac{1}{2} \text{O}_2(\text{g}) \rightarrow \text{H}_2\text{O(l)}$	y
$\text{C(s)} + 2\text{H}_2(\text{g}) \rightarrow \text{CH}_4(\text{g})$	z

For the reaction $\text{CH}_4(\text{g}) + 2\text{O}_2(\text{g}) \rightarrow \text{CO}_2(\text{g}) + 2\text{H}_2\text{O(l)}$, which of the following is a reasonable estimate of its standard enthalpy change ?

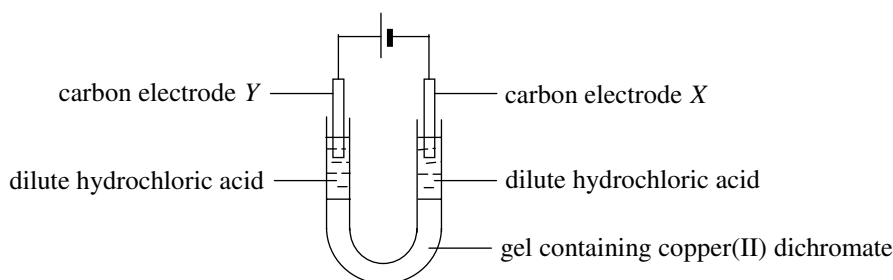
- A. $x + y - z$
 B. $-x - y + z$
 C. $x + 2y - z$
 D. $-x - 2y - z$
14. 500 cm^3 of calcium hydroxide solution contains 3.7 g of calcium hydroxide. What is the molarity of the solution ?
- (Relative atomic masses : H = 1.0, O = 16.0, Ca = 40.1)
- A. 0.05 M
 B. 0.10 M
 C. 0.13 M
 D. 0.26 M
15. Which of the following samples of gases contains the smallest number of molecules ?
- (Relative atomic masses : H = 1.0, C = 12.0, N = 14.0, O = 16.0, S = 32.1)
- A. 10 g of NO_2
 B. 10 g of CO_2
 C. 10 g of H_2S
 D. 10 g of C_2H_4

Directions: Questions 16 to 18 refer to the following information.

In an experiment to determine the concentration of sulphuric acid in a brand of toilet cleaner, 25.0 cm³ of the cleaner was first diluted to 250.0 cm³ with distilled water. Upon titration with 0.950 M sodium hydroxide solution using phenolphthalein as indicator, 25.0 cm³ of the diluted cleaner required 27.1 cm³ of the sodium hydroxide solution to reach the end point.

16. Which of the following types of apparatus should be used to measure 25.0 cm³ of the toilet cleaner ?
- A. pipette
 - B. burette
 - C. measuring cylinder
 - D. volumetric flask
17. What is the colour change at the end point of the titration ?
- A. from colourless to pink
 - B. from pink to colourless
 - C. from yellow to red
 - D. from red to yellow
18. What is the concentration of sulphuric acid in the undiluted toilet cleaner ?
- A. 1.29 M
 - B. 2.58 M
 - C. 5.15 M
 - D. 10.3 M
19. In an experiment, 10.0 g of KCl(s) was added to 100 cm³ of water. The mixture was then stirred until all the KCl(s) dissolved. The temperature of the mixture was found to drop by 5.5°C. What is the molar enthalpy change, in kJ mol⁻¹, of the dissolving process of KCl(s) under the conditions of the experiment ?
- (Specific heat capacity of the mixture = 4.2 J g⁻¹ K⁻¹ ; Density of water = 1.0 g cm⁻³ ;
Relative atomic masses: K = 39.1, Cl = 35.5)
- A. 2.31
 - B. 2.54
 - C. 17.23
 - D. 18.96
20. A black powder is suspected to be carbon or a mixture of carbon and copper(II) oxide. Which of the following methods can be used to identify the black powder ?
- (1) adding dilute sulphuric acid to the powder
 - (2) adding sodium hydroxide solution to the powder
 - (3) heating the powder strongly
- A. (1) only
 - B. (2) only
 - C. (1) and (3) only
 - D. (2) and (3) only

21. Consider the following experiment :



Which of the following statements concerning the experiment are correct ?

- (1) Gas bubbles are evolved at electrode X.
 (2) An orange colour gradually appears in the solution around electrode Y.
 (3) The experiment can be used to show that ions migrate towards oppositely charged electrodes.
- A. (1) and (2) only
 B. (1) and (3) only
 C. (2) and (3) only
 D. (1), (2) and (3)
22. Iodine is a solid at room temperature and pressure. Which of the following statements concerning the structure of iodine is/are correct ?
- (1) Iodine has a giant covalent structure.
 (2) Iodine molecules are held together by van der Waals' forces.
 (3) Iodine atoms are held together in pairs by covalent bonds.
- A. (1) only
 B. (2) only
 C. (1) and (3) only
 D. (2) and (3) only

Directions : Each question below (Questions 23 to 24) consists of two separate statements. Decide whether each of the two statements is true or false; if both are true, then decide whether or not the second statement is a *correct* explanation of the first statement. Then select one option from A to D according to the following table :

- | |
|--|
| <p>A. Both statements are true and the 2nd statement is a correct explanation of the 1st statement.
 B. Both statements are true but the 2nd statement is NOT a correct explanation of the 1st statement.
 C. The 1st statement is false but the 2nd statement is true.
 D. Both statements are false.</p> |
|--|

- | 1st statement | 2nd statement |
|---|---|
| 23. Bromine water can be used to distinguish between sodium sulphate solution and sodium sulphite solution. | Bromine can be reduced by sodium sulphite to colourless bromide ions, but not by sodium sulphate. |
| 24. Carbon dioxide and silicon dioxide have similar physical properties. | The atoms of carbon and silicon have the same number of electrons in their outermost shells. |

END OF PART I

PART II

25. Which of the following changes will NOT increase the initial rate of the reaction between 50 cm³ of 1 M HCl(aq) and excess calcium carbonate granules ?

- A. using 100 cm³ of HCl(aq) instead of 50 cm³ of HCl(aq)
- B. using 2 M HCl(aq) instead of 1 M HCl(aq)
- C. using 25 cm³ of 2 M HCl(aq) instead of 50 cm³ of 1 M HCl(aq)
- D. using calcium carbonate powder instead of calcium carbonate granules

26. Which of the following conversions is a substitution reaction ?

- A. $\text{CH}_3\text{CH}_2\text{CH}=\text{CH}_2 \rightarrow \text{CH}_3\text{CH}_2\text{CHBrCH}_3$
- B. $\text{CH}_3\text{CH}_2\text{CH}_2\text{CH}_2\text{OH} \rightarrow \text{CH}_3\text{CH}_2\text{CH}_2\text{CHO}$
- C. $\text{CH}_3\text{CH}_2\text{CHOHCH}_3 \rightarrow \text{CH}_3\text{CH}_2\text{CHBrCH}_3$
- D. $\text{CH}_3\text{CH}_2\text{CH}_2\text{CO}_2\text{H} \rightarrow \text{CH}_3\text{CH}_2\text{CH}_2\text{CH}_2\text{OH}$

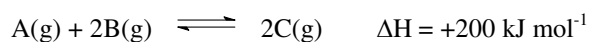
27. A compound with an ester functional group has a molecular formula of C₄H₈O₂. What is the number of possible structures of the compound ?

- A. 3
- B. 4
- C. 5
- D. 6

28. Which type of reaction is involved in converting propan-2-ol to propene ?

- A. addition
- B. oxidation
- C. dehydration
- D. substitution

29. Consider the following system at equilibrium :

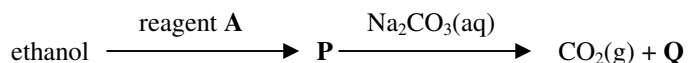


What would be the effect on the rates of the forward and backward reactions if the temperature of the system were lowered ?

- | | <u>forward reaction rate</u> | <u>backward reaction rate</u> |
|----|------------------------------|-------------------------------|
| A. | decreases | increases |
| B. | decreases | no change |
| C. | decreases | decreases |
| D. | increases | decreases |

30. Hydrogen, methane and butane are commonly used fuels. Which of the following statements is correct?
- Hydrogen is a more environmental friendly fuel than butane.
 - Methane burns with a more sooty flame than butane.
 - Hydrogen, methane and butane all belong to the same homologous series.
 - On complete combustion, one mole of methane releases more carbon dioxide than one mole of butane.

31. The following is a series of reactions starting from ethanol :



Which of the following correctly describes the reagent A and the product Q ?

	<u>Reagent A</u>	<u>Product Q</u>
A.	dehydrating agent	ethene
B.	dehydrating agent	ethane
C.	oxidising agent	sodium ethanoate
D.	oxidising agent	ethanoic acid

Directions: Questions 32 to 33 refer to the following information.

An experiment was performed on the study of the rate of reaction between hydrochloric acid and sodium thiosulphate solution. 10 cm³ portions of 2.0 M hydrochloric acid were added to four separate conical flasks, W, X, Y and Z, each containing sodium thiosulphate solution which was prepared respectively as follows:

conical flask	sodium thiosulphate solution		volume of water
	concentration	volume	
W	1.0 M	80 cm ³	10 cm ³
X	1.5 M	60 cm ³	30 cm ³
Y	2.5 M	30 cm ³	60 cm ³
Z	3.0 M	20 cm ³	70 cm ³

32. In which of the above conical flasks does the reaction proceed at the fastest rate ?
- W
 - X
 - Y
 - Z
33. Which of the following apparatus should be used when carrying out the above experiment in addition to the conical flasks ?
- syringe
 - stop watch
 - measuring cylinder
- (1) and (2) only
 - (1) and (3) only
 - (2) and (3) only
 - (1), (2) and (3)

34. Which of the following statements is / are correct concerning the members of the homologous alkenes ?
- (1) Members of higher molecular mass are often used to make soap.
 - (2) The first few members are often used to make polymers.
 - (3) The members can commonly react with hydrogen halides to give halohydrocarbons.
- A. (1) only
 - B. (2) only
 - C. (1) and (3) only
 - D. (2) and (3) only

Directions : Each question below (Questions 35 to 36) consists of two separate statements. Decide whether each of the two statements is true or false; if both are true, then decide whether or not the second statement is a *correct* explanation of the first statement. Then select one option from A to D according to the following table :

- A. Both statements are true and the 2nd statement is a correct explanation of the 1st statement.
- B. Both statements are true but the 2nd statement is NOT a correct explanation of the 1st statement.
- C. The 1st statement is false but the 2nd statement is true.
- D. Both statements are false.

1st statement	2nd statement
35. Catalysts are used in many industrial processes.	Catalysts would not affect the percentage of the product in the equilibrium mixture.
36. The reaction of ethanoic acid with ethanol is a neutralization.	Water is one of the products in the reaction of ethanoic acid and ethanol.

END OF PART II

END OF SECTION A

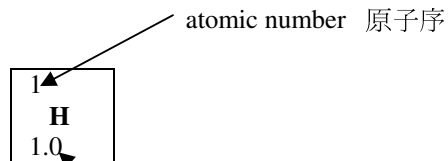
This is a blank page.

PERIODIC TABLE 週期表

HKDSE-CHEM 1A-12 (Sample Paper)

62

GROUP 族



																	0										
												2															
												1						He									
												1.0						4.0									
												III		IV	V	VI	VII										
I	II											5	6	7	8	9	10										
3	4											B	C	N	O	F	Ne										
Li	Be											10.8	12.0	14.0	16.0	19.0	20.2										
6.9	9.0											13	14	15	16	17	18										
11	12											Al	Si	P	S	Cl	Ar										
Na	Mg											27.0	28.1	31.0	32.1	35.5	40.0										
23.0	24.3																										
19	20	21	22	23	24	25	26	27	28	29	30	31	32	33	34	35	36										
K	Ca	Sc	Ti	V	Cr	Mn	Fe	Co	Ni	Cu	Zn	Ga	Ge	As	Se	Br	Kr										
39.1	40.1	45.0	47.9	50.9	52.0	54.9	55.8	58.9	58.7	63.5	65.4	69.7	72.6	74.9	79.0	79.9	83.8										
37	38	39	40	41	42	43	44	45	46	47	48	49	50	51	52	53	54										
Rb	Sr	Y	Zr	Nb	Mo	Tc	Ru	Rh	Pd	Ag	Cd	In	Sn	Sb	Te	I	Xe										
85.5	87.6	88.9	91.2	92.9	95.9	(98)	101.1	102.9	106.4	107.9	112.4	114.8	118.7	121.8	127.6	126.9	131.3										
55	56	57 *	72	73	74	75	76	77	78	79	80	81	82	83	84	85	86										
Cs	Ba	La	Hf	Ta	W	Re	Os	Ir	Pt	Au	Hg	Tl	Pb	Bi	Po	At	Rn										
132.9	137.3	138.9	178.5	180.9	183.9	186.2	190.2	192.2	195.1	197.0	200.6	204.4	207.2	209.0	(209)	(210)	(222)										
87	88	89 **	104	105																							
Fr	Ra	Ac	Rf	Db																							
(223)	(226)	(227)	(261)	(262)																							

*	58	59	60	61	62	63	64	65	66	67	68	69	70	71
	Ce	Pr	Nd	Pm	Sm	Eu	Gd	Tb	Dy	Ho	Er	Tm	Yb	Lu
	140.1	140.9	144.2	(145)	150.4	152.0	157.3	158.9	162.5	164.9	167.3	168.9	173.0	175.0
**	90	91	92	93	94	95	96	97	98	99	100	101	102	103
	Th	Pa	U	Np	Pu	Am	Cm	Bk	Cf	Es	Fm	Md	No	Lr
	232.0	(231)	238.0	(237)	(244)	(243)	(247)	(247)	(251)	(252)	(257)	(258)	(259)	(260)

B

HONG KONG EXAMINATIONS AND ASSESSMENT AUTHORITY
HONG KONG DIPLOMA OF SECONDARY EDUCATION EXAMINATION

CHEMISTRY PAPER 1 (Sample Paper)

SECTION B : Question-Answer Book B

This paper must be answered in English.

INSTRUCTIONS

- (1) Write your Candidate Number in the space provided on Page 1.
- (2) Stick barcode labels in the spaces provided on Pages 1, 3, 5 and 7.
- (3) Refer to the general instructions on the cover of the Question Book for Section A.
- (4) This section consists of TWO parts, Part I and Part II. Part I carries 56 marks and Part II carries 28 marks. The marks to each question are indicated in brackets at the end of the question.
- (5) Answer ALL questions in each part. Write your answers in the spaces provided in this Question-Answer Book. Do not write in the margins. Answers written in the margins will not be marked.
- (6) Supplementary answer sheets will be provided on request. Write your candidate number, fill in the question number and stick a barcode label on each sheet. Tie them loosely but securely with a string INSIDE this Question-Answer Book.
- (7) A Periodic Table is printed on the back of this Question-Answer Book. Atomic numbers and relative atomic masses of elements can be obtained from the Periodic Table.

Please stick the barcode label here.

Candidate Number

**Marker's
Use Only**

**Examiner's
Use Only**

Marker No.

Examiner No.

Question No.	Marks	Marks
1		
2		
3		
4		
5		
6		
7		
8		
9		
10		
11		
12		
13		
14		
Total		

PART I

Answer **ALL** questions. Write your answers in the spaces provided.

1. State whether each of the following statements is true or false. Explain your answer in each case.
- (a) The melting point of sodium chloride is much higher than that of methane because the ionic bonding in sodium chloride is much stronger than the covalent bonding in methane.
- (b) When concentrated sulphuric acid is diluted, water should be added slowly to the acid.
- (c) A is a stronger acid than B, so that pH of an aqueous solution of A must be lower than that of B.

(6 marks)

Answers written in the margins will not be marked.

Answers written in the margins will not be marked.

Answers written in the margins will not be marked.

Please stick the barcode here.

2. Polyethene is used in making shopping bags and its monomer is ethene.
- (a) Draw the electronic diagram of ethene, showing electrons in the *outermost shells* only.
- (b) Name the type of polymerisation involved in the production of polyethene.
- (c) State ONE property of polyethene that makes it suitable for making shopping bags.
- (d) (i) Suggest ONE way to dispose of polyethene wastes.
- (ii) Give ONE advantage and ONE disadvantage of the way you have suggested in (i).

(6 marks)

Answers written in the margins will not be marked.

Answers written in the margins will not be marked.

Answers written in the margins will not be marked.

3. X , Y and Z are three different metals. The table below lists the results of three experiments carried out using the metals or their oxides.

Experiment	X	Y	Z
Adding metal to cold water	formation of a colourless gas	no observable change	no observable change
Adding metal to copper(II) sulphate solution	formation of a colourless gas and a reddish brown solid	formation of a reddish brown solid	no observable change
Heating metal oxide with carbon powder	no observable change	formation of a solid with metallic lustre	formation of a solid with metallic lustre

- (a) What is the colourless gas formed when X is added to cold water ? Suggest a test for the gas.
- (b) Name the type of reaction that occurs when the oxide of Y is heated with carbon powder.
- (c) Arrange the three metals in order of increasing reactivity. Explain your answer.
- (d) Why is a colourless gas formed when X is added to copper(II) sulphate solution ?

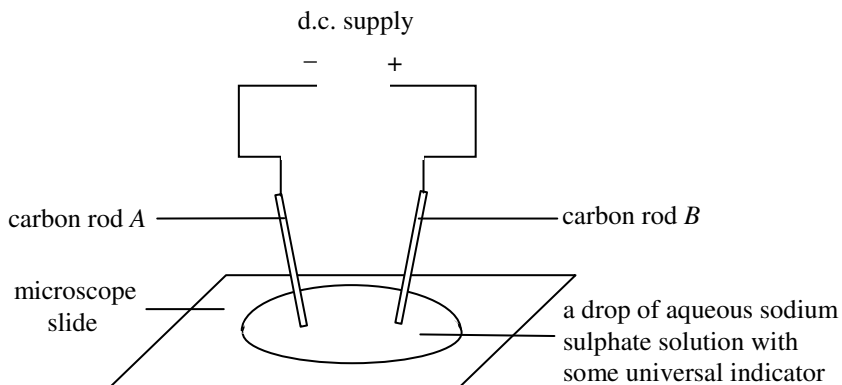
(7 marks)

Answers written in the margins will not be marked.

Answers written in the margins will not be marked.

Answers written in the margins will not be marked.

4. A student used the set-up shown below to conduct a microscale experiment on electrolysis.



- (a) (i) The initial colour of the drop shown above was green. State the colour change of the liquid around carbon rod A after a current was passed through the circuit for some time. Explain your answer with the help of a half equation.
- (ii) A gas was liberated at carbon rod B. What was the gas? Explain its formation.
- (b) Some objects readily available in daily life contain carbon rods which can be used in this experiment. Suggest ONE such object.

(6 marks)

Answers written in the margins will not be marked.

Answers written in the margins will not be marked.

Answers written in the margins will not be marked.

5. In an experiment to determine the enthalpy change of combustion of ethanol, a calorimeter containing 200.0 g of water was used. Burning 0.185 g of ethanol caused the temperature of the water in the calorimeter to rise by 6.0°C.

(a) Draw a labelled diagram of the set-up used in the experiment.

(b) Assuming that the heat capacity of the calorimeter is negligible, calculate the enthalpy change of combustion of ethanol, in kJ mol^{-1} , under the conditions of the experiment.

(Specific heat capacity of water = $4.2 \text{ J g}^{-1} \text{ K}^{-1}$)

(c) State ONE other assumption made in your calculation.

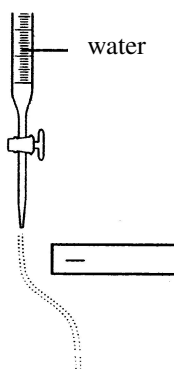
(6 marks)

Answers written in the margins will not be marked.

Answers written in the margins will not be marked.

Answers written in the margins will not be marked.

6. A negatively charged rod was brought near a jet of water running out from a burette. The jet of water was deflected as shown :



- (a) With reference to the structure of water, explain why the jet of water was deflected.
- (b) State the effect on the jet of water if the negatively charged rod is replaced by a positively charged rod. Explain your answer.
- (c) If hexane is used instead of water and a negatively charged rod is brought near the liquid jet, would the liquid jet be deflected? Explain your answer.

(6 marks)

Answers written in the margins will not be marked.

Answers written in the margins will not be marked.

Answers written in the margins will not be marked.

7. Complete the table below by

- (a) drawing a three-dimensional diagram for the structure of each solid substance, and
(b) giving an explanation of whether the solid substance is an electrical conductor.

Solid substance	Three-dimensional diagram for the structure of the solid substance	Explanation of whether the solid substance is an electrical conductor
diamond		
graphite		
caesium chloride		

(6 marks)

Answers written in the margins will not be marked.

Answers written in the margins will not be marked.

Answers written in the margins will not be marked.

8. For each of the following experiments, state an expected observation and write a chemical equation for the reaction involved.

(a) adding dilute hydrochloric acid to zinc granules

(b) adding sodium hydroxide solution to iron(II) sulphate solution

(4 marks)

Answers written in the margins will not be marked.

Answers written in the margins will not be marked.

Answers written in the margins will not be marked.

9. There are four unlabelled reagent bottles each containing one of the white solids listed below :
 ammonium chloride, ammonium nitrate, sodium hypochlorite and sodium sulphate
Suggest how you would carry out tests to distinguish the four solids from one another. (9 marks)

Answers written in the margins will not be marked.

Answers written in the margins will not be marked.

Answers written in the margins will not be marked.

Answers written in the margins will not be marked.

A large rectangular box containing 25 horizontal lines for writing answers. The lines are evenly spaced and cover most of the page's width.

Answers written in the margins will not be marked.

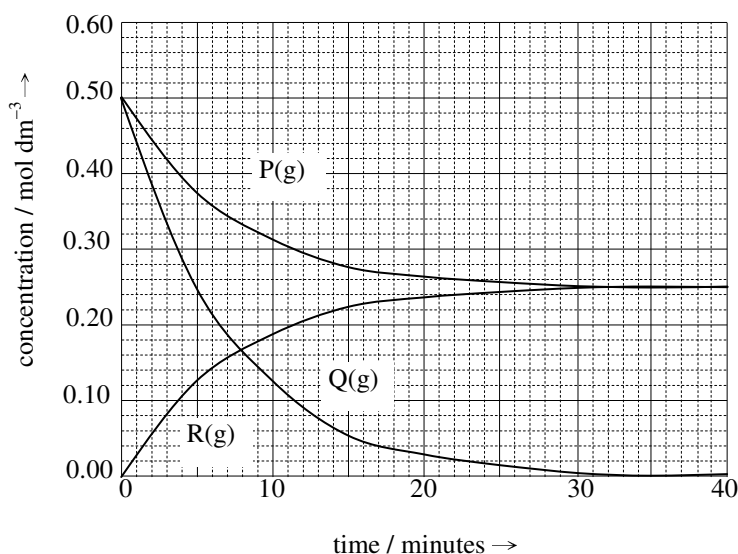
END OF PART I

Answers written in the margins will not be marked.

PART II

Answer **ALL** questions. Write your answers in the spaces provided.

10. $P(g)$ reacts with $Q(g)$ *irreversibly* to give $R(g)$. A mixture of $P(g)$ and $Q(g)$ is allowed to react in a closed container of volume 1 dm^3 kept at a constant temperature. The graph below shows the changes in concentrations of $P(g)$, $Q(g)$ and $R(g)$ in the container with time.



- (a) With reference to the above graph, deduce the chemical equation for the reaction in terms of $P(g)$, $Q(g)$ and $R(g)$.
- (b) If the mixture of $P(g)$ and $Q(g)$ is allowed to react at the same temperature but in a closed container of volume 2 dm^3 instead, will the time required for the reaction to complete remain the same? Explain.
- (c) Explain why the collisions between molecules of $P(g)$ and $Q(g)$ will *not* necessarily lead to a reaction.


(5 marks)

Answers written in the margins will not be marked.

Answers written in the margins will not be marked.

Answers written in the margins will not be marked.

11. The table below lists the equilibrium constants, K_c , for the reversible reaction



at three different temperatures.

Temperature/K	500	700	900
K_c	7.76×10^{-3}	1.23×10^{-1}	6.03×10^{-1}

- (a) Based on the above information, deduce whether the forward reaction is exothermic or endothermic.
- (b) 2.0 mol of $\text{H}_2(\text{g})$ and 2.0 mol of $\text{CO}_2(\text{g})$ are allowed to react in a 4.0 dm^3 closed container. Calculate the concentration of $\text{CO}(\text{g})$, in mol dm^{-3} , in the equilibrium mixture at 700 K.
- (c) State the effect of an increase in temperature on the rate of the backward reaction.

(5 marks)

Answers written in the margins will not be marked.

Answers written in the margins will not be marked.

Answers written in the margins will not be marked.

12. Ethyl ethanoate is an ester. It can be prepared by heating a mixture of ethanoic acid and ethanol under reflux in the presence of a catalyst.

- (a) What is the catalyst used in the preparation ?
- (b) Draw a labelled diagram of the set-up used for heating the mixture under reflux.
- (c) Ethyl ethanoate is commonly used as a solvent. Explain why ethyl ethanoate can dissolve iodine but cannot dissolve sodium iodide.
- (d) Draw the structure of another ester which has the same molecular formula as ethyl ethanoate, and give its systematic name.

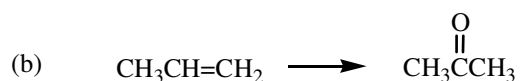
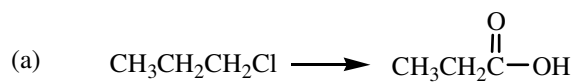
(8 marks)

Answers written in the margins will not be marked.

Answers written in the margins will not be marked.

Answers written in the margins will not be marked.

13. Outline a synthetic route, in *not more than three steps*, to accomplish each of the following conversions. For each step, give the reagent(s), the conditions and the structure of the organic product.



(6 marks)

14. Compare the acid base properties of sodium oxide (Na_2O) and sulphur dioxide (SO_2) with reference to how they interact with water molecules.

(4 marks)

END OF PART II

END OF SECTION B

Answers written in the margins will not be marked.

Answers written in the margins will not be marked.

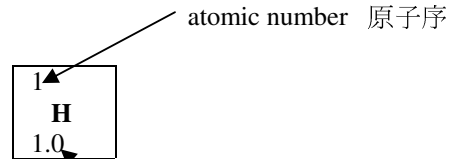
Answers written in the margins will not be marked.

PERIODIC TABLE 週期表

HKDSE-CHEM 1B-16 (Sample Paper)

78

GROUP 族



																	0
																	2
																	He
																	4.0
																	10
																	Ne
																	20.2
																	18
																	Ar
																	40.0
																	36
																	Kr
																	83.8
																	54
																	Xe
																	131.3
																	86
																	Rn
																	(222)
																	85
																	At
																	(210)
																	84
																	Po
																	(209)
																	83
																	Bi
																	209.0
																	82
																	Pb
																	207.2
																	81
																	Tl
																	204.4
																	80
																	Hg
																	200.6
																	79
																	Au
																	197.0
																	78
																	Pt
																	195.1
																	77
																	Ir
																	192.2
																	76
																	Os
																	190.2
																	75
																	Re
																	186.2
																	74
																	W
																	183.9
																	73
																	Ta
																	180.9
																	72
																	Hf
																	178.5
																	71
																	Lu
																	175.0
																	70
																	Yb
																	173.0
																	69
																	Tm
																	168.9
																	68
																	Er
																	167.3
																	67
																	Ho
																	164.9
																	66
																	Dy
																	162.5
																	65
																	Tb
																	158.9
																	64
																	Gd
																	157.3
																	63
																	Eu
																	152.0
																	62
																	Sm
																	150.4
																	61
																	Pm
																	(145)
																	60
																	Nd
																	144.2
																	59
																	Pr
																	140.9
																	58
																	Ce
																	140.1

*	58	59	60	61	62	63	64	65	66	67	68	69	70	71
	Ce	Pr	Nd	Pm	Sm	Eu	Gd	Tb	Dy	Ho	Er	Tm	Yb	Lu
	140.1	140.9	144.2	(145)	150.4	152.0	157.3	158.9	162.5	164.9	167.3	168.9	173.0	175.0
**	90	91	92	93	94	95	96	97	98	99	100	101	102	103
	Th	Pa	U	Np	Pu	Am	Cm	Bk	Cf	Es	Fm	Md	No	Lr
	232.0	(231)	238.0	(237)	(244)	(243)	(247)	(247)	(251)	(252)	(257)	(258)	(259)	(260)