

**GENERAL CERTIFICATE OF SECONDARY EDUCATION  
TWENTY FIRST CENTURY SCIENCE  
ADDITIONAL SCIENCE A**

**A215/02**

Unit 1: Modules B4 C4 P4 (Higher Tier)

Candidates answer on the Question Paper  
A calculator may be used for this paper

**OCR Supplied Materials:**  
None

**Other Materials Required:**

- Pencil
- Ruler (cm/mm)

**Monday 25 January 2010  
Afternoon**

**Duration: 40 minutes**



Candidate Forename		Candidate Surname	
--------------------	--	-------------------	--

Centre Number						Candidate Number				
---------------	--	--	--	--	--	------------------	--	--	--	--

**INSTRUCTIONS TO CANDIDATES**

- Write your name clearly in capital letters, your Centre Number and Candidate Number in the boxes above.
- Use black ink. Pencil may be used for graphs and diagrams only.
- Read each question carefully and make sure that you know what you have to do before starting your answer.
- Answer **all** the questions.
- Do **not** write in the bar codes.
- Write your answer to each question in the space provided, however additional paper may be used if necessary.

**INFORMATION FOR CANDIDATES**

- The number of marks is given in brackets [ ] at the end of each question or part question.
- The total number of marks for this paper is **42**.
- A list of physics equations is printed on page 2.
- The Periodic Table is printed on the back page.
- This document consists of **16** pages. Any blank pages are indicated.

## TWENTY FIRST CENTURY SCIENCE EQUATIONS

### Useful Relationships

#### Explaining Motion

$$\text{speed} = \frac{\text{distance travelled}}{\text{time taken}}$$

$$\text{momentum} = \text{mass} \times \text{velocity}$$

$$\text{change of momentum} = \text{resultant force} \times \text{time for which it acts}$$

$$\text{work done by a force} = \text{force} \times \text{distance moved by the force}$$

$$\text{change in energy} = \text{work done}$$

$$\text{change in GPE} = \text{weight} \times \text{vertical height difference}$$

$$\text{kinetic energy} = \frac{1}{2} \times \text{mass} \times [\text{velocity}]^2$$

#### Electric Circuits

$$\text{resistance} = \frac{\text{voltage}}{\text{current}}$$

$$\frac{\text{voltage across primary coil}}{\text{voltage across secondary coil}} = \frac{\text{number of turns in primary coil}}{\text{number of turns in secondary coil}}$$

$$\text{energy transferred} = \text{power} \times \text{time}$$

$$\text{power} = \text{potential difference} \times \text{current}$$

$$\text{efficiency} = \frac{\text{energy usefully transferred}}{\text{total energy supplied}} \times 100\%$$

#### The Wave Model of Radiation

$$\text{wave speed} = \text{frequency} \times \text{wavelength}$$

Answer **all** the questions.

- 1 Tina investigates the effect of temperature on enzymes. She uses the enzyme catalase to break down hydrogen peroxide. She collects the oxygen gas given off by the reaction. Here are some of her results.

temperature of catalase and hydrogen peroxide in °C	volume of gas collected in 1 minute in cm <sup>3</sup>
20	18
30	36
40	40
90	

- (a) Suggest how much gas she will collect at 90 °C.

answer ..... [1]

- (b) Tina tries to use a different enzyme to break down hydrogen peroxide.

Use the lock and key model to explain why this will not work.

.....  
 .....  
 .....  
 ..... [3]

- (c) (i) Hydrogen peroxide molecules bind to a specific part of the enzyme.

Name this part.

..... [1]

- (ii) How can a change in pH stop an enzyme from working?

Put a tick (✓) in the box next to the correct answer.

The shape of the enzyme is changed.

The shape of the molecule binding with the enzyme is changed.

The number of collisions is increased.

The speed of the collisions is decreased.

[1]

[Total: 6]

2 (a) Changes take place in the body when the concentration of blood plasma becomes too low.

Choose **five** of the following statements to describe these changes and put them in the correct order.

The first one has been done for you.

- A Receptors in the hypothalamus detect **low** plasma concentration.
- B Plasma becomes less concentrated.
- C Plasma becomes more concentrated.
- D Less ADH is secreted by the pituitary.
- E More ADH is secreted by the pituitary.
- F Less urine is produced.
- G More urine is produced.
- H More water is filtered out from the kidneys.
- I Less water is filtered out from the kidneys.

A				
---	--	--	--	--

[3]

(b) The formation of urine is one way that the body loses water.

Give **two** other ways in which water is lost.

.....

.....

..... [2]

[Total: 5]

3 Patrick is running in a race. This changes his core body temperature.

(a) Where in Patrick's body is the receptor that detects this change?

Put a **ring** around the correct word in the list below.

**hypothalamus**

**kidney**

**liver**

**pituitary**

**thyroid**

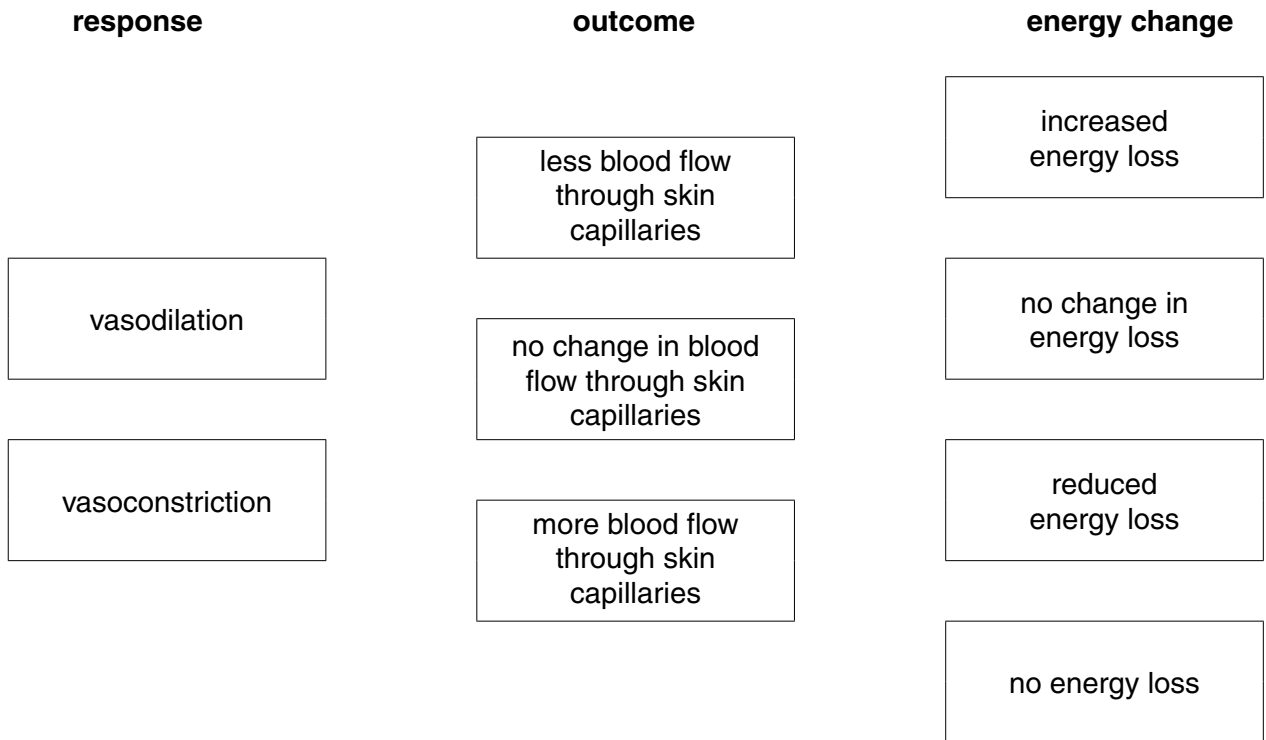
[1]

(b) Patrick's temperature control system involves changes to the blood vessels supplying his skin.

Draw straight lines to link each **response** to the correct **outcome**.

Draw straight lines to link each correct **outcome** to the correct **energy change**.

You should draw **four** lines.



[2]

[Total: 3]

4 Atoms are made up of protons, neutrons and electrons.

(a) The charge and the mass of protons, neutrons and electrons are not the same.

Draw straight lines to join each type of **particle** to its **charge**.

Draw straight lines to join each type of **particle** to its **relative mass**.

charge	particle	relative mass
0	proton	almost zero
-1	neutron	1
+1	electron	

[2]

(b) Many chemical changes involve ions.

Draw **one** line between the two boxes which **best** describe what an ion is.

A crystal lattice ...	... which has gained or lost electrons.
or	or
A group of atoms ...	... which has gained or lost protons.
or	or
An atom or a group of atoms ...	... which has gained or lost neutrons.
or	or
An atom ...	... which has moved from one group to another.

[2]

(c) The table gives some information about ions of different elements.

Fill in the ion symbols, including their charge.

element symbol	number of protons	number of electrons in the ion	number of neutrons	symbol for the ion
Li	3	2	4	
S	16	18	16	

[1]

(d) The table shows the electron arrangements of four elements.

element	electron arrangement
A	2.8.1
B	2.8.4
C	2.8.7
D	2.8.8.1

Which two elements have properties which are most similar?

elements ..... and ..... [1]

[Total: 6]

5 Sodium is in group 1 of the Periodic Table.

(a) Sodium burns in chlorine gas to make sodium chloride.

Draw one line between **two** boxes to show what sodium chloride looks like.

green		solid
or		or
brown		liquid
or		or
purple		gas
or		
colourless		

[1]

(b) Sodium reacts with iodine to make sodium iodide.  
Sodium iodide dissolves in water.  
Describe what happens when it dissolves in water.  
Use ideas about ions and molecules in your answer.

.....

.....

..... [2]



(c) Sodium also reacts with water.

(i) Name the two products formed when sodium reacts with water.

..... [1]

(ii) Write a balanced symbol equation for this reaction.

..... [3]


(iii) A lump of sodium melts as it reacts with cold water.

Suggest why the sodium melts.

.....  
.....  
..... [1]

[Total: 8]

6 Joe drives a bus along a level road.



(a) A driving force acts forwards on the bus when it is moving at a steady speed.

Explain why the driving force does not increase the speed of the bus.

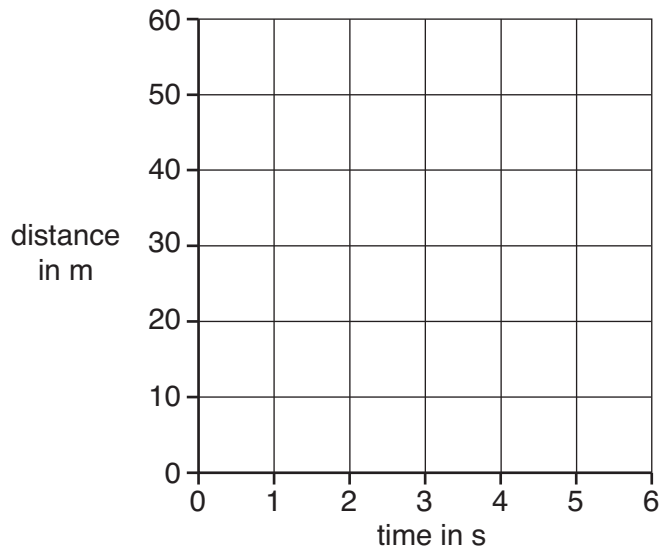
.....

.....

..... [2]

(b) On the axes below, sketch a **distance-time** graph for the bus as it travels at a steady speed of 15 m/s.


Start the graph at the point 0,0.



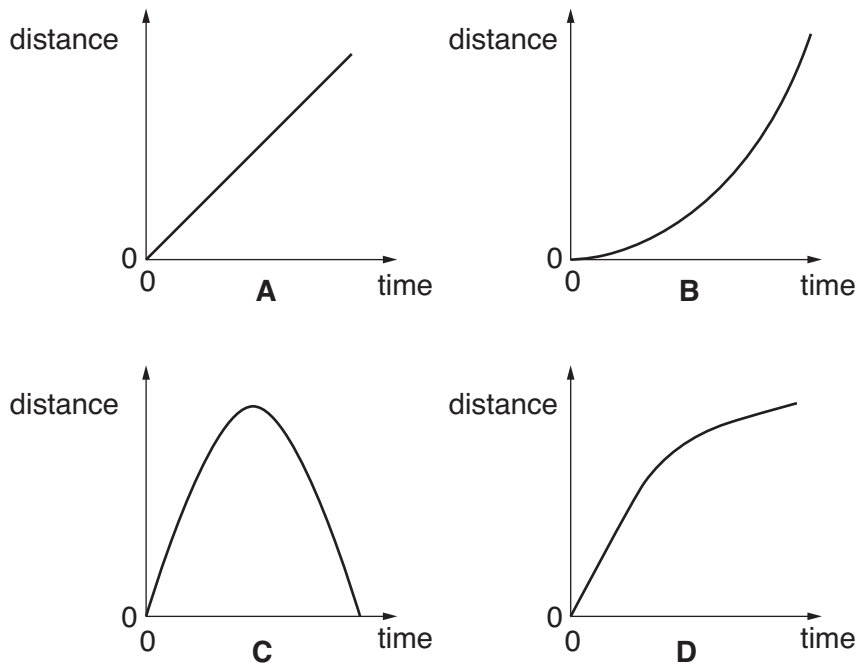
[2]

[Total: 4]

7 A small jet aircraft is speeding up along a runway.



(a) Which of these **distance-time** graphs, **A**, **B**, **C** or **D**, shows a steadily increasing speed?



answer ..... [1]

(b) The engines exert a force of 6000 N on the aircraft as it moves along the runway.

After 12s it reaches its takeoff speed of 30m/s from a standing start.

What is the momentum of the aircraft, in kg m/s, as it takes off?

Put a **ring** around the correct answer.

- 18000      72000      180000      2160000

[1]

(c) The jet engine provides the driving force for the aircraft by pushing out hot gas.

Draw straight lines to link the **start** of **each** sentence to its correct **end**.

**start**

**end**

The gas is ...

... pushed forwards by the gas.

... pushed backwards by the gas.

... pushed forwards by the engines.

The engine is ...

... greater than the force on the gas.

... smaller than the force on the gas.

The force on the engine is ...

... pushed backwards by the engines.

... the same size as the force on the gas.

[2]

(d) As it moves along the runway the aircraft has an average speed of 15 m/s.

Why is this **different** from the takeoff speed of 30 m/s?

Put a tick (✓) in the box next to the correct reason.

The counter force of friction increases as the aircraft speeds up.

Average values are always less accurate than instantaneous ones.


The takeoff speed of the aircraft is always double the average speed.

The instantaneous speed of the aircraft changes as it moves along the runway.

[1]

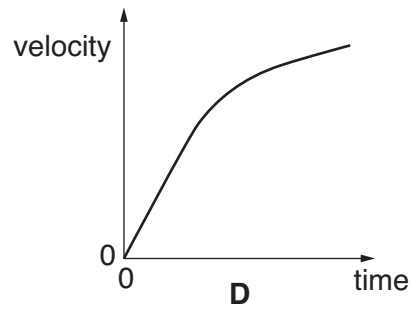
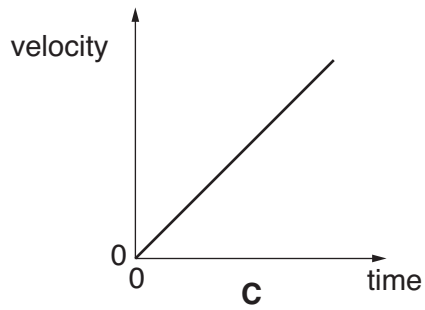
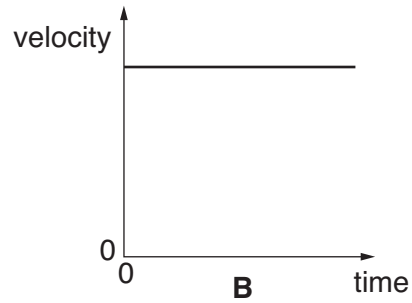
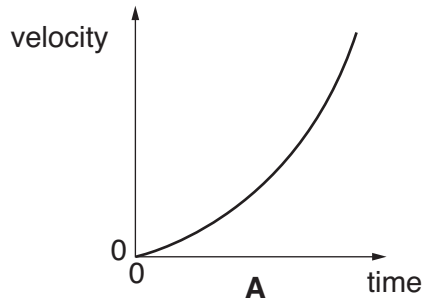
[Total: 5]

8 Jim takes part in a high jump contest.



(a) Jim runs up to the bar, increasing his velocity steadily from a standing start.

Which of these **velocity-time** graphs, **A**, **B**, **C** or **D**, shows this?



answer ..... [1]

(b) Jim has a mass of 70 kg. Just before he jumps up, his velocity is 8 m/s.

Who has the correct value for his kinetic energy?

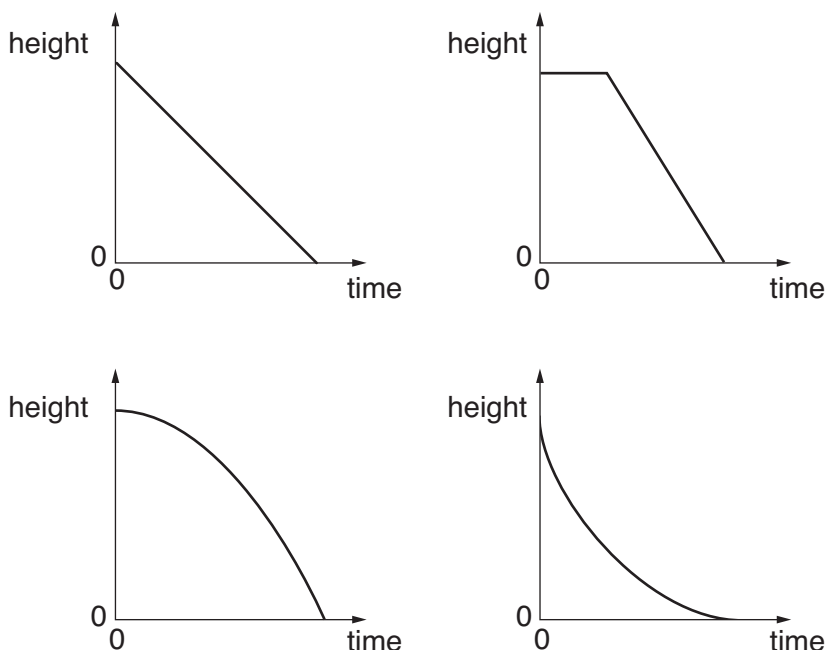
The diagram shows four people arranged in a 2x2 grid. Each person has a speech bubble above or below them containing their name and a kinetic energy value in Joules (J).

- Alan**: 280 J (speech bubble above)
- Bess**: 560 J (speech bubble above)
- Carlos**: 2240 J (speech bubble below)
- Davina**: 78 400 J (speech bubble below)

answer ..... [1]

(c) Jim clears the bar, then falls back to the ground.

Put a **ring** around the correct **height-time** graph for Jim as he **falls**.



[1]

(d) Jim comes to rest after he hits the crash mat.

Put ticks (✓) in the boxes next to the **two** correct statements.

Friction from the crash mat stops him falling over.

The reaction force from the crash mat reduces his momentum.

As he hits the crash mat, his kinetic energy is reduced through heating.

His weight decreases because the crash mat provides a reaction force.

His gravitational potential energy increases as he hits the crash mat.

[2]

[Total: 5]

**END OF QUESTION PAPER**

**Copyright Information**

OCR is committed to seeking permission to reproduce all third-party content that it uses in its assessment materials. OCR has attempted to identify and contact all copyright holders whose work is used in this paper. To avoid the issue of disclosure of answer-related information to candidates, all copyright acknowledgements are reproduced in the OCR Copyright Acknowledgements Booklet. This is produced for each series of examinations, is given to all schools that receive assessment material and is freely available to download from our public website ([www.ocr.org.uk](http://www.ocr.org.uk)) after the live examination series.

If OCR has unwittingly failed to correctly acknowledge or clear any third-party content in this assessment material, OCR will be happy to correct its mistake at the earliest possible opportunity.

For queries or further information please contact the Copyright Team, First Floor, 9 Hills Road, Cambridge CB2 1GE.

OCR is part of the Cambridge Assessment Group; Cambridge Assessment is the brand name of University of Cambridge Local Examinations Syndicate (UCLES), which is itself a department of the University of Cambridge.

# The Periodic Table of the Elements

	1	2	3	4	5	6	7	0
	1 <b>H</b> hydrogen 1							4 <b>He</b> helium 2
		9 <b>Be</b> beryllium 4						20 <b>Ne</b> neon 10
	7 <b>Li</b> lithium 3	24 <b>Mg</b> magnesium 12					19 <b>F</b> fluorine 9	35.5 <b>Cl</b> chlorine 17
	23 <b>Na</b> sodium 11						16 <b>O</b> oxygen 8	40 <b>Ar</b> argon 18
		40 <b>Ca</b> calcium 20					14 <b>N</b> nitrogen 7	84 <b>Kr</b> krypton 36
	39 <b>K</b> potassium 19						12 <b>C</b> carbon 6	131 <b>Xe</b> xenon 54
	85 <b>Rb</b> rubidium 37						28 <b>Si</b> silicon 14	[222] <b>Rn</b> radon 86
	133 <b>Cs</b> caesium 55						31 <b>P</b> phosphorus 15	
							14 <b>N</b> nitrogen 7	
							12 <b>C</b> carbon 6	
							11 <b>B</b> boron 5	
							27 <b>Al</b> aluminium 13	
							70 <b>Ga</b> gallium 31	
							73 <b>Ge</b> germanium 32	
							75 <b>As</b> arsenic 33	
							79 <b>Se</b> selenium 34	
							115 <b>In</b> indium 49	
							119 <b>Sn</b> tin 50	
							122 <b>Sb</b> antimony 51	
							128 <b>Te</b> tellurium 52	
							204 <b>Tl</b> thallium 81	
							207 <b>Pb</b> lead 82	
							209 <b>Bi</b> bismuth 83	
							[209] <b>Po</b> polonium 84	
							[210] <b>At</b> astatine 85	
							201 <b>Hg</b> mercury 80	
							197 <b>Au</b> gold 79	
							108 <b>Ag</b> silver 47	
							112 <b>Cd</b> cadmium 48	
							106 <b>Pd</b> palladium 46	
							195 <b>Pt</b> platinum 78	
							192 <b>Ir</b> iridium 77	
							190 <b>Os</b> osmium 76	
							186 <b>Re</b> rhenium 75	
							184 <b>W</b> tungsten 74	
							199 <b>Hs</b> hassium 108	
							[277] <b>Hs</b> hassium 108	
							[268] <b>Mt</b> meitnerium 109	
							[271] <b>Ds</b> darmstadtium 110	
							[272] <b>Rg</b> roentgenium 111	
							[264] <b>Bh</b> bohrium 107	
							[266] <b>Sg</b> seaborgium 106	
							[262] <b>Db</b> dubnium 105	
							[261] <b>Rf</b> rutherfordium 104	
							[227] <b>Ac*</b> actinium 89	
							[226] <b>Ra</b> radium 88	
							[223] <b>Fr</b> francium 87	
							137 <b>Ba</b> barium 56	
							88 <b>Sr</b> strontium 38	
							89 <b>Y</b> yttrium 39	
							45 <b>Sc</b> scandium 21	
							48 <b>Ti</b> titanium 22	
							51 <b>V</b> vanadium 23	
							52 <b>Cr</b> chromium 24	
							55 <b>Mn</b> manganese 25	
							[98] <b>Tc</b> technetium 43	
							101 <b>Ru</b> ruthenium 44	
							103 <b>Rh</b> rhodium 45	
							56 <b>Fe</b> iron 26	
							59 <b>Co</b> cobalt 27	
							59 <b>Ni</b> nickel 28	
							63.5 <b>Cu</b> copper 29	
							65 <b>Zn</b> zinc 30	

**Key**  
relative atomic mass  
atomic symbol  
name  
atomic (proton) number

Elements with atomic numbers 112-116 have been reported but not fully authenticated

\* The lanthanoids (atomic numbers 58-71) and the actinoids (atomic numbers 90-103) have been omitted.

The relative atomic masses of copper and chlorine have not been rounded to the nearest whole number