

Candidate forename		Candidate surname	
-----------------------	--	----------------------	--

Centre number						Candidate number				
------------------	--	--	--	--	--	---------------------	--	--	--	--

**OXFORD CAMBRIDGE AND RSA EXAMINATIONS  
GCSE**

**A216/01**

**TWENTY FIRST CENTURY SCIENCE  
ADDITIONAL SCIENCE A**

**Unit 2: Modules B5 C5 P5 (Foundation Tier)**

**TUESDAY 31 JANUARY 2012: Morning**

**DURATION: 40 minutes**

**SUITABLE FOR VISUALLY IMPAIRED CANDIDATES**

**Candidates answer on the Question Paper.  
A calculator may be used for this paper.**

**OCR SUPPLIED MATERIALS:**

**None**

**OTHER MATERIALS REQUIRED:**

**Pencil**

**Ruler (cm/mm)**

**READ INSTRUCTIONS OVERLEAF**

## **INSTRUCTIONS TO CANDIDATES**

- **Write your name, centre number and candidate number in the boxes on the first page. Please write clearly and in capital letters.**
- **Use black ink. HB pencil may be used for graphs and diagrams only.**
- **Answer ALL the questions.**
- **Read each question carefully. Make sure you know what you have to do before starting your answer.**
- **Write your answer to each question in the space provided. Additional paper may be used if necessary but you must clearly show your candidate number, centre number and question number(s).**

## **INFORMATION FOR CANDIDATES**

- **The number of marks is given in brackets [ ] at the end of each question or part question.**
- **The total number of marks for this paper is 42.**
- **A list of physics equations is printed on pages 4–5.**
- **The Periodic Table is provided.**

**BLANK PAGE**

# TWENTY FIRST CENTURY SCIENCE EQUATIONS

## USEFUL RELATIONSHIPS

### EXPLAINING MOTION

$$\text{speed} = \frac{\text{distance travelled}}{\text{time taken}}$$

$$\text{momentum} = \text{mass} \times \text{velocity}$$

$$\text{change of momentum} = \text{resultant force} \times \text{time for which it acts}$$

$$\text{work done by a force} = \text{force} \times \text{distance moved in the direction of the force}$$

$$\text{change in energy} = \text{work done}$$

$$\text{change in GPE} = \text{weight} \times \text{vertical height difference}$$

$$\text{kinetic energy} = \frac{1}{2} \times \text{mass} \times [\text{velocity}]^2$$

## **ELECTRIC CIRCUITS**

$$\text{resistance} = \frac{\text{voltage}}{\text{current}}$$

$$\frac{\text{voltage across primary coil}}{\text{voltage across secondary coil}} = \frac{\text{number of turns in primary coil}}{\text{number of turns in secondary coil}}$$

$$\text{energy transferred} = \text{power} \times \text{time}$$

$$\text{power} = \text{potential difference} \times \text{current}$$

$$\text{efficiency} = \frac{\text{energy usefully transferred}}{\text{total energy supplied}} \times 100\%$$

## **THE WAVE MODEL OF RADIATION**

$$\text{wave speed} = \text{frequency} \times \text{wavelength}$$

**Answer ALL the questions.**

**1 George buys a pizza from the shop.**

**He looks at the food label on his pizza.**

	<b>PER 100 g</b>
<b>energy</b>	<b>981 kJ</b>
<b>protein</b>	<b>9.5 g</b>
<b>carbohydrate</b>	<b>29.7 g</b>
<b>of which sugars</b>	<b>3.9 g</b>
<b>fat</b>	<b>8.5 g</b>
<b>of which saturates</b>	<b>3.9 g</b>

**(a) What is the total percentage of carbohydrate in the pizza?**

**Put a ring around the correct answer.**

**2.6%**

**3.9%**

**25.8%**

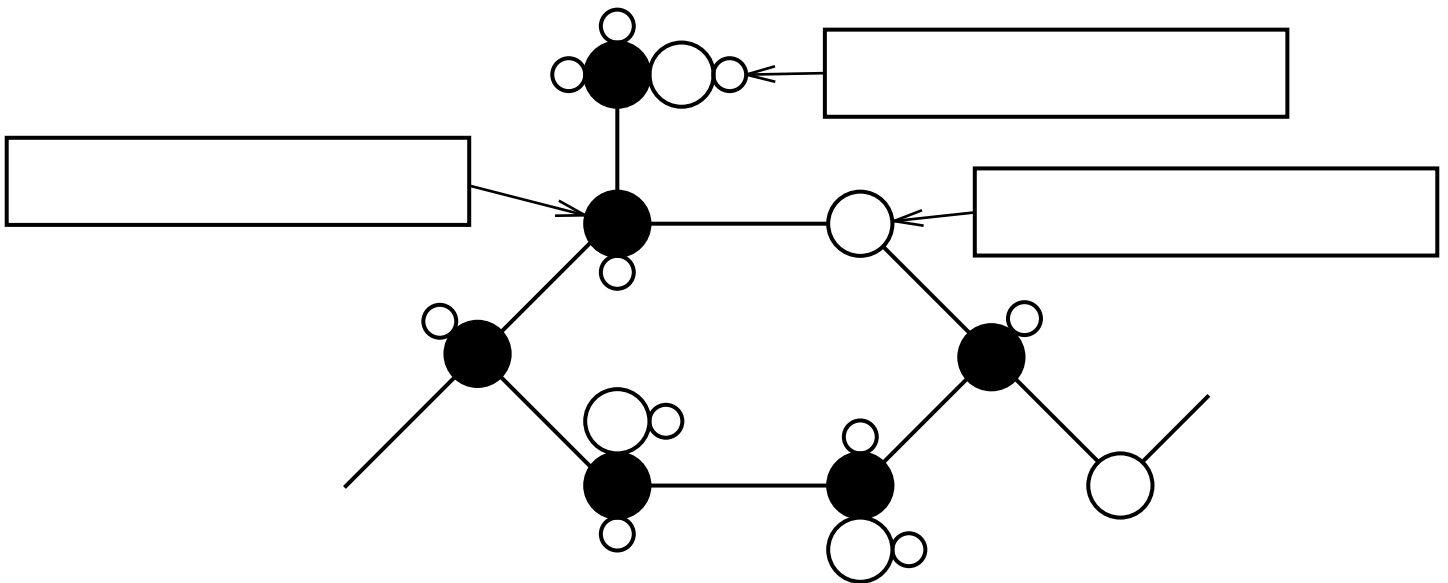
**29.7%**

**33.6%**

**[1]**

(b) The diagram shows part of a carbohydrate. The formula of this part is  $C_6H_{10}O_5$ .

Label the diagram with the name of each element.



[2]

[Total: 3]

2 In 2010 a volcano in Iceland erupted.

It sent clouds of sulfur dioxide gas and volcanic ash into the atmosphere.

Airports closed because planes could not fly through the ash from the volcano.

(a) The fumes from the volcano also contained argon, carbon dioxide and nitrogen.

Put ticks (✓) in the boxes next to each gas to show if it is an ELEMENT or a COMPOUND.

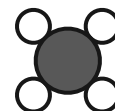
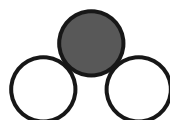
GAS	ELEMENT	COMPOUND
argon		
carbon dioxide		
nitrogen		

[1]

(b) The formula of sulfur dioxide gas is  $\text{SO}_2$ .

Which of the diagrams could show a sulfur dioxide molecule?

Put a ring around the best answer.

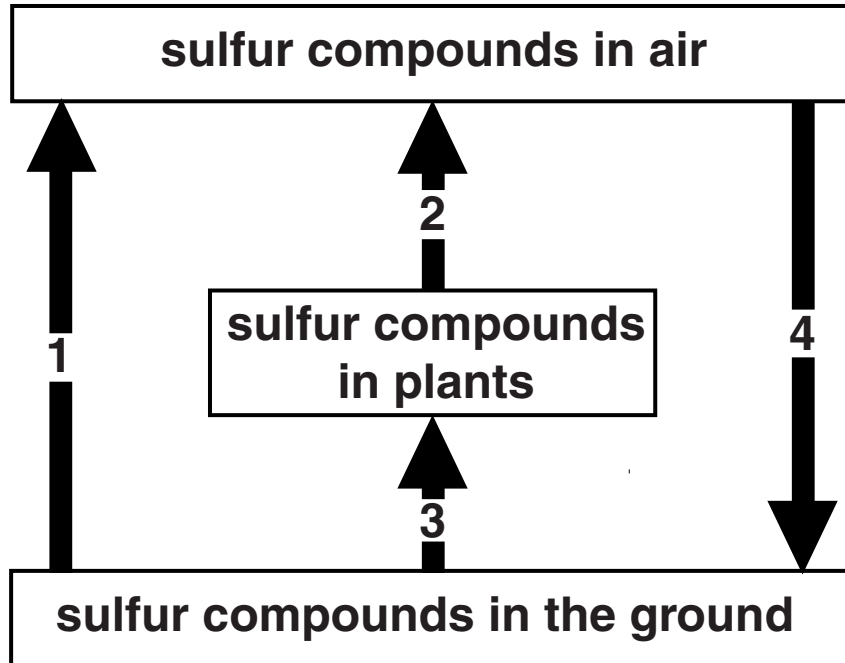


[1]



(c) Volcanic eruptions are not the only way that sulfur compounds get into the air.

Mary draws a diagram to show how some sulfur compounds move in and out of the air.



Put the NUMBERS in the boxes to match each statement to its arrow on the diagram.

Sulfur compounds get into the air when volcanoes erupt.

Sulfur compounds in the air form acid rain, which ends up in the ground.

Some sulfur compounds get into the air when plants rot.

Plants take in some sulfur compounds from the soil.

[2]

**(d) The volcanic ash also contained silicon dioxide.**

**Silicon dioxide has a high melting point.**

**Explain why silicon dioxide has a high melting point.**

**Use your understanding of the structure and bonding of silicon dioxide in your answer.**

---

---

---

---

---

---

**[3]**

**[Total: 7]**

**3 Aluminium is extracted by electrolysis of melted aluminium oxide.**

**Iron is extracted by heating iron oxide with carbon.**

**(a) Why is aluminium NOT extracted by heating aluminium oxide with carbon?**

**Put a tick (✓) in the box next to the correct answer.**

**Aluminium is too reactive.**

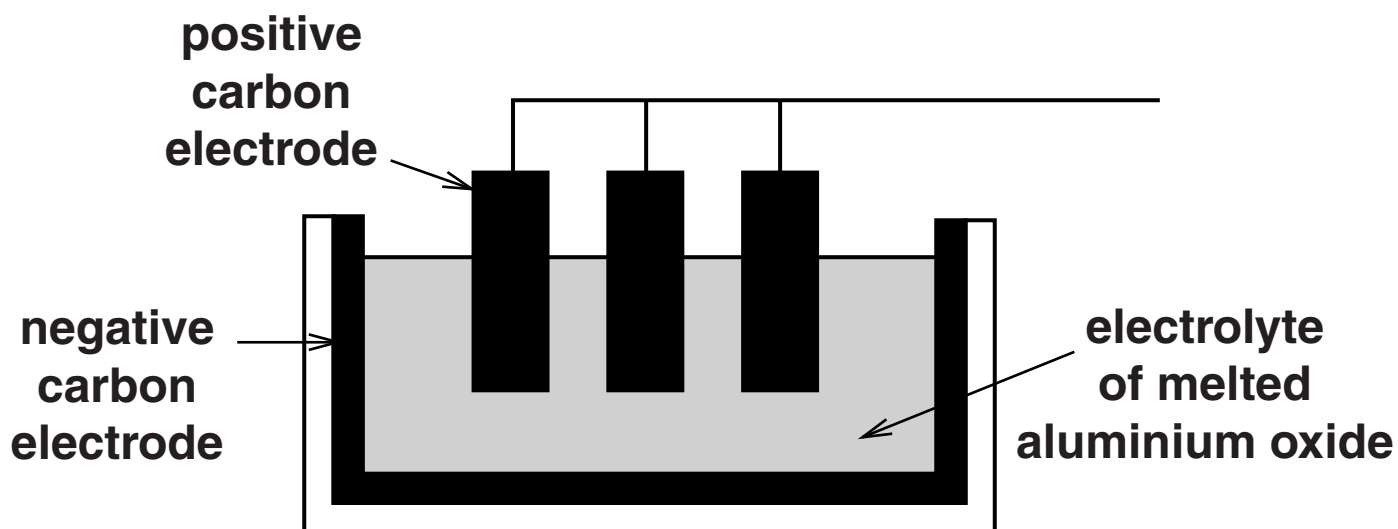
**It would take too much carbon.**

**Aluminium is not dense enough.**

**It is less polluting to use electrolysis.**

**[1]**

**(b) An electric current is passed through melted aluminium oxide.**



**(i) The aluminium oxide breaks down into aluminium and oxygen.**

**Fill in the boxes to write a word equation for this reaction.**



**[1]**

- (ii) Where are the aluminium and the oxygen made during electrolysis?

Put a tick (✓) in the box next to the correct answer.

aluminium at the positive electrode,  
oxygen at the negative electrode

aluminium at the negative electrode,  
oxygen at the positive electrode

both at the positive electrode

both at the negative electrode

[1]

- (iii) What do we call a reaction in which a metal oxide loses oxygen?

Put a **ring** around the correct answer.

**ELECTROLYSIS**

**EXTRACTION**

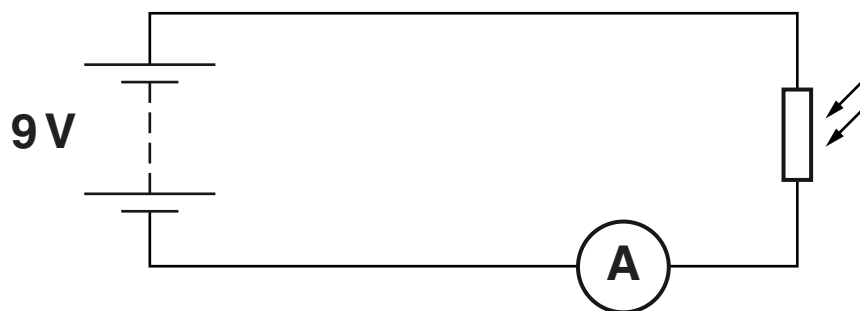
**OXIDATION**

**REDUCTION**

[1]

[Total: 4]

**4 Alan builds this circuit.**



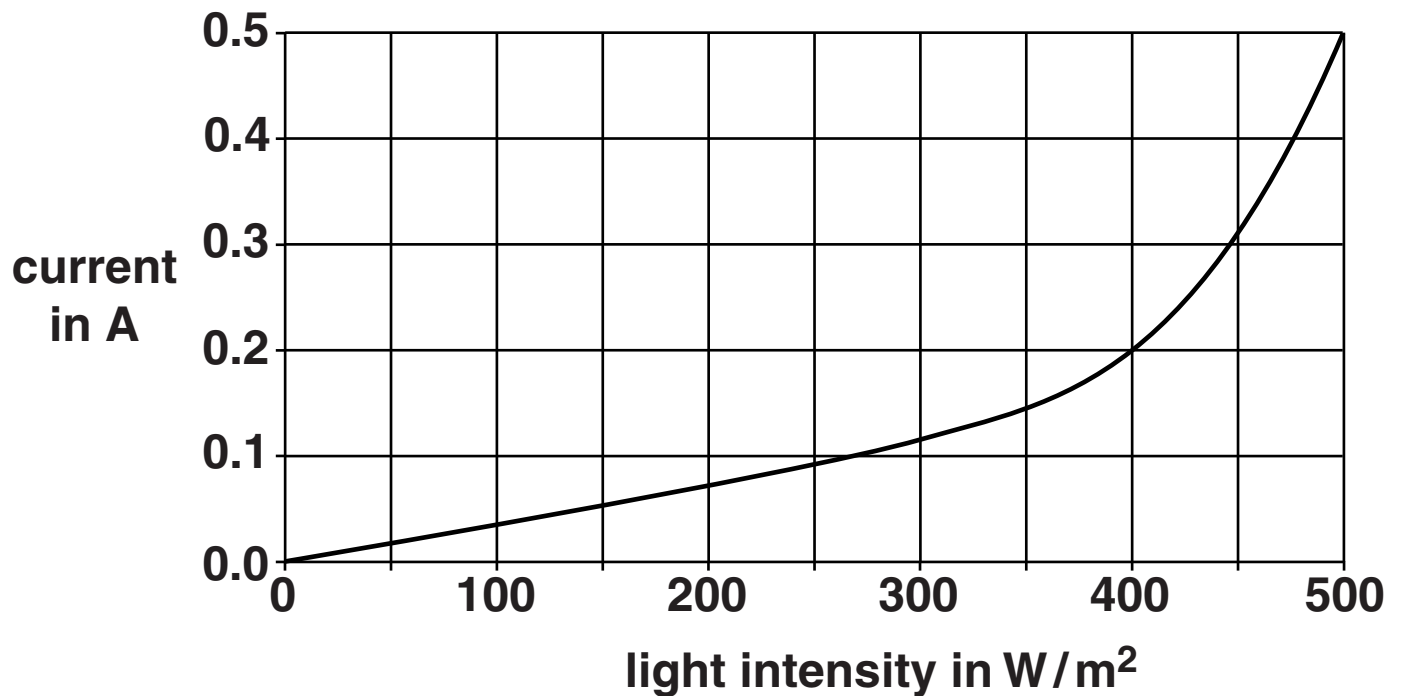
**(a) Alan uses a voltmeter to check that the potential difference across the battery is 9V.**

**Draw on the circuit diagram to show how the voltmeter should be connected.**

**[1]**

**(b) Alan measures the current in the LDR at different light intensities.**

**Here is a graph of his results.**



**(i) Use data from the graph to calculate the resistance of the LDR at a light intensity of  $400W/m^2$ . The potential difference across the LDR is 9V.**

**resistance = \_\_\_\_\_  $\Omega$  [1]**

- (ii) The pattern of the graph can be explained by the sentences below.

Complete the sentences. Choose words from this list.

You may use each word once, more than once, or not at all.

**DECREASES**

**INCREASES**

**STAYS THE SAME**

As the light intensity increases, the current

\_\_\_\_\_ .

This is because the number of charges that are

free to move \_\_\_\_\_ .

Therefore the resistance of the LDR

\_\_\_\_\_ .

[2]

[Total: 4]



5 Sal rubs a glass rod with a silk cloth. This gives the rod a negative charge.

(a) What is transferred between the glass rod and the silk cloth when Sal rubs them together?

Put a **ring** around the correct answer.

ATOMS

ELECTRONS

RESISTANCE

VOLTAGE

[1]

(b) The glass rod gains a negative charge. What type of charge does the silk cloth gain?

Put a **ring** around the correct answer.

MAGNETIC

NEGATIVE

NONE

POSITIVE

[1]

(c) Sal holds the charged rod near to a balloon. The rod **REPELS** the balloon.

Her friends discuss why this happens.

**ALAN**  
The balloon and the rod have different types of charge.

**BESS**  
The balloon and the rod have the same type of charge.

**CARLOS**  
The balloon has too much charge.

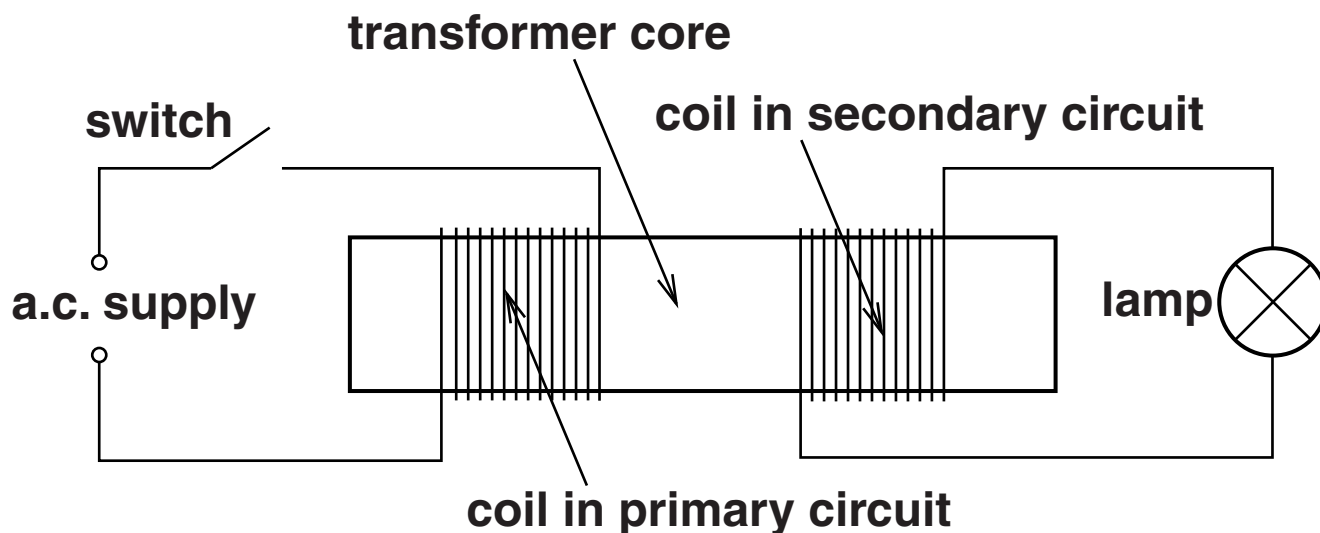
**DAVINA**  
The rod transfers all of its charge to the balloon.

Who correctly explains why the rod repels the balloon?

answer \_\_\_\_\_ [1]

[Total: 3]

**6 Zabú builds a transformer.**



**(a) What is the best material to use for the core of a transformer?**

Put a **ring** around the correct answer.

**COPPER**

**IRON**

**PLASTIC**

**WOOD**

**[1]**

**(b) She closes the switch in the primary circuit.**

**The lamp in the secondary circuit glows.**

**Explain why this happens.**

**Your answer should include what happens**

- in the primary circuit**
- in the transformer core**
- in the secondary circuit.**

---

---

---

---

---

---

---

---

---

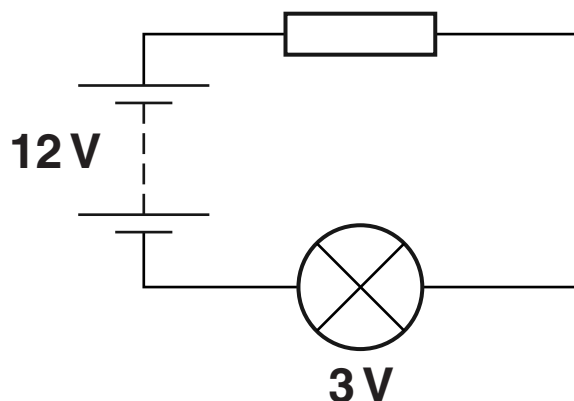
---

**[3]**

**[Total: 4]**

7 Celina builds this circuit.

She uses a battery, wires, a resistor and a lamp.



(a) Draw straight lines below to link each COMPONENT to its FUNCTION.

One line has been drawn for you.

COMPONENT	FUNCTION
wire	reduces electron flow
lamp	glows when electrons flow through
battery	supplies the energy for electron flow
resistor	allows electrons to flow from one component to another

[2]

**(b) The potential difference across the lamp is 3V.**

**The potential difference across the battery is 12V.**

**What is the potential difference across the resistor?**

**Put a ring around the correct answer.**

**3V**

**9V**

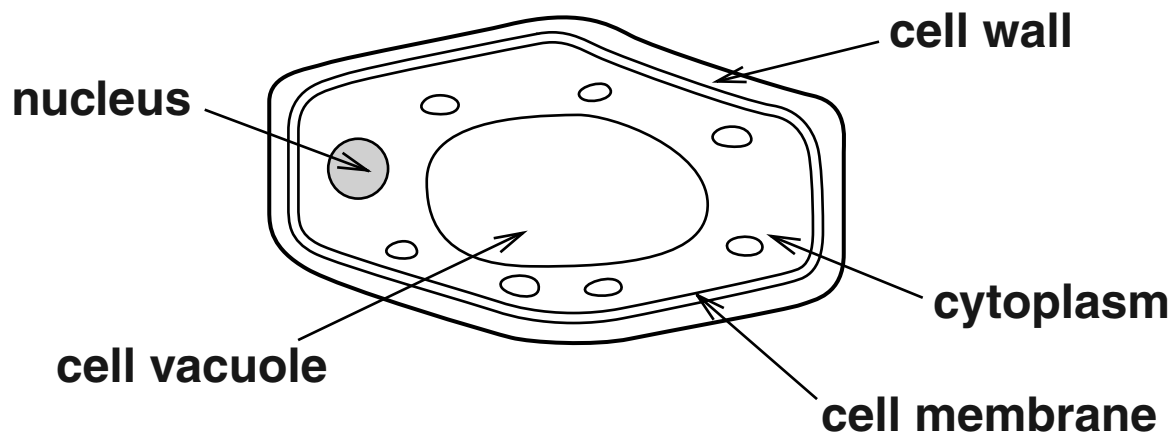
**12V**

**15V**

**[1]**

**[Total: 3]**

8 The diagram shows parts of a plant cell.



(a) The genetic code is in the DNA molecule.

DNA carries the code to make proteins.

Complete the table using labels from the diagram.

	PART OF CELL
where DNA is found	
where proteins are produced	

[2]

**(b) DNA has a number of important features.**

**Put a tick (✓) in the box next to the correct word to complete each sentence about DNA.**

The DNA molecule is a

<b>DOUBLE</b>	<input type="checkbox"/>
<b>SINGLE</b>	<input type="checkbox"/>
<b>TRIPLE</b>	<input type="checkbox"/>

helix.

Each DNA molecule contains four different

<b>ACIDS.</b>	<input type="checkbox"/>
<b>GENES.</b>	<input type="checkbox"/>
<b>BASES.</b>	<input type="checkbox"/>

Each DNA molecule is made up of

<b>ONE</b>	<input type="checkbox"/>
<b>TWO</b>	<input type="checkbox"/>
<b>THREE</b>	<input type="checkbox"/>

strands.

**[2]**

**[Total: 4]**



**9 Barry works in a garden centre.**

**He wants to make many identical copies of a particular plant.**

**He takes a cutting from the plant.**

**How does the cutting turn into a new plant?**

**Use ideas about unspecialised cells in your answer.**

---

---

---

---

---

---

---

---

**[3]**

**[Total: 3]**

**10 Roy is a farmer.**

**He breeds pigs.**

**The sperm from his male pig is used to fertilise a female pig.**

**(a) Each sperm cell from the male pig contains 19 chromosomes.**

**How many chromosomes are in each unfertilised egg cell of the female pig?**

**Put a ring around the correct answer.**

**9**

**19**

**36**

**38**

**54**

**[1]**

**(b) Once the sperm fertilises the egg, a zygote is formed.**

**How many chromosomes are in the zygote nucleus?**

**Put a ring around the correct answer.**

**9**

**19**

**36**

**38**

**54**

**[1]**

**(c) The zygote develops into an embryo.**

**As the embryo develops, the cells become specialised and form different tissues.**

**Five people suggest how this can happen.**

**ANGELA**  
All of the genes are switched on and become active.

**BETH**  
Some of the genes are lost from the cells as they become specialised.

**CHARLIE**  
Specialised cells make specific proteins.

**DI**  
Some of the active genes are switched off.

**ED**  
Some genes are added to the cells so that they can make specific proteins.

**Which TWO people give correct explanations?**

**answer \_\_\_\_\_ and \_\_\_\_\_ [2]**

**[Total: 4]**

**11 Cells formed by MITOSIS are different from cells formed by MEIOSIS.**

**Write about these differences.**

---

---

---

---

---

---

---

---

**[3]**

**[Total: 3]**

**END OF QUESTION PAPER**

**BLANK PAGE**

## **Copyright Information**

**OCR is committed to seeking permission to reproduce all third-party content that it uses in its assessment materials. OCR has attempted to identify and contact all copyright holders whose work is used in this paper. To avoid the issue of disclosure of answer-related information to candidates, all copyright acknowledgements are reproduced in the OCR Copyright Acknowledgements Booklet. This is produced for each series of examinations and is freely available to download from our public website ([www.ocr.org.uk](http://www.ocr.org.uk)) after the live examination series.**

**If OCR has unwittingly failed to correctly acknowledge or clear any third-party content in this assessment material, OCR will be happy to correct its mistake at the earliest possible opportunity.**

**For queries or further information please contact the Copyright Team, First Floor, 9 Hills Road, Cambridge CB2 1GE.**

**OCR is part of the Cambridge Assessment Group; Cambridge Assessment is the brand name of University of Cambridge Local Examinations Syndicate (UCLES), which is itself a department of the University of Cambridge.**

