

**Monday 30 January 2012 – Afternoon**

**GCSE TWENTY FIRST CENTURY SCIENCE  
ADDITIONAL SCIENCE A**

**A215/01** Unit 1: Modules B4 C4 P4 (Foundation Tier)

Candidates answer on the Question Paper.  
A calculator may be used for this paper.

**Duration:** 40 minutes

**OCR supplied materials:**  
None

**Other materials required:**

- Pencil
- Ruler (cm/mm)



Candidate forename		Candidate surname	
--------------------	--	-------------------	--

Centre number						Candidate number				
---------------	--	--	--	--	--	------------------	--	--	--	--

**MODIFIED LANGUAGE**

**INSTRUCTIONS TO CANDIDATES**

- Write your name, centre number and candidate number in the boxes above. Please write clearly and in capital letters.
- Use black ink. HB pencil may be used for graphs and diagrams only.
- Answer **all** the questions.
- Read each question carefully. Make sure you know what you have to do before starting your answer.
- Write your answer to each question in the space provided. Additional paper may be used if necessary but you must clearly show your candidate number, centre number and question number(s).
- Do **not** write in the bar codes.

**INFORMATION FOR CANDIDATES**

- The number of marks is given in brackets [ ] at the end of each question or part question.
- The total number of marks for this paper is **42**.
- A list of physics equations is printed on page 2.
- The Periodic Table is printed on the back page.
- This document consists of **20** pages. Any blank pages are indicated.

**TWENTY FIRST CENTURY SCIENCE EQUATIONS****Useful Relationships****Explaining Motion**

$$\text{speed} = \frac{\text{distance travelled}}{\text{time taken}}$$

$$\text{momentum} = \text{mass} \times \text{velocity}$$

$$\text{change of momentum} = \text{resultant force} \times \text{time for which it acts}$$

$$\text{work done by a force} = \text{force} \times \text{distance moved in the direction of the force}$$

$$\text{change in energy} = \text{work done}$$

$$\text{change in GPE} = \text{weight} \times \text{vertical height difference}$$

$$\text{kinetic energy} = \frac{1}{2} \times \text{mass} \times [\text{velocity}]^2$$

**Electric Circuits**

$$\text{resistance} = \frac{\text{voltage}}{\text{current}}$$

$$\frac{\text{voltage across primary coil}}{\text{voltage across secondary coil}} = \frac{\text{number of turns in primary coil}}{\text{number of turns in secondary coil}}$$

$$\text{energy transferred} = \text{power} \times \text{time}$$

$$\text{power} = \text{potential difference} \times \text{current}$$

$$\text{efficiency} = \frac{\text{energy usefully transferred}}{\text{total energy supplied}} \times 100\%$$

**The Wave Model of Radiation**

$$\text{wave speed} = \text{frequency} \times \text{wavelength}$$

**BLANK PAGE**

**Question 1 starts on page 4**

**PLEASE DO NOT WRITE ON THIS PAGE**

Answer **all** the questions.

1 Charlotte feels hot.

She goes to the fridge for a cold drink.

(a) The fridge has a control system to keep the temperature constant.

Parts of the temperature control system in the fridge work like parts of the human body.

Draw a straight line from each **part in the control system** to the **part in the human body** that does the same job.

You should draw **three** lines.

part in the control system	part in the human body
processor	receptor
temperature sensor inside fridge	effector
pump and coolant	brain

[2]

(b) Charlotte has a cold drink to cool down.

Her body cools down in other ways as well.

In what other ways might her body cool down?

Put ticks (✓) in the boxes next to the **two** correct answers.

- Blood transfers heat to her skin surface.
- Blood transfers heat to her brain.
- Sweat evaporates.
- Sweat condenses.
- She shivers.

[2]

(c) Charlotte goes outside into the heat.

Her body reacts to the heat in a number of stages.

The stages shown below are in the wrong order.

- A** Sweat glands produce sweat.
- B** The brain triggers the sweat glands to be more active.
- C** The brain receives information from the receptors.
- D** Temperature receptors detect the increased temperature.

Fill in the boxes to show the correct order of the stages. Use the letters **A**, **B**, **C** and **D**.

--	--	--	--

[2]

[Total: 6]

2 Cole does an experiment with enzymes.

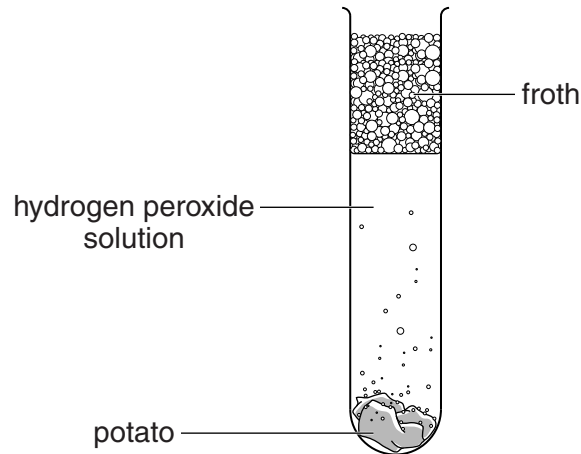
He places some raw potato at the bottom of a test tube.

He pours some hydrogen peroxide solution on it.

An enzyme in the potato causes oxygen to be released.

Bubbles are produced which form a layer of froth on top of the hydrogen peroxide solution.

Cole measures the height of the froth after five seconds.



When he uses hydrogen peroxide solution at 30 °C, Cole gets 3 cm of froth.

(a) He repeats the experiment at 20 °C.

What will the height of the froth most likely be?

Put a **ring** around the **best** answer.

**0 cm**      **1 cm**      **3 cm**      **5 cm**      **6 cm**

[1]

(b) Cole now uses boiled potato instead of raw potato.

What will the height of the froth most likely be?

Put a **ring** around the **best** answer.


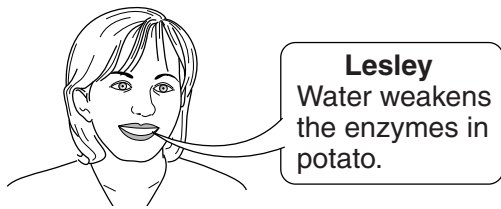
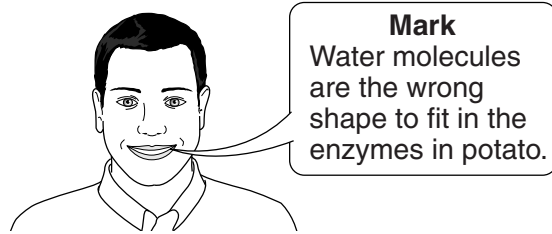
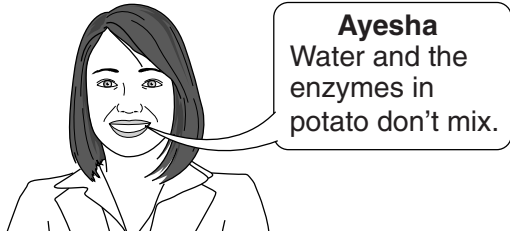
**0 cm**      **1 cm**      **3 cm**      **5 cm**      **6 cm**

[1]

(c) Cole does the experiment again. This time he uses water instead of hydrogen peroxide.

There is no froth.

He asks people in his class to suggest why.



Who gives the best explanation?

answer ..... [1]

[Total: 3]

3 Lucien runs a race.

(a) Oxygen and water move between his blood and his muscle cells.

Describe and explain the **processes** that move oxygen and water between his blood and muscle cells.

.....  
.....  
.....  
..... [3]

(b) As Lucien runs his body loses water.

This makes his blood plasma more concentrated.

Put a **ring** around the correct words to complete each sentence.

Lucien's kidneys will now produce urine that is

**more dilute / more concentrated / the same concentration.**

This is an example of **homeostasis / evaporation / hypothermia.**

[1]

(c) At the end of the race Lucien has an alcoholic drink.

Draw **one** line from the correct **effect of alcohol on urine** to the correct **consequence**.

**effect of alcohol on urine**

**consequence**

increased volume

could lead to dehydration

decreased volume

could lead to rehydration

[1]

[Total: 5]



4 The element helium was discovered in the Sun before it was found on Earth.

Suggest what astronomers on Earth can do to find out what elements are in the Sun.

.....

.....

.....

.....

..... [3]




[Total: 3]

5 Tony studies the halogens.

(a) He takes photographs of three of the halogens at room temperature and pressure.

(i) Draw a line from each **photograph** of a halogen to its **name**.

Draw another line from the **name** of each halogen to its **colour**.

photograph	name	colour
 <p>gas</p>	bromine	green
 <p>liquid</p>	chlorine	grey/black
 <p>solid</p>	iodine	red/brown

[3]

(ii) Chlorine reacts with a coloured dye.

It makes the dye colour fade away.

What does the chlorine do to the dye?

Put a tick (✓) in the box next to the correct answer.

- bleaches it
- burns it
- evaporates it
- neutralises it

[1]

(iii) Chlorine is also used to treat drinking water.

How does it do this?

Put a tick (✓) in the box next to the correct answer.

It attracts bacteria.

It kills bacteria.

It neutralises bacteria.

It repels bacteria.

[1]

(b) Sodium reacts with bromine to make sodium bromide.

(i) Fill in the boxes to write a word equation for this reaction.



[1]

(ii) Put a ring around the formula of sodium bromide.

**NABR**

**NaBr**

**NabR**

**nABr**

[1]

(iii) Tony knows that sodium chloride melts at 800 °C, and that sodium iodide melts at 660 °C.

Suggest the melting point of sodium bromide.

melting point ..... °C [1]

[Total: 8]

6 Atoms are made of protons, neutrons and electrons.

(a) When deciding which element an atom belongs to, which of the following is most important?

Put a tick (✓) in the box next to the best answer.

The number of protons in the atom.

The number of neutrons in the atom.

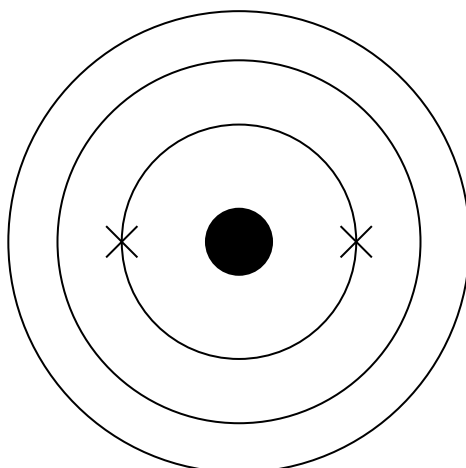
The relative atomic mass of the atom.

The size of the atom.

[1]

(b) A sulfur atom has 16 protons, 16 neutrons and 16 electrons.

Complete the diagram to show the electron arrangement of a sulfur atom.



[1]

(c) The element to the right of sulfur in the Periodic Table is chlorine.

Chlorine forms a chloride ion,  $\text{Cl}^-$ .

What is the difference between a chloride ion and a chlorine atom?

Put a tick (✓) in the box next to the correct answer.

The ion has one electron more than the atom.

The ion has one electron less than the atom.


The ion has one electron shell more than the atom.

The ion has one electron shell less than the atom.

[1]

[Total: 3]

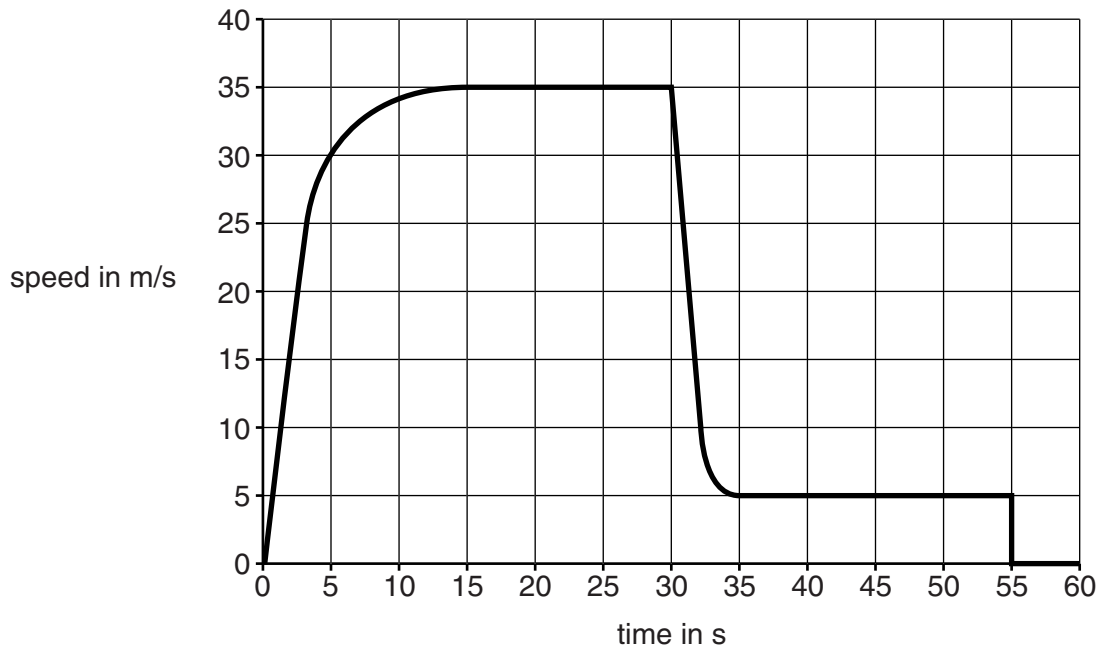
7 Jim jumps out of an aeroplane.



He opens his parachute on the way down and lands safely.

Jim uses a speed sensor to measure his speed as he falls towards the ground.

He uses the data from the sensor to draw a speed–time graph.



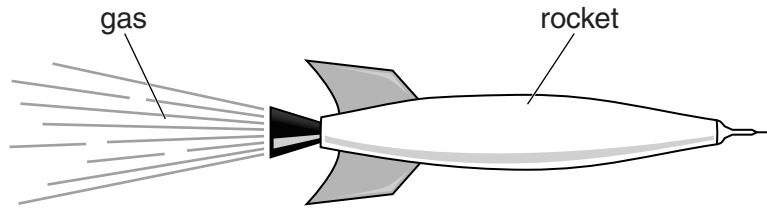
(a) Jim jumps out of the aeroplane when the time is 0s.

What is the maximum speed that he reaches on his way down to the ground?

maximum speed = ..... m/s [1]



8 A small rocket in space switches on its engine for 10 seconds.



High speed gas comes out of the engine.

This exerts a force of 1000N on the rocket in the forward direction.

(a) What is the size and direction of the force on the **gas**?

Give a reason for your answer.

.....

.....

.....

.....

.....

..... [3]

(b) The force of 1000N on the rocket is exerted for 10s.

What is the correct way of calculating the increase in momentum of the rocket?

Put a **ring** around the correct calculation.

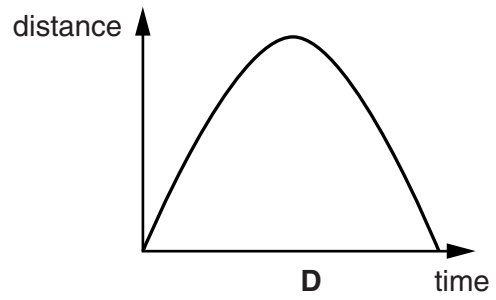
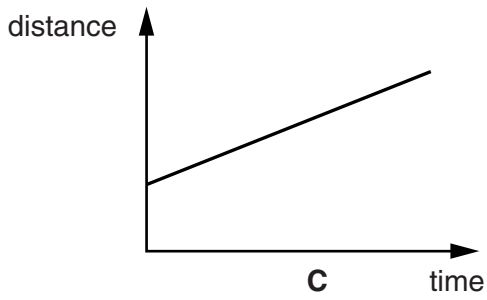
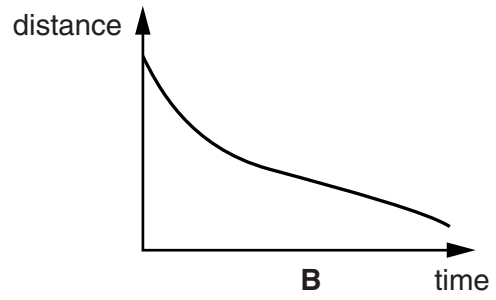
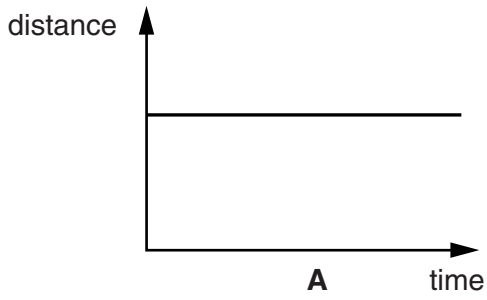
$\frac{1000}{10}$        $1000 \times 10$        $\frac{10}{1000}$

[1]



(c) After the engine is switched off the rocket has a steady speed.

Here are some distance–time graphs for the rocket.




Which graph, **A**, **B**, **C** or **D**, shows the rocket moving at a steady speed?

graph ..... [1]

[Total: 5]

9 Jack has a car accident.



He drives his car into a wall.

The seat-belt and crumple zone of the car stop Jack getting hurt.

(a) Here are some possible reasons why the crumple zone protects Jack.

Put a tick (✓) in the box next to the correct reason.

- It transfers kinetic energy from the car to Jack.
- It increases the time for which forces act on Jack.
- It provides a counter force to the force from the wall.
- It redirects the force from the wall towards the ground.

[1]

(b) The speed of the car drops from 15 m/s to zero as it collides with the wall.

This takes a time of 0.1 s. The car moves 0.75 m in that time.

Calculate the average speed of the car during its collision with the wall.

average speed = ..... m/s [1]

(c) Complete the following sentences.

Choose words from this list.

**force**      **friction**      **mass**      **momentum**      **weight**      **work**

Jack has to get a new car seat-belt after the accident.

This is because it has become permanently stretched.

During the accident, a ..... acts on the seat-belt.

This does ..... on the seat-belt.

[2]

[Total: 4]

**END OF QUESTION PAPER**

**Copyright Information**

OCR is committed to seeking permission to reproduce all third-party content that it uses in its assessment materials. OCR has attempted to identify and contact all copyright holders whose work is used in this paper. To avoid the issue of disclosure of answer-related information to candidates, all copyright acknowledgements are reproduced in the OCR Copyright Acknowledgements Booklet. This is produced for each series of examinations and is freely available to download from our public website ([www.ocr.org.uk](http://www.ocr.org.uk)) after the live examination series.

If OCR has unwittingly failed to correctly acknowledge or clear any third-party content in this assessment material, OCR will be happy to correct its mistake at the earliest possible opportunity.

For queries or further information please contact the Copyright Team, First Floor, 9 Hills Road, Cambridge CB2 1GE.

OCR is part of the Cambridge Assessment Group; Cambridge Assessment is the brand name of University of Cambridge Local Examinations Syndicate (UCLES), which is itself a department of the University of Cambridge.

