



F

Thursday 2 February 2012 – Morning

**GCSE TWENTY FIRST CENTURY SCIENCE
ADDITIONAL SCIENCE A**

A217/01 Unit 3: Modules B6 C6 P6 (Foundation Tier)

Candidates answer on the Question Paper.
A calculator may be used for this paper.

Duration: 40 minutes

OCR supplied materials:
None

Other materials required:

- Pencil
- Ruler (cm/mm)



Candidate forename		Candidate surname	
-----------------------	--	----------------------	--

Centre number						Candidate number				
---------------	--	--	--	--	--	------------------	--	--	--	--

INSTRUCTIONS TO CANDIDATES

- Write your name, centre number and candidate number in the boxes above. Please write clearly and in capital letters.
- Use black ink. HB pencil may be used for graphs and diagrams only.
- Answer **all** the questions.
- Read each question carefully. Make sure you know what you have to do before starting your answer.
- Write your answer to each question in the space provided. Additional paper may be used if necessary but you must clearly show your candidate number, centre number and question number(s).
- Do **not** write in the bar codes.

INFORMATION FOR CANDIDATES

- The number of marks is given in brackets [] at the end of each question or part question.
- The total number of marks for this paper is **42**.
- A list of physics equations is printed on page 2.
- The Periodic Table is printed on the back page.
- This document consists of **20** pages. Any blank pages are indicated.

TWENTY FIRST CENTURY SCIENCE EQUATIONS**Useful Relationships****Explaining Motion**

$$\text{speed} = \frac{\text{distance travelled}}{\text{time taken}}$$

$$\text{momentum} = \text{mass} \times \text{velocity}$$

$$\text{change of momentum} = \text{resultant force} \times \text{time for which it acts}$$

$$\text{work done by a force} = \text{force} \times \text{distance moved in the direction of the force}$$

$$\text{change in energy} = \text{work done}$$

$$\text{change in GPE} = \text{weight} \times \text{vertical height difference}$$

$$\text{kinetic energy} = \frac{1}{2} \times \text{mass} \times [\text{velocity}]^2$$

Electric Circuits

$$\text{resistance} = \frac{\text{voltage}}{\text{current}}$$

$$\frac{\text{voltage across primary coil}}{\text{voltage across secondary coil}} = \frac{\text{number of turns in primary coil}}{\text{number of turns in secondary coil}}$$

$$\text{energy transferred} = \text{power} \times \text{time}$$

$$\text{power} = \text{potential difference} \times \text{current}$$

$$\text{efficiency} = \frac{\text{energy usefully transferred}}{\text{total energy supplied}} \times 100\%$$

The Wave Model of Radiation

$$\text{wave speed} = \text{frequency} \times \text{wavelength}$$

BLANK PAGE

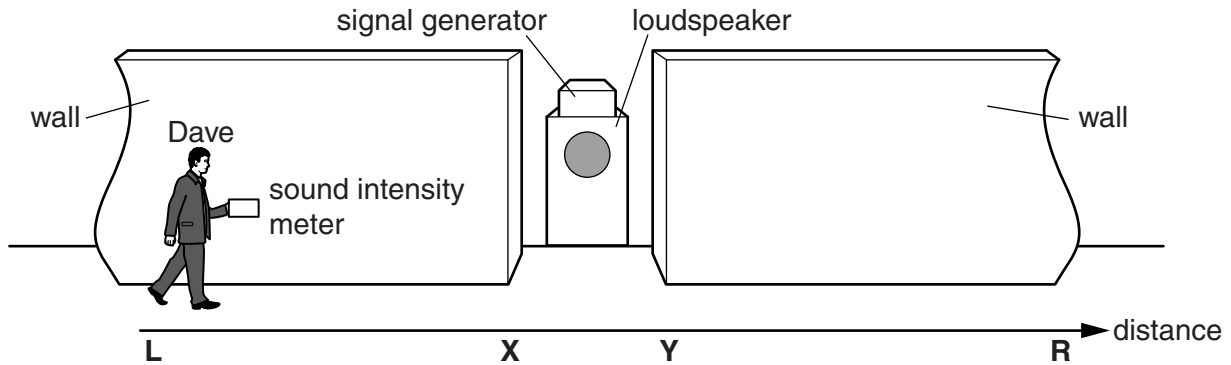
Question 1 begins on page 4

PLEASE DO NOT WRITE ON THIS PAGE

Answer **all** the questions.

- 1 Dave does an experiment with sound waves.

He places a loudspeaker and signal generator behind a gap in a wall.



The loudspeaker sends sound waves towards the gap.

Dave walks in front of the wall with a sound intensity meter.

- (a) What does the sound wave carry from the loudspeaker to the meter?

Put a ring around the correct answer.

air **energy** **light** **photons**

[1]

- (b) Dave sets the frequency of the signal generator to 680 Hz.

The speed of sound waves is 340 m/s.

This makes the wavelength of the sound waves 0.5 m.

Complete the sentences. Choose numbers from this list.

0.5 **340** **680**

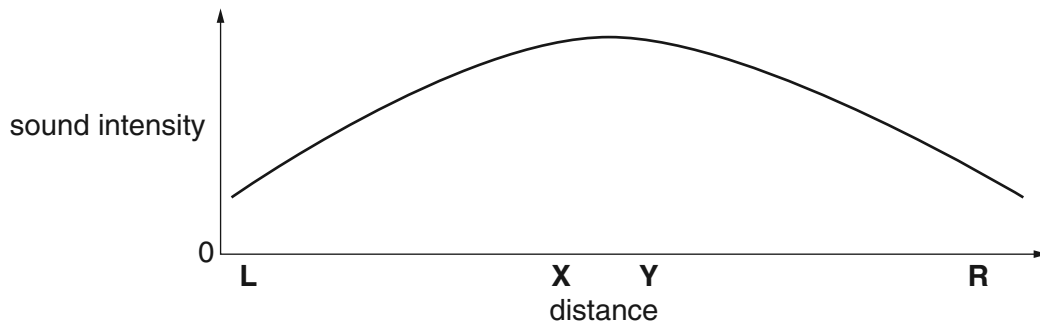
In one second, the loudspeaker emits sound waves.

Each of the waves moves metres in that time.

The distance from the centre of one wave to the centre of the next is metres.

[2]

- (c) Dave plots this graph to show how the reading on the sound intensity meter changes as he walks in front of the wall from **L** to **R**.



Here are some possible explanations for the shape of the graph.

Put a tick (✓) in the box next to the **best** explanation.

The wall attracts the sound waves.

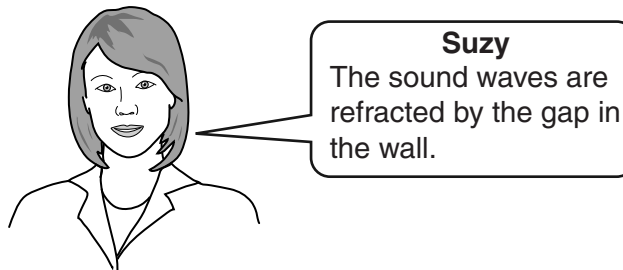
The sound waves are amplified by the wall.

The gap in the wall absorbs the sound waves.

The sound waves diffract as they go through the gap.

[1]

- (d) Suzy explains Dave's results **incorrectly**.



Which of these wave properties must change for **refraction** to take place?

Put a (ring) around the correct answer.

amplitude

frequency

speed

vibration

[1]

[Total: 5]

2 Julie goes shopping for a new digital TV.



(a) Her new TV uses optical fibre cable.

What carries the information through the optical fibre cable?

Put a ring around the correct answer.

infrared light

microwaves

sound

ultraviolet

[1]

(b) Julie's old TV received analogue signals through a wire cable.

The picture quality wasn't very good.

This was because the signal picked up noise in the cable.

Her new TV gives a very clear picture.

Explain why noise doesn't affect **digital** TV.

Your answer should include a description of

- a digital signal
- noise.

.....

.....

.....

.....

.....

.....

.....

.....

.....

.....

.....

[3]

[Total: 4]

BLANK PAGE

PLEASE DO NOT WRITE ON THIS PAGE

3 A laser is a special high intensity source of visible electromagnetic waves (light).

(a) All of the photons from the laser are identical.

They have the same direction, energy, frequency and wavelength.

State another property which will be the same for all of the photons.

..... [1]

(b) The beam of light from a laser has a high intensity.

Which of these statements about intensity is correct?

Put a tick (✓) in the box next to the correct statement.

Intensity is the speed of each photon.

Intensity is the energy arriving per second.

Intensity is the number of photons in the beam.

Intensity is the amplitude of each photon in the beam.

[1]

(c) Joe finds another laser. It produces photons with more energy.

Which wave property is changed to alter the energy of the photons?

Put a (ring) around the correct answer.

amplitude

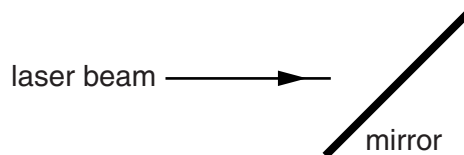
frequency

rotation

velocity

[1]

(d) The diagram shows a laser beam approaching a mirror.



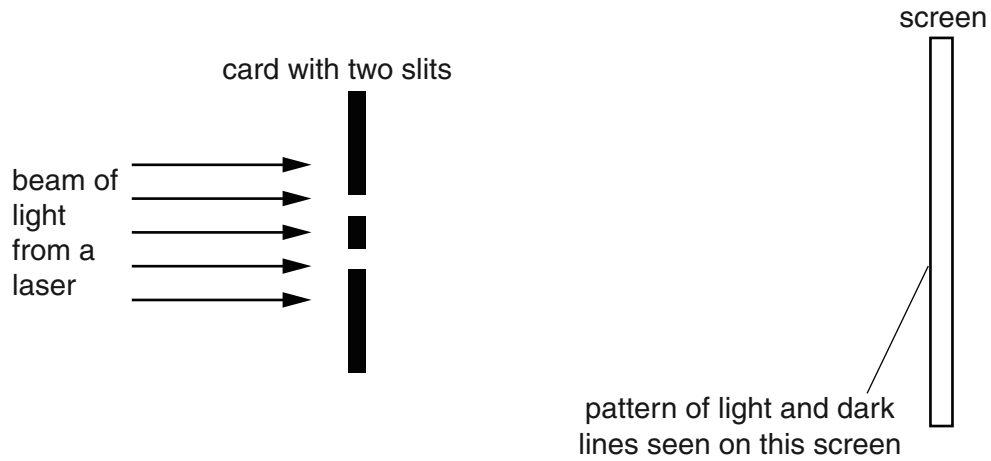
Complete the diagram to show the laser beam reflecting off the mirror.

[1]

(e) Joe places a piece of card in the path of a laser beam.

The card has two slits, allowing two beams of light through to a screen.

Joe sees a pattern of light and dark lines on the screen.



What is the name given to the **pattern** of lines?

Put a (ring) around the correct name.

construction

destruction

interference

linear

[1]

[Total: 5]

4 Julia accidentally stabs her finger with a sharp pin.

She pulls her hand back from the pin.

This is a simple reflex action.

(a) The reflex happens in stages.

The stages are written below in the wrong order.

Put the stages in the correct order by writing **A**, **B**, **C**, **D** and **E** in the boxes.

The first one has been done for you.

- A receptor detects stab
- B signal sent along motor neuron
- C signal sent along sensory neuron
- D signal makes muscle contract
- E signal crosses synapse

A				
----------	--	--	--	--

[3]

(b) Which statements are true of simple reflex actions?

Put ticks (✓) in the boxes next to the **two** correct statements.

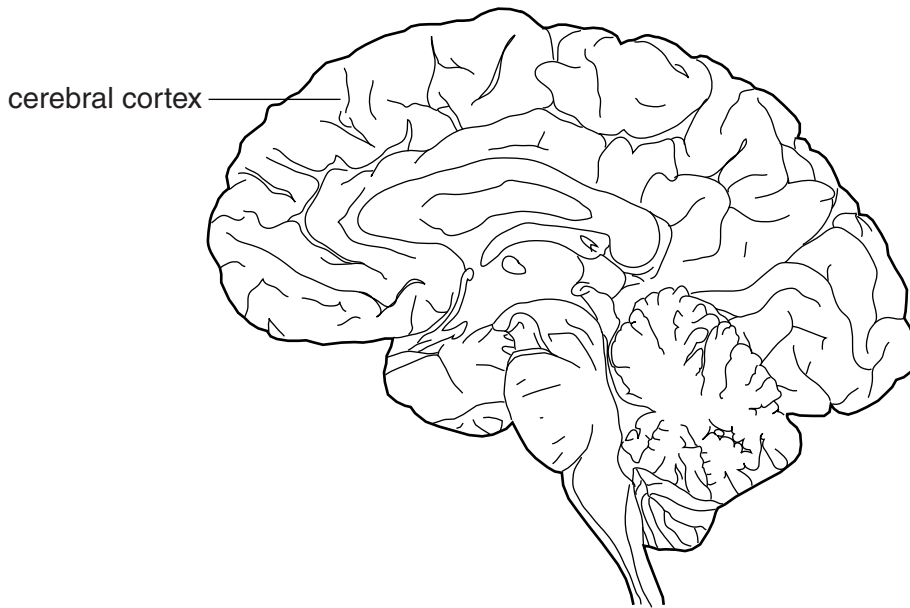
Simple reflex actions ...

- ... give fast responses.
- ... only happen in adults.
- ... are involuntary.
- ... do not need any change in the environment.
- ... are only found in humans.

[2]

[Total: 5]

5 This question is about the cerebral cortex of the human brain.



The cerebral cortex has a number of jobs.

Write down one of these jobs and describe how scientists can find out which area of the cerebral cortex does this.

.....

.....

.....

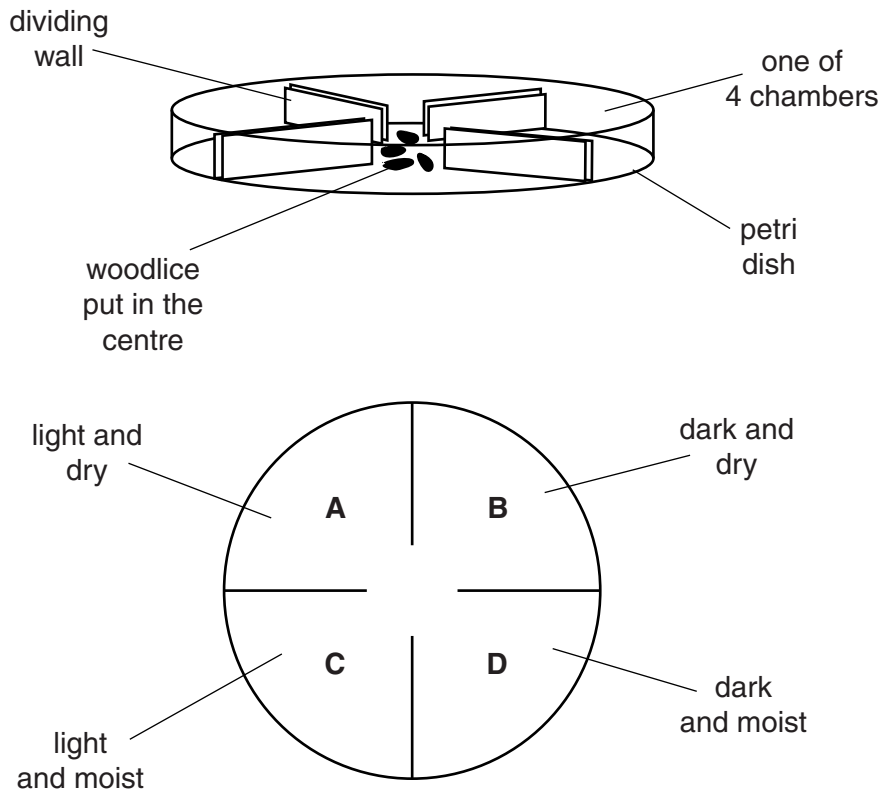
.....

..... [3]

[Total: 3]

6 Emily does an experiment with woodlice.

She puts 30 woodlice into the centre of a Petri dish so that they can move freely into four chambers, **A**, **B**, **C** and **D**. Each chamber has different conditions.



After five minutes, Emily counts the woodlice in each chamber.

She records her results in a table.

chamber	conditions	number of woodlice
A	light and dry	2
B	dark and dry	10
C	light and moist	6
D	dark and moist	12

(a) What is the percentage of woodlice in chamber **D**?

answer% [1]

(b) Look at Emily's results.

Which condition appears to most strongly attract the woodlice?

Put a **ring** around the correct answer.

dark

dry

light

moist

[1]

(c) The type of behaviour shown by the woodlice helps them to survive.

Suggest two ways that it does this.

Put ticks (✓) in the boxes next to the **two** best answers.

It helps to protect them from birds.

It allows them to respond to new conditions.

It helps them to investigate different habitats.

It prevents the Sun from drying them out.


It allows them to make food.

It helps them to avoid competition with other woodlice.

[2]

[Total: 4]

7 Four friends are discussing memory.



(a) Who is describing a problem with their short-term memory?

answer [1]

(b) Who correctly describes what memory is about?

answer [1]

[Total: 2]

8 A chemical company has discovered a new way of making the medicine ibuprofen.

The new method gives a higher yield than the old method.

(a) When the starting chemicals are put together two different chemical reactions happen.

One reaction makes ibuprofen.

The other reaction makes no ibuprofen at all.

Reaction 1 starting chemicals \rightarrow ibuprofen + by products

Reaction 2 starting chemicals \rightarrow other different substances

The mass of the starting chemicals is not the same as the mass of the ibuprofen made.

Explain

- **how** the mass of the starting chemicals is different from the mass of ibuprofen
- **why** the mass of the starting chemicals is different from the mass of ibuprofen.

.....

.....

.....

.....

..... [3]

(b) The starting chemicals should make 5,000 tonnes of ibuprofen.

They actually make 4,500 tonnes.

(i) What is the percentage yield for the reaction?

Put a **ring** around the correct answer.

10%

11.1%

45%

80%

90%

[1]

(ii) Show how you worked out your answer.

[1]

[Total: 5]

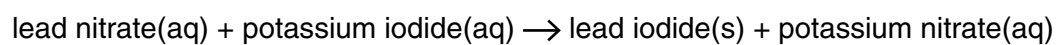
9 The diagram shows lead nitrate solution being added to potassium iodide solution.

It makes a yellow precipitate of lead iodide.

Lead iodide does not dissolve in water.



The word equation for the reaction is



(a) Julie adds a very small amount of lead nitrate solution to potassium iodide solution.

Which chemicals will be **dissolved** in the water **after** she has done this?

Put ticks (✓) in the boxes next to the correct answers.

lead iodide

lead nitrate



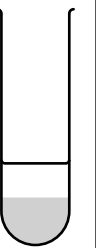
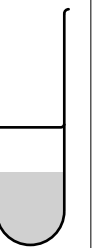

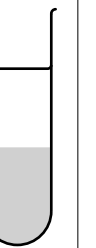

potassium iodide

potassium nitrate

[1]

(b) Julie puts 5 cm³ of potassium iodide solution into each of seven test tubes.

She adds a different amount of lead nitrate solution to each tube.

tube number	1	2	3	4	5	6	7
volume of potassium iodide solution	5 cm ³	5 cm ³	5 cm ³	5 cm ³	5 cm ³	5 cm ³	5 cm ³
volume of lead nitrate solution	2 cm ³	4 cm ³	6 cm ³	8 cm ³	10 cm ³	12 cm ³	14 cm ³
diagram of results							
height of precipitate	1 cm	2 cm	3 cm	4 cm	5 cm	5 cm	5 cm

In this experiment, what is the smallest volume of lead nitrate solution that was needed to use up all of the potassium iodide solution in the reaction?

volume = cm³ [1]

(c) The precipitate is not clean. There are traces of dissolved chemicals mixed in with it.

How can she get a clean dry sample of lead iodide from the reaction mixture?

Describe the **three** steps she has to take.

.....

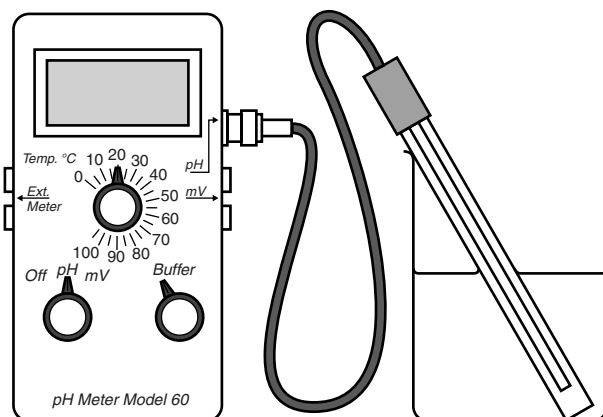
.....

.....

..... [3]

[Total: 5]

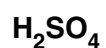
10 Nick reacts hydrochloric acid with sodium hydroxide.



(a) The formula of sodium hydroxide is NaOH.

What is the formula of hydrochloric acid?

Put a (ring) around the correct answer.



[1]

(b) What happens when an acid reacts with an alkali?

Put ticks (✓) in the boxes next to the **two** correct statements.

A salt is made.

Water is made.

There is an explosion.

A carbonate is made.

An indicator is made.

[1]

(c) Nick checks the pH of the alkali with a pH meter before he starts.

What is the reading on the pH meter?

Put a (ring) around the correct answer.

1

4

6

7

14

[1]

(d) When any acid dissolves in water, H^+ ions are produced.

What ions are produced when any alkali dissolves in water?

Put a **ring** around the correct answer.

H^+

Cl^-

Na^+

OH^-

[1]

[Total: 4]

END OF QUESTION PAPER

Copyright Information

OCR is committed to seeking permission to reproduce all third-party content that it uses in its assessment materials. OCR has attempted to identify and contact all copyright holders whose work is used in this paper. To avoid the issue of disclosure of answer-related information to candidates, all copyright acknowledgements are reproduced in the OCR Copyright Acknowledgements Booklet. This is produced for each series of examinations and is freely available to download from our public website (www.ocr.org.uk) after the live examination series.

If OCR has unwittingly failed to correctly acknowledge or clear any third-party content in this assessment material, OCR will be happy to correct its mistake at the earliest possible opportunity.

For queries or further information please contact the Copyright Team, First Floor, 9 Hills Road, Cambridge CB2 1GE.

OCR is part of the Cambridge Assessment Group; Cambridge Assessment is the brand name of University of Cambridge Local Examinations Syndicate (UCLES), which is itself a department of the University of Cambridge.

