

**GENERAL CERTIFICATE OF SECONDARY EDUCATION
TWENTY FIRST CENTURY SCIENCE
ADDITIONAL SCIENCE A**

A217/01

Unit 3: Modules B6 C6 P6 (Foundation Tier)

Candidates answer on the question paper.
A calculator may be used for this paper.

OCR supplied materials:
None

Other materials required:

- Pencil
- Ruler (cm/mm)

**Wednesday 22 June 2011
Morning**

Duration: 40 minutes



Candidate forename		Candidate surname	
--------------------	--	-------------------	--

Centre number						Candidate number				
---------------	--	--	--	--	--	------------------	--	--	--	--

MODIFIED LANGUAGE

INSTRUCTIONS TO CANDIDATES

- Write your name, centre number and candidate number in the boxes above. Please write clearly and in capital letters.
- Use black ink. Pencil may be used for graphs and diagrams only.
- Read each question carefully. Make sure you know what you have to do before starting your answer.
- Write your answer to each question in the space provided. Additional paper may be used if necessary but you must clearly show your candidate number, centre number and question number(s).
- Answer **all** the questions.
- Do **not** write in the bar codes.

INFORMATION FOR CANDIDATES

- The number of marks is given in brackets [] at the end of each question or part question.
- The total number of marks for this paper is **42**.
- A list of physics equations is printed on page 2.
- The Periodic Table is printed on the back page.
- This document consists of **16** pages. Any blank pages are indicated.

TWENTY FIRST CENTURY SCIENCE EQUATIONS

Useful Relationships

Explaining Motion

$$\text{speed} = \frac{\text{distance travelled}}{\text{time taken}}$$

$$\text{momentum} = \text{mass} \times \text{velocity}$$

$$\text{change of momentum} = \text{resultant force} \times \text{time for which it acts}$$

$$\text{work done by a force} = \text{force} \times \text{distance moved by the force}$$

$$\text{change in energy} = \text{work done}$$

$$\text{change in GPE} = \text{weight} \times \text{vertical height difference}$$

$$\text{kinetic energy} = \frac{1}{2} \times \text{mass} \times [\text{velocity}]^2$$

Electric Circuits

$$\text{resistance} = \frac{\text{voltage}}{\text{current}}$$

$$\frac{\text{voltage across primary coil}}{\text{voltage across secondary coil}} = \frac{\text{number of turns in primary coil}}{\text{number of turns in secondary coil}}$$

$$\text{energy transferred} = \text{power} \times \text{time}$$

$$\text{power} = \text{potential difference} \times \text{current}$$

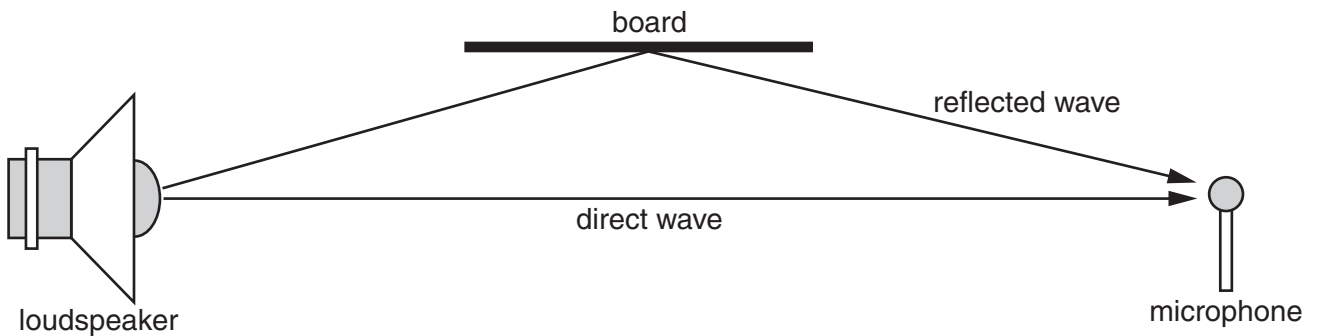
$$\text{efficiency} = \frac{\text{energy usefully transferred}}{\text{total energy supplied}} \times 100\%$$

The Wave Model of Radiation

$$\text{wave speed} = \text{frequency} \times \text{wavelength}$$

Answer **all** questions.

1 The diagram shows two paths for sound to get from a loudspeaker to a microphone.



(a) The loudspeaker produces a steady sound.

The microphone detects no sound.

Why does the microphone detect no sound?

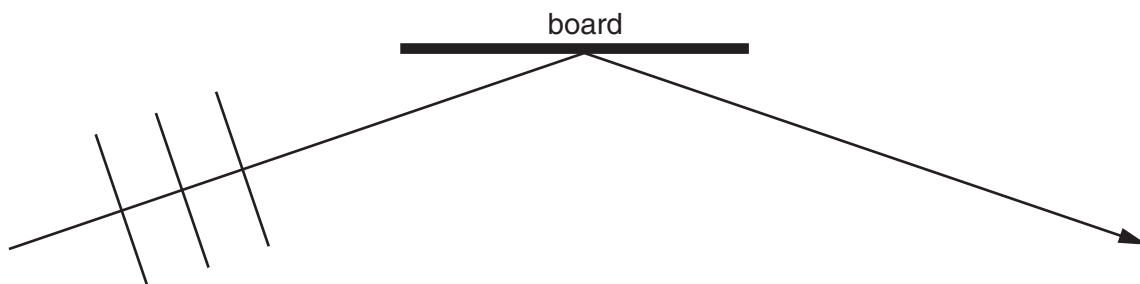
Put a tick (✓) in the box next to the correct reason.

- The board has absorbed all of the sound.
- The reflected wave cancels out the direct wave.
- The microphone is too close to the loudspeaker.
- The direct wave arrives in step with the reflected wave.

[1]

(b) Some of the sound gets to the microphone by reflecting off a board.

The diagram shows three wavefronts of the wave **before** it hits the board.



Draw on the diagram to show the wavefronts **after** they have all hit the board.

[2]

(c) Draw straight lines to link each **property** of a sound wave to its **description**.

property	description
speed	the distance between the same point on two adjacent waves
frequency	the distance moved by the wave in one second
wavelength	the number of vibrations of the wave in one second

[2]


[Total: 5]

2 Dentists use X-rays to take images of people's teeth.



(a) X-rays are part of the electromagnetic spectrum.

Add X-rays to this spectrum in the correct place.



[1]

(b) Complete the sentence. Choose words from the list.

- frequency glass space speed water wavelength**

All waves in the electromagnetic spectrum share one property.

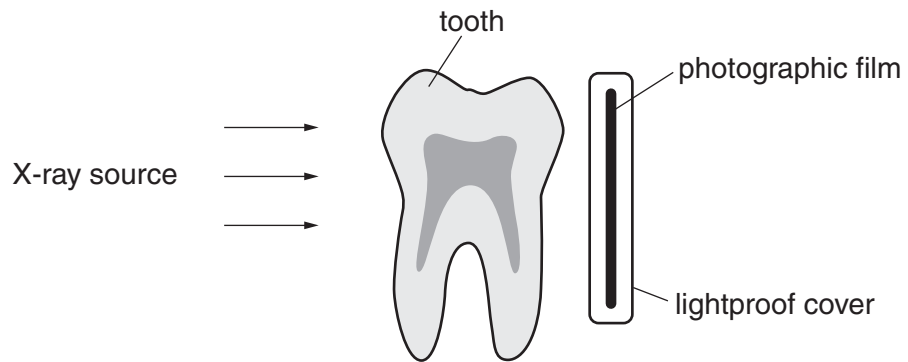
They have the same when they travel through

.....

[2]

(c) A dentist needs to take an image of a tooth.

She places an X-ray source in front of the tooth and a photographic film behind it.



Explain how the image is formed on the photographic film.

.....

.....

.....

..... [2]

[Total: 5]

- 3 Julie is not in the same room as her baby. Julie uses a baby monitor so that she can hear when her baby cries.

The monitor has a radio transmitter and a radio receiver.



- (a) The transmitter uses digital transmission.

The digital code uses only two symbols.

What are these symbols called?

Put a **ring** around the correct answer.

left and right **one and zero** **plus and minus** **up and down** [1]

- (b) Complete the sentences for the baby monitor system by putting a **ring** around the correct words in bold.

The transmitter changes the radio waves in a process which is called

demodulation / **diffraction** / **modulation** / **reflection** .

As the waves travel away from the transmitter, some **charge** / **light** / **noise** / **sound** is picked up along the way.

The receiver converts the pattern of radio wave pulses into

infrared / **interference** / **microwaves** / **sound** .

[3]

[Total: 4]

4 Anil has to make up a new password to go on his school computer system.

(a) He talks to some classmates about the problem of making it a password he can remember.

Reuben
Your memory just processes information.

Niall
Your memory is divided in to short-term memory and long-term memory.

Jessica
Memory just retrieves information.

Ammaar
If you can remember it for five minutes you'll remember it next week.

Beth
Memory is both storage and retrieval of information.

Which **two** classmates make correct statements about memory?

answer and [2]

(b) Anil knows that the part of his brain concerned with memory also has other functions.

Suggest **one** other function of this part of the brain.

..... [1]

(c) Scientists have used different methods to study this part of the brain.

Give **one** of these methods.

..... [1]

[Total: 4]

5 The human nervous system contains many neurons.

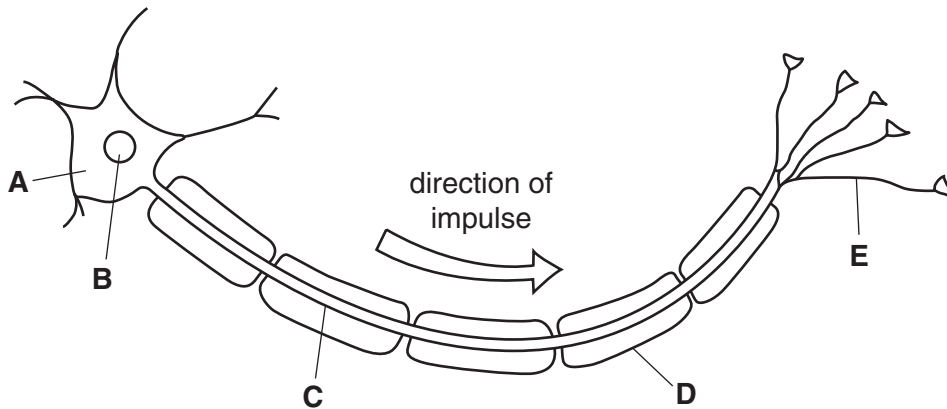
(a) Put **(rings)** around the correct words to complete the sentences.

The central nervous system is made up of the brain
and **peripheral nerves / receptor cells / spinal cord** .

Receptors are connected to the brain by **effector / motor / sensory** neurons .

Gaps between adjacent neurons are called **sensors / sheaths / synapses** . [3]

(b) This is a diagram of a motor neuron.



Which letter, **A, B, C, D** or **E**, labels the ...

(i) ... axon? answer[1]

(ii) ... fatty sheath? answer[1]

(c) The motor neuron can form part of a reflex arc.

Reflexes allow a fast involuntary response to a harmful stimulus.

Describe the main features of a reflex arc.

In your answer include ideas about

- receptors
- neurons
- effectors.

.....

.....


.....

..... [3]

[Total: 8]

Turn over

6 A woodlouse relies on simple reflex actions.



When it is placed in a bright dry environment it tries to move to a dark moist place.

Complete the sentences by putting a **(ring)** around the correct words.

A change in environment is called a **shift / stimulus / strike** .

Simple reflex actions are usually a disadvantage in **dealing with a new situation /**

finding food / sheltering from predators .

[2]

[Total: 2]

7 Flour mills in the nineteenth century sometimes exploded.

Flour mills grind wheat grains into flour, a fine powder.

Wheat grains will burn slowly in air.

Flour dust burns much more quickly than wheat grains.

The rooms inside the flour mill had clouds of flour dust in the air.

A single spark was enough to make the flour dust explode.



Why is the reaction of a cloud of flour dust more violent?

Use ideas about rate of reaction and the size of flour particles in your answer.

.....

.....

.....

..... [2]

[Total: 2]

8 David has limescale on the wall of his house.

He knows that limescale is calcium carbonate, so he decides to remove it using hydrochloric acid.

(a) Fill in the boxes to write the word equation for this reaction.

calcium carbonate

calcium chloride

carbon dioxide

hydrochloric acid

water



[1]

(b) One of the substances made in this reaction is a salt.

Which one?

..... [1]

(c) He measures the pH of the acid before he starts.

(i) Put a **ring** around the pH number of the acid.

1 7 9 13 23 [1]

(ii) What can he use to find the pH of the acid?

Put ticks (✓) in the boxes next to the **two** best answers.

the Periodic Table

universal indicator

pH meter

litmus paper

[1]

(d) He has some acid left over.

He neutralises it before he throws it away.

What will the pH be once the acid is neutralised?

Put a **ring** around the correct answer.

1

3

7

11

13

[1]

[Total: 5]

- 9 Titanium oxide is a white solid which is used in paint.

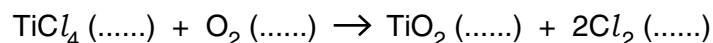
Impurities in natural titanium oxide spoil its white colour, so they are removed.

To remove the impurities two chemical reactions are carried out.

reaction 1 – the solid titanium oxide, TiO_2 , is converted into liquid titanium chloride, TiCl_4 .

reaction 2 – the liquid titanium chloride, TiCl_4 , is later converted back into titanium oxide, TiO_2 .

- (a) Complete the balanced symbol equation for reaction 2 by adding in the state symbols.



[1]

- (b) The impurities do not take part in these reactions.

This makes them easy to remove.

Suggest

- why this makes them easy to remove
- how you might remove them
- at which stage they are removed.

.....

.....

.....

..... [3]

- (c) The factory checks the titanium oxide ore to see how pure it is.

They find that 300 tonnes of ore contains 210 tonnes of titanium oxide.

How do they calculate the percentage of titanium oxide in the ore?

Put a **ring** around the correct calculation.

$$\frac{300 \times 100}{210}$$

$$\frac{210 \times 100}{300}$$

$$\frac{300}{210 \times 100}$$

$$\frac{210}{300 \times 100}$$

[1]

- (d) The chlorine used in the process is toxic and oxidising.

Put **rings** around the **two** hazard symbols which should be used for chlorine.



[2]

[Total: 7]

END OF QUESTION PAPER

Copyright Information

OCR is committed to seeking permission to reproduce all third-party content that it uses in its assessment materials. OCR has attempted to identify and contact all copyright holders whose work is used in this paper. To avoid the issue of disclosure of answer-related information to candidates, all copyright acknowledgements are reproduced in the OCR Copyright Acknowledgements Booklet. This is produced for each series of examinations and is freely available to download from our public website (www.ocr.org.uk) after the live examination series.

If OCR has unwittingly failed to correctly acknowledge or clear any third-party content in this assessment material, OCR will be happy to correct its mistake at the earliest possible opportunity.

For queries or further information please contact the Copyright Team, First Floor, 9 Hills Road, Cambridge CB2 1GE.

OCR is part of the Cambridge Assessment Group; Cambridge Assessment is the brand name of University of Cambridge Local Examinations Syndicate (UCLES), which is itself a department of the University of Cambridge.

The Periodic Table of the Elements

	1	2	3	4	5	6	7	0										
	7 Li lithium 3	9 Be beryllium 4	<div style="border: 1px solid black; padding: 5px; width: fit-content; margin: 0 auto;"> 1 H hydrogen 1 </div>					11 B boron 5	12 C carbon 6	14 N nitrogen 7	16 O oxygen 8	19 F fluorine 9	20 Ne neon 10					
	23 Na sodium 11	24 Mg magnesium 12	<div style="border: 1px solid black; padding: 5px; width: fit-content; margin: 0 auto;"> Key relative atomic mass atomic symbol name atomic (proton) number </div>					27 Al aluminium 13	28 Si silicon 14	31 P phosphorus 15	32 S sulfur 16	35.5 Cl chlorine 17	40 Ar argon 18					
	39 K potassium 19	40 Ca calcium 20	45 Sc scandium 21	48 Ti titanium 22	51 V vanadium 23	52 Cr chromium 24	55 Mn manganese 25	56 Fe iron 26	59 Co cobalt 27	59 Ni nickel 28	63.5 Cu copper 29	65 Zn zinc 30	70 Ga gallium 31	73 Ge germanium 32	75 As arsenic 33	79 Se selenium 34	80 Br bromine 35	84 Kr krypton 36
	85 Rb rubidium 37	88 Sr strontium 38	89 Y yttrium 39	91 Zr zirconium 40	93 Nb niobium 41	96 Mo molybdenum 42	[98] Tc technetium 43	101 Ru ruthenium 44	103 Rh rhodium 45	106 Pd palladium 46	108 Ag silver 47	112 Cd cadmium 48	115 In indium 49	119 Sn tin 50	122 Sb antimony 51	128 Te tellurium 52	127 I iodine 53	131 Xe xenon 54
	133 Cs caesium 55	137 Ba barium 56	139 La* lanthanum 57	178 Hf hafnium 72	181 Ta tantalum 73	184 W tungsten 74	186 Re rhenium 75	190 Os osmium 76	192 Ir iridium 77	195 Pt platinum 78	197 Au gold 79	201 Hg mercury 80	204 Tl thallium 81	207 Pb lead 82	209 Bi bismuth 83	[209] Po polonium 84	[210] At astatine 85	[222] Rn radon 86
	[223] Fr francium 87	[226] Ra radium 88	[227] Ac* actinium 89	[261] Rf rutherfordium 104	[262] Db dubnium 105	[266] Sg seaborgium 106	[264] Bh bohrium 107	[277] Hs hassium 108	[268] Mt meitnerium 109	[271] Ds darmstadtium 110	[272] Rg roentgenium 111	Elements with atomic numbers 112-116 have been reported but not fully authenticated						

* The lanthanoids (atomic numbers 58-71) and the actinoids (atomic numbers 90-103) have been omitted.

The relative atomic masses of copper and chlorine have not been rounded to the nearest whole number.