

GENERAL CERTIFICATE OF SECONDARY EDUCATION
GATEWAY SCIENCE
SCIENCE B

B622/02

Unit 2 Modules B2 C2 P2 (Higher Tier)

Candidates answer on the question paper.
A calculator may be used for this paper.

OCR supplied materials:
None

Other materials required:

- Pencil
- Ruler (cm/mm)

Monday 17 January 2011
Morning

Duration: 1 hour



Candidate forename		Candidate surname	
-----------------------	--	----------------------	--

Centre number						Candidate number				
---------------	--	--	--	--	--	------------------	--	--	--	--

INSTRUCTIONS TO CANDIDATES

- Write your name, centre number and candidate number in the boxes above. Please write clearly and in capital letters.
- Use black ink. Pencil may be used for graphs and diagrams only.
- Read each question carefully. Make sure you know what you have to do before starting your answer.
- Write your answer to each question in the space provided. Additional paper may be used if necessary but you must clearly show your candidate number, centre number and question number(s).
- Answer **all** the questions.
- Do **not** write in the bar codes.

INFORMATION FOR CANDIDATES

- The number of marks is given in brackets [] at the end of each question or part question.
- A list of physics equations is printed on page two.
- The Periodic Table is printed on the back page.
- The total number of marks for this paper is **60**.
- This document consists of **28** pages. Any blank pages are indicated.

2

EQUATIONS

$$\text{efficiency} = \frac{\text{useful energy output}}{\text{total energy input}}$$

$$\text{energy} = \text{mass} \times \text{specific heat capacity} \times \text{temperature change}$$

$$\text{energy} = \text{mass} \times \text{specific latent heat}$$

$$\text{fuel energy input} = \text{waste energy output} + \text{electrical energy output}$$

$$\text{power} = \text{voltage} \times \text{current}$$

$$\text{energy supplied} = \text{power} \times \text{time}$$

$$\text{energy (kilowatt hours)} = \text{power (kW)} \times \text{time (h)}$$

$$\text{wave speed} = \text{frequency} \times \text{wavelength}$$

Answer **all** the questions.

Section A – Module B2

1 Look at the pictures of a bear and a cactus.



(a) Plants and animals are different.

Look at the statements.

Which **one** is a correct statement about the difference between plants and animals?

Put a tick (✓) in the box next to the correct statement.

Most animals are more compact than plants so they can move.

Only animals carry out respiration.

Parasites are only found in the plant kingdom.

Plants are invertebrates and animals are vertebrates.

[1]

(b) Plants make sugar by a process called photosynthesis.

(i) The sugar is called glucose.

Write down the chemical formula of glucose.

..... [1]

(ii) The sugar is changed into starch.

Explain why.

..... [1]

(c) The cactus is adapted to hot, dry conditions.

One adaptation is having long roots to reach water.

Describe **one other** adaptation and the reason the cactus needs it.

adaptation.....

reason for adaptation..... [1]

[Total: 4]

Turn over

2 Read the report about ospreys.

Osprey nest protected



Ospreys have laid the first eggs of the season.

The Royal Society for the Protection of Birds (RSPB) will protect the nest from illegal egg collectors.

Last year the ospreys raised two chicks. A spokesman from the RSPB said this would help to increase the small numbers of these special birds in Britain.

(a) Ospreys are birds. Scientists think birds evolved from reptiles.

(i) Look at the statements.

Which **one** is a correct statement about birds and reptiles?

Put a tick (✓) in the box next to the correct statement.

Birds are vertebrates but reptiles are invertebrates.

Birds have beaks but reptiles have teeth.

Both birds and reptiles have gills.

Both birds and reptiles are covered in dry scales.

[1]

(ii) Scientists have used evidence from the fossil record to back up their ideas.

The fossil record is incomplete.

Write down **one** reason why it is incomplete.

..... [1]

- (b) When ospreys first returned to Scotland a conservation programme was set up to protect them.

People now travel to see the ospreys.

Suggest how the conservation programme may help people who live near the ospreys.

.....
..... [1]

- (c) There is a large lake near the ospreys' nest.

Some fishermen who use the lake do **not** want the ospreys to be protected.

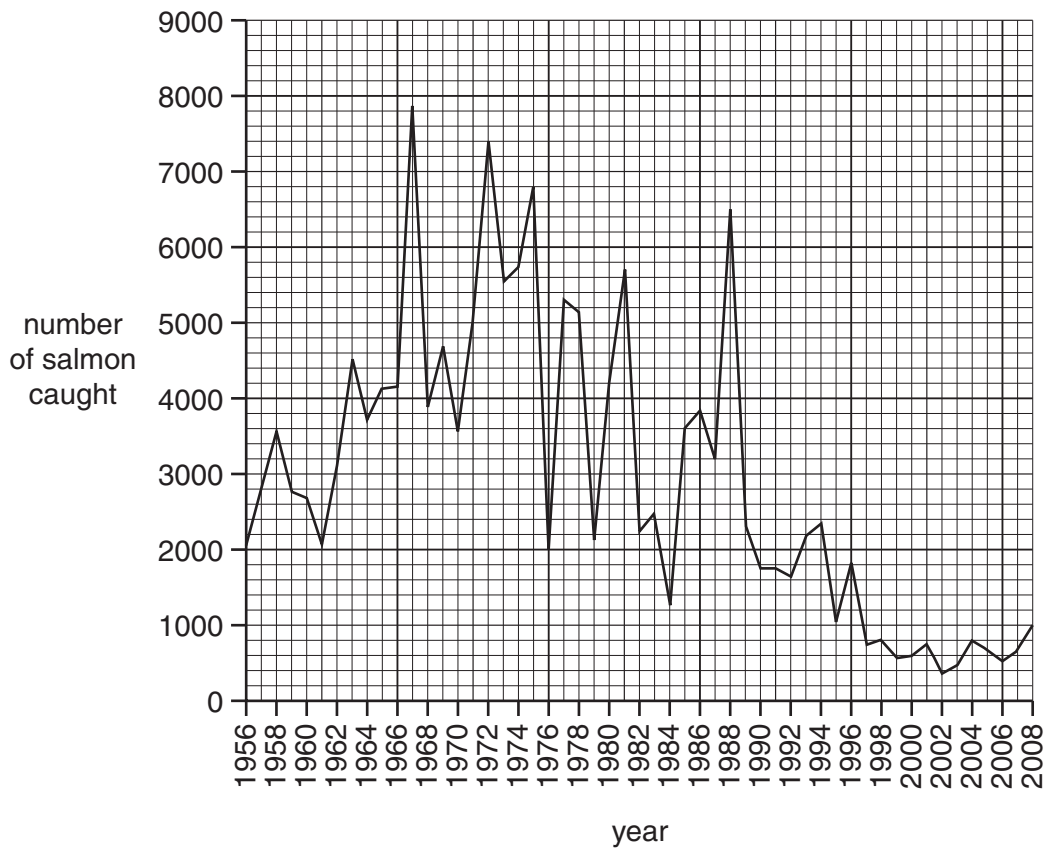
Suggest why.

.....
..... [1]

[Total: 4]

3 Look at the graph.

It shows the number of salmon caught in the river Wye between 1956 and 2008.



(a) In 1988 there were 6500 salmon caught in the river Wye.

In 2009 the catch was only 20% of that caught in 1988.

Calculate the number of fish caught in 2009.

.....

.....

answer [2]

(b) The change in numbers is thought to be due to an increase of sulfur dioxide in the air.

(i) Increased amounts of sulfur dioxide cause one type of pollution.

Write down the name of this pollution.

..... [1]

- (ii) Since 2002, lime has been added to the river to reduce the effect of sulfur dioxide pollution.

Is there enough evidence on the graph to show that adding lime has been successful?

Give a reason for your answer.

answer

reason

..... [1]

- (c) In 2002, scientists monitored the amount of pollution in a river.

They used stonefly larvae as an indicator species.

Stonefly larvae are very active and use gills to take in oxygen.

Scientists counted the number of stonefly larvae in water samples taken from different places along the river.

The table shows the results.

place along the river	number of stonefly larvae in each 3 litre sample
A	4
B	5
C	4
D	2
E	0

Each sample of water had a volume of three litres.

The scientists suggested the average population of stonefly larvae in the river was 1 per litre.

Suggest **one** reason why they might be wrong.


.....

..... [1]

[Total: 5]

4 Read the information about rats.

Two species of rat living in Britain are the brown rat (*Rattus norvegicus*) and the black rat (*Rattus rattus*).
 Fleas living on black rats caused the plague of 1665.
 There were no brown rats in Britain until the 1720s.
 Black rats are now one of the rarest mammals in Britain.
 Brown rats have increased in number to around 80 million.
 In the past, warfarin was used successfully to reduce the rat population.
 Now warfarin is no longer as effective so other methods of control are used.



(a) *Rattus rattus* is the scientific name for the black rat.

How do scientists describe this way of using two words to name a species?

..... [1]

(b) Natural selection has led to a change in the way we control the rat population.

(i) Explain

- why warfarin was used to control the rat population in the past
- why warfarin is no longer effective
- how Darwin would explain the change in effectiveness of warfarin.

.....

.....

.....

.....

.....

.....

.....

..... [4]

(ii) Lamarck would have given a different explanation to Darwin.

Write down **one** way in which Lamarck's explanation would be different.

.....

..... [1]

- (c) When Darwin first suggested his theory of natural selection many people objected to it because of their religious beliefs.

Write down **one** other reason why people objected.

.....
..... [1]

[Total: 7]

Section B – Module C2

5 This question is about building materials.

(a) Cement is made using limestone.

The chemical name for limestone is calcium carbonate.

When calcium carbonate is heated, carbon dioxide and calcium oxide are made.

(i) Write down the **word** equation for this reaction.

..... [1]

(ii) This reaction is an example of **thermal decomposition**.

What is meant by thermal decomposition?

.....
..... [1]

(b) Concrete is a building material made from cement.

Reinforced concrete has a solid steel support inside the concrete.

Look at the picture. It shows a pipe made of reinforced concrete.



Reinforced concrete is a **better** construction material than non-reinforced concrete.

Explain why. Use ideas about the properties of steel and concrete.

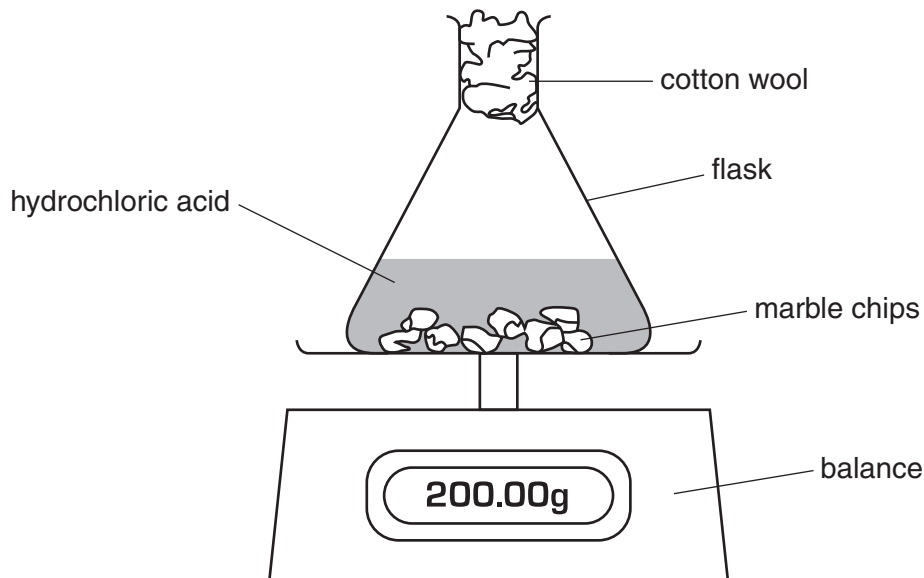
.....
.....
..... [2]

[Total: 4]

6 Hilary and Jeff investigate the reaction between marble chips and hydrochloric acid.

Carbon dioxide is given off during the reaction.

Look at the apparatus they use.



Hilary and Jeff measure the total mass of the reaction mixture every minute.

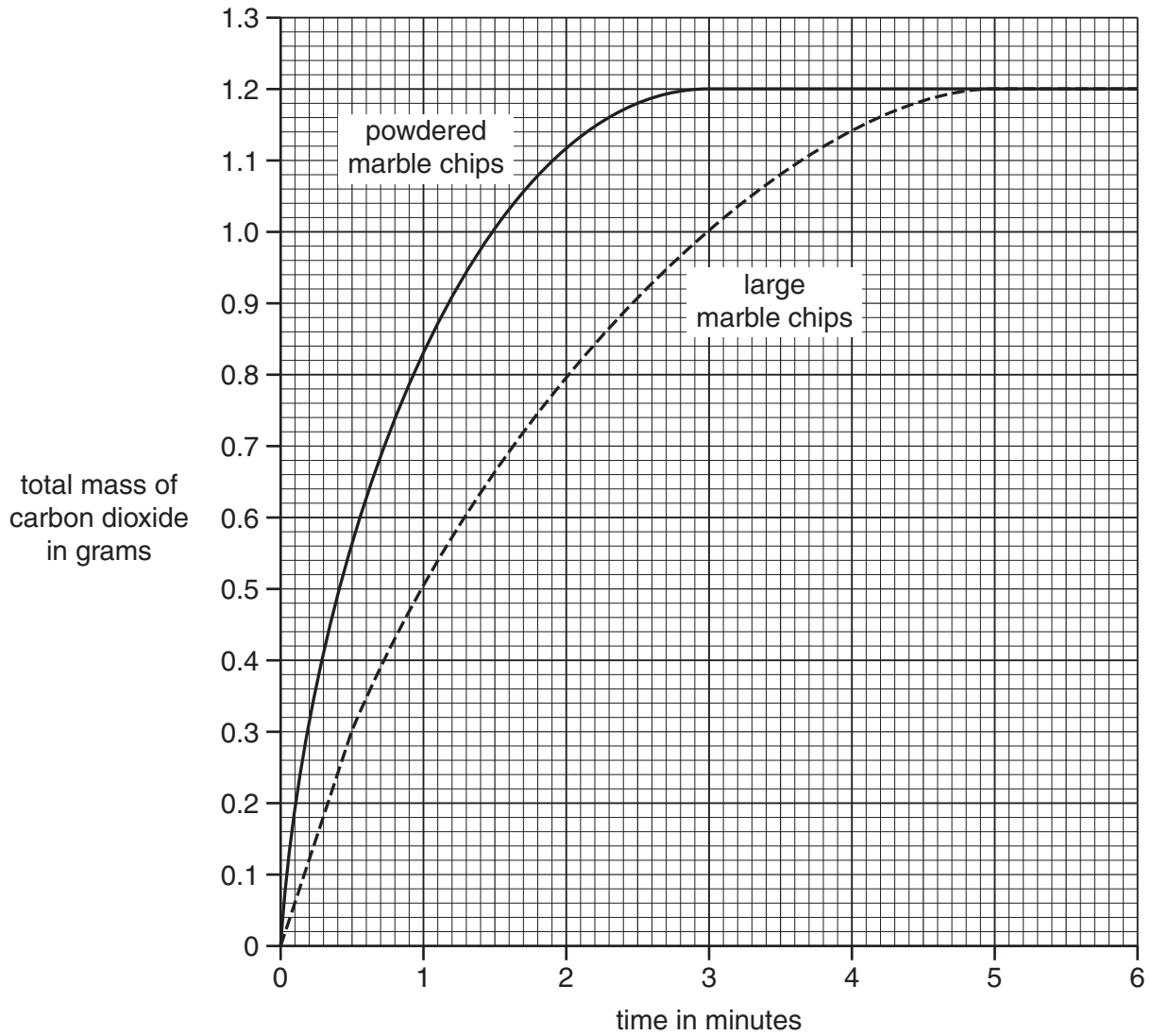
Hilary and Jeff do the experiment again.

They use the same volume of acid and the same amount of marble chips.

This time they use **powdered** marble chips.

After each measurement they work out the total mass of carbon dioxide given off.

Look at the graph. It shows their results from both experiments.



(a) Look at the line for **large** marble chips.

Calculate the total mass of carbon dioxide given off between 1 minute and 2 minutes.

.....

answer g [1]

(b) Look at the line for the **powdered** marble chips.

How long does it take for the reaction to finish?

..... minutes [1]

(c) (i) The reaction using powdered marble chips is faster than the reaction using large chips.

How can you tell from the **two lines**?

.....
 [1]

(ii) Explain why the reaction is faster using **powdered** marble chips.

Use ideas about particles.

.....

 [2]

(d) Look at the line for the **large** marble chips.

The rate of reaction during the first half minute can be calculated using the equation

$$\text{rate} = \frac{\text{total mass of carbon dioxide produced}}{\text{time in minutes}}$$

Calculate the rate of reaction during the first half minute for the **large** chips.

.....
 rate = g/minute [1]

[Total: 6]

7 This question is about tectonic plates.

(a) In 1906 there was a major earthquake in San Francisco.

The earthquake was caused by the movement of tectonic plates.

(i) There are two types of tectonic plates.

Write down the names of the two **types** of plates.

1

2 [1]

(ii) Use a fully labelled diagram to explain how tectonic plates move.

.....

..... [2]

(b) Volcanoes occur at plate boundaries.

When a volcano erupts, molten rock comes out and solidifies as igneous rock.

Some igneous rocks contain large crystals and others contain small crystals.

Explain why.

.....

..... [1]

[Total: 4]

8 This question is about the composition of the air.

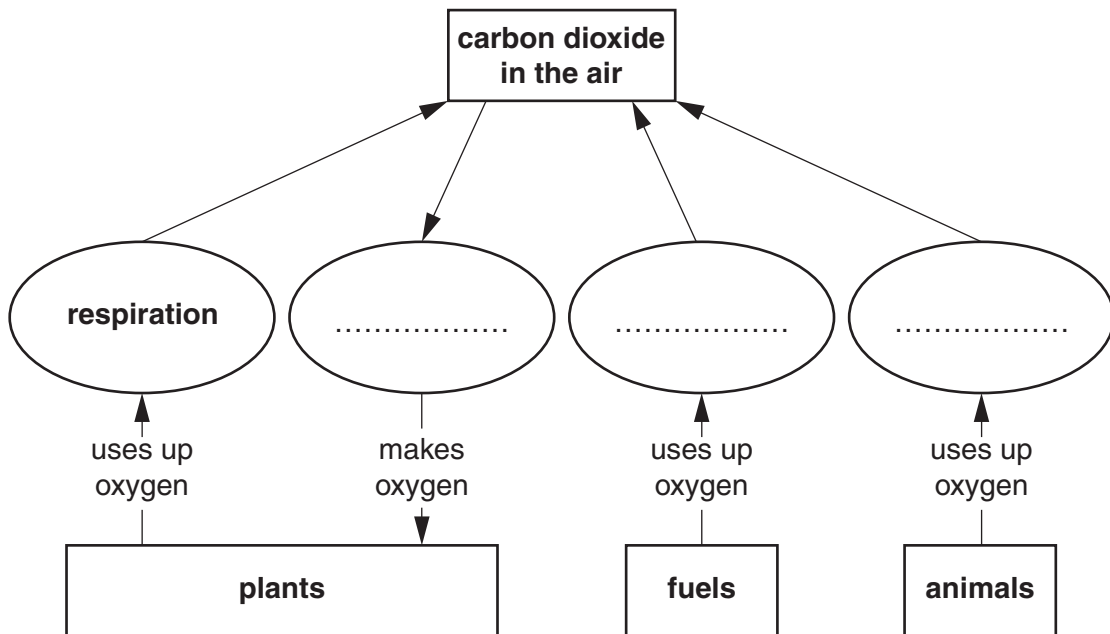
Look at the table.

It lists the percentages of three gases in clean air.

gas	percentage %
nitrogen	78
oxygen	21
carbon dioxide	0.035

These percentages do not change very much. This is mainly due to the carbon cycle.

(a) Look at the diagram, it shows part of a simple carbon cycle.



Respiration by plants uses up oxygen and makes carbon dioxide.

Complete each box by writing in the name of the correct process.

Choose from the following words.

combustion

photosynthesis

respiration

[2]

(b) Exhaust gases from a car contain carbon monoxide and oxides of nitrogen.

Cars are fitted with a catalytic converter.

The catalytic converter changes carbon monoxide, CO, and nitrogen monoxide, NO, into nitrogen, N₂, and carbon dioxide.

Write down the **balanced symbol** equation for this reaction.

..... [2]

[Total: 4]

9 This question is about paints.

Louise paints the wooden window frames in her house.

She uses oil based paint.

Oil based paints contain a pigment mixed in the oil and a solvent that dissolves the oil.

How does the oil paint **dry**?

Describe what happens to the solvent and the oil.

solvent

.....

oil

..... [2]

[Total: 2]

Section C – Module P2

10 This question is about ways of producing electricity.

(a) Carlos has solar powered lamps in his garden.

Energy from the Sun is absorbed by photocells and stored in a battery.

The battery then supplies the solar lamps with energy when it is dark.

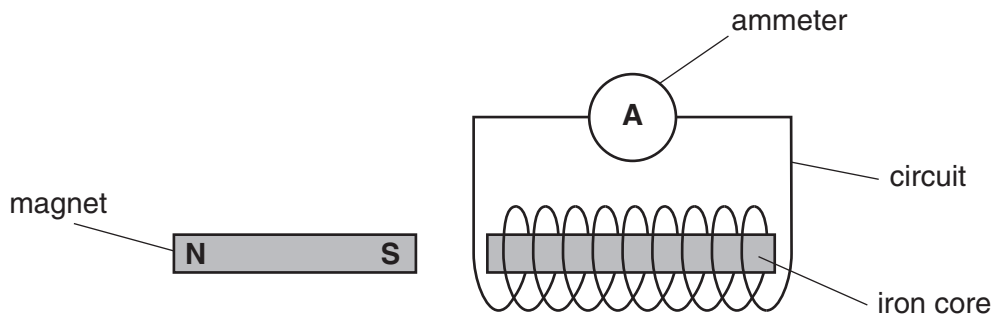


Write down two **advantages** of using photocells.

- 1
-
- 2
- [2]

(b) Carlos sets up this circuit. It is a type of **generator**.

It is a different way of producing electricity.



When Carlos moves

- the magnet towards the coil
- or
- the coil towards the magnet

a current is produced in the circuit.

The iron core increases the current in the circuit.

Write down one **other** thing that Carlos could do to **increase** the current in the circuit.

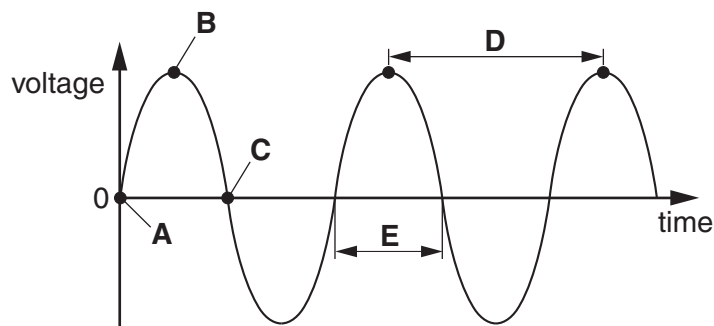
..... [1]

(c) Carlos removes the ammeter. It is replaced with a cathode ray oscilloscope (CRO).

The magnet is moved steadily towards and away from the coil.

Alternating current (AC) is produced.

The pattern on the screen of the CRO looks like this.



(i) Where does the current **start** to move in the opposite direction?

Choose from **A B C D E**

answer

[1]

(ii) Which letter represents **one complete cycle** of AC?

Choose from **A B C D E**

answer

[1]

[Total: 5]

11 Jake investigates the **power** of a light bulb.

He measures the current and voltage for a light bulb.

Look at his results.

current = 1.5 amps (A)

voltage = 12 volts (V)

Calculate the power of the light bulb.

The equations on page 2 may help you.

.....

answer watts (W)

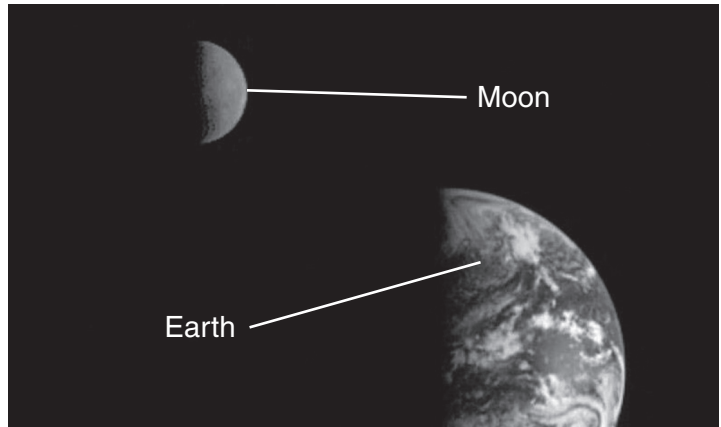
[2]

[Total: 2]

Turn over

12 The Moon is close to our planet, the Earth.

Together they are called the Earth-Moon system.



not to scale

There are many theories about how the Earth-Moon system was made.

Some scientists think that the Earth-Moon system was made when another planet came towards the 'old' planet Earth.

(a) Describe how the Earth-Moon system could have been made in this way.

.....
.....
..... [2]

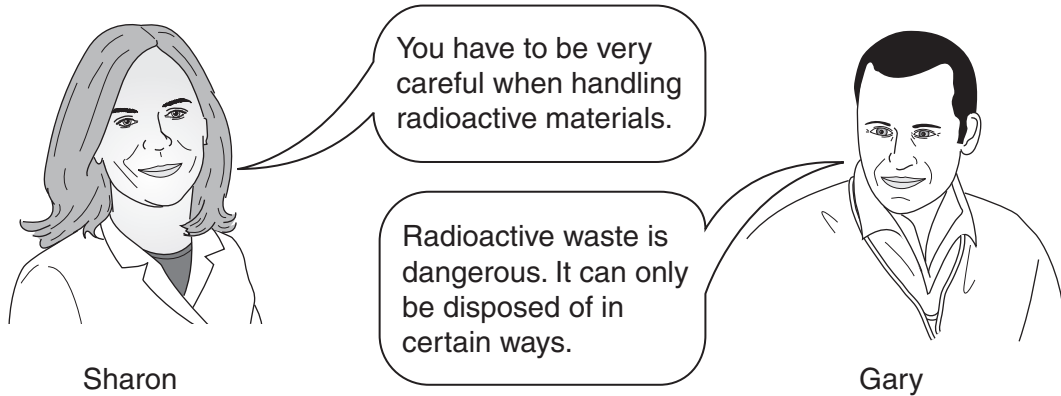
(b) What evidence suggests that the Earth-Moon system was made in this way?

.....
.....
.....
..... [2]

[Total: 4]

13 This question is about nuclear power and nuclear radiation.

Two scientists are talking.



Both scientists are correct.

(a) Gary disposes of radioactive waste safely.

Write down **two** ways in which he can do this.

1

.....

2

..... [2]

(b) One problem in dealing with radioactive waste is the level of radioactivity given off by the waste now and in the future.

Explain why this is a problem.

.....

..... [1]

[Total: 3]

14 This question is about the Universe.

(a) Complete the sentences about our Solar System and beyond.

The Earth is one of the in the Solar System.

The Sun is at the centre of our Solar System.

The Solar System is just a tiny part of the Milky Way.

The Milky Way is an example of a

There may be an object near the centre of the Milky Way from which light cannot escape.

If not even light can escape from an object it is called a

[2]

(b) A star like our Sun takes millions of years to form.

The birth of a star can be described using the statements below.

They are **not** in the correct order.

gravity makes dust particles spiral together

thermonuclear fusion takes place

main sequence star forms

protostar forms

temperature becomes very high

dust and gas clouds form

Put the statements in the correct order.

Write each statement in the correct box below.

Two have been done for you.

order

1

2

3

protostar formed

4

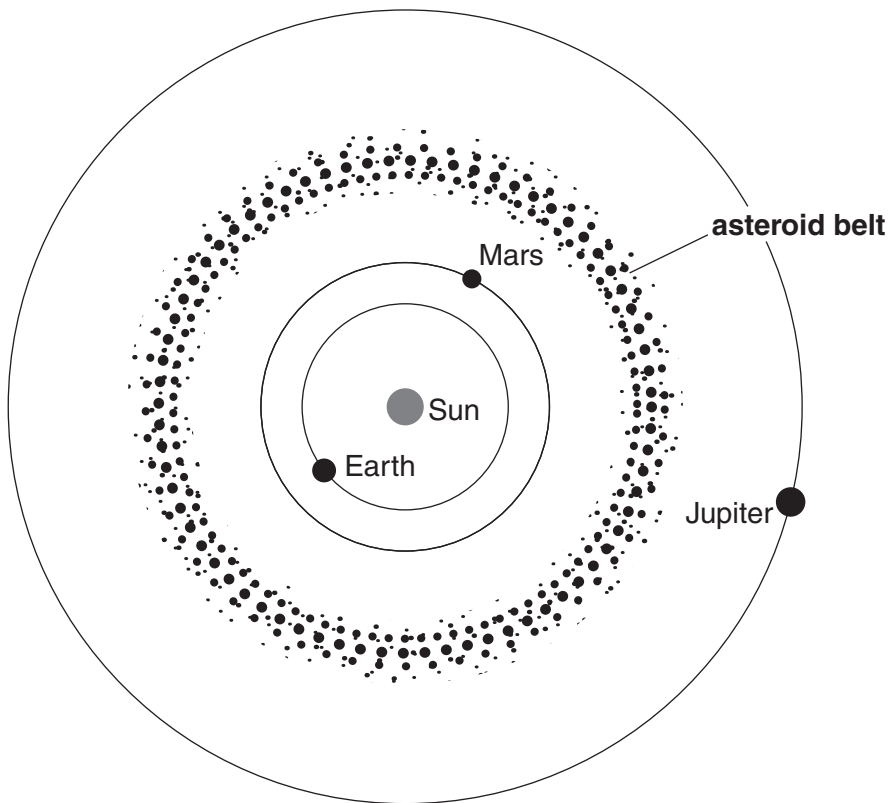
temperature becomes very high

5

6

[2]

(c) The asteroid belt is between the planets Jupiter and Mars.



(Orbits drawn approximately to scale)

Use the diagram to help you complete the following sentences about the asteroids.

Some of the asteroids in the asteroid belt clump together.

The huge force from pulls them apart.

This stops the formation of another between Mars and

.....

[2]

[Total: 6]

END OF QUESTION PAPER

25
BLANK PAGE

PLEASE DO NOT WRITE ON THIS PAGE

BLANK PAGE

PLEASE DO NOT WRITE ON THIS PAGE

PLEASE DO NOT WRITE ON THIS PAGE



Copyright Information

OCR is committed to seeking permission to reproduce all third-party content that it uses in its assessment materials. OCR has attempted to identify and contact all copyright holders whose work is used in this paper. To avoid the issue of disclosure of answer-related information to candidates, all copyright acknowledgements are reproduced in the OCR Copyright Acknowledgements Booklet. This is produced for each series of examinations and is freely available to download from our public website (www.ocr.org.uk) after the live examination series.

If OCR has unwittingly failed to correctly acknowledge or clear any third-party content in this assessment material, OCR will be happy to correct its mistake at the earliest possible opportunity.

For queries or further information please contact the Copyright Team, First Floor, 9 Hills Road, Cambridge CB2 1GE.

OCR is part of the Cambridge Assessment Group; Cambridge Assessment is the brand name of University of Cambridge Local Examinations Syndicate (UCLES), which is itself a department of the University of Cambridge.

The Periodic Table of the Elements

1	2	3	4	5	6	7	0										
7 Li lithium 3	9 Be beryllium 4	11 Na sodium 11	12 C carbon 6	13 Al aluminium 13	14 N nitrogen 7	15 P phosphorus 15	16 O oxygen 8	17 F fluorine 9	18 Ne neon 10								
19 K potassium 19	20 Ca calcium 20	21 Sc scandium 21	22 Ti titanium 22	23 V vanadium 23	24 Cr chromium 24	25 Mn manganese 25	26 Fe iron 26	27 Co cobalt 27	28 Ni nickel 28	29 Cu copper 29	30 Zn zinc 30	31 Ga gallium 31	32 Ge germanium 32	33 As arsenic 33	34 Se selenium 34	35 Br bromine 35	36 Kr krypton 36
37 Rb rubidium 37	38 Sr strontium 38	39 Y yttrium 39	40 Zr zirconium 40	41 Nb niobium 41	42 Mo molybdenum 42	43 Tc technetium 43	44 Ru ruthenium 44	45 Rh rhodium 45	46 Pd palladium 46	47 Ag silver 47	48 Cd cadmium 48	49 In indium 49	50 Sn tin 50	51 Sb antimony 51	52 Te tellurium 52	53 I iodine 53	54 Xe xenon 54
55 Cs caesium 55	56 Ba barium 56	57 La* lanthanum 57	72 Hf hafnium 72	73 Ta tantalum 73	74 W tungsten 74	75 Re rhenium 75	76 Os osmium 76	77 Ir iridium 77	78 Pt platinum 78	79 Au gold 79	80 Hg mercury 80	81 Tl thallium 81	82 Pb lead 82	83 Bi bismuth 83	84 Po polonium 84	85 At astatine 85	86 Rn radon 86
[223] Fr francium 87	[226] Ra radium 88	[227] Ac* actinium 89	[261] Rf rutherfordium 104	[262] Db dubnium 105	[266] Sg seaborgium 106	[264] Bh bohrium 107	[277] Hs hassium 108	[268] Mt meitnerium 109	[271] Ds darmstadtium 110	[272] Rg roentgenium 111	Elements with atomic numbers 112-116 have been reported but not fully authenticated						

1	H hydrogen 1
---	---------------------------

relative atomic mass
atomic symbol
name
atomic (proton) number

Key

* The lanthanoids (atomic numbers 58-71) and the actinoids (atomic numbers 90-103) have been omitted.

The relative atomic masses of copper and chlorine have not been rounded to the nearest whole number.