

Thursday 12 January 2012 – Morning

**GCSE GATEWAY SCIENCE
SCIENCE B**

B711/01 Science modules B1, C1, P1 (Foundation Tier)

Candidates answer on the Question Paper.
A calculator may be used for this paper.

OCR supplied materials:
None

Other materials required:

- Pencil
- Ruler (cm/mm)

Duration: 1 hour 15 minutes



Candidate forename		Candidate surname	
--------------------	--	-------------------	--

Centre number						Candidate number				
---------------	--	--	--	--	--	------------------	--	--	--	--

MODIFIED LANGUAGE

INSTRUCTIONS TO CANDIDATES

- Write your name, centre number and candidate number in the boxes above. Please write clearly and in capital letters.
- Use black ink. HB pencil may be used for graphs and diagrams only.
- Answer **all** the questions.
- Read each question carefully. Make sure you know what you have to do before starting your answer.
- Write your answer to each question in the space provided. Additional paper may be used if necessary but you must clearly show your candidate number, centre number and question number(s).
- Do **not** write in the bar codes.

INFORMATION FOR CANDIDATES

- Your quality of written communication is assessed in questions marked with a pencil (✎).
- A list of equations can be found on page 2.
- The Periodic Table can be found on the back page.
- The number of marks is given in brackets [] at the end of each question or part question.
- The total number of marks for this paper is **75**.
- This document consists of **24** pages. Any blank pages are indicated.

EQUATIONS

energy = mass × specific heat capacity × temperature change

energy = mass × specific latent heat

efficiency = $\frac{\text{useful energy output} (\times 100\%)}{\text{total energy input}}$

wave speed = frequency × wavelength

power = voltage × current

energy supplied = power × time

average speed = $\frac{\text{distance}}{\text{time}}$

distance = average speed × time

$$s = \frac{(u + v)}{2} \times t$$

acceleration = $\frac{\text{change in speed}}{\text{time taken}}$

force = mass × acceleration

weight = mass × gravitational field strength

work done = force × distance

power = $\frac{\text{work done}}{\text{time}}$

power = force × speed

$$\text{KE} = \frac{1}{2}mv^2$$

momentum = mass × velocity

force = $\frac{\text{change in momentum}}{\text{time}}$

GPE = mgh

$$mgh = \frac{1}{2}mv^2$$

resistance = $\frac{\text{voltage}}{\text{current}}$

Answer **all** the questions.

Section A – Module B1

1 The number of people with heart disease in the UK is increasing.

Doctors tell their patients how to reduce the risk of developing heart disease.

One piece of advice is to eat a balanced diet without too much salt or saturated fat.

(a) What advice, **other than diet**, should doctors give about how to reduce the risk of heart disease?

.....
.....
.....
..... [2]

(b) Some diets lead to a build up of cholesterol in the blood.

Drugs can be used to lower cholesterol levels.

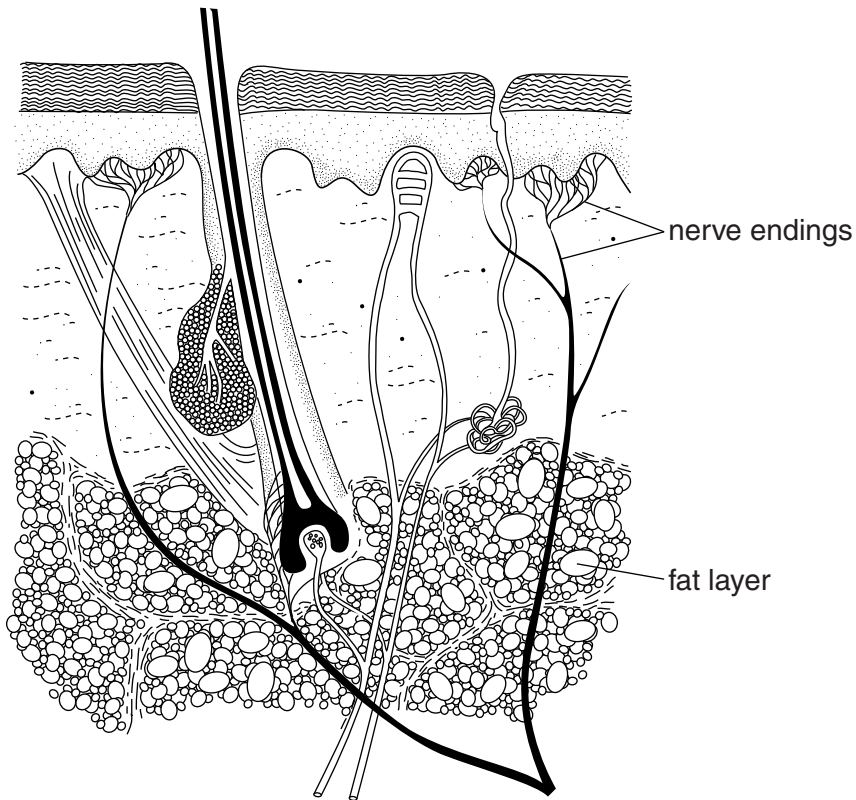
New drugs have to be tested before they are used.

Why do new drugs need to be tested?

.....
.....
.....
..... [2]

[Total: 4]

2 The diagram shows a section through human skin.



(a) Sam has fallen over and damaged the skin on her knee.

(i) Sam's mum tells her that she should put a plaster over the damaged skin until a scab forms.

Suggest why Sam should do this.

.....

.....

..... [2]

(ii) Sam now has a scab. New skin is growing under the scab.

Which food type is most important for growing new skin?

Put a ring around the **best** answer.

carbohydrate

fibre

minerals

protein

[1]

(b) Fat in skin helps to maintain normal body temperature by reducing heat loss.

(i) What is normal body temperature?

..... °C [1]

(ii) If the body is in danger of getting too hot, heat loss from the skin can be increased.

Write down **one** way heat loss can be increased.

.....
..... [1]

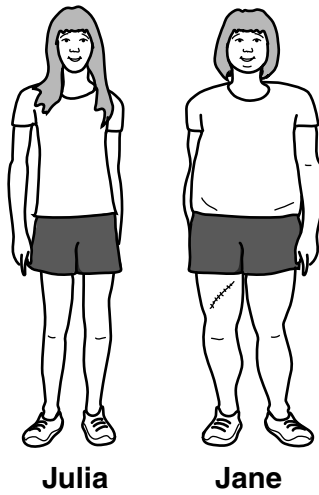
(c) The skin is also a sense organ.

Write down **one** thing that the skin can sense.

..... [1]

[Total: 6]

3 (a) Julia and Jane are identical twins. This means they came from the same fertilised egg.



Look at the pictures.

Julia and Jane have the same coloured eyes and are the same height.

Identify the **differences** between Julia and Jane.

Explain why some of their features are the same but some are different.



The quality of written communication will be assessed in your answer to this question.

.....

.....

.....

.....

.....

.....

.....

.....

.....

.....

.....

.....

.....

.....

.....

.....

.....

.....

.....

.....

.....

[6]

(b) Julia and Jane have a brother called James.

How is the sex of girls and boys determined?

.....

.....

..... [2]

[Total: 8]

4 The table shows information about the alcohol in different brands of beer.

brand	volume of beer in can or bottle in ml	units of alcohol in can or bottle
A	440	1.8
B	330	1.6
C	440	1.5
D	275	1.0
E	330	1.7

1 unit = 10 ml of pure alcohol

1 unit is also the amount of alcohol that the average adult can drink and remove from their blood in one hour.

(a) How many ml of alcohol are in one can of **brand A**?

answer ml [1]

(b) (i) If an average adult drinks one can of **brand C**, how many **minutes** will it take to remove all the alcohol from the blood?

answer min [1]

(ii) Billy drinks a can of **brand C**.

It takes 120 minutes for all the alcohol to be removed from his blood.

This is different from the time it takes an average adult.

Explain why it is different.

.....
 [1]

(c) Billy drinks 100ml of each brand on different days, one brand per day.

Which brand will take longest to be removed from his blood?

You **must** show your working.

answer

[2]

(d) Billy should **not** drive a car while there is alcohol in his blood.

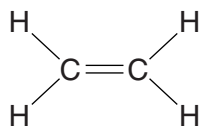
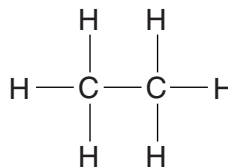
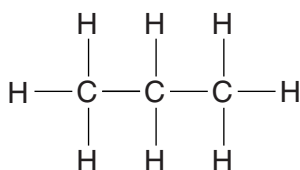
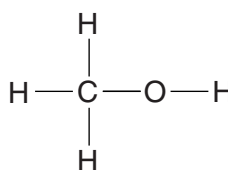
Explain why.

.....
.....
.....
..... [2]

[Total: 7]

Section B – Module C1

5 Look at the displayed formulas of some carbon compounds.

**A****B****C****D**

(a) Which displayed formula contains a total of 8 atoms?

Choose from **A**, **B**, **C** or **D**.

answer

[1]

(b) Which compound is **not** a hydrocarbon?

Explain your answer.

.....

..... [2]

(c) Which compound will decolourise bromine water?

Choose from **A**, **B**, **C** or **D**.

answer

[1]

(d) Compound **A** is ethene.

What is the name of the polymer that is made from ethene?

..... [1]

(e) What is the molecular formula of compound **C**?

..... [1]

[Total: 6]

6 Look at the table. It shows some information about polymers.

polymer	melting point in °C	solubility in water	solubility in petrol	is it biodegradable?
A	80	slightly soluble	insoluble	yes
B	90	slightly soluble	soluble	no
C	120	insoluble	insoluble	yes
D	95	insoluble	soluble	no

(a) Which polymer is suitable for making a container to hold boiling water?

Choose from **A**, **B**, **C** or **D**.

answer

[1]

(b) Which polymer should be used to make a litter bin for use in a park?

Explain your answer.

.....

 [2]

(c) Waste polymers need to be disposed of.

Write down **one** way that local councils dispose of waste polymers.

..... [1]

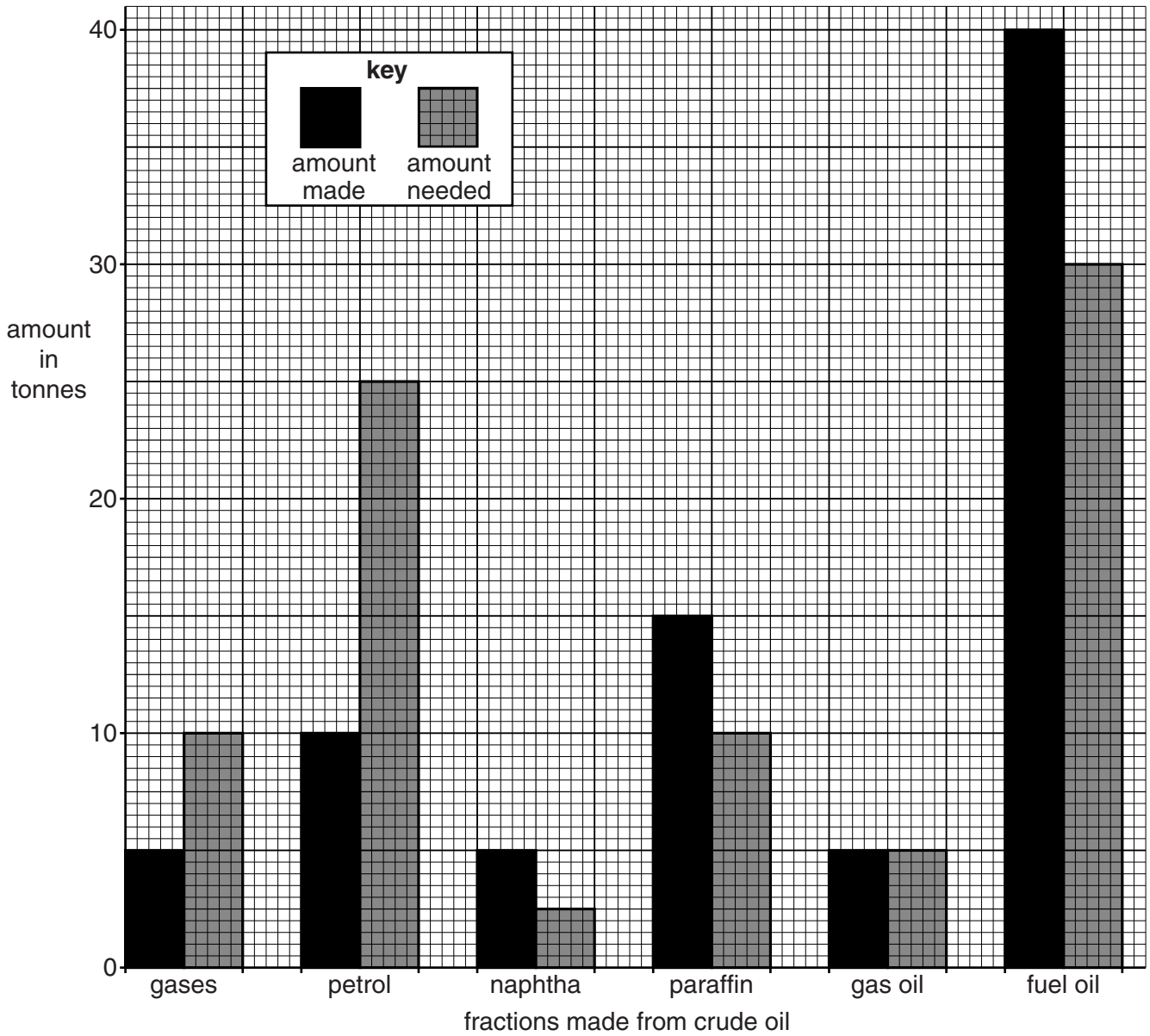
[Total: 4]

7 Oil refineries separate crude oil into useful fractions.

They do this by fractional distillation.

The bar chart shows the amount of some fractions **made** from 100 tonnes of crude oil.

It also shows the amount of these fractions **needed** for everyday uses.



8 Look at the table. It shows information about some fuels.

fuel	energy value in kilojoules per kg	availability	cost in £ per kg	state at room temperature	estimated years of supply left	pollution
A	4800	good	1.30	liquid	20	makes carbon dioxide and some sulfur dioxide
B	4960	limited	0.80	liquid	12	makes carbon dioxide
C	8950	good	0.33	solid	50	makes carbon dioxide and large amounts of sulfur dioxide
D	3700	good	1.30	gas	8	makes carbon dioxide

(a) Fuel **A** is best for powering a car.

Explain why.

.....
 [2]

(b) A new power station plans to use fuel **C**.

Explain the advantages and disadvantages of using fuel **C**.

.....

 [3]

(c) The table lists some factors to be considered when choosing a fuel.

Write down one **other** factor to be considered when choosing a fuel.

..... [1]

(d) Fuel **C** makes large amounts of sulfur dioxide.

How is sulfur dioxide made when fuel **C** burns?

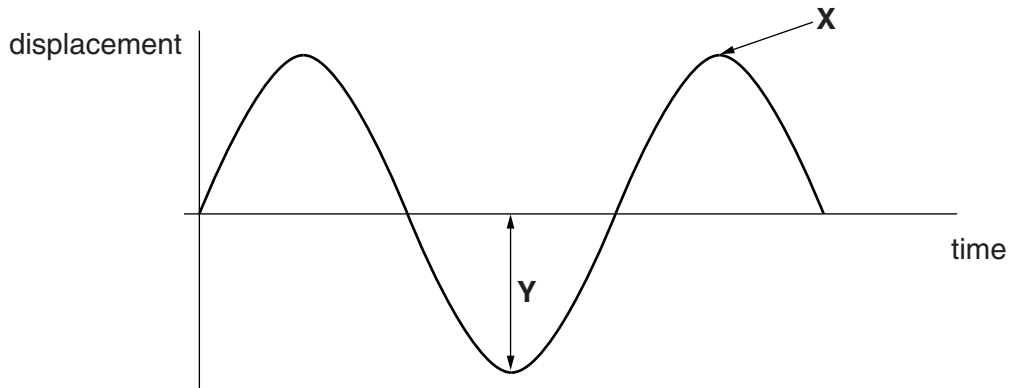
..... [1]

[Total: 7]

Section C – Module P1

9 This question is about waves.

(a) Look at the diagram of a wave.



(i) Write down the name of the feature labelled **X**.

..... [1]

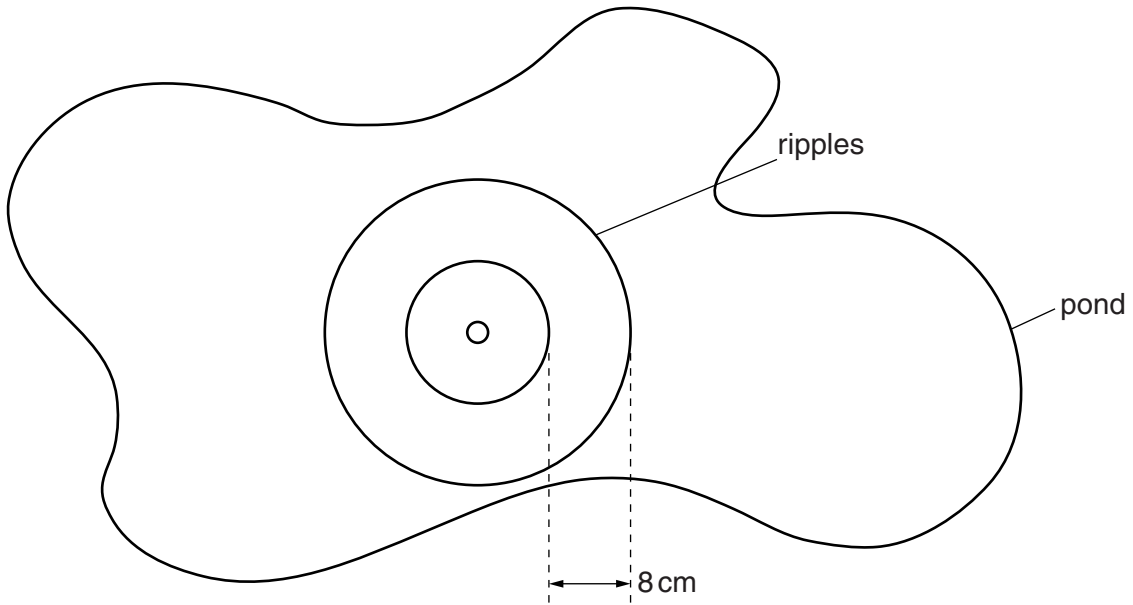
(ii) Write down the name of the feature labelled **Y**.

..... [1]

(b) Zeta drops a ball into a pond.

She notices that the ball causes ripples 8 cm apart.

The ball moves up and down on the water with a frequency of 2 Hz.



Calculate the speed that the wave moves over the water.

.....
.....

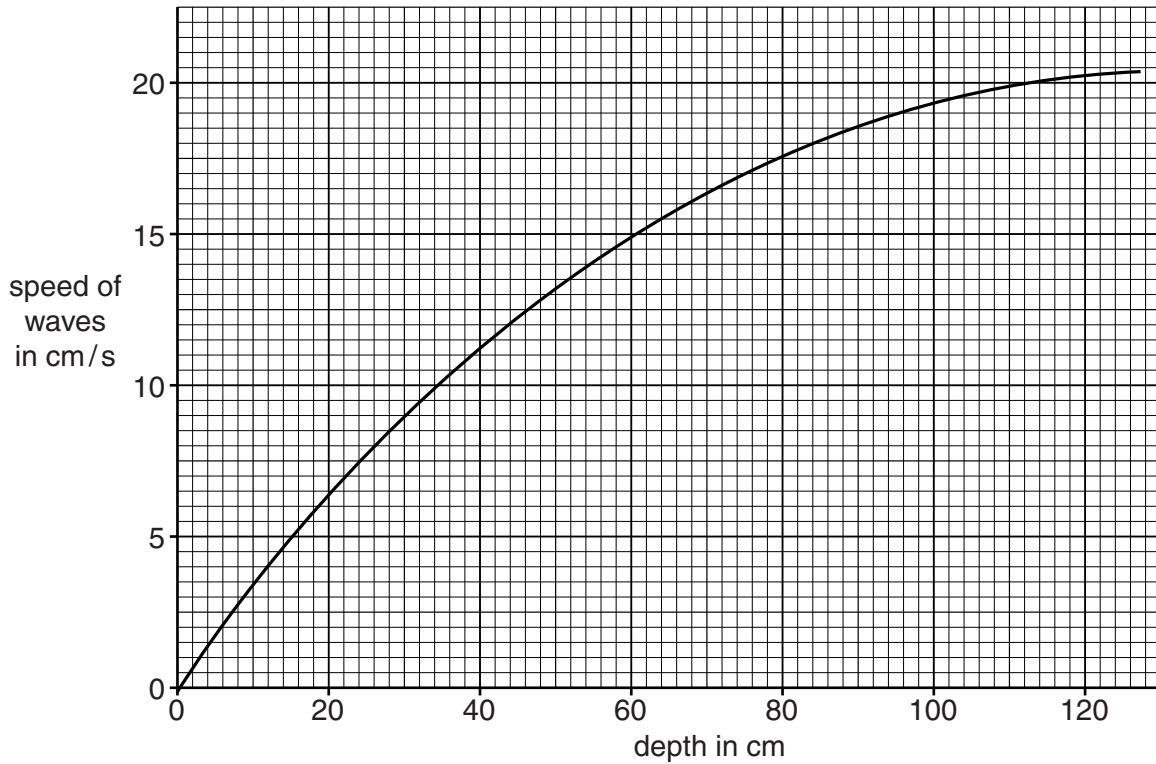
answer cm/s

[2]

(c) Zeta drops the ball into different parts of the pond.

These parts have different depths.

Look at the graph of her results.



Complete the sentence using information from the graph.

When the pond gets the speed of the waves [1]

[Total: 5]

10 This question is about heat energy.

(a) Look at the table.

It shows the temperature of some objects.

object	temperature of object in °C
boiling water	100
cooker hot plate	600
cup of tea	80
filament of light bulb	1200

Each hot object is in a room at 20°C, where they are allowed to cool down.

When they cool, the filament of the light bulb cools at the highest rate.

Explain why.

.....
 [1]

(b) To make the tea Tom boiled some water in a kettle.

The kettle used 320 000 J of energy.

It took 80 000 J to boil the water to make his tea.

The rest of the energy was wasted.

(i) Calculate the efficiency of this method of making a cup of tea.

.....

 efficiency [2]

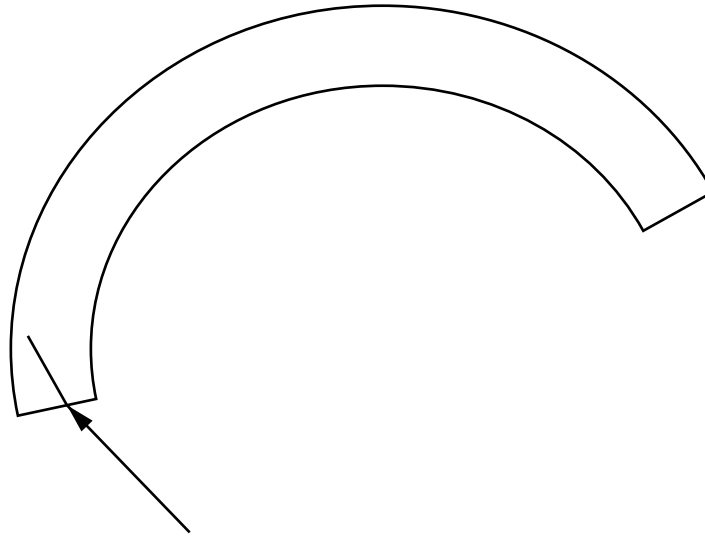
(ii) Suggest how he could improve the efficiency of this method.

.....
 [1]

[Total: 4]

12 (a) Many telephone companies use optical fibres to carry signals over large distances.

Look at the enlarged diagram of an optical fibre.



Continue the ray to show its path along the fibre from one end to the other. [2]

(b) Lasers produce a narrow intense beam of light.

Write down **one** use of a laser.

.....
..... [1]

(c) Some people think the use of mobile phones is safe.

Others think mobile phones may be harmful to health.



Write about one of the possible health risks from using mobile phones and suggest how this risk can be reduced.

.....
.....
.....
..... [2]

[Total: 5]

13 Sunbathing can be harmful.

Sun cream can reduce the harmful effects.

(a) Look at the information about sun creams.

	type of sun cream	time to stay in sun without burning
A	no sun cream	15 minutes
B	supersun	2 hours
C	alltan	1 hour 15 minutes
D	noburn	45 minutes
E	catan	3 hours

Which type of sun cream has the highest sun protection factor (SPF)?

Choose from **A B C D E**

answer

[1]

(b) Exposure to sunlight produces a suntan and can cause sunburn.

Write down one **other** effect exposure to sunlight can cause.

..... [1]

(c) Which type of electromagnetic radiation causes sunburn?

..... [1]

[Total: 3]

14 Will and his friends go on a school trip. They each take a packed lunch from the school fridge.

Each lunch is wrapped in a different material as shown in the table.

name	wrapping material
Will	white paper bag
Rose	brown paper bag
Paul	clear polythene bag
Olivia	silver cooking foil

They leave their lunches in the sun.

Whose lunch will be the coolest when they come back to eat it?

Explain your answer.

.....

.....

..... [2]

[Total: 2]

END OF QUESTION PAPER

PLEASE DO NOT WRITE ON THIS PAGE



Copyright Information

OCR is committed to seeking permission to reproduce all third-party content that it uses in its assessment materials. OCR has attempted to identify and contact all copyright holders whose work is used in this paper. To avoid the issue of disclosure of answer-related information to candidates, all copyright acknowledgements are reproduced in the OCR Copyright Acknowledgements Booklet. This is produced for each series of examinations and is freely available to download from our public website (www.ocr.org.uk) after the live examination series. If OCR has unwittingly failed to correctly acknowledge or clear any third-party content in this assessment material, OCR will be happy to correct its mistake at the earliest possible opportunity.

For queries or further information please contact the Copyright Team, First Floor, 9 Hills Road, Cambridge CB2 1GE.

OCR is part of the Cambridge Assessment Group; Cambridge Assessment is the brand name of University of Cambridge Local Examinations Syndicate (UCLES), which is itself a department of the University of Cambridge.

The Periodic Table of the Elements

		1	2	3	4	5	6	7	0										
		1 H hydrogen 1							4 He helium 2										
		Key																	
		relative atomic mass atomic symbol name atomic (proton) number																	
		7 Li lithium 3	9 Be beryllium 4	11 Na sodium 11	12 Mg magnesium 12	13 Al aluminium 13	14 Si silicon 14	15 P phosphorus 15	16 S sulfur 16	17 Cl chlorine 17	18 Ar argon 18								
		19 K potassium 19	20 Ca calcium 20	21 Sc scandium 21	22 Ti titanium 22	23 V vanadium 23	24 Cr chromium 24	25 Mn manganese 25	26 Fe iron 26	27 Co cobalt 27	28 Ni nickel 28	29 Cu copper 29	30 Zn zinc 30	31 Ga gallium 31	32 Ge germanium 32	33 As arsenic 33	34 Se selenium 34	35 Br bromine 35	36 Kr krypton 36
		37 Rb rubidium 37	38 Sr strontium 38	39 Y yttrium 39	40 Zr zirconium 40	41 Nb niobium 41	42 Mo molybdenum 42	43 Tc technetium [98]	44 Ru ruthenium 44	45 Rh rhodium 45	46 Pd palladium 46	47 Ag silver 47	48 Cd cadmium 48	49 In indium 49	50 Sn tin 50	51 Sb antimony 51	52 Te tellurium 52	53 I iodine 53	54 Xe xenon 54
		55 Cs caesium 55	56 Ba barium 56	57 La* lanthanum 57	72 Hf hafnium 72	73 Ta tantalum 73	74 W tungsten 74	75 Re rhenium 75	76 Os osmium 76	77 Ir iridium 77	78 Pt platinum 78	79 Au gold 79	80 Hg mercury 80	81 Tl thallium 81	82 Pb lead 82	83 Bi bismuth 83	84 Po polonium 84	85 At astatine 85	86 Rn radon 86
		[223] Fr francium 87	[226] Ra radium 88	[227] Ac* actinium 89	[261] Rf rutherfordium 104	[262] Db dubnium 105	[266] Sg seaborgium 106	[264] Bh bohrium 107	[277] Hs hasium 108	[268] Mt meitnerium 109	[271] Ds darmstadtium 110	[272] Rg roentgenium 111	Elements with atomic numbers 112-116 have been reported but not fully authenticated						

* The lanthanoids (atomic numbers 58-71) and the actinoids (atomic numbers 90-103) have been omitted.

The relative atomic masses of copper and chlorine have not been rounded to the nearest whole number.