

Candidate forename		Candidate surname	
-----------------------	--	----------------------	--

Centre number						Candidate number				
------------------	--	--	--	--	--	---------------------	--	--	--	--

**OXFORD CAMBRIDGE AND RSA EXAMINATIONS  
GENERAL CERTIFICATE OF SECONDARY EDUCATION**

**A325/02**

**TWENTY FIRST CENTURY SCIENCE  
ADDITIONAL APPLIED SCIENCE A**

**Scientific Detection (Higher Tier)**

**TUESDAY 7 JUNE 2011: Afternoon**

**DURATION: 45 minutes**

**SUITABLE FOR VISUALLY IMPAIRED CANDIDATES**

**Candidates answer on the question paper.**

**A calculator may be used for this paper.**

**OCR SUPPLIED MATERIALS:**

**None**

**OTHER MATERIALS REQUIRED:**

**Pencil**

**Ruler (cm/mm)**

**READ INSTRUCTIONS OVERLEAF**

## **INSTRUCTIONS TO CANDIDATES**

- **Write your name, centre number and candidate number in the boxes on the first page. Please write clearly and in capital letters.**
- **Use black ink. Pencil may be used for graphs and diagrams only.**
- **Read each question carefully. Make sure you know what you have to do before starting your answer.**
- **Write your answer to each question in the space provided. Additional paper may be used if necessary but you must clearly show your candidate number, centre number and question number(s).**
- **Answer ALL the questions.**

## **INFORMATION FOR CANDIDATES**

- **The number of marks is given in brackets [ ] at the end of each question or part question.**
- **The total number of marks for this paper is 36.**

**BLANK PAGE**

**Please turn over for question 1.**

**Answer ALL the questions.**

**1 Good laboratory practice is essential to produce reliable evidence.**

**(a) Describe TWO ways in which all public laboratories ensure reliability of their data.**

---

---

---

---

**[2]**

**(b) State the three main things that good laboratory practice depends upon.**

**1** \_\_\_\_\_

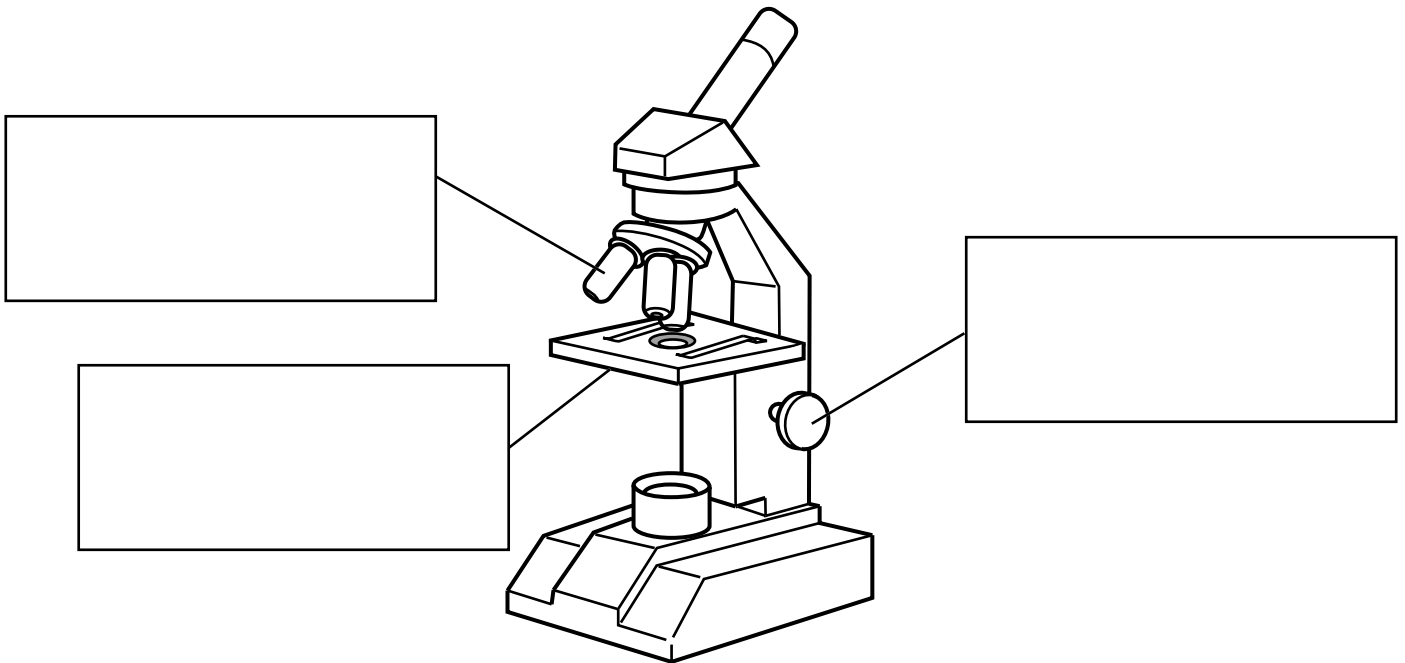
**2** \_\_\_\_\_

**3** \_\_\_\_\_ **[3]**

**[Total: 5]**

**2 Scientists sometimes use light microscopes when examining evidence.**


**(a) Complete the labels on this diagram of a microscope.**



**[3]**

**(b) A forensic scientist looks at a fingerprint through a microscope. She takes three different photographs of the fingerprint.**

**A**



**B**



**C**



**Photograph B has the greatest resolution.  
Explain what is meant by resolving power and the  
limitations of resolving power to light microscopy.**

---

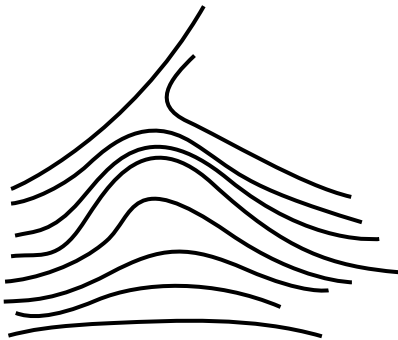
---

---


**[2]**

**(c) Look at the drawings of three different patterns found in fingerprints.**


**arch**



**loop**



**whorl**



**Which TWO of these patterns are found in  
fingerprint B?**

\_\_\_\_\_ and \_\_\_\_\_ **[1]**

**(d) The scientist wants to know how many times the image of the fingerprint has been magnified. Which two facts does she need to know about her microscope, to be able to calculate its magnification?**

**1** \_\_\_\_\_

**2** \_\_\_\_\_ **[2]**

**[Total: 8]**



**BLANK PAGE**

**Please turn over for question 3.**

**3 Materials can be tested in different ways. Different tests give different levels of detail in the results.**

**(a) A scientist tests a drink with litmus paper.**

**(i) Which of these words BEST describes the litmus test?**

**Put a ring around the correct answer.**

**qualitative**

**quantitative**

**semi quantitative**

**[1]**

**(ii) Explain how a QUANTITATIVE test differs from a QUALITATIVE test.**

\_\_\_\_\_


\_\_\_\_\_ **[1]**

**(iii) What colour will the litmus paper turn if the drink is alkaline?**

\_\_\_\_\_ **[1]**

**(b) The scientist tests the drink with a different indicator.**

**pH scale    indicator colour**

<b>pH 2</b>	
<b>pH 4</b>	
<b>pH 7</b>	
<b>pH 10</b>	
<b>pH 13</b>	

**results of the test on the drink** 

**What is the pH of the drink?**

**pH = \_\_\_\_\_**

**How can you tell?**

\_\_\_\_\_ **[1]**

**(c) Indicators to identify acids or alkalis, and pregnancy testing kits, are examples of colour tests used in medical diagnosis.**

**Name one other example of a colour testing kit used in medical diagnosis.**

\_\_\_\_\_ **[1]**

**[Total: 5]**

- 4 A scientist prepares material to be viewed using an electron microscope.  
He uses a standard procedure.**

**The table shows the steps the scientist follows.  
They are in the correct order.**

<b>STEP</b>	<b>WHAT IS DONE TO THE MATERIAL</b>	<b>REASON (A TO F)</b>
<b>step 1</b>	<b>A very thin slice is cut from the material.</b>	
<b>step 2</b>	<b>The slice is dried and fixed.</b>	
<b>step 3</b>	<b>The slice is placed in the electron microscope.</b>	
<b>step 4</b>	<b>Air is sucked out of the electron microscope.</b>	
<b>step 5</b>	<b>The image of the slice is viewed on a screen.</b>	

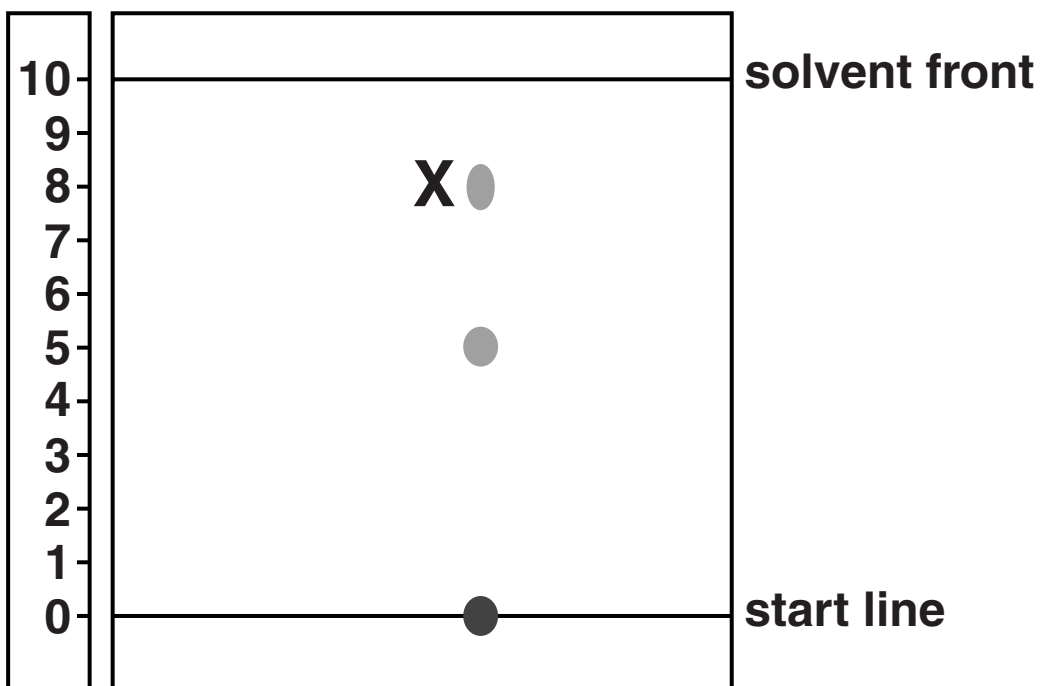
**The sentences A, B, C, D, E, and F give possible reasons for steps in the standard procedure.**

- A to prevent the material changing during the sample preparation**
- B the eye cannot see electrons**
- C to kill any living specimens**
- D air would stop electrons passing through**
- E to allow electrons to pass through the specimen**
- F air oxidises the inside of the microscope**

**Write a letter, A, B, C, D, E or F, inside each empty box to show the correct reason for the step. [4]**

**[Total: 4]**

**5 A forensic scientist makes a paper chromatogram of amino acids in a protein sample.**



**(a) The scientist has to develop the chromatogram before analysing the results. Explain why.**

---

---

---

**[1]**

(b) Use the following equation to calculate the  $R_f$  value of substance X.

$$R_f = \frac{\text{distance travelled by substance}}{\text{distance travelled by solvent}}$$

Show your working.

$R_f =$  \_\_\_\_\_ [3]

- (c) In paper chromatography, a moving solvent washes each sample across the medium (paper). How far a sample moves depends on the relative attractions between different types of molecules. Put ticks (✓) in the boxes next to the TWO statements about the forces that determine how far the sample moves.**

**The attraction between ...**

<b>... sample molecules and solvent molecules.</b>	
<b>... solvent molecules and other solvent molecules.</b>	
<b>... sample molecules and the molecules of the medium.</b>	
<b>... molecules of the medium and other molecules of the medium.</b>	
<b>... solute molecules and other solute molecules.</b>	

**[2]**



**(d) Scientists often need to separate mixtures. Here are some ways that mixtures can be separated.**

- A distillation**
- B gas chromatography**
- C paper chromatography**
- D electrophoresis**
- E filtration through a filter paper**

**For each of the following examples, choose from A, B, C, D or E to show the best method of separating the mixture.**

**(i) A cheap way of separating colours of felt tip pens in a school laboratory.**

\_\_\_\_\_ [1]

**(ii) Separating very small samples of gases or liquids.**

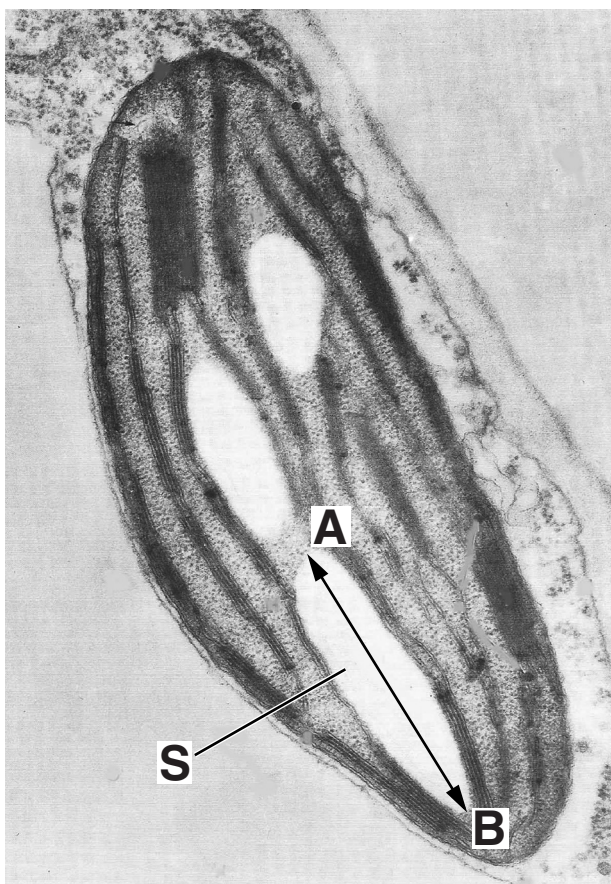
\_\_\_\_\_ [1]

**(iii) Separating biological molecules such as DNA fragments.**

\_\_\_\_\_ [1]

**[Total: 9]**

**6 A scientist made an electron micrograph of part of a plant cell.**



**(a) Structure S is a starch grain.**

**(i) Measure the length of the image of the starch grain between points A and B.**

**length = \_\_\_\_\_ mm [1]**

- (ii) The magnification of the image is  $\times 10\,000$ . Calculate the **ACTUAL** length of the starch grain.  
Show your working.

actual length  
of starch grain = \_\_\_\_\_ mm [2]

- (b) Scientists often use the term 'depth of field' when talking about images from a scanning electron microscope.  
Explain what is meant by 'depth of field'.

---

---

---

---

[2]

[Total: 5]

**END OF QUESTION PAPER**

## **Copyright Information**

**OCR is committed to seeking permission to reproduce all third-party content that it uses in its assessment materials. OCR has attempted to identify and contact all copyright holders whose work is used in this paper. To avoid the issue of disclosure of answer-related information to candidates, all copyright acknowledgements are reproduced in the OCR Copyright Acknowledgements Booklet. This is produced for each series of examinations and is freely available to download from our public website ([www.ocr.org.uk](http://www.ocr.org.uk)) after the live examination series.**

**If OCR has unwittingly failed to correctly acknowledge or clear any third-party content in this assessment material, OCR will be happy to correct its mistake at the earliest possible opportunity.**

**For queries or further information please contact the Copyright Team, First Floor, 9 Hills Road, Cambridge CB2 1GE.**

**OCR is part of the Cambridge Assessment Group; Cambridge Assessment is the brand name of University of Cambridge Local Examinations Syndicate (UCLES), which is itself a department of the University of Cambridge.**