

Candidate forename		Candidate surname	
-----------------------	--	----------------------	--

Centre number						Candidate number				
------------------	--	--	--	--	--	---------------------	--	--	--	--

**OXFORD CAMBRIDGE AND RSA EXAMINATIONS
GENERAL CERTIFICATE OF SECONDARY EDUCATION**

A324/01

**TWENTY FIRST CENTURY SCIENCE
ADDITIONAL APPLIED SCIENCE A**

Life Care (Foundation Tier)

WEDNESDAY 15 JUNE 2011: Morning

DURATION: 45 minutes

SUITABLE FOR VISUALLY IMPAIRED CANDIDATES

**Candidates answer on the question paper.
A calculator may be used for this paper.**

OCR SUPPLIED MATERIALS:

None

OTHER MATERIALS REQUIRED:

Pencil

Ruler (cm/mm)

READ INSTRUCTIONS OVERLEAF

INSTRUCTIONS TO CANDIDATES

- **Write your name, centre number and candidate number in the boxes on the first page. Please write clearly and in capital letters.**
- **Use black ink. Pencil may be used for graphs and diagrams only.**
- **Read each question carefully. Make sure you know what you have to do before starting your answer.**
- **Write your answer to each question in the space provided. Additional paper may be used if necessary but you must clearly show your candidate number, centre number and question number(s).**
- **Answer ALL the questions.**

INFORMATION FOR CANDIDATES

- **The number of marks is given in brackets [] at the end of each question or part question.**
- **The total number of marks for this paper is 36.**

BLANK PAGE

Answer ALL the questions.

- 1 Nurses use a variety of equipment to assess the condition of their patients.**

Draw a straight line from the PICTURE of each piece of EQUIPMENT to its correct NAME.

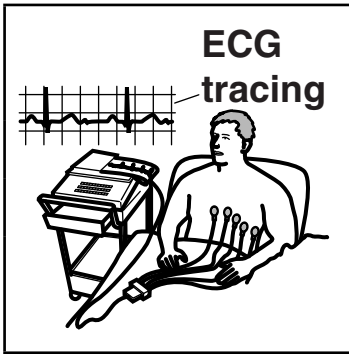
Then draw another straight line from the NAME to its correct USE.

One has been done for you.

EQUIPMENT


NAME

USE




clinical thermometer

to measure blood pressure



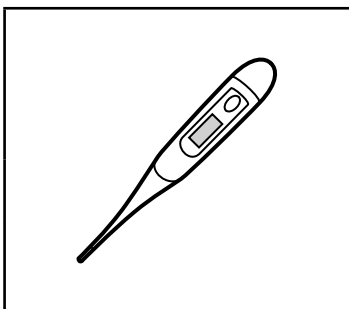
stopwatch

to measure pulse rate



sphygmomanometer

to study the functioning of the heart



electrocardiogram

to measure body temperature

[4]

[Total: 4]

**2 Regular contact between fitness coaches and their clients is very important.
Which of the following reasons support this statement?**

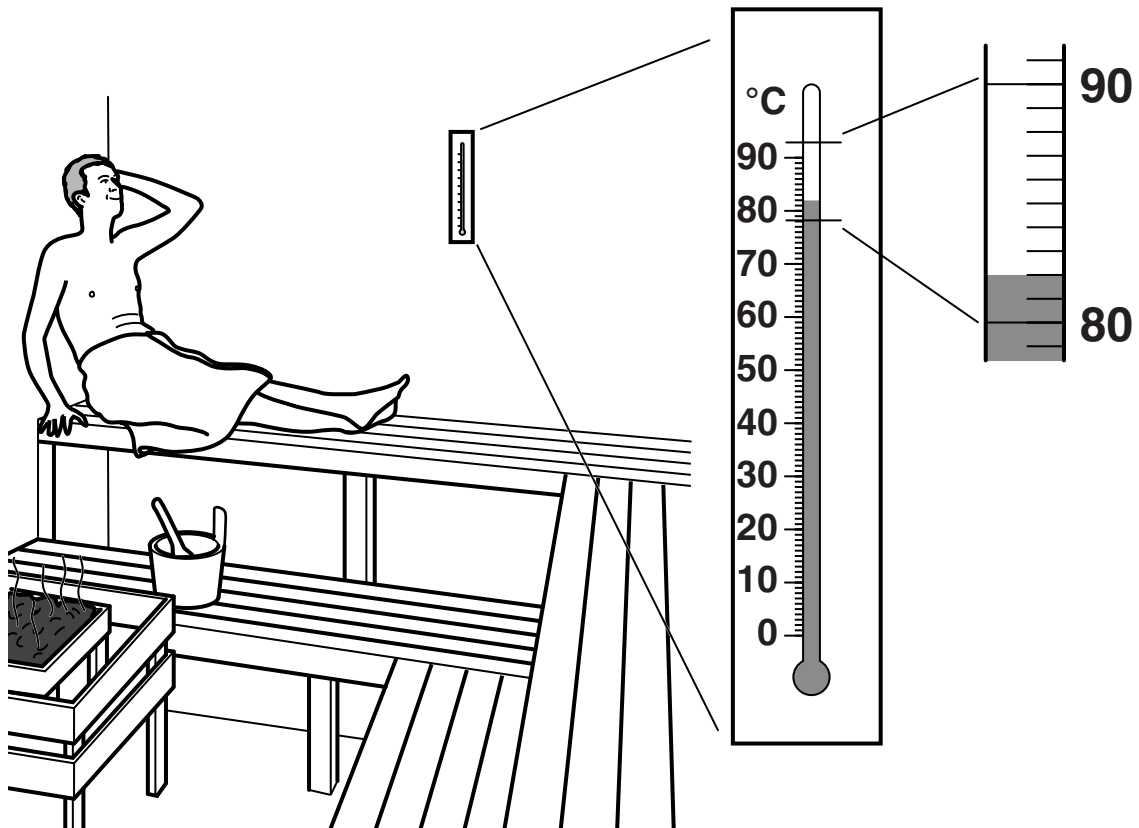
Put ticks (✓) in the boxes next to the THREE best reasons.

to discuss recent football results	
to discuss any injury concerns	
to find out about the coach's holiday plans	
to build up a trusting relationship	
to discuss progress and possible changes to a fitness programme	
to decide who is the team captain	

[2]

[Total: 2]

**3 A sauna has been built at Mike's local fitness centre.
Mike tries out the sauna.**



The thermometer shows the temperature of the sauna.

(a) What is the temperature of the sauna?

_____ °C [1]

(b) Describe TWO ways Mike's body responds to this temperature.

1 _____

2 _____

_____ [3]

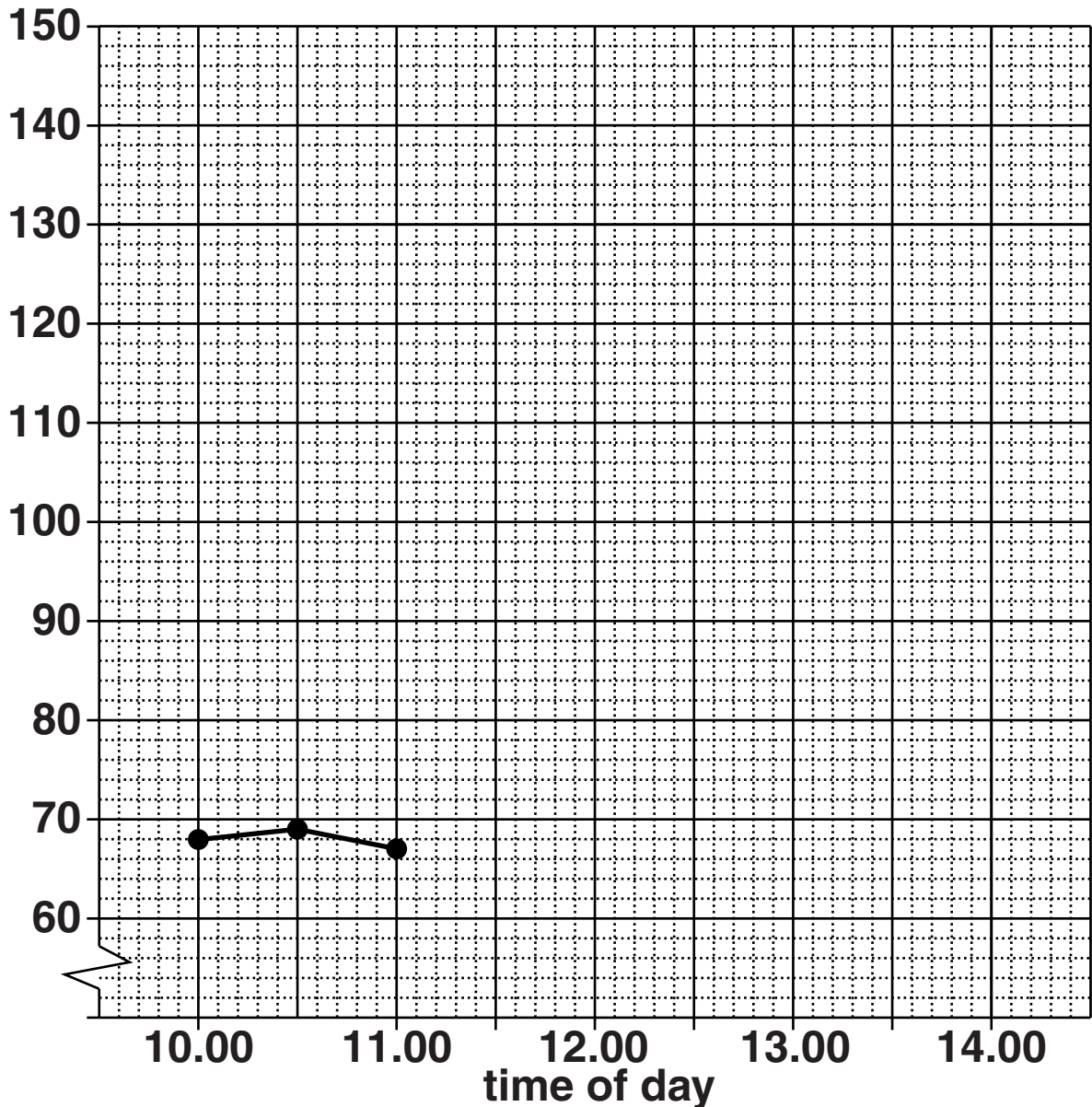
[Total: 4]

- 4 Joanna goes to an amusement park.
The table shows her pulse rate at different times during the day.**

TIME OF DAY	PULSE RATE BEATS PER MINUTE
10.00	68
10.30	69
11.00	67
11.30	84
12.00	142
12.30	67
13.00	69
13.30	73
14.00	68

- (a) Plot a graph of Joanna's pulse rate.
Some points have been done for you.
Finish the graph by drawing the best line through
the points.**

pulse rate in beats per minute



[3]

(b) (i) What is Joanna's resting pulse rate?

_____ beats per minute [1]

(ii) Suggest a reason why Joanna's pulse rate increased suddenly.

_____ [1]

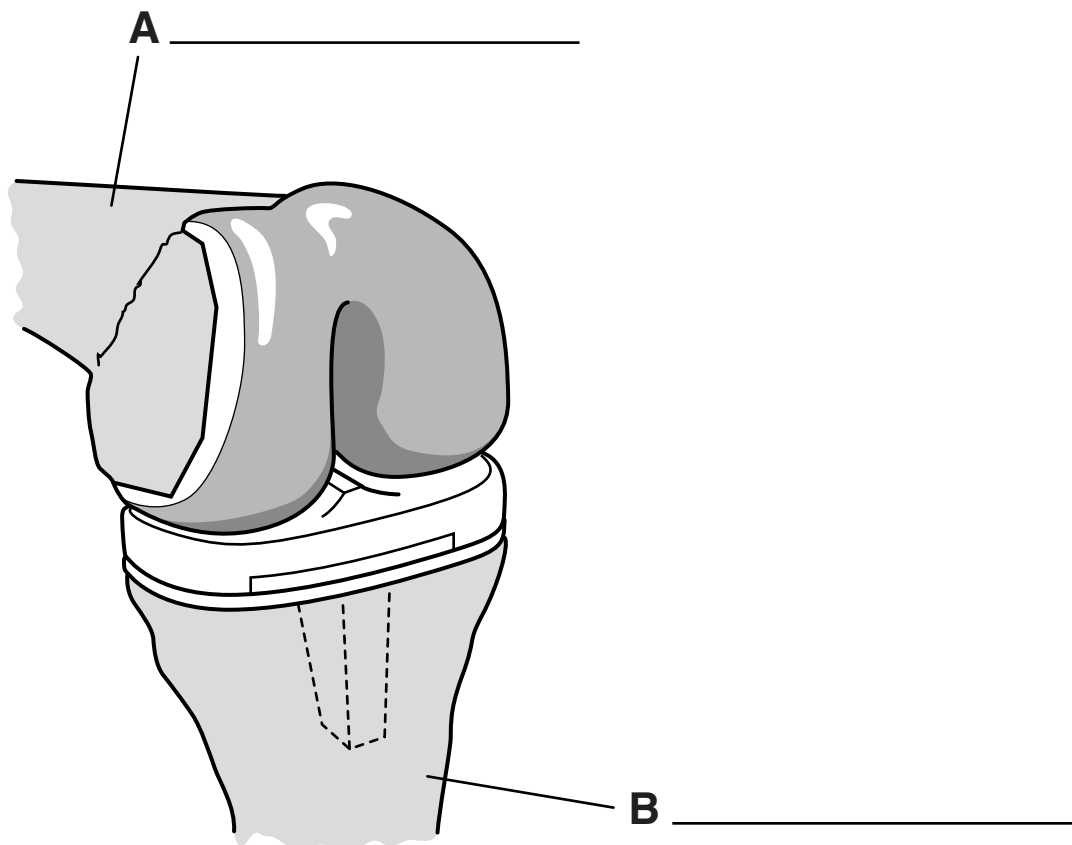
**(c) Sometimes a person's pulse can be weak.
Suggest one possible cause for a weak pulse.**

_____ [1]

[Total: 6]

**5 Mark had an operation on his knee.
An artificial knee joint was fitted.
The diagram shows Mark's new knee joint.**

(a) (i) Complete the diagram by naming the two bones labelled A and B.



[2]

(ii) Write down the names of THREE structures that are NOT shown in the diagram, but are necessary for a joint to work.

1 _____

2 _____

3 _____ **[3]**

(b) Before Mark can leave the hospital he will have to see several health practitioners. One of these is a physiotherapist.

(i) Describe the role of a physiotherapist.

[2]

(ii) Give the title and role of TWO OTHER health practitioners who deliver direct health care.

TITLE	ROLE
1	
2	

[4]

(c) During Mark’s time in hospital, health practitioners have kept accurate records about him.

Which of the following statements explain the need for accurate record keeping?

Put ticks (✓) in the boxes next to the THREE best statements.

to alert staff to any allergies Mark has	
to inform staff of the medication Mark has received	
to make sure Mark is fed on time	
to warn staff that Mark does not like to be woken too early	
to help staff monitor Mark’s progress	
to find out which TV channels Mark likes to watch	
to ensure Mark gets regular visitors	

[3]

[Total: 14]

- 6 (a) Ahmed works in the hospital accident and emergency unit.**

The list describes his patients.

- A a man with a suspected broken arm**
- B an unconscious person who is not breathing**
- C a teenager with a small cut on the finger**
- D a woman complaining of chest pains**
- E a man wanting batteries for his hearing aid**

He has to prioritise patients for emergency treatment.

Write the letters A, B, C, D and E in the boxes to show the order in which Ahmed should prioritise the patients.

--	--	--	--	--

[3]

- (b) Ahmed refers patients for further techniques and treatment.
Some of these techniques are non-invasive.**

- (i) Which non-invasive technique would show that an arm is broken?**

_____ **[1]**

(ii) Suggest TWO advantages of using a non-invasive technique.

1 _____

2 _____ **[2]**

[Total: 6]

END OF QUESTION PAPER

Copyright Information

OCR is committed to seeking permission to reproduce all third-party content that it uses in its assessment materials. OCR has attempted to identify and contact all copyright holders whose work is used in this paper. To avoid the issue of disclosure of answer-related information to candidates, all copyright acknowledgements are reproduced in the OCR Copyright Acknowledgements Booklet. This is produced for each series of examinations and is freely available to download from our public website (www.ocr.org.uk) after the live examination series.

If OCR has unwittingly failed to correctly acknowledge or clear any third-party content in this assessment material, OCR will be happy to correct its mistake at the earliest possible opportunity.

For queries or further information please contact the Copyright Team, First Floor, 9 Hills Road, Cambridge CB2 1GE.

OCR is part of the Cambridge Assessment Group; Cambridge Assessment is the brand name of University of Cambridge Local Examinations Syndicate (UCLES), which is itself a department of the University of Cambridge.