

Write your name here

Surname					Other names				
<b>Pearson</b>		Centre Number			Candidate Number				
<b>Edexcel GCSE</b>		<input type="text"/> <input type="text"/> <input type="text"/> <input type="text"/>			<input type="text"/> <input type="text"/> <input type="text"/>				
<b>Chemistry/Additional Science</b>									
<b>Unit C2: Discovering Chemistry</b>									
								<b>Higher Tier</b>	
Monday 22 January 2018 – Morning					Paper Reference				
<b>Time: 1 hour</b>					<b>5CH2H/01</b>				
<b>You must have:</b> Calculator, ruler								Total Marks	

### Instructions

- Use **black** ink or ball-point pen.
- **Fill in the boxes** at the top of this page with your name, centre number and candidate number.
- Answer **all** questions.
- Answer the questions in the spaces provided  
– *there may be more space than you need.*

### Information

- The total mark for this paper is 60.
- The marks for **each** question are shown in brackets  
– *use this as a guide as to how much time to spend on each question.*
- Questions labelled with an **asterisk** (\*) are ones where the quality of your written communication will be assessed  
– *you should take particular care with your spelling, punctuation and grammar, as well as the clarity of expression, on these questions.*

### Advice

- Read each question carefully before you start to answer it.
- Keep an eye on the time.
- Try to answer every question.
- Check your answers if you have time at the end.

Turn over ►

P57582A

©2018 Pearson Education Ltd.

1/1/1/



  
Pearson

# The Periodic Table of the Elements

	1	2	3	4	5	6	7	0										
	7 <b>Li</b> lithium 3	9 <b>Be</b> beryllium 4	<div style="border: 1px solid black; padding: 5px; width: fit-content; margin: 0 auto;">                     1 <b>H</b> hydrogen 1                 </div>					19 <b>F</b> fluorine 9	4 <b>He</b> helium 2									
	23 <b>Na</b> sodium 11	24 <b>Mg</b> magnesium 12	<div style="border: 1px solid black; padding: 5px; width: fit-content; margin: 0 auto;">                     relative atomic mass atomic symbol name atomic (proton) number                 </div>					16 <b>O</b> oxygen 8	20 <b>Ne</b> neon 10									
	39 <b>K</b> potassium 19	40 <b>Ca</b> calcium 20	45 <b>Sc</b> scandium 21	48 <b>Ti</b> titanium 22	51 <b>V</b> vanadium 23	52 <b>Cr</b> chromium 24	55 <b>Mn</b> manganese 25	56 <b>Fe</b> iron 26	59 <b>Co</b> cobalt 27	59 <b>Ni</b> nickel 28	63.5 <b>Cu</b> copper 29	65 <b>Zn</b> zinc 30	70 <b>Ga</b> gallium 31	73 <b>Ge</b> germanium 32	75 <b>As</b> arsenic 33	79 <b>Se</b> selenium 34	80 <b>Br</b> bromine 35	84 <b>Kr</b> krypton 36
	85 <b>Rb</b> rubidium 37	88 <b>Sr</b> strontium 38	89 <b>Y</b> yttrium 39	91 <b>Zr</b> zirconium 40	93 <b>Nb</b> niobium 41	96 <b>Mo</b> molybdenum 42	[98] <b>Tc</b> technetium 43	101 <b>Ru</b> ruthenium 44	103 <b>Rh</b> rhodium 45	106 <b>Pd</b> palladium 46	112 <b>Cd</b> cadmium 48	115 <b>In</b> indium 49	119 <b>Sn</b> tin 50	122 <b>Sb</b> antimony 51	127 <b>I</b> iodine 53	128 <b>Te</b> tellurium 52	131 <b>Xe</b> xenon 54	
	133 <b>Cs</b> caesium 55	137 <b>Ba</b> barium 56	139 <b>La*</b> lanthanum 57	178 <b>Hf</b> hafnium 72	181 <b>Ta</b> tantalum 73	184 <b>W</b> tungsten 74	186 <b>Re</b> rhenium 75	190 <b>Os</b> osmium 76	192 <b>Ir</b> iridium 77	195 <b>Pt</b> platinum 78	201 <b>Hg</b> mercury 80	204 <b>Tl</b> thallium 81	207 <b>Pb</b> lead 82	209 <b>Bi</b> bismuth 83	[209] <b>Po</b> polonium 84	[210] <b>At</b> astatine 85	[222] <b>Rn</b> radon 86	
	[223] <b>Fr</b> francium 87	[226] <b>Ra</b> radium 88	[227] <b>Ac*</b> actinium 89	[261] <b>Rf</b> rutherfordium 104	[262] <b>Db</b> dubnium 105	[266] <b>Sg</b> seaborgium 106	[264] <b>Bh</b> bohrium 107	[277] <b>Hs</b> hassium 108	[268] <b>Mt</b> meitnerium 109	[271] <b>Ds</b> darmstadtium 110	[272] <b>Rg</b> roentgenium 111	Elements with atomic numbers 112-116 have been reported but not fully authenticated						

\* The lanthanoids (atomic numbers 58-71) and the actinoids (atomic numbers 90-103) have been omitted.

The relative atomic masses of copper and chlorine have not been rounded to the nearest whole number.

DO NOT WRITE IN THIS AREA

DO NOT WRITE IN THIS AREA

DO NOT WRITE IN THIS AREA

DO NOT WRITE IN THIS AREA

DO NOT WRITE IN THIS AREA

DO NOT WRITE IN THIS AREA



DO NOT WRITE IN THIS AREA

DO NOT WRITE IN THIS AREA

DO NOT WRITE IN THIS AREA

DO NOT WRITE IN THIS AREA

DO NOT WRITE IN THIS AREA

DO NOT WRITE IN THIS AREA

**BLANK PAGE**

**Questions begin on next page.**



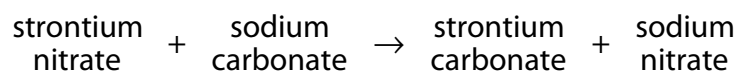
**Answer ALL questions**

Some questions must be answered with a cross in a box ☒. If you change your mind about an answer, put a line through the box ~~☒~~ and then mark your new answer with a cross ☒.

**Salts**

- 1 (a) A student was asked to prepare a pure, dry sample of strontium carbonate.

To make the strontium carbonate, the student mixed strontium nitrate solution with sodium carbonate solution.



A precipitate of solid strontium carbonate formed in the mixture.

The student then  
filtered the mixture  
washed the solid strontium carbonate with deionised water  
put the solid in a warm place.

- (i) Suggest why the student filtered the mixture. (1)

.....

.....

- (ii) Explain why the student washed the solid with deionised water rather than tap water. (2)

.....

.....

.....

- (iii) Suggest why the student put the strontium carbonate in a warm place. (1)

.....

.....

DO NOT WRITE IN THIS AREA

DO NOT WRITE IN THIS AREA

DO NOT WRITE IN THIS AREA

DO NOT WRITE IN THIS AREA

DO NOT WRITE IN THIS AREA

DO NOT WRITE IN THIS AREA



(b) Sodium chloride is an ionic compound.

Which row of the table correctly shows the ability of sodium chloride to conduct electricity when solid, molten and in solution?

Put a cross in the box (☒) next to your answer.

(1)

ability of sodium chloride to conduct electricity when		
solid	molten	in solution
<input type="checkbox"/> A	conducts	does not conduct
<input type="checkbox"/> B	does not conduct	conducts
<input type="checkbox"/> C	conducts	does not conduct
<input type="checkbox"/> D	does not conduct	conducts

(c) Copper chloride, copper carbonate and copper nitrate are three salts of copper.

(i) Which row of the table correctly shows the solubility of these three salts?

Put a cross in the box (☒) next to your answer.

(1)

	copper chloride	copper carbonate	copper nitrate
<input type="checkbox"/> A	soluble	soluble	insoluble
<input type="checkbox"/> B	soluble	insoluble	soluble
<input type="checkbox"/> C	insoluble	insoluble	soluble
<input type="checkbox"/> D	insoluble	soluble	insoluble

(ii) Copper nitrate contains copper ions,  $\text{Cu}^{2+}$ , and nitrate ions,  $\text{NO}_3^-$ .

Give the formula of copper nitrate.

(1)

.....

(iii) Give the flame colour expected when a flame test is carried out on copper chloride.

(1)

.....

(Total for Question 1 = 8 marks)



## Metals

2 Transition metals and alkali metals are two types of metal.

(a) Which of the following is a property of transition metals but not of alkali metals?

Put a cross in the box (☒) next to your answer.

(1)

- A form coloured compounds
- B good conductors of electricity
- C soft
- D low boiling points

(b) Describe, in terms of the particles present, the structure of metals.

(3)

.....

.....

.....

.....

.....

.....

(c) Explain how metals conduct electricity.

(2)

.....

.....

.....

.....

DO NOT WRITE IN THIS AREA

DO NOT WRITE IN THIS AREA

DO NOT WRITE IN THIS AREA

DO NOT WRITE IN THIS AREA

DO NOT WRITE IN THIS AREA

DO NOT WRITE IN THIS AREA



- (d) The alkali metals are in group 1 of the periodic table.  
There is an increase in reactivity of the alkali metals from lithium to potassium.

Explain this increase in reactivity in terms of the structures of the atoms of these elements.

(3)

.....

.....

.....

.....

.....

.....

.....

**(Total for Question 2 = 9 marks)**

DO NOT WRITE IN THIS AREA

DO NOT WRITE IN THIS AREA

DO NOT WRITE IN THIS AREA

DO NOT WRITE IN THIS AREA

DO NOT WRITE IN THIS AREA

DO NOT WRITE IN THIS AREA





## Atoms

3 Boron is in group 3 of the periodic table.

(a) An atom of boron has an atomic number of 5 and a mass number of 11.

In each of the following complete the sentence by putting a cross (☒) in the box next to your answer.

(i) The number of protons in this boron atom is

(1)

A 3

B 5

C 6

D 11

(ii) The number of neutrons in this boron atom is

(1)

A 3

B 5

C 6

D 11

(iii) The number of electrons in the outer shell of a boron atom is

(1)

A 3

B 5

C 6

D 11

DO NOT WRITE IN THIS AREA

DO NOT WRITE IN THIS AREA

DO NOT WRITE IN THIS AREA

DO NOT WRITE IN THIS AREA

DO NOT WRITE IN THIS AREA

DO NOT WRITE IN THIS AREA





(b) A sample of boron contains two isotopes.

(i) Explain the meaning of the term **isotopes**.

(2)

.....

.....

.....

(ii) The sample of boron contains

19.7% of boron-10

80.3% of boron-11

Use this information to show that the accurate relative atomic mass of boron in this sample is 10.8.

(3)

.....

.....

.....

.....

.....

(c) The formula of boron oxide is  $B_2O_3$ .

Calculate the percentage by mass of boron in boron oxide,  $B_2O_3$ .  
(relative atomic masses: B = 11, O = 16)

(3)

.....

.....

.....

.....

.....

.....

.....

.....

percentage of boron = .....

**(Total for Question 3 = 11 marks)**

DO NOT WRITE IN THIS AREA

DO NOT WRITE IN THIS AREA

DO NOT WRITE IN THIS AREA

DO NOT WRITE IN THIS AREA

DO NOT WRITE IN THIS AREA

DO NOT WRITE IN THIS AREA



### Quantitative chemistry

4 (a) In an experiment, iron was reacted with chlorine to produce iron(III) chloride,  $\text{FeCl}_3$ .

- (i) In this experiment, the theoretical yield of iron(III) chloride was 5.00 g.  
The actual yield of the experiment was 3.25 g.

Calculate the percentage yield of iron(III) chloride in this experiment.

(2)

.....  
.....  
.....  
.....

percentage yield = .....

- (ii) Give **two** reasons why the actual yield of an experiment is often less than the theoretical yield.

(2)

reason 1 .....

.....

reason 2 .....

.....

DO NOT WRITE IN THIS AREA

DO NOT WRITE IN THIS AREA

DO NOT WRITE IN THIS AREA

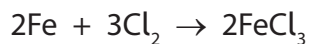
DO NOT WRITE IN THIS AREA

DO NOT WRITE IN THIS AREA

DO NOT WRITE IN THIS AREA



(iii) The equation for the reaction to produce iron(III) chloride is



Calculate the maximum mass of iron(III) chloride that can be produced by reacting 44.8 g of iron with excess chlorine.

(relative atomic masses: Cl = 35.5, Fe = 56)

relative formula mass:  $\text{FeCl}_3 = 162.5$

(2)

.....

.....

.....

.....

.....

.....

maximum mass of iron(III) chloride = ..... g

(b) A sample of an iron oxide was analysed.

The iron oxide contained 3.36 g of iron and 1.28 g of oxygen.

Calculate the empirical formula of this iron oxide.

(relative atomic masses: O = 16, Fe = 56)

You must show your working.

(3)

.....

.....

.....

.....

.....

.....

empirical formula = .....

**(Total for Question 4 = 9 marks)**



### Simple and giant molecular covalent structures

- 5 (a) Germanium chloride exists as simple molecules,  $\text{GeCl}_4$ .

In a molecule of germanium chloride the germanium atom is joined to a chlorine atom by a covalent bond.

- (i) Explain how an atom of germanium and an atom of chlorine form a covalent bond. (2)

.....

.....

.....

.....

- (ii) A germanium atom has 4 electrons in its outer shell.  
A chlorine atom has 7 electrons in its outer shell.

Draw a dot and cross diagram to show the bonding in a molecule of germanium chloride,  $\text{GeCl}_4$ .  
Show outer electrons only.

(2)

DO NOT WRITE IN THIS AREA

DO NOT WRITE IN THIS AREA

DO NOT WRITE IN THIS AREA

DO NOT WRITE IN THIS AREA

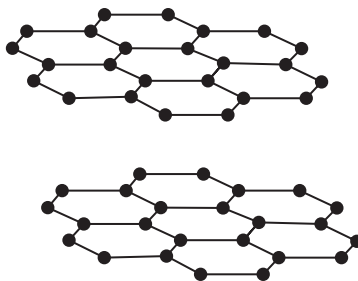
DO NOT WRITE IN THIS AREA

DO NOT WRITE IN THIS AREA



(b) Graphite can be used as a lubricant.

The diagram shows part of the structure of graphite.



Explain, in terms of its structure, why graphite is used as a lubricant.

(2)

.....

.....

.....

.....





DO NOT WRITE IN THIS AREA

DO NOT WRITE IN THIS AREA

DO NOT WRITE IN THIS AREA

DO NOT WRITE IN THIS AREA

DO NOT WRITE IN THIS AREA

DO NOT WRITE IN THIS AREA

Handwriting practice area with 20 horizontal dotted lines.

(Total for Question 5 = 12 marks)







DO NOT WRITE IN THIS AREA

DO NOT WRITE IN THIS AREA

DO NOT WRITE IN THIS AREA

DO NOT WRITE IN THIS AREA

DO NOT WRITE IN THIS AREA

DO NOT WRITE IN THIS AREA

**BLANK PAGE**



**The reaction of calcium carbonate with dilute hydrochloric acid**

- 6 (a) Calcium carbonate reacts with dilute hydrochloric acid to produce calcium chloride, carbon dioxide and water.

Write the balanced equation for this reaction.

(3)

- (b) Pieces of calcium carbonate were reacted with some dilute hydrochloric acid.

The table shows the initial and final temperatures of the reaction mixture.

initial temperature = 25 °C

final temperature = 27 °C

Explain what the results show about the type of reaction occurring.

(2)





DO NOT WRITE IN THIS AREA

DO NOT WRITE IN THIS AREA

DO NOT WRITE IN THIS AREA

DO NOT WRITE IN THIS AREA

DO NOT WRITE IN THIS AREA

DO NOT WRITE IN THIS AREA

Handwriting practice area with 20 horizontal dotted lines.

**(Total for Question 6 = 11 marks)**

**TOTAL FOR PAPER = 60 MARKS**





DO NOT WRITE IN THIS AREA

DO NOT WRITE IN THIS AREA

DO NOT WRITE IN THIS AREA

DO NOT WRITE IN THIS AREA

DO NOT WRITE IN THIS AREA

DO NOT WRITE IN THIS AREA

**BLANK PAGE**

