

Paper Reference(s) 5BI1F/01

Edexcel GCSE

Biology/Science

**Unit B1: Influences on Life
Foundation Tier**

Tuesday 15 May 2012 – Morning

Time: 1 hour plus your additional time allowance

INSTRUCTIONS TO CANDIDATES

Write your centre number, candidate number, surname, initials and your signature in the boxes below. Check that you have the correct question paper.

Centre No.							
Candidate No.							
Surname							
Initial(s)							
Signature							
Paper Reference	5	B	I	1	F	/	0 1

- Use **BLACK** ink or ball-point pen.
- Answer **ALL** questions.
- Answer the questions in the spaces provided – there may be more space than you need.

MATERIALS REQUIRED FOR EXAMINATION

Calculator, ruler

ITEMS INCLUDED WITH QUESTION PAPERS

Nil

INFORMATION FOR CANDIDATES

- The total mark for this paper is 60.
- The marks for **EACH** question are shown in brackets
– use this as a guide as to how much time to spend on each question.
- Questions labelled with an **ASTERISK (*)** are ones where the quality of your written communication will be assessed – you should take particular care with your spelling, punctuation and grammar, as well as the clarity of expression, on these questions.

ADVICE TO CANDIDATES

- Read each question carefully before you start to answer it.
- Keep an eye on the time.
- Try to answer every question.
- Check your answers if you have time at the end.

(Turn over)

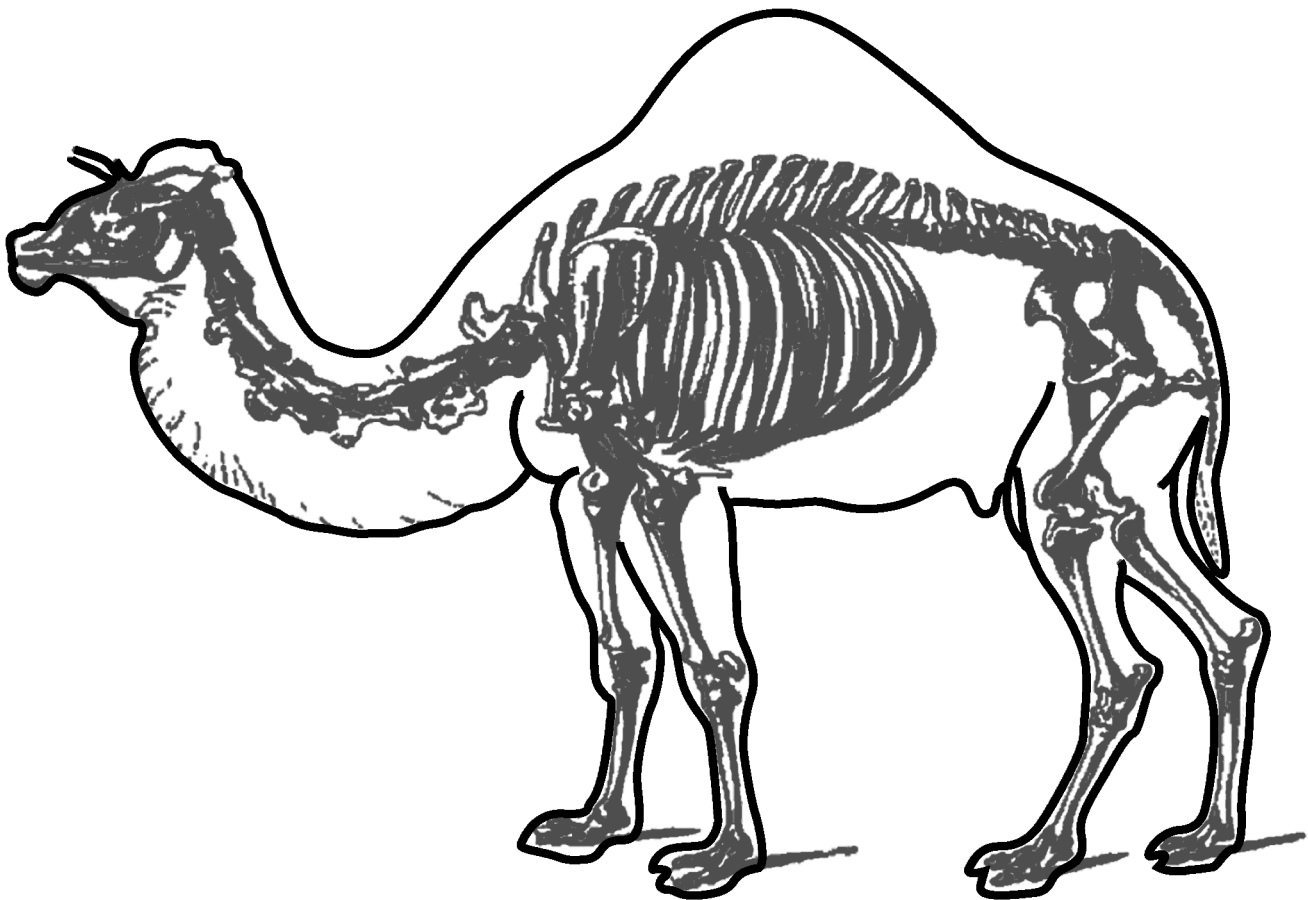
Answer ALL questions.

Some questions must be answered with a cross in a box ☒. If you change your mind about an answer, put a line through the box ~~☒~~ and then mark your new answer with a cross ☒.

CLASSIFICATION

1 (a) Camels belong to the phylum Chordata.

The drawing shows a dromedary camel that has the binomial name *Camelus dromedaries*.



(Question continues on next page)

(Turn over)

- (i) Complete the sentence by putting a cross (☒) in the box next to your answer.

The second part of the binomial name, dromedaries, refers to the

(1 mark)

- A class
- B genus
- C order
- D species

- (ii) State ONE feature that all members of the phylum Chordata have in common. (1 mark)

(Question continues on next page)

(iii) Members of the phylum Chordata can be further classified by how they regulate their body temperature.

Reptiles are poikilothermic and mammals are homeothermic.

Explain how reptiles and mammals regulate their body temperature. (2 marks)

(Question continues on next page)

(b) Scientists classify organisms into five different kingdoms.

Draw ONE straight line from each description to its correct kingdom. (2 marks)

DESCRIPTION

KINGDOM

unicellular with
nucleus present

Animalia

Plantae

Fungi

Protoctista

multicellular and
photosynthetic

Prokaryotes

(Question continues on next page)

(Turn over)

(c) Viruses are not classified into any of the five kingdoms.

Suggest reasons for this. (2 marks)

(Total 8 marks) Q1

(Questions continue on next page)

REACTION TIMES

- 2 (a) The reaction times of some athletes were measured at the Beijing Olympics in the final of the 100 metres sprint.

ATHLETE	REACTION TIME / s	OVERALL RACE TIME / s
Bolt: Usain	0.165	9.69
Burns: Marc	0.145	10.01
Dix: Walter	0.133	9.91
Frater: Michael	0.147	9.97
Martina: Churandy	0.169	9.93
Patton: Darvis	0.142	10.03
Powell: Asafa	0.134	9.95
Thompson: Richard	0.133	9.89

- (i) Complete the sentence by putting a cross (☒) in the box next to your answer.

The athlete with the slowest reaction time is

(1 mark)

- A Bolt: Usain
- B Martina: Churandy
- C Patton: Darvis
- D Thompson: Richard

(ii) Name the athlete who finished the 100 metres sprint in the fastest time. (1 mark)

(iii) Calculate the difference between the overall race time of the fastest athlete and slowest athlete. (2 marks)

answer = S

(b) The athlete starts to run when a gun is fired.

(i) State the athlete's sense organ that detects this stimulus. (1 mark)

MISTLETOE PLANTS

- 3** Mistletoe is a plant which grows on the branches of trees and uses nutrients from the tree. This can cause the tree to die.

- (a) (i) Complete the sentence by putting a cross (☒) in the box next to your answer.

The relationship between the mistletoe plant and the tree is an example of

(1 mark)

- A mutualism
- B parasitism
- C phototropism
- D symbiosis

- (ii) The mistletoe plant also gains energy from sunlight to produce glucose.

State the name of this process. (1 mark)

(Question continues on next page)

(Turn over)

(b) The mistletoe plant produces fruit that contains seeds.

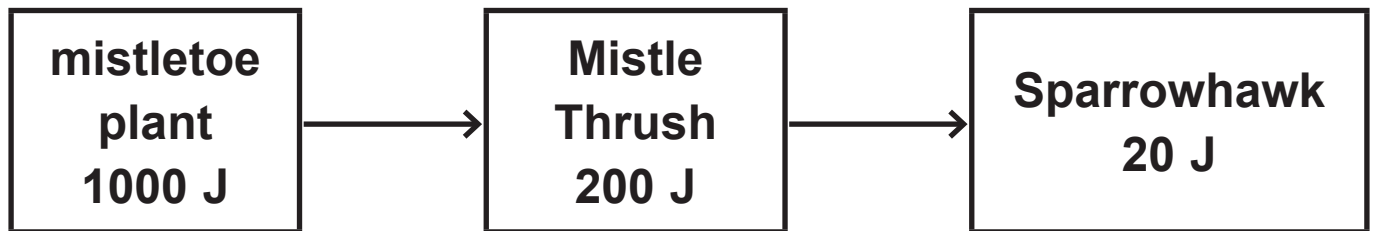
The Mistle Thrush is a bird that spreads these mistletoe seeds to other trees.

(i) Suggest how the Mistle Thrush spreads the mistletoe seeds to other trees. (2 marks)

(Question continues on next page)

- (ii) Sparrowhawks are birds that are predators of the Mistle Thrush.

The diagram shows the energy values in the food chain for these organisms.




Calculate the percentage of energy that was passed from the mistletoe plant to the Mistle Thrush. (2 marks)

answer = %

(Question continues on next page)

(Turn over)

(iii) Draw a pyramid of energy for this food chain. (2 marks)



(iv) Suggest TWO ways in that energy is lost from this food chain. (2 marks)

1 _____

2 _____

Q3

(Total 10 marks)

--	--

(Questions continue on next page)

(Turn over)

HOMEOSTASIS

4 If a person is to survive, the internal environment of their body must be controlled.

(a) The volume of water in the blood can be controlled.

This is called osmoregulation.

The table shows the volume of urine produced by six different people on a hot day and on a cold day.

PERSON	VOLUME OF URINE PRODUCED / cm ³	
	HOT DAY	COLD DAY
1	430	890
2	350	1060
3	270	930
4	560	1280
5	400	680
6	390	1160
mean		1000

(Question continues on next page)

(Turn over)

- (i) Calculate the mean volume of urine produced on the hot day. (1 mark)

answer = _____ cm³

- (ii) State the difference between the mean volume of urine produced on the hot day and the mean volume of urine produced on the cold day. (1 mark)

(Question continues on next page)

(iii) Explain why, on a hot day, less water is lost from the body as urine. (2 marks)

(Question continues on next page)

- (b) The glucose content of human blood also needs to be controlled.

After a meal, high in carbohydrates, the glucose content of the blood will rise.

- (i) Complete the sentence by putting a cross (☒) in the box next to your answer.

The hormone that lowers the glucose content of the blood is

(1 mark)

- A auxin
- B glycogen
- C insulin
- D pancreas

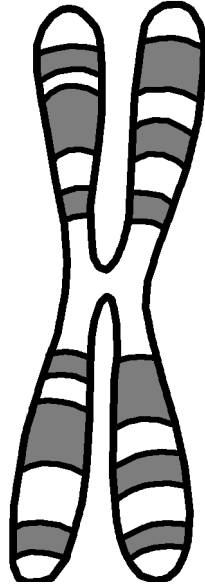
(Question continues on next page)

- (ii) Explain how the glucose content of the blood can be decreased by this hormone. (2 marks)

(Question continues on next page)

SICKLE CELL DISEASE

5 (a) The diagram shows a chromosome.



(i) Use words from the box to complete the sentences. (2 marks)

alleles		DNA
	gene	
phenotype		genotypes

Chromosomes have sections which code for specific characteristics. Each characteristic is coded for by

These exist in alternative forms called

- (ii) Complete the sentence by putting a cross (☒) in the box next to your answer.

In a human body cell, chromosomes are found in the

(1 mark)

- A cell membrane
- B cytoplasm
- C DNA
- D nucleus

(Question continues on next page)

- (b) Sickle cell disease is a genetic disorder that affects human red blood cells.

Individuals with sickle cell disease have the genotype dd.

- (i) Draw ONE straight line from the genotype to the correct description. (1 mark)

GENOTYPE

DESCRIPTION

dd

homozygous
recessive

homozygous
dominant

heterozygous

carrier

(Question continues on next page)

(Turn over)

- (ii) Describe the symptoms of sickle cell disease.
(2 marks)

(Question continues on next page)

***(iii) A father with the genotype DD and a mother with the genotype dd for sickle cell disease had a number of children.**

Explain why none of their children will have sickle cell disease.

Use a Punnett square or genetic diagram to help your explanation. (6 marks)

POLLUTION

6 (a) As the human population increases, more fossil fuels are burned.

The burning of coal is one of the main contributors to acid rain.

(i) Complete the sentence by putting a cross (☒) in the box next to your answer.

The gas produced when coal burns that can lead to acid rain formation is

(1 mark)

A carbon monoxide

B methane

C oxygen

D sulfur dioxide

(Question continues on next page)

(Turn over)

(ii) Describe how acid rain is formed. (2 marks)

(iii) Suggest ONE effect acid rain has on the environment. (1 mark)

(Question continues on next page)

(b) Explain how the quality of a river can be monitored by studying the organisms present in the water. (2 marks)

(Question continues on next page)

Q6

(Total 12 marks)

--	--

TOTAL FOR PAPER = 60 MARKS

END