



Centre Number

71	
----	--

Candidate Number

--

General Certificate of Secondary Education  
2014–2015

---

## Double Award Science: Physics

Unit P1

Higher Tier

[GSD32]

MV18

FRIDAY 14 NOVEMBER 2014, MORNING

---

### TIME

1 hour, plus your additional time allowance.

### INSTRUCTIONS TO CANDIDATES

Write your Centre Number and Candidate Number in the spaces provided at the top of this page.

Write your answers in the spaces provided in this question paper.  
Answer **all ten** questions.

### INFORMATION FOR CANDIDATES

The total mark for this paper is 70.

Figures in brackets printed at the end of each question indicate the marks awarded to each question or part question.

Quality of written communication will be assessed in Questions **2(a)** and **6**.

**1** When radiation travels through air it causes ionisation.

**(a)** What is ionisation? [1 mark]

---

---

**(b)** People who work with radioactive materials must take steps to protect themselves.

State two ways that workers can protect themselves.  
[2 marks]

1. \_\_\_\_\_
2. \_\_\_\_\_

Cobalt-60 is the name of a radioactive substance. The number 60 refers to the number of particles in the nucleus of the cobalt.

**(c) (i)** What do we call this number? [1 mark]

\_\_\_\_\_

**(ii)** Cobalt-60 has a half-life of 5 years. After how many years will its count-rate fall from 240 counts per minute to 30 counts per minute? [3 marks]

**You are advised to show your working out.**

Time = \_\_\_\_\_ years



An electric motor lifts a load of 400 N through a distance of 6.0 m in 3 seconds.

**(b) (i)** Calculate the power of the motor in watts. [3 marks]

**You are advised to show your working out.**

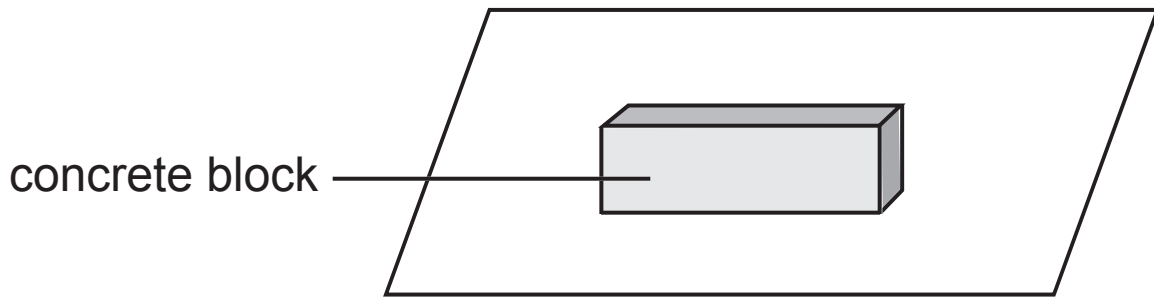
Power = \_\_\_\_\_ **W**

**(ii)** Give your answer to **(b)(i)** in kilowatts. [1 mark]

Power = \_\_\_\_\_ **kW**

**BLANK PAGE**

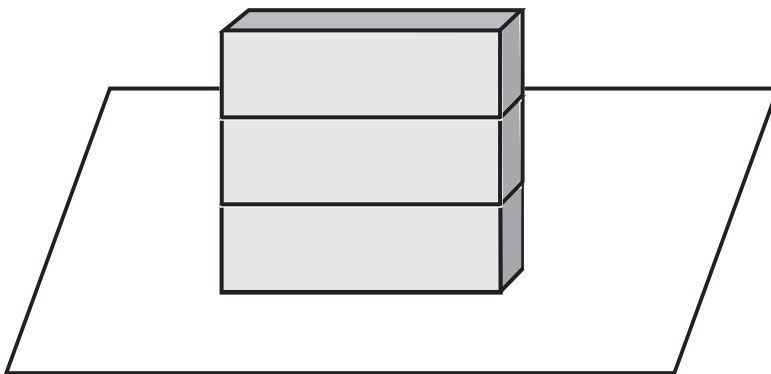
- 3 When a block of concrete sits on a surface it exerts a pressure.



The pressure exerted is given by the equation:

$$\text{pressure} = \frac{\text{weight}}{\text{area}}$$

The weight is changed by adding similar blocks on top as shown below.




The weight of each block is 20 N and the area in contact with the surface is 1.5 m<sup>2</sup>.

(i) Use the equation  $\text{pressure} = \frac{\text{weight}}{\text{area}}$

to complete the table below.

Your values of pressure should be correct to the nearest whole number. [2 marks]

No. of blocks	1	2	3	4	5
Weight/N	20	40	60	80	100
Area/m <sup>2</sup>	1.5	1.5	1.5	1.5	1.5
Pressure/N/m <sup>2</sup>	13				





(ii) Choose a suitable scale for the pressure on the vertical axis of the graph (page 8) and label it. [2 marks]

(iii) Plot a graph of pressure against weight. [2 marks]

(iv) Draw the best fit line. [1 mark]

The surface that the blocks are resting on will be damaged if the pressure is greater than  $45 \text{ N/m}^2$ .

(v) Use your graph to find the smallest number of blocks that will damage the surface. [2 marks]

Number of blocks = \_\_\_\_\_

(vi) Find the gradient of your graph. [2 marks]

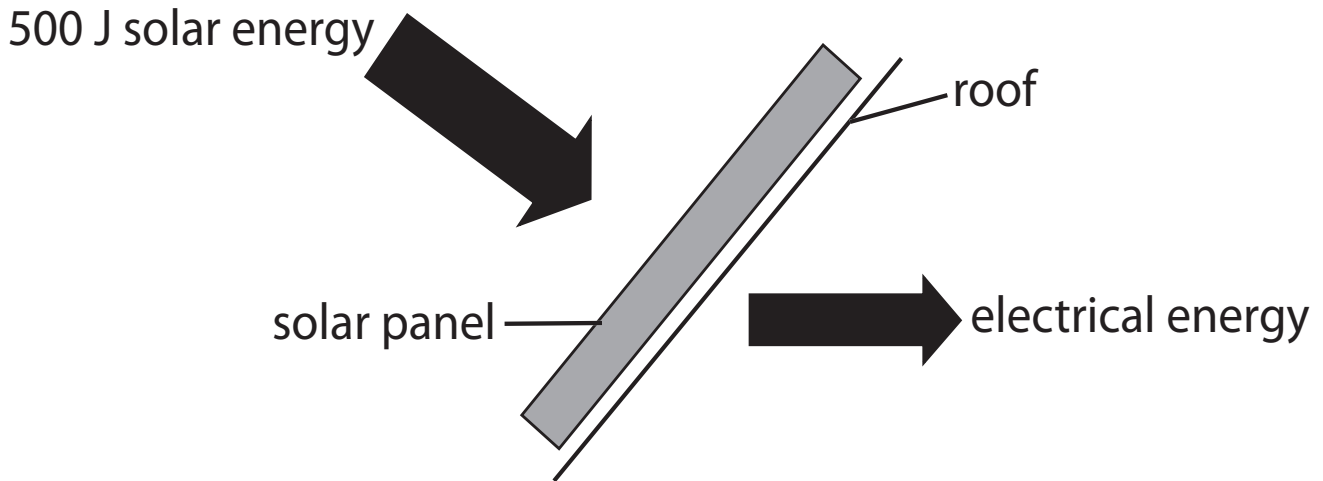
**You are advised to show your working out.**

Gradient = \_\_\_\_\_  $/\text{m}^2$

**BLANK PAGE**

4 A solar panel is designed to generate electricity directly from the Sun. Its efficiency is 0.8.

(i) This panel receives 500 J of solar energy. Calculate how much electrical energy it produces. [3 marks]



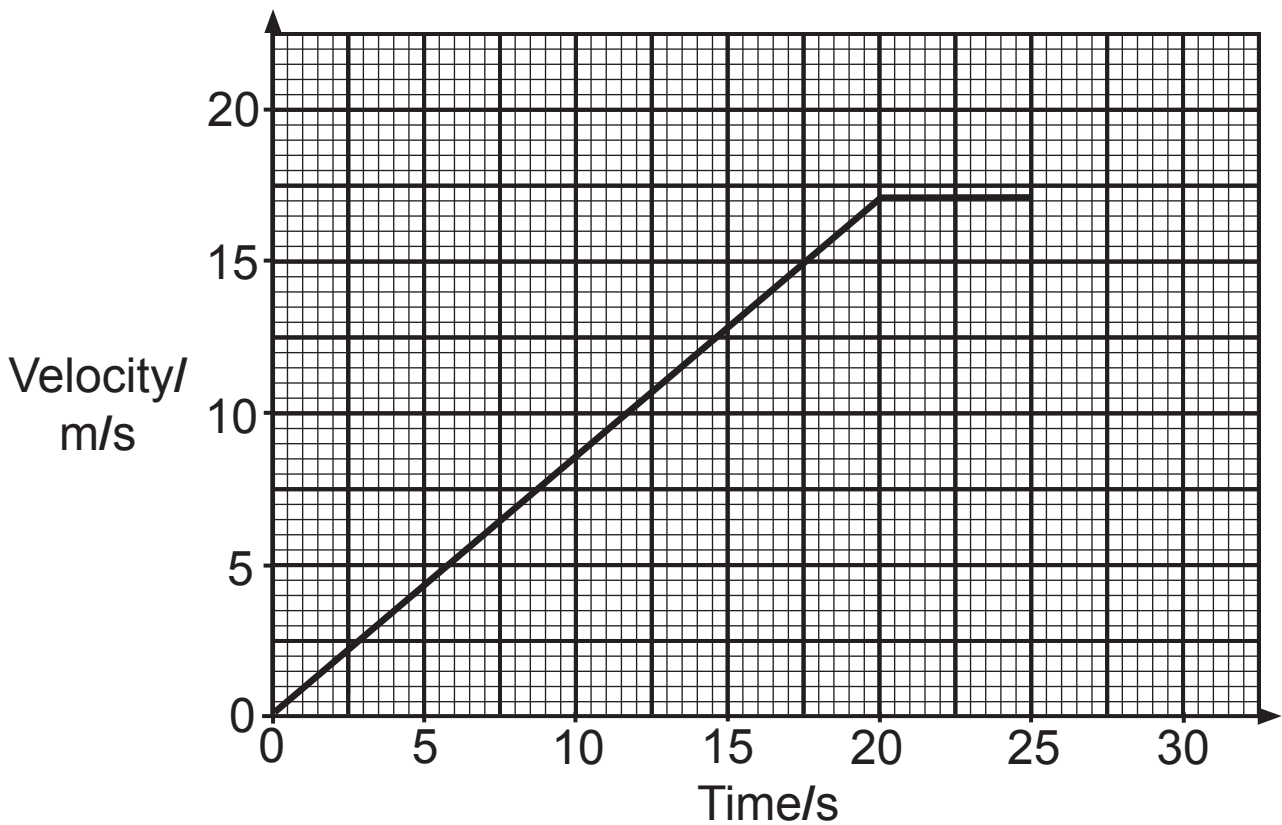
**You are advised to show your working out.**

Electrical energy produced = \_\_\_\_\_ J

(ii) State two advantages of the use of solar panels.  
[2 marks]

1. \_\_\_\_\_  
\_\_\_\_\_
2. \_\_\_\_\_  
\_\_\_\_\_

- 5 The graph below shows how the velocity of a car changes with time.



- (a) Describe the motion of the car during the following times. [2 marks]

0 to 20 s \_\_\_\_\_

20 s to 25 s \_\_\_\_\_

- (b) Calculate the total displacement of the car. [4 marks]

**You are advised to show your working out.**

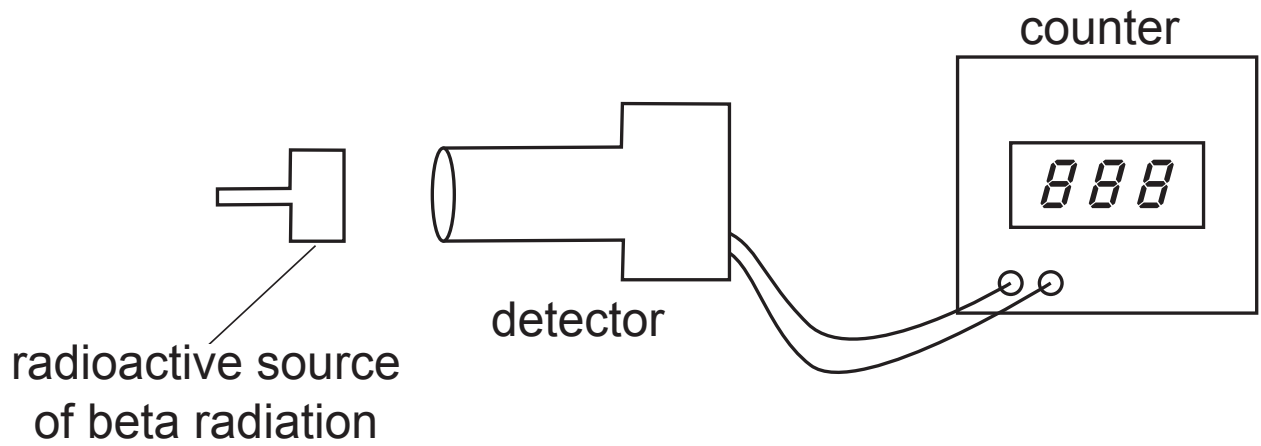
Total displacement = \_\_\_\_\_ m

(c) Use your answer to part (b) to find the average velocity of the car. [3 marks]

**You are advised to show your working out.**

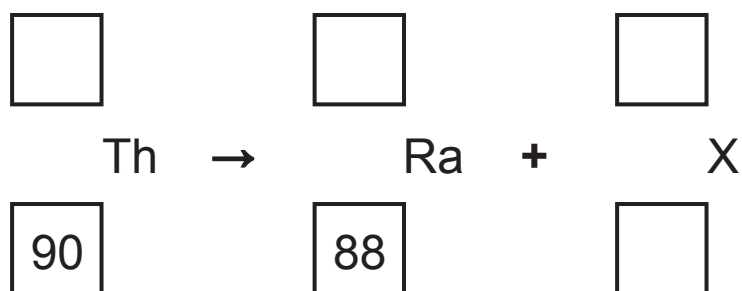
Average velocity = \_\_\_\_\_ m/s

- 6 Describe a demonstration or a computer simulation to find the range of beta radiation in aluminium.





- 7 Thorium (Th) has 140 neutrons in its nucleus. It decays to radium (Ra), as shown below.



- (i) Complete the equation by writing numbers in the boxes.  
[4 marks]

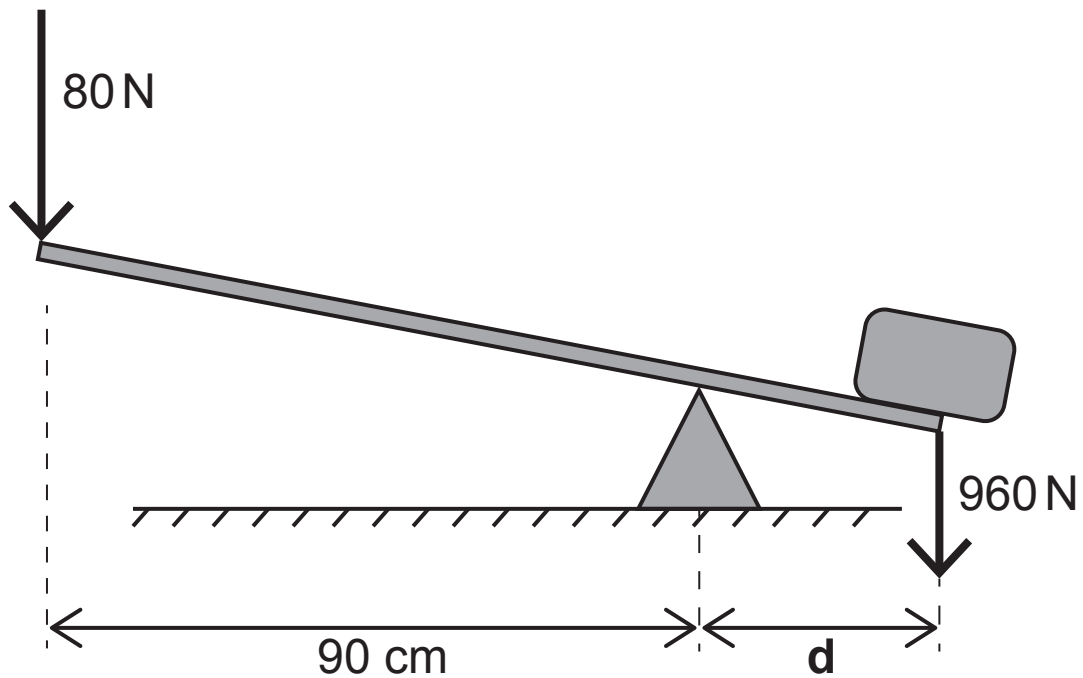
- (ii) X is one of the radiations emitted by radioactive substances.

Name this radiation. [1 mark]

X is \_\_\_\_\_



- 8 A workman exerts a force of 80 N and just manages to lift the concrete block of weight 960 N.



- (i) Calculate the distance  $d$ , in cm. [4 marks]

**You are advised to show your working out.**

$d =$  \_\_\_\_\_ cm

- (ii) Suggest how the workman could lift the concrete block with a smaller force. [1 mark]

---

---

- 9 When travelling at a **steady velocity**, the engine of a boat of mass 2500 kg exerts a force of 15 000 N.



- (a) What is the size of the frictional force on the boat?  
[1 mark]

Frictional force = \_\_\_\_\_ N

**(b)** The boat has a mass of 2500 kg. Calculate the total force exerted by the engine to give the boat an acceleration of  $3 \text{ m/s}^2$ , assuming the frictional force remains the same as that in part **(a)**. [4 marks]

**You are advised to show your working out.**

Total force = \_\_\_\_\_ N

**10** Rory hits a golf ball of mass 160 g.



**(a)** The golf ball has a kinetic energy of 72 J when it leaves the clubhead. Calculate the initial velocity of the golf ball. [4 marks]

**You are advised to show your working out.**

Initial velocity = \_\_\_\_\_ m/s

- (b) On another occasion, Rory hits a ball of mass 0.15 kg. He gives it a momentum of 3 kg m/s. Calculate the initial velocity of the golf ball. [3 marks]

**You are advised to show your working out.**

Initial velocity = \_\_\_\_\_ m/s

---

**THIS IS THE END OF THE QUESTION PAPER**

---





## SOURCES

Pg 18, Q9 - Image of a speedboat, © Creative\_Outlet/iStock/Thinkstock

Pg 20, Q10 - Image of a golf club and ball, © Catuncia/iStock/Thinkstock

For Examiner's use only	
Question Number	Marks
1	
2	
3	
4	
5	
6	
7	
8	
9	
10	
<b>Total Marks</b>	

Permission to reproduce all copyright material has been applied for. In some cases, efforts to contact copyright holders may have been unsuccessful and CCEA will be happy to rectify any omissions of acknowledgement in future if notified.

9629.02 **MV18**