

Candidate forename		Candidate surname	
-----------------------	--	----------------------	--

Centre number						Candidate number				
------------------	--	--	--	--	--	---------------------	--	--	--	--

**OXFORD CAMBRIDGE AND RSA EXAMINATIONS
GENERAL CERTIFICATE OF SECONDARY EDUCATION**

B651/02

GATEWAY SCIENCE

PHYSICS B

Unit 1 Modules P1 P2 P3 (Higher Tier)

FRIDAY 27 May 2011: Morning

DURATION: 1 hour

SUITABLE FOR VISUALLY IMPAIRED CANDIDATES

**Candidates answer on the question paper.
A calculator may be used for this paper.**

OCR SUPPLIED MATERIALS:

None

OTHER MATERIALS REQUIRED:

Pencil

Ruler (cm/mm)

READ INSTRUCTIONS OVERLEAF

INSTRUCTIONS TO CANDIDATES

- **Write your name, centre number and candidate number in the boxes on the first page. Please write clearly and in capital letters.**
- **Use black ink. Pencil may be used for graphs and diagrams only.**
- **Read each question carefully. Make sure you know what you have to do before starting your answer.**
- **Write your answer to each question in the space provided. Additional paper may be used if necessary but you must clearly show your candidate number, centre number and question number(s).**
- **Answer ALL the questions.**

INFORMATION FOR CANDIDATES

- **The number of marks is given in brackets [] at the end of each question or part question.**
- **A list of physics equations is printed on page three.**
- **The total number of marks for this paper is 60.**

EQUATIONS

$$\text{efficiency} = \frac{\text{useful energy output}}{\text{total energy input}}$$

$$\text{energy} = \text{mass} \times \text{specific heat capacity} \times \text{temperature change}$$

$$\text{energy} = \text{mass} \times \text{specific latent heat}$$

$$\text{fuel energy input} = \text{waste energy output} + \text{electrical energy output}$$

$$\text{power} = \text{voltage} \times \text{current}$$

$$\text{energy supplied} = \text{power} \times \text{time}$$

$$\text{energy (kilowatt hours)} = \text{power (kW)} \times \text{time (h)}$$

$$\text{wave speed} = \text{frequency} \times \text{wavelength}$$

$$\text{speed} = \frac{\text{distance}}{\text{time taken}}$$

$$\text{acceleration} = \frac{\text{change in speed}}{\text{time taken}}$$

$$\text{force} = \text{mass} \times \text{acceleration}$$

$$\text{work done} = \text{force} \times \text{distance}$$

$$\text{power} = \frac{\text{work done}}{\text{time}}$$

$$\text{kinetic energy} = \frac{1}{2} mv^2$$

$$\text{potential energy} = mgh$$

$$\text{weight} = \text{mass} \times \text{gravitational field strength}$$

Answer ALL the questions.

SECTION A – MODULE P1

1 This question is about the electromagnetic spectrum.

Look at the diagram opposite. It shows the seven types of electromagnetic radiation.

(a) Some ovens cook food using a grill.

The grill is in the top of the oven.

The walls of the oven are shiny.

Explain how the INFRARED waves cook the food.

In your answer write about

- why the walls of the oven are shiny**
- what part of the food is cooked by the infrared waves**
- the effect of the infrared waves on the food particles.**

[3]

THE ELECTROMAGNETIC SPECTRUM

radio waves	microwaves	infrared	visible light	ultraviolet	X-rays	gamma rays
-------------	------------	----------	---------------	-------------	--------	------------

long wavelength
low frequency

short wavelength
high frequency

- (b) Some infrared waves have a HIGHER frequency. They can be dangerous.

The food could burn and cause a fire.

Why would the higher frequency waves do this?

_____ [1]

- (c) Ultraviolet (UV) waves cause sunburn.

Putting sun cream onto your skin can allow you to safely stay in the sun for longer.

The sun protection factor (SPF) is used to calculate the safe time you can be in the sun.

- (i) Complete the table.

SAFE TIME IN THE SUN WITHOUT SUN CREAM	SAFE TIME IN THE SUN WITH SUN CREAM, SPF 20
6 minutes	_____ minutes

[1]

- (ii) A person with dark skin can safely stay in the sun for longer.

Complete the sentences to explain why.

Choose from

ABSORBS

BONE

ORGANS

REFLECTS

TAKES

TISSUE

Darker skin _____ more UV radiation.

This means that LESS UV radiation reaches

the _____ beneath the skin surface. [2]

(d) An electromagnetic wave has

- a frequency of 30 000 000 Hz
- a wavelength of 10 metres.

Calculate the speed of the electromagnetic wave.

The equations on page 3 may help you.

answer _____ m/s [2]

[Total: 9]

2 Sanjay wants to save money on his energy bills.

He finds some information about the costs of some energy saving methods.

Look at the table.

	ENERGY SAVING METHOD	COST TO FIT IN £	MONEY SAVED EACH YEAR ON ENERGY BILLS IN £	PAYBACK TIME IN YEARS
A	cavity wall insulation	300		3
B	double glazing	6000		20
C	loft insulation	240		6

(a) Complete the table.

Sanjay thinks that double glazing will save him the MOST money in a year.

Is Sanjay correct?

answer _____

Explain your answer by using the completed table.

_____ **[2]**

(b) Sanjay only has a small amount of money to spend.

He decides to have cavity wall insulation.

Explain why this is a GOOD decision.

[1]

[Total: 3]

3 Leanne is cooking some potatoes in a pan on a gas stove.

The water starts at room temperature (20 °C).

When the water is BOILING heat is still being added.

When it is boiling the temperature of the water does NOT go above 100 °C.

Complete these sentences.

The temperature of the water is a measure of

HOTNESS on a scale which is _____ .

Heat being added is a measure of ENERGY on a scale

which is _____ .

When the water is boiling the energy is used to break

the _____ bonds. [3]

[Total: 3]

4 Signals are used to transmit data. There are two types of signal.

One type is digital.

(a) Complete this sentence to describe a DIGITAL signal.

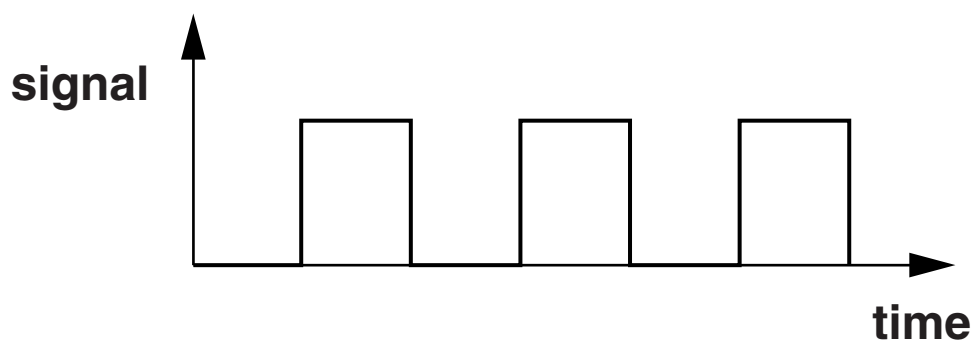
A digital signal is either _____

or _____ .

[1]

(b) Most radio stations broadcast using digital signals.

Look at the diagram of a digital signal.



Using digital signals has ADVANTAGES.

Describe two ADVANTAGES of using digital radio signals.

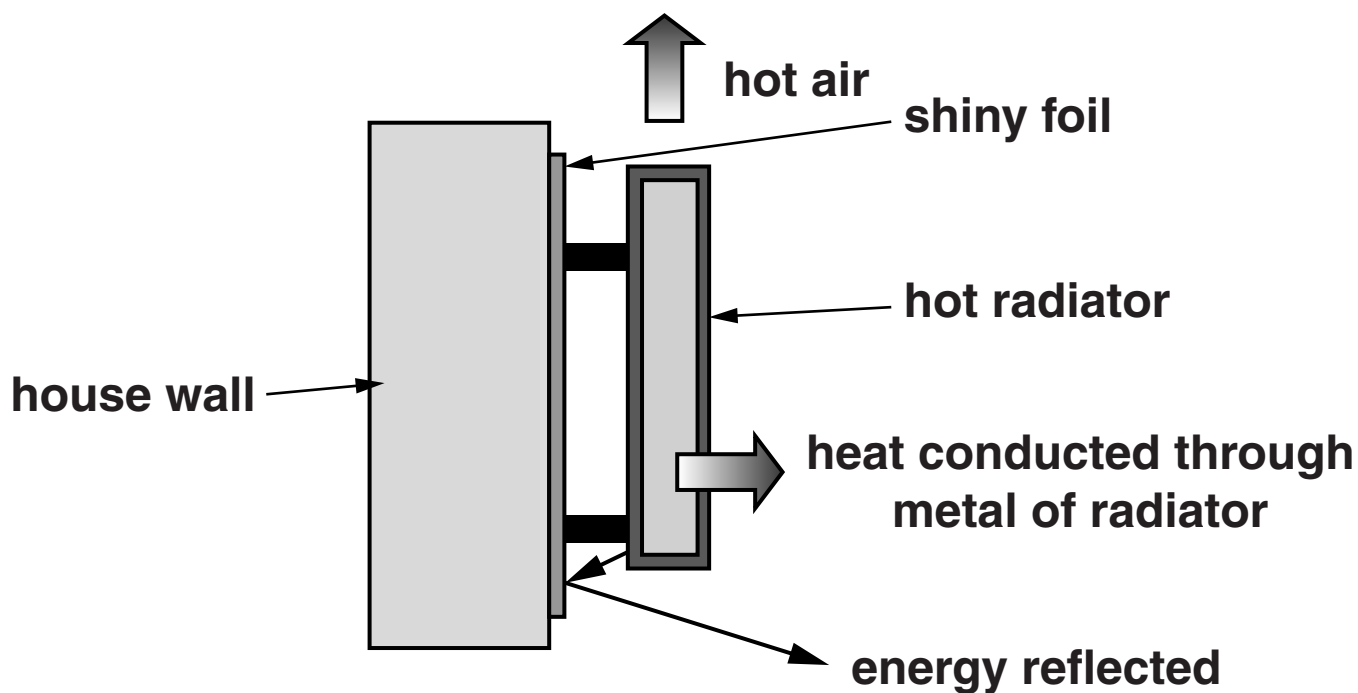
1 _____

2 _____

_____ [2]

[Total: 3]

5 Look at the diagram of a radiator in a room.



Energy is transferred by 3 methods

- conduction
- convection
- radiation.

Complete the boxes, on the next page, about how the hot radiator heats the room.

Choose the BEST words from the list.

AIR

CONTAINER

DENSITY

HEAT

KINETIC

MASS

MEDIUM

METAL

PARTICLES

TEMPERATURE

WATER

conduction	This is the transfer of _____ energy between _____ in the metal radiator.
-------------------	--

convection	This happens because of the fall in _____ of the _____ surrounding the radiator.
-------------------	---

radiation	Infrared radiation can travel through a vacuum; it does not need a _____ to travel in.
------------------	---

[2]

[Total: 2]

SECTION B – MODULE P2

6 The Sun's energy can be harnessed in a number of ways.

(a) Wind turbines use the Sun's energy.

Complete the sentence.

Wind turbines transfer the _____
energy of the air into _____
energy. [2]

(b) Photocells produce direct current (dc).

What is direct current (dc)?

_____ [1]

(c) Passive solar heating can be used to heat offices and homes.

Explain how passive solar heating works.

In your answer write about the properties of glass and the properties of radiation.

[3]

[Total: 6]

7 This question is about fuels used to generate electricity.

(a) Biomass can be fermented to produce a fuel.

What gas is made when biomass is fermented?

Choose from

CARBON MONOXIDE

HYDROGEN

METHANE

PROPANE

answer _____ [1]

(b) It costs money to use electrical appliances.

The cost depends on the power rating of the appliance in watts (W).

(i) An 'old type' light bulb uses a current of 0.26 A when connected to a 230V supply.

Calculate the power rating of this light bulb.

The equations on page 3 may help you.

answer _____ W [2]

(ii) An energy saving light bulb is just as bright as an 'old type' light bulb.

But the energy saving light bulb has a lower power rating.

This energy saving light bulb is rated at 230V, 9W.

The bulb is switched on. It uses one unit of electricity (1 kWh).


How long is it switched on for?

The equations on page 3 may help you.

answer _____ hours [2]

[Total: 5]

8 This question is about nuclear radiation.



(a) Some unstable atoms give out nuclear radiation.

Write down the name that we give to unstable atoms.

_____ [1]

(b) Nuclear radiation ionises particles.

When a particle is ionised it becomes an ion.

What happens to a particle when it is ionised?

_____ [1]

(c) Nuclear material must be disposed of carefully.

Write down one way this can be done.

_____ [1]

[Total: 3]

9 Complete the following sentences about cosmic rays.

Cosmic rays are fast moving particles which spiral around the

Earth's _____ and move

towards the _____ .

When cosmic rays hit the Earth's

_____ they create

_____ rays.

They are responsible for the brightly coloured lights in the northern sky called the Northern Lights or the

_____ .
[3]

[Total: 3]

10 This question is about comets.

Comets have very large orbits.

(a) What is the SHAPE of a comet's orbit?

_____ [1]

(b) Comets need a centripetal force to keep them moving in an orbit.

What provides this force?

_____ [1]

(c) The speed of a comet changes as it travels around the Solar System.

Where is the comet's speed highest?

_____ [1]

[Total: 3]

SECTION C – MODULE P3

11 The hull of a ship is being painted.

The paint reduces friction.

(a) When the ship is moving at a **CONSTANT SPEED**, one of the following statements is true.

Put a tick (✓) in the box next to the correct statement.

The thrust from the engines is equal to the drag.

The thrust from the engines is greater than the drag.

The thrust from the engines is less than the drag.

The thrust from the engines is increasing as the drag is decreasing.

The thrust from the engines is decreasing as the drag is increasing.

[1]

(b) When the ship is full of cargo, its maximum speed decreases.

Explain why.

[2]

(c) What effect does speed have on drag?

[1]

[Total: 4]

12 Many years ago, the speed of a car was measured by two policemen.

One policeman would drop his hand as the car passed.

This was a signal to the second policeman further along the road.

(a) The two policemen are 200 m apart.

The car they timed took 15 s to travel 200 m.

Calculate the SPEED of the car.

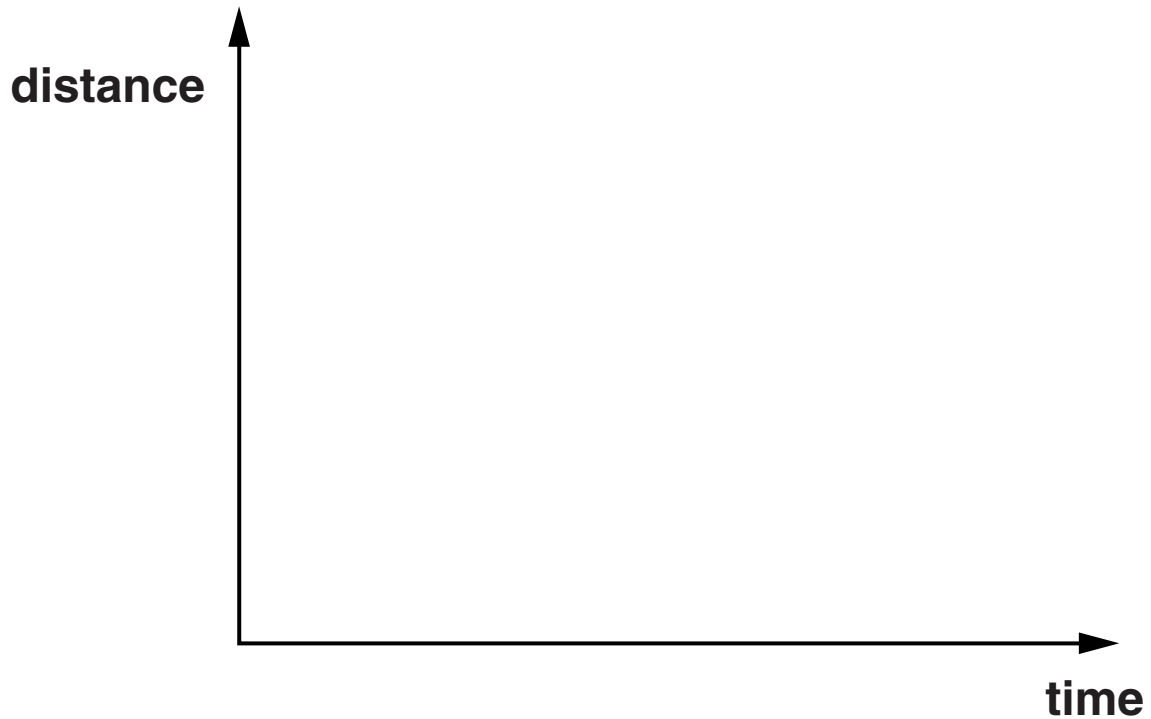
The equations on page 3 may help you.

answer _____ m/s

[2]

(b) The car was travelling at a CONSTANT SPEED.

(i) Use the axes to sketch a distance-time graph for the car.



[1]

(ii) How can you use a distance-time graph to find out the speed of a car?

[1]

(c) A car is travelling at a constant speed. It is also accelerating.

Explain how a car can accelerate but still travel at a constant speed.

[1]

[Total: 5]

13 Robert is doing chin-ups.

Every time he does a chin-up he is doing work.

(a) Robert does 540 J of work every time he does a chin-up.

He does 20 chin-ups in 60 seconds.

Calculate his power.

The equations on page 3 may help you.

answer _____ W [2]

(b) Robert lets go of the beam and falls.

Complete the sentence.

_____ energy is converted to
_____ energy. [1]

[Total: 3]

14 Car drivers must always be very careful when passing parked cars.

If a child runs out, the driver may need to brake suddenly.

(a) When a driver is tired his THINKING DISTANCE increases.

Suggest ONE other factor that will increase thinking distance.

_____ [1]

(b) When the brakes are worn BRAKING DISTANCE increases.

Explain why.

_____ [2]

(c) The braking distance for a car travelling at 20 mph is 6 m.

The braking distance for a car travelling at 40 mph is 24 m.

The braking distance at 40 mph is a lot further than the braking distance at 20 mph.

Explain why.

[2]

[Total: 5]

15 Most cars have airbags.

Airbags are an example of a safety feature.

(a) A car has crashed.

The airbag has inflated.

Describe what happens after the airbag has inflated.

[2]

(b) An airbag is one safety feature which is useful in a crash.

Write down the name of one OTHER safety feature which is useful when a car crashes.

[1]

[Total: 3]

END OF QUESTION PAPER

Copyright Information

OCR is committed to seeking permission to reproduce all third-party content that it uses in its assessment materials. OCR has attempted to identify and contact all copyright holders whose work is used in this paper. To avoid the issue of disclosure of answer-related information to candidates, all copyright acknowledgements are reproduced in the OCR Copyright Acknowledgements Booklet. This is produced for each series of examinations and is freely available to download from our public website (www.ocr.org.uk) after the live examination series.

If OCR has unwittingly failed to correctly acknowledge or clear any third-party content in this assessment material, OCR will be happy to correct its mistake at the earliest possible opportunity.

For queries or further information please contact the Copyright Team, First Floor, 9 Hills Road, Cambridge CB2 1GE.

OCR is part of the Cambridge Assessment Group; Cambridge Assessment is the brand name of University of Cambridge Local Examinations Syndicate (UCLES), which is itself a department of the University of Cambridge.