

Candidate Forename		Candidate Surname	
-------------------------------	--	------------------------------	--

Centre Number						Candidate Number				
--------------------------	--	--	--	--	--	-----------------------------	--	--	--	--

**OXFORD CAMBRIDGE AND RSA EXAMINATIONS
GENERAL CERTIFICATE OF SECONDARY EDUCATION**

B651/02

GATEWAY SCIENCE

PHYSICS B

**Unit 1 Modules P1 P2 P3
(Higher Tier)**

WEDNESDAY 10 JUNE 2009: Afternoon

DURATION: 1 hour

SUITABLE FOR VISUALLY IMPAIRED CANDIDATES

**Candidates answer on the question paper
A calculator may be used for this paper**

OCR SUPPLIED MATERIALS:

None

OTHER MATERIALS REQUIRED:

Pencil

Ruler (cm/mm)

READ INSTRUCTIONS OVERLEAF

INSTRUCTIONS TO CANDIDATES

- Write your name clearly in capital letters, your Centre Number and Candidate Number in the boxes on the first page.
- Use black ink. Pencil may be used for graphs and diagrams only.
- Read each question carefully and make sure that you know what you have to do before starting your answer.
- Answer ALL the questions.
- Write your answer to each question in the space provided, however additional paper may be used if necessary.

INFORMATION FOR CANDIDATES

- The number of marks is given in brackets [] at the end of each question or part question.
- A list of physics equations is printed on page three.
- The total number of marks for this paper is 60.

EQUATIONS

$$\text{efficiency} = \frac{\text{useful energy output}}{\text{total energy input}}$$

$$\text{energy} = \text{mass} \times \text{specific heat capacity} \times \text{temperature change}$$

$$\text{energy} = \text{mass} \times \text{specific latent heat}$$

$$\text{fuel energy input} = \text{waste energy output} + \text{electrical energy output}$$

$$\text{power} = \text{voltage} \times \text{current}$$

$$\text{energy supplied} = \text{power} \times \text{time}$$

$$\text{energy (kilowatt hours)} = \text{power (kW)} \times \text{time (h)}$$

$$\text{wave speed} = \text{frequency} \times \text{wavelength}$$

$$\text{speed} = \frac{\text{distance}}{\text{time taken}}$$

$$\text{acceleration} = \frac{\text{change in speed}}{\text{time taken}}$$

$$\text{force} = \text{mass} \times \text{acceleration}$$

$$\text{work done} = \text{force} \times \text{distance}$$

$$\text{power} = \frac{\text{work done}}{\text{time}}$$

$$\text{kinetic energy} = \frac{1}{2} mv^2$$

$$\text{potential energy} = mgh$$

$$\text{weight} = \text{mass} \times \text{gravitational field strength}$$

Answer ALL the questions.

SECTION A – MODULE P1

- 1 Earthquakes produce shock waves. These shock waves can cause damage.

There are two types of shock wave.

These are called P-WAVES and S-WAVES.

- (a) P-waves are LONGITUDINAL waves.

What TYPE of wave is an s-wave?

_____ [1]

- (b) P-waves travel through solids and liquids.

What will S-WAVES travel through?

- _____ [1]
(c) The s-wave from an earthquake travels at a speed of 4000 m/s.

Suggest the speed of a p-wave.

Put a ring around the correct answer.

10 m/s

300 m/s

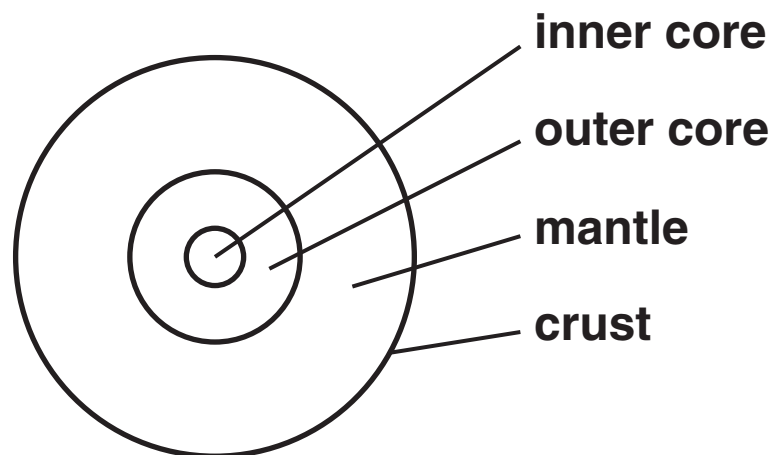
3000 m/s

4000 m/s

6000 m/s

[1]

(d) The diagram shows a simplified structure of the Earth.



Describe how s-waves provide evidence for the structure of the OUTER core.

[2]

[Total: 5]

2 Mel is on holiday.

She has taken her laptop computer and radio with her.

She uses her laptop to send emails.

(a) The laptop and radio both use WIRELESS technology.

Write down ONE other use of wireless technology.

_____ [1]

(b) Wireless signals can be transmitted over long distances.

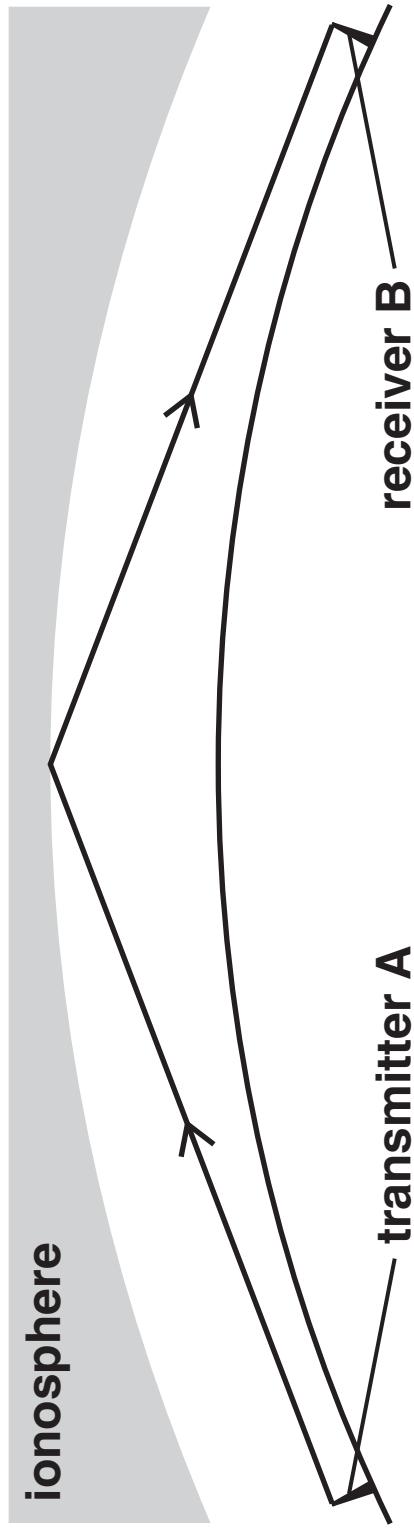
Sometimes a signal from the transmitter is reflected from the ionosphere.

The diagram on the next page shows that signals can also be transmitted from A to B with the aid of a satellite.

Describe how.

_____ [2]

[Total: 3]

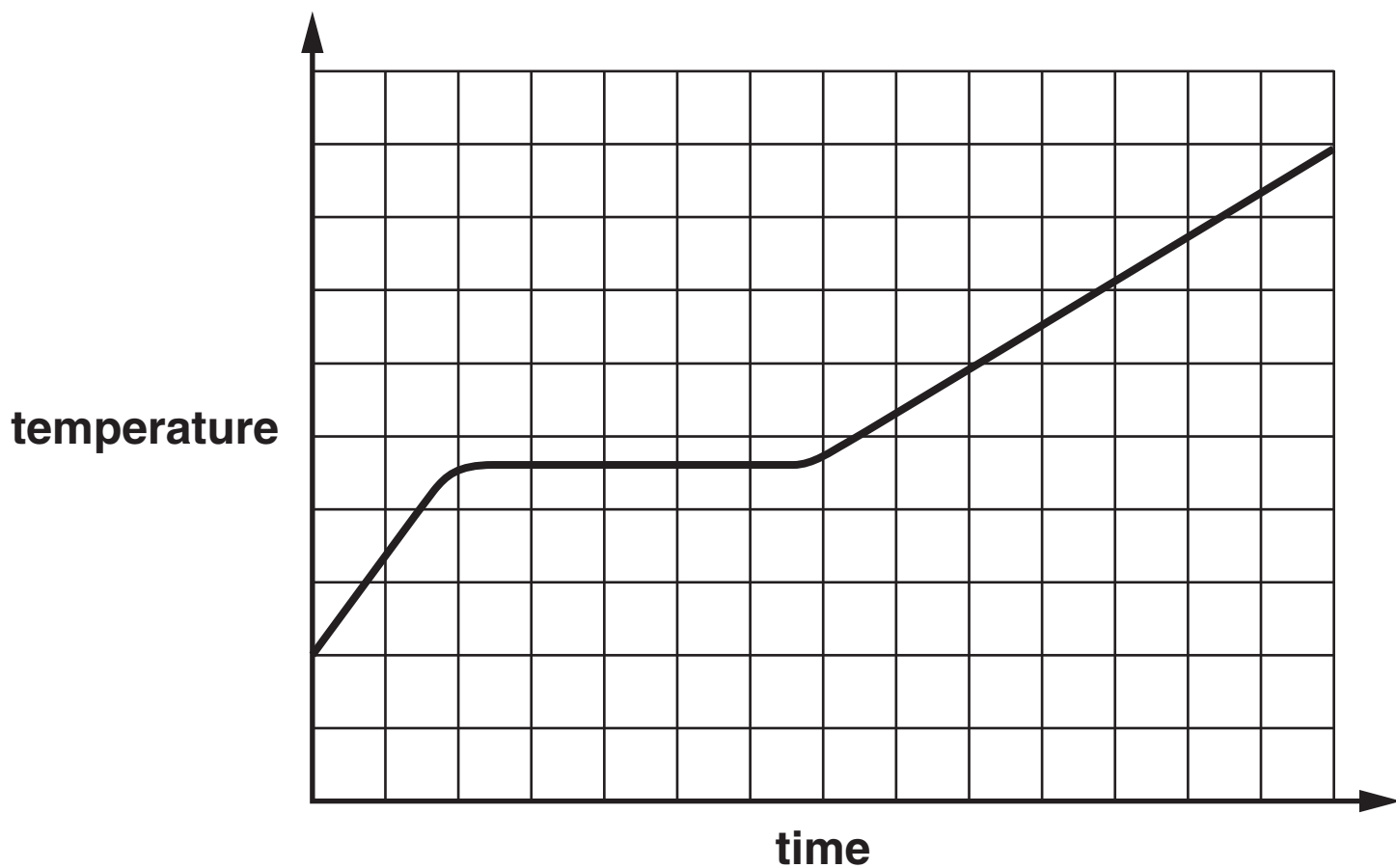


3 Jack heats a beaker containing some ice.

He measures the temperature of the contents of the beaker every 30 seconds and records the results.

He draws a graph to show how the temperature changes.

This is his graph.



- (a) (i) Complete the sentence. Choose words from this list.

ENERGY

MASS

STATE

TEMPERATURE

TIME

The specific latent heat of ice is the

_____ needed to change 1 kg

of ice into water without a change in

_____ . [2]

- (ii) Explain what happens to the energy supplied as the ice changes to water.

_____ [1]

(b) The ice has all melted.

Jack discovers that 105 kJ of energy is needed to raise the temperature of 0.5 kg of water by 50 °C.

Calculate the specific heat capacity of water.

The equations on page 3 may help you.

answer _____ J/kg °C [2]


[Total: 5]

BLANK PAGE

4 **Foam is used to reduce energy loss from a home.**

Blocks of foam are put in the cavity wall.

They are placed between the outer and inner walls.



(a) The foam in the cavity contains trapped air.

Air is a poor conductor.

Explain how TRAPPING the air reduces energy loss from the home.

_____ [1]

(b) What type of energy transfer does shiny foil reduce?

Put a ring around the correct answer.

CONDUCTION

CONVECTION

DISPERSION

RADIATION

[1]

(c) TEMPERATURE and HEAT are measurements of different things.

Complete the sentences.

Temperature is a measurement of _____

Heat is a measurement of _____

_____ [2]

(d) A home owner decides to move his open fire from an outside wall into the centre of his living room.

This makes his fire more efficient.

(i) The energy stored in 5 kg of coal is 160 MJ.

This coal is burnt. It releases 40 MJ of heat into the room.

Calculate the efficiency of the open fire.

The equations on page 3 may help you.

answer _____ [2]

(ii) Why is the fire more efficient in the centre of the room?

[Total: 7]

SECTION B – MODULE P2

5 This question is about energy from the Sun.

Ocrashire County Council builds a new school.

It has large glass windows in each room.

These windows provide PASSIVE solar heating.

(a) Most of the windows face south.

Suggest why.

_____ [1]

(b) Explain how passive solar heating works.

In your answer you should write about

- why glass is used**
- how the process heats the room.**

_____ [3]

[Total: 4]

6 This question is about alternating current (AC).

(a) Look at the graph on the next page of the output from a transformer.

(i) What is the peak output voltage?

answer _____ volts [1]

(ii) How long does it take for one complete cycle of alternating current (AC)?

answer _____ seconds [1]

(b) Transformers are used in power stations to change voltage.

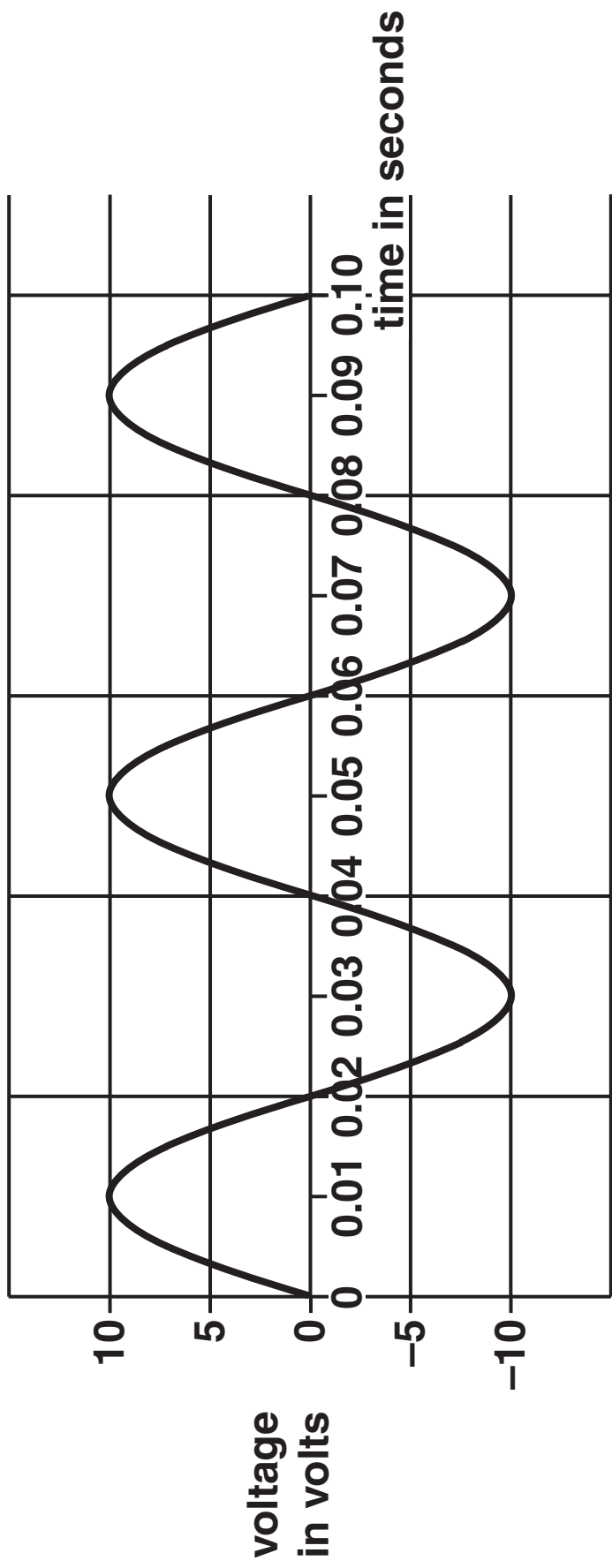
They are connected to the output of generators.

(i) What type of transformer is used in power stations?

_____ [1]

(ii) Why is the voltage changed at the output of the power station?

_____ [1]



(c) Sian has an electric heater.

The heater is connected to the 230 volt mains.

When it is switched on, a current of 13 amps passes through the heater.

Calculate the power of the heater.

The equations on page 3 may help you.

answer _____ watts [2]

(d) Sian's heater uses 'OFF PEAK' electricity.

Describe ONE advantage and ONE disadvantage of using 'off peak' electricity in the home.

advantage _____

disadvantage _____

[2]

[Total: 8]

7 The three types of nuclear radiation are alpha (α), beta (β) and gamma (γ).

(a) Draw a straight line from each RADIATION to its correct USE.

<u>RADIATION</u>	<u>USE</u>
ALPHA	STERILISING EQUIPMENT
BETA	PAPER THICKNESS GAUGE
GAMMA	SMOKE DETECTORS

[2]

(b) There is radiation that is always present in the atmosphere.

It is called background radiation.

Some of the background radiation is caused by cosmic rays.

What are cosmic rays?

_____ [1]

[Total: 3]

8 (a) Scientists think that the Universe started with a Big Bang.

Evidence exists today that supports the Big Bang theory.

Write down TWO pieces of evidence that exist today.

1 _____

2 _____

_____ [2]

(b) In our Solar System, planets orbit the Sun.

Asteroids also orbit the Sun.

Where are most asteroids found?

Choose from: BETWEEN MERCURY AND VENUS

BETWEEN VENUS AND EARTH

BETWEEN MARS AND JUPITER

BETWEEN JUPITER AND SATURN

BETWEEN URANUS AND NEPTUNE

answer _____ [1]

(c) Astronomers often use the term LIGHT-YEAR.

(i) What is a light-year?

_____ [1]

(ii) Explain why astronomers find light-years a USEFUL measurement.

_____ [1]

[Total: 5]

SECTION C – MODULE P3

- 9 A speed camera uses radar to detect when a car is speeding.

There are lines painted on the road in front of the camera to measure distance.

The camera takes TWO photographs of a speeding car, as it passes over the lines, to confirm the speed.

Mr Green is accused of speeding. The speed limit is 13.5 m/s (30 mph).

He is shown the two photographs taken by the speed camera.

The time between the photographs is 2 s.

The distance between each of the lines on the road is 4 m.

The photographs show that his car passed over 9 lines in the time between when the two photographs were taken.



Calculate the speed of his car.

The equations on page 3 may help you.

answer _____ **m/s** **[3]**

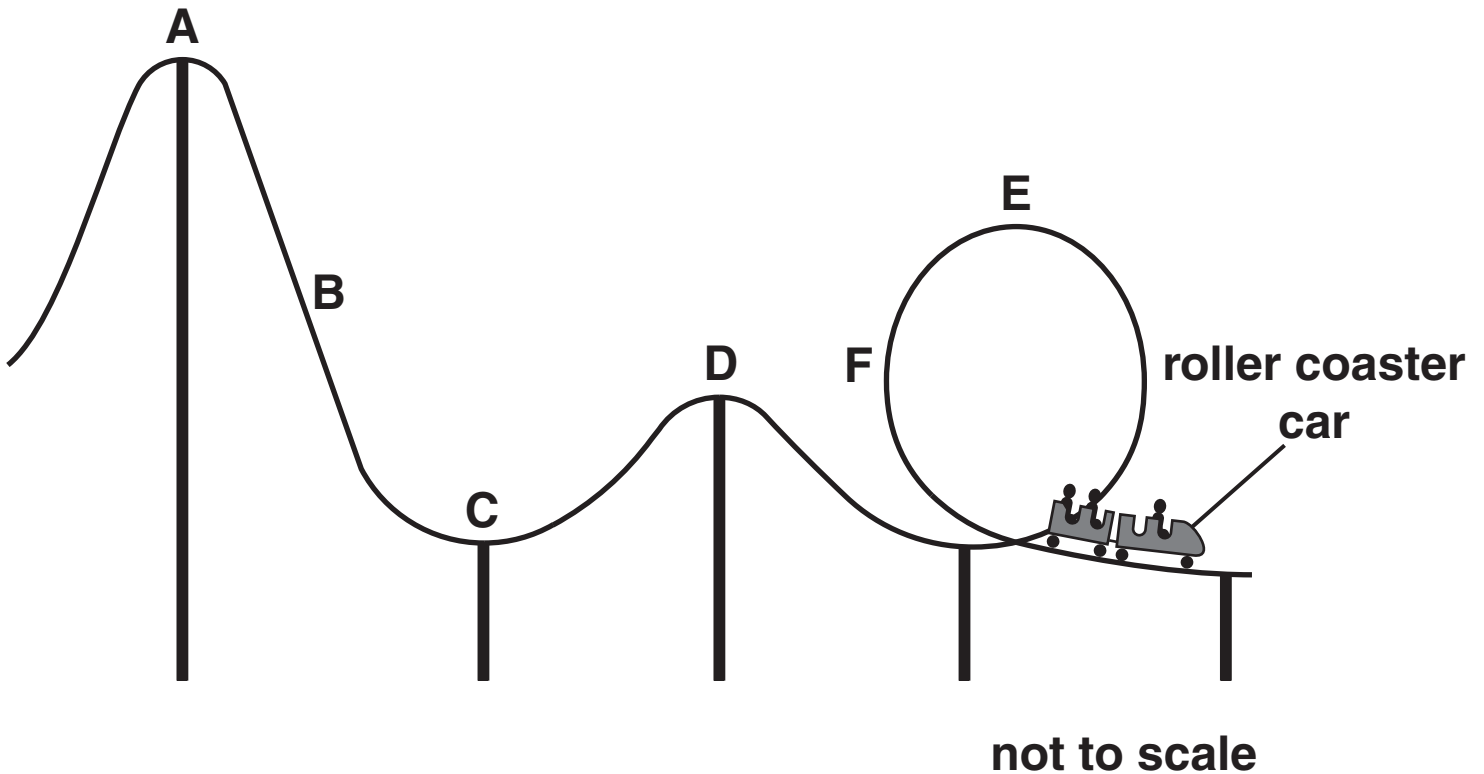
[Total: 3]

10 Mark is riding on a roller coaster.

The roller coaster car is lifted to the top of the ride.

It is then released at point A.

The diagram shows the roller coaster with the car at the end of the ride.



(a) Where does the car have the most gravitational potential energy?

Choose from: A B C D E F

answer _____ [1]

(b) Where is the car moving fastest?

Choose from: A B C D E F

answer _____ [1]

(c) At maximum speed the kinetic energy of the car is 200 kJ.

More people then get into the car.

The total MASS doubles.

The maximum speed stays the same.

What is the maximum kinetic energy now?

answer _____ KJ [1]

[Total: 3]

11 Mrs Brown is driving her car slowly because she is near a school.

A child runs out into the road.

The car stops safely.

The chart on the page opposite shows typical stopping distances.

(a) The speed limit in towns is usually 30 mph.

Explain why the speed limit outside schools is often 20 mph.

[1]

(b) (i) Mrs Brown drives at 50 mph.

Her braking distance is 38 m.

What is her thinking distance?

answer _____ metres **[1]**

(ii) Write down TWO factors that could increase her thinking distance.

1 _____

2 _____ **[2]**

Typical Stopping Distances

key

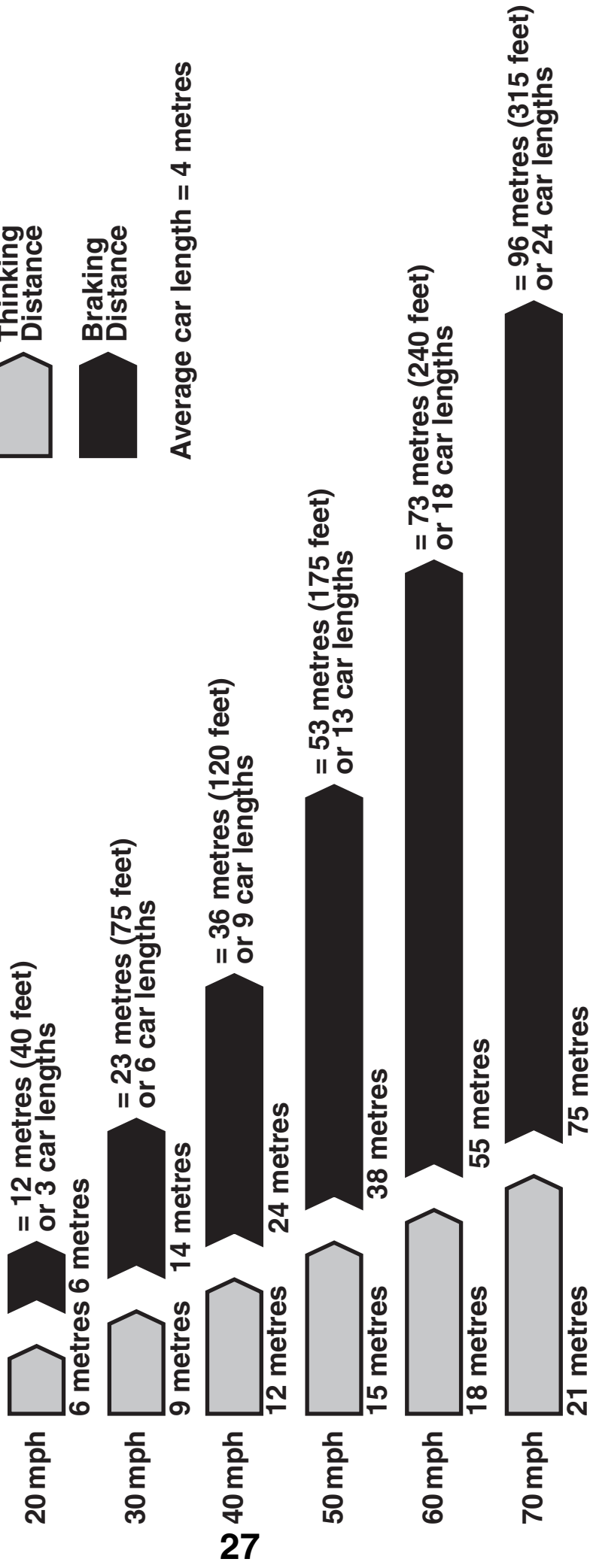


Thinking
Distance



Braking
Distance

Average car length = 4 metres



(c) Mrs Brown drives faster on a motorway.

Her speed is now 70 mph.

The chart shows that the braking distance increases to 75 metres.

Explain two situations which could increase the braking distance for her car at 70 mph.

Link your answers to

- **friction**
- **mass.**

1 _____

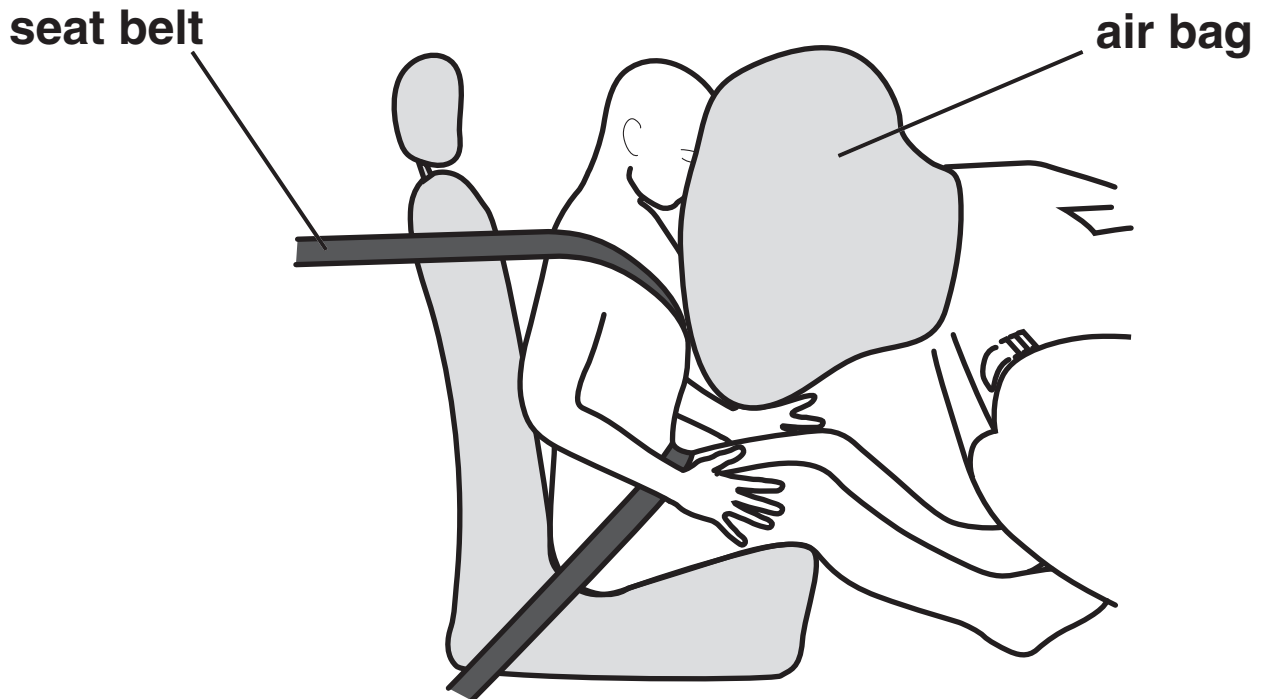
2 _____

_____ **[2]**

[Total: 6]

12 (a) Modern cars have air bags and seat belts.

A car is in a crash.



The airbag and seatbelt change shape and absorb energy in the crash.

Airbags and seat belts reduce injuries to drivers and passengers.

Use ideas about forces to explain how.

[2]

(b) Many cars now have the controls for the cd-player mounted on the steering wheel.

How can this make driving a car safer?

[1]

[Total: 3]

13 Steve is a member of the Red Devils free fall display team.

(a) Steve jumps out of the plane.

His speed increases until he reaches terminal velocity.

Use ideas about forces to explain how Steve REACHES terminal velocity.

[2]

(b) As Steve falls, he loses gravitational potential energy and gains kinetic energy.

After he has reached terminal velocity, he continues to lose gravitational potential energy but does NOT gain kinetic energy. Use ideas about energy transfer to explain why.

[1]

(c) Steve and his parachute have a mass of 85 kg.

His maximum gravitational potential energy is 2720 000 J.

Calculate the height he jumps from.

The equations on page 3 may help you.

(g = 10 N/kg)

answer _____ metres [2]

[Total: 5]

END OF QUESTION PAPER



Copyright Information

OCR is committed to seeking permission to reproduce all third-party content that it uses in its assessment materials. OCR has attempted to identify and contact all copyright holders whose work is used in this paper. To avoid the issue of disclosure of answer-related information to candidates, all copyright acknowledgements are reproduced in the OCR Copyright Acknowledgements Booklet. This is produced for each series of examinations, is given to all schools that receive assessment material and is freely available to download from our public website (www.ocr.org.uk) after the live examination series.

If OCR has unwittingly failed to correctly acknowledge or clear any third-party content in this assessment material, OCR will be happy to correct its mistake at the earliest possible opportunity.

For queries or further information please contact the Copyright Team, First Floor, 9 Hills Road, Cambridge CB2 1PB.

OCR is part of the Cambridge Assessment Group; Cambridge Assessment is the brand name of University of Cambridge Local Examinations Syndicate (UCLES), which is itself a department of the University of Cambridge.