

**GENERAL CERTIFICATE OF SECONDARY EDUCATION
TWENTY FIRST CENTURY SCIENCE
PHYSICS A**

A331/02

Unit 1: Modules P1 P2 P3 (Higher Tier)

Candidates answer on the Question Paper
A calculator may be used for this paper

OCR Supplied Materials:
None

Other Materials Required:

- Pencil
- Ruler (cm/mm)

**Wednesday 20 January 2010
Morning**

Duration: 40 minutes



| | | | |
|--------------------|--|-------------------|--|
| Candidate Forename | | Candidate Surname | |
|--------------------|--|-------------------|--|

| | | | | | | | | | | |
|---------------|--|--|--|--|--|------------------|--|--|--|--|
| Centre Number | | | | | | Candidate Number | | | | |
|---------------|--|--|--|--|--|------------------|--|--|--|--|

MODIFIED LANGUAGE

INSTRUCTIONS TO CANDIDATES

- Write your name clearly in capital letters, your Centre Number and Candidate Number in the boxes above.
- Use black ink. Pencil may be used for graphs and diagrams only.
- Read each question carefully and make sure that you know what you have to do before starting your answer.
- Answer **all** the questions.
- Do **not** write in the bar codes.
- Write your answer to each question in the space provided, however additional paper may be used if necessary.

INFORMATION FOR CANDIDATES

- The number of marks is given in brackets [] at the end of each question or part question.
- The total number of marks for this paper is **42**.
- This document consists of **16** pages. Any blank pages are indicated.

Answer **all** the questions.

1



Scientists think that mountains must be forming all the time.

(a) Some of the statements below are used to explain this.

- A Mountains are part of the Earth's crust.
- B Erosion causes mountains to be worn down.
- C The Earth is older than its oldest rocks.
- D The continents would be flat if no new continents are formed.
- E Mountains exist today.
- F Mountains are only formed on drifting continents.

Three of the statements, when taken together, explain why mountains must be forming all the time.

Write down the letters of these three statements.

..... and and

[3]

(b) The explanation can only be correct if one of the following statements is also correct.

Put a tick (✓) in the box next to the correct statement.

The rock processes seen today can explain changes in the past.

Wegener's theory of continental drift explained the jigsaw-fit of South America and Africa.

Asteroids colliding with the Earth in the past can explain how mountains form.

Mountains are over 1 km high.

[1]

[Total: 4]

2 Scientists have made many observations about the Universe.

(a) Scientists quantify their observations whenever they can.

Use these numbers to complete the observations below.

Each number may be used once, more than once, or not at all.

100 1000 4000 5000 14 000

The oldest rocks on Earth are about million years old.

The Earth is about million years old.

The Sun is about million years old.

The Universe is about million years old.

The Sun has a diameter about times bigger than the Earth's diameter.

[4]

(b) Read the following statements.

- A** there are difficulties in making observations
- B** the Universe started with a 'big bang'
- C** we do not know the mass of the Universe
- D** planets have been discovered around nearby stars
- E** the further away a galaxy is, the faster it is moving away
- F** stars take a long time to go through their life cycle

Write down the letters of the statements that best complete each of the sentences below.

(i) We know space is expanding because **[1]**

(ii) It is difficult to predict the ultimate fate of the Universe because and **[1]**

[Total: 6]


3 Read the article.

Extrasolar Planets Found?

Some astronomers claim to have found evidence for planets around nearby stars.

The evidence is small variations in the brightness of some stars and very small wobbles in the positions of stars.

Some of the results have been published in peer reviewed scientific journals, but only a few have been replicated by other astronomers.



Explain how peer review and repeating results can strengthen or weaken the astronomers' claims.

Your answer should include:

- an explanation of what is meant by 'peer review'
- an explanation of what is meant by 'replicated by other astronomers'
- why these will strengthen or weaken the astronomers' claims.

.....

.....

.....

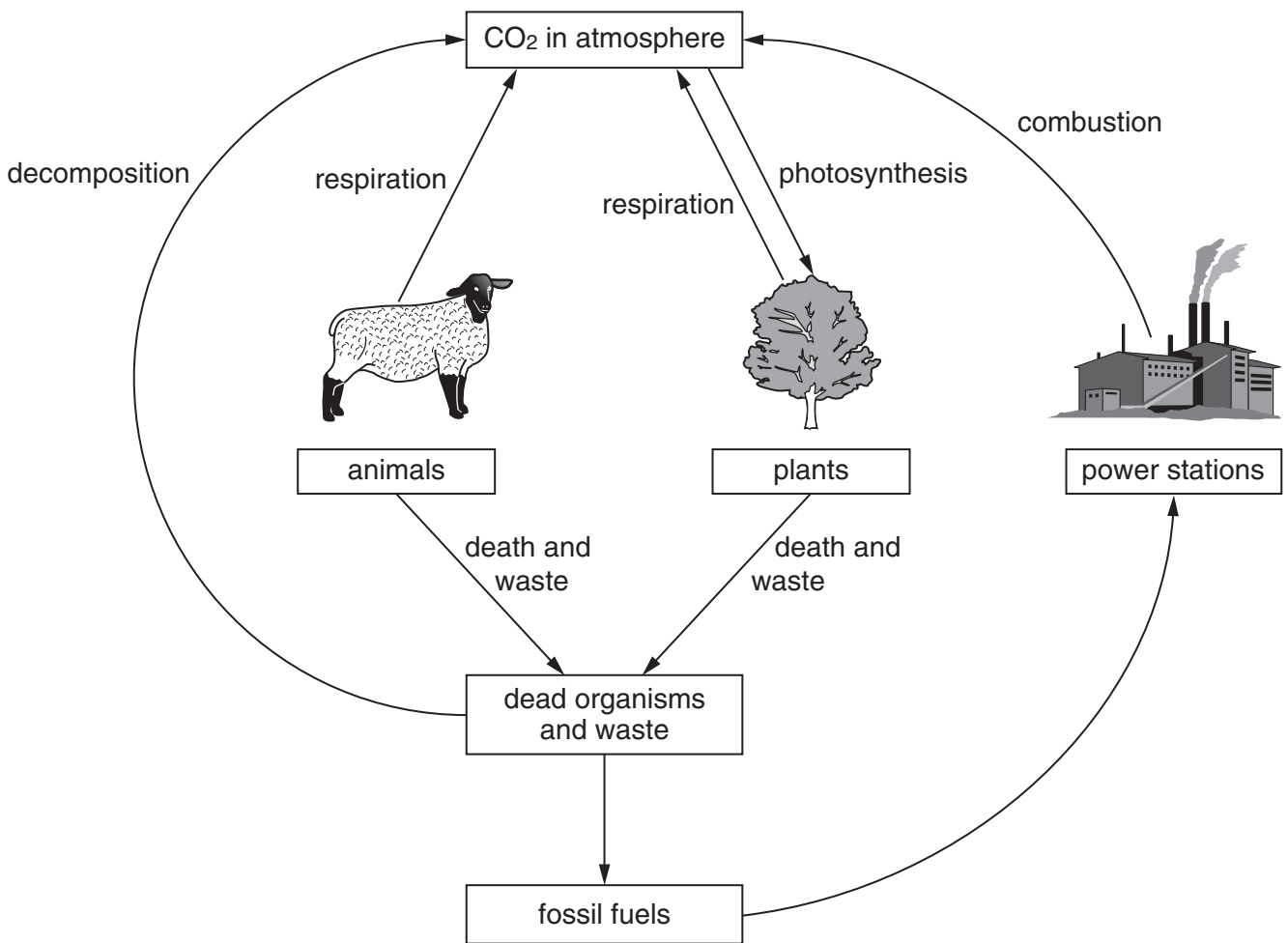
.....

.....

[3]

[Total: 3]

4 Look at the diagram of the carbon cycle.



(a) Use the carbon cycle to help explain how burning forests affects the amount of carbon dioxide in the atmosphere.

.....

.....

.....

..... [3]

(b) Carbon dioxide in the atmosphere contributes to global warming.

Suggest **two** ways of reducing the risk of global warming, other than not burning forests.

.....

.....

.....

..... [2]

5 Ultraviolet radiation can be hazardous.

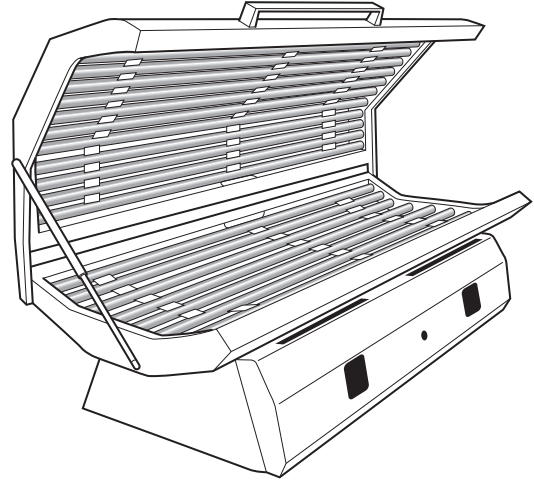
Read the article.

Boy of 13 burnt by sunbed

A boy of 13 has severe burn blisters on his face after he used a tanning salon's ultraviolet sunbed three times in a day for a total of 21 minutes.

He repeatedly slipped into an unstaffed, coin-operated booth because he thought it would disguise his acne. The maximum safe tanning time at the salon is 6 minutes.

His mum, said: "His lips swelled up and he couldn't swallow. He is quite vain. I am afraid he will develop cancer when he is older."



(a) What correlation is suggested by the article?

.....

.....

..... [2]

(b) Why is the boy's mum right to be concerned about cancer?

Put ticks (✓) in the boxes next to the **two** best answers.

Ultraviolet light is invisible to the human eye.

Ultraviolet light has energetic photons.

Ultraviolet light is next to visible light in the spectrum.

Ultraviolet light is an ionising radiation.

Ultraviolet light can heat up skin cells.

[2]

(c) A letter to the newspaper said

'This just shows how dangerous sunbeds are.
We should ban all sunbeds'.

Explain why this is not a good scientific conclusion.

.....

.....

..... [2]

[Total: 6]

- 6 (a) The Sun produces a lot of ultraviolet radiation.

The Earth's atmosphere blocks most of this ultraviolet radiation.

- (i) Which gas in the atmosphere absorbs most of the ultraviolet radiation?

.....

[1]

- (ii) What happens to the energy absorbed by this gas?

Put a tick (✓) in the box next to the best answer.

It is radiated as violet light.

It produces photons.

It causes chemical reactions.

It makes the sky blue.

[1]

- (b) Other gases in the atmosphere absorb the infrared and microwave radiation that the **Earth** emits.

One of these gases is water vapour.

Name **two** other gases in the atmosphere that strongly absorb **infrared** radiation.

..... and

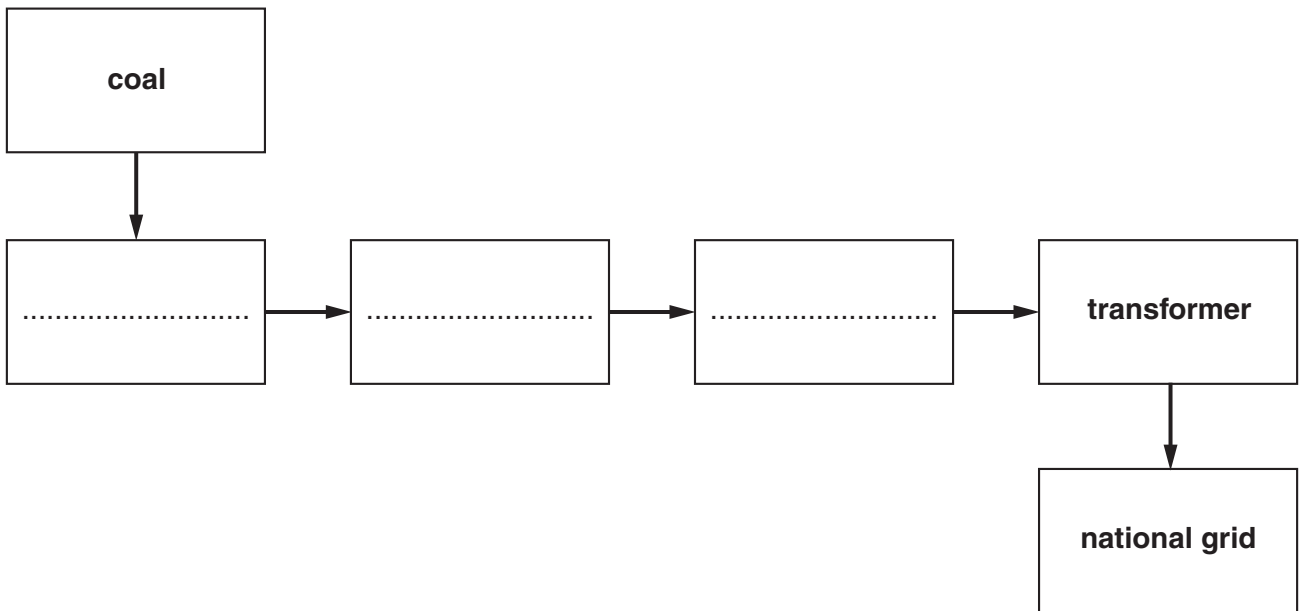
[2]

[Total: 4]

7 This question is about electricity generation in coal-fired power stations.



Complete the block diagram showing how a coal-fired power station produces electricity.

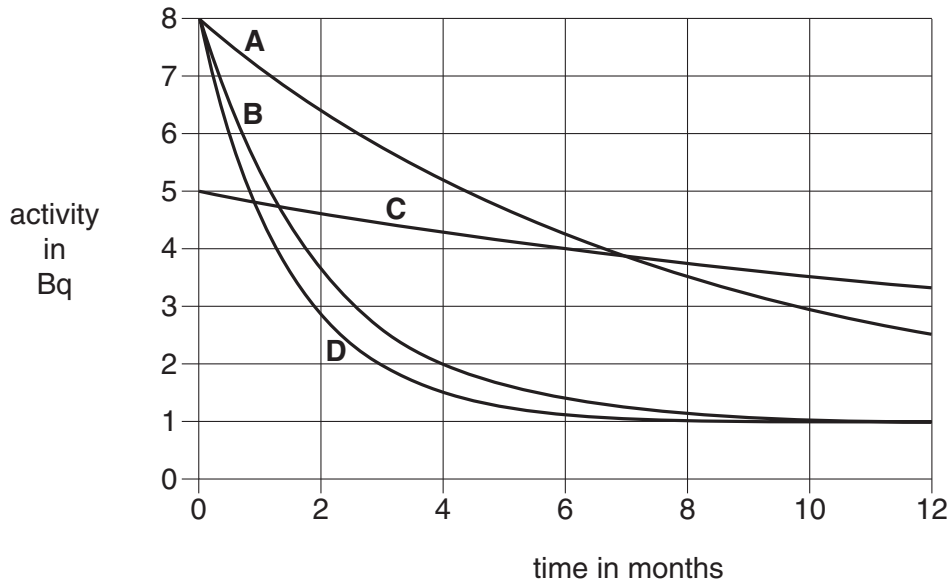


[4]

[Total: 4]

8 Different radioactive sources are used in hospitals for different purposes.

The graph shows the activity over time of four different radioactive sources.



(a) (i) Which radioactive source, **A**, **B**, **C** or **D**, has the shortest half-life?

answer [1]

(ii) Which radioactive source, **A**, **B**, **C** or **D**, has the most activity after 10 months?

answer [1]

(iii) Which **two** sources are least likely to be a long term storage problem?

..... and [1]

(b) Use information from the graph to find a value for the activity of the background radiation.

activity = Bq [1]

- (c) The graph does not provide enough information to assess the risk associated with each material when used in a hospital.

What additional information is needed?

Put a tick (✓) in the box next to **each** correct answer.

- Type of radiation.
- Name of radioactive source.
- Amount of radioactive source.
- Length of time exposed to radioactive source.
- Number of protons and neutrons in nucleus of radioactive source.

[2]

- (d) Here is some information about people who have contact with the sources in the hospital.

| | |
|--------------|-------------------------------------|
| doctor | decides on use of sources |
| radiographer | prepares and uses sources |
| nurse | helps patients treated with sources |
| patient | treated with a source |
| porter | moves patients around hospital |

Who is likely to receive the largest life-time dose if not specially protected?

answer [1]

- (e) The doctor tells the patient that they always apply the ALARA principle when treating a patient with radioactive sources.

Which of the following best explains why the doctor does **not** use the precautionary principle?

Put a tick (✓) in the box next to the **best** explanation.

The hospital must keep some money for treating emergency patients.

The doctor understands the risks and benefits.

The patient does not need to take precautions, because the doctor will take the precautions.

The risk is too small to worry about.

[1]

- (f) There are three types of radiation produced by radioactive sources.

- A** alpha radiation
- B** beta radiation
- C** gamma radiation

Which type of radiation, **A**, **B**, or **C**, would be best for each of the following hospital uses?

You may use each type of radiation once, more than once, or not at all.

| use | type of radiation |
|---|-------------------|
| irradiating surgical instruments | |
| tracking the movement of chemicals inside the body | |
| treating a cancer on the surface of the skin | |

[2]

[Total: 10]

END OF QUESTION PAPER

14
BLANK PAGE

PLEASE DO NOT WRITE ON THIS PAGE

15
BLANK PAGE

PLEASE DO NOT WRITE ON THIS PAGE

PLEASE DO NOT WRITE ON THIS PAGE



Copyright Information

OCR is committed to seeking permission to reproduce all third-party content that it uses in its assessment materials. OCR has attempted to identify and contact all copyright holders whose work is used in this paper. To avoid the issue of disclosure of answer-related information to candidates, all copyright acknowledgements are reproduced in the OCR Copyright Acknowledgements Booklet. This is produced for each series of examinations, is given to all schools that receive assessment material and is freely available to download from our public website (www.ocr.org.uk) after the live examination series.

If OCR has unwittingly failed to correctly acknowledge or clear any third-party content in this assessment material, OCR will be happy to correct its mistake at the earliest possible opportunity.

For queries or further information please contact the Copyright Team, First Floor, 9 Hills Road, Cambridge CB2 1GE.

OCR is part of the Cambridge Assessment Group; Cambridge Assessment is the brand name of University of Cambridge Local Examinations Syndicate (UCLES), which is itself a department of the University of Cambridge.