



H

Thursday 2 February 2012 – Morning

**GCSE TWENTY FIRST CENTURY SCIENCE
PHYSICS A**

A332/02 Unit 2: Modules P4 P5 P6 (Higher Tier)

Candidates answer on the Question Paper.
A calculator may be used for this paper.

Duration: 40 minutes

OCR supplied materials:
None

Other materials required:

- Pencil
- Ruler (cm/mm)



Candidate forename		Candidate surname	
-----------------------	--	----------------------	--

Centre number						Candidate number				
---------------	--	--	--	--	--	------------------	--	--	--	--

MODIFIED LANGUAGE

INSTRUCTIONS TO CANDIDATES

- Write your name, centre number and candidate number in the boxes above. Please write clearly and in capital letters.
- Use black ink. HB pencil may be used for graphs and diagrams only.
- Answer **all** the questions.
- Read each question carefully. Make sure you know what you have to do before starting your answer.
- Write your answer to each question in the space provided. Additional paper may be used if necessary but you must clearly show your candidate number, centre number and question number(s).
- Do **not** write in the bar codes.

INFORMATION FOR CANDIDATES

- The number of marks is given in brackets [] at the end of each question or part question.
- A list of physics equations is printed on page 2.
- The total number of marks for this paper is **42**.
- This document consists of **20** pages. Any blank pages are indicated.

TWENTY FIRST CENTURY SCIENCE EQUATIONS

Useful Relationships

Explaining Motion

$$\text{speed} = \frac{\text{distance travelled}}{\text{time taken}}$$

$$\text{momentum} = \text{mass} \times \text{velocity}$$

$$\text{change of momentum} = \text{resultant force} \times \text{time for which it acts}$$

$$\text{work done by a force} = \text{force} \times \text{distance moved in the direction of the force}$$

$$\text{change in energy} = \text{work done}$$

$$\text{change in GPE} = \text{weight} \times \text{vertical height difference}$$

$$\text{kinetic energy} = \frac{1}{2} \times \text{mass} \times [\text{velocity}]^2$$

Electric Circuits

$$\text{resistance} = \frac{\text{voltage}}{\text{current}}$$

$$\frac{\text{voltage across primary coil}}{\text{voltage across secondary coil}} = \frac{\text{number of turns in primary coil}}{\text{number of turns in secondary coil}}$$

$$\text{energy transferred} = \text{power} \times \text{time}$$

$$\text{power} = \text{potential difference} \times \text{current}$$

$$\text{efficiency} = \frac{\text{energy usefully transferred}}{\text{total energy supplied}} \times 100\%$$

The Wave Model of Radiation

$$\text{wave speed} = \text{frequency} \times \text{wavelength}$$

BLANK PAGE

Question 1 starts on page 4

PLEASE DO NOT WRITE ON THIS PAGE

Answer **all** the questions.

- 1 Barry decorates his house with Christmas lights.



- (a) Barry uses an LDR in the circuit so that the lights switch on automatically at night.

- (i) One property of an LDR changes when it gets dark.

Put a **ring** around the property that changes when it gets dark.

efficiency resistance temperature

Put a **ring** around the correct option to show how this property changes when the light intensity decreases. The property...

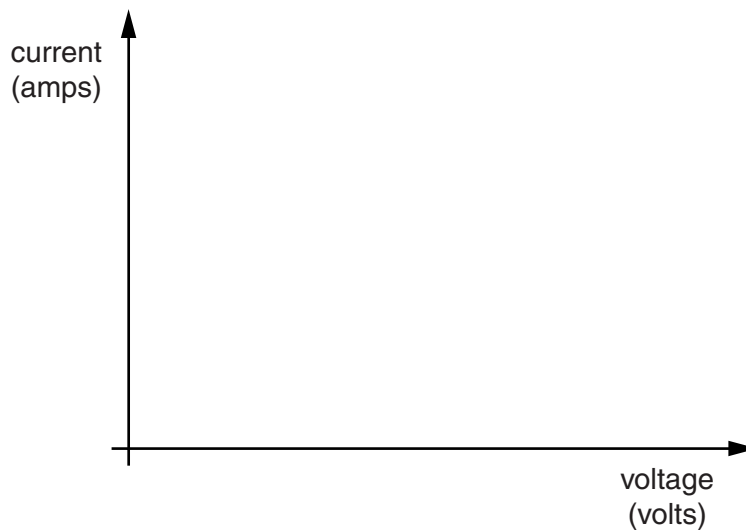
increases decreases stays the same

[1]

- (ii) The circuit also contains fixed resistors.

Sketch a graph on the axes below to show how the current varies with voltage for a fixed resistor.

The temperature of the resistor does not change.



[1]

(b) Each of the light bulbs on Barry's house has a value of 15 W.

What does this mean?

Put a tick (✓) in the box next to the correct answer.

The bulb...

- ... has an efficiency of 15%.
- ... uses 15 amps of current.
- ... uses a potential difference of 15 volts.
- ... transfers 15 joules of energy every second.

[1]

(c) Each light bulb has a filament inside.

When the light bulb is switched on, the filament glows. Explain why.

.....

.....

..... [2]

(d) Barry used the lights for 20 nights, for 10 hours each night.

The total power used by the light bulbs was 1.5 kW.

The cost per kWh was 10p.

How much does Barry have to pay for the electricity used by the lights?

Put a (ring) around the correct answer.

- £0.30 £30.00 £300.00 £30 000.00

[1]

[Total: 6]

2 This question is about a wind turbine.



(a) The turbine blades are attached to a generator.

In the generator there is a magnet inside a coil of wire.

Here are five statements about how the wind turbine supplies electricity to the National Grid.

They are in the **wrong order**.

- A** A voltage is induced across the ends of the coil.
- B** The magnet rotates inside the coil.
- C** The voltage is increased by a transformer.
- D** There is a current in the wire.
- E** The wind turns the turbine blades.

Fill in the boxes with the letters **A**, **B**, **C**, **D** and **E** to show the correct order.

--	--	--	--	--	--

[1]

(b) What would **increase** the current in the coil around the magnet?

Put ticks (✓) in the boxes next to the **two** correct answers.

- placing an aluminium core inside the coil
- decreasing the strength of the magnet
- increasing the speed of rotation of the magnet
- heating the coil of wire
- decreasing the resistance of the wire

[2]

(c) The National Grid transmits electricity using alternating current (a.c.) and not direct current (d.c.).

State two reasons why a.c. is used instead of d.c.

.....
.....
.....
..... [2]

(d) A 'step up' transformer is used to increase voltage.

Describe the main features of the construction of a transformer that increases voltage.


You may include a labelled diagram.

.....
.....
..... [2]

[Total: 7]

3 Nadia rides a motorbike.

(a) The picture shows two of the forces acting on Nadia's motorbike.



The motion of the motorbike depends on the size of each force.

(i) Draw **three** straight lines to join the correct boxes below. Show what happens to the **speed of the motorbike** as the **forces** change.

speed of the motorbike

forces

changes from **20 m/s** to **25 m/s**

the driving force is **the same as** the counter force

changes from **20 m/s** to **15 m/s**

the driving force is **greater than** the counter force

stays **constant** at **20 m/s**

the driving force is **smaller than** the counter force

[1]

(ii) Which of these statements is **true**?

Put a tick (✓) in the box next to the correct statement.

The motorbike's momentum is always zero when the driving force is equal to the counter force.

The motorbike's momentum decreases when its kinetic energy increases.

The motorbike's momentum does not change when the resultant force on the motorbike is zero.

The motorbike's momentum increases when the driving force is smaller than the counter force.

[1]

(b) The total mass of Nadia and the motorbike is 250 kg.

The speed of the motorbike is 20 m/s.

(i) Calculate the kinetic energy of Nadia and the motorbike.

Show your working.

kinetic energy = J [2]

(ii) Nadia slows down and stops on a flat and level road.

Describe the energy transfers that take place when she slows down and stops.

.....
.....
.....
..... [2]

(iii) Nadia takes 5 seconds to slow down from 20 m/s and stop.

Calculate the average force used to stop Nadia and the motorbike.

force = N [2]

[Total: 8]

- 4 Emily uses an exercise bike in her gym.



The exercise bike uses friction against a rotating wheel. It makes her feel like she is cycling along a road.

- (a) The following measurements are shown on the screen of the bike.

distance travelled	1.5 km
energy used	75 000 J

Calculate the force of friction on the wheel.

Show your working.

force = N [2]


(b) Emily and her friends discuss the energy transfers that take place when she uses the exercise bike.

<p>Toni The faster Emily's legs move the more kinetic energy they have.</p>			<p>Jon Most of the kinetic energy will eventually be transferred to the surroundings.</p>
<p>Emily No energy disappears. It just gets changed into other forms of energy.</p>			<p>Darrell The friction will use up the kinetic energy so it will disappear.</p>

Which person is making a **wrong** statement?

answer [1]

(c) Emily uses a punch bag.



Emily punches the bag. The bag moves.

Some of the following statements are true and some are false.

Put one tick (✓) in each row to show whether the statement is **true** or **false**.

	true	false
Work is done by the force of the punch on the bag.	<input type="checkbox"/>	<input type="checkbox"/>
The maximum kinetic energy gained by the bag is equal to the work done on the bag.	<input type="checkbox"/>	<input type="checkbox"/>
Emily has the same energy as the bag after she has hit it.	<input type="checkbox"/>	<input type="checkbox"/>
The kinetic energy gained by the bag is proportional to its speed after it is hit.	<input type="checkbox"/>	<input type="checkbox"/>
When a force on the bag causes it to move faster, the force must be doing work on the bag.	<input type="checkbox"/>	<input type="checkbox"/>

[3]

(d) When Emily hits the punch bag two forces form an interaction pair.

Put circles around the **two** forces that make up the interaction pair.

air resistance acting on the punch bag

Emily's weight

force from Emily's hand onto the punch bag

force of air resistance acting against Emily's hand

the punch bag pushing Emily's hand

friction from Emily's hand on her gloves

[1]

[Total: 7]

BLANK PAGE

Question 5 starts on page 14

PLEASE DO NOT WRITE ON THIS PAGE

5 Lucas shines a laser through two narrow slits onto a wall.

He notices that there are lighter and darker patches in the light on the wall.

(a) He writes an explanation.

Complete the explanation by filling in the missing words.

Use words from this list.

- | | | | |
|--------------------|---------------------|--------------------|--------------------|
| amplitudes | constructive | destructive | diffraction |
| frequencies | refraction | reflection | wavelengths |

The light from the laser travels as waves.

As the light passes through the slits, it spreads out. This is called

Where two waves meet, their add and this is called interference.

When two waves arrive in step they reinforce.

This is called interference.

When two waves arrive out of step they cancel out.

Darker patches are caused when there is interference.

[3]

(b) Lucas' teacher tells him that light travels as waves.

Which **two** effects can **only** be explained by light travelling as a wave?

Put ticks (✓) in the boxes next to the **two** correct answers.

- | | |
|---------------------------------------|--------------------------|
| absorption of light | <input type="checkbox"/> |
| constant speed of light through space | <input type="checkbox"/> |
| diffraction of light | <input type="checkbox"/> |
| interference of light | <input type="checkbox"/> |
| reflection of light | <input type="checkbox"/> |

[2]

(c) Lucas makes a table showing parts of the electromagnetic spectrum.

He adds typical wavelengths.

He then uses the speed of light (3×10^8 m/s) to calculate the frequencies.

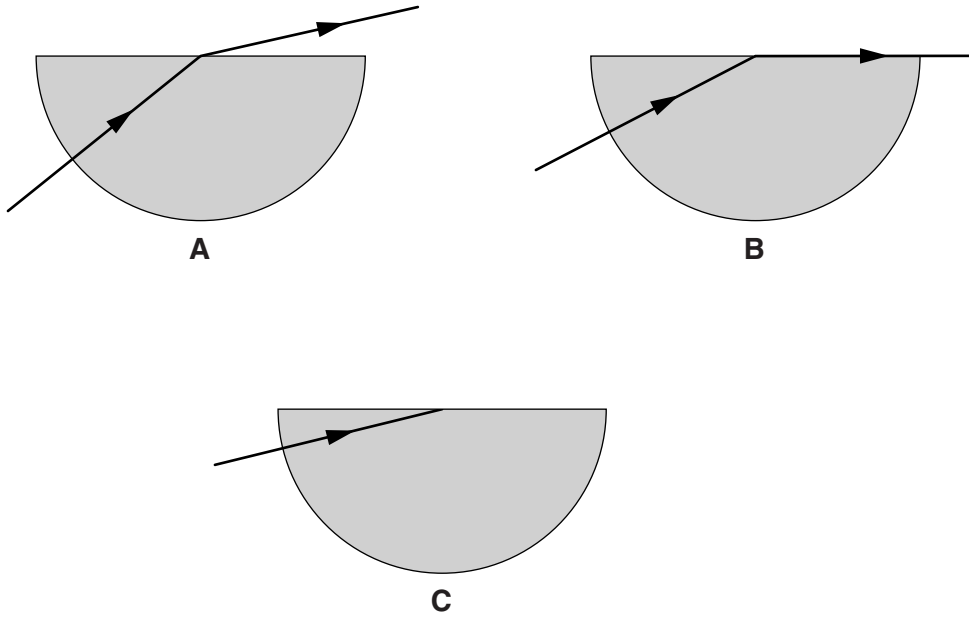
Complete the table. Show the missing parts of the electromagnetic spectrum, the missing wavelength, and the missing frequency.

	X-rays	ultraviolet	visible light	radio waves
wavelength in m	1×10^{-11}	1×10^{-9}	5×10^{-7}	1×10^{-4}	3×10^{-2}	6
frequency in Hz	3×10^{19}	3×10^{17}	5×10^{15}	6×10^{14}	3×10^{12}	1×10^{10}

[3]

[Total: 8]

- 6 Jon is doing an experiment.
He shines a ray of light into a semicircular glass block from different angles.



- (a) (i) Complete diagram **C** to show how the light would act at the boundary of the glass block. [1]

- (ii) Complete the sentences below to explain this effect.

Use the words from this list.

Each word can be used **once**, **more than once**, or **not at all**.

- 30
- 90
- 180
- diffraction
- external
- internal
- refraction
- reflection

This effect is called total

The effect happens when the angle of would be greater than

..... degrees.

[3]

(iii) The **same** effect is used in some communication systems.

Which of these communication systems uses this effect?

Put a **ring** around the correct answer.

**digital
radio**

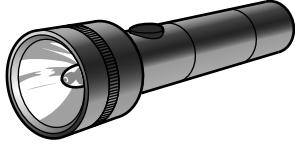
**mobile
phones**

**optical
fibres**

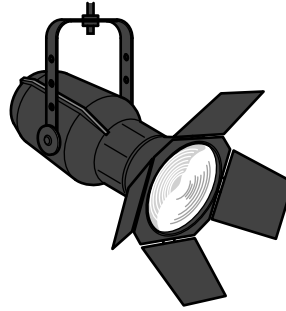
**satellite
transmission**

[1]

(b) Here are two different sources of light.



torch



spotlight

The light from the torch is not as bright as the light from the spotlight.

Both give out light of the same frequencies.

Which **pair** of statements explains the difference?

Put a tick (✓) in the box next to the correct answer.

number of photons from the source	energy of the photons	
greater from the torch	greater from the torch	<input type="checkbox"/>
greater from the torch	greater from the spotlight	<input type="checkbox"/>
greater from the torch	same for both	<input type="checkbox"/>
greater from the spotlight	greater from the torch	<input type="checkbox"/>
greater from the spotlight	greater from the spotlight	<input type="checkbox"/>
greater from the spotlight	same for both	<input type="checkbox"/>

[1]

[Total: 6]

END OF QUESTION PAPER

19
BLANK PAGE

PLEASE DO NOT WRITE ON THIS PAGE

PLEASE DO NOT WRITE ON THIS PAGE



Copyright Information

OCR is committed to seeking permission to reproduce all third-party content that it uses in its assessment materials. OCR has attempted to identify and contact all copyright holders whose work is used in this paper. To avoid the issue of disclosure of answer-related information to candidates, all copyright acknowledgements are reproduced in the OCR Copyright Acknowledgements Booklet. This is produced for each series of examinations and is freely available to download from our public website (www.ocr.org.uk) after the live examination series.

If OCR has unwittingly failed to correctly acknowledge or clear any third-party content in this assessment material, OCR will be happy to correct its mistake at the earliest possible opportunity.

For queries or further information please contact the Copyright Team, First Floor, 9 Hills Road, Cambridge CB2 1GE.

OCR is part of the Cambridge Assessment Group; Cambridge Assessment is the brand name of University of Cambridge Local Examinations Syndicate (UCLES), which is itself a department of the University of Cambridge.