

Friday 20 January 2012 – Morning

**GCSE TWENTY FIRST CENTURY SCIENCE
PHYSICS A**

A181/01 Modules P1 P2 P3 (Foundation Tier)


Candidates answer on the Question Paper.
A calculator may be used for this paper.

OCR supplied materials:
None

Other materials required:

- Pencil
- Ruler (cm/mm)

Duration: 1 hour



Candidate forename		Candidate surname	
-----------------------	--	----------------------	--

Centre number						Candidate number				
---------------	--	--	--	--	--	------------------	--	--	--	--

MODIFIED LANGUAGE

INSTRUCTIONS TO CANDIDATES

- Write your name, centre number and candidate number in the boxes above. Please write clearly and in capital letters.
- Use black ink. HB pencil may be used for graphs and diagrams only.
- Answer **all** the questions.
- Read each question carefully. Make sure you know what you have to do before starting your answer.
- Write your answer to each question in the space provided. Additional paper may be used if necessary but you must clearly show your candidate number, centre number and question number(s).
- Do **not** write in the bar codes.

INFORMATION FOR CANDIDATES

- Your quality of written communication is assessed in questions marked with a pencil (✎).
- A list of physics equations is printed on page 2.
- The number of marks is given in brackets [] at the end of each question or part question.
- The total number of marks for this paper is **60**.
- This document consists of **16** pages. Any blank pages are indicated.

TWENTY FIRST CENTURY SCIENCE EQUATIONS

Useful Relationships

The Earth in the Universe

$$\text{distance} = \text{wave speed} \times \text{time}$$

$$\text{wave speed} = \text{frequency} \times \text{wavelength}$$

Sustainable Energy

$$\text{energy transferred} = \text{power} \times \text{time}$$

$$\text{power} = \text{voltage} \times \text{current}$$

$$\text{efficiency} = \frac{\text{energy usefully transferred}}{\text{total energy supplied}} \times 100\%$$

Explaining Motion

$$\text{speed} = \frac{\text{distance travelled}}{\text{time taken}}$$

$$\text{acceleration} = \frac{\text{change in velocity}}{\text{time taken}}$$

$$\text{momentum} = \text{mass} \times \text{velocity}$$

$$\text{change of momentum} = \text{resultant force} \times \text{time for which it acts}$$

$$\text{work done by a force} = \text{force} \times \text{distance moved in the direction of the force}$$

$$\text{amount of energy transferred} = \text{work done}$$

$$\text{change in gravitational potential energy} = \text{weight} \times \text{vertical height difference}$$

$$\text{kinetic energy} = \frac{1}{2} \times \text{mass} \times [\text{velocity}]^2$$

Electric Circuits

$$\text{power} = \text{voltage} \times \text{current}$$

$$\text{resistance} = \frac{\text{voltage}}{\text{current}}$$

$$\frac{\text{voltage across primary coil}}{\text{voltage across secondary coil}} = \frac{\text{number of turns in primary coil}}{\text{number of turns in secondary coil}}$$

Radioactive Materials

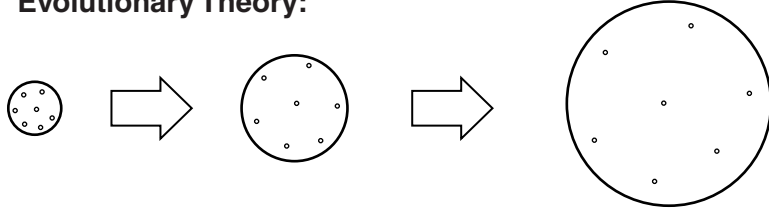
$$\text{energy} = \text{mass} \times [\text{speed of light in a vacuum}]^2$$

Answer **all** the questions.

1 (a) (i) Scientists have found that distant galaxies are moving away from each other.

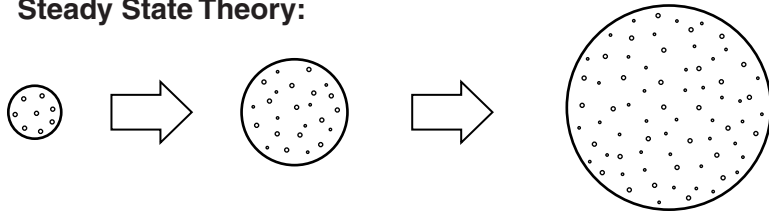
Here are two theories to show what happens as the galaxies move apart.

Evolutionary Theory:



The number of galaxies does not change with time.

Steady State Theory:



New galaxies form in between older galaxies.

Here are some possible observations.

Put ticks (✓) in the boxes to show which observations support each theory.

observations	evolutionary theory	steady state theory	both theories
the number of galaxies increases			
galaxies move away from each other			
the average space between galaxies increases			

[2]

(ii) The Andromeda galaxy is about 2.5 million light-years away from the Earth. It is made up of 1000 billion stars.

How long does it take light to reach the Earth from the Andromeda galaxy?

..... years

[1]

(iii) Only very light elements were formed in the big bang.

Where are heavy elements like nitrogen and iron formed?

..... [1]

(b) Write down two ways of measuring the distance to stars.

1.

2. [2]

(c) Our Sun is a star.

What was the Sun formed from?

Put a tick (✓) in the box next to the correct answer.

a collision between planets

an asteroid exploding

a cloud of dust and gas

a collision between stars

[1]

[Total: 7]

- 2 Earthquakes produce waves that can give us information about the structure of the Earth, including the core, crust and mantle.

Describe what earthquake waves tell us about the structure of the Earth. Include a labelled diagram of the structure of the Earth in your answer.



The quality of written communication will be assessed in your answer.

.....

.....

.....

.....

.....

.....

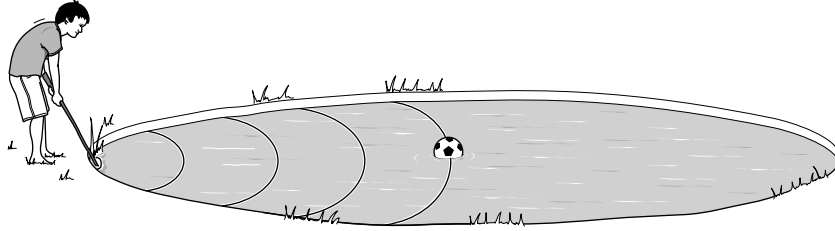
.....

..... [6]

[Total: 6]

3 This question is about the properties of waves.

Bobby has kicked his ball into the middle of a pond.



The ball is 10 m from the edge of the pond.

He tries to move the ball by making waves on the water with a stick.

(a) Bobby hits the edge of the pond with the stick. He makes 6 complete waves in 12 seconds.

He counts exactly 4 complete waves between his stick and the ball.

The waves are all equal.

(i) What is the frequency of Bobby's wave?

Show your working.

frequency = hertz [2]

(ii) What is the wavelength of Bobby's wave?

Show your working.

wavelength = m [2]

(b) (i) Calculate the speed of the wave.

Show your working.

speed = m/s [2]

(ii) Bobby thinks his ball will be carried by the waves to the shore.

Is Bobby right?

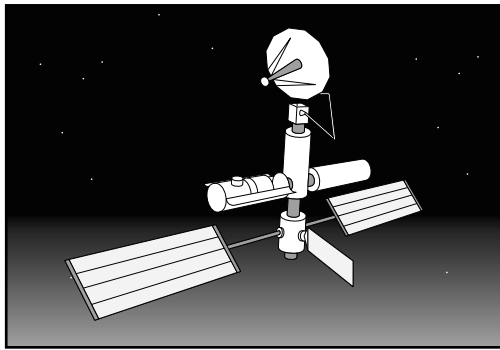
Explain your answer.

.....

 [2]

[Total: 8]

4 Space missions to Venus have to communicate with the Earth.



They do this using radio waves or microwaves.

(a) What is the advantage of using radio waves or microwaves to communicate with Earth?

Put ticks (✓) in the boxes next to the **two** correct answers.

They can be used for listening to music.

They are not absorbed by the Earth's atmosphere.

They are a health hazard.

They can both be used to carry information.

[2]

(b) Information can be transmitted as an analogue signal or a digital signal.

For each statement, decide whether it applies to an **analogue** signal, a **digital** signal or **both**.

Put a tick (✓) in the correct box for each statement.

statement	analogue signal	digital signal	both analogue and digital
The signal carries information coded as a sequence of short pulses.			
The signal varies continuously.			
The signal is a code made up of 1 s and 0 s.			
The signal can be transmitted as an electromagnetic wave.			

[4]

[Total: 6]

5 Venus has a much higher average surface temperature than the Earth.

Venus has an average surface temperature of approximately 480 °C.

The Earth has an average surface temperature of approximately 15 °C.

(a) One reason for the temperature difference is the amount of energy that Venus gets from the Sun.

Why does this cause Venus to have a much higher surface temperature than the Earth?

Put ticks (✓) in the boxes next to the **two** correct statements.

Venus gets more energy because it is closer to the Sun than the Earth is.

The Earth gets more energy because we live there and use the energy.

Venus gets more energy from the Sun because it gets hit by more photons.

Venus gets less energy because it is in space, which is very cold.

[2]

(b) The other reason Venus is so hot is because of its atmosphere.

gas in atmosphere	Earth	Venus
nitrogen	78%	3.5%
oxygen	21%	less than 0.05%
carbon dioxide	less than 0.05%	96%
neon	less than 0.002%	less than 0.002%

The greenhouse effect is much greater on Venus than on Earth.

(i) Which one of the gases in the table is a greenhouse gas?

..... [1]

(ii) Use the data in the table to suggest why Venus is much hotter than the Earth.

.....
.....
.....
.....
.....
..... [3]

(c) Scientists think that there are no green plants on Venus.

Complete the sentences to explain why the scientists think this.

Use words and data from the table to help.

In the light, plants remove from the atmosphere and produce oxygen.

This process is called

It is suggested that there is no oxygen being produced on Venus.

The evidence for this is that the atmosphere contains%

of

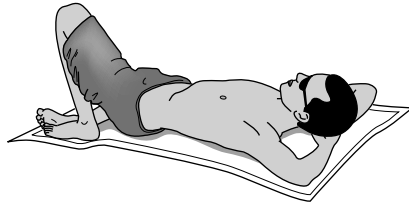
Therefore there are no plants on Venus.

[3]

[Total: 9]

6 Ultraviolet radiation can be harmful.

Sunbathing exposes people to ultraviolet radiation.



Why do people sunbathe in spite of the risks?

Your answer should consider the risks and benefits.



The quality of written communication will be assessed in your answer.

.....

.....

.....

.....

.....

.....

.....

.....

.....

.....

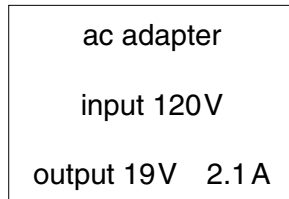
.....

..... [6]

[Total: 6]

7 John buys a new computer in America.

He looks at the power adapter label.



(a) (i) Calculate the power output of the adapter to the computer.

Show your working.

power to computer = watts [3]

(ii) John needs a desk lamp when working on the computer.

The lamp uses a 60W bulb.

Which device costs more to run?

Explain your answer.

.....
..... [1]

(b) John realises that the input voltage is different from the mains voltage in the UK.

What is the mains supply voltage to homes in the UK?

..... volts [1]

[Total: 5]

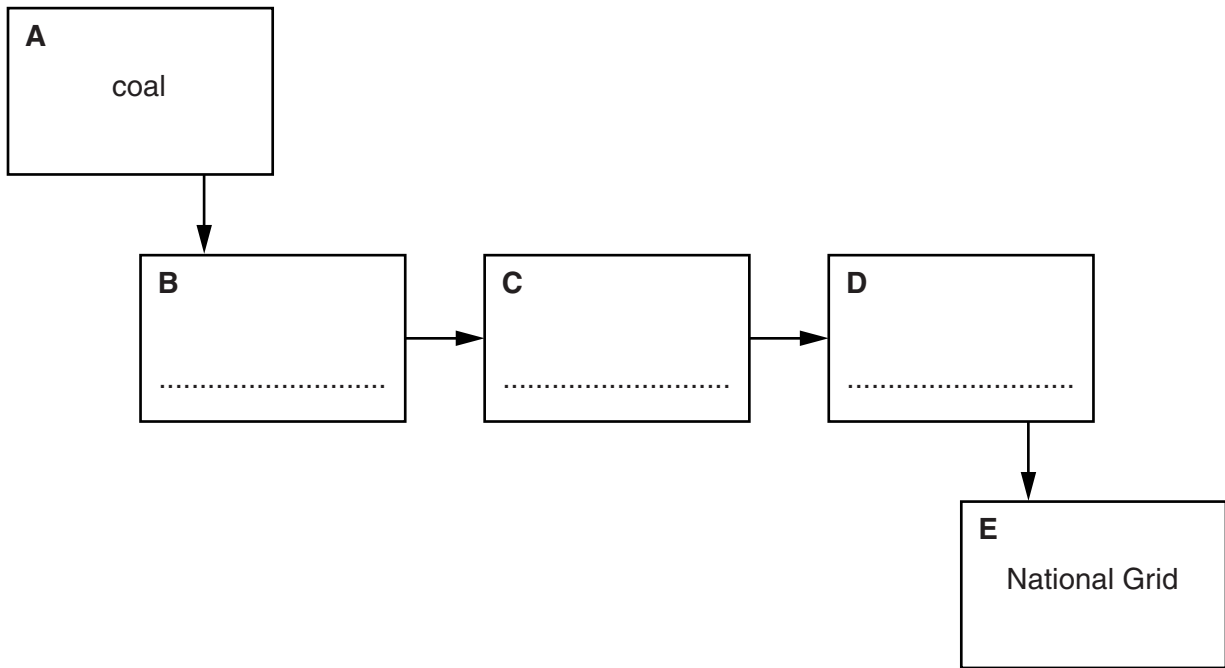
8 Jenny draws a block diagram of a power station.

(a) (i) The block diagram shows how a coal-burning power station works.

Complete the diagram.

Use the words from this list.

furnace generator turbine



[2]

(ii) Jenny has missed out a block.

A boiler is needed to turn water into steam.

Between which two blocks should the boiler be on the diagram?

Put a ring around your answer.

A-B B-C C-D D-E

[1]

(iii) Some power stations do not have a boiler.

Name an energy source for a power station that does not have a boiler.

..... [1]

(b) The table gives some information about three different types of power station.

type of power station	efficiency	cost per kWh in pence	environmental factors
wind	34%	4 to 5.5	may damage local wildlife, eg birds
nuclear	35%	2 to 2.5	produces radioactive waste
gas	38%	2 to 3	produces carbon dioxide

Which type of power station would you recommend building?

Use information from the table to decide.

Explain your choice.

.....

.....

.....

.....

..... [3]

[Total: 7]

15
BLANK PAGE

PLEASE DO NOT WRITE ON THIS PAGE

PLEASE DO NOT WRITE ON THIS PAGE



Copyright Information

OCR is committed to seeking permission to reproduce all third-party content that it uses in its assessment materials. OCR has attempted to identify and contact all copyright holders whose work is used in this paper. To avoid the issue of disclosure of answer-related information to candidates, all copyright acknowledgements are reproduced in the OCR Copyright Acknowledgements Booklet. This is produced for each series of examinations and is freely available to download from our public website (www.ocr.org.uk) after the live examination series.

If OCR has unwittingly failed to correctly acknowledge or clear any third-party content in this assessment material, OCR will be happy to correct its mistake at the earliest possible opportunity.

For queries or further information please contact the Copyright Team, First Floor, 9 Hills Road, Cambridge CB2 1GE.

OCR is part of the Cambridge Assessment Group; Cambridge Assessment is the brand name of University of Cambridge Local Examinations Syndicate (UCLES), which is itself a department of the University of Cambridge.