

Candidate forename		Candidate surname	
-----------------------	--	----------------------	--

Centre number						Candidate number				
------------------	--	--	--	--	--	---------------------	--	--	--	--

**OXFORD CAMBRIDGE AND RSA EXAMINATIONS  
GENERAL CERTIFICATE OF SECONDARY EDUCATION**

**A332/01**

**TWENTY FIRST CENTURY SCIENCE  
PHYSICS A**

**Unit 2: Modules P4 P5 P6 (Foundation Tier)**

**MONDAY 31 JANUARY 2011: Afternoon**

**DURATION: 40 minutes**

**SUITABLE FOR VISUALLY IMPAIRED CANDIDATES**

**Candidates answer on the question paper.  
A calculator may be used for this paper.**

**OCR SUPPLIED MATERIALS:**

**None**

**OTHER MATERIALS REQUIRED:**

**Pencil**

**Ruler (cm/mm)**

**READ INSTRUCTIONS OVERLEAF**

## **INSTRUCTIONS TO CANDIDATES**

- **Write your name, centre number and candidate number in the boxes on the first page. Please write clearly and in capital letters.**
- **Use black ink. Pencil may be used for graphs and diagrams only.**
- **Read each question carefully. Make sure you know what you have to do before starting your answer.**
- **Write your answer to each question in the space provided. Additional paper may be used if necessary but you must clearly show your candidate number, centre number and question number(s).**
- **Answer ALL the questions.**

## **INFORMATION FOR CANDIDATES**

- **The number of marks is given in brackets [ ] at the end of each question or part question.**
- **A list of physics equations is printed on pages 4 and 5.**
- **The total number of marks for this paper is 42.**

**BLANK PAGE**

**QUESTION 1 STARTS ON PAGE 6**

# TWENTY FIRST CENTURY SCIENCE EQUATIONS

## USEFUL RELATIONSHIPS

### EXPLAINING MOTION

$$\text{speed} = \frac{\text{distance travelled}}{\text{time taken}}$$

$$\text{momentum} = \text{mass} \times \text{velocity}$$

$$\text{change of momentum} = \text{resultant force} \times \text{time for which it acts}$$

$$\text{work done by a force} = \text{force} \times \text{distance moved by the force}$$

$$\text{change in energy} = \text{work done}$$

$$\text{change in GPE} = \text{weight} \times \text{vertical height difference}$$

$$\text{kinetic energy} = \frac{1}{2} \times \text{mass} \times [\text{velocity}]^2$$

## **ELECTRIC CIRCUITS**

$$\text{resistance} = \frac{\text{voltage}}{\text{current}}$$

$$\frac{\text{voltage across primary coil}}{\text{voltage across secondary coil}} =$$

$$\frac{\text{number of turns in primary coil}}{\text{number of turns in secondary coil}}$$

$$\text{energy transferred} = \text{power} \times \text{time}$$

$$\text{power} = \text{potential difference} \times \text{current}$$

$$\text{efficiency} = \frac{\text{energy usefully transferred}}{\text{total energy supplied}} \times 100\%$$

## **THE WAVE MODEL OF RADIATION**

$$\text{wave speed} = \text{frequency} \times \text{wavelength}$$

**Answer ALL the questions.**

**1 This question is about a theme park ride.**



**Riders sit in a vehicle.**

**It is pulled up to the top of the tower.**

**It is then dropped from the top of the tower.**

**It falls to the ground.**

**The vehicle is stopped by brakes as it nears the bottom.**

- (a) (i) The gravitational potential energy of the vehicle changes during the ride.

Complete the table to show these changes.

Put a tick (✓) in one box in each row. One row has been done for you.

	GRAVITATIONAL POTENTIAL ENERGY		
	STAYS THE SAME	INCREASES	DECREASES
vehicle waiting at bottom of tower	✓		
vehicle moving up the tower			
vehicle stopped at top of tower			
vehicle falling to bottom of tower			

[2]

- (ii) Work is done against gravity when the vehicle is pulled upwards.

Work is also done against ANOTHER force when the vehicle is pulled upwards.

Put a **ring** around the correct force.

ELECTRIC

FRICTION

MAGNETIC

TWIST

[1]

- (b) The ride is 40 metres high. The vehicle has a weight of 20 000 N.

What is the change in gravitational potential energy of the vehicle when it goes from the bottom of the ride to the top of the ride?

Put a **ring** around the correct answer.

0.5 kJ    50 kJ    200 kJ    500 kJ    800 kJ    800 000 kJ

[1]

- (c) Work is done by gravity as the vehicle falls.

- (i) Assume gravity is the only force on the vehicle.

What is the largest possible kinetic energy of the vehicle at the bottom of the ride?

Put a tick (✓) in the box next to the correct answer.

the same as the change in gravitational potential energy

less than the change in gravitational potential energy

greater than the change in gravitational potential energy

[1]



- (ii) The vehicle does not actually gain this much kinetic energy.

Which of the following statements is the best explanation of this?

Put a tick (✓) in the box next to the correct answer.

A breeze provides extra energy.

There are more people on the ride.

Energy is lost due to friction.


It gets faster as it falls.

[1]

[Total: 6]

**2 Two boats pass each other on a canal.**

**One boat is painted white and the other is painted black.**



**(a) The black boat moves 100 m in 20 s. What is its average speed?**

**Put a ring around the correct answer.**

**0.2 m/s**

**5 m/s**

**20 m/s**

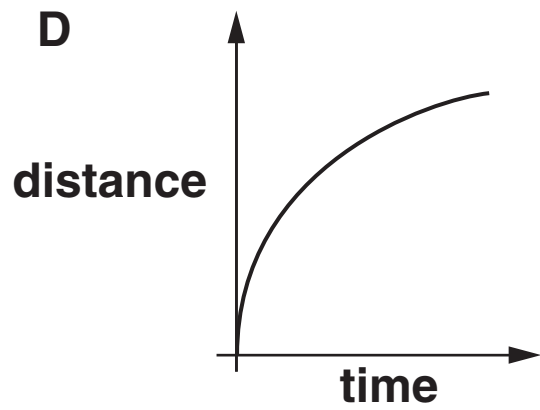
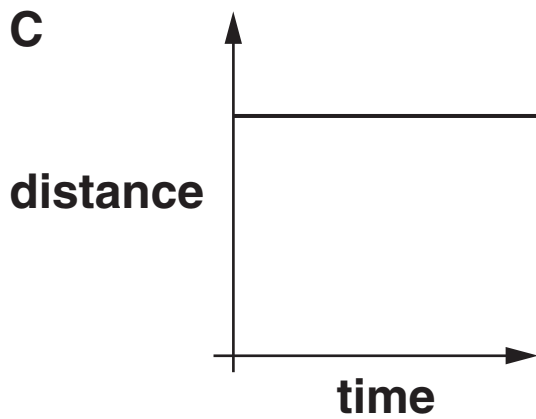
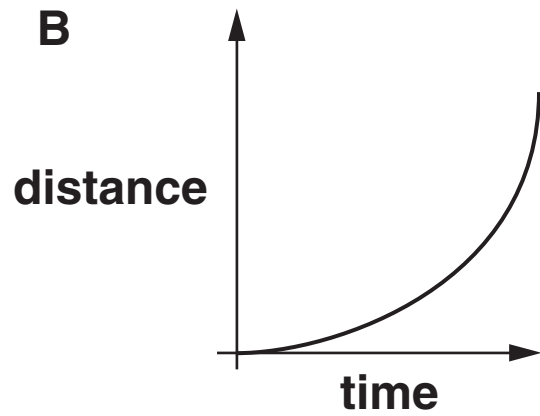
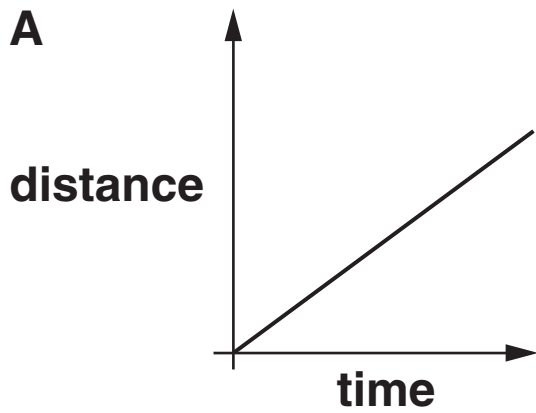
**100 m/s**

**2000 m/s**

**[1]**

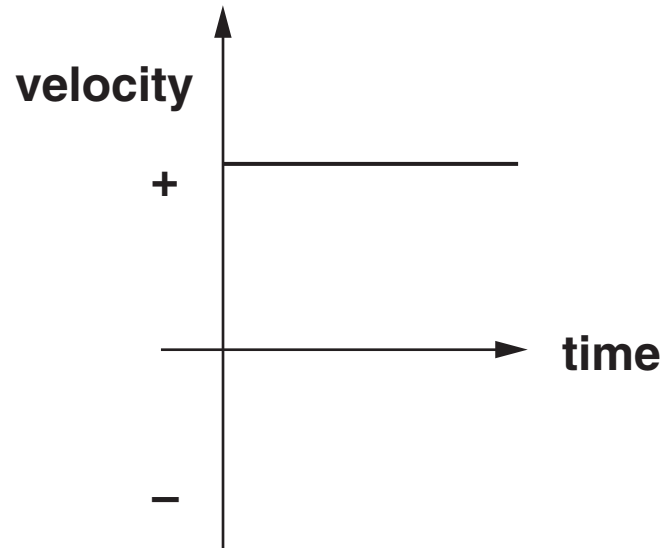
**(b) The black boat is moving at a constant speed.**

**Which distance-time graph, A, B, C or D, shows the motion of the black boat?**



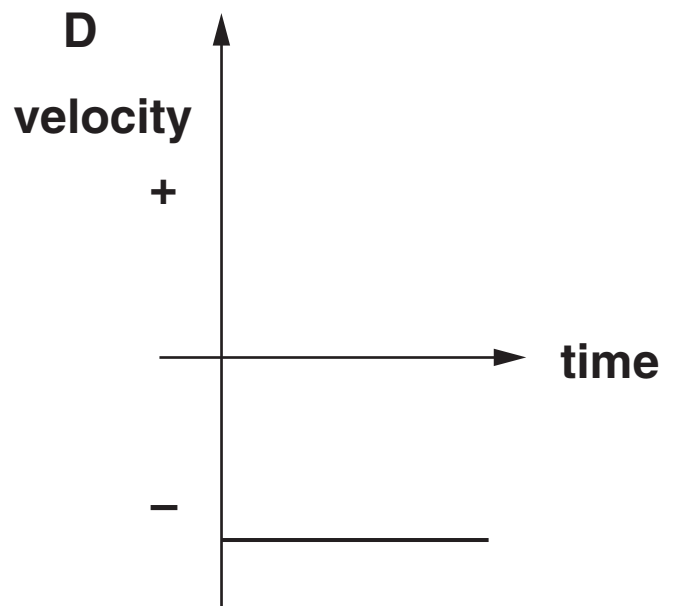
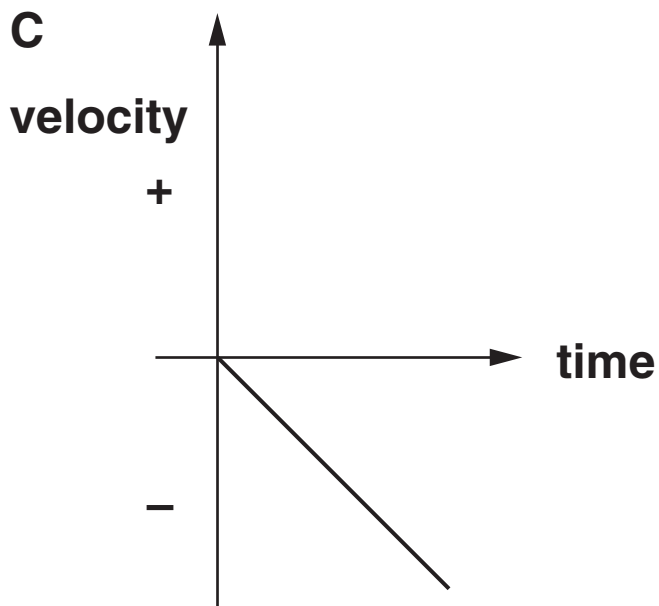
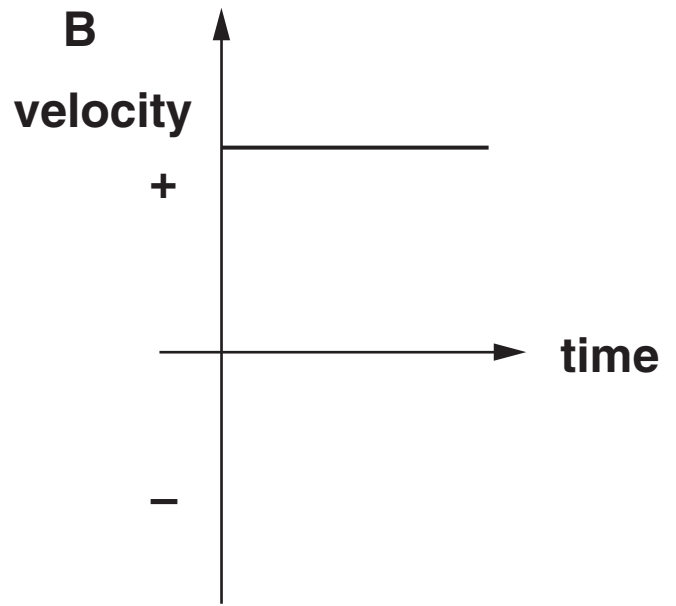
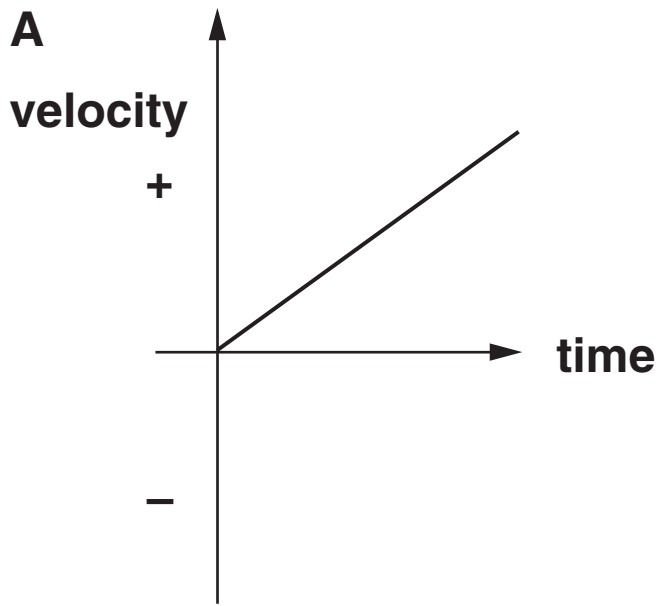
graph \_\_\_\_\_ [1]

**(c) This is the velocity-time graph for the black boat.**



**The white boat is moving at the same speed in the opposite direction.**

**Which graph shows the correct velocity-time graph for the white boat?**



graph \_\_\_\_\_ [1]

[Total: 3]

**3 Cars can be fitted with air bags.**

**Kalo is a scientist who tests car safety.**



**KALO**

**We test the forces on car passengers by using crash test dummies.**

**We investigate how the momentum and force change during a crash.**

**We do tests on cars with airbags and cars without air bags.**

**(a) How would Kalo work out the momentum of the dummy before the crash?**

**Include in your answer**

- what measurements she would take**
- how she would use the measurements.**

---

---

---

---

**[3]**

**(b) (i) Air bags help to prevent injuries in a car crash.**

**Complete the sentences to explain how air bags protect passengers.**

**Put a ring around the correct choice to complete each sentence.**

**Air bags cause the time taken for the impact of passengers to INCREASE / DECREASE / STAY THE SAME.**

**This means the force of the impact of passengers INCREASES / DECREASES / STAYS THE SAME.**

**[2]**

**(ii) What other safety measure is built into cars to prevent injury during a crash?**

**Put a tick (✓) in the box next to the correct answer.**

- |                            |                          |
|----------------------------|--------------------------|
| <b>electric windows</b>    | <input type="checkbox"/> |
| <b>registration plates</b> | <input type="checkbox"/> |
| <b>seat belts</b>          | <input type="checkbox"/> |
| <b>exhaust pipes</b>       | <input type="checkbox"/> |

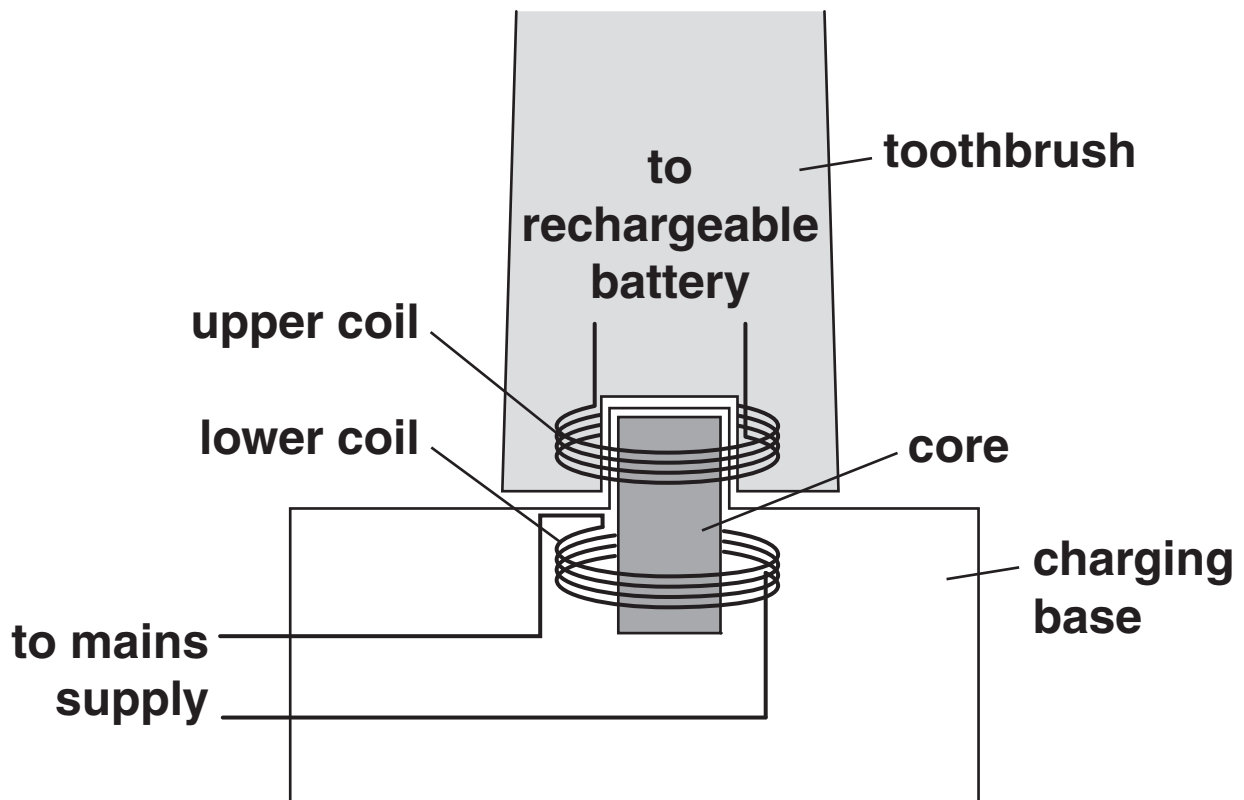
**[1]**

**[Total: 6]**

**4 An electric toothbrush contains a rechargeable battery.**

**It is charged from a separate charging base.**

**The toothbrush and charging base contain coils of wire that act as a transformer.**





- (a) A core passes through both coils of the transformer.

What material is the CORE made from?

Put a **ring** around the correct answer.

COPPER      GLASS      IRON      PLASTIC

[1]

- (b) The charging base is plugged into the mains supply.

- (i) What is the VOLTAGE of the mains supply in the United Kingdom?

Put a **ring** around the correct answer.

1.5V      50V      110V      230V

[1]

- (ii) How is the mains supply also described?

Put a **ring** around the correct answer.

ALTERNATING  
CURRENT

ALTERNATING  
RESISTANCE

DIRECT  
CURRENT

DIRECT  
RESISTANCE

[1]

**(c) Here are five statements about how the battery is charged.**

**They are in the WRONG ORDER.**

**A This causes a current to flow in the upper coil.**

**B The battery charges.**

**C The magnetic field in the core changes.**

**D A voltage is induced in the upper coil.**

**E The mains supply produces a changing current in the lower coil.**

**Fill in the boxes to show the correct order.**

--	--	--	--	--


**[3]**

**[Total: 6]**

**BLANK PAGE**

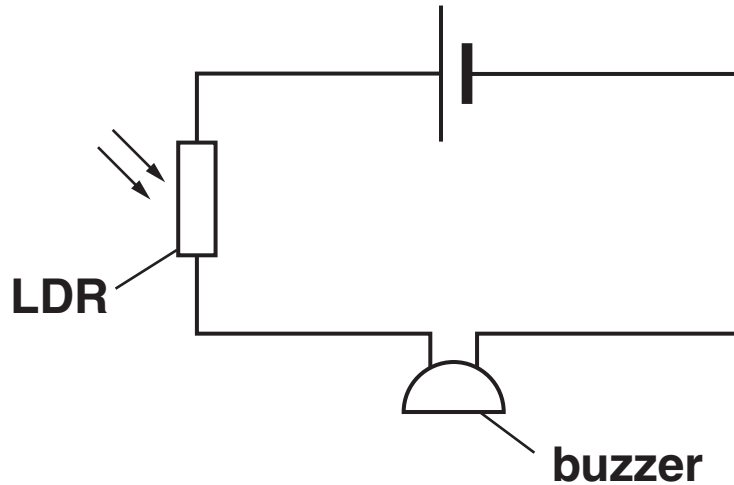
**QUESTION 5 STARTS ON PAGE 20**

**5 Mark is given a biscuit jar that makes a noise when it is opened.**



**He wonders how this works.**

**He makes this circuit to test his ideas.**



**The buzzer makes a noise when a current passes through it.**

**(a) Explain why he uses an LDR in the circuit.**

**Include in your answer**

- **what the LDR detects**
- **what this changes in the LDR and in what way.**

---

---

---

---

**[3]**

**(b) The buzzer needs a voltage of 3V across it in order to work. This gives a current of 0.15 A.**

**What is the resistance of the buzzer?**

**Put a ring around the correct answer.**

**0.05  $\Omega$       0.45  $\Omega$       15  $\Omega$       20  $\Omega$**

**[1]**

**(c) These are statements about Mark's circuit.**

**Put a tick (✓) in the correct box after each statement to show whether the statement is TRUE or FALSE.**

	<b>TRUE</b>	<b>FALSE</b>
<b>The buzzer and LDR are in parallel.</b>	<input type="checkbox"/>	<input type="checkbox"/>
<b>The total resistance of the circuit is higher than the resistance of the buzzer.</b>	<input type="checkbox"/>	<input type="checkbox"/>
<b>The battery pushes charge through both the buzzer and LDR.</b>	<input type="checkbox"/>	<input type="checkbox"/>

**[2]**

**(d) The jar is made of plastic, which does not conduct electricity.**

**The metal wires in the circuit DO conduct electricity.**

**Complete the table to explain this difference.**

**Put a tick (✓) in the correct column for each material.**

<b>MATERIAL</b>	<b>CONTAINS LOTS OF CHARGES FREE TO MOVE</b>	<b>CONTAINS FEW CHARGES FREE TO MOVE</b>
<b>metal</b>		
<b>plastic</b>		

**[1]**

**[Total: 7]**


6 Jeff makes a poster about light.

Unfortunately, ink is splashed on the poster.

The ink covers up some of the words in some of the information boxes on the poster.

Look at the information boxes labelled A, B and C and then answer the questions below.

A Light is an example of a  wave.

B Light is made up of different colours, which always have a different  and from each other.

C All the colours have the same  in a vacuum.

(a) Which word should be on the poster underneath the ink splash in box A?

Put a ring around the correct answer.

LONGITUDINAL                      MAGNETIC  
TRANSVERSE                      WAVELENGTH

[1]



**(b) Which two words should be on the poster underneath the ink splash in box B?**

Put a **ring** around the **TWO** correct answers.

**FREQUENCY**

**SPEED**

**VOLTAGE**

**WAVELENGTH**

[1]

**(c) Which word should be on the poster underneath the ink splash in box C?**

Put a **ring** around the correct answer.

**FREQUENCY**

**SPEED**

**VOLTAGE**

**WAVELENGTH**

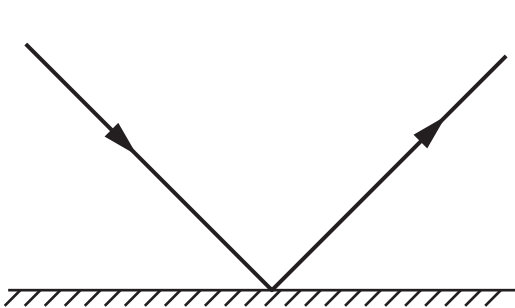
[1]

(d) Jeff reads about how rainbows form.

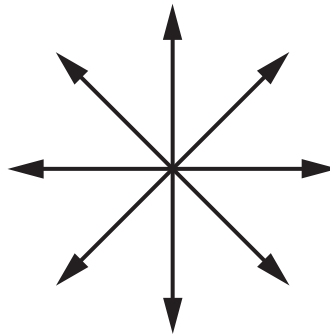
This is what he finds out.

Rainbows form when light from the sun is REFLECTED and REFRACTED by water droplets.

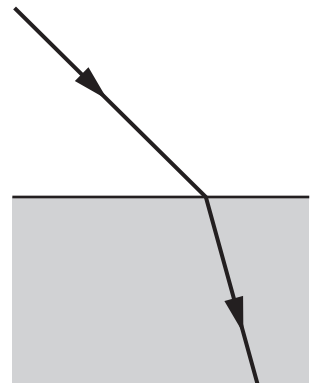
(i) Jeff finds three diagrams.



A



B



C

Which diagram, A, B, or C, shows REFLECTION?

answer \_\_\_\_\_

Which diagram, A, B, or C, shows REFRACTION?

answer \_\_\_\_\_

[1]

- (ii) **White light spreads into different colours when it enters a drop of water.**

**The different colours of light are REFRACTED through different angles.**

**Explain what happens in REFRACTION.**

**Include in your answer**

- **what changes when a wave passes from air to water**
- **what stays the same.**

---

---

---

---

---

**[2]**

**[Total: 6]**

**7 This question is about analogue and digital radio signals.**

**(a) Read the statements about signals.**

**Put a tick (✓) in the correct box after each statement to show whether the statement is TRUE or FALSE.**

	<b>TRUE</b>	<b>FALSE</b>
<b>Analogue and digital signals both carry information.</b>	<input type="checkbox"/>	<input type="checkbox"/>
<b>To carry a signal, waves can vary in amplitude or frequency.</b>	<input type="checkbox"/>	<input type="checkbox"/>
<b>A signal becomes stronger as it travels away from the transmitter.</b>	<input type="checkbox"/>	<input type="checkbox"/>
<b>Only digital signals can be amplified.</b>	<input type="checkbox"/>	<input type="checkbox"/>

**[2]**

**(b) Which of the following is a reason that someone would choose to buy a digital radio instead of an analogue radio?**

**Put a tick (✓) in the box next to the correct answer.**

**Digital signals change frequency as they travel.**

**Digital signals can pick up noise.**

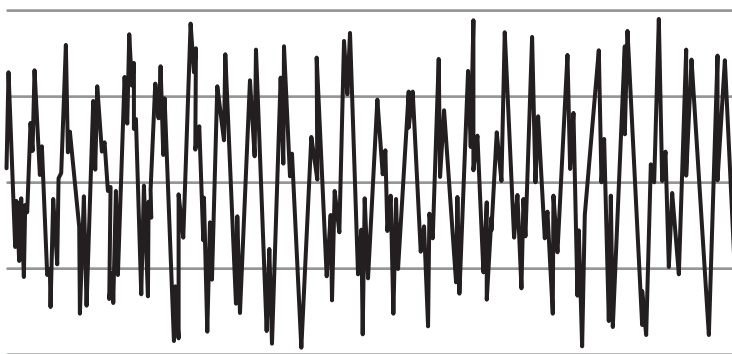
**Digital signals are decoded by the transmitter.**

**Digital signals can transmit information with a higher quality.**

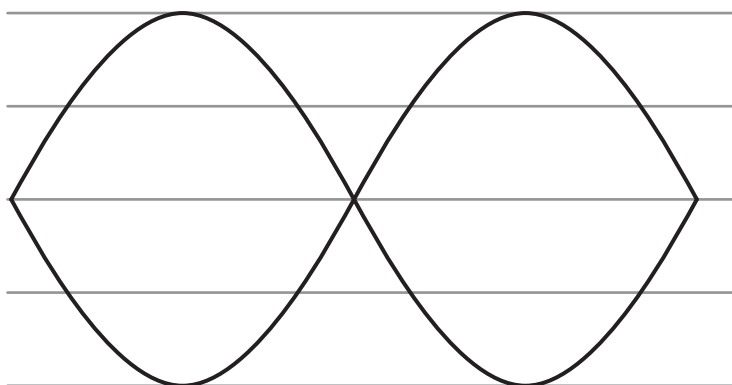
**[1]**

**(c) Diagrams A, B and C show three different types of signal.**

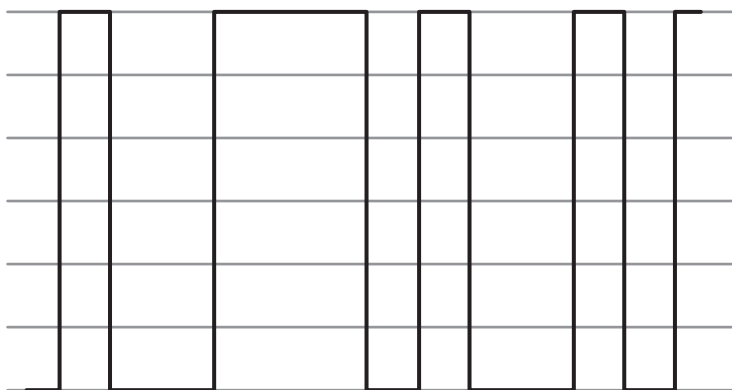
**A**



**B**



**C**



**Which diagram shows a digital signal?**

**answer \_\_\_\_\_ [1]**

**[Total: 4]**

8 Sunni is doing an experiment with a ripple tank.

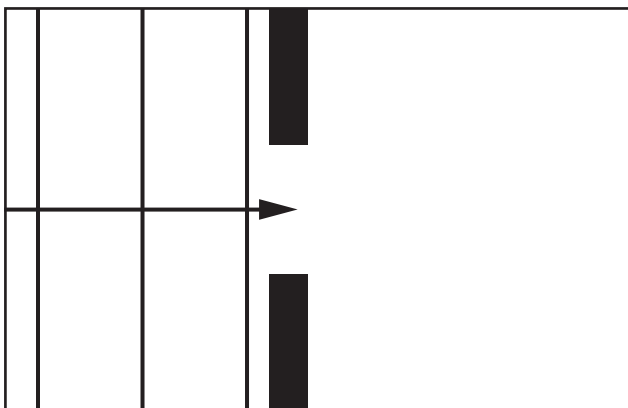
She places a barrier in the tank with a small gap in the middle.

She sends waves with different wavelengths towards the gap and observes what happens.

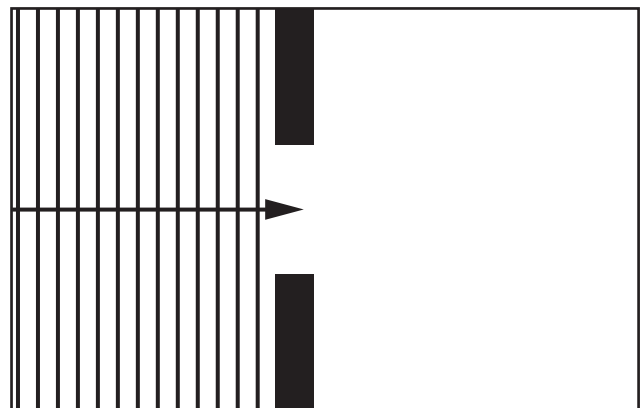
Complete the diagrams A and B and use them to explain Sunni's observations.

Include in your answer

- the wave process involved
- why the waves behave differently in each case.



A



B

---

---

---

---

[4]

[Total: 4]

END OF QUESTION PAPER

## **Copyright Information**

**OCR is committed to seeking permission to reproduce all third-party content that it uses in its assessment materials. OCR has attempted to identify and contact all copyright holders whose work is used in this paper. To avoid the issue of disclosure of answer-related information to candidates, all copyright acknowledgements are reproduced in the OCR Copyright Acknowledgements Booklet. This is produced for each series of examinations and is freely available to download from our public website ([www.ocr.org.uk](http://www.ocr.org.uk)) after the live examination series.**

**If OCR has unwittingly failed to correctly acknowledge or clear any third-party content in this assessment material, OCR will be happy to correct its mistake at the earliest possible opportunity.**

**For queries or further information please contact the Copyright Team, First Floor, 9 Hills Road, Cambridge CB2 1GE.**

**OCR is part of the Cambridge Assessment Group; Cambridge Assessment is the brand name of University of Cambridge Local Examinations Syndicate (UCLES), which is itself a department of the University of Cambridge.**