

Please check the examination details below before entering your candidate information

Candidate surname

Other names

Centre Number

Candidate Number

Pearson Edexcel
Level 1/Level 2 GCSE (9–1)

--	--	--	--	--

--	--	--	--	--

Tuesday 9 June 2020

Afternoon (Time: 1 hour 45 minutes
plus 1 minute to start CD for Section B)

Paper Reference **1MU0/03**

Music
Component 3: Appraising

You must have:
Source Booklet (enclosed)

Total Marks

Instructions

- Use **black** ink or ball-point pen.
- **Fill in the boxes** at the top of this page with your name, centre number and candidate number.
- Answer **all** questions.
- Answer the questions in the spaces provided
– *there may be more space than you need.*
- There are two CDs for the paper. One for Section A and one for Section B.

Information

- The total mark for this paper is 80.
- Section A has 68 marks and Section B has 12 marks.
- The marks for **each** question are shown in brackets
– *use this as a guide as to how much time to spend on each question.*

Advice

- Read each question carefully before you start to answer it.
- Try to answer every question.
- Check your answers if you have time at the end.

Turn over ►

P62554RA

©2020 Pearson Education Ltd.

1/1/1/1/1/1/1




Pearson

DO NOT WRITE IN THIS AREA

DO NOT WRITE IN THIS AREA

DO NOT WRITE IN THIS AREA

BLANK PAGE



DO NOT WRITE IN THIS AREA

DO NOT WRITE IN THIS AREA

DO NOT WRITE IN THIS AREA

SECTION A

Answer ALL questions. Write your answers in the spaces provided.

Some questions must be answered with a cross in a box ☒. If you change your mind about an answer, put a line through the box ☒ and then mark your new answer with a cross ☒.

Afro Celt Sound System: Release (from the album 'Volume 2: Release')

1 Listen to the following extract which will be played **three** times.

(a) Name the first percussion instrument heard. (1)

.....

(b) Identify **two** technological processes used when the first voice enters. (2)

1

2

(c) Describe the melody heard at the **end** of the extract. (2)

.....

.....

(d) Identify **three** features of this extract which are characteristic of electronic dance music. You should refer to the following: harmony, rhythm and metre, and texture. (3)

harmony

.....

rhythm and metre

.....

texture

.....

(Total for Question 1 = 8 marks)



P 6 2 5 5 4 R A 0 3 2 0

S Schwartz: Defying Gravity (from the album of the cast recording of Wicked)





2 Listen to the following extract which will be played **three** times.

(a) Name the instrumental playing technique heard in the timpani at the **start** of the extract.

(1)

(b) Identify the rhythm played by the keyboards and brass which accompanies the spoken dialogue. Put a cross ☒ in the correct box.

(1)

- A** 
- B** 
- C** 
- D** 

(c) Name **two** instruments that accompany the voice at 'You can still be with the wizard'.

(2)

1

2

(d) At the start of the verse Elphaba sings 'Something has changed within me'.

Describe the melody of this phrase.

(2)

.....

.....

DO NOT WRITE IN THIS AREA

DO NOT WRITE IN THIS AREA

DO NOT WRITE IN THIS AREA



DO NOT WRITE IN THIS AREA

DO NOT WRITE IN THIS AREA

DO NOT WRITE IN THIS AREA

(e) During the verse the composer creates a feeling of anticipation.

Give **three** ways he does this, referring to accompaniment, harmony and rhythm.

(3)

accompaniment

.....

harmony

.....

rhythm

.....

(Total for Question 2 = 9 marks)

.....



P 6 2 5 5 4 R A 0 5 2 0

J S Bach: 3rd Movement from Brandenburg Concerto no.5 in D major

3 Listen to the following extract which will be played **three** times.

(a) (i) Name the first solo instrument heard in this extract. (1)

(ii) Describe the rhythm played by this solo instrument before the entry of the next instrument. (1)

(b) Describe the melody played by the harpsichord before the ripieno enters. (3)

(c) Identify the texture when the ripieno enters. Put a cross ☒ in the correct box. (1)

- A** contrapuntal
- B** homophonic
- C** monophonic
- D** unison

(d) Identify **two** features of the harmony which are characteristic of the Baroque period. (2)

- 1
- 2

(Total for Question 3 = 8 marks)

DO NOT WRITE IN THIS AREA

DO NOT WRITE IN THIS AREA

DO NOT WRITE IN THIS AREA



J Williams: Main title/rebel blockade runner (from the soundtrack to Star Wars Episode IV: A New Hope)

4 You will hear two extracts, A and B. You will hear each of them **three times** in the following order: AB, AB, AB.

(a) Identify the percussion instrument heard at the **start** of both extracts. (1)

(b) Identify a percussion instrument heard in extract A but not in extract B. (1)

(c) Complete the table below. (4)

	Extract A	Extract B
Metre		
Texture at the start of the extract		

(d) Extract B accompanies the start of a space battle.
Explain how the composer uses harmony and tempo to establish a battle-like atmosphere. (2)

harmony

tempo

(Total for Question 4 = 8 marks)

DO NOT WRITE IN THIS AREA

DO NOT WRITE IN THIS AREA

DO NOT WRITE IN THIS AREA



Esperanza Spalding: Samba Em Preludio (from the album 'Esperanza')

5 Listen to the following extract which will be played **three** times.

(a) Name the instrument that accompanies the voice at the **start** of the extract. (1)

.....

(b) Describe the tonality at the **start** of the extract. (1)

.....

(c) Describe the vocal melody from when the second instrument enters. (3)

.....

.....

(d) Identify the metre of this extract. Put a cross ☒ in the correct box. (1)

- A** 3/4
- B** 4/4
- C** 9/8
- D** 12/8

(e) This song fuses elements of Brazilian music with elements of jazz.
Describe **three** features of the harmony that are characteristic of jazz. (2)

1

2

3

(Total for Question 5 = 8 marks)

DO NOT WRITE IN THIS AREA

DO NOT WRITE IN THIS AREA

DO NOT WRITE IN THIS AREA



L van Beethoven: 1st Movement from Piano Sonata no.8 in C minor 'Pathétique'

6 Listen to the following extract which will be played **three** times.

(a) This movement is in sonata form.

Name the section played in this extract.

(1)

(b) Beethoven creates a sense of drama at the **start** of the extract.

Give **two** ways he does this by referring to dynamics and texture.

(2)

dynamics

texture

(c) Near the start of the extract there is a change in tempo to *Allegro molto e con brio*.

Describe the melody played at this point.

(3)

(d) Identify the texture at the **end** of the extract.

(1)

(e) Describe **two** features of the instrumental writing that are typical of early Romantic music.

(2)

1

2

(Total for Question 6 = 9 marks)

DO NOT WRITE IN THIS AREA

DO NOT WRITE IN THIS AREA

DO NOT WRITE IN THIS AREA



DO NOT WRITE IN THIS AREA

DO NOT WRITE IN THIS AREA

DO NOT WRITE IN THIS AREA

BLANK PAGE



DO NOT WRITE IN THIS AREA

DO NOT WRITE IN THIS AREA

DO NOT WRITE IN THIS AREA

Musical dictation

7 Listen to the following melody which will be played **four** times.

Before the melody, you will hear the tonic chord followed by the pulse.

Complete the score below by writing in the missing:

(a) melody (5)

(b) rhythm (5)

You may use the manuscript on page 19 for rough work. However you must write your final answer on the stave below.

Moderato

(Total for Question 7 = 10 marks)



Unfamiliar listening

8 Listen to the following extract which will be played **five** times.

A skeleton score is provided below.

The skeleton score is divided into six systems, each with a specific listening question:

- System 1 (Measures 1-6):** Labeled "(a) accompaniment?". It features a complex rhythmic pattern in the right hand with many beamed notes and rests, while the left hand has a simple bass line.
- System 2 (Measures 7-11):** Continues the complex right-hand pattern from the first system.
- System 3 (Measures 12-16):** Labeled "(b) melodic device?". The right hand is mostly silent, while the left hand plays a simple, rhythmic bass line.
- System 4 (Measures 17-22):** Labeled "(c) melody?". The right hand plays a melodic line consisting of eighth-note triplets. The left hand continues with triplets.
- System 5 (Measures 23-26):** Labeled "(d) difference with 17/18?". The right hand features a trill (tr) and a melodic phrase. The left hand continues with triplets.
- System 6 (Measures 27-30):** Labeled "(e) key and cadence?". The right hand has a few notes and rests, while the left hand plays a bass line that concludes the piece.

DO NOT WRITE IN THIS AREA

DO NOT WRITE IN THIS AREA

DO NOT WRITE IN THIS AREA



(a) Describe the accompaniment in the opening four bars. (2)

.....

.....

(b) Name the melodic device in bar 13 beat 2 to bar 16 beat 3. (1)

.....

(c) Describe the melody in bar 17 to bar 20. (2)

.....

(d) Identify the difference between the music of bar 17 to bar 18 and bar 21 to bar 22. (1)

.....

(e) Identify the key and the cadence at bar 29 beat 3 to bar 30 beat 1. (2)

key	
cadence	

(Total for Question 8 = 8 marks)

TOTAL FOR SECTION A = 68 MARKS



SECTION B

Write your answer in the spaces provided.

You will hear extracts from Area of Study 2: Vocal Music; one familiar and one unfamiliar. In order to answer the question you should refer to the Source Booklet.

The familiar extract, Extract A: Queen: Killer Queen (from the album 'Sheer Heart Attack')

The unfamiliar extract, Extract B: Chicago: Hard to Say I'm Sorry (from the album 'Chicago 16')

You will hear both extracts three times in the following order: familiar unfamiliar, familiar unfamiliar, familiar unfamiliar.

- 9 Killer Queen is a playful glam rock song. Hard to Say I'm Sorry is a soft rock ballad in which the singer asks for forgiveness.

Evaluate how effectively Queen and Chicago use **melody, tonality and harmony** to capture the different atmospheres in these two rock songs.

The skeleton scores are provided in the Source Booklet.

You should use your knowledge of musical elements, context and language in your response.

(12)

.....

.....

.....

.....

.....

.....

.....

.....

.....

.....

.....

.....

.....

.....

.....

.....

.....

.....

.....

.....

.....

.....

.....

DO NOT WRITE IN THIS AREA

DO NOT WRITE IN THIS AREA

DO NOT WRITE IN THIS AREA



DO NOT WRITE IN THIS AREA

DO NOT WRITE IN THIS AREA

DO NOT WRITE IN THIS AREA

Handwriting practice area with 20 horizontal dotted lines.



DO NOT WRITE IN THIS AREA

DO NOT WRITE IN THIS AREA

DO NOT WRITE IN THIS AREA

Handwriting practice area with 20 horizontal dotted lines.



DO NOT WRITE IN THIS AREA

DO NOT WRITE IN THIS AREA

DO NOT WRITE IN THIS AREA

Handwriting practice area with 20 sets of horizontal dotted lines.



DO NOT WRITE IN THIS AREA

DO NOT WRITE IN THIS AREA

DO NOT WRITE IN THIS AREA

.....

.....

.....

.....

.....

.....

.....

.....

(Total for Question 9 = 12 marks)

TOTAL FOR SECTION B = 12 MARKS
TOTAL FOR PAPER = 80 MARKS



You may use this manuscript paper for rough work for Question 7.

DO NOT WRITE IN THIS AREA

DO NOT WRITE IN THIS AREA

DO NOT WRITE IN THIS AREA



DO NOT WRITE IN THIS AREA

DO NOT WRITE IN THIS AREA

DO NOT WRITE IN THIS AREA

BLANK PAGE

Every effort has been made to contact copyright holders to obtain their permission for the use of copyright material. Pearson Education Ltd. will, if notified, be happy to rectify any errors or omissions and include any such rectifications in future editions.

