

**GENERAL CERTIFICATE OF SECONDARY EDUCATION  
MATHEMATICS C  
MODULE M1 – SECTION A  
SPECIMEN**

**B271/A**

Candidates answer on the question paper.

Time: 30 minutes

Additional Materials:  
Geometrical instruments  
Tracing paper (optional)



Candidate  
Name

Centre  
Number

--	--	--	--	--

Candidate  
Number

--	--	--	--	--

**INSTRUCTIONS TO CANDIDATES**

- Write your name, centre number and candidate number in the boxes above.
- Answer **all** the questions.
- Use blue or black ink. Pencil may be used for graphs and diagrams only.
- Read each question carefully and make sure you know what you have to do before starting your answer.
- In many questions marks will be given for a correct method even if the answer is incorrect.
- Do **not** write in the bar code.
- Do **not** write outside the box bordering each page.
- WRITE YOUR ANSWER TO EACH QUESTION IN THE SPACE PROVIDED. ANSWERS WRITTEN ELSEWHERE WILL NOT BE MARKED.

**INFORMATION FOR CANDIDATES**

- The number of marks is given in brackets [ ] at the end of each question or part question.
- The total number of marks for this section is 25.



**WARNING** You are not allowed to use a calculator in this paper.

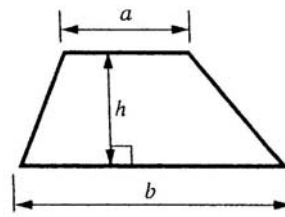
For Examiner's Use

Section A

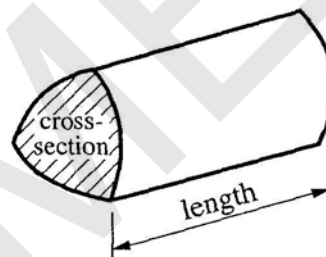
This document consists of **8** printed pages.

2  
FORMULAE SHEET

**Area of trapezium** =  $\frac{1}{2}(a+b)h$



**Volume of prism** = (area of cross-section) x length



1 Find the missing numbers.

(a)  $36 - \boxed{?} = 20$

(b)  $24 \div \boxed{?} = 4$

(c)  $\boxed{?} + 18 = 26$

(d)  $8 \times \boxed{?} = 40$

(a) \_\_\_\_\_ [1]

(b) \_\_\_\_\_ [1]

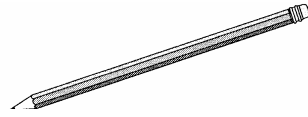
(c) \_\_\_\_\_ [1]

(d) \_\_\_\_\_ [1]

[Turn over

- 2 (a) A pencil is 68 mm long.

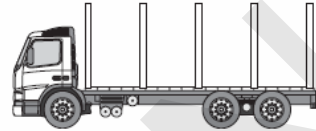
How many centimetres is 68 mm?



(a) \_\_\_\_\_ cm [1]

- (b) A lorry is 9.3 metres long.

How many centimetres is 9.3 metres?



cm

(b) \_\_\_\_\_ [1]

2

- 3 Complete each sentence using two different numbers from the list.  
You can use a number in more than one answer.

50	52	54	56	58	60	
49	51	53	55	57	59	61

(a) \_\_\_\_\_ and \_\_\_\_\_ are odd numbers. [1]

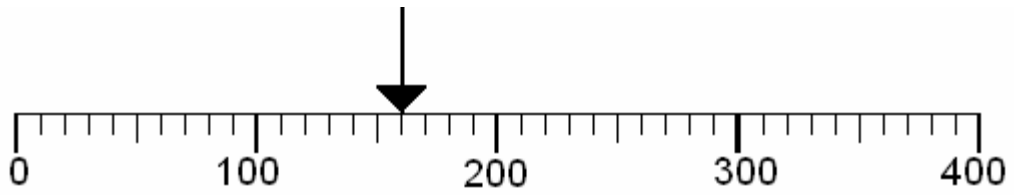
(b) \_\_\_\_\_ and \_\_\_\_\_ are divisible by 5. [1]

(c) \_\_\_\_\_ and \_\_\_\_\_ are divisible by 10. [1]

3

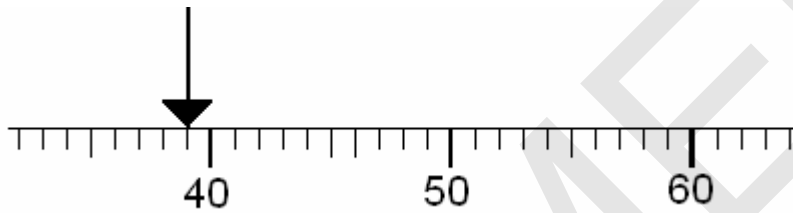
4 What number does each arrow point to?

(a)



(a) \_\_\_\_\_ [1]

(b)

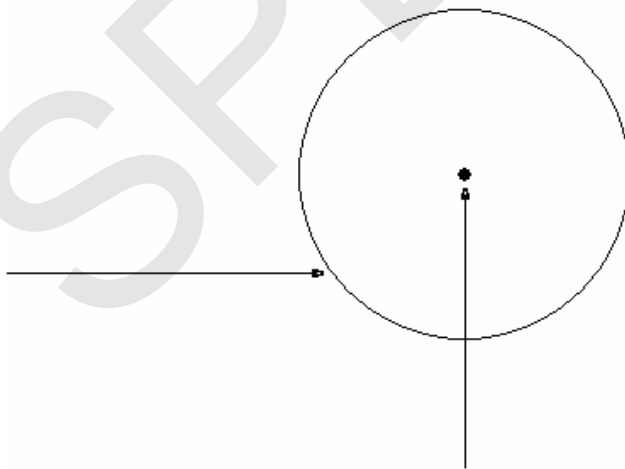


(b) \_\_\_\_\_ [1]

2

5 Name the parts the arrows point to on the circle below.  
Choose from this list.

**centre circumference diameter radius**



[2]

2

[Turn over

- 6 Charles is going to Stratford on the Shakespeare Express steam train.

<b>Snow Hill</b>	<b>10 35</b>
<b>Tyseley</b>	<b>10 50</b>
<b>Stratford</b>	<b>11 35</b>



- (a) Charles gets the 10 50 train from Tyseley.  
He gets to Stratford at 11 35.

How long does his journey take?

(a) \_\_\_\_\_ minutes [1]

- (b) His train back leaves Stratford at 18 05.  
The journey from Stratford takes 40 minutes.

At what time does he get back to Tyseley?

(b) \_\_\_\_\_ [1]

- (c) Charles buys two adult tickets for £15 each and four child tickets for £5 each.

How much do the tickets cost altogether?


(c) £ \_\_\_\_\_ [3]

- (d) The train leaves Snow Hill at 10 35 and gets to Stratford at 11 35.  
Coming back, the train leaves Stratford at 18 05 and gets to Snow Hill at 18 55.

Which journey takes less time, and by how many minutes?

The train journey  
that leaves \_\_\_\_\_ is shorter by \_\_\_\_\_ minutes. [2]

7	
---	--



Sara's CD player holds 10 CDs.

She loads these CDs: **5** rock CDs  
**2** dance CDs  
**3** rap CDs

The player selects the CDs at random.

(a)

likely	evens	impossible
	certain	unlikely

Choose the best word to complete each of these sentences.

It is \_\_\_\_\_ that the first CD will be rock. [1]

It is \_\_\_\_\_ that the first CD will be rap. [1]

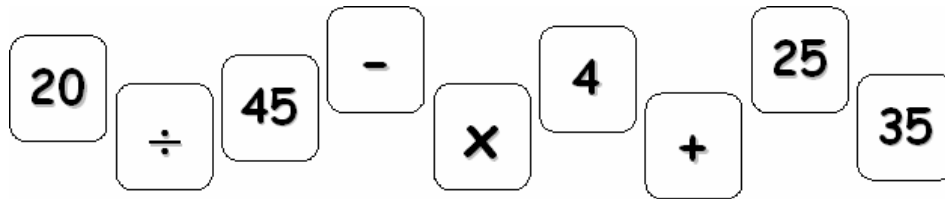
(b) Complete this sentence.

The first CD is more likely to be rap than \_\_\_\_\_ [1]

3
---

[Turn over

8



Use these cards to complete the following.

Each card may be used in more than one answer.

(a)    = 70

[1]

(b)    = 5

[1]

2	
---	--

**Section A Total [25]**

Permission to reproduce items where third-party owned material protected by copyright is included has been sought and cleared where possible. Every reasonable effort has been made by the publisher (OCR) to trace copyright holders, but if any items requiring clearance have unwittingly been included, the publisher will be pleased to make amends at the earliest possible opportunity.

OCR is part of the Cambridge Assessment Group. Cambridge Assessment is the brand name of University of Cambridge Local Examinations Syndicate (UCLES), which is itself a department of the University of Cambridge.



The maximum mark for this paper is 25.

**SPECIMEN**

1	a) 16 b) 6 c) 8 d) 5	W1 W1 W1 W1 4		
2	b) 6.8 c) 730	W1 W1 2		accept 7 m 30 cm soi
3	a) Any 2 of the odd numbers b) 50, 55, 60 c) 50, 60	W1 W1 W1 3		both any two of the three both – if total 0 scored, <b>SC2</b> for only 1 given in each
4	a) 160 b) 39	W1 W1 2		
5	correctly indicated circumference and centre	1 1 2		
6	a) 45 b) 18 45 c) 50 d) Stratford (accept 1805); 10	W1 W1 W3 W2 7	M1 M1 <i>or</i> W1	accept equivalent times throughout 2 x 15 (=30) oe 4 x 5 (=20) oe correct addition of <i>their</i> 30, <i>their</i> 20 60 <i>or</i> 50 seen

7	a) b)	evens impossible Dance	W1 W1 W1 2		
8	a) b)	25 + 45 25 – 5	W1 W1 2		accept reversed <i>or</i> 35 + 35 accept (b), (c) reversed
<b>Total for Section A</b>			<b>25</b>		

SPECIMEN

**Assessment Objectives Grid**

<b>Question</b>	<b>AO2</b>	<b>AO3</b>	<b>AO4</b>	<b>Total</b>
<b>1</b>	4			<b>4</b>
<b>2</b>		2		<b>2</b>
<b>3</b>	3			<b>3</b>
<b>4</b>		2		<b>2</b>
<b>5</b>		2		<b>2</b>
<b>6</b>	7			<b>7</b>
<b>7</b>			3	<b>3</b>
<b>8</b>	2			<b>2</b>
<b>Totals</b>	<b>16</b>	<b>6</b>	<b>3</b>	<b>25</b>

SPECIMEN