

Wednesday 11 January 2012 – Morning
GCSE MATHEMATICS C (GRADUATED ASSESSMENT)

B282A Terminal Paper – Section A (Higher Tier)

Candidates answer on the Question Paper.

OCR supplied materials:
None

- Other materials required:**
- Geometrical instruments
 - Tracing paper (optional)
 - Pie chart scale (optional)

Duration: 1 hour



Candidate forename		Candidate surname	
--------------------	--	-------------------	--

Centre number							Candidate number				
---------------	--	--	--	--	--	--	------------------	--	--	--	--

INSTRUCTIONS TO CANDIDATES

- Write your name, centre number and candidate number in the boxes above. Please write clearly and in capital letters.
- Use black ink. HB pencil may be used for graphs and diagrams only.
- Answer **all** the questions.
- Read each question carefully. Make sure you know what you have to do before starting your answer.
- Show your working. Marks may be given for a correct method even if the answer is incorrect.
- Write your answer to each question in the space provided. Additional paper may be used if necessary but you must clearly show your candidate number, centre number and question number(s).
- Do **not** write in the bar codes.

INFORMATION FOR CANDIDATES

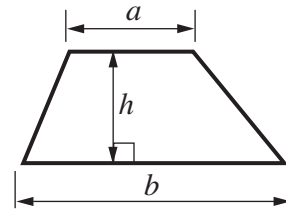
- The number of marks is given in brackets [] at the end of each question or part question.
- The total number of marks for this Section is **50**.
- This document consists of **12** pages. Any blank pages are indicated.

WARNING

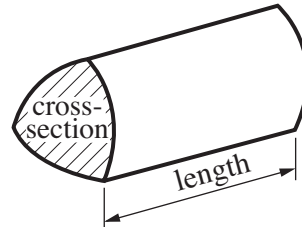
No calculator can be used for Section A of this paper

Formulae Sheet

Area of trapezium = $\frac{1}{2}(a + b)h$



Volume of prism = (area of cross-section) \times length

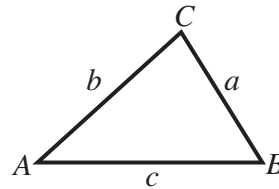


In any triangle ABC

Sine rule $\frac{a}{\sin A} = \frac{b}{\sin B} = \frac{c}{\sin C}$

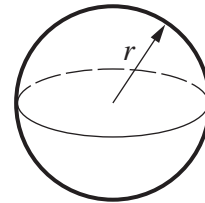
Cosine rule $a^2 = b^2 + c^2 - 2bc \cos A$

Area of triangle = $\frac{1}{2} ab \sin C$



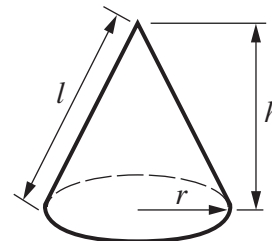
Volume of sphere = $\frac{4}{3} \pi r^3$

Surface area of sphere = $4\pi r^2$



Volume of cone = $\frac{1}{3} \pi r^2 h$

Curved surface area of cone = $\pi r l$



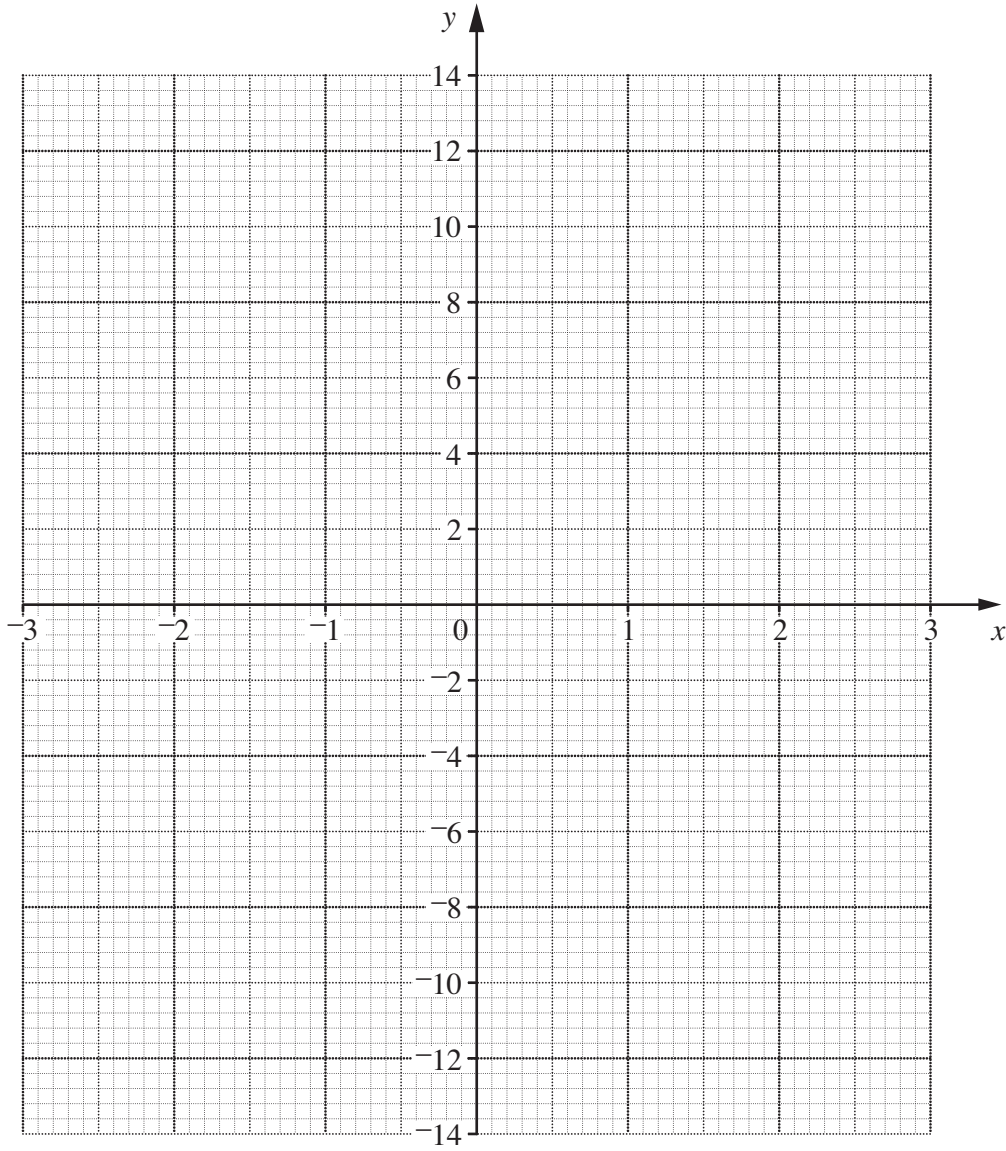
The Quadratic Equation

The solutions of $ax^2 + bx + c = 0$, where $a \neq 0$, are given by

$$x = \frac{-b \pm \sqrt{b^2 - 4ac}}{2a}$$

PLEASE DO NOT WRITE ON THIS PAGE

1 (a) Draw the graph of $y = 4x - 1$ for values of x between -3 and 3 .



[3]

(b) Use your graph to solve $4x - 1 = 5$.

(b) [1]

2 Work out.

(a) $\frac{4}{5} - \frac{2}{3}$

(a) [2]

(b) $\frac{1}{3} \div \frac{3}{4}$

(b) [2]

3 The n th term of a sequence is $4n + 1$.

(a) Work out the first three terms of the sequence.

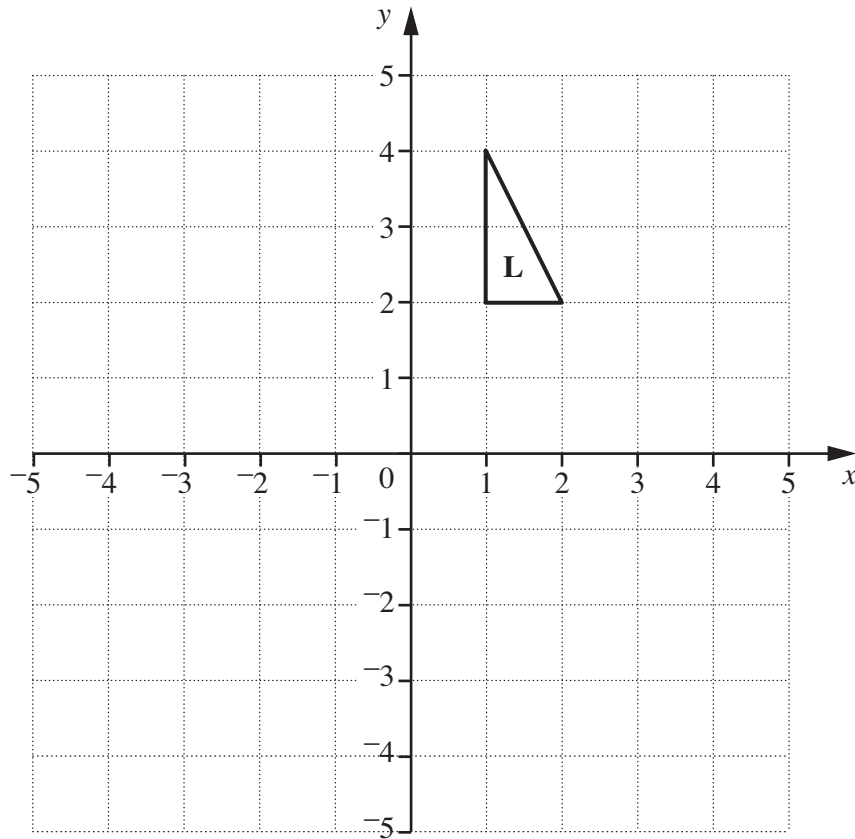
(a) [2]

(b) Is 32 a term in this sequence?
Give a reason for your answer.

..... because

..... [1]

4 Triangle **L** is drawn on a coordinate grid.

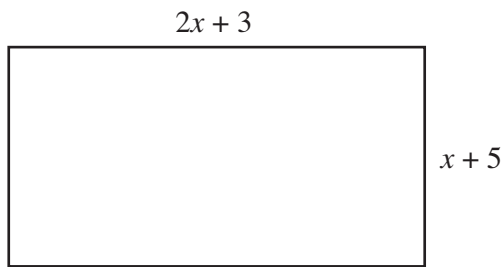


- (a) Reflect triangle **L** in the line $x = 0$.
Label the image **M**. [2]
- (b) Rotate **L** through 90° clockwise about $(0, 1)$.
Label the image **N**. [2]
- (c) Which type of single transformation maps **M** onto **N**?
Choose from this list.

Enlargement Reflection Rotation Translation

(c) [1]

5 All lengths in this question are in centimetres.



**Not to
scale**

The length of this rectangle is $2x + 3$ and the width is $x + 5$.
The perimeter of the rectangle is 43 cm.

(a) Show that $6x + 16 = 43$.

.....

.....

.....

..... [1]

(b) Solve the equation $6x + 16 = 43$ to find the value of x .
Use this value to find the length and width of the rectangle.

(b) $x =$

length of rectangle = cm

width of rectangle = cm [4]

6 Mia is playing a game with a red and a blue six-sided dice.

(a) She throws the red dice 200 times. The table shows the distribution of her scores.

Score	1	2	3	4	5	6
Frequency	36	16	30	38	50	30

(i) Use this distribution to estimate the probability of a score of 5 on the red dice. Write your answer as a fraction in its simplest form.

(a)(i) [2]

(ii) Explain why it is reasonable to assume that the red dice is biased.

..... [1]

(b) Mia tests the blue dice and finds that it is **not** biased. She throws the red dice and the blue dice together.

Work out an estimate of the probability that she scores 5 on the red **and** 5 on the blue dice.

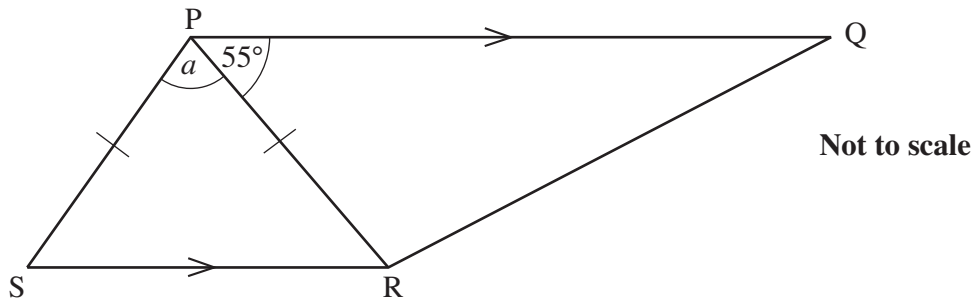
(b) [2]

7 Solve this inequality.

$$\frac{5x+4}{2} > x+11$$

.....[4]

8 PQRS is a trapezium.
 PQ is parallel to SR.
 PS = PR and angle QPR = 55°.



Calculate angle a , giving reasons for your answer.

$a = \dots\dots\dots^\circ$ because

.....

.....

.....

.....

.....[3]

9 This table shows the volumes of the five Great Lakes in North America.

Lake	Volume (cubic metres)
Erie	4.8×10^{11}
Huron	3.5×10^{12}
Michigan	4.9×10^{12}
Ontario	1.6×10^{12}
Superior	1.2×10^{13}

(a) Which lake has the largest volume?

(a) [1]

(b) What is the total volume of Lake Erie and Lake Ontario?
Give your answer in standard form.

(b) cubic metres [2]

(c) Another lake in the area, Lake St Clair, has a volume of 3.4×10^9 cubic metres.

Roughly how many times as large as the volume of Lake St Clair is the volume of Lake Huron?

(c) [1]

10 (a) Rearrange this equation to make y the subject.

$$x(y - 6) = 2 - 5y$$

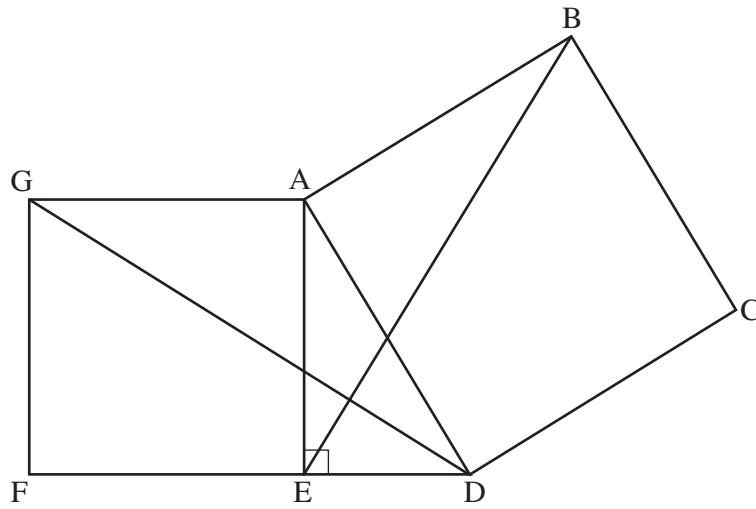
(a) [4]

(b) Solve by factorising.

$$2x^2 - 9x - 5 = 0$$

(b) [3]

11 Squares ABCD and AEFG are drawn on the sides of the right-angled triangle ADE.

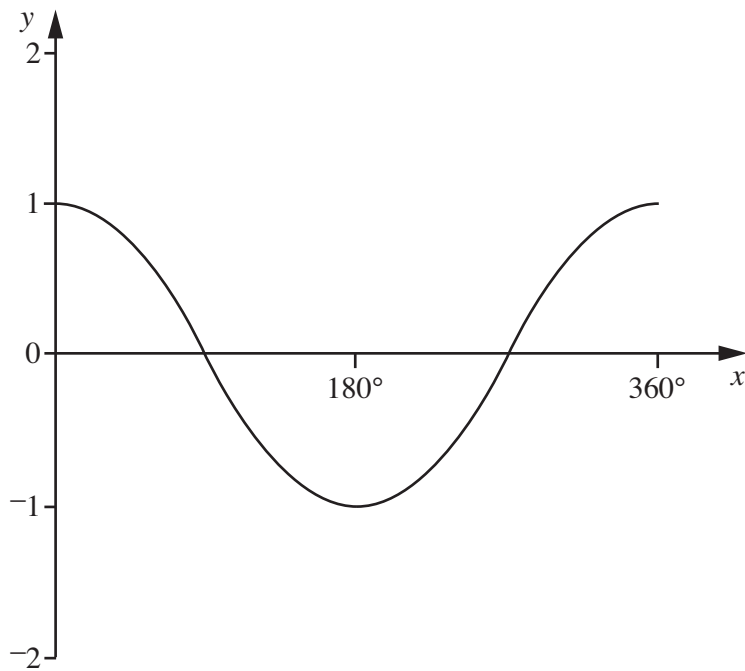


Prove that triangles GAD and EAB are congruent.

[3]

TURN OVER FOR QUESTION 12

12 The graph of $y = \cos x$ is sketched below for $0^\circ \leq x \leq 360^\circ$.



(a) Given that $\cos 70^\circ = 0.34$, find $\cos 110^\circ$.

(a) [1]

(b) Using the same axes, sketch the graph of $y = \cos 2x$.

[2]

Copyright Information

OCR is committed to seeking permission to reproduce all third-party content that it uses in its assessment materials. OCR has attempted to identify and contact all copyright holders whose work is used in this paper. To avoid the issue of disclosure of answer-related information to candidates, all copyright acknowledgements are reproduced in the OCR Copyright Acknowledgements Booklet. This is produced for each series of examinations and is freely available to download from our public website (www.ocr.org.uk) after the live examination series.

If OCR has unwittingly failed to correctly acknowledge or clear any third-party content in this assessment material, OCR will be happy to correct its mistake at the earliest possible opportunity.

For queries or further information please contact the Copyright Team, First Floor, 9 Hills Road, Cambridge CB2 1GE.

OCR is part of the Cambridge Assessment Group; Cambridge Assessment is the brand name of University of Cambridge Local Examinations Syndicate (UCLES), which is itself a department of the University of Cambridge.