

Monday 16 January 2012 – Morning

GCSE MATHEMATICS C (GRADUATED ASSESSMENT)

B279A MODULE M9 – SECTION A

* B 2 7 9 A *


Candidates answer on the Question Paper.

OCR supplied materials:
None

Other materials required:

- Geometrical instruments
- Tracing paper (optional)

Duration: 30 minutes



Candidate forename		Candidate surname	
--------------------	--	-------------------	--

Centre number						Candidate number				
---------------	--	--	--	--	--	------------------	--	--	--	--


INSTRUCTIONS TO CANDIDATES

- Write your name, centre number and candidate number in the boxes above. Please write clearly and in capital letters.
- Use black ink. HB pencil may be used for graphs and diagrams only.
- Answer **all** the questions.
- Read each question carefully. Make sure you know what you have to do before starting your answer.
- Show your working. Marks may be given for a correct method even if the answer is incorrect.
- Write your answer to each question in the space provided. Additional paper may be used if necessary but you must clearly show your candidate number, centre number and question number(s).
- Do **not** write in the bar codes.

INFORMATION FOR CANDIDATES

- The number of marks is given in brackets [] at the end of each question or part question.
- The total number of marks for this Section is **25**.
- This document consists of **8** pages. Any blank pages are indicated.

WARNING

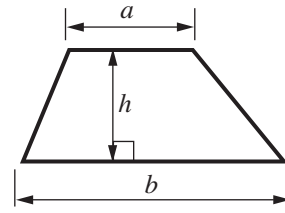


No calculator can be used for Section A of this paper

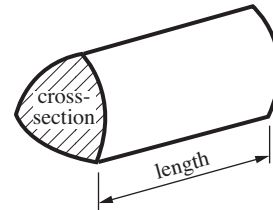
This paper has been pre modified for carrier language

Formulae Sheet

Area of trapezium = $\frac{1}{2}(a + b)h$



Volume of prism = (area of cross-section) \times length

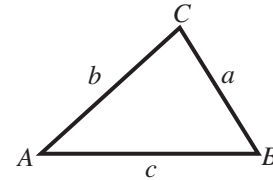


In any triangle ABC

Sine rule $\frac{a}{\sin A} = \frac{b}{\sin B} = \frac{c}{\sin C}$

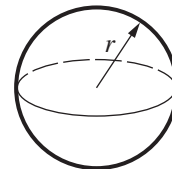
Cosine rule $a^2 = b^2 + c^2 - 2bc \cos A$

Area of triangle = $\frac{1}{2}ab \sin C$



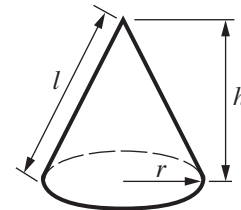
Volume of sphere = $\frac{4}{3}\pi r^3$

Surface area of sphere = $4\pi r^2$



Volume of cone = $\frac{1}{3}\pi r^2 h$

Curved surface area of cone = $\pi r l$



The Quadratic Equation

The solutions of $ax^2 + bx + c = 0$, where $a \neq 0$, are given by

$$x = \frac{-b \pm \sqrt{(b^2 - 4ac)}}{2a}$$

PLEASE DO NOT WRITE ON THIS PAGE

- 1 A gift shop conducted a survey of its customers one Wednesday afternoon. The results gave the following probabilities about the next customer. Assume that gender and age are independent.

Gender	Probability
Male	0.3
Female	0.7

Age	Probability
Under 16	0.15
16 to 30	0.1
31 to 60	0.35
Over 60	0.4

- (a) What is the probability that the next customer will be over 30 years old?

(a) [1]

- (b) What is the probability that the next customer will be a female aged over 60?

(b) [2]

- 2 Estimate.

$$\sqrt{\frac{412 \times 2100}{499}}$$

..... [2]

3 (a) Expand and simplify.

$$(2x + 3)(3x - 2)$$

(a)..... [3]

(b) Factorise.

$$4x^2 - 25$$

(b)..... [2]

4 Write as a single power of 5.

(a) $\frac{5^2 \times 5^0}{5^{-4}}$

(a)..... [2]

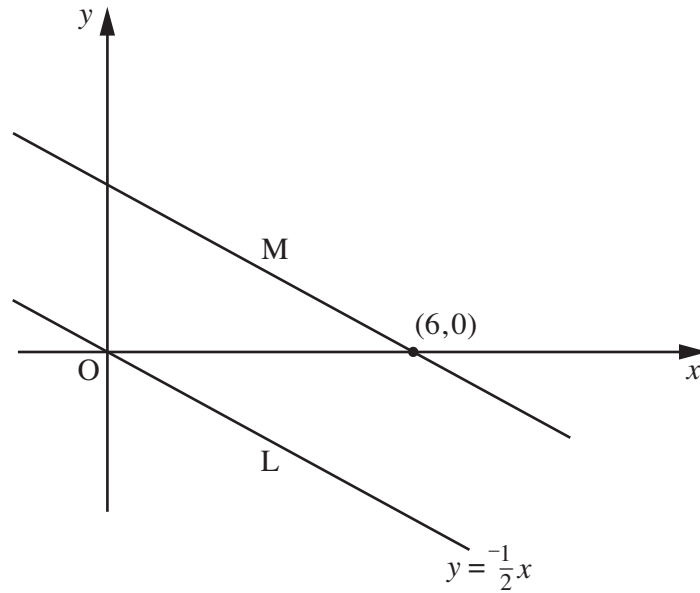
(b) $\frac{(\sqrt{5})^3}{5}$

(b)..... [2]

5 This sketch graph shows two parallel lines, L and M.

Line L has the equation $y = -\frac{1}{2}x$.

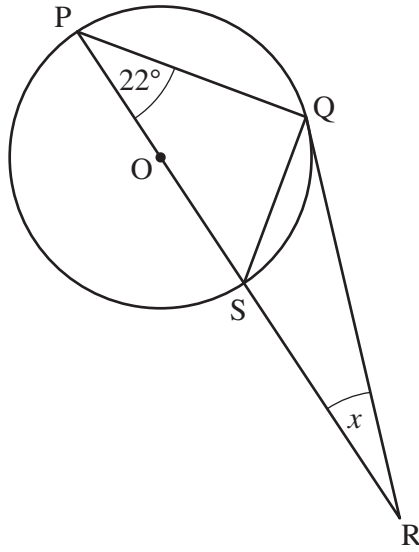
Line M intersects the x -axis at $(6, 0)$.



Find the equation of line M.

..... [3]

- 6 RQ is a tangent to the circle, centre O.
 POSR is a straight line.
 Angle QPS = 22° .



Not to scale

Calculate angle x .
 Give a geometrical reason for each step of your working.

$$x = \dots\dots\dots^\circ \quad [4]$$

TURN OVER FOR QUESTION 7

7 This table gives some corresponding values for x and y .

x	16	25
y	24	30

(a) Given that $y \propto \sqrt{x}$, find the equation connecting x and y .

(a)..... [2]

(b) Calculate the value of x when $y = 120$.

(b)..... [2]



Copyright Information

OCR is committed to seeking permission to reproduce all third-party content that it uses in its assessment materials. OCR has attempted to identify and contact all copyright holders whose work is used in this paper. To avoid the issue of disclosure of answer-related information to candidates, all copyright acknowledgements are reproduced in the OCR Copyright Acknowledgements Booklet. This is produced for each series of examinations and is freely available to download from our public website (www.ocr.org.uk) after the live examination series.

If OCR has unwittingly failed to correctly acknowledge or clear any third-party content in this assessment material, OCR will be happy to correct its mistake at the earliest possible opportunity.

For queries or further information please contact the Copyright Team, First Floor, 9 Hills Road, Cambridge CB2 1GE.

OCR is part of the Cambridge Assessment Group; Cambridge Assessment is the brand name of University of Cambridge Local Examinations Syndicate (UCLES), which is itself a department of the University of Cambridge.