



M3

**GENERAL CERTIFICATE OF SECONDARY EDUCATION
MATHEMATICS C (GRADUATED ASSESSMENT)
MODULE M3 – SECTION A**

B273A



Candidates answer on the question paper.

OCR supplied materials:
None

Other materials required:

- Geometrical instruments
- Tracing paper (optional)

**Tuesday 1 March 2011
Morning**

Duration: 30 minutes



Candidate forename		Candidate surname	
--------------------	--	-------------------	--

Centre number						Candidate number				
---------------	--	--	--	--	--	------------------	--	--	--	--

MODIFIED LANGUAGE

INSTRUCTIONS TO CANDIDATES

- Write your name, centre number and candidate number in the boxes above. Please write clearly and in capital letters.
- Use black ink. Pencil may be used for graphs and diagrams only.
- Read each question carefully. Make sure you know what you have to do before starting your answer.
- Write your answer to each question in the space provided. Additional paper may be used if necessary but you must clearly show your candidate number, centre number and question number(s).
- Show your working. Marks may be given for a correct method even if the answer is incorrect.
- Answer **all** the questions.
- Do **not** write in the bar codes.

INFORMATION FOR CANDIDATES

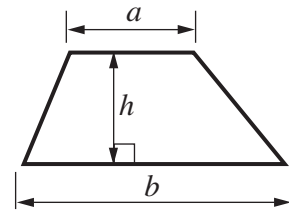
- The number of marks is given in brackets [] at the end of each question or part question.
- The total number of marks for this Section is **25**.
- This document consists of **8** pages. Any blank pages are indicated.

WARNING

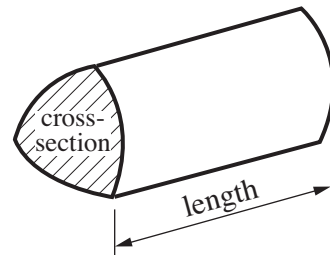
No calculator can be used for Section A of this paper

Formulae Sheet

Area of trapezium = $\frac{1}{2} (a + b)h$



Volume of prism = (area of cross-section) \times length



PLEASE DO NOT WRITE ON THIS PAGE

1

2	6	12	18	25	48	72
---	---	----	----	----	----	----

Select a number from this list to complete each of these sentences.

..... is a square number.

..... is the square root of 36.

[2]

2 Here is part of the bus timetable from Tindale to Brentmouth.

Each bus takes the same time for the journey.

Tindale	07 50	09 45	
Brentmouth	09 10		12 40

Complete the timetable.

[3]

3 Work out.

(a) $\frac{1}{4}$ of 64

(a) [1]

(b) 1.8×6

(b) [1]

(c) $27.56 \div 10$

(c) [1]

(d) $\frac{3}{4}$ of 24

(d) [2]

(e) 30% of 80

(e) [2]

4 Solve.

(a) $x - 4 = 11$

(a) [1]

(b) $3x = 21$

(b) [1]

(c) $x + 6 = 18$

(c) [1]

5 A charity holds a raffle.
It sells 200 tickets, numbered from 1 to 200.
The winning ticket is picked at random.

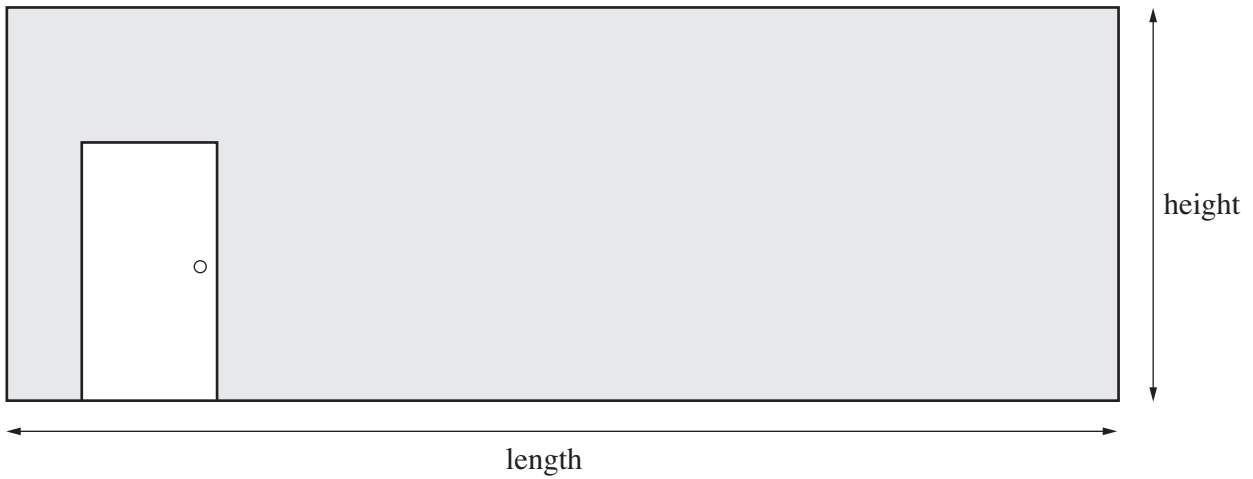
(a) What is the probability that the winning ticket is numbered 173?

(a) [1]

(b) What is the probability that the winning ticket is numbered 201?

(b) [1]

6 This is a scale drawing of a classroom wall, showing the door.

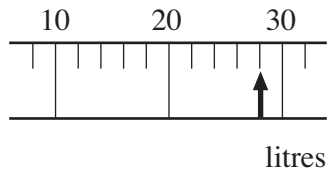


Estimate the height and length of the classroom wall.

height = m

length = m [2]

7 (a) Write down the reading on this fuel gauge.



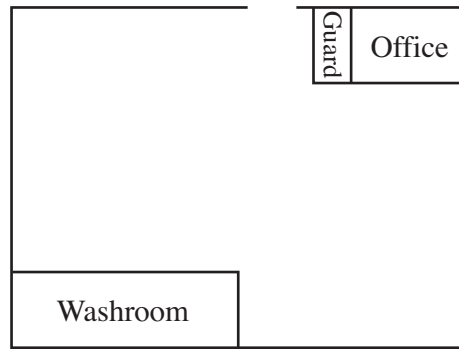
(a) litres [1]

(b) Asif has 400 ml of fuel in his petrol can.
He needs 0.5 litres for his lawnmower to mow the lawn.

Does he have enough fuel to mow the lawn?
Show how you decide.

(b) [2]

- 8 Here is a scale drawing of the floor plan of a warehouse.



Scale: 1 cm represents 4 m

- (a) Find the real length of the washroom.

(a) m [2]

- (b) The manager wants to fit a security store in the warehouse.
It will be 6 m long.

How long will the security store be on the scale drawing?

(b) cm [1]

PLEASE DO NOT WRITE ON THIS PAGE



Copyright Information

OCR is committed to seeking permission to reproduce all third-party content that it uses in its assessment materials. OCR has attempted to identify and contact all copyright holders whose work is used in this paper. To avoid the issue of disclosure of answer-related information to candidates, all copyright acknowledgements are reproduced in the OCR Copyright Acknowledgements Booklet. This is produced for each series of examinations and is freely available to download from our public website (www.ocr.org.uk) after the live examination series.

If OCR has unwittingly failed to correctly acknowledge or clear any third-party content in this assessment material, OCR will be happy to correct its mistake at the earliest possible opportunity.

For queries or further information please contact the Copyright Team, First Floor, 9 Hills Road, Cambridge CB2 1GE.

OCR is part of the Cambridge Assessment Group; Cambridge Assessment is the brand name of University of Cambridge Local Examinations Syndicate (UCLES), which is itself a department of the University of Cambridge.