



M2

**GENERAL CERTIFICATE OF SECONDARY EDUCATION
MATHEMATICS C (GRADUATED ASSESSMENT)
MODULE M2 – SECTION A**

B272A



Candidates answer on the question paper.

OCR supplied materials:
None

Other materials required:

- Geometrical instruments
- Tracing paper (optional)

**Tuesday 1 March 2011
Morning**

Duration: 30 minutes



Candidate forename		Candidate surname	
--------------------	--	-------------------	--

Centre number						Candidate number				
---------------	--	--	--	--	--	------------------	--	--	--	--

MODIFIED LANGUAGE

INSTRUCTIONS TO CANDIDATES

- Write your name, centre number and candidate number in the boxes above. Please write clearly and in capital letters.
- Use black ink. Pencil may be used for graphs and diagrams only.
- Read each question carefully. Make sure you know what you have to do before starting your answer.
- Write your answer to each question in the space provided. Additional paper may be used if necessary but you must clearly show your candidate number, centre number and question number(s).
- Show your working. Marks may be given for a correct method even if the answer is incorrect.
- Answer **all** the questions.
- Do **not** write in the bar codes.

INFORMATION FOR CANDIDATES

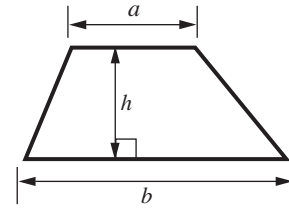
- The number of marks is given in brackets [] at the end of each question or part question.
- The total number of marks for this Section is **25**.
- This document consists of **8** pages. Any blank pages are indicated.

WARNING

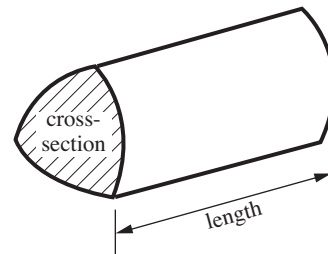
No calculator can be used for Section A of this paper

Formulae Sheet

$$\text{Area of trapezium} = \frac{1}{2}(a + b)h$$



$$\text{Volume of prism} = (\text{area of cross-section}) \times \text{length}$$



PLEASE DO NOT WRITE ON THIS PAGE

Copyright Information

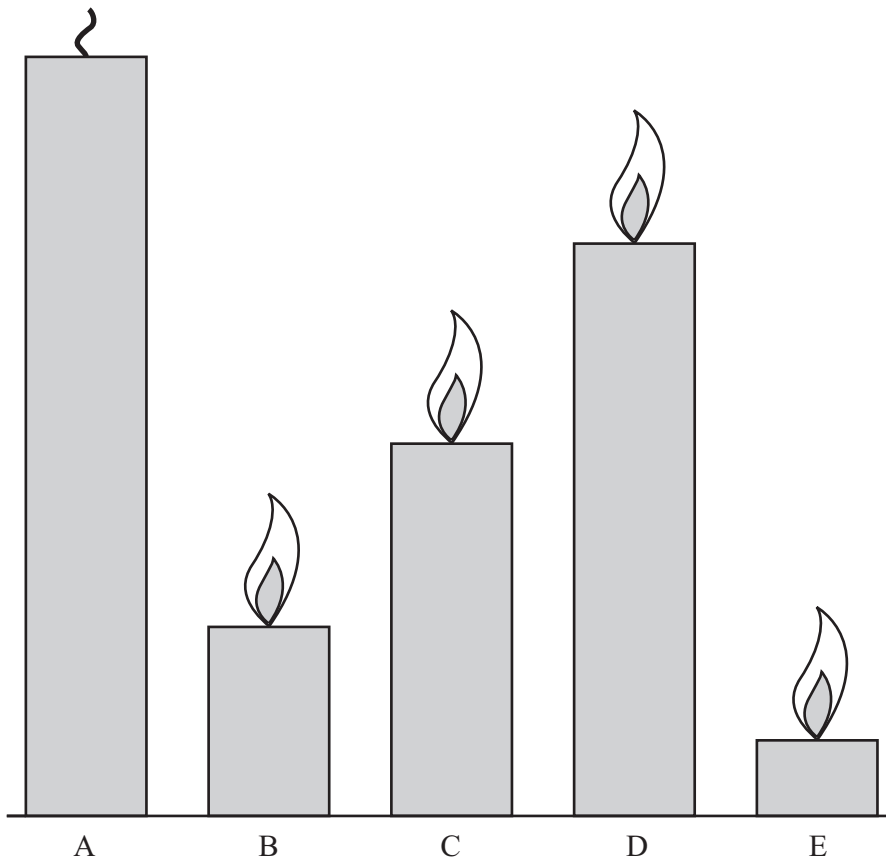
OCR is committed to seeking permission to reproduce all third-party content that it uses in its assessment materials. OCR has attempted to identify and contact all copyright holders whose work is used in this paper. To avoid the issue of disclosure of answer-related information to candidates, all copyright acknowledgements are reproduced in the OCR Copyright Acknowledgements Booklet. This is produced for each series of examinations and is freely available to download from our public website (www.ocr.org.uk) after the live examination series.

If OCR has unwittingly failed to correctly acknowledge or clear any third-party content in this assessment material, OCR will be happy to correct its mistake at the earliest possible opportunity.

For queries or further information please contact the Copyright Team, First Floor, 9 Hills Road, Cambridge CB2 1GE.

OCR is part of the Cambridge Assessment Group; Cambridge Assessment is the brand name of University of Cambridge Local Examinations Syndicate (UCLES), which is itself a department of the University of Cambridge.

- 1 Here are 5 candles which all started with the same height.
Candle A has not been lit.



Which candle has

0.5 left,

75% left,

0.25 left,

0.1 left?

[3]

- 2 (a) Use this information about 20p, 50p and £1 coins to answer the questions below.

Coin	Weight (g)	Thickness (mm)	Diameter (mm)
20p	5	1.7	21.4
50p	8	1.78	27.3
£1	9.5	3.15	22.5



- (i) How much heavier is a £1 coin than a 50p coin?

(a)(i) g [2]

- (ii) How much thicker is a £1 coin than a 50p coin?

(ii) mm [2]

- (iii) How many **kilograms** will thirty 20p coins weigh?

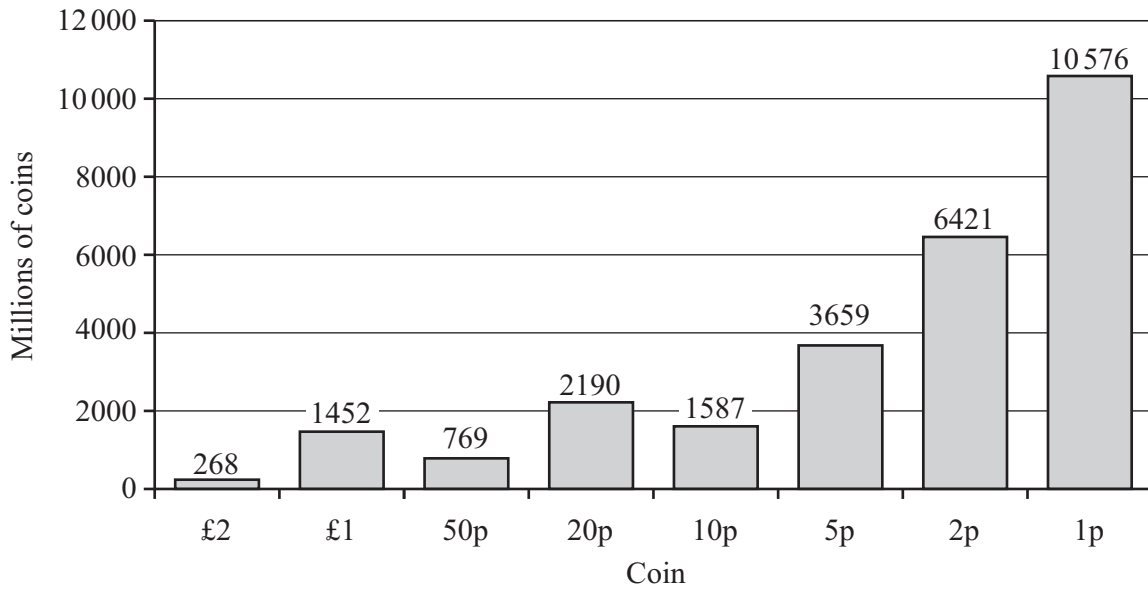
(iii) kg [2]

- (iv) Which is worth more, 80 g of 20p coins or 80 g of 50p coins?
Show the calculations you used to get your answer.

..... [4]

(b) This chart shows the number of different UK coins, in millions, in circulation at the end of 2007.

Coins in circulation



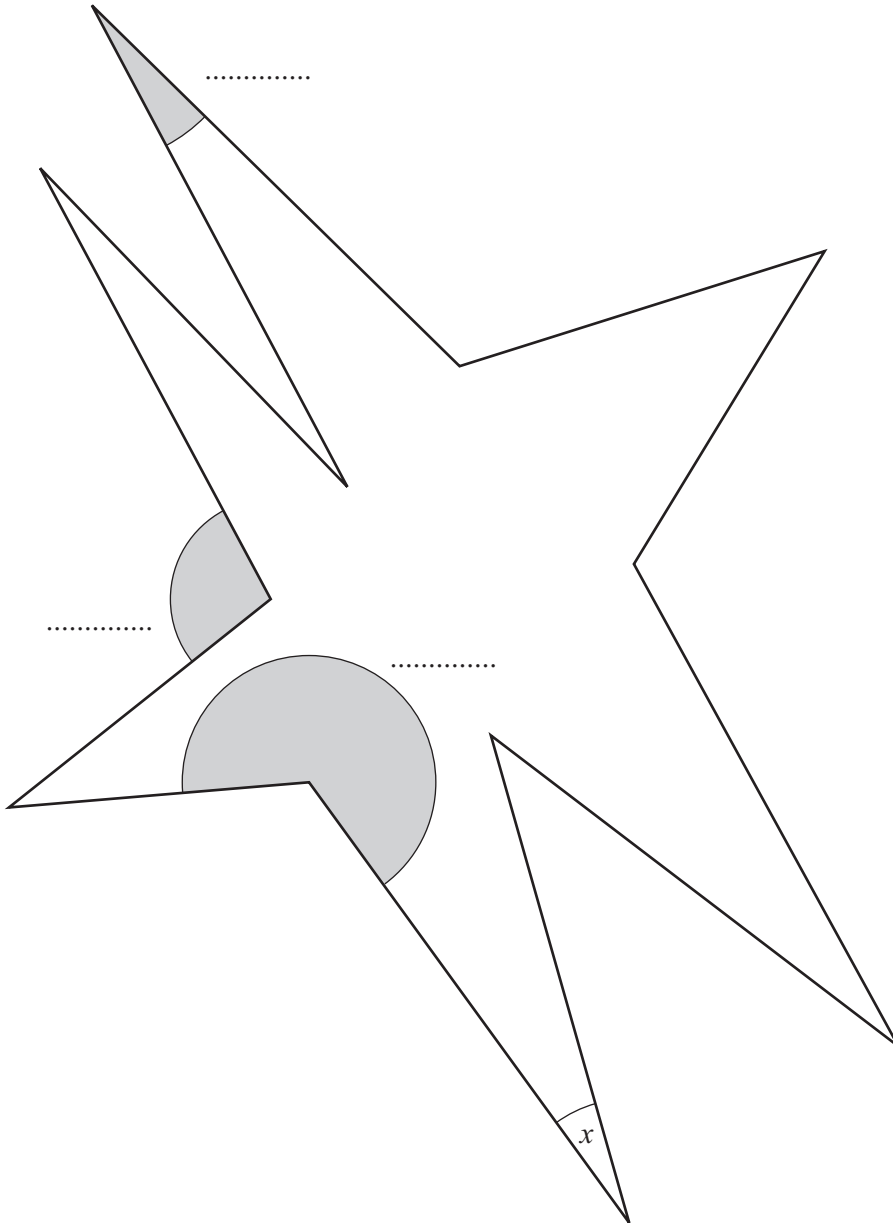
Use the chart to complete these sentences.

- (i) There were million £2 coins in circulation. [1]
- (ii) These £2 coins were worth a total of £ million. [1]
- (iii) The coin had the greatest number of coins in circulation. [1]

3 (a) (i) Here is a star shape.

Label the shaded angles as follows:

A for Acute
O for Obtuse
R for Reflex



[2]

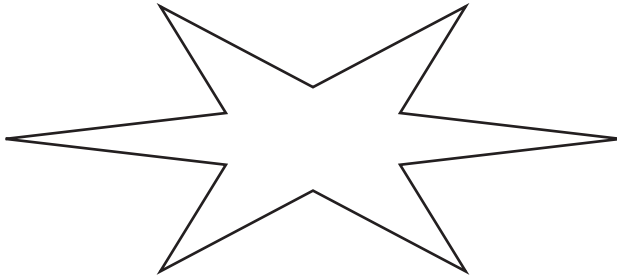
(ii) Measure the size of the angle marked x .

(a)(ii)^o [1]


(b) Here are four star shapes.

Put a tick (✓) under any that **have** reflection symmetry.

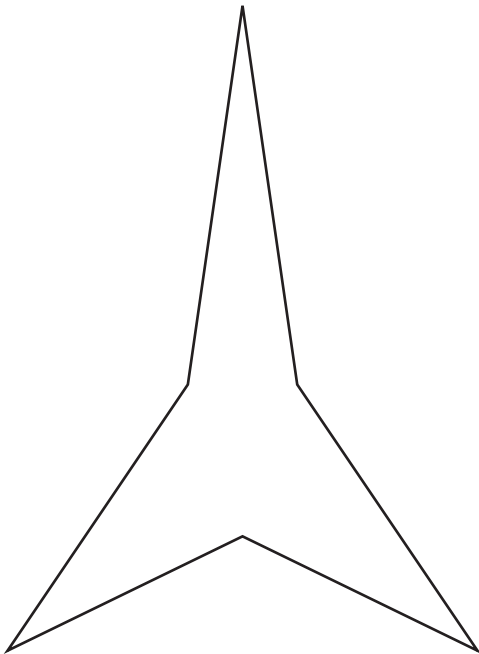
Put a cross (✗) under any that **do not have** reflection symmetry.




.....



.....



.....

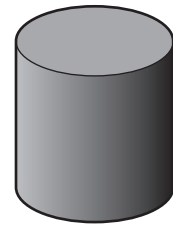
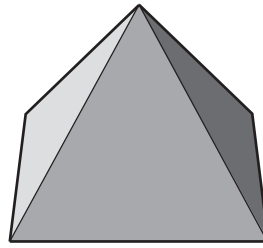
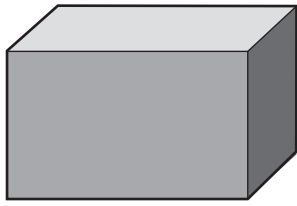


.....

[3]

TURN OVER FOR QUESTION 4

4 Here are three solids.

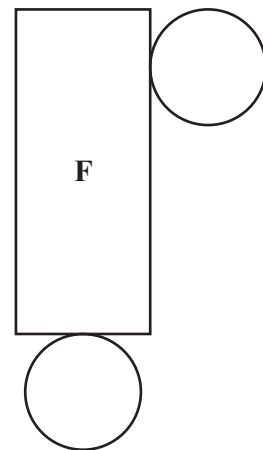
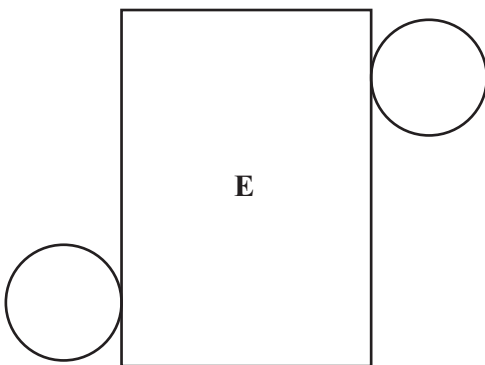
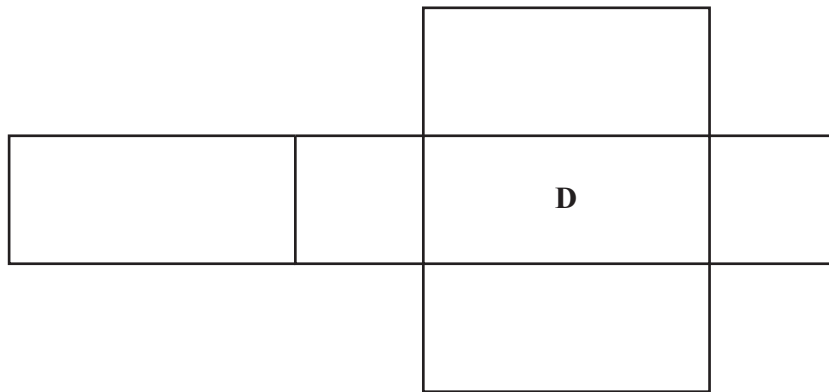
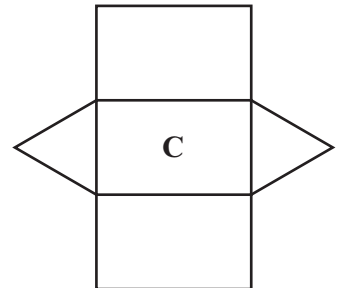
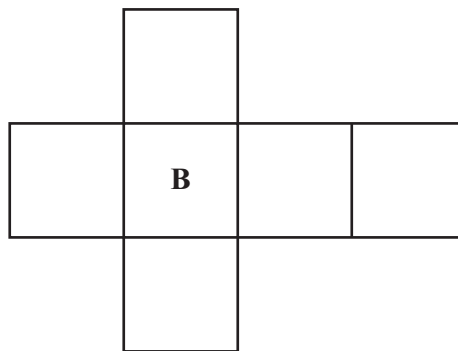
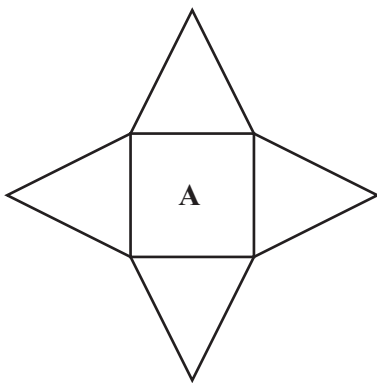


.....

.....

.....

Write under each solid the letter for its net.
Choose from these diagrams.



[3]