



M3

GENERAL CERTIFICATE OF SECONDARY EDUCATION
MATHEMATICS C (GRADUATED ASSESSMENT)
 MODULE M3 – SECTION B

B273B



Candidates answer on the question paper.

OCR supplied materials:
None

Other materials required:

- Geometrical instruments
- Tracing paper (optional)
- Electronic calculator

Tuesday 1 March 2011
Morning

Duration: 30 minutes



| | | | |
|-----------------------|--|----------------------|--|
| Candidate forename | | Candidate surname | |
|-----------------------|--|----------------------|--|

| | | | | | | | | | | |
|---------------|--|--|--|--|--|------------------|--|--|--|--|
| Centre number | | | | | | Candidate number | | | | |
|---------------|--|--|--|--|--|------------------|--|--|--|--|

INSTRUCTIONS TO CANDIDATES

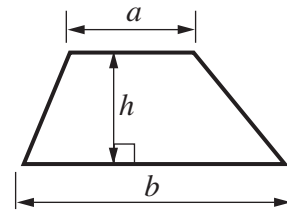
- Write your name, centre number and candidate number in the boxes above. Please write clearly and in capital letters.
- Use black ink. Pencil may be used for graphs and diagrams only.
- Read each question carefully. Make sure you know what you have to do before starting your answer.
- Write your answer to each question in the space provided. Additional paper may be used if necessary but you must clearly show your candidate number, centre number and question number(s).
- Show your working. Marks may be given for a correct method even if the answer is incorrect.
- Answer **all** the questions.
- Do **not** write in the bar codes.

INFORMATION FOR CANDIDATES

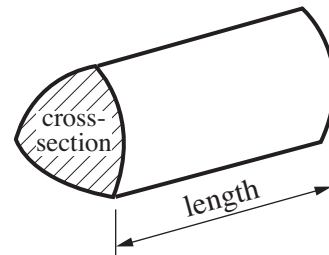
- The number of marks is given in brackets [] at the end of each question or part question.
- Section B starts with question 9.
- You are expected to use a calculator in Section B of this paper.
- The total number of marks for this Section is **25**.
- This document consists of **8** pages. Any blank pages are indicated.

Formulae Sheet

$$\text{Area of trapezium} = \frac{1}{2} (a + b)h$$



$$\text{Volume of prism} = (\text{area of cross-section}) \times \text{length}$$



PLEASE DO NOT WRITE ON THIS PAGE

Copyright Information

OCR is committed to seeking permission to reproduce all third-party content that it uses in its assessment materials. OCR has attempted to identify and contact all copyright holders whose work is used in this paper. To avoid the issue of disclosure of answer-related information to candidates, all copyright acknowledgements are reproduced in the OCR Copyright Acknowledgements Booklet. This is produced for each series of examinations and is freely available to download from our public website (www.ocr.org.uk) after the live examination series.

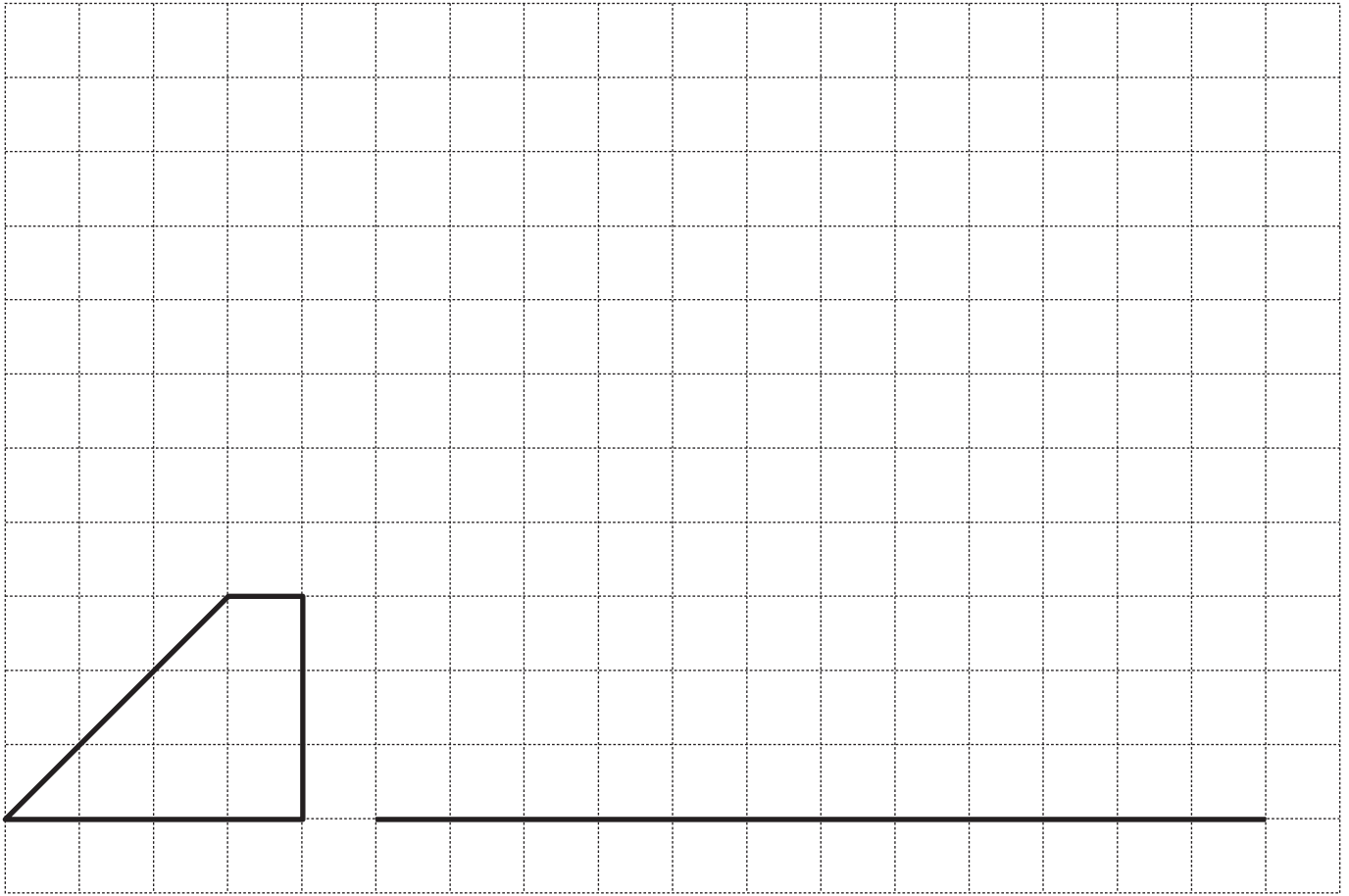
If OCR has unwittingly failed to correctly acknowledge or clear any third-party content in this assessment material, OCR will be happy to correct its mistake at the earliest possible opportunity.

For queries or further information please contact the Copyright Team, First Floor, 9 Hills Road, Cambridge CB2 1GE.

OCR is part of the Cambridge Assessment Group; Cambridge Assessment is the brand name of University of Cambridge Local Examinations Syndicate (UCLES), which is itself a department of the University of Cambridge.

- 9 Enlarge this shape using scale factor 3.
One side has been drawn for you.

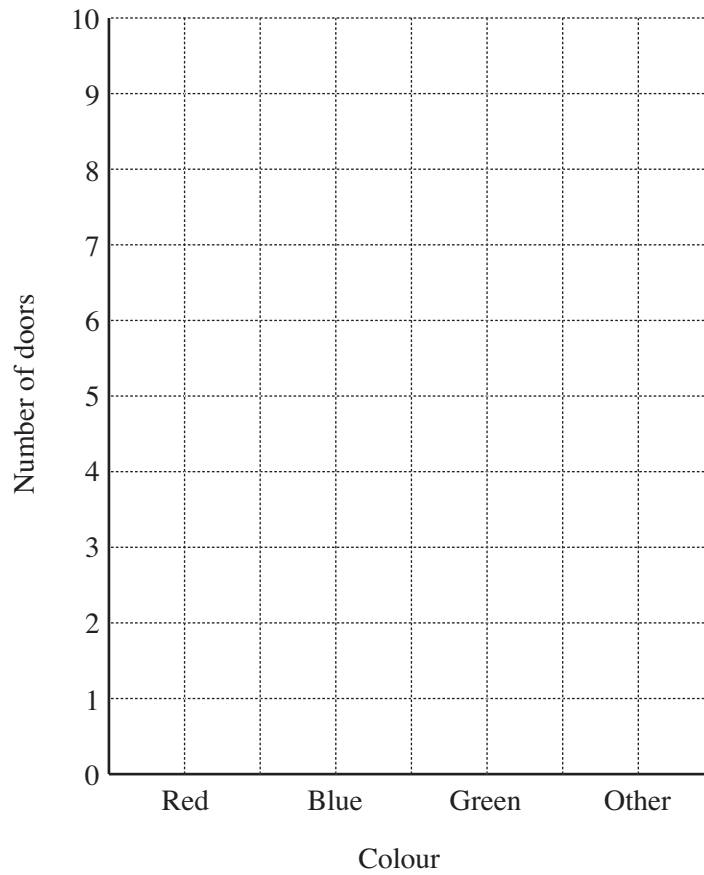
[2]



10 (a) Helen recorded the colours of the front doors of the 20 houses in her street.

| Colour | Number of doors |
|--------|-----------------|
| Red | 4 |
| Blue | 8 |
| Green | 5 |
| Other | 3 |

(i) Complete the bar chart to show this information.



[2]

(ii) Write down the mode.

(a)(ii) [1]

(iii) Helen says that most of the doors are blue.

Explain why her statement is **not** correct.

.....
 [1]

(b) During the half-term holiday Helen records the hours of sunshine each day.

4 0 1 9 8 7 2 8 6

(i) Calculate the mean.

(b)(i) hours [3]

(ii) Work out the range.

(ii) hours [1]

11 Work out.

(a) 24^2

(a) [1]

(b) $\sqrt{729}$

(b) [1]

(c) $(4 + 7) \times 6$

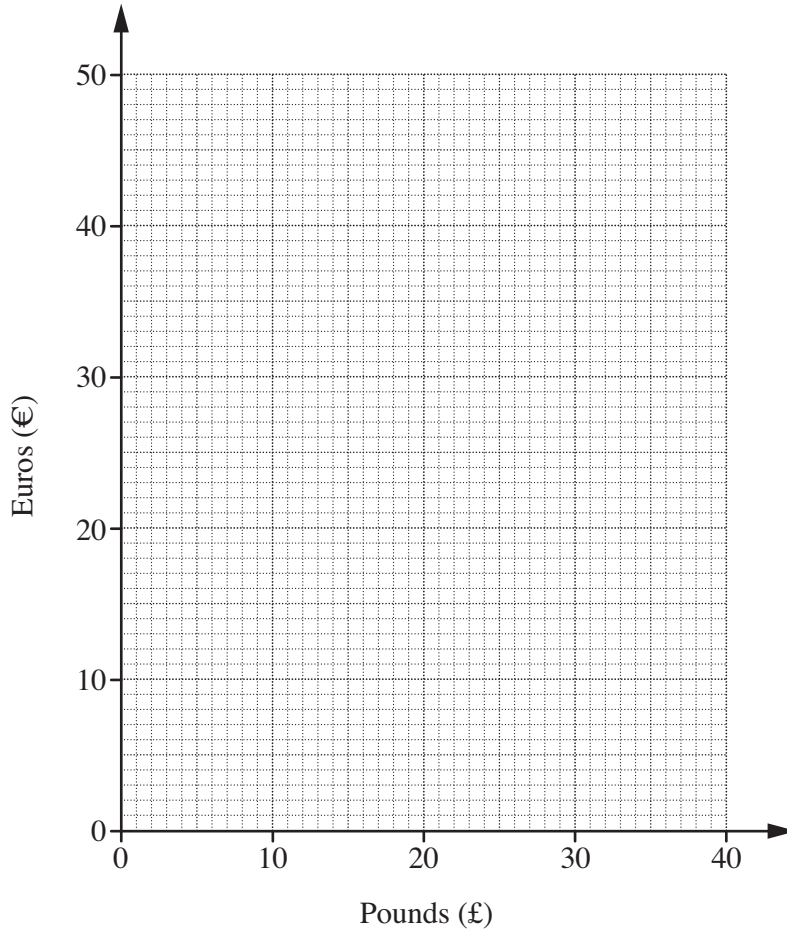
(c) [1]

(d) $4 + 7 \times 6$

(d) [1]

12 Here is a table with conversions between pounds and euros.

| | | | |
|------------|---|----|----|
| Pounds (£) | 0 | 20 | 40 |
| Euros (€) | 0 | 24 | 48 |



(a) Draw the conversion graph between pounds and euros. [2]

(b) Use your graph to convert

(i) 25 pounds to euros,

(b)(i) €..... [1]

(ii) 40 euros to pounds.

(b)(ii) £ [1]

- 13 (a) Michelle is cooking beef.
She uses this rule to find the cooking time in minutes.

Multiply the weight (in kg) by 40 and add 40 to the answer.

Calculate the cooking time for a piece of beef weighing 3 kg.

(a) minutes [2]

- (b) Geoff is cooking lamb.
He uses this rule to find the cooking time, T minutes.

$$T = 50w + 55$$

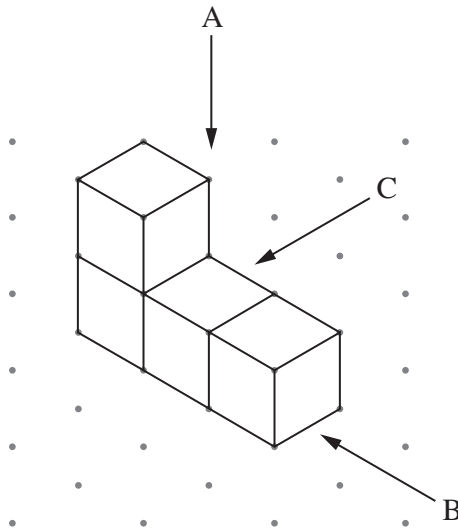
w is the weight of the lamb in kilograms.

Calculate the cooking time when $w = 4$.

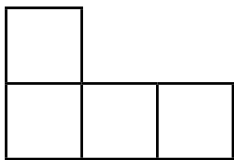
(b) minutes [2]

TURN OVER FOR QUESTION 14

14 The shape below is made from 4 one-centimetre cubes.



Here are four views.



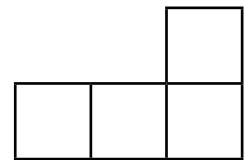
View 1



View 2



View 3



View 4

(a) Which is the view from A?

(a) [1]

(b) Which is the view from B?

(b) [1]

(c) Which is the view from C?

(c) [1]