



M7

**GENERAL CERTIFICATE OF SECONDARY EDUCATION
MATHEMATICS C (GRADUATED ASSESSMENT)
MODULE M7 (SECTION B)**

B277B

Candidates answer on the question paper.

OCR supplied materials:
None

Other materials required:

- Geometrical instruments
- Tracing paper (optional)
- Scientific or graphical calculator

**Tuesday 21 June 2011
Afternoon**

Duration: 30 minutes



Candidate forename		Candidate surname	
--------------------	--	-------------------	--

Centre number						Candidate number				
---------------	--	--	--	--	--	------------------	--	--	--	--

MODIFIED LANGUAGE

INSTRUCTIONS TO CANDIDATES

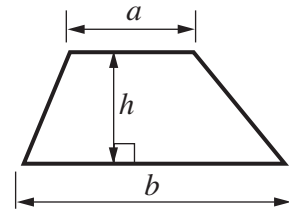
- Write your name, centre number and candidate number in the boxes above. Please write clearly and in capital letters.
- Use black ink. Pencil may be used for graphs and diagrams only.
- Read each question carefully. Make sure you know what you have to do before starting your answer.
- Show your working. Marks may be given for a correct method even if the answer is incorrect.
- Write your answer to each question in the space provided. Additional paper may be used if necessary but you must clearly show your candidate number, centre number and question number(s).
- Answer **all** the questions.
- Do **not** write in the bar codes.

INFORMATION FOR CANDIDATES

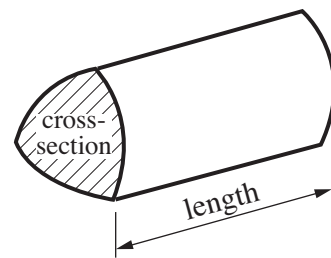
- The number of marks is given in brackets [] at the end of each question or part question.
- Section B starts with question 8.
- You are expected to use a calculator in Section B of this paper.
- Use the π button on your calculator or take π to be 3.142 unless the question says otherwise.
- The total number of marks for this Section is **25**.
- This document consists of **8** pages. Any blank pages are indicated.

Formulae Sheet

$$\text{Area of trapezium} = \frac{1}{2} (a + b)h$$



$$\text{Volume of prism} = (\text{area of cross-section}) \times \text{length}$$



PLEASE DO NOT WRITE ON THIS PAGE

- 8 (a) Juanita is working out the cost of a party at her home.

The decorations cost £10.

She spends £8 per person on refreshments.

Write a formula for the total cost in pounds, C , of her party for n people.

(a) [2]

- (b) Seth uses this formula for the total cost of his party.

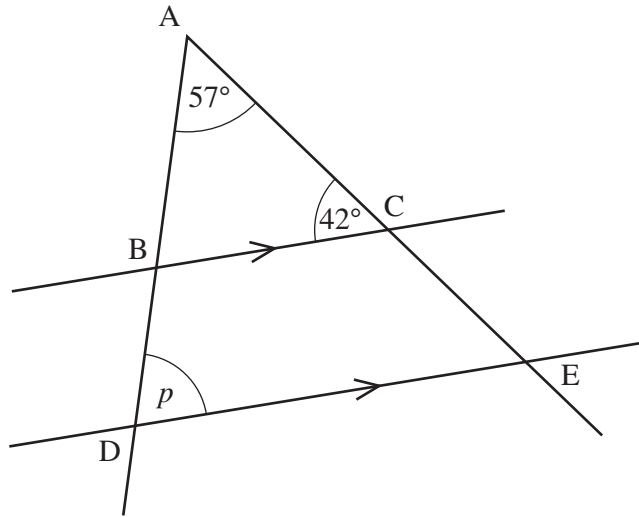
$$C = 6n + 50$$

C is the total cost in pounds and n is the number of people at the party.

Seth has a budget of £200 for the total cost.

Find the largest number of people that he can invite to his party.

(b) [2]



Not to
scale

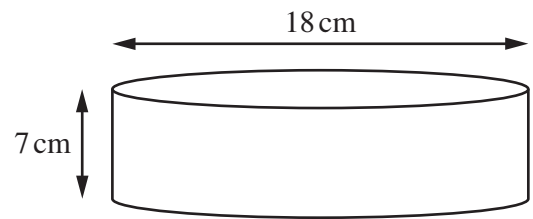
Find the size of angle p .
Give reasons for your answer.

$p = \dots\dots\dots^\circ$ because

.....

.....[3]

10 A birthday cake is in the shape of a cylinder.



(a) The top of the cake will be covered in icing.

8 g of icing covers an area of 10 cm^2 .

Calculate the weight of icing needed.

(a) g [3]

(b) The side of the cake will be covered in nuts.

5 g of nuts cover an area of 10 cm^2 .

Calculate the weight of nuts needed.

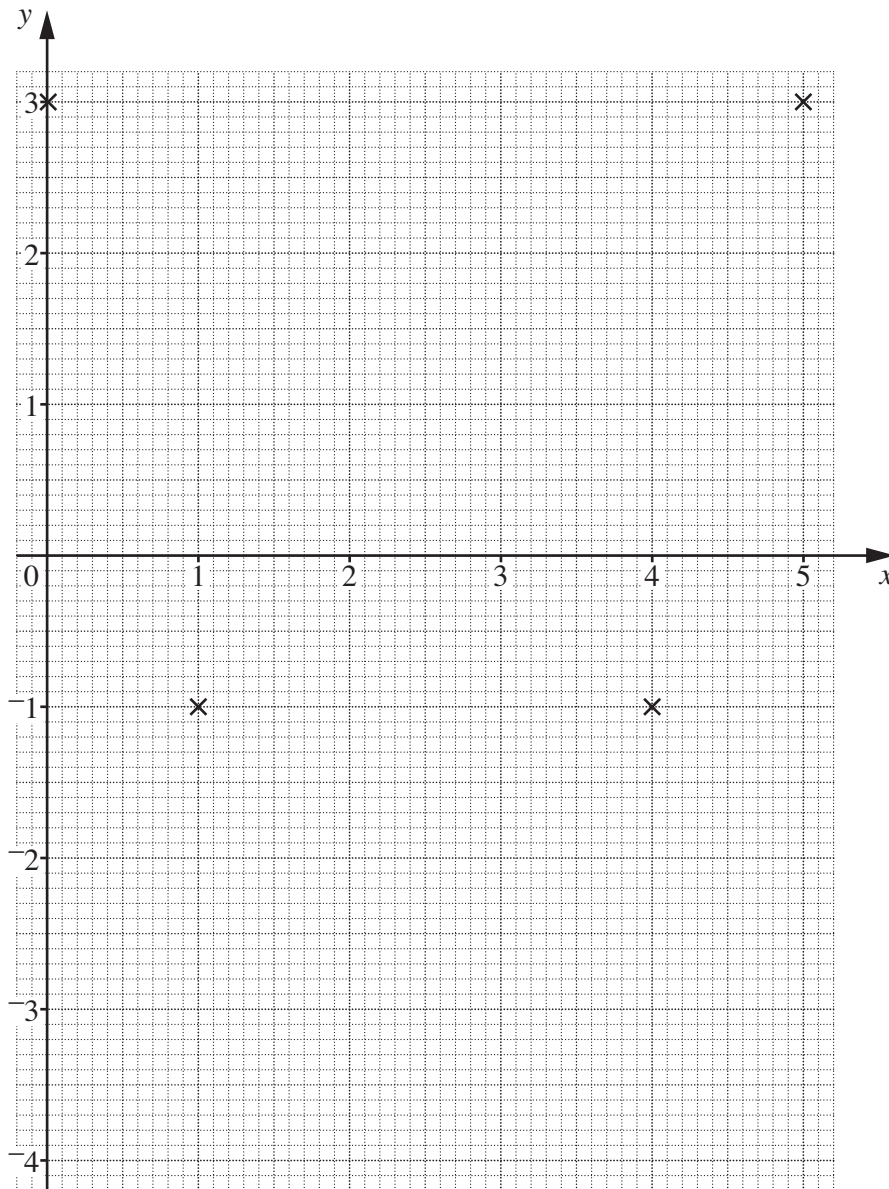
(b) g [3]

11 (a) Complete this table for $y = x^2 - 5x + 3$.

x	0	1	2	3	4	5
y	3	-1			-1	3

[1]

(b) Complete this graph of $y = x^2 - 5x + 3$ for values of x from 0 to 5.



[2]

(c) Use the graph to find the values of x for which $x^2 - 5x + 3 = 0$.

Give your answers correct to 1 decimal place.

(c)..... [2]

- 12 (a) Ashad investigates the price charged for a cup of coffee in different cafés.

This table summarises his results.

Price (£ c)	Frequency
$0.50 < c \leq 1.00$	2
$1.00 < c \leq 1.50$	12
$1.50 < c \leq 2.00$	13
$2.00 < c \leq 2.50$	7
$2.50 < c \leq 3.00$	2

Calculate an estimate of the mean price charged for a cup of coffee.

(a) £ [4]

- (b) One café increases its price from £2.25 to £2.40.

Calculate the percentage increase.

Give your answer correct to 1 decimal place.

(b) % [3]

PLEASE DO NOT WRITE ON THIS PAGE



Copyright Information

OCR is committed to seeking permission to reproduce all third-party content that it uses in its assessment materials. OCR has attempted to identify and contact all copyright holders whose work is used in this paper. To avoid the issue of disclosure of answer-related information to candidates, all copyright acknowledgements are reproduced in the OCR Copyright Acknowledgements Booklet. This is produced for each series of examinations and is freely available to download from our public website (www.ocr.org.uk) after the live examination series. If OCR has unwittingly failed to correctly acknowledge or clear any third-party content in this assessment material, OCR will be happy to correct its mistake at the earliest possible opportunity.

For queries or further information please contact the Copyright Team, First Floor, 9 Hills Road, Cambridge CB2 1GE.

OCR is part of the Cambridge Assessment Group; Cambridge Assessment is the brand name of University of Cambridge Local Examinations Syndicate (UCLES), which is itself a department of the University of Cambridge.