

Candidate forename		Candidate surname	
-------------------------------	--	------------------------------	--

Centre number						Candidate number				
--------------------------	--	--	--	--	--	-----------------------------	--	--	--	--

**OXFORD CAMBRIDGE AND RSA EXAMINATIONS
GENERAL CERTIFICATE OF SECONDARY EDUCATION**

B282B

**MATHEMATICS C
(GRADUATED ASSESSMENT)**

Terminal Paper – Section B (Higher Tier)

TUESDAY 11 JANUARY 2011: Morning

DURATION: 1 hour

SUITABLE FOR VISUALLY IMPAIRED CANDIDATES

Candidates answer on the question paper.

OCR SUPPLIED MATERIALS:

None

OTHER MATERIALS REQUIRED:

Geometrical instruments

Tracing paper (optional)

Scientific or graphical calculator

READ INSTRUCTIONS OVERLEAF

INSTRUCTIONS TO CANDIDATES

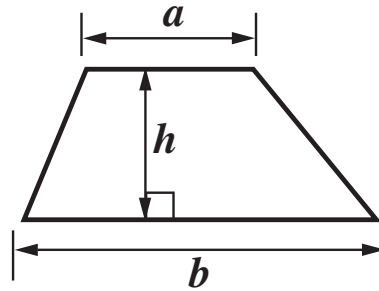
- **Write your name, centre number and candidate number in the boxes on the first page. Please write clearly and in capital letters.**
- **Use black ink. Pencil may be used for graphs and diagrams only.**
- **Read each question carefully. Make sure you know what you have to do before starting your answer.**
- **Write your answer to each question in the space provided. Additional paper may be used if necessary but you must clearly show your candidate number, centre number and question number(s).**
- **Show your working. Marks may be given for a correct method even if the answer is incorrect.**
- **Answer ALL the questions.**

INFORMATION FOR CANDIDATES

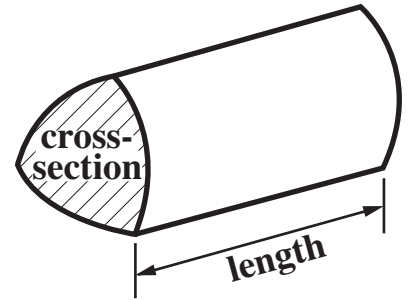
- **The number of marks is given in brackets [] at the end of each question or part question.**
- **Section B starts with question 12.**
- **You are expected to use a calculator in Section B of this paper.**
- **Use the π button on your calculator or take π to be 3.142 unless the question says otherwise.**
- **The total number of marks for this Section is 50.**

FORMULAE SHEET

Area of trapezium = $\frac{1}{2} (a + b)h$



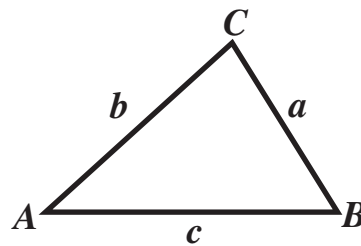
Volume of prism = (area of cross-section) \times length



In any triangle ABC

Sine rule $\frac{a}{\sin A} = \frac{b}{\sin B} = \frac{c}{\sin C}$

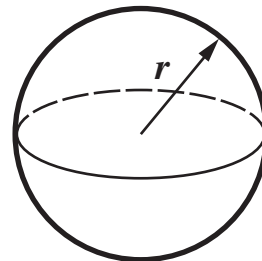
Cosine rule $a^2 = b^2 + c^2 - 2bc \cos A$



Area of triangle = $\frac{1}{2} ab \sin C$

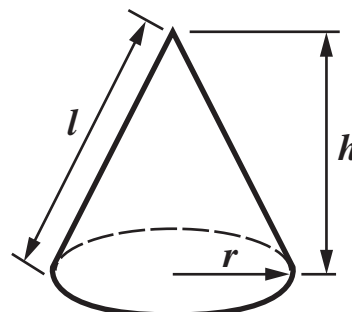
Volume of sphere = $\frac{4}{3}\pi r^3$

Surface area of sphere = $4\pi r^2$



Volume of cone = $\frac{1}{3}\pi r^2 h$

Curved surface area of cone = $\pi r l$



The Quadratic Equation

The solutions of $ax^2 + bx + c = 0$ where $a \neq 0$, are given by

$$x = \frac{-b \pm \sqrt{b^2 - 4ac}}{2a}$$

12 This formula converts temperature between degrees Fahrenheit and degrees Celsius.

$$C = \frac{5(F - 32)}{9}$$

C is the temperature in degrees Celsius and F is the temperature in degrees Fahrenheit.

In 1982 a temperature of -15 degrees Fahrenheit was recorded in England.

Use the formula to work out what -15°F is in degrees Celsius.

Give your answer correct to the nearest whole number.

_____ $^{\circ}\text{C}$ [3]

13 In 2003 there were 55 700 pairs of puffins on the Farne Islands.

By 2008 there were only 36 500 pairs of puffins.

Calculate the percentage reduction in the number of pairs of puffins.

_____ % [3]

- 14 (a) The Avon cricket pitch is circular.
The diameter of the pitch is 140 m.**

**Work out the distance round the pitch.
Give your answer correct to a suitable degree of
accuracy.**

(a) _____ m [3]

(b) In one match the Avon cricket team scores 51 runs in the first 6 overs.

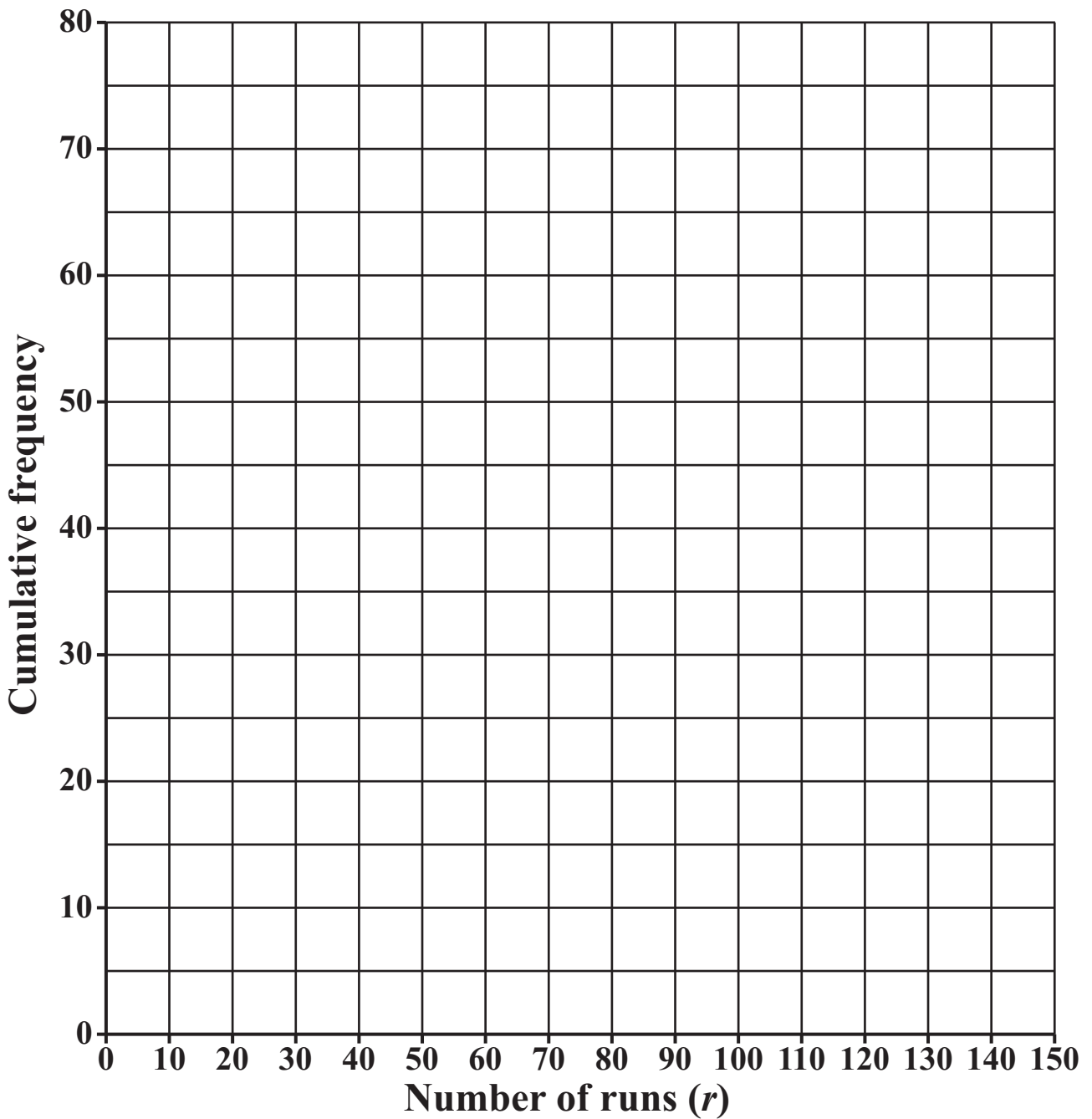
Assuming that the team continues to score at the same rate, how many runs will the team score in 20 overs?

(b) _____ [2]

- (c) (i) Kevin has kept a record of the number of runs he has scored in 80 matches.
This table shows the distribution of the number of runs he has scored.

Number of runs (r)	Frequency (number of matches)
$0 \leq r \leq 20$	14
$20 < r \leq 40$	20
$40 < r \leq 60$	20
$60 < r \leq 80$	14
$80 < r \leq 100$	6
$100 < r \leq 150$	6

Draw a CUMULATIVE FREQUENCY graph to represent this distribution.

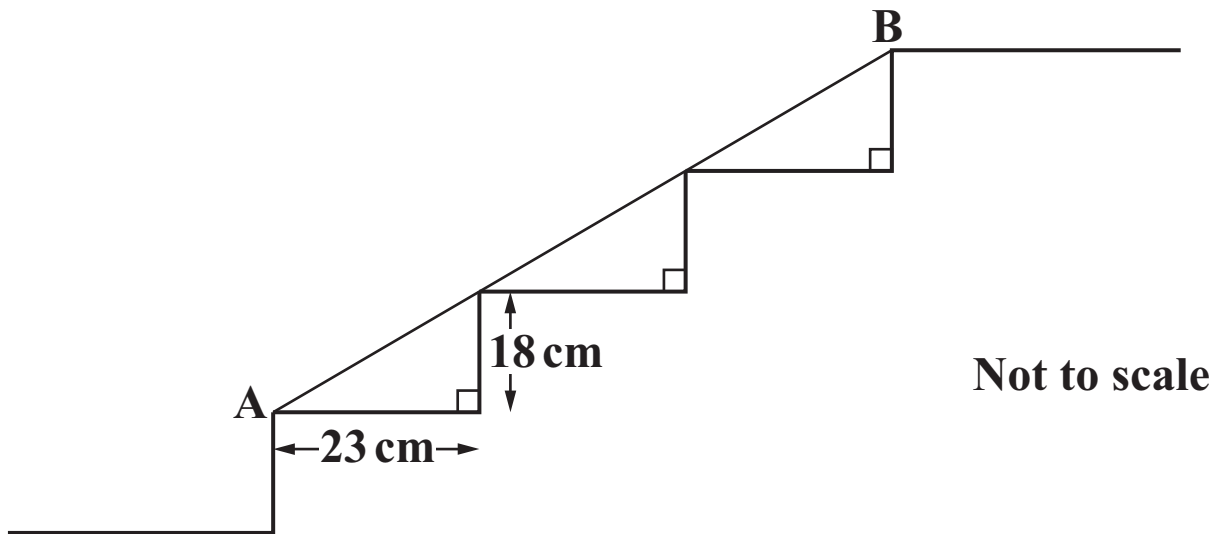


[4]

(ii) Use the graph to estimate the number of matches in which Kevin scored more than 50 runs.

(c)(ii) _____ [2]

- 15** This is the side view of a set of steps.
Each step is the same width and height.
A piece of wood is fitted from A to B as shown.



Work out the length AB.

_____ cm [4]

16 Solve algebraically these simultaneous equations.

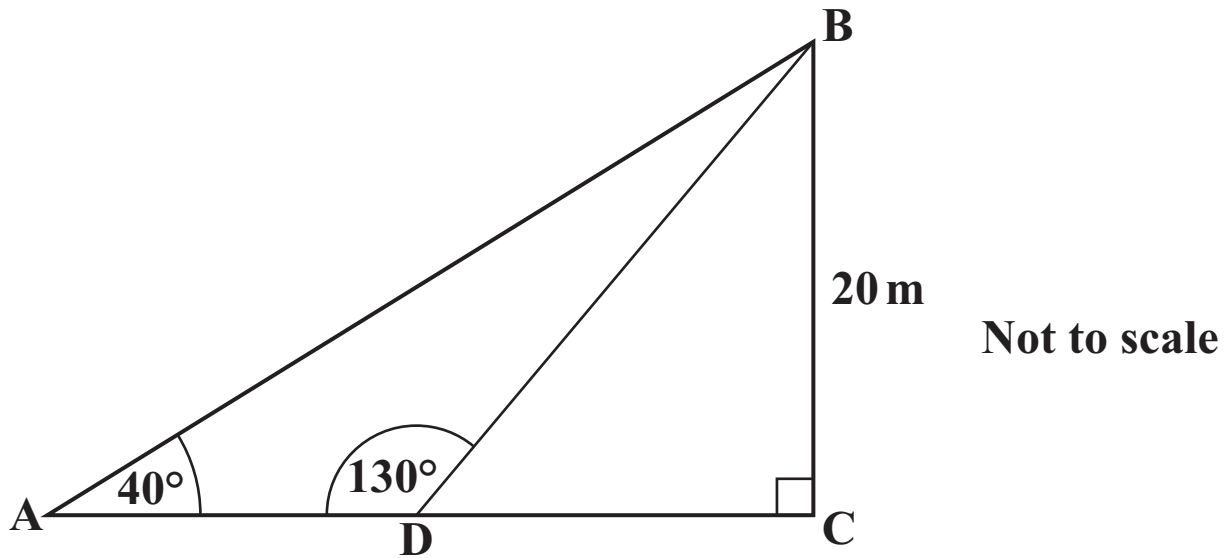
$$4x - 3y = 24$$

$$6x + 5y = 17$$

$$x = \underline{\hspace{10em}}$$

$$y = \underline{\hspace{10em}} \quad [4]$$

17 The diagram below shows triangle ABC.



ADC is a straight line.

Angle $BCA = 90^\circ$, angle $BDA = 130^\circ$ and angle $BAD = 40^\circ$.

$BC = 20$ m.

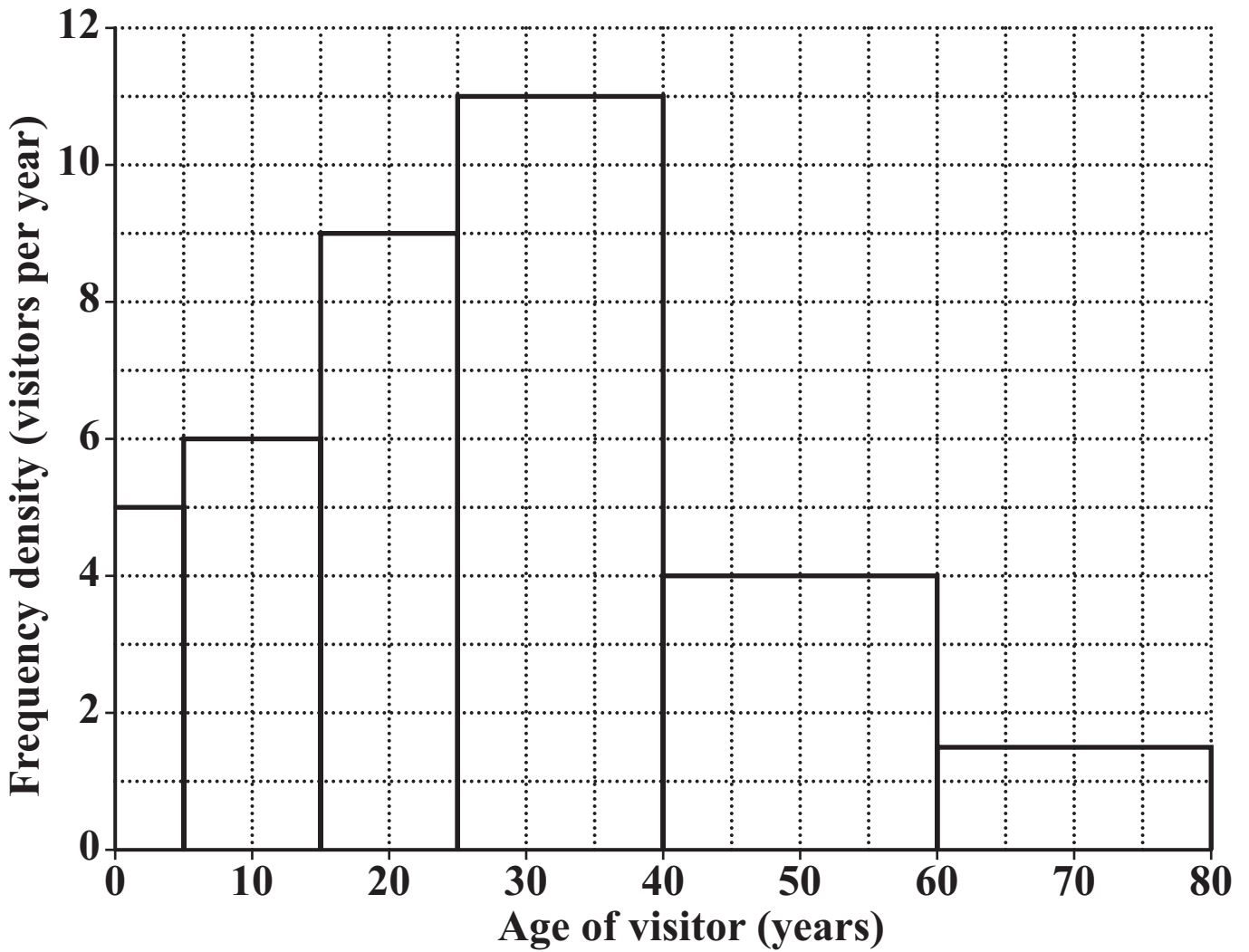
(a) Show that $AB = 31$ m, correct to the nearest metre.

[2]

(b) Calculate AD.

(b) _____ m [3]

18 This histogram shows the distribution of the ages of the 450 visitors to a leisure centre one Saturday morning.

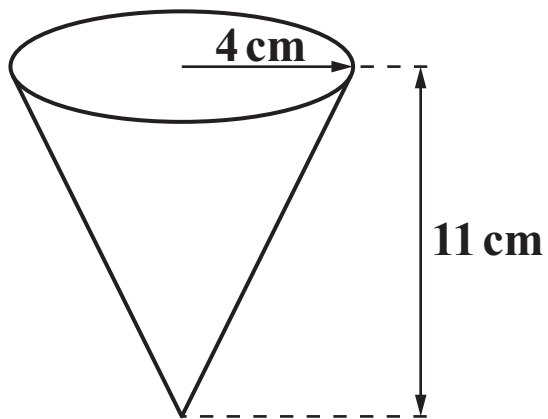


What percentage of the visitors were aged under 15?

BLANK PAGE

TURN OVER FOR QUESTION 19

19 This drinks cup is a cone.

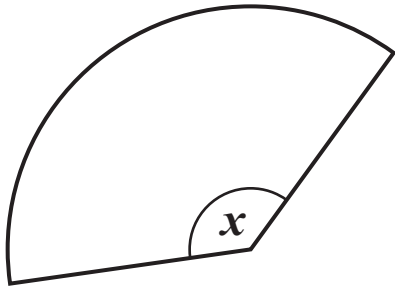


The radius of the cone is 4 cm and the depth is 11 cm.

(a) How many of these cups can be completely filled from a 20 litre container of water?

16 (a) _____ **[4]**

(b) The cone is made from a sector of a circle.



Not to scale

(i) Show that the radius of this sector is 11.7 cm, correct to 1 decimal place.

[2]

(ii) Calculate angle x .

(b)(ii) _____^o [4]

20 It is given that y is inversely proportional to x^2 and that $y = 4$ when $x = 5$.

Find the formula for y in terms of x .

_____ [3]

21 Ric estimated that the distance from the airport to his holiday home was about 260 kilometres and that the journey would take about 4 hours.

He estimated the distance to the nearest 10 km and the time to the nearest hour.

Calculate the LOWER BOUND of his average speed for this journey.

_____ **km/hour [4]**



Copyright Information

OCR is committed to seeking permission to reproduce all third-party content that it uses in its assessment materials. OCR has attempted to identify and contact all copyright holders whose work is used in this paper. To avoid the issue of disclosure of answer-related information to candidates, all copyright acknowledgements are reproduced in the OCR Copyright Acknowledgements Booklet. This is produced for each series of examinations and is freely available to download from our public website (www.ocr.org.uk) after the live examination series.

If OCR has unwittingly failed to correctly acknowledge or clear any third-party content in this assessment material, OCR will be happy to correct its mistake at the earliest possible opportunity.

For queries or further information please contact the Copyright Team, First Floor, 9 Hills Road, Cambridge CB2 1GE.

OCR is part of the Cambridge Assessment Group; Cambridge Assessment is the brand name of University of Cambridge Local Examinations Syndicate (UCLES), which is itself a department of the University of Cambridge.