



M8

**GENERAL CERTIFICATE OF SECONDARY EDUCATION
MATHEMATICS C (GRADUATED ASSESSMENT)
MODULE M8 – SECTION A**

B278A



Candidates answer on the question paper.

OCR supplied materials:
None

Other materials required:

- Geometrical instruments
- Tracing paper (optional)

**Thursday 20 January 2011
Morning**

Duration: 30 minutes



Candidate forename		Candidate surname	
--------------------	--	-------------------	--

Centre number							Candidate number				
---------------	--	--	--	--	--	--	------------------	--	--	--	--

MODIFIED LANGUAGE

INSTRUCTIONS TO CANDIDATES

- Write your name, centre number and candidate number in the boxes above. Please write clearly and in capital letters.
- Use black ink. Pencil may be used for graphs and diagrams only.
- Read each question carefully. Make sure you know what you have to do before starting your answer.
- Show your working. Marks may be given for a correct method even if the answer is incorrect.
- Write your answer to each question in the space provided. Additional paper may be used if necessary but you must clearly show your candidate number, centre number and question number(s).
- Answer **all** the questions.
- Do **not** write in the bar codes.

INFORMATION FOR CANDIDATES

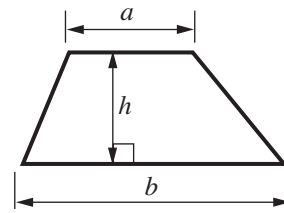
- The number of marks is given in brackets [] at the end of each question or part question.
- The total number of marks for this Section is **25**.
- This document consists of **8** pages. Any blank pages are indicated.

WARNING

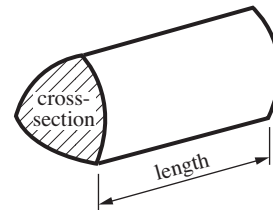
No calculator can be used for Section A of this paper

Formulae Sheet

Area of trapezium = $\frac{1}{2}(a + b)h$



Volume of prism = (area of cross-section) \times length

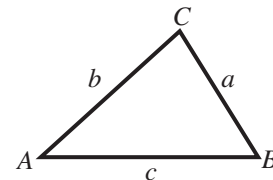


In any triangle ABC

Sine rule $\frac{a}{\sin A} = \frac{b}{\sin B} = \frac{c}{\sin C}$

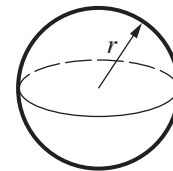
Cosine rule $a^2 = b^2 + c^2 - 2bc \cos A$

Area of triangle = $\frac{1}{2}ab \sin C$



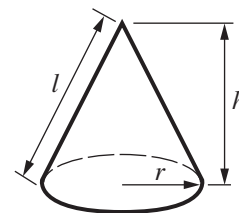
Volume of sphere = $\frac{4}{3}\pi r^3$

Surface area of sphere = $4\pi r^2$



Volume of cone = $\frac{1}{3}\pi r^2 h$

Curved surface area of cone = $\pi r l$



The Quadratic Equation

The solutions of $ax^2 + bx + c = 0$, where $a \neq 0$, are given by

$$x = \frac{-b \pm \sqrt{b^2 - 4ac}}{2a}$$

PLEASE DO NOT WRITE ON THIS PAGE

1 Solve.

(a) $5(x + 4) = 2(x + 1)$

(a)[3]

(b) $\frac{x + 5}{4} < 2$

(b)[2]

- 2 Helen drops a coin and an ordinary 6-sided dice.

Helen says:

The probability that the coin lands on a head and the dice lands on a 6 is $\frac{1}{12}$.

Explain why Helen is correct.

Helen is correct because

.....

..... [2]

- 3 (a) Arrange these numbers in order, beginning with the smallest.

$$4.54 \times 10^{-2} \quad 4.37 \times 10^2 \quad 3.47 \times 10^{-3} \quad 2.78 \times 10^{-2}$$

..... [1]
smallest

- (b) You are given that $x = 3 \times 10^3$ and $y = 6 \times 10^5$.

Work out the following, giving your answers in standard form.

(i) xy

(b)(i) [2]

(ii) $x + y$

(ii) [2]

- 4 Rearrange this formula to make x the subject.

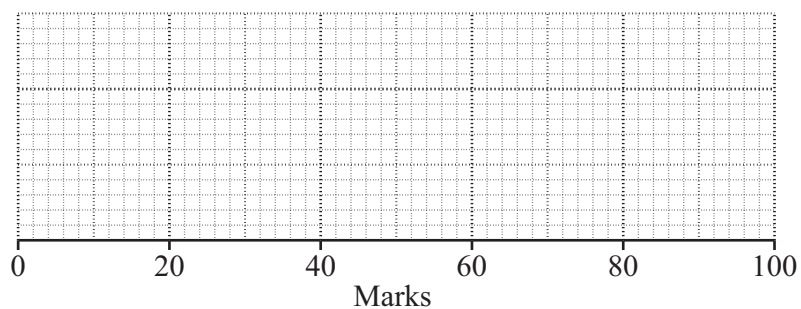
$$y = 5x^2 - 3$$

..... [3]

- 5 This table shows information about the test results for a class.

Minimum mark	15
Lower quartile	32
Median	56
Interquartile range	47
Range	80

Draw a box plot to represent these results.



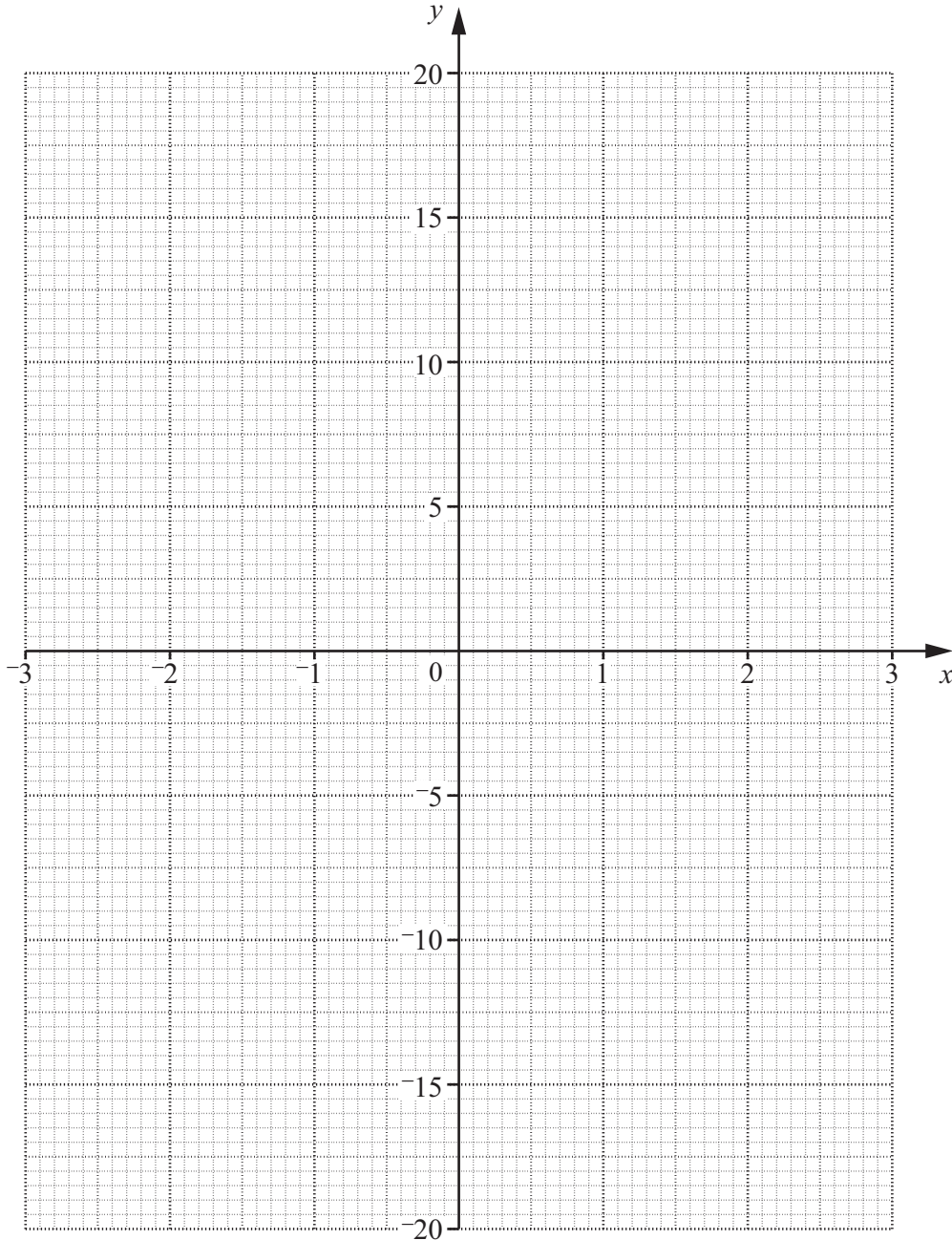
[3]

- 6 (a) Complete the table of values for $y = x^3 - 4x$.

x	-3	-2	-1	0	1	2	3
y		0	3	0	-3	0	

[1]

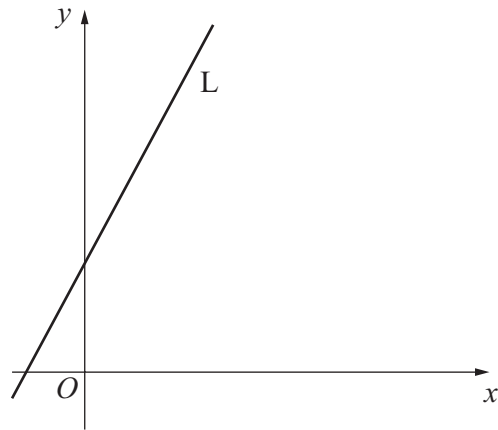
- (b) Draw the graph of $y = x^3 - 4x$ for $-3 \leq x \leq 3$.



[2]

TURN OVER FOR QUESTION 7

7 Line L passes through points (0, 2) and (6, 20).



Not to scale

(a) Find the gradient of line L.

(a) [2]

(b) The equations of four other lines are given below.

Decide whether each of these lines is parallel to line L.

Write Yes or No under each equation.

$y = 3x$

$y = -3x + 2$

$y = 2x + 3$

$y = 3x + 7$

.....

.....

.....

.....

[2]



Copyright Information

OCR is committed to seeking permission to reproduce all third-party content that it uses in its assessment materials. OCR has attempted to identify and contact all copyright holders whose work is used in this paper. To avoid the issue of disclosure of answer-related information to candidates, all copyright acknowledgements are reproduced in the OCR Copyright Acknowledgements Booklet. This is produced for each series of examinations and is freely available to download from our public website (www.ocr.org.uk) after the live examination series. If OCR has unwittingly failed to correctly acknowledge or clear any third-party content in this assessment material, OCR will be happy to correct its mistake at the earliest possible opportunity.

For queries or further information please contact the Copyright Team, First Floor, 9 Hills Road, Cambridge CB2 1GE.

OCR is part of the Cambridge Assessment Group; Cambridge Assessment is the brand name of University of Cambridge Local Examinations Syndicate (UCLES), which is itself a department of the University of Cambridge.