



M7

**GENERAL CERTIFICATE OF SECONDARY EDUCATION
MATHEMATICS C (GRADUATED ASSESSMENT)
MODULE M7 – SECTION B**

B277B



Candidates answer on the question paper.

OCR supplied materials:
None

Other materials required:

- Geometrical instruments
- Tracing paper (optional)
- Scientific or graphical calculator

**Thursday 20 January 2011
Morning**

Duration: 30 minutes



Candidate forename		Candidate surname	
--------------------	--	-------------------	--

Centre number						Candidate number				
---------------	--	--	--	--	--	------------------	--	--	--	--

MODIFIED LANGUAGE

INSTRUCTIONS TO CANDIDATES

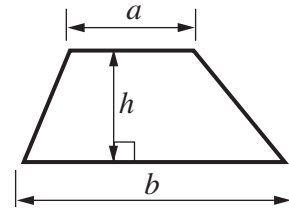
- Write your name, centre number and candidate number in the boxes above. Please write clearly and in capital letters.
- Use black ink. Pencil may be used for graphs and diagrams only.
- Read each question carefully. Make sure you know what you have to do before starting your answer.
- Show your working. Marks may be given for a correct method even if the answer is incorrect.
- Write your answer to each question in the space provided. Additional paper may be used if necessary but you must clearly show your candidate number, centre number and question number(s).
- Answer **all** the questions.
- Do **not** write in the bar codes.

INFORMATION FOR CANDIDATES

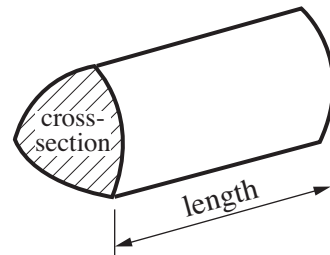
- The number of marks is given in brackets [] at the end of each question or part question.
- Section B starts with question 8.
- You are expected to use a calculator in Section B of this paper.
- Use the π button on your calculator or take π to be 3.142 unless the question says otherwise.
- The total number of marks for this Section is **25**.
- This document consists of **8** pages. Any blank pages are indicated.

Formulae Sheet

Area of trapezium = $\frac{1}{2} (a + b)h$



Volume of prism = (area of cross-section) \times length



PLEASE DO NOT WRITE ON THIS PAGE

- 8 (a) A 13cm plant pot holds 0.8 litres of compost.

How many of these pots can be filled from a 60 litre bag of compost?

(a)..... [1]

- (b) A 60 litre bag of compost costs £4.92.

What would a 25 litre bag cost at the same price per litre?

(b) £ [2]

- (c) Sandra makes her own compost by mixing fibre, sand and soil in the ratio 2 : 3 : 5.

How much sand does she need to make 75 litres of compost?

(c)litres [2]

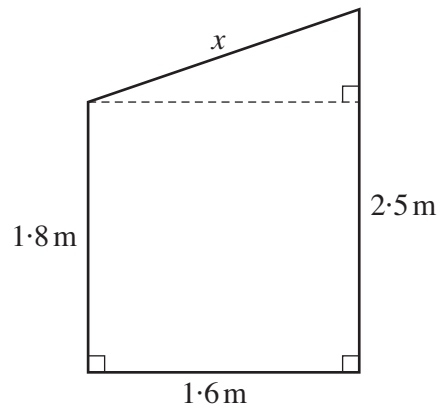
- 9 In the Olympics, 49 swimmers took part in the women's 100 m butterfly heats. The table shows the distribution of their times.

Time, (T seconds)	Frequency
$56 \leq T < 58$	4
$58 \leq T < 60$	33
$60 \leq T < 62$	8
$62 \leq T < 64$	1
$64 \leq T < 66$	3

Calculate an estimate of their mean time.
Write your answer correct to one decimal place.

..... seconds [4]

10 The diagram shows the side view of a shed.



Not to scale

Calculate the length x .
Give your answer to a suitable degree of accuracy.

.....m [4]

- 11** Asif asked a random sample of 80 pupils how they travel to school. The table shows his results.

Walk	Bus	Cycle	Taxi	Car
26	43	3	2	6

- (a) One of the 80 pupils is chosen at random.

What is the probability that this pupil walks to school?

(a)..... [1]

- (b) There are 1200 pupils in the school.

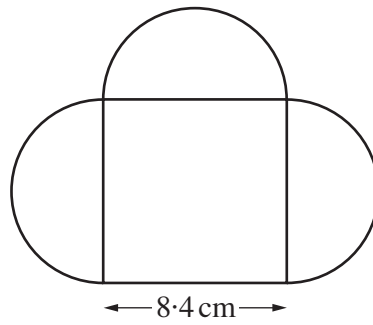
- (i) Explain why it is reasonable to use Asif's results to estimate how many of these 1200 pupils walk to school.

.....
 [1]

- (ii) Estimate the number of these 1200 pupils who walk to school. You must show your working.

(b)(ii)..... [2]

12



This is the design for a company logo.
It is formed from a square of side length 8.4 cm and three semi-circles of diameter 8.4 cm.

Calculate the area of the logo.

.....cm² [4]

TURN OVER FOR QUESTION 13

13 One solution of the equation $x^3 - 4x = 10$ lies between 2 and 3.

Use trial and improvement to find this solution, correct to one decimal place.

You must show all your trials and their outcomes.

..... [4]



Copyright Information

OCR is committed to seeking permission to reproduce all third-party content that it uses in its assessment materials. OCR has attempted to identify and contact all copyright holders whose work is used in this paper. To avoid the issue of disclosure of answer-related information to candidates, all copyright acknowledgements are reproduced in the OCR Copyright Acknowledgements Booklet. This is produced for each series of examinations and is freely available to download from our public website (www.ocr.org.uk) after the live examination series.

If OCR has unwittingly failed to correctly acknowledge or clear any third-party content in this assessment material, OCR will be happy to correct its mistake at the earliest possible opportunity.

For queries or further information please contact the Copyright Team, First Floor, 9 Hills Road, Cambridge CB2 1GE.

OCR is part of the Cambridge Assessment Group; Cambridge Assessment is the brand name of University of Cambridge Local Examinations Syndicate (UCLES), which is itself a department of the University of Cambridge.