

Candidate forename		Candidate surname	
-----------------------	--	----------------------	--

Centre number						Candidate number				
------------------	--	--	--	--	--	---------------------	--	--	--	--

**OXFORD CAMBRIDGE AND RSA EXAMINATIONS
GENERAL CERTIFICATE OF SECONDARY EDUCATION**

B272A

**MATHEMATICS C
(GRADUATED ASSESSMENT)**

MODULE M2 (SECTION A)

THURSDAY 20 JANUARY 2011: Morning

DURATION: 30 minutes

SUITABLE FOR VISUALLY IMPAIRED CANDIDATES

Candidates answer on the question paper.

OCR SUPPLIED MATERIALS:

None

OTHER MATERIALS REQUIRED:

Geometrical instruments

Tracing paper (optional)

WARNING

**No calculator can be used for
Section A of this paper.**

READ INSTRUCTIONS OVERLEAF

INSTRUCTIONS TO CANDIDATES

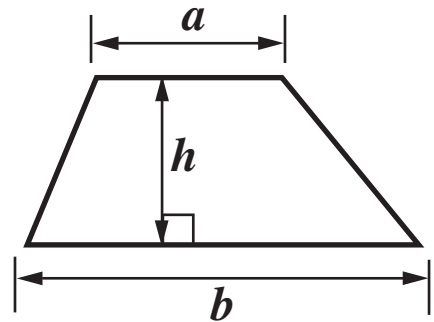
- **Write your name, centre number and candidate number in the boxes on the first page. Please write clearly and in capital letters.**
- **Use black ink. Pencil may be used for graphs and diagrams only.**
- **Read each question carefully. Make sure you know what you have to do before starting your answer.**
- **Show your working. Marks may be given for a correct method even if the answer is incorrect.**
- **Write your answer to each question in the space provided. Additional paper may be used if necessary but you must clearly show your candidate number, centre number and question number(s).**
- **Answer ALL the questions.**

INFORMATION FOR CANDIDATES

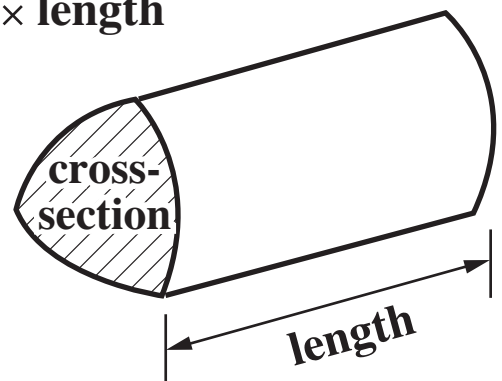
- **The number of marks is given in brackets [] at the end of each question or part question.**
- **The total number of marks for this Section is 25.**

FORMULAE SHEET

$$\text{Area of trapezium} = \frac{1}{2} (a + b)h$$



$$\text{Volume of prism} = (\text{area of cross-section}) \times \text{length}$$



Copyright Information

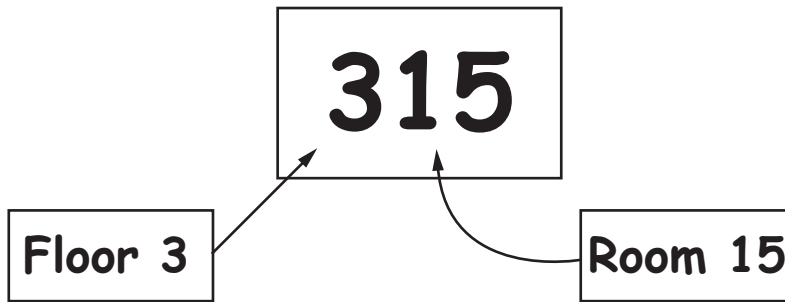
OCR is committed to seeking permission to reproduce all third-party content that it uses in its assessment materials. OCR has attempted to identify and contact all copyright holders whose work is used in this paper. To avoid the issue of disclosure of answer-related information to candidates, all copyright acknowledgements are reproduced in the OCR Copyright Acknowledgements Booklet. This is produced for each series of examinations and is freely available to download from our public website (www.ocr.org.uk) after the live examination series.

If OCR has unwittingly failed to correctly acknowledge or clear any third-party content in this assessment material, OCR will be happy to correct its mistake at the earliest possible opportunity.


For queries or further information please contact the Copyright Team, First Floor, 9 Hills Road, Cambridge CB2 1GE.

OCR is part of the Cambridge Assessment Group; Cambridge Assessment is the brand name of University of Cambridge Local Examinations Syndicate (UCLES), which is itself a department of the University of Cambridge.

- 1 The room doors in a hotel are numbered.
The first digit shows which floor the room is on.**



- (a) These are the doors for the first five rooms on one side of a corridor.**



- (i) What number is on the fifth door?**

(a)(i) _____ [1]

- (ii) What is the mathematical name for the numbers on these doors?**

(ii) _____ [1]

- (b) There are 40 rooms on each floor.
Room number 402 is opposite room 401 and room 404 is opposite room 403 and so on.

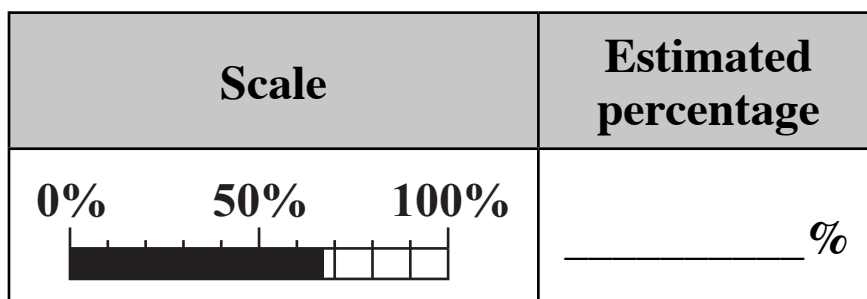
What room is opposite 440?

(b) _____ [1]

- (c) On which floor is room 923?

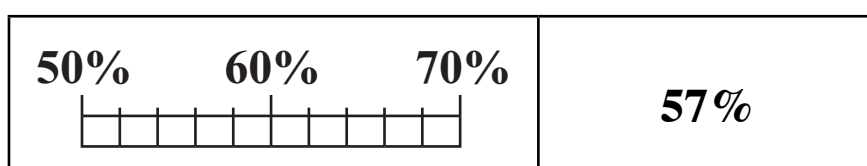
(c) _____ [1]

- 2 (a) Estimate the percentage shown on this scale.



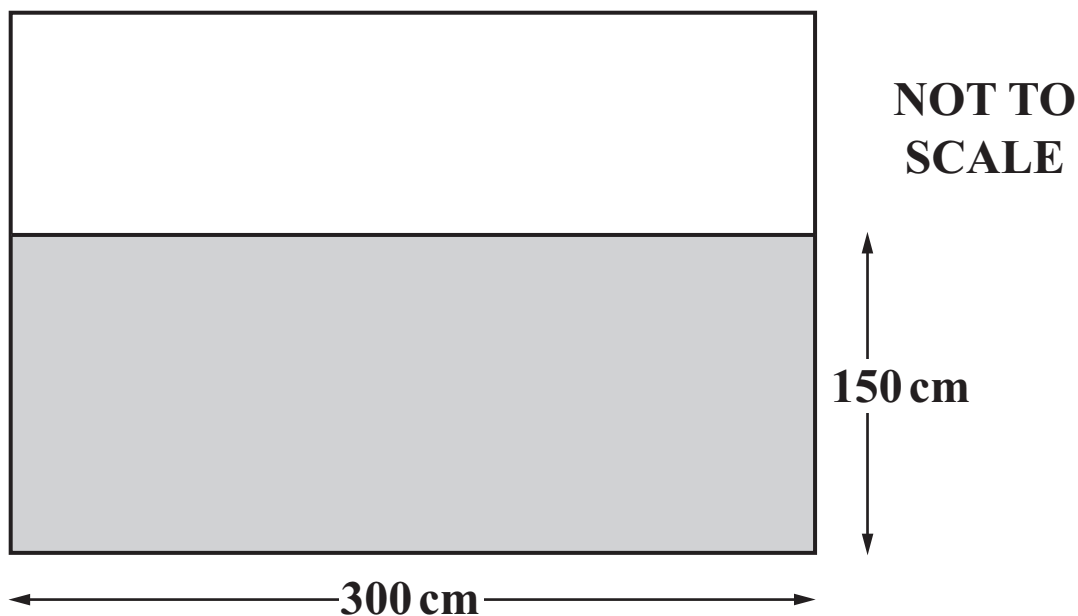
[1]

- (b) Shade this scale to show 57%.



[1]

- 3 Barry is going to tile the shaded part of this wall in his bathroom.**



- (a) What is the length of the wall in metres?**

(a) _____ m [1]

- (b) Barry will use tiles that measure 25 cm by 25 cm.**

- (i) Explain why 12 tiles will fit in a line across the wall.**

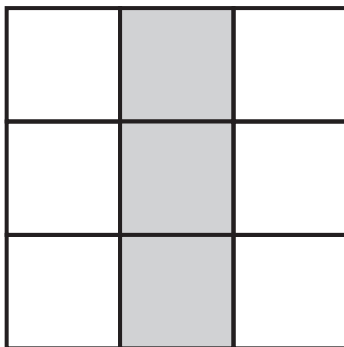
_____ [1]

(ii) How many tiles will Barry need to cover the shaded part of the wall?

(b)(ii) _____ [3]

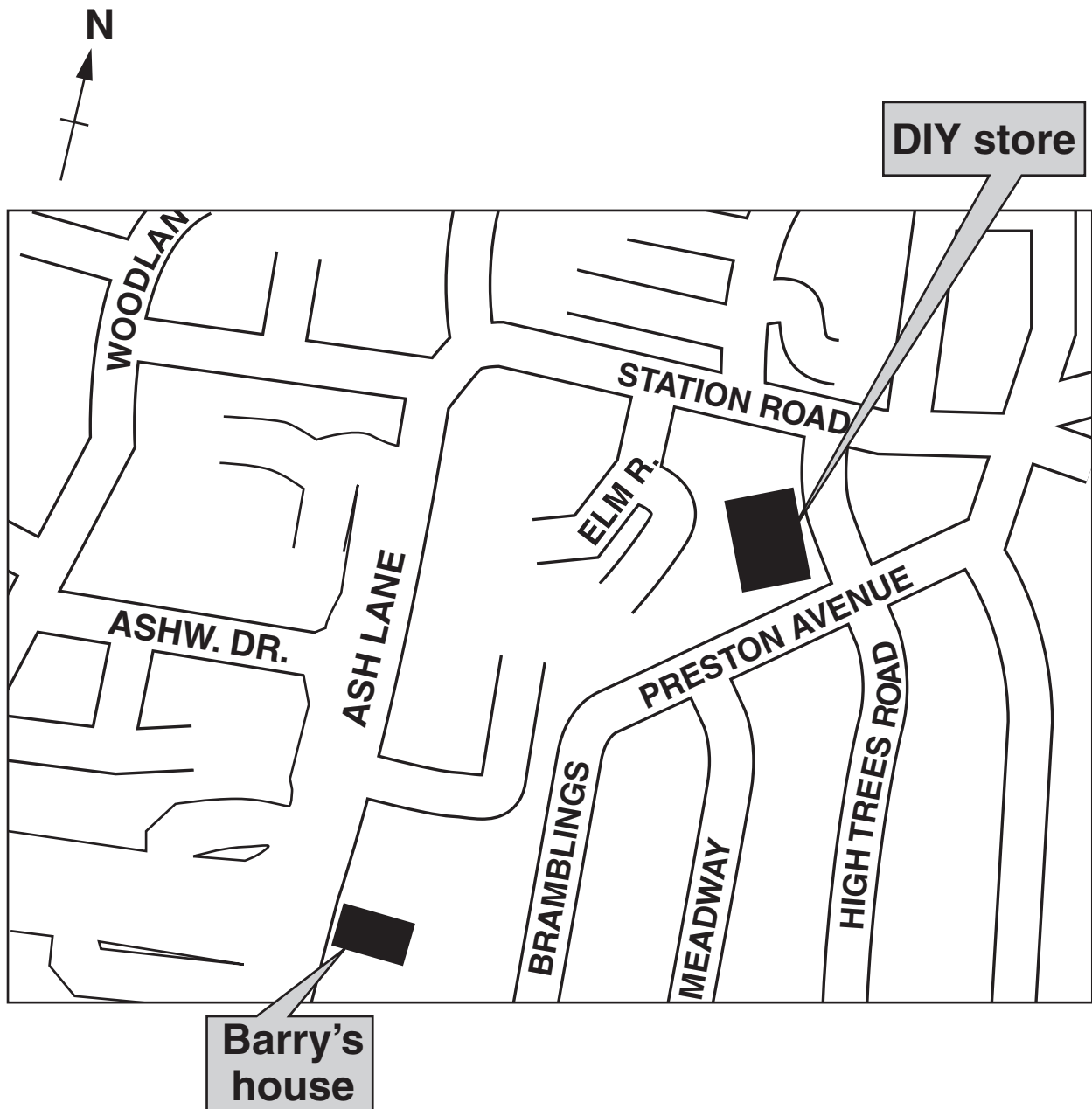
(c) Barry plans to use a repeating symmetrical pattern of grey and white tiles.

Shade TWO more squares so that this pattern has exactly four lines of symmetry.



[2]

- (d) Barry will collect the tiles from the DIY store in High Trees Road. He looks on this street plan.



Choose words from this list to complete the instructions for the route from Barry's house to the DIY store.

first	second	north	south
right	left	clockwise	anticlockwise

- 1. Come out of the house and turn right.**
- 2. Drive _____ along Ash Lane.**
- 3. Turn _____ along Station Road.**
- 4. Take the _____ turn on the right.**

[3]

(e) Each tile weighs 180 g and they are sold in packs of 10.

**What is the weight of one pack of tiles?
Give your answer in kilograms.**

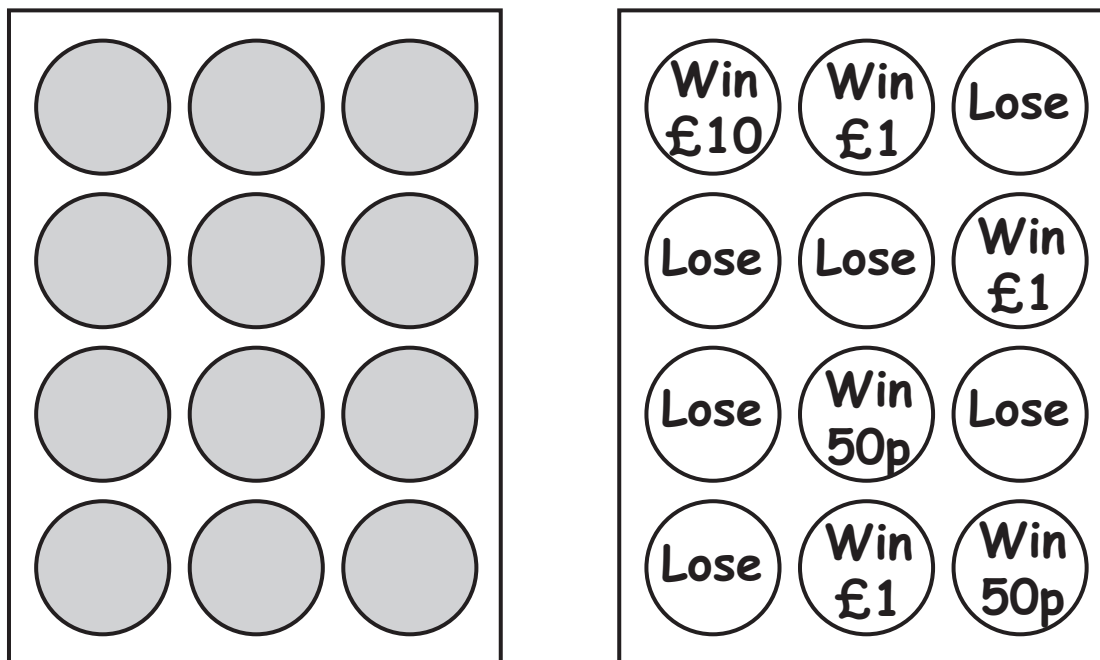
(e) _____ kg [2]

- (f) When Barry gets to the DIY store he finds that have **25% off** tiles.
One pack of tiles normally costs £22.

Calculate how much money Barry saves when he buys one pack of tiles in the sale.

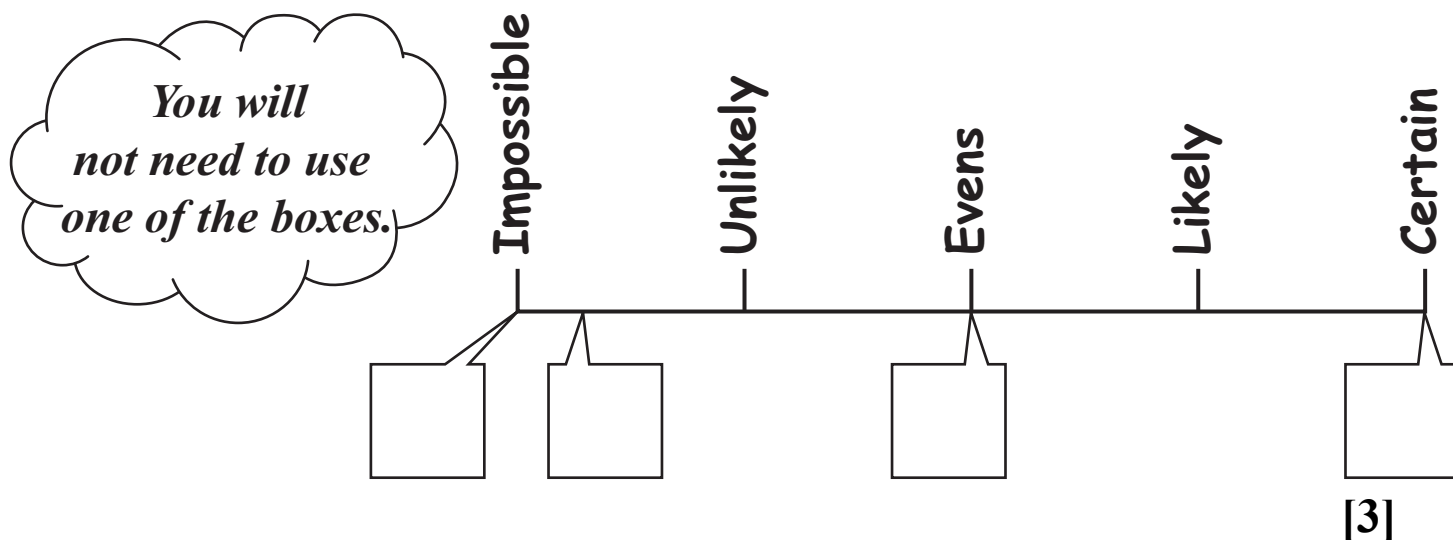
(f) £ _____ [2]

- 4 Katie has a scratch card that has these prizes hidden behind the silver circles.
She has to scratch off ONE circle.



Write A, B or C in the correct box on the probability scale to show the probability that

- A Katie wins a prize,
- B Katie wins £10,
- C Katie wins £100.



TURN OVER FOR QUESTION 5

- 5 Gemma makes a notice for her classroom notice board. She joins three sheets of A4 paper together so that there is no overlap, as shown below.

A4 paper
measures
21 cm by
29.7cm



Not to
scale

How long is her finished notice?

_____ cm [2]