



F

**GENERAL CERTIFICATE OF SECONDARY EDUCATION
MATHEMATICS C (GRADUATED ASSESSMENT)**

B281A

Terminal Paper – Section A (Foundation Tier)

Candidates answer on the question paper.

OCR supplied materials:
None

Other materials required:

- Geometrical instruments
- Tracing paper (optional)
- Pie chart scale (optional)

**Tuesday 11 January 2011
Morning**

Duration: 1 hour



Candidate forename		Candidate surname	
--------------------	--	-------------------	--

Centre number							Candidate number				
---------------	--	--	--	--	--	--	------------------	--	--	--	--

INSTRUCTIONS TO CANDIDATES

- Write your name, centre number and candidate number in the boxes above. Please write clearly and in capital letters.
- Use black ink. Pencil may be used for graphs and diagrams only.
- Read each question carefully. Make sure you know what you have to do before starting your answer.
- Write your answer to each question in the space provided. Additional paper may be used if necessary but you must clearly show your candidate number, centre number and question number(s).
- Show your working. Marks may be given for a correct method even if the answer is incorrect.
- Answer **all** the questions.
- Do **not** write in the bar codes.

INFORMATION FOR CANDIDATES

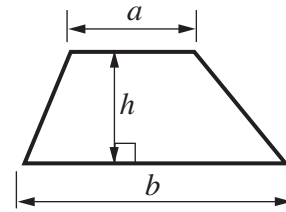
- The number of marks is given in brackets [] at the end of each question or part question.
- The total number of marks for this Section is **50**.
- This document consists of **12** pages. Any blank pages are indicated.

WARNING

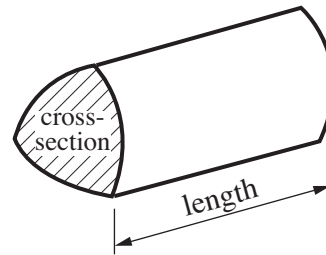
No calculator can be used for Section A of this paper

Formulae Sheet

$$\text{Area of trapezium} = \frac{1}{2} (a + b)h$$



$$\text{Volume of prism} = (\text{area of cross-section}) \times \text{length}$$



PLEASE DO NOT WRITE ON THIS PAGE

Copyright Information

OCR is committed to seeking permission to reproduce all third-party content that it uses in its assessment materials. OCR has attempted to identify and contact all copyright holders whose work is used in this paper. To avoid the issue of disclosure of answer-related information to candidates, all copyright acknowledgements are reproduced in the OCR Copyright Acknowledgements Booklet. This is produced for each series of examinations and is freely available to download from our public website (www.ocr.org.uk) after the live examination series.

If OCR has unwittingly failed to correctly acknowledge or clear any third-party content in this assessment material, OCR will be happy to correct its mistake at the earliest possible opportunity.

For queries or further information please contact the Copyright Team, First Floor, 9 Hills Road, Cambridge CB2 1GE.

OCR is part of the Cambridge Assessment Group; Cambridge Assessment is the brand name of University of Cambridge Local Examinations Syndicate (UCLES), which is itself a department of the University of Cambridge.

1 (a) In the 2008 Olympic Games, Heather Fell won the silver medal in the Modern Pentathlon. She scored 5752 points.

(i) Write 5752 in words.

.....
 [1]

(ii) The gold medallist scored 40 points more than Heather.

How many points did the gold medallist score?

(a)(ii) [1]

(iii) The bronze medallist scored 80 points fewer than Heather.

How many points did the bronze medallist score?


(iii) [1]

(b) This table shows how many medals were won by Great Britain in the 2008 Olympics.

Gold	19
Silver	13
Bronze	
Total	47

Complete the table by working out the number of Bronze medals. [2]

2 Draw lines connecting each shape to its correct name.
One has been done for you.

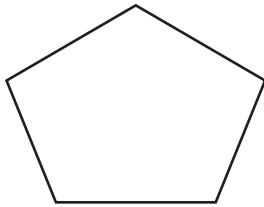


hexagon

parallelogram




rhombus




trapezium

pentagon



pyramid









cone

cylinder

[4]

3 This pictogram shows how many sandwiches a shop sold one week.

Monday	
Tuesday	
Wednesday	
Thursday	
Friday	
Saturday	

Key:  represents 4 sandwiches

(a) On which day were the most sandwiches sold?

(a) [1]

(b) How many sandwiches were sold on Wednesday?

(b) [1]

(c) How many more sandwiches were sold on Friday than on Saturday?

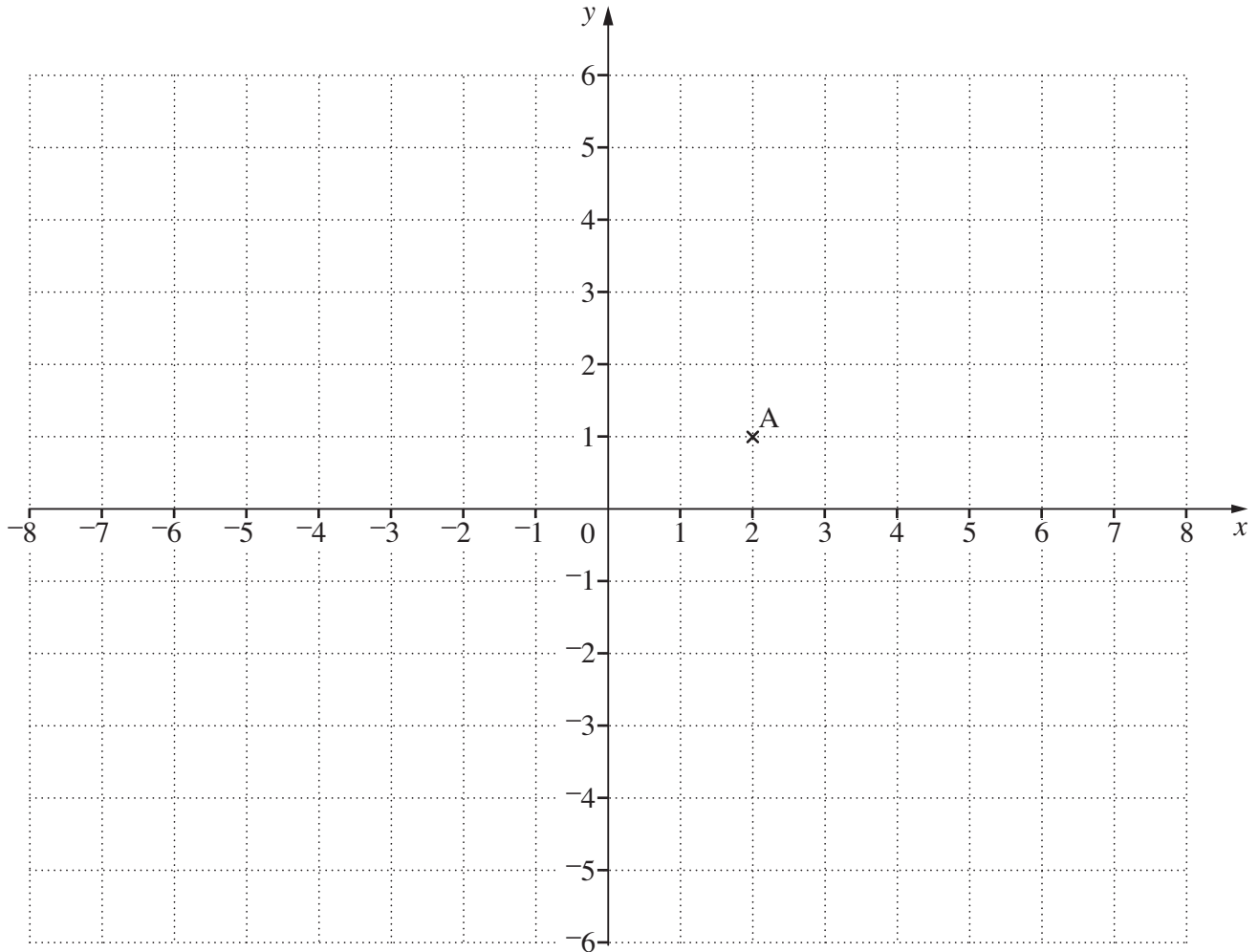
(c) [1]

(d) Fiona bought two sandwiches, each costing £1.98.
She paid with a £5 note.

How much change did she get?

(d) £ [2]

4



(a) Write down the coordinates of point A.

(a) (..... ,) [1]

(b) Plot the point $(-3, -2)$.
Label it B.

[1]

(c) (i) Mark on the diagram a point C so that ABC is an isosceles triangle.

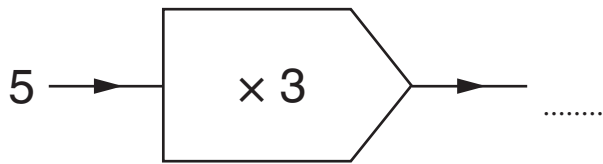
[1]

(ii) Write down the coordinates of C.

(c)(ii) (..... ,) [1]

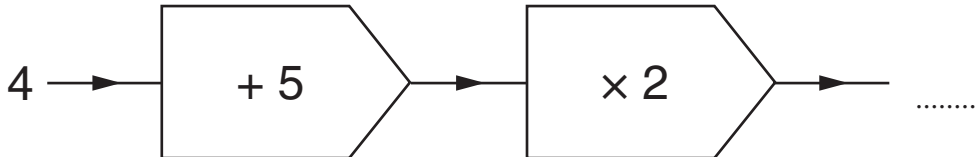
5 (a) Find the outputs from these function machines.

(i)



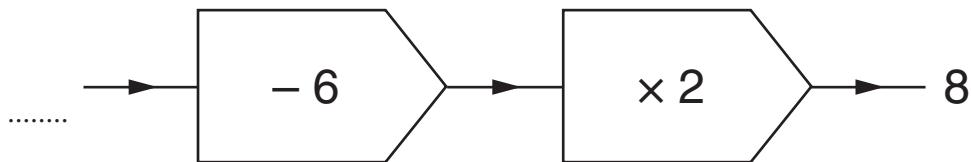
[1]

(ii)



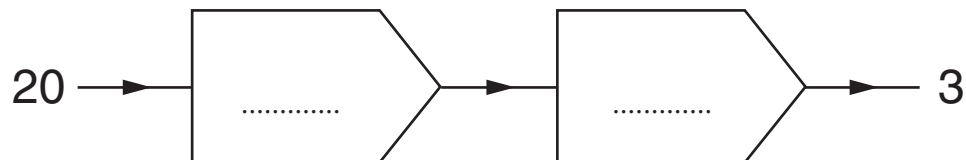
[1]

(b) Find the input for this function machine.



[2]

(c) Complete this function machine so that the input gives the correct output.



[2]

- 6 (a) Tickets to watch a tennis tournament cost £5.85.
317 people paid to watch the tournament.

Estimate the total paid for the tickets.
Show the estimates you use.

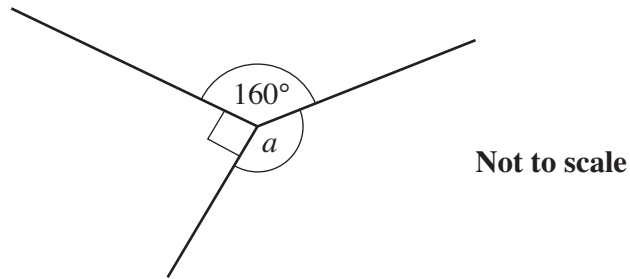
(a) × = £ [2]

- (b) The tournament used 37 boxes of tennis balls.
Each box of balls cost £14.

Work out the **exact** total cost of the balls for the tournament.
You must show your working.

(b) £ [3]

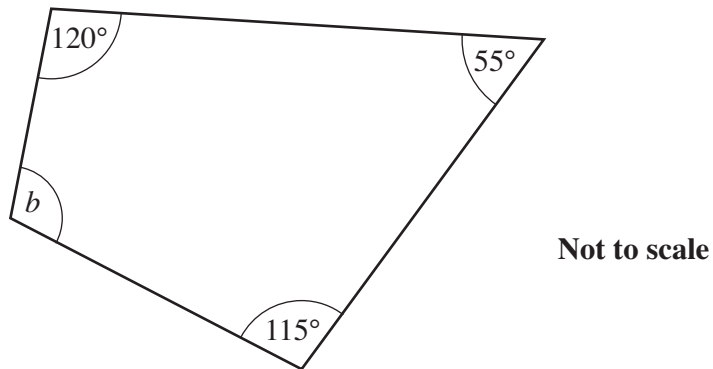
7 (a)



Find the size of angle a .
Give a reason for your answer.

$a = \dots\dots\dots^\circ$ because $\dots\dots\dots$
 $\dots\dots\dots$ [2]

(b)



Find the size of angle b .
Give a reason for your answer.

$b = \dots\dots\dots^\circ$ because $\dots\dots\dots$
 $\dots\dots\dots$ [2]

10

- 8** A pizza shop gives a 15% discount if the customer collects the pizza.
The price of a Hawaiian pizza is £8.40.
Jane decides to collect the pizza.

Work out how much Jane pays for the pizza.

£ [3]

9 These are the pulse rates, in beats per minute, of 20 members of an exercise class at the start of a session.

92 85 77 52 61 86 58 82 72 73
64 75 76 77 90 87 88 83 72 69

(a) Construct an **ordered** stem and leaf table for the data.

.....
.....
.....
.....
.....

Key [3]

(b) (i) Find the median and range of the pulse rates at the start of the session.

(b)(i) median beats per minute
rangebeats per minute [3]

(ii) The pulse rates of the same 20 members were also recorded at the end of the session. The median was 81 beats per minute and the range was 40 beats per minute.

Make two comments comparing their pulse rates at the start and end of the session.

1

.....

2

..... [2]

TURN OVER FOR QUESTION 10

- 10 A stone is thrown vertically upwards.
Its height is given by this formula.

$$h = 30t - 5t^2$$

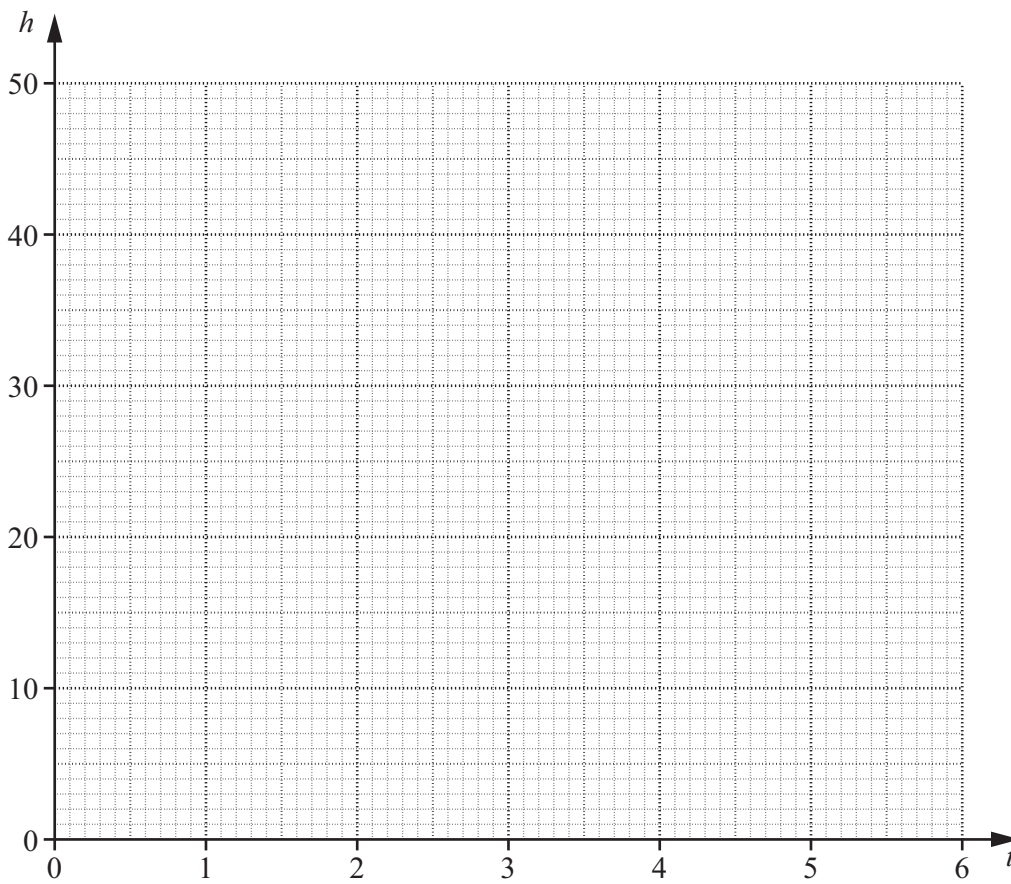
h is the height above the ground in metres, t seconds after it is thrown.

- (a) Complete the table for $h = 30t - 5t^2$.

t	0	1	2	3	4	5	6
h	0			45			0

[2]

- (b) (i) Draw the graph of $h = 30t - 5t^2$.



[2]

- (ii) Find the values of t when the stone is 20 m above the ground.

(b)(ii) [2]