

GENERAL CERTIFICATE OF SECONDARY EDUCATION
MATHEMATICS C (GRADUATED ASSESSMENT)
Terminal Paper – Section A (Higher Tier)

B282A

Candidates answer on the Question Paper

OCR Supplied Materials:
None

Other Materials Required:

- Geometrical instruments
- Tracing paper (optional)

Monday 7 June 2010
Afternoon

Duration: 1 hour



Candidate Forename		Candidate Surname	
--------------------	--	-------------------	--

Centre Number						Candidate Number				
---------------	--	--	--	--	--	------------------	--	--	--	--

MODIFIED LANGUAGE


INSTRUCTIONS TO CANDIDATES

- Write your name clearly in capital letters, your Centre Number and Candidate Number in the boxes above.
- Use black ink. Pencil may be used for graphs and diagrams only.
- Read each question carefully and make sure that you know what you have to do before starting your answer.
- Show your working. Marks may be given for a correct method even if the answer is incorrect.
- Answer **all** the questions.
- Do **not** write in the bar codes.
- Write your answer to each question in the space provided. Additional paper may be used if necessary but you must clearly show your Candidate Number, Centre Number and question number(s).

INFORMATION FOR CANDIDATES

- The number of marks is given in brackets [] at the end of each question or part question.
- The total number of marks for this Section is **50**.
- This document consists of **12** pages. Any blank pages are indicated.

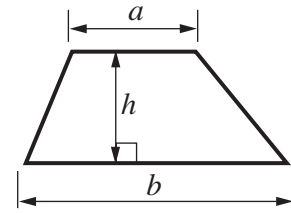
WARNING



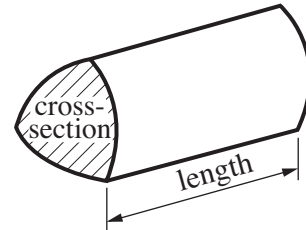
No calculator can be used for Section A of this paper

Formulae Sheet

Area of trapezium = $\frac{1}{2}(a + b)h$



Volume of prism = (area of cross-section) \times length

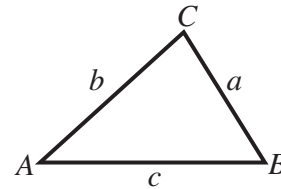


In any triangle ABC

Sine rule $\frac{a}{\sin A} = \frac{b}{\sin B} = \frac{c}{\sin C}$

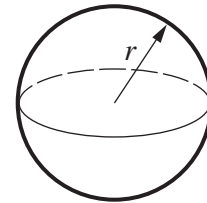
Cosine rule $a^2 = b^2 + c^2 - 2bc \cos A$

Area of triangle = $\frac{1}{2}ab \sin C$



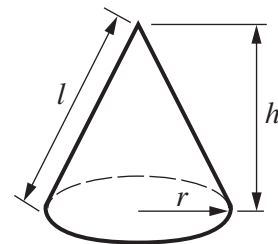
Volume of sphere = $\frac{4}{3}\pi r^3$

Surface area of sphere = $4\pi r^2$



Volume of cone = $\frac{1}{3}\pi r^2 h$

Curved surface area of cone = $\pi r l$



The Quadratic Equation

The solutions of $ax^2 + bx + c = 0$, where $a \neq 0$, are given by

$$x = \frac{-b \pm \sqrt{b^2 - 4ac}}{2a}$$

PLEASE DO NOT WRITE ON THIS PAGE

1 Work out.

$$\frac{4}{5} - \frac{3}{7}$$

..... [2]

2 (a) The n th term of a sequence is $5n - 2$.

Work out the first 3 terms.

(a) [2]

(b) These are the first 5 terms of a different sequence.

7 11 15 19 23

Find an expression for the n th term of this sequence.

(b) [2]

3 Solve.

$$5n + 7 = 2n - 5$$

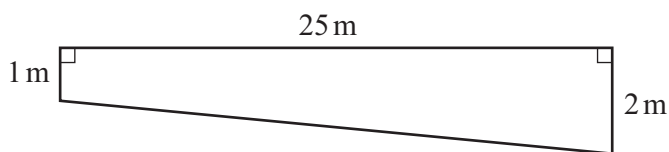
..... [3]

- 4 (a) The length of a swimming pool is 25 m.
James wants to swim a total distance of 1.2 km.

How many lengths will he need to swim?

(a) [3]

- (b) The cross-section of the swimming pool is a trapezium.

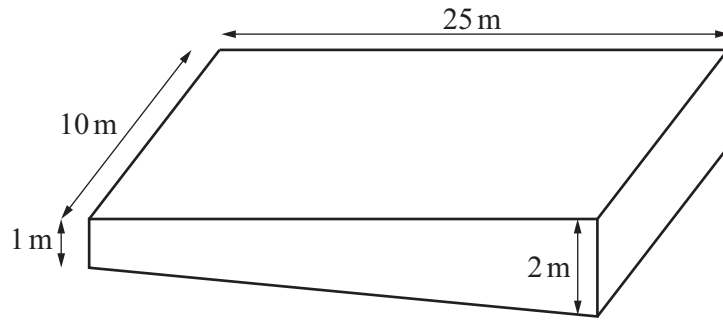


Not to scale

- (i) Work out the area of the cross-section.

(b)(i)m² [2]

- (ii) The width of the pool is 10 m.



Work out the capacity of the pool in litres.
 (1 m³ = 1000 litres)

(ii) litres [2]

- (c) After his swim, James rests in the hot tub.
 The cross-section of the hot tub is a regular 10-sided polygon.

Show that the interior angle of the polygon is 144°.

.....

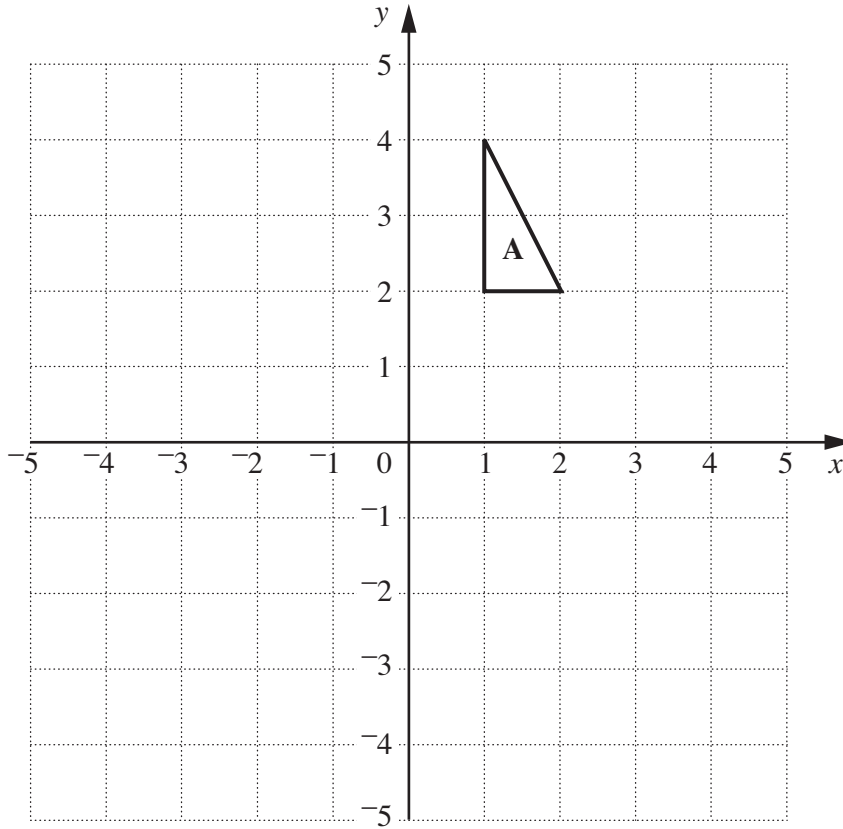
.....

.....

.....

.....

..... [2]



(a) Reflect triangle **A** in the line $y = 0$.
Label the image **B**. [1]

(b) Rotate triangle **A** 90° anticlockwise with centre $(0, 0)$.
Label the image **C**. [2]

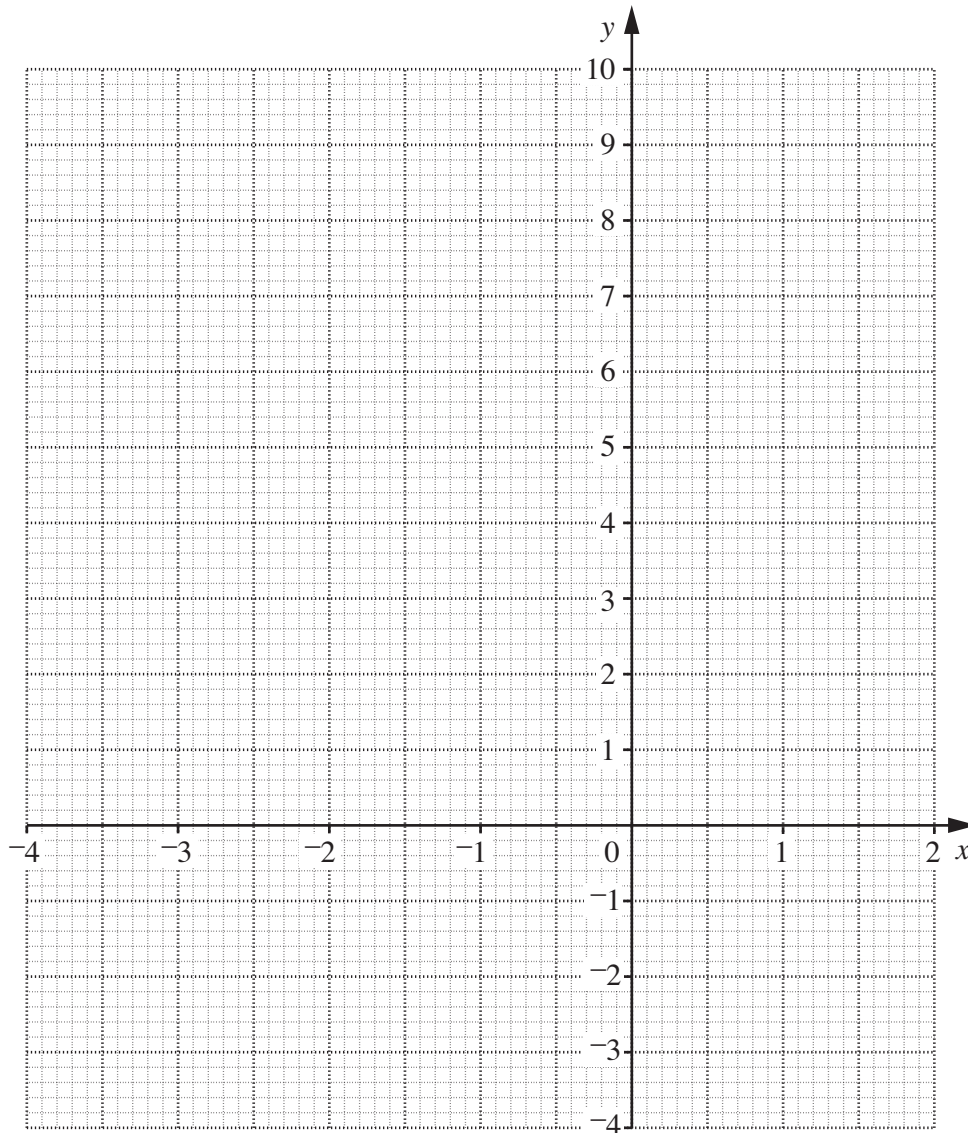
(c) Describe fully the **single** transformation which maps triangle **B** onto triangle **C**.
.....
..... [2]

- 6 (a) Complete this table for $y = x^2 + 3x$.

x	-4	-3	-2	-1	0	1	2
y	4	0	-2		0	4	

[2]

- (b) Draw the graph of $y = x^2 + 3x$.



[2]

- (c) Use your graph to solve the equation $x^2 + 3x = 1$.
Write your answers correct to 1 decimal place.

(c) [2]

- 7 Pete has ordered some souvenir mugs to sell.
 They are delivered in boxes.
 When he opens the first box he finds a faulty mug, so he checks all the mugs in this box.

Condition	Number of mugs
Alright	30
Faulty	18

- (a) A mug is chosen at random from the first box.

Show that the probability that the mug is faulty is $\frac{3}{8}$.

.....
 [1]

- (b) Altogether Pete has ordered 400 mugs.

About how many would you expect to be faulty?
 Show your working clearly.

(b) [2]

- (c) Pete also ordered some souvenir pens.

The probability that a pen is faulty is $\frac{1}{100}$.

If Pete sold a mug and a pen without checking them first, what is the probability of **both** the mug and the pen being faulty?

(c) [2]

8 (a) Factorise and solve.

$$x^2 - 5x - 14 = 0$$

(a) [3]

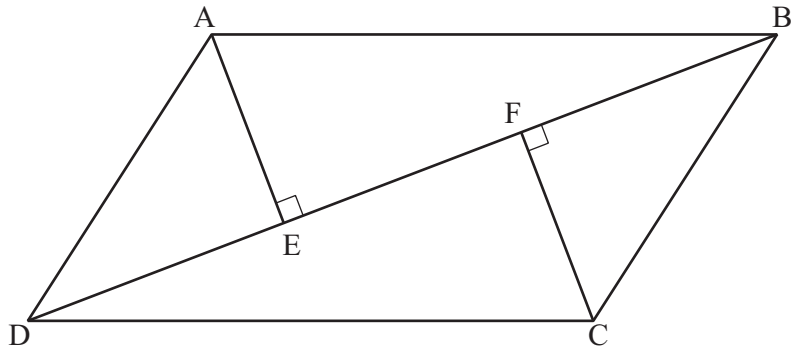
(b) Solve algebraically.

$$\begin{aligned}5x - 2y &= 19 \\6x + y &= 16\end{aligned}$$

(b) $x =$

$y =$ [3]

- 9 ABCD is a parallelogram.
AE and CF are perpendicular to the diagonal BD.



Not to scale

Prove that triangles ABE and CDF are congruent.

.....

.....

.....

.....

..... [3]

10 Work out.

(a) (i) 7^0

(a)(i) [1]

(ii) $125^{-\frac{2}{3}}$

(ii) [3]

(b) Express $0.\dot{4}2\dot{3}$ as a fraction in its simplest form.

(b) [3]

PLEASE DO NOT WRITE ON THIS PAGE



Copyright Information

OCR is committed to seeking permission to reproduce all third-party content that it uses in its assessment materials. OCR has attempted to identify and contact all copyright holders whose work is used in this paper. To avoid the issue of disclosure of answer-related information to candidates, all copyright acknowledgements are reproduced in the OCR Copyright Acknowledgements Booklet. This is produced for each series of examinations, is given to all schools that receive assessment material and is freely available to download from our public website (www.ocr.org.uk) after the live examination series.

If OCR has unwittingly failed to correctly acknowledge or clear any third-party content in this assessment material, OCR will be happy to correct its mistake at the earliest possible opportunity.

For queries or further information please contact the Copyright Team, First Floor, 9 Hills Road, Cambridge CB2 1GE.

OCR is part of the Cambridge Assessment Group; Cambridge Assessment is the brand name of University of Cambridge Local Examinations Syndicate (UCLES), which is itself a department of the University of Cambridge.