

**GENERAL CERTIFICATE OF SECONDARY EDUCATION  
MATHEMATICS C (GRADUATED ASSESSMENT)**

**B281A**

Terminal Paper – Section A (Foundation Tier)

Candidates answer on the Question Paper

**OCR Supplied Materials:**  
None

- Other Materials Required:**
- Geometrical instruments
  - Tracing paper (optional)
  - Pie chart scale (optional)

**Monday 7 June 2010  
Afternoon**

**Duration: 1 hour**



Candidate Forename		Candidate Surname	
--------------------	--	-------------------	--

Centre Number						Candidate Number				
---------------	--	--	--	--	--	------------------	--	--	--	--

**MODIFIED LANGUAGE**


**INSTRUCTIONS TO CANDIDATES**

- Write your name clearly in capital letters, your Centre Number and Candidate Number in the boxes above.
- Use black ink. Pencil may be used for graphs and diagrams only.
- Read each question carefully and make sure that you know what you have to do before starting your answer.
- Show your working. Marks may be given for a correct method even if the answer is incorrect.
- Answer **all** the questions.
- Do **not** write in the bar codes.
- Write your answer to each question in the space provided. Additional paper may be used if necessary but you must clearly show your Candidate Number, Centre Number and question number(s).

**INFORMATION FOR CANDIDATES**

- The number of marks is given in brackets [ ] at the end of each question or part question.
- The total number of marks for this Section is **50**.
- This document consists of **16** pages. Any blank pages are indicated.

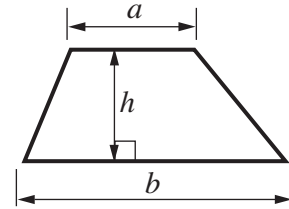
**WARNING**



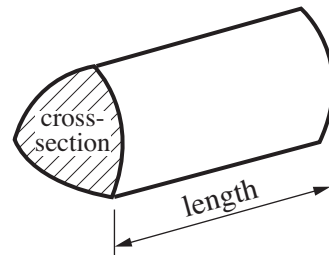
**No calculator can be used for Section A of this paper**

## Formulae Sheet

$$\text{Area of trapezium} = \frac{1}{2} (a + b)h$$



$$\text{Volume of prism} = (\text{area of cross-section}) \times \text{length}$$



**PLEASE DO NOT WRITE ON THIS PAGE**

1 (a) At a Byton Town football match, there were 25 062 spectators.

(i) Write 25 062 in words.

.....  
..... [1]

(ii) Write 25 062 to the nearest hundred.

(a)(ii)..... [1]

(b) During the season, Byton Town scored 80 goals.  
22 goals were scored against them.

Work out  $80 - 22$ .

(b) ..... [1]

9	11	12	15	21	30
---	----	----	----	----	----

(a) Use numbers from this list to complete the following.

(i) ..... is a multiple of 7. [1]

(ii) ..... is a factor of ..... [1]

(iii) ..... is an even number. [1]

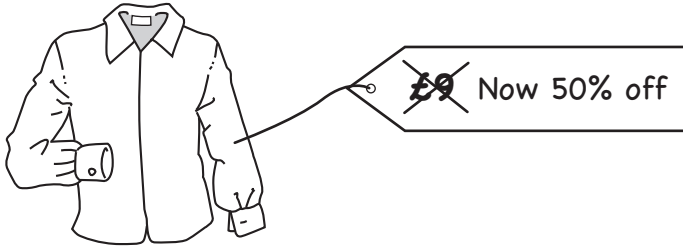
(iv) ..... is a prime number. [1]

(b) Explain how you can tell that 9 is a square number.

.....  
..... [1]

3 Here are some offers in the sales.

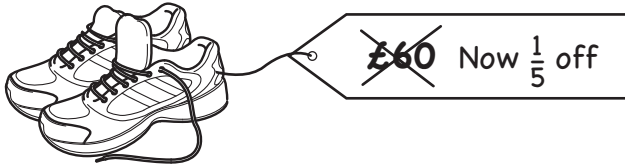
(a)



Work out 50% of £9.

(a) £..... [1]

(b)



Work out  $\frac{1}{5}$  of £60.

(b) £ ..... [1]

(c)

30% off in this sale

Write 30% as a decimal.

(c) ..... [1]

(d)

Special offer -  
prices reduced by 12%

Write 12% as a fraction in its simplest form.

(d) ..... [2]

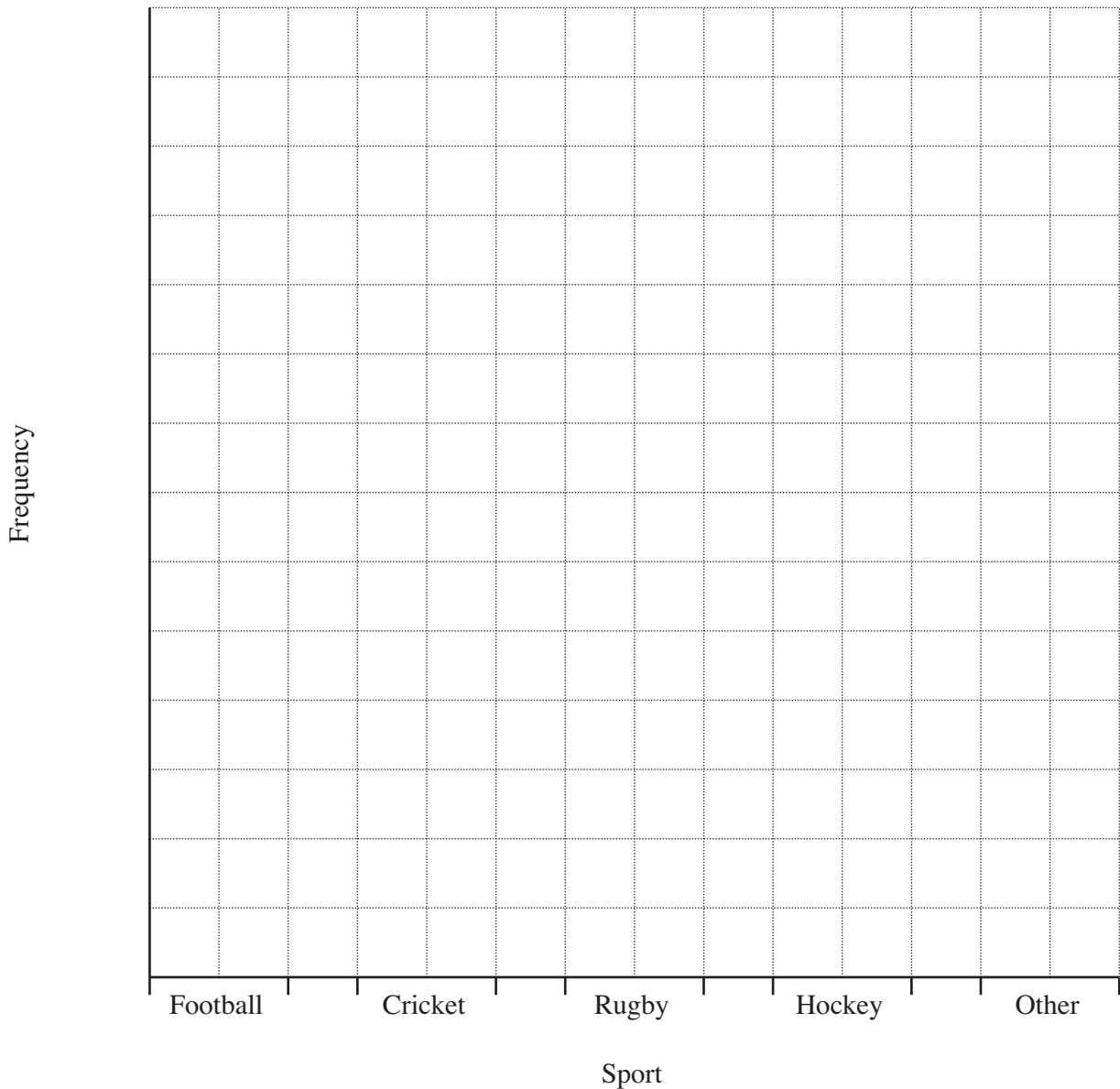
- 4 (a) Ahmed asked some people what was their favourite sport. This table summarises their responses.

Sport	Frequency
Football	9
Cricket	12
Rugby	7
Hockey	3
Other	10

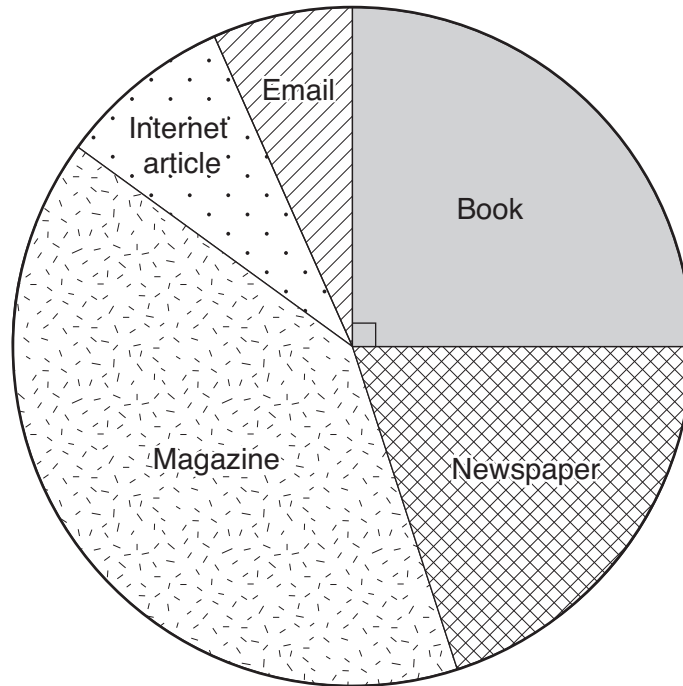
- (i) Which sport was the mode?

(a)(i) ..... [1]

- (ii) Draw a bar chart to represent the responses.



- (b) Jane asked some people what was their favourite sort of reading. This pie chart summarises the results.



- (i) Use the pie chart to complete this sentence.

Reading a ..... is twice as popular as reading a Newspaper. [1]

- (ii) 60 people answered altogether.

How many chose Book?

(b)(ii) ..... [2]

5 A college has a new building with bedrooms for students.  
The building has 4 floors.  
There are 35 bedrooms on each floor. Each bedroom is for one student.

(a) How many bedrooms are there in the building altogether?

(a) ..... [2]

(b) In each bedroom there are three bookshelves.  
Two are 1.4 m long and one is 2.3 m long.

Calculate the total length of the bookshelves in one bedroom.

(b) ..... m [2]

(c) On each floor, 35 students share 5 kitchens.  
The same number of students use each kitchen.

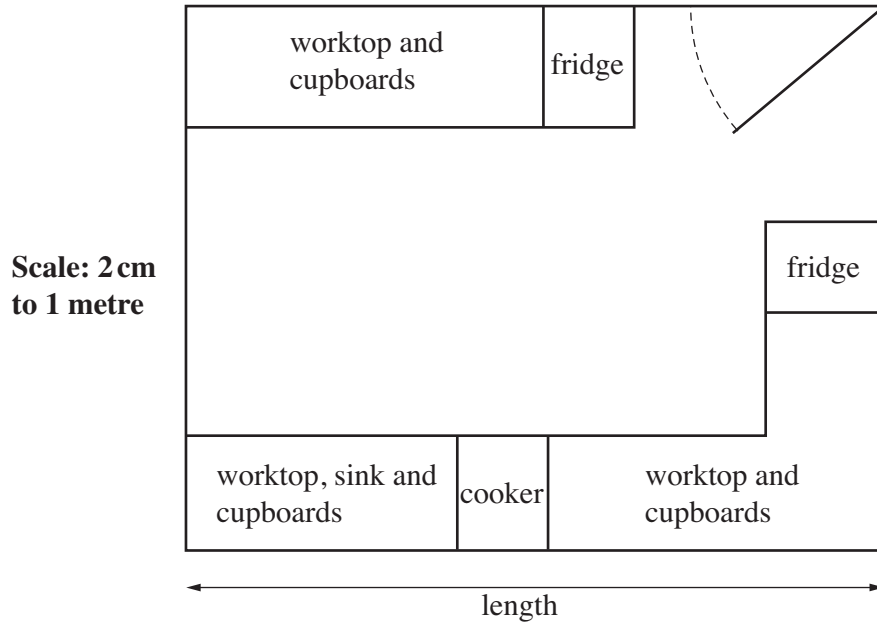
How many students use one kitchen?

(c) ..... [2]



(d) Here is a plan view of one of the kitchens.

The scale is 2 cm to 1 metre.



What is the length of the real kitchen?

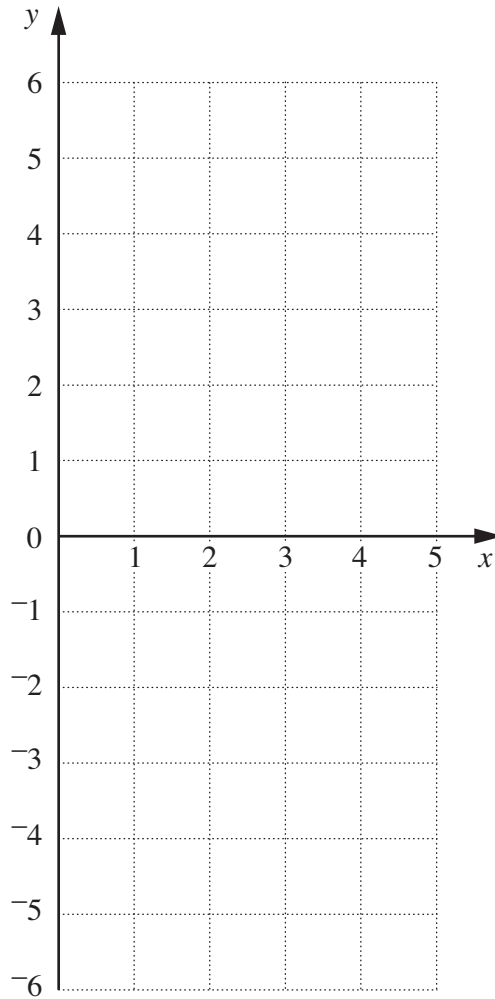
(d) ..... m [2]

6 (a) Complete this table for  $y = 2x - 5$ .

$x$	0	2	4
$y$	-5		

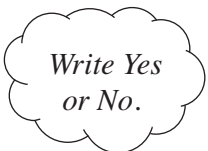
[1]

(b) Draw the graph of  $y = 2x - 5$ .



[2]

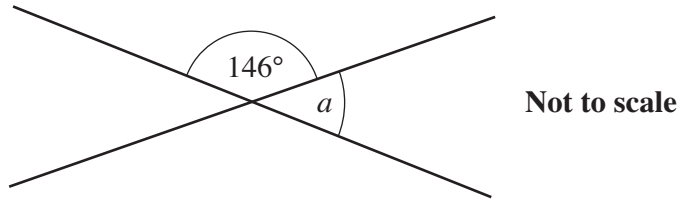
(c) Is the point (12, 9) on the line  $y = 2x - 5$  if the line is drawn far enough? Explain how you get your answer.



..... because .....

..... [1]

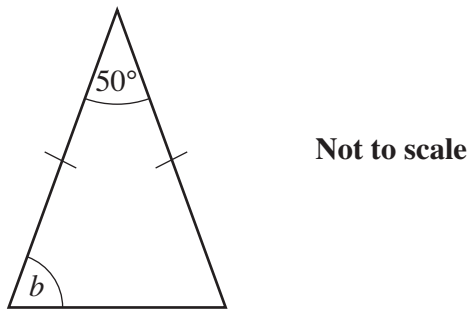
7 (a)



Find the size of angle  $a$ .  
Give a reason for your answer.

$a = \dots\dots\dots^\circ$  because  $\dots\dots\dots$   
 $\dots\dots\dots$  [2]

(b)



Find the size of angle  $b$ .  
Give reasons for your answer.

$b = \dots\dots\dots^\circ$  because  $\dots\dots\dots$   
 $\dots\dots\dots$   
 $\dots\dots\dots$  [3]

8 Work out.

(a)  $2^3 \times 5^2$

(a) ..... [2]

(b)  $\frac{4}{5} - \frac{3}{7}$

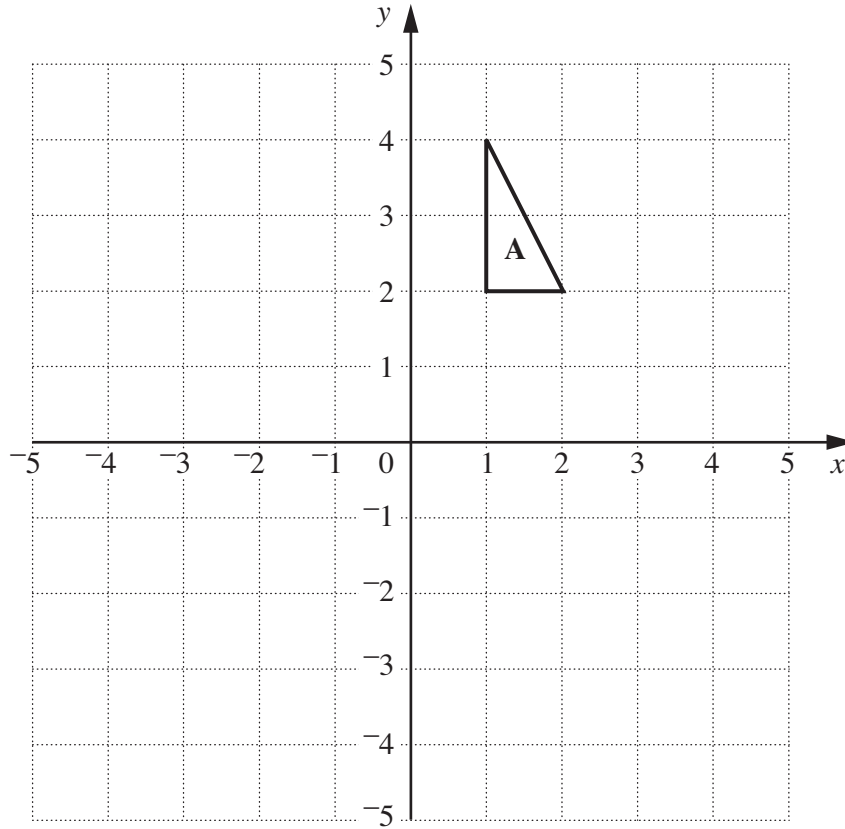
(b) ..... [2]

9 Solve.

$$2x + 1 = 2(3x - 4)$$

..... [3]

10



- (a) Reflect triangle **A** in the line  $y = 0$ .  
Label the image **B**.

[1]

- (b) Rotate triangle **A**  $90^\circ$  anticlockwise with centre  $(0, 0)$ .  
Label the image **C**.

[2]

- 11 Pete has ordered some souvenir mugs to sell.  
 They are delivered in boxes.  
 When he opens the first box he finds a faulty mug, so he checks all the mugs in this box.

Condition	Number of mugs
Alright	30
Faulty	18

- (a) A mug is chosen at random from the first box.

Show that the probability that the mug is faulty is  $\frac{3}{8}$ .

.....  
 ..... [1]

- (b) Altogether Pete has ordered 400 mugs.

About how many would you expect to be faulty?  
 Show your working clearly.

(b) ..... [2]

**PLEASE DO NOT WRITE ON THIS PAGE**



**Copyright Information**

OCR is committed to seeking permission to reproduce all third-party content that it uses in its assessment materials. OCR has attempted to identify and contact all copyright holders whose work is used in this paper. To avoid the issue of disclosure of answer-related information to candidates, all copyright acknowledgements are reproduced in the OCR Copyright Acknowledgements Booklet. This is produced for each series of examinations, is given to all schools that receive assessment material and is freely available to download from our public website ([www.ocr.org.uk](http://www.ocr.org.uk)) after the live examination series.

If OCR has unwittingly failed to correctly acknowledge or clear any third-party content in this assessment material, OCR will be happy to correct its mistake at the earliest possible opportunity.

For queries or further information please contact the Copyright Team, First Floor, 9 Hills Road, Cambridge CB2 1GE.

OCR is part of the Cambridge Assessment Group; Cambridge Assessment is the brand name of University of Cambridge Local Examinations Syndicate (UCLES), which is itself a department of the University of Cambridge.