

Candidate Forename		Candidate Surname	
--------------------	--	-------------------	--

Centre Number						Candidate Number				
---------------	--	--	--	--	--	------------------	--	--	--	--

**OXFORD CAMBRIDGE AND RSA EXAMINATIONS
GENERAL CERTIFICATE OF SECONDARY EDUCATION**

B272B

**MATHEMATICS C
(GRADUATED ASSESSMENT)**

MODULE M2 – SECTION B

MONDAY 21 JUNE 2010: Afternoon

DURATION: 30 minutes

SUITABLE FOR VISUALLY IMPAIRED CANDIDATES

Candidates answer on the Question Paper

OCR SUPPLIED MATERIALS:

None

OTHER MATERIALS REQUIRED:

Geometrical instruments

Tracing paper (optional)

Electronic calculator

READ INSTRUCTIONS OVERLEAF

INSTRUCTIONS TO CANDIDATES

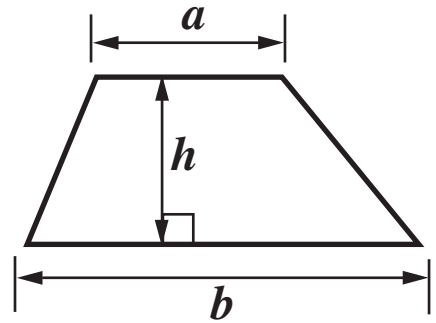
- Write your name clearly in capital letters, your Centre Number and Candidate Number in the boxes on the first page.
- Use black ink. Pencil may be used for graphs and diagrams only.
- Read each question carefully and make sure that you know what you have to do before starting your answer.
- Show your working. Marks may be given for a correct method even if the answer is incorrect.
- Answer ALL the questions.
- Write your answer to each question in the space provided. Additional paper may be used if necessary but you must clearly show your Candidate Number, Centre Number and question number(s).

INFORMATION FOR CANDIDATES

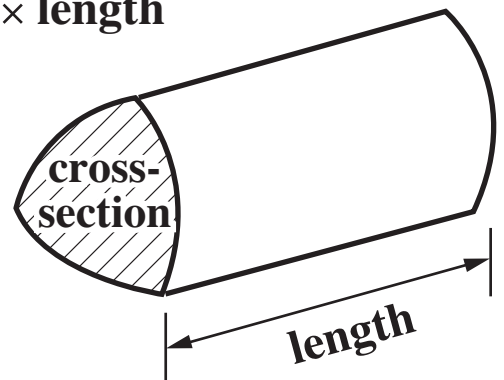
- The number of marks is given in brackets [] at the end of each question or part question.
- Section B starts with question 4.
- You are expected to use a calculator in Section B of this paper.
- The total number of marks for this Section is 25.

FORMULAE SHEET

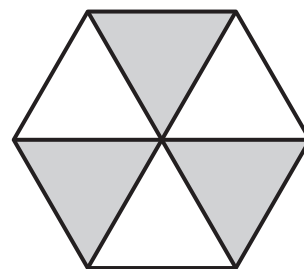

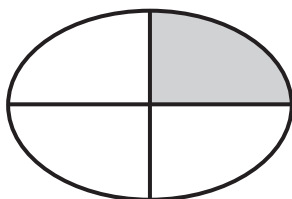
Area of trapezium = $\frac{1}{2} (a + b)h$



Volume of prism = (area of cross-section) \times length



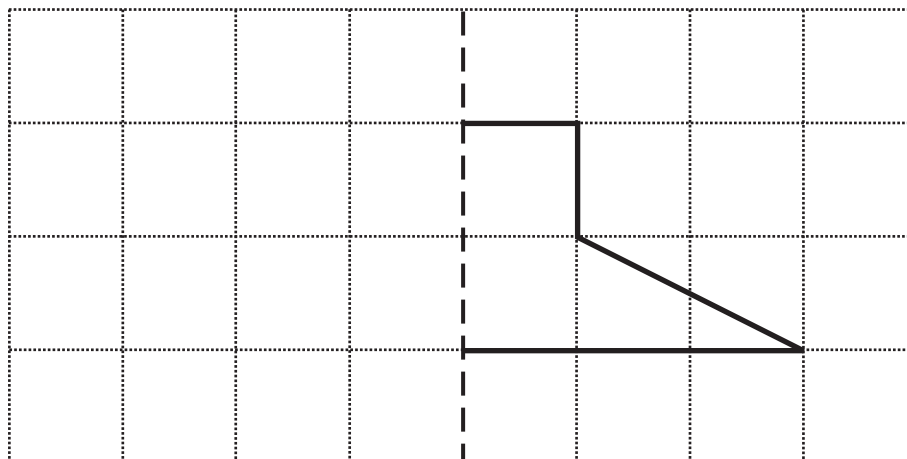
- 4 (a) Write down the fraction of each shape that has been shaded.
[3 marks]



- (b) Write $\frac{3}{4}$ as a decimal.
[1 mark]

(b) _____

- 5 Draw the reflection of this shape in the mirror line.
[2 marks]**



**mirror
line**

6 Here are the names of some solids.

Cylinder

Cone

Cuboid

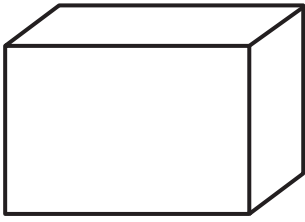
Cube

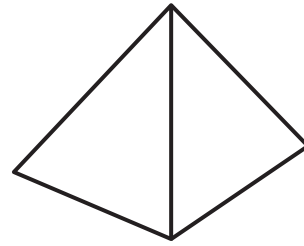
Sphere


Pyramid

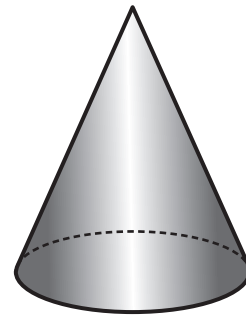
Triangular-based prism


Write the correct name under each solid.
[3 marks]







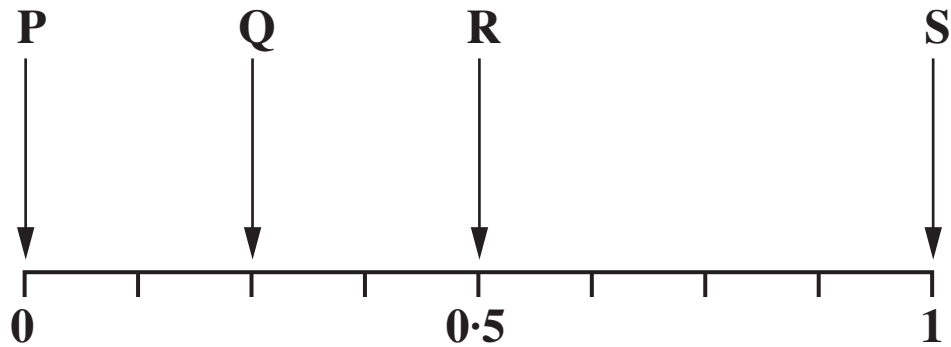




7 Pierre has 8 cartons of drink in his fridge.

- **2 orange**
- **1 lemon**
- **4 apple**
- **1 cherry**

He takes one of these drinks without looking.



Which arrow shows the probability that Pierre chooses

**(a) apple,
[1 mark]**

(a) _____

**(b) blackcurrant,
[1 mark]**

(b) _____

(c) orange?
[1 mark]

(c) _____

8 At 'Friendly Fisheries' a Fish Supper costs £3.80.

Claire has £20.

What is the greatest number of Fish Suppers she can buy?

[2 marks]

- 9 This table shows the temperatures in six cities one day in March.**

City	Temperature (°C)
Churchill	-7
Denver	8
Hong Kong	27
Murmansk	-4
Oslo	3
Yellowknife	-15

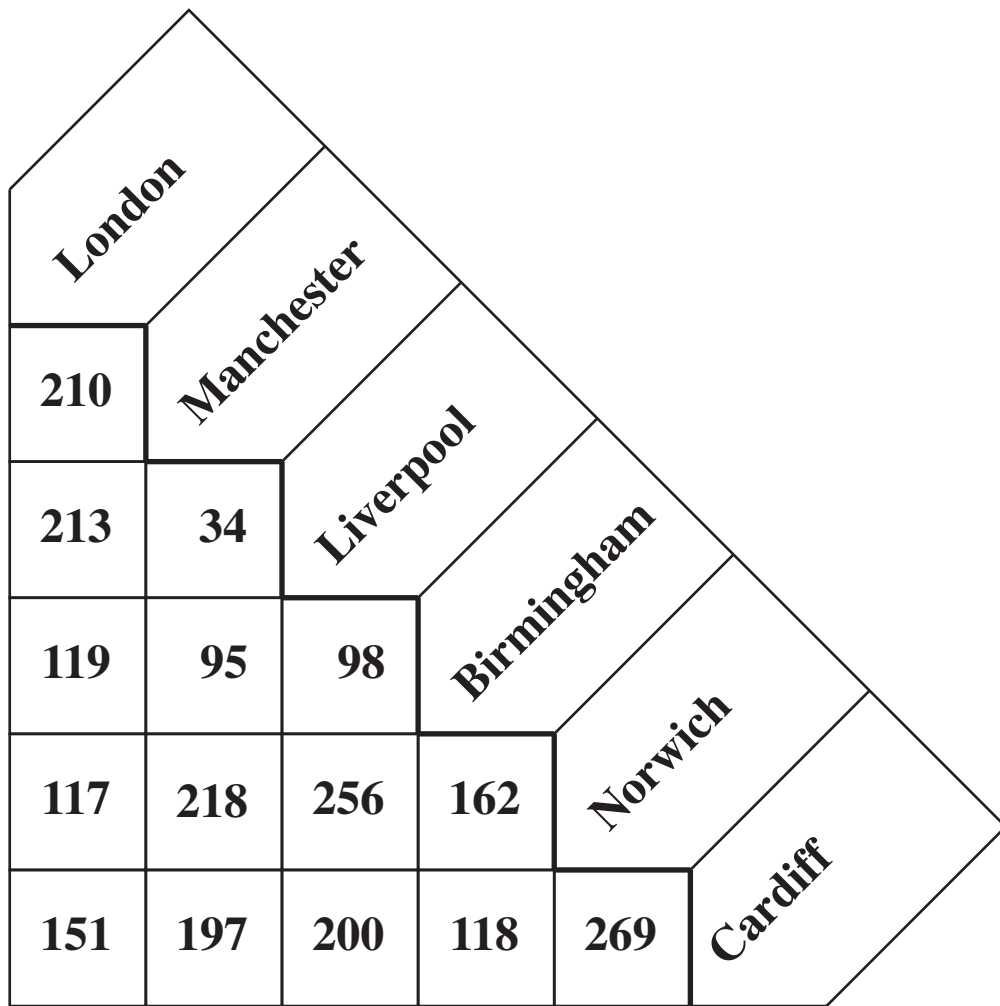
- (a) Which city was the coldest?
[1 mark]**

(a) _____

- (b) What was the difference in temperature between the warmest city and the coldest city?
Show your working.
[2 marks]**

(b) _____ °C

10 This chart shows the distances in miles between six cities in Great Britain.



**(a) How many miles is it between Manchester and Birmingham?
[1 mark]**

(a) _____

- (b) Andrew drives from London to Liverpool.
He then drives from Liverpool to Norwich.**

**How many miles does he drive altogether?
[2 marks]**

(b) _____

- (c) Julie drives from Cardiff to Birmingham.
She stops after driving 50% of the distance.**

**How many miles does she travel before she stops?
[2 marks]**

(c) _____

11 This word formula can be used to change between miles and kilometres.

$$\text{Distance in kilometres} = \text{Distance in miles} \times 1.6$$

Use the formula to change

**(a) 40 miles into kilometres,
[1 mark]**

(a) _____ km

**(b) 72 kilometres into miles.
[2 marks]**

(b) _____ miles

BLANK PAGE

BLANK PAGE



Copyright Information

OCR is committed to seeking permission to reproduce all third-party content that it uses in its assessment materials. OCR has attempted to identify and contact all copyright holders whose work is used in this paper. To avoid the issue of disclosure of answer-related information to candidates, all copyright acknowledgements are reproduced in the OCR Copyright Acknowledgements Booklet. This is produced for each series of examinations, is given to all schools that receive assessment material and is freely available to download from our public website (www.ocr.org.uk) after the live examination series.

If OCR has unwittingly failed to correctly acknowledge or clear any third-party content in this assessment material, OCR will be happy to correct its mistake at the earliest possible opportunity.

For queries or further information please contact the Copyright Team, First Floor, 9 Hills Road, Cambridge CB2 1GE.

OCR is part of the Cambridge Assessment Group; Cambridge Assessment is the brand name of University of Cambridge Local Examinations Syndicate (UCLES), which is itself a department of the University of Cambridge.