

GENERAL CERTIFICATE OF SECONDARY EDUCATION
MATHEMATICS C (GRADUATED ASSESSMENT)
MODULE M10 – SECTION A

B280A

Candidates answer on the Question Paper

OCR Supplied Materials:


None

Other Materials Required:

- Geometrical instruments
- Tracing paper (optional)

Monday 21 June 2010
Afternoon

Duration: 30 minutes



Candidate Forename		Candidate Surname	
--------------------	--	-------------------	--

Centre Number							Candidate Number				
---------------	--	--	--	--	--	--	------------------	--	--	--	--


INSTRUCTIONS TO CANDIDATES

- Write your name clearly in capital letters, your Centre Number and Candidate Number in the boxes above.
- Use black ink. Pencil may be used for graphs and diagrams only.
- Read each question carefully and make sure that you know what you have to do before starting your answer.
- Show your working. Marks may be given for a correct method even if the answer is incorrect.
- Answer **all** the questions.
- Do **not** write in the bar codes.
- Write your answer to each question in the space provided. Additional paper may be used if necessary but you must clearly show your Candidate Number, Centre Number and question number(s).

INFORMATION FOR CANDIDATES

- The number of marks is given in brackets [] at the end of each question or part question.
- The total number of marks for this Section is **25**.
- This document consists of **12** pages. Any blank pages are indicated.

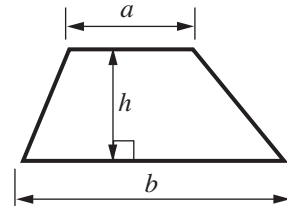
WARNING



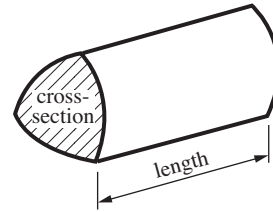
No calculator can be used for Section A of this paper

Formulae Sheet

Area of trapezium = $\frac{1}{2}(a + b)h$



Volume of prism = (area of cross-section) \times length

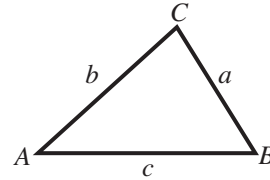


In any triangle ABC

Sine rule $\frac{a}{\sin A} = \frac{b}{\sin B} = \frac{c}{\sin C}$

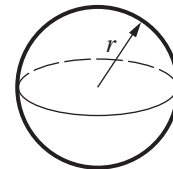
Cosine rule $a^2 = b^2 + c^2 - 2bc \cos A$

Area of triangle = $\frac{1}{2}ab \sin C$



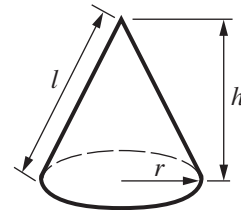
Volume of sphere = $\frac{4}{3}\pi r^3$

Surface area of sphere = $4\pi r^2$



Volume of cone = $\frac{1}{3}\pi r^2 h$

Curved surface area of cone = $\pi r l$



The Quadratic Equation

The solutions of $ax^2 + bx + c = 0$, where $a \neq 0$, are given by

$$x = \frac{-b \pm \sqrt{(b^2 - 4ac)}}{2a}$$

PLEASE DO NOT WRITE ON THIS PAGE

1 (a) Write $0.\dot{7}\dot{3}$ as a fraction.

(a) [2]

(b) Work out.

$$36^{-\frac{1}{2}}$$

(b) [2]

(c) Expand.

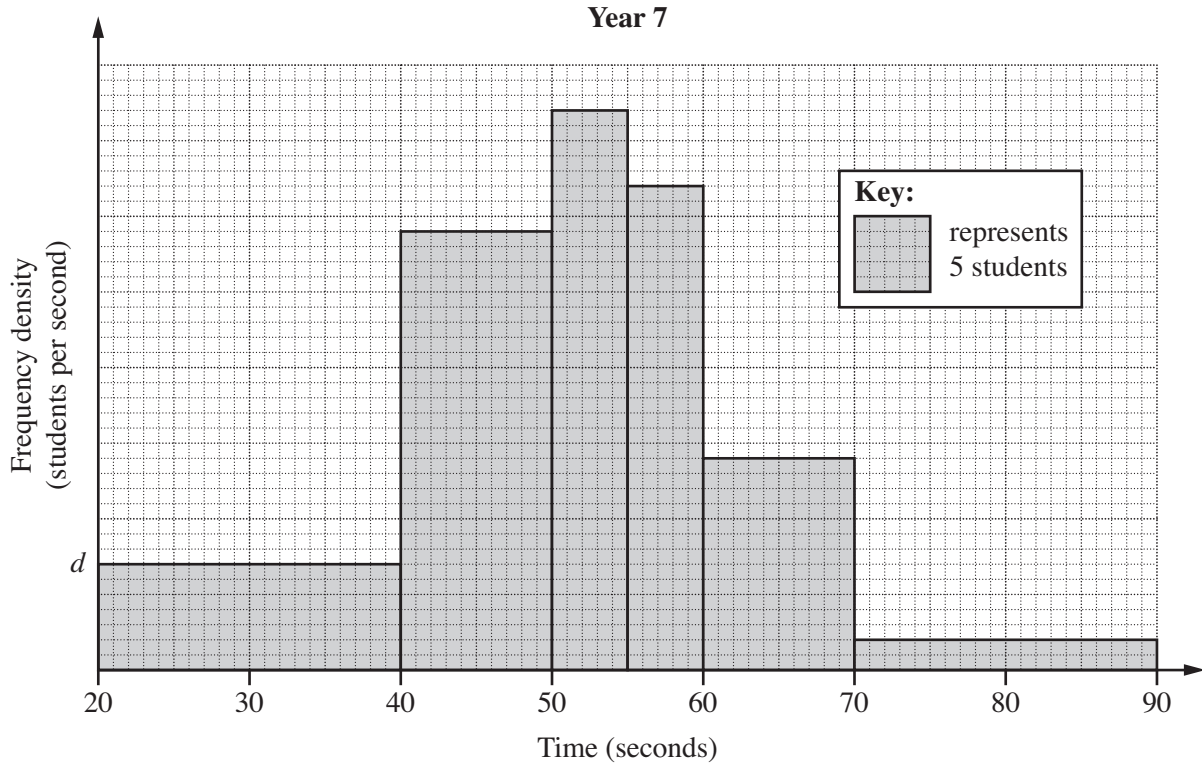
$$(\sqrt{5} - 2)^2$$

Write your answer in the form $a - b\sqrt{5}$ where a and b are integers.

(c) [2]

2 Students in Year 7 and Year 11 took part in a test to estimate fifty seconds.

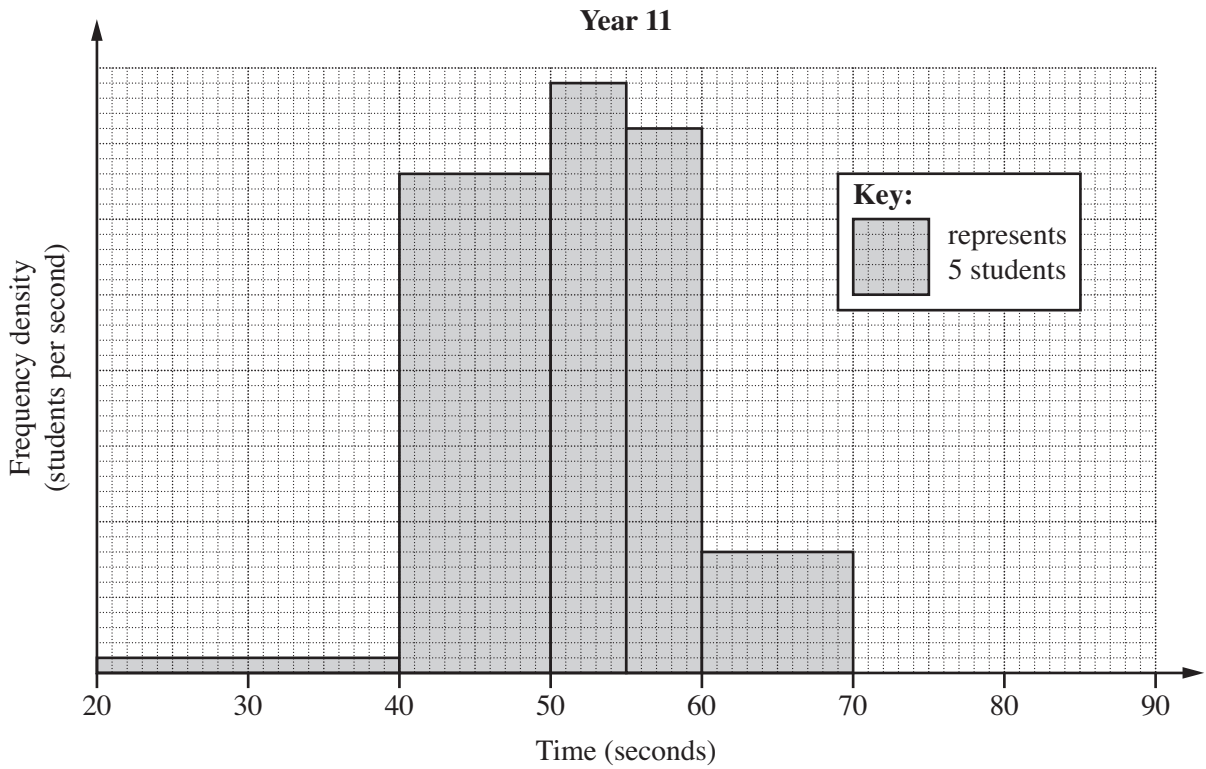
(a) This histogram shows the distribution of the estimates for Year 7.



Using the key, work out the frequency density, d , of the first group.

(a) students per second [1]

(b) This histogram shows the distribution of the estimates for Year 11.



Which year group were better at estimating fifty seconds?
Justify your answer with reference to the two distributions.

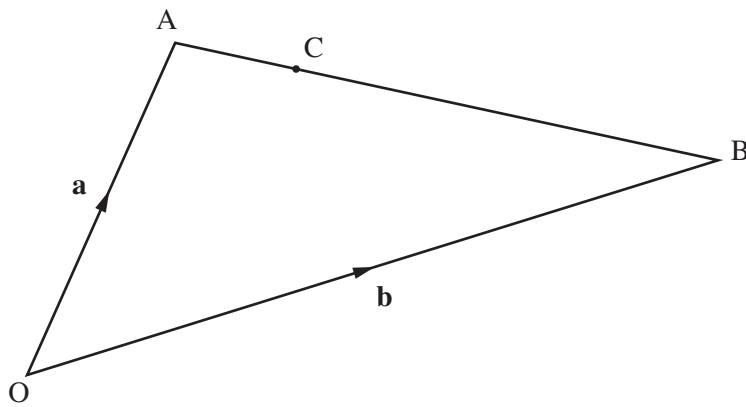
Year = because

..... [1]

3 OAB is a triangle.

C is the point on AB such that $AC = \frac{1}{4}AB$.

$\vec{OA} = \mathbf{a}$ and $\vec{OB} = \mathbf{b}$.



Not to scale

Find, in terms of \mathbf{a} and \mathbf{b} ,

(a) \vec{AB} ,

(a) [1]

(b) \vec{AC} ,

(b) [1]

(c) \vec{OC} .

(c) [2]

4 (a) By completing the square, express $x^2 - 8x + 10$ in the form $(x - a)^2 - b$.

(a) [3]

(b) Hence state the minimum value of $x^2 - 8x + 10$.

(b) [1]

5 Solve, algebraically, these simultaneous equations.

$$\begin{aligned}y &= 4 + x - x^2 \\ 3x + y &= 7\end{aligned}$$

$$x = \dots\dots\dots y = \dots\dots\dots$$

$$x = \dots\dots\dots y = \dots\dots\dots[5]$$

- 6 A bag contains 6 red counters, 3 yellow counters and 1 blue counter. Sandra picks two counters at random from the bag. Neither counter is replaced in the bag.

Calculate the probability that both counters are the same colour.

..... [4]

PLEASE DO NOT WRITE ON THIS PAGE

PLEASE DO NOT WRITE ON THIS PAGE

PLEASE DO NOT WRITE ON THIS PAGE



Copyright Information

OCR is committed to seeking permission to reproduce all third-party content that it uses in its assessment materials. OCR has attempted to identify and contact all copyright holders whose work is used in this paper. To avoid the issue of disclosure of answer-related information to candidates, all copyright acknowledgements are reproduced in the OCR Copyright Acknowledgements Booklet. This is produced for each series of examinations, is given to all schools that receive assessment material and is freely available to download from our public website (www.ocr.org.uk) after the live examination series.

If OCR has unwittingly failed to correctly acknowledge or clear any third-party content in this assessment material, OCR will be happy to correct its mistake at the earliest possible opportunity.

For queries or further information please contact the Copyright Team, First Floor, 9 Hills Road, Cambridge CB2 1GE.

OCR is part of the Cambridge Assessment Group; Cambridge Assessment is the brand name of University of Cambridge Local Examinations Syndicate (UCLES), which is itself a department of the University of Cambridge.