

GENERAL CERTIFICATE OF SECONDARY EDUCATION
MATHEMATICS C (GRADUATED ASSESSMENT)
MODULE M8 (SECTION A)

B278A

Candidates answer on the Question Paper

OCR Supplied Materials:
None

Other Materials Required:

- Geometrical instruments
- Tracing paper (optional)

Monday 21 June 2010
Afternoon

Duration: 30 minutes



Candidate Forename		Candidate Surname	
--------------------	--	-------------------	--

Centre Number						Candidate Number				
---------------	--	--	--	--	--	------------------	--	--	--	--


INSTRUCTIONS TO CANDIDATES

- Write your name clearly in capital letters, your Centre Number and Candidate Number in the boxes above.
- Use black ink. Pencil may be used for graphs and diagrams only.
- Read each question carefully and make sure that you know what you have to do before starting your answer.
- Show your working. Marks may be given for a correct method even if the answer is incorrect.
- Answer **all** the questions.
- Do **not** write in the bar codes.
- Write your answer to each question in the space provided. Additional paper may be used if necessary but you must clearly show your Candidate Number, Centre Number and question number(s).

INFORMATION FOR CANDIDATES

- The number of marks is given in brackets [] at the end of each question or part question.
- The total number of marks for this Section is **25**.
- This document consists of **8** pages. Any blank pages are indicated.

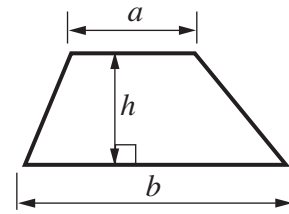
WARNING



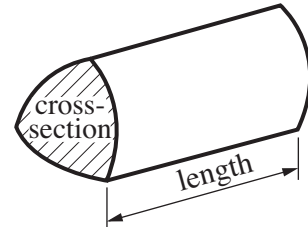
No calculator can be used for Section A of this paper

Formulae Sheet

Area of trapezium = $\frac{1}{2}(a + b)h$



Volume of prism = (area of cross-section) \times length

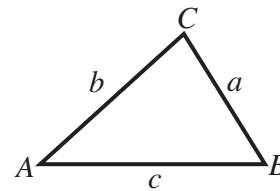


In any triangle ABC

Sine rule $\frac{a}{\sin A} = \frac{b}{\sin B} = \frac{c}{\sin C}$

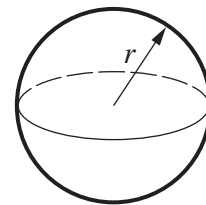
Cosine rule $a^2 = b^2 + c^2 - 2bc \cos A$

Area of triangle = $\frac{1}{2}ab \sin C$



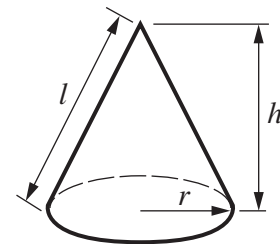
Volume of sphere = $\frac{4}{3}\pi r^3$

Surface area of sphere = $4\pi r^2$



Volume of cone = $\frac{1}{3}\pi r^2 h$

Curved surface area of cone = $\pi r l$



The Quadratic Equation

The solutions of $ax^2 + bx + c = 0$, where $a \neq 0$, are given by

$$x = \frac{-b \pm \sqrt{b^2 - 4ac}}{2a}$$

PLEASE DO NOT WRITE ON THIS PAGE

- 1 Work out the following.
Give your answers as mixed numbers in their simplest terms.

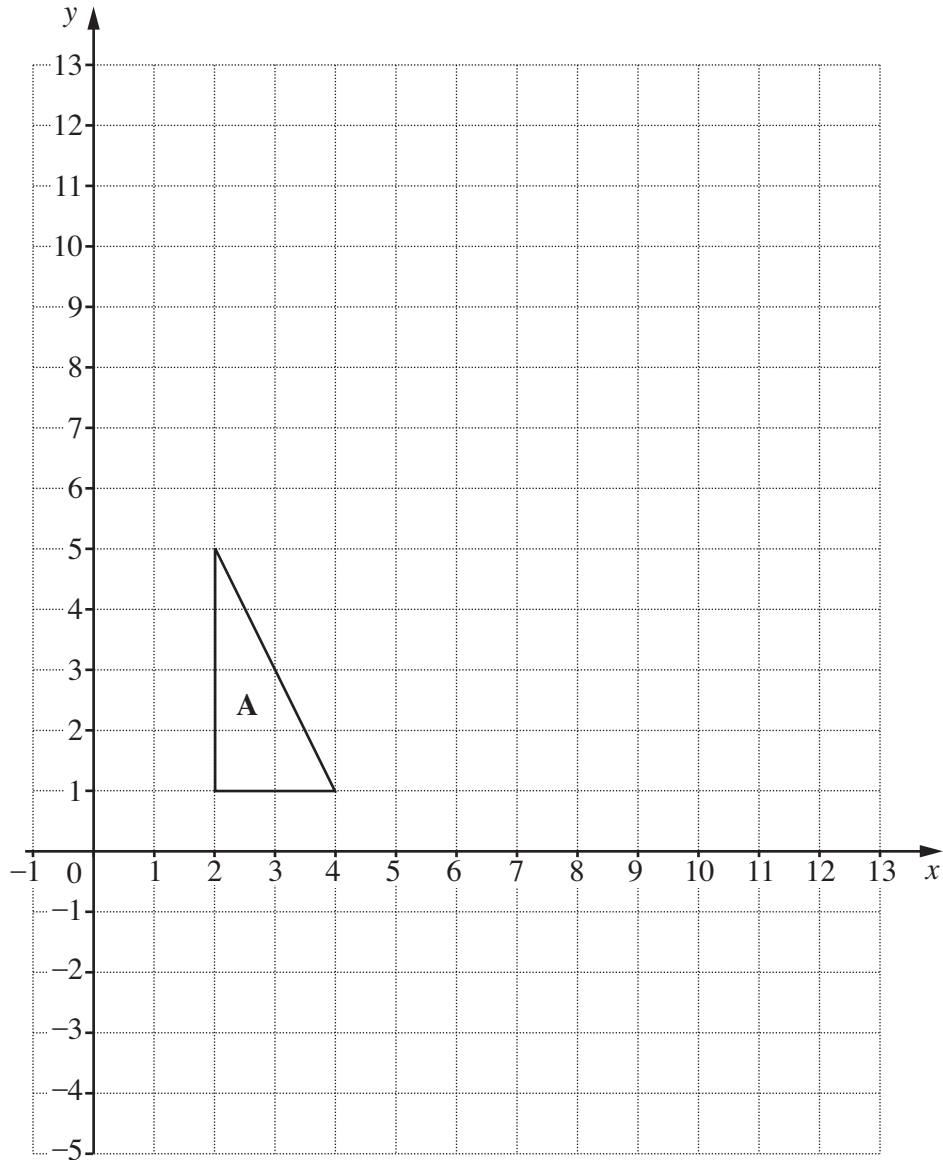
(a) $2\frac{1}{3} + \frac{5}{6}$

(a) [2]

(b) $1\frac{1}{4} \times 5\frac{1}{3}$

(b) [3]

2



- (a) Enlarge triangle **A** with centre $(0, 3)$ and scale factor $2\frac{1}{2}$.
Label the image **B**. [3]

- (b) Complete the following statement.

The single transformation that maps triangle **B** onto triangle **A** is an enlargement with centre (..... ,) and scale factor

[2]

3 (a) Express 0.0042 in standard form.

(a) [1]

(b) Calculate $(8.4 \times 10^4) + (6 \times 10^3)$.
Give your answer in standard form.

(b) [2]

4 (a) Solve.

(i) $3x + 1 = 2(4x - 3)$

(a)(i) [3]

(ii) $3x - 7 > x$

(ii) [2]

(b) Factorise.

$x^2 - 5x + 4$

(b) [2]

5 Here are the equations of five straight lines.

A $y = 3x - 1$

B $y = -2x + 4$

C $y = 2x - 2$

D $y = 3x + 4$

E $y = 4x + 3$

(a) Which of these lines passes through $(0, -2)$?

(a) [1]

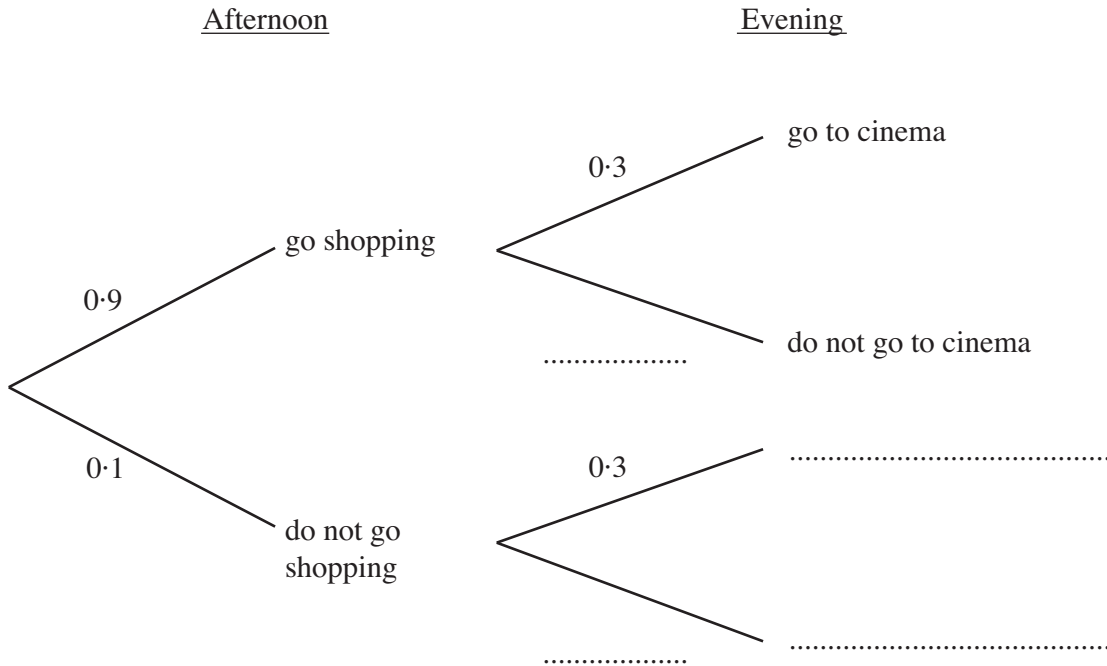
(b) Which two of these lines are parallel?

(b) and [1]

TURN OVER FOR QUESTION 6

- 6 Jane and her friends spend each Saturday afternoon and evening together. The probability that they go shopping in the afternoon is 0.9. The probability that they go to the cinema in the evening is 0.3. These events are independent.

(a) Complete the tree diagram to represent this information.



[1]

- (b) Calculate the probability that, on a Saturday, they do not go shopping and do not go to the cinema.

(b) [2]



Copyright Information

OCR is committed to seeking permission to reproduce all third-party content that it uses in its assessment materials. OCR has attempted to identify and contact all copyright holders whose work is used in this paper. To avoid the issue of disclosure of answer-related information to candidates, all copyright acknowledgements are reproduced in the OCR Copyright Acknowledgements Booklet. This is produced for each series of examinations, is given to all schools that receive assessment material and is freely available to download from our public website (www.ocr.org.uk) after the live examination series.

If OCR has unwittingly failed to correctly acknowledge or clear any third-party content in this assessment material, OCR will be happy to correct its mistake at the earliest possible opportunity.

For queries or further information please contact the Copyright Team, First Floor, 9 Hills Road, Cambridge CB2 1GE.

OCR is part of the Cambridge Assessment Group; Cambridge Assessment is the brand name of University of Cambridge Local Examinations Syndicate (UCLES), which is itself a department of the University of Cambridge.