

Candidate Forename		Candidate Surname	
--------------------	--	-------------------	--

Centre Number						Candidate Number				
---------------	--	--	--	--	--	------------------	--	--	--	--

**OXFORD CAMBRIDGE AND RSA EXAMINATIONS
GENERAL CERTIFICATE OF SECONDARY EDUCATION**

B272B

**MATHEMATICS C
(GRADUATED ASSESSMENT)**

MODULE M2 – SECTION B

THURSDAY 21 JANUARY 2010: Afternoon

DURATION: 30 minutes

SUITABLE FOR VISUALLY IMPAIRED CANDIDATES

Candidates answer on the Question Paper

OCR SUPPLIED MATERIALS:

None

OTHER MATERIALS REQUIRED:

Geometrical instruments

Tracing paper (optional)

Electronic calculator

READ INSTRUCTIONS OVERLEAF

INSTRUCTIONS TO CANDIDATES

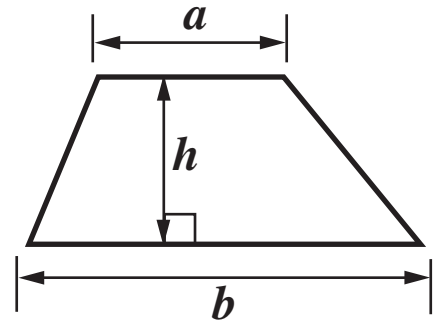
- **Write your name clearly in capital letters, your Centre Number and Candidate Number in the boxes on the first page.**
- **Use black ink. Pencil may be used for graphs and diagrams only.**
- **Read each question carefully and make sure that you know what you have to do before starting your answer.**
- **Show your working. Marks may be given for a correct method even if the answer is incorrect.**
- **Answer ALL the questions.**
- **Write your answer to each question in the space provided, however additional paper may be used if necessary.**

INFORMATION FOR CANDIDATES

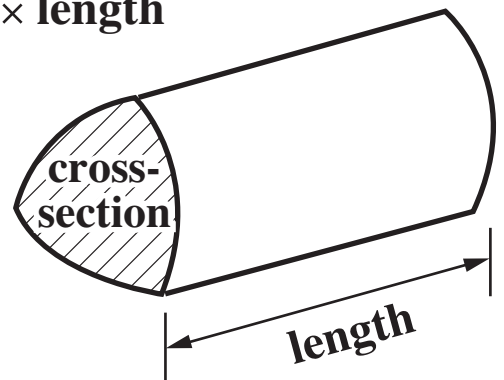
- **The number of marks is given in brackets [] at the end of each question or part question.**
- **Section B starts with question 8.**
- **You are expected to use a calculator in Section B of this paper.**
- **The total number of marks for this Section is 25.**

Formulae Sheet

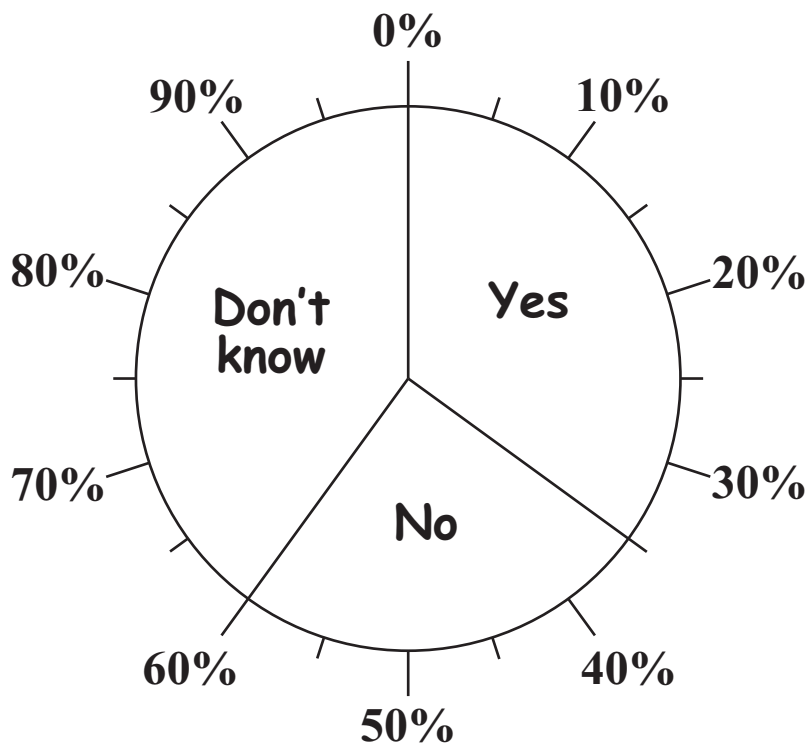
Area of trapezium = $\frac{1}{2} (a + b)h$



Volume of prism = (area of cross-section) \times length



- 8 Students at a college were asked whether they wanted a new sports hall.
This pie chart shows the results.



- (a) What percentage answered **Yes**?
[1 mark]

(a) _____ %

- (b) What percentage answered **Don't know**?
[1 mark]

(b) _____ %

9 Here is a method to convert pounds (£) into euros (€).

- **Multiply the number of pounds by 5**
- **Divide the result by 4**
- **The answer is the number of euros**

**(a) Use this method to convert £20 into euros.
[2 marks]**

(a) € _____

**(b) Joe has €180.
Here are some amounts in pounds.**

£90

£140

£180

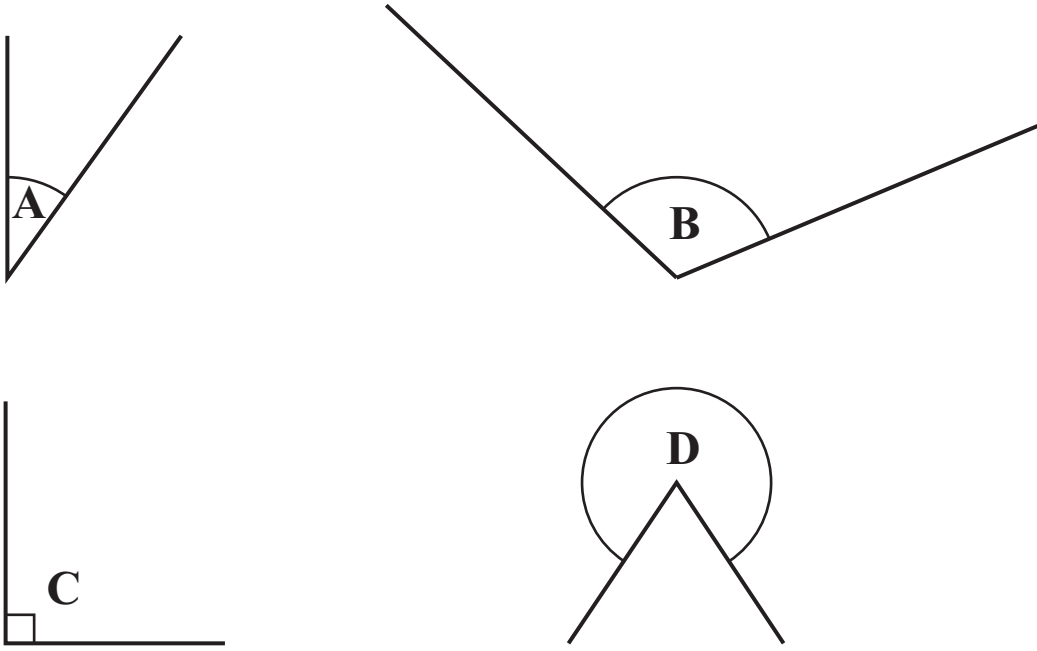
£220

Ring the amount which is closest to €180.

**YOU MUST SHOW HOW YOU WORKED OUT
YOUR ANSWER.**

[2 marks]

10 Here are four angles.



**(a) Which angle is obtuse?
[1 mark]**

(a) _____

**(b) What type of angle is angle A?
[1 mark]**

(b) _____


**(c) Measure angle B.
[1 mark]**


(c) _____ °

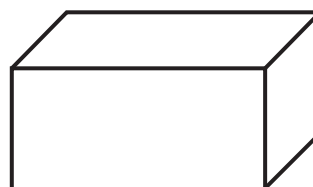
11 (a) Here is a list of solids.

Pyramid Cylinder Cone Cube Sphere Cuboid

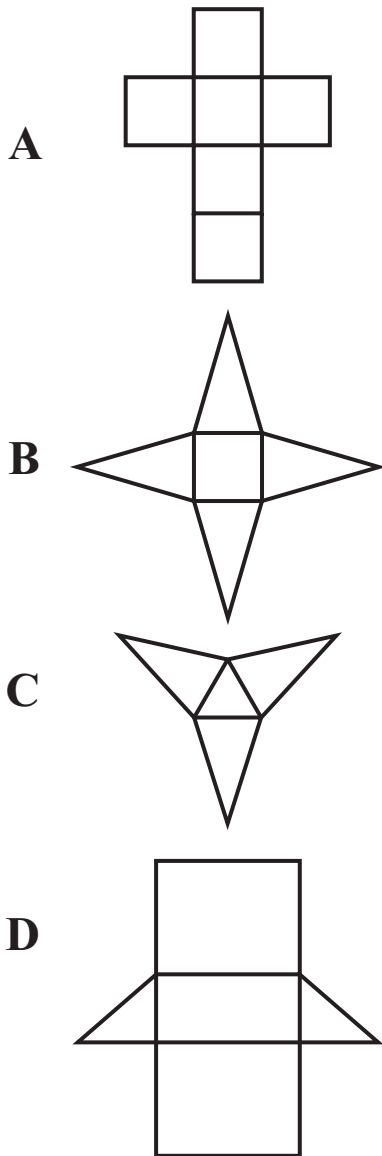
**Use the list to name each of these solids.
Write the correct name below each solid.
[3 marks]**







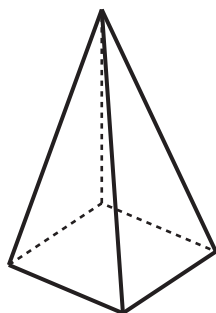
(b) Here are some nets of solids.

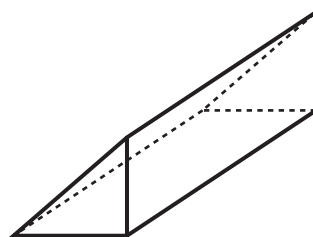


Match each of these solids to its net.

Write the correct letter under each of the two solids below.

[2 marks]





12 (a) Belinda is asked to find the median of these numbers.

40	30	10	20	10	40	40	20	30
-----------	-----------	-----------	-----------	-----------	-----------	-----------	-----------	-----------

Belinda says:

**I look at the list.
The middle number is 10.
So the median is 10.**

**Explain what is wrong with her method.
[1 mark]**

**(b) Write down the mode of these numbers.
[1 mark]**

(b) _____

13 (a) A shop sells potatoes in 3·5 kilogram bags.

**How many grams are there in 3·5 kilograms?
[1 mark]**


(a) _____ g

(b) The shop sells the bags of potatoes for £4·75.

**How many bags of potatoes can be bought for £32?
[2 marks]**

(b) _____

14 A bag contains these ten numbered counters.

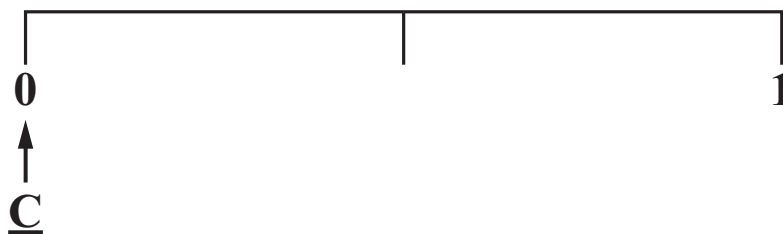


Ted takes a counter from the bag without looking.

(a) On the probability line draw:

- arrow A to show the probability that Ted takes a 2
- arrow B to show the probability that Ted takes a number less than 3.

[2 marks]

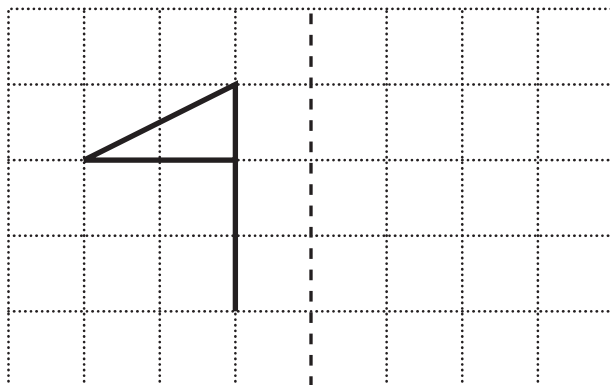


(b) Complete this sentence.

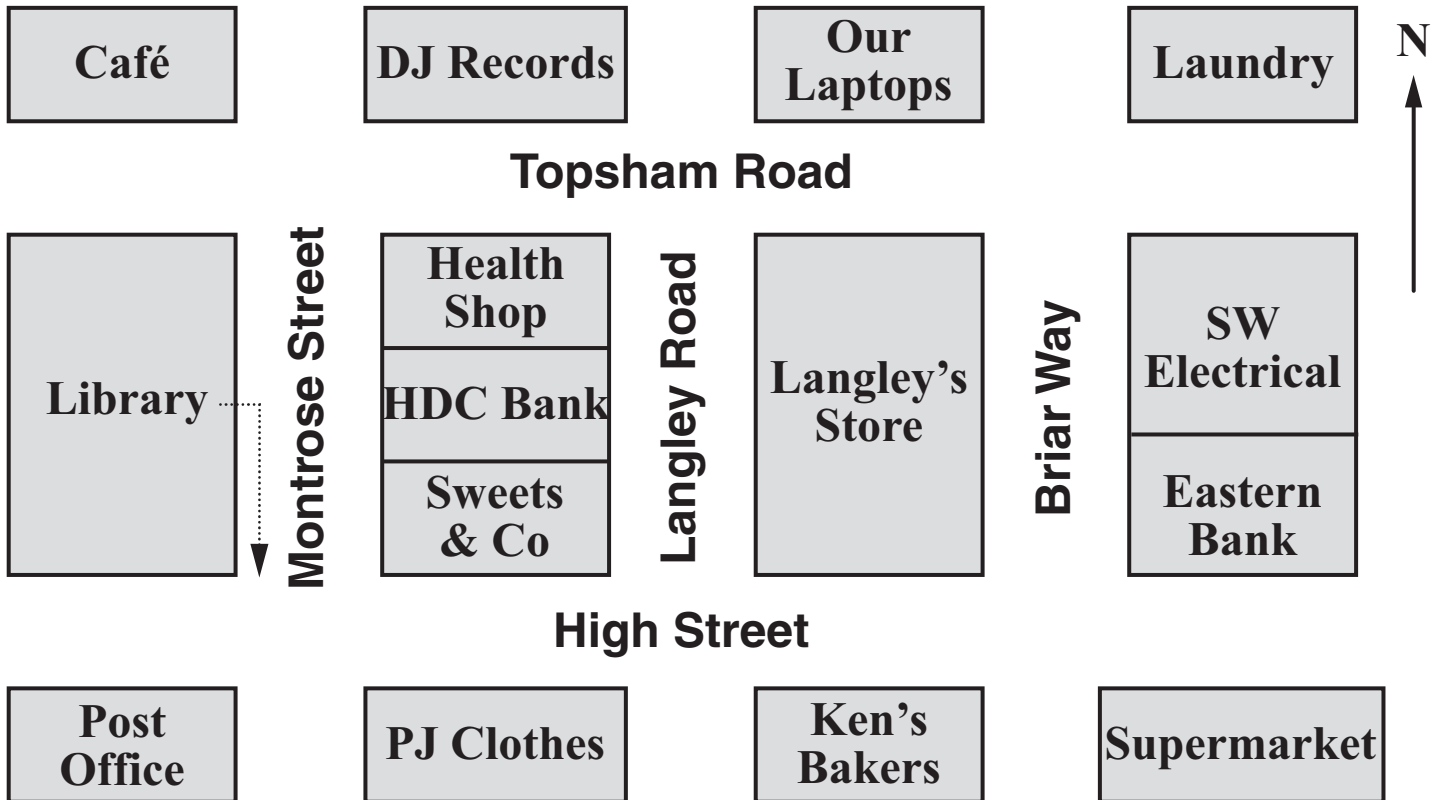
[1 mark]

Arrow C shows the probability that Ted takes _____

- 15 Complete the diagram so that the dashed line is a line of reflection symmetry.**
[1 mark]



16 Here is a diagram of Alberton Shopping Centre.



- (a) Harry leaves the library and turns right into Montrose Street.
 He turns into the first street on his left.
 He goes into the second shop on his right.
 His route has been started on the diagram with a dotted line.

Complete Harry's route on the diagram.
 [1 mark]

- (b) Betty leaves the Supermarket and walks West along High Street.
 She turns North into Langley Road.
 She then turns East into Topsham Road.

Which shop is on her left?
 [1 mark]

BLANK PAGE

BLANK PAGE



Copyright Information

OCR is committed to seeking permission to reproduce all third-party content that it uses in its assessment materials. OCR has attempted to identify and contact all copyright holders whose work is used in this paper. To avoid the issue of disclosure of answer-related information to candidates, all copyright acknowledgements are reproduced in the OCR Copyright Acknowledgements Booklet. This is produced for each series of examinations, is given to all schools that receive assessment material and is freely available to download from our public website (www.ocr.org.uk) after the live examination series.

If OCR has unwittingly failed to correctly acknowledge or clear any third-party content in this assessment material, OCR will be happy to correct its mistake at the earliest possible opportunity.

For queries or further information please contact the Copyright Team, First Floor, 9 Hills Road, Cambridge CB2 1GE.

OCR is part of the Cambridge Assessment Group; Cambridge Assessment is the brand name of University of Cambridge Local Examinations Syndicate (UCLES), which is itself a department of the University of Cambridge.